

OCR

Oxford Cambridge and RSA

H

Wednesday 15 June 2016 – Afternoon

**GCSE GATEWAY SCIENCE
ADDITIONAL SCIENCE B****B721/02** Additional Science modules B3, C3, P3 (Higher Tier)Candidates answer on the Question Paper.
A calculator may be used for this paper.**OCR supplied materials:**

None

Other materials required:

- Pencil
- Ruler (cm/mm)

Duration: 1 hour 15 minutes

Candidate forename		Candidate surname	
-----------------------	--	----------------------	--

Centre number						Candidate number				
---------------	--	--	--	--	--	------------------	--	--	--	--

INSTRUCTIONS TO CANDIDATES

- Write your name, centre number and candidate number in the boxes above. Please write clearly and in capital letters.
- Use black ink. HB pencil may be used for graphs and diagrams only.
- Answer **all** the questions.
- Read each question carefully. Make sure you know what you have to do before starting your answer.
- Write your answer to each question in the space provided. If additional space is required, you should use the lined page(s) at the end of this booklet. The question number(s) must be clearly shown.
- Do **not** write in the bar codes.

INFORMATION FOR CANDIDATES

- The quality of written communication is assessed in questions marked with a pencil (✎).
- A list of equations can be found on page 2.
- The Periodic Table can be found on the back page.
- The number of marks is given in brackets [] at the end of each question or part question.
- The total number of marks for this paper is **75**.
- This document consists of **28** pages. Any blank pages are indicated.

2

EQUATIONS

energy = mass × specific heat capacity × temperature change

energy = mass × specific latent heat

efficiency = $\frac{\text{useful energy output (} \times 100\% \text{)}}{\text{total energy input}}$

wave speed = frequency × wavelength

power = voltage × current

energy supplied = power × time

average speed = $\frac{\text{distance}}{\text{time}}$

distance = average speed × time

$$s = \frac{(u + v)}{2} \times t$$

acceleration = $\frac{\text{change in speed}}{\text{time taken}}$

force = mass × acceleration

weight = mass × gravitational field strength

work done = force × distance

power = $\frac{\text{work done}}{\text{time}}$

power = force × speed

$$\text{KE} = \frac{1}{2}mv^2$$

momentum = mass × velocity

force = $\frac{\text{change in momentum}}{\text{time}}$

GPE = mgh

$$mgh = \frac{1}{2}mv^2$$

resistance = $\frac{\text{voltage}}{\text{current}}$

3

BLANK PAGE

Question 1 begins on page 4

PLEASE DO NOT WRITE ON THIS PAGE

4

Answer **all** the questions.**SECTION A – Module B3**

- 1 (a) Mike competes in the triathlon.

This event involves swimming, cycling and running.

He records his heart rate in beats per minute (bpm) during each stage of the triathlon.

Look at his results in the table.

	Heart rate in bpm
Swimming	163
Cycling	165
Running	160

The maximum heart rate is the highest heart rate that is achievable during exercise.

One method to calculate a predicted maximum heart rate uses this formula:

$$\text{predicted maximum heart rate} = 220 - \text{age}$$

- (i) Mike is 29 years old.

Calculate his heart rate during **cycling** as a percentage of his predicted maximum heart rate.

.....%

[2]

5

- (ii) Mike will gain the most benefit from his training if his heart rate stays within a certain range.

This range is called the target heart rate zone and is between 60% and 85% of his maximum heart rate.

Heart rates above the target heart rate zone mean that anaerobic respiration will be used.

Will Mike gain maximum benefit from his cycling training?

Explain your answer using ideas about respiration.

.....
.....
.....
..... [2]

- (b) Blood doping is a way of cheating in sport.

The drug EPO increases the amount of haemoglobin in the blood.

Explain why taking EPO gives athletes an unfair advantage.

.....
.....
.....
..... [2]

[Total: 6]

7

(b) (i) Write down the name of the type of cell division that makes dog sperm cells.

..... [1]

(ii) Put a **ring** around the word that describes dog skin cells.

acrosome

diploid

fertilised

gamete

zygote

[1]

[Total: 8]

Question 3 begins on page 8

8

3 (a) This question is about enzymes.

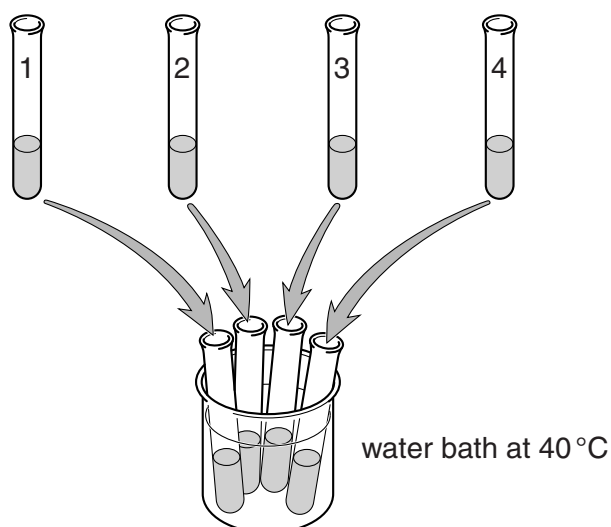
Pepsin is an enzyme that breaks down protein.

Egg-white is a protein that makes water cloudy.

Look at the table below.

It shows an investigation into the effect of adding the enzyme pepsin to egg-white.

Tube 1	Tube 2	Tube 3	Tube 4
5 cm ³ egg-white	5 cm ³ egg-white	5 cm ³ egg-white	5 cm ³ egg-white
3 drops distilled water	3 drops hydrochloric acid	3 drops hydrochloric acid	3 drops hydrochloric acid
1 cm ³ pepsin	1 cm ³ distilled water	1 cm ³ pepsin	1 cm ³ of boiled pepsin



The tubes were put in a water bath at 40 °C for 5 minutes.

Look at the results below.

Tube	Contents	Observations of tube contents	
		At start	At end
1	egg-white, water and pepsin	cloudy	almost clear
2	egg-white, hydrochloric acid and water	cloudy	cloudy
3	egg-white, hydrochloric acid and pepsin	cloudy	clear
4	egg-white, hydrochloric acid and boiled pepsin	cloudy	cloudy

9

- (i) Write a conclusion explaining what the results show about the conditions pepsin needs to work.

.....

.....

.....

..... [2]

- (ii) How does the 'lock and key' mechanism explain why pepsin will **only** break down protein and **not** other food groups like starch?

You may draw a diagram to help your answer.

.....

.....

..... [2]

10

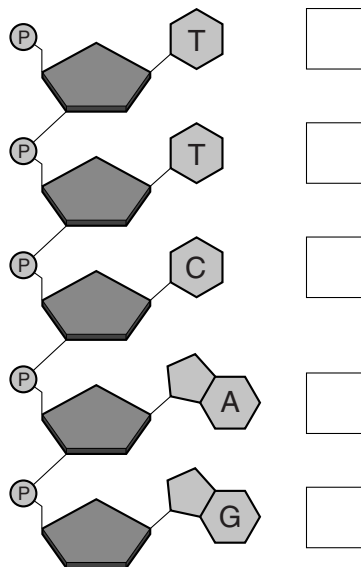
(b) DNA is important in the production of different enzymes.

There are four bases in DNA.

The bases are A, C, G and T.

The diagram below shows one strand of DNA.

Write down in each box, the letter of the base that would be found on the complementary strand of DNA.



[2]

(c) The table below shows the order of bases on DNA that code for different amino acids.

Base order	Amino acid	Base order	Amino acid	Base order	Amino acid	Base order	Amino acid
AAA	Phenylalanine	AGA	Serine	ATA	Tyrosine	ACA	Cysteine
AAG		AGG		ATG		ACG	
AAT	Leucine	AGT	Proline		Histidine		Arginine
AAC		AGC		GTA		GCA	
GAA		GGA		GTG		GCG	
GAG		GGG		GTT		GCT	
GAT		GGT		GTC		GCC	
GAC		GGC					
TAA	Isoleucine	TGA	Threonine	TTA	Asparagine	TCA	Serine
TAG		TGG		TTG		TCG	
TAT		TGT		TTT	Lysine	TCT	Arginine
TAC	Methionine	TGC	TTC	TCC			
CAA	Valine	CGA	Alanine	CTA	Aspartic acid	CCA	Glycine
CAG		CGG		CTG		CCG	
CAT		CGT		CTT	Glutamic acid	CCT	
CAC		CGC		CTC		CCC	

This is part of the DNA base sequence that codes for the enzyme pepsin.

TAACCACTG

(i) Write down the order of amino acids that are coded for by this section of DNA.

..... [2]

(ii) Explain why the order of amino acids is important for the correct function of pepsin.

.....
.....
.....
..... [2]

(iii) A gene mutation causes a change in the DNA.

TATCCACTG

What effect will this have on the function of pepsin?

Explain your answer.

.....
..... [1]


[Total: 11]

SECTION B – Module C3

- 4 Pete and Helen investigate the reaction between sodium carbonate, Na_2CO_3 , and ethanoic acid, $\text{C}_2\text{H}_4\text{O}_2$.

Sodium ethanoate, $\text{C}_2\text{H}_3\text{O}_2\text{Na}$, carbon dioxide and water are made.

- (a) Complete the **balanced symbol** equation for this reaction.



[2]

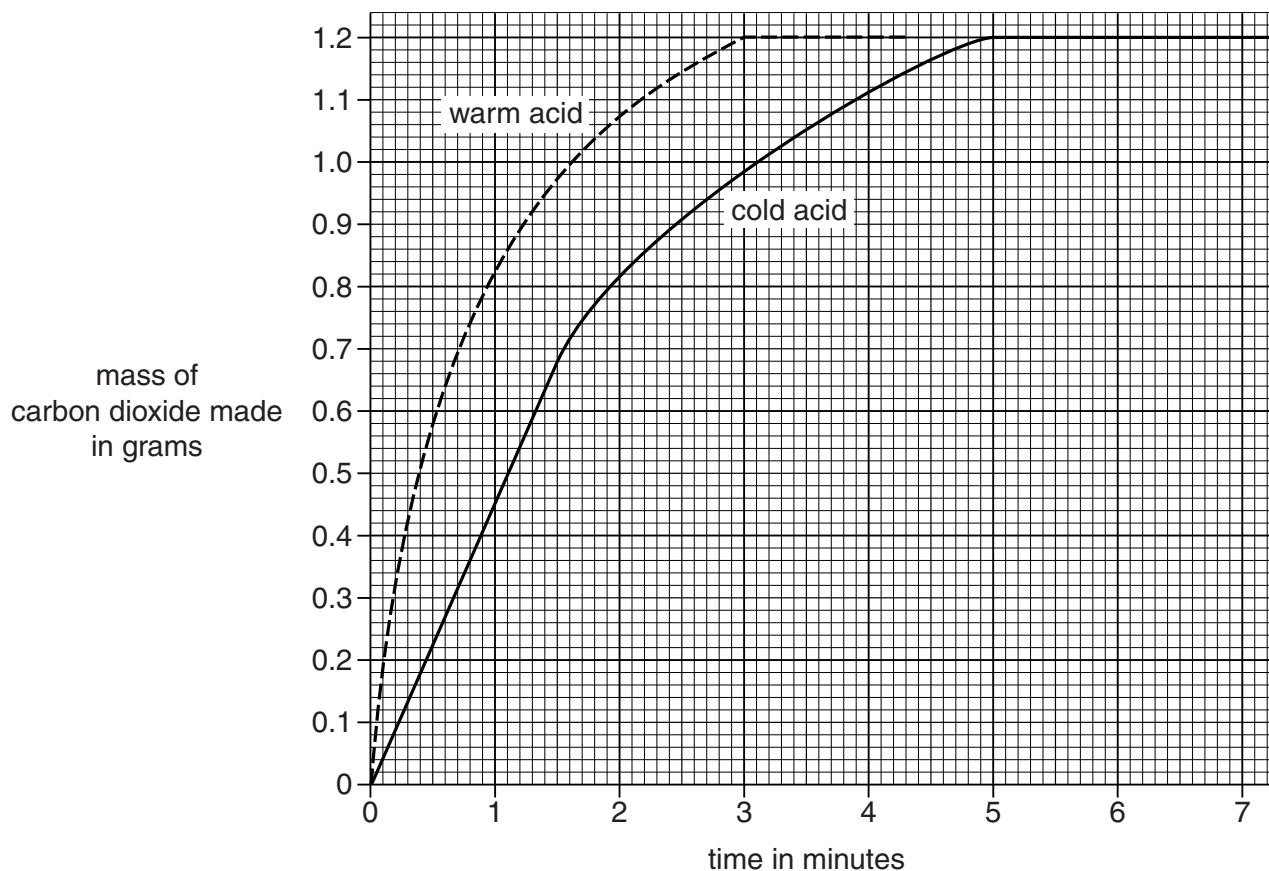
- (b) Pete and Helen measure the mass of carbon dioxide made every 30 seconds during the reaction.

They do the experiment again.

They use the same amount of acid and sodium carbonate.

This time they use **warm** ethanoic acid instead of cold ethanoic acid.

Look at the graph below. It shows their results.



13

Look at the graph for the **warm** acid.

How long does it take for the reaction to finish?

answer minutes [1]

(c) (i) Look at the graph for the **cold** acid.

Calculate the rate of this reaction during the first 1.5 minutes of the experiment.

Give your answer to **2 significant figures**.

.....
.....

answer g/min [2]

(ii) The rate of reaction during the first 1.5 minutes is **greater** than at 4 minutes.

How can you tell this from the graph?

.....
..... [1]

(d) The reaction with **cold** ethanoic acid is **slower** than the reaction with warm ethanoic acid.

Explain, in terms of the reacting particle model, why this reaction is slower with cold acid.

.....
.....
.....
..... [3]

(e) Complete the sentence.

The ethanoic acid is all used up at the end of the reaction because it is the

..... reactant. [1]

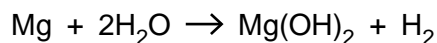
[Total: 10]

- 5 Soldiers use 'flameless heaters' to heat their meals.



The 'flameless heater' heats the food safely and quickly without using a flame.

The heater uses a chemical reaction between magnesium metal and water.



- (a) Use the balanced symbol equation to show that **mass is conserved** during this reaction.

The relative atomic mass, A_r , of H = 1, Mg = 24 and O = 16.

.....

.....

..... [1]

- (b) The reaction between magnesium and water is an **exothermic** reaction.

Explain why, using ideas about bond breaking and bond making.

.....

.....

.....

..... [3]

15

(c) Soldiers need the 'flameless heaters' to heat 227 g of food by 56 °C in less than 12 minutes.

A scientist investigates 'flameless heaters'.

Look at her results below.

Heater	Mass of food heated in g	Temperature rise of food in °C	Time taken in minutes
A	200	40	8
B	227	45	10
C	227	24	6
D	227	30	5

Which heater will heat 227 g of food by 56 °C in less than 12 minutes?

.....

Explain your answer.

.....

.....

..... [2]

[Total: 6]

6 Pensby pharmaceuticals are making a new painkiller.



They make the drug using a **batch** process rather than a continuous process.

(a) Explain why batch processes are used for making pharmaceutical drugs.

.....
..... [1]

(b) It is often expensive to make and develop new drugs.

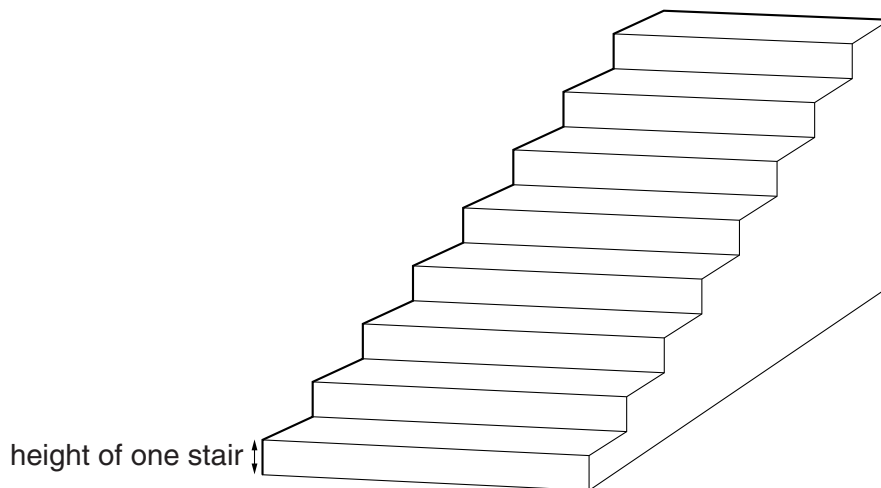
Explain **two** reasons why.

.....
.....
.....
..... [2]

SECTION C – Module P3

7 This question is about work and power.

(a) Janna walks upstairs.



The height of one stair is 0.15 m.

Janna walks up **four** stairs. She has a mass of 50 kg.

Assume that the gravitational field strength (g) is 10 N/kg.

(i) Calculate the **work** done by Janna using this data.

.....

.....

.....

.....

answer J

[3]

(ii) Janna thinks she does **more** work than the value calculated using the data above.

Suggest a reason why.

.....

..... [1]

19

(b) Janna walks up to the top of the eight stairs every day.

She walks at different speeds each day.

Look at the information below.

Day	Number of stairs	Power developed in watts
Monday	8	107
Tuesday	8	104
Wednesday	8	108
Thursday	8	112
Friday	8	91

Janna takes the shortest time to reach the top of the stairs on Thursday.

Explain why.

.....

.....

.....

..... [2]

[Total: 6]

21

BLANK PAGE

Question 9 begins on page 22

PLEASE DO NOT WRITE ON THIS PAGE

9 Seat belts are a safety feature in cars.

The design of seat belts has changed since they were first fitted in cars.

(a) Scientists collect test data to help them design new seat belts.

(i) Suggest some methods the scientists use to collect valid test data for seat belts.

.....

.....

..... [2]

(ii) Why is it important for scientists to publish the test data they collect?

.....

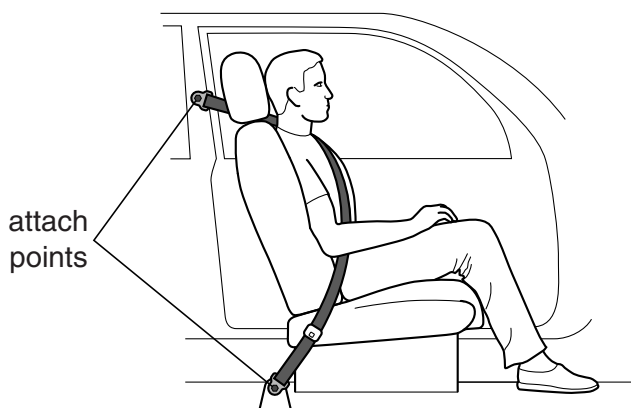
.....

..... [2]

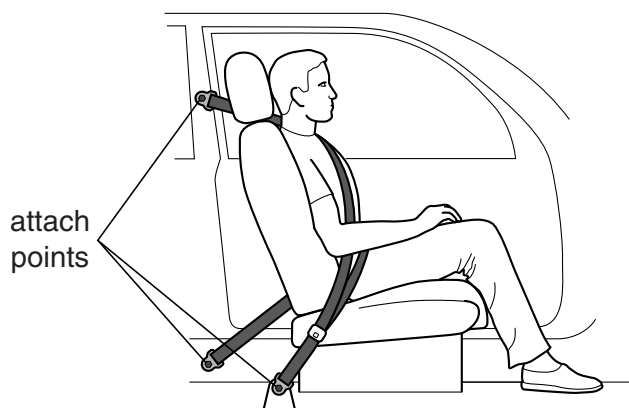
(b) Some seat belts are attached to the car in two places.

Others are attached in three places.

Look at the diagram below.



2-point seat belt



3-point seat belt

Suggest why 3-point seat belts are better at reducing injuries.

.....

..... [1]

(c) Test data produced by scientists show that the material which seat belts are made from is important.

Write down one property which seat belt material must have and explain why this property is useful in an accident.

.....
..... [1]

(d) Pregnant women can find it uncomfortable to wear a seat belt.



Describe one risk **and** one benefit of a pregnant woman wearing a seat belt.

.....
.....
..... [2]

[Total: 8]

10 Taran wants to buy a new car.

He uses the internet to find data about fuel consumption and emissions.

Look at the table below with the information he finds about two different car models.

Model R	Model S
<p>Fuel consumption in litres per 100 km:</p> <ul style="list-style-type: none"> In town 5.7 On motorways 4.1 Combined 4.6 <p>Average carbon dioxide emission 124.0 g/km</p>	<p>Fuel consumption in litres per 100 km:</p> <ul style="list-style-type: none"> In town 8.2 On motorways 5.2 Combined 6.3 <p>Average carbon dioxide emission 149.0 g/km</p>

(a) This data is collected using cars that have been driven with the same driving styles and speeds.

Write down another condition that is kept constant to allow the cars to be compared.

..... [1]

(b) (i) **Model S** has a higher carbon dioxide emission than **Model R**.

Use the data to suggest why.

.....

 [1]

(ii) Suggest why the carbon dioxide emissions quoted in the table are **average** values.

.....
 [1]

25

(c) Taran's friend, Charlie, has a van.

Charlie's van has double the mass of Taran's old car.

Charlie says 'when my van goes twice the speed of your car, it will have four times as much kinetic energy (KE)'.

Is Charlie correct?

Explain your answer.

.....

.....

.....

..... [2]

[Total: 5]

END OF QUESTION PAPER

ADDITIONAL ANSWER SPACE

If additional space is required, you should use the following lined page(s). The question number(s) must be clearly shown in the margins.

A large rectangular area with a solid vertical line on the left side and horizontal dotted lines extending across the page, providing space for writing answers.

A large area of the page is reserved for writing, featuring a vertical solid line on the left side and horizontal dotted lines extending across the page.



Copyright Information

OCR is committed to seeking permission to reproduce all third-party content that it uses in its assessment materials. OCR has attempted to identify and contact all copyright holders whose work is used in this paper. To avoid the issue of disclosure of answer-related information to candidates, all copyright acknowledgements are reproduced in the OCR Copyright Acknowledgements Booklet. This is produced for each series of examinations and is freely available to download from our public website (www.ocr.org.uk) after the live examination series. If OCR has unwittingly failed to correctly acknowledge or clear any third-party content in this assessment material, OCR will be happy to correct its mistake at the earliest possible opportunity.

For queries or further information please contact the Copyright Team, First Floor, 9 Hills Road, Cambridge CB2 1GE.

OCR is part of the Cambridge Assessment Group; Cambridge Assessment is the brand name of University of Cambridge Local Examinations Syndicate (UCLES), which is itself a department of the University of Cambridge.

