



Cambridge IGCSE™

CANDIDATE
NAME

CENTRE
NUMBER

--	--	--	--	--	--

CANDIDATE
NUMBER

--	--	--	--



CO-ORDINATED SCIENCES

0654/33

Paper 3 Theory (Core)

October/November 2023

2 hours

You must answer on the question paper.

No additional materials are needed.

INSTRUCTIONS

- Answer **all** questions.
- Use a black or dark blue pen. You may use an HB pencil for any diagrams or graphs.
- Write your name, centre number and candidate number in the boxes at the top of the page.
- Write your answer to each question in the space provided.
- Do **not** use an erasable pen or correction fluid.
- Do **not** write on any bar codes.
- You may use a calculator.
- You should show all your working and use appropriate units.

INFORMATION

- The total mark for this paper is 120.
- The number of marks for each question or part question is shown in brackets [].
- The Periodic Table is printed in the question paper.

This document has **28** pages. Any blank pages are indicated.

- 1 (a) Reproduction is one of the characteristics of living things.

Complete the definition.

Reproduction is the process that makes more of the same kind of [1]

- (b) Fig. 1.1 is a diagram of the male reproductive system in humans.

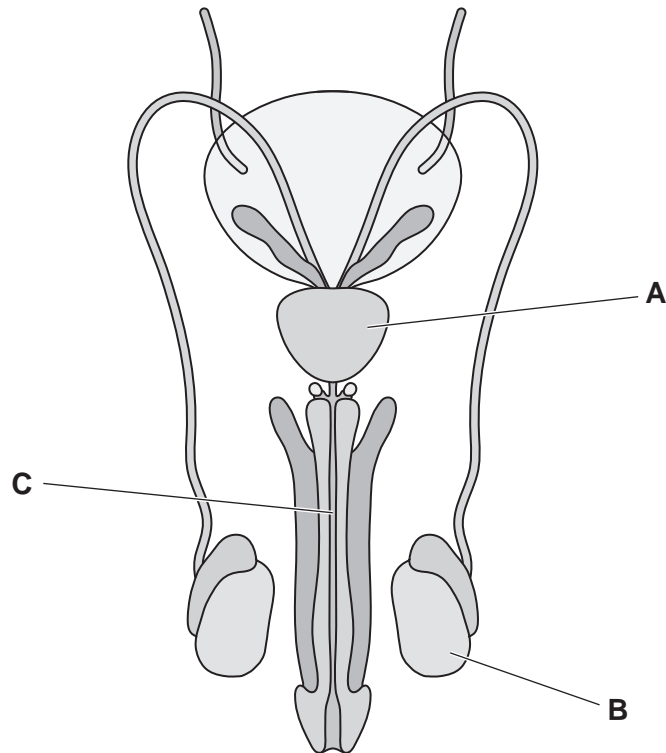


Fig. 1.1

The boxes on the left show the letters labelling some of the parts in Fig. 1.1.

The boxes on the right show functions of some of the parts.

Draw **one** line to link each letter to its function.

A	carries semen and urine out of the body
B	produces sperm
C	secretes fluid for sperm to swim in
	transfers sperm to urethra

[3]

(c) Fig. 1.2 is a drawing of a sperm cell.

Label the cell structure that contains the genetic material with a label line and the correct name.



Fig. 1.2

[2]

(d) State the names of **two** cell structures that are present in plant cells but **not** present in animal cells.

1

2

[2]

[Total: 8]

2 (a) (i) There are different methods of separating mixtures.

Fig. 2.1 shows that distillation is used to separate water from aqueous potassium chloride.

Complete Fig. 2.1 to show how the **other three** substances are separated from the mixtures.

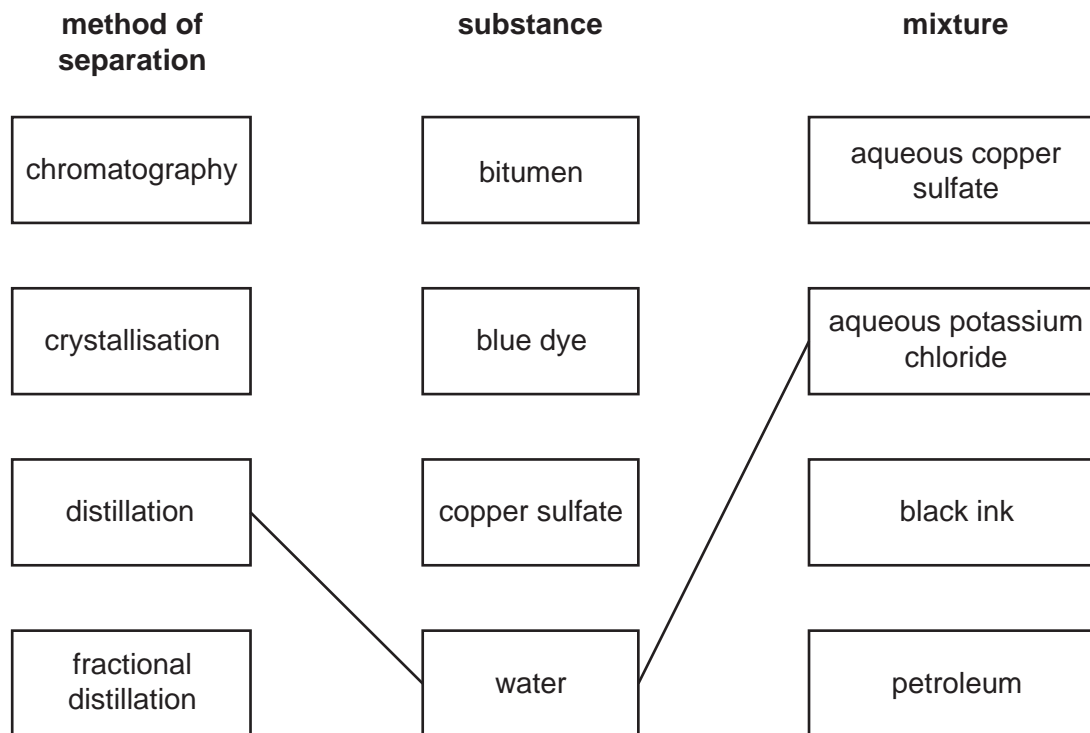


Fig. 2.1

[3]

(ii) Name the solvent in aqueous copper sulfate.

..... [1]

(iii) State **one** use for bitumen.

..... [1]

(b) The treatment of a water supply uses filtration and chlorination.

Give a reason for using filtration and chlorination.

filtration

.....

chlorination

.....

[2]

(c) Electrolysis is a process which uses electricity to break down a compound.

For example, when molten lead bromide is electrolysed, lead and bromine are made.

Complete the sentences about the electrolysis of lead bromide using words from the list.

Each word may be used once, more than once or not at all.

bromine	cell	electrolyte	electrons	hydrogen
ions	lead	molecules	negative	positive

Molten lead bromide is called the because it contains
..... which are free to move.

The electrode is called the cathode
and the electrode is called the anode.

..... forms at the anode and
forms at the cathode.

[4]

[Total: 11]

- 3 (a) A man is sitting on a beach on a sunny day. The man is out in the Sun for too long and gets sunburned.

(i) State the name of the electromagnetic radiation that causes sunburn.

..... [1]

(ii) Place the electromagnetic radiation named in 3(a)(i) into the incomplete electromagnetic spectrum shown in Fig. 3.1.

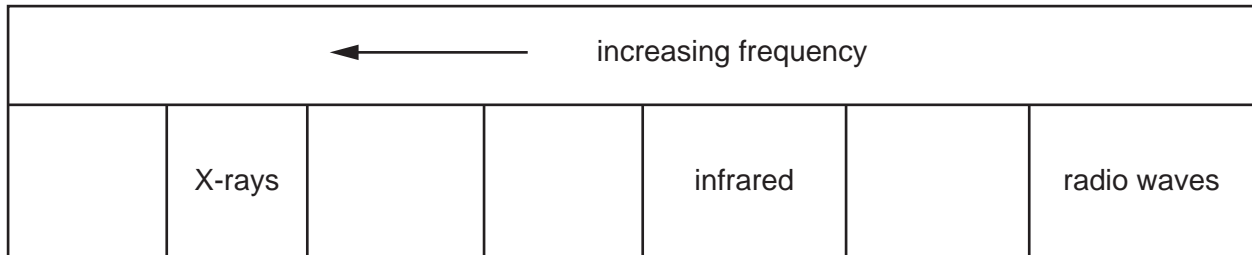


Fig. 3.1

[1]

- (b) The man stands up. Pressure from his feet makes footprints in the sand.

State the **two** quantities needed to calculate this pressure.

1

2

[2]

- (c) The man catches a beach ball.
The ball has a mass of 0.50 kg and a weight of 4.9 N.

Calculate the value of the gravitational field strength g .
State the units of your answer.

$g =$ units [3]

(d) Fig. 3.2 represents a water wave on the sea.

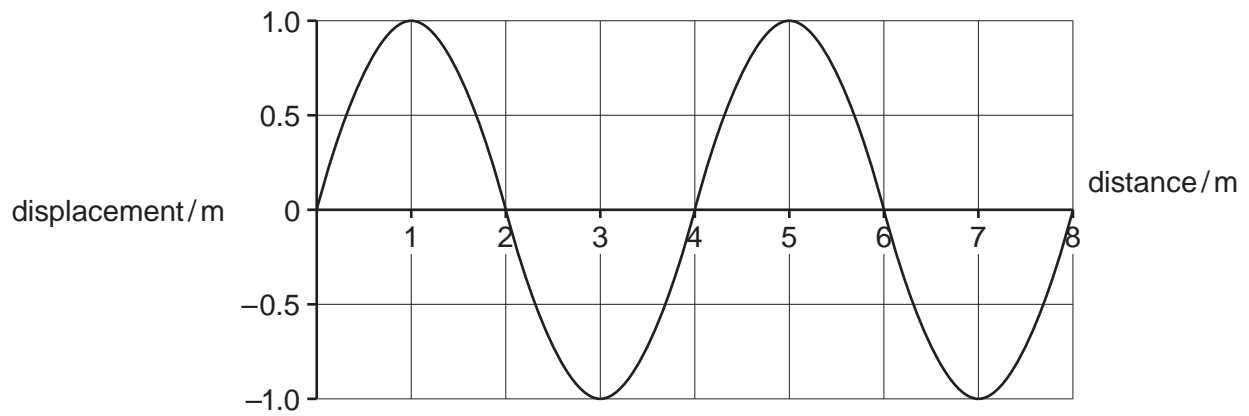


Fig. 3.2

(i) Determine the wavelength of the wave.

wavelength = m [1]

(ii) Determine the amplitude of the wave.

amplitude = m [1]

- (e) A piece of glass has been left on the sand.
The glass acts as a convex lens focusing the Sun's rays onto a piece of paper lying on the sand.

- (i) Complete Fig. 3.3 to show the three rays of light focused on the paper at point X.

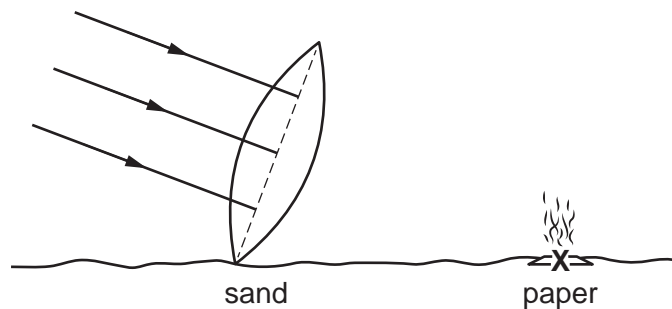


Fig. 3.3

[1]

- (ii) The lens has a mass of 5.0g and a volume of 2.0cm³.

Calculate the density of the glass in the lens.

density = g/cm³ [2]

[Total: 12]

4 (a) Scientists record the area of land that is cleared by deforestation every year.

Fig. 4.1 shows a bar chart of the results in one country.

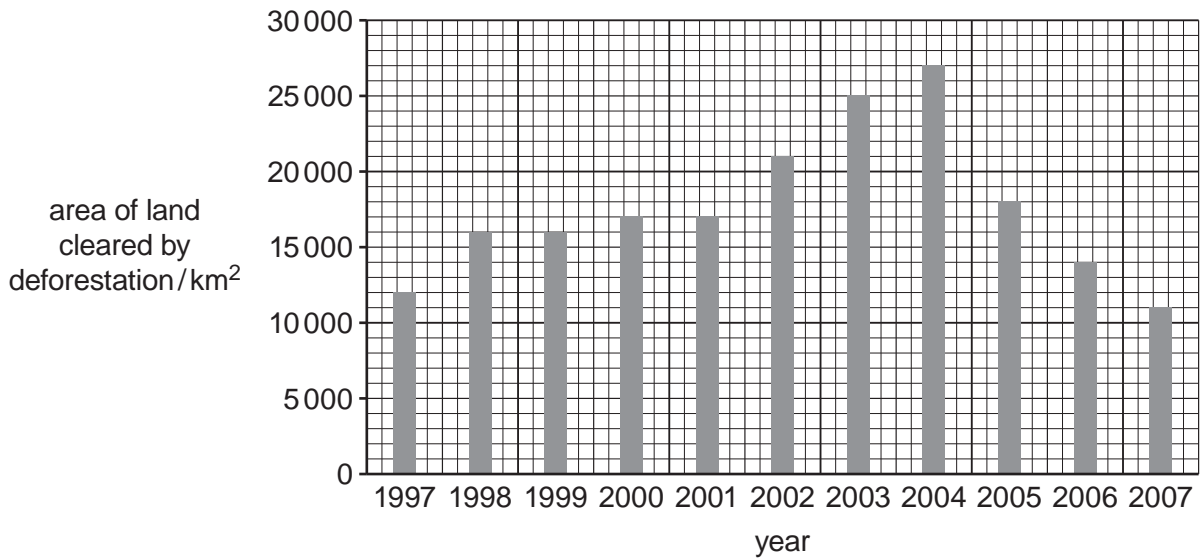


Fig. 4.1

- (i) Calculate the percentage decrease in area cleared by deforestation between **2004** and **2007**.
Give your answer to the nearest whole number.

area cleared by deforestation in 2004 km²

area cleared by deforestation in 2007 km²

percentage change %
[3]

- (ii) The change in area cleared by deforestation between **1997** and **2004** affects carbon dioxide concentration in the atmosphere.

Use ideas about the carbon cycle to explain why.

.....

 [2]

10

- (iii) Changes to the concentration of gases in the atmosphere is one undesirable effect of deforestation.

List **three other** undesirable effects of deforestation on the environment.

1

2

3

[3]

- (b) State **two** ways that living **animals** transfer carbon in the carbon cycle.

1

2

[2]

[Total: 10]

- 5 (a) Table 5.1 shows some information about three Group VII elements.

Complete Table 5.1.

Table 5.1

element	formula of molecules	colour	metal or non-metal?
bromine		orange	non-metal
chlorine			
iodine	I_2	grey-black	

[3]

- (b) State the name given to the Group VII elements in the Periodic Table.

..... [1]

- (c) An atom of one of the isotopes of iodine contains 53 protons and 74 neutrons.

Some statements about iodine are shown below.

Place a tick (✓) to show the correct statements about iodine.

All iodine **atoms** contain 53 electrons.

All iodine **molecules** contain 148 neutrons.

The protons are found in the nucleus.

The neutrons are found in the nucleus.

[2]

- (d) Describe what is observed when aqueous silver nitrate is added to aqueous potassium chloride and to aqueous potassium bromide.

aqueous potassium chloride

.....

aqueous potassium bromide

.....

[2]

- (e) A gas jar filled with air is placed on top of a gas jar filled with orange bromine vapour. After several hours, the bromine vapour has mixed with the air.

This is shown in Fig. 5.1.

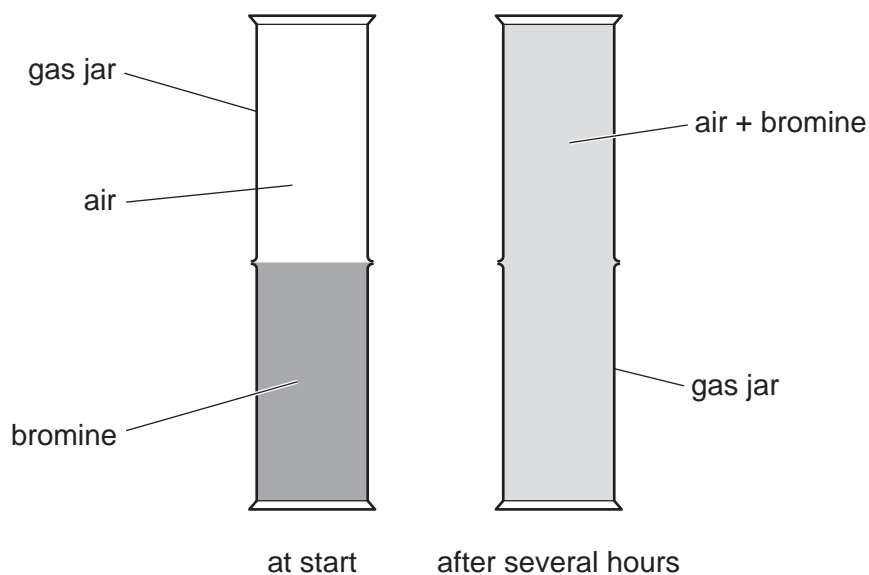


Fig. 5.1

Explain why the bromine mixes with the air.

Use ideas about the movement of molecules in your answer.

.....

.....

.....

..... [2]

[Total: 10]

- 6 (a) Fig. 6.1 shows a double electric hotplate used to heat food.



Fig. 6.1

Fig. 6.2 shows the circuit diagram for the hotplates.

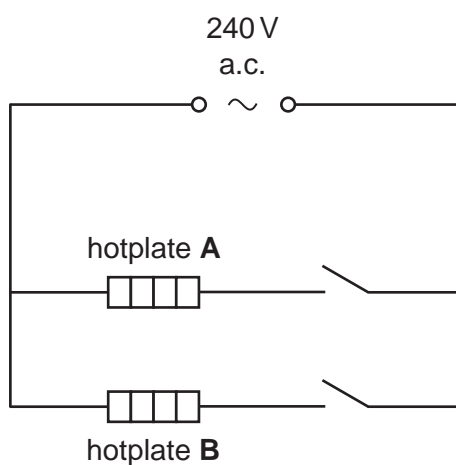


Fig. 6.2

Hotplate **A** and hotplate **B** are identical and are connected to a 240V a.c. supply. Each hotplate has a resistance of $40\ \Omega$.

- (i) Calculate the current in hotplate **A**.

current = A [2]

- (ii) State the term used for the circuit arrangement of the hotplates in Fig. 6.2.

..... [1]

- (iii) Circle the correct value for the combined resistance of the two hotplates connected as shown in Fig. 6.2.

20 Ω 40 Ω 80 Ω 1600 Ω

Explain your answer.

explanation

..... [2]

- (b) A steel saucepan containing water is placed on one of the hotplates as shown in Fig. 6.3.

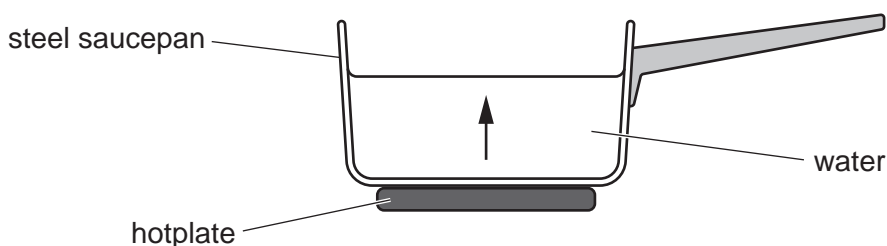


Fig. 6.3

- (i) State the method by which thermal energy is transferred through the base of the steel saucepan.

..... [1]

- (ii) The water at the bottom of the saucepan is heated.
All the water in the saucepan is warmed by convection.

On Fig. 6.3, draw arrows to show how the heated water circulates around the saucepan. One arrow has been drawn for you. [1]

- (iii) As the water in the saucepan is heated, some of the water evaporates.

Choose words from the list to complete the sentences to describe evaporation.

bottom density energy mass middle surface

Water molecules escape from the of the liquid.

Only the water molecules with the greatest escape. [2]

- (iv) Eventually the water boils as it reaches the boiling point of water.

State the boiling point of water.

boiling point of water = °C [1]

- (v) While the water boils, the hotplate continues to heat the water in the saucepan.

State what happens to the temperature of the water when it is boiling.

..... [1]

[Total: 11]

- 7 (a) Enzymes are only active within a specific pH range.
Table 7.1 shows the specific pH range for five different enzymes.

Table 7.1

enzyme	pH range enzyme is active
A	1–5
B	5–9
C	7–12
D	2–3
E	10–12

Identify the enzyme(s) from Table 7.1 that are:

only active in acidic conditions

active over the widest range of pH values

active at pH8.

[3]

- (b) State **one** factor, other than pH, that affects enzyme activity.

..... [1]

- (c) Enzymes are proteins.

Circle the elements that **all** enzymes contain.

calcium

carbon

chlorine

hydrogen

magnesium

nitrogen

oxygen

[1]

- (d) Table 7.2 lists some large nutrient molecules and the smaller molecules from which they are made.

Complete Table 7.2.

Table 7.2

large nutrient molecule	smaller molecules that nutrients are made from
fats and oils	fatty acids and
proteins
1. starch
2.

[4]

- (e) Digested nutrients are absorbed by the body.

Place ticks (✓) in the boxes to show **two** correct statements about absorption.

involves the breakdown of insoluble molecules to soluble molecules	<input type="checkbox"/>
involves movement of digested food molecules into the blood	<input type="checkbox"/>
involves movement of insoluble food molecules into cells	<input type="checkbox"/>
occurs across the wall of the liver	<input type="checkbox"/>
occurs across the wall of the intestine	<input type="checkbox"/>

[2]

[Total: 11]

- 8 (a) Fig. 8.1 shows the apparatus a student uses to investigate the rate of reaction between magnesium and dilute hydrochloric acid.

Hydrogen gas is collected in the measuring cylinder.
The other product is aqueous magnesium chloride.

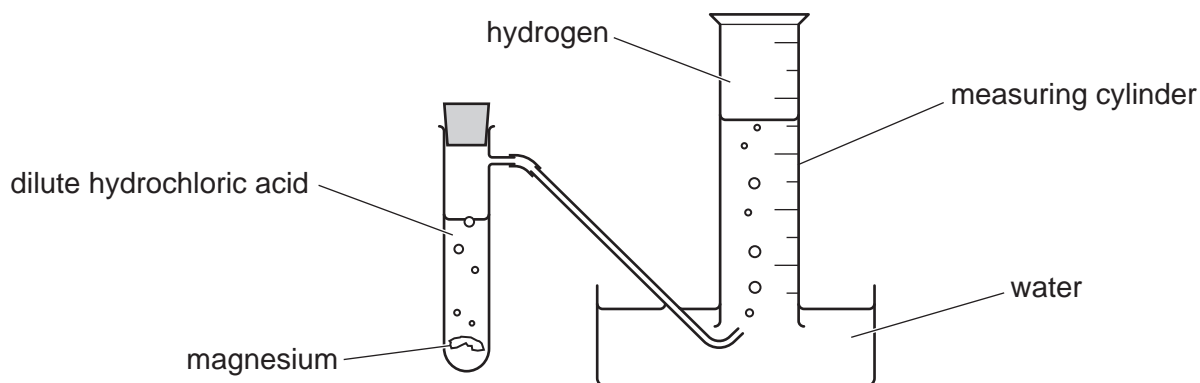


Fig. 8.1

- (i) Construct the word equation for this reaction.

..... + → + [2]

- (ii) State **two** changes to the reaction conditions that increase the rate of reaction.

1

2 [2]

- (iii) The reaction between magnesium and dilute hydrochloric acid is exothermic.

State the meaning of exothermic.

..... [1]

- (iv) The student repeats the experiment using three different metals, copper, iron and calcium.

The observations are shown in Table 8.1.


Table 8.1

metal	observation
copper	does not react
iron	reacts slowly
calcium	reacts rapidly
magnesium	reacts moderately

Place the four metals in order of their reactivity from the most reactive to the least reactive.

..... most reactive

 least reactive



[1]

(b) Table 8.2 shows information about the four metals in a magnesium alloy.

Table 8.2

element	percentage by mass in the alloy / %
aluminium	9.0
magnesium	
manganese	1.0
zinc	1.0

(i) Calculate the percentage of magnesium contained in the alloy.

percentage of magnesium = % [1]

(ii) Calculate the mass of aluminium contained in 20 kg of the alloy.

mass of aluminium = kg [1]

(iii) Suggest why, apart from cost, this alloy of magnesium is used rather than pure magnesium for making parts for car engines.

.....
 [1]

[Total: 9]

- 9 (a) Fig. 9.1 shows four energy sources and four descriptions of energy sources.

Draw **one** straight line from **each** energy source to the correct description of the energy source.

energy source	description
geothermal	produces dangerous waste
hydroelectric (HEP)	unreliable
nuclear	uses energy from falling water
wind	uses energy from inside the Earth

Fig. 9.1

[3]

- (b) Nuclear fuels are used to generate electricity in a nuclear power station.

State the name of the process by which a nuclear fuel produces heat.

..... [1]

- (c) Plutonium-239 is an example of a nuclear fuel.

Plutonium-239 has the nuclide notation ${}_{94}^{239}\text{Pu}$.

Determine the number of neutrons in one atom of plutonium-239.

..... [1]

- (d) (i) Plutonium-239 decays by alpha emission.
The decay product is uranium-235.

Write the word equation for this decay process.

..... [1]

- (ii) Describe an alpha particle.

..... [1]

20

(e) α -particles, β -particles, and γ -radiation are three radioactive emissions.

Place the three emissions in order of their ionising ability.

.....
most ionising \longrightarrow least ionising [1]

[Total: 8]

10 (a) Fig. 10.1 is a diagram of a cross-section through a leaf.

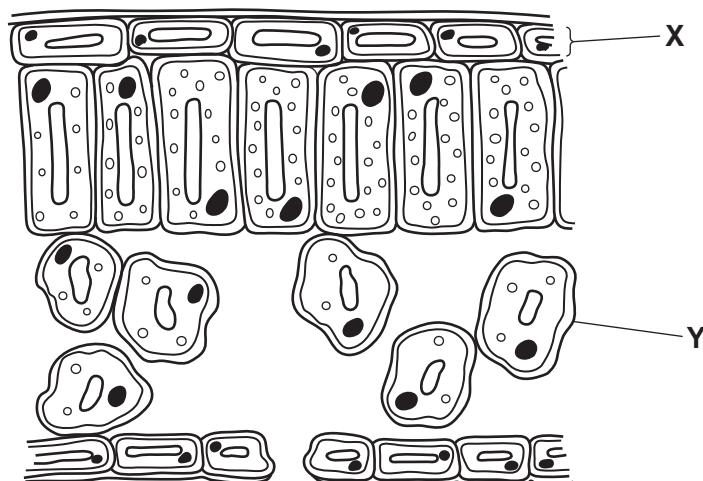


Fig. 10.1

(i) State the name of the **part** labelled **X** and the **cell** labelled **Y** in Fig. 10.1.

part X

cell Y

[2]

(ii) Draw **one** arrow on Fig. 10.1 to show the pathway of water vapour during transpiration. [1]

(b) Fig. 10.2 is an incomplete sketch graph.

Complete Fig. 10.2 to show the effect of humidity on the rate of transpiration by:

- including axis labels
- drawing a line to show the trend.




Fig. 10.2

[2]

(c) State the name of the type of plant cell that absorbs water from the soil.

..... [1]

(d) State the name of the plant tissue that transports water from the roots to the leaves.

..... [1]

(e) Suggest **one** reason why not all the water absorbed is lost through transpiration.

.....
..... [1]

(f) Blood has several functions including transport in humans.

(i) State **one** function of white blood cells.

..... [1]

(ii) State **two other** main components of blood.

1

2 [2]

[Total: 11]

- 11 (a) Sodium forms a basic oxide. Carbon forms acidic oxides.

State why they are different.

.....
 [1]

- (b) Carbon is a solid and carbon dioxide is a gas.

Describe the differences between a solid and a gas using ideas about particle separation and particle motion.

particle separation

.....

particle motion

..... [2]

- (c) Diamond is one form of carbon.
 Fig. 11.1 shows the arrangement of carbon atoms in diamond.

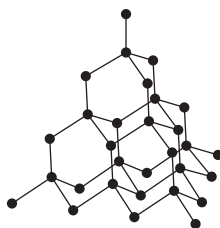


Fig. 11.1

Circle two words from the list to describe the structure and bonding in diamond.

simple

giant

metallic

ionic

covalent

polymer

[2]

- (d) (i) Sodium metal reacts with chlorine gas to make sodium chloride.

Balance the symbol equation for this reaction.



[1]

- (ii) During the reaction sodium atoms form sodium ions, Na^+ , and chlorine atoms form chloride ions, Cl^- .

Fig. 11.2 shows the electronic structure of a sodium ion and a chloride ion.

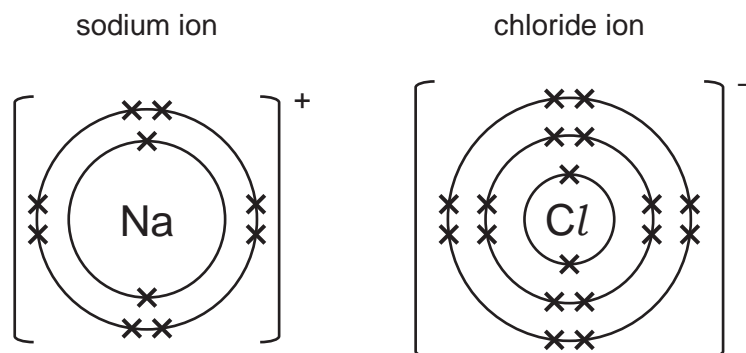


Fig. 11.2

Write down the electronic structure of a sodium **atom** and a chlorine **atom**.

sodium **atom**

chlorine **atom**

[2]

- (iii) Sodium and lithium are both in Group I of the Periodic Table.

Sodium reacts violently with water.

Describe the reaction of lithium with water.

Describe the trend in the reactivity of Group I elements as shown by sodium and lithium.

reaction

.....

explanation

.....

[2]

[Total: 10]

12 (a) Fig. 12.1 is a distance–time graph for two cyclists **A** and **B** who are racing for a distance of 1000m.

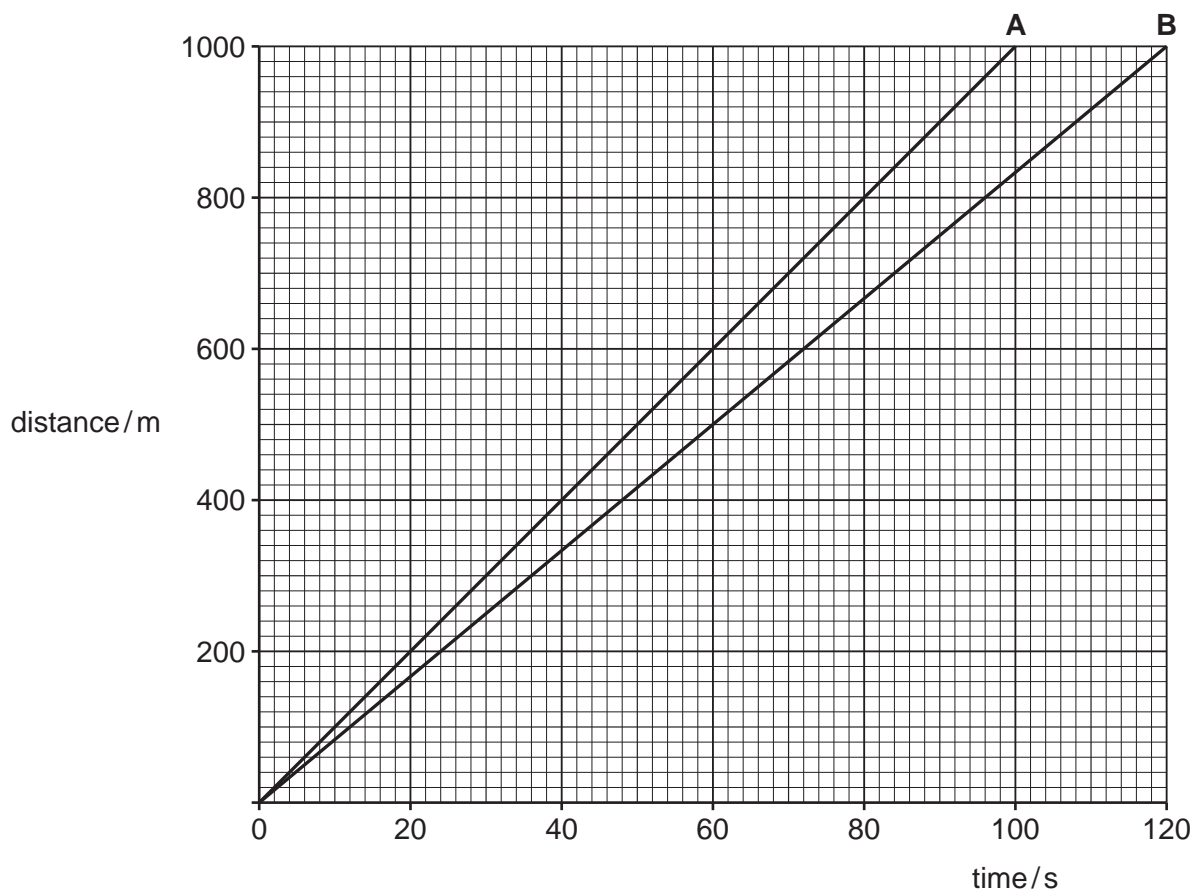


Fig. 12.1

(i) Calculate the time difference over the 1000m for cyclist **A** compared to cyclist **B**.

time difference = s [1]

(ii) Calculate the speed of cyclist **B**.

speed = m/s [2]

(iii) Describe how the graph shows that cyclist **B** moves at a constant speed.

.....
 [1]

- (b) (i) Fig. 12.2 shows a cyclist moving along a flat road.



Fig. 12.2

Choose words or phrases from the list to complete the sentence.
Each word or phrase may be used once, more than once or not at all.

chemical potential

elastic potential

gravitational potential

kinetic

As the cyclist's speed increases, the energy in the cyclist's body decreases and the energy of the cyclist increases. [2]

- (ii) As the cyclist rides along the road, the temperature of the air in the tyres increases.

Describe the change in the motion of the air molecules.

.....
..... [1]

- (c) The cyclist has a tyre puncture and needs to remove the wheel. Fig. 12.3 shows the wheel nut that must be unscrewed.

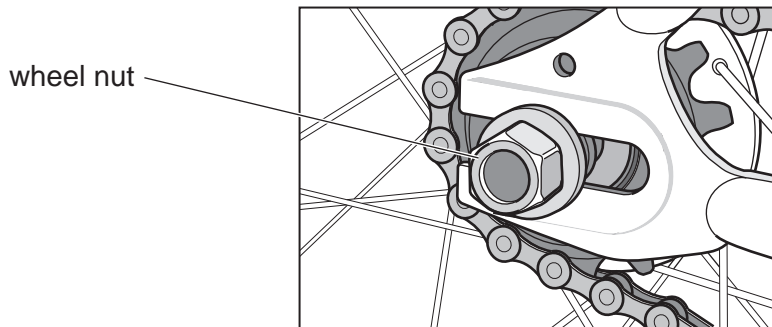


Fig. 12.3

The cyclist has two spanners X and Y which can be used to unscrew the wheel nut.

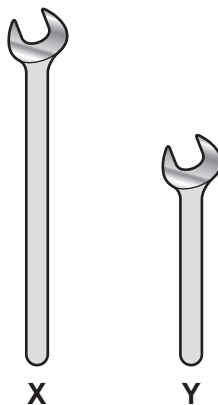


Fig. 12.4

Fig. 12.4 shows the two spanners.

Explain why spanner X will unscrew the wheel nut more easily than spanner Y.

.....

.....

..... [2]

[Total: 9]

Permission to reproduce items where third-party owned material protected by copyright is included has been sought and cleared where possible. Every reasonable effort has been made by the publisher (UCLES) to trace copyright holders, but if any items requiring clearance have unwittingly been included, the publisher will be pleased to make amends at the earliest possible opportunity.

To avoid the issue of disclosure of answer-related information to candidates, all copyright acknowledgements are reproduced online in the Cambridge Assessment International Education Copyright Acknowledgements Booklet. This is produced for each series of examinations and is freely available to download at www.cambridgeinternational.org after the live examination series.

Cambridge Assessment International Education is part of Cambridge Assessment. Cambridge Assessment is the brand name of the University of Cambridge Local Examinations Syndicate (UCLES), which is a department of the University of Cambridge.

The Periodic Table of Elements

Group									
I	II	III	IV	V	VI	VII	VIII		
3 Li lithium 7	4 Be beryllium 9	5 B boron 11	6 C carbon 12	7 N nitrogen 14	8 O oxygen 16	9 F fluorine 19	10 Ne neon 20		
11 Na sodium 23	12 Mg magnesium 24	13 Al aluminium 27	14 Si silicon 28	15 P phosphorus 31	16 S sulfur 32	17 Cl chlorine 35.5	18 Ar argon 40		
19 K potassium 39	20 Ca calcium 40	21 Sc scandium 45	22 Ti titanium 48	23 V vanadium 51	24 Cr chromium 52	25 Mn manganese 55	26 Fe iron 56	27 Co cobalt 59	28 Ni nickel 59
37 Rb rubidium 85	38 Sr strontium 88	39 Y yttrium 89	40 Zr zirconium 91	41 Nb niobium 93	42 Mo molybdenum 96	43 Tc technetium —	44 Ru ruthenium 101	45 Rh rhodium 103	46 Pd palladium 106
55 Cs caesium 133	56 Ba barium 137	57-71 lanthanoids	72 Hf hafnium 178	73 Ta tantalum 181	74 W tungsten 184	75 Re rhenium 186	76 Os osmium 190	77 Ir iridium 192	78 Pt platinum 195
87 Fr francium —	88 Ra radium —	89-103 actinoids	104 Rf rutherfordium —	105 Db dubnium —	106 Sg seaborgium —	107 Bh bohrium —	108 Hs hassium —	109 Mt meitnerium —	110 Ds darmstadtium —
							80 Hg mercury 201	81 Tl thallium 204	82 Pb lead 207
							48 Cd cadmium 112	49 In indium 115	50 Sn tin 119
							29 Cu copper 64	30 Zn zinc 65	31 Ga gallium 70
							47 Ag silver 108	48 Cd cadmium 112	49 In indium 115
							79 Au gold 197	80 Hg mercury 201	81 Tl thallium 204
							111 Rg roentgenium —	112 Cn copernicium —	113 Nh nihonium —
									114 Fl flerovium —
									116 Lv livermorium —
									118 Og oganeson —

1
H
hydrogen
1

Key
atomic number
atomic symbol
name
relative atomic mass

57 La lanthanum 139	58 Ce cerium 140	59 Pr praseodymium 141	60 Nd neodymium 144	61 Pm promethium —	62 Sm samarium 150	63 Eu europium 152	64 Gd gadolinium 157	65 Tb terbium 159	66 Dy dysprosium 163	67 Ho holmium 165	68 Er erbium 167	69 Tm thulium 169	70 Yb ytterbium 173	71 Lu lutetium 175
89 Ac actinium —	90 Th thorium 232	91 Pa protactinium 231	92 U uranium 238	93 Np neptunium —	94 Pu plutonium —	95 Am americium —	96 Cm curium —	97 Bk berkelium —	98 Cf californium —	99 Es einsteinium —	100 Fm fermium —	101 Md mendelevium —	102 No nobelium —	103 Lr lawrencium —

lanthanoids

actinoids

The volume of one mole of any gas is 24 dm³ at room temperature and pressure (r.t.p.).