



Cambridge IGCSE™

CANDIDATE
NAME

CENTRE
NUMBER

--	--	--	--	--

CANDIDATE
NUMBER

--	--	--	--



CO-ORDINATED SCIENCES

0654/31

Paper 3 Theory (Core)

October/November 2023

2 hours

You must answer on the question paper.

No additional materials are needed.

INSTRUCTIONS

- Answer **all** questions.
- Use a black or dark blue pen. You may use an HB pencil for any diagrams or graphs.
- Write your name, centre number and candidate number in the boxes at the top of the page.
- Write your answer to each question in the space provided.
- Do **not** use an erasable pen or correction fluid.
- Do **not** write on any bar codes.
- You may use a calculator.
- You should show all your working and use appropriate units.

INFORMATION

- The total mark for this paper is 120.
- The number of marks for each question or part question is shown in brackets [].
- The Periodic Table is printed in the question paper.

This document has **28** pages. Any blank pages are indicated.

1 (a) Fig. 1.1 is a diagram of the female reproductive system in humans.

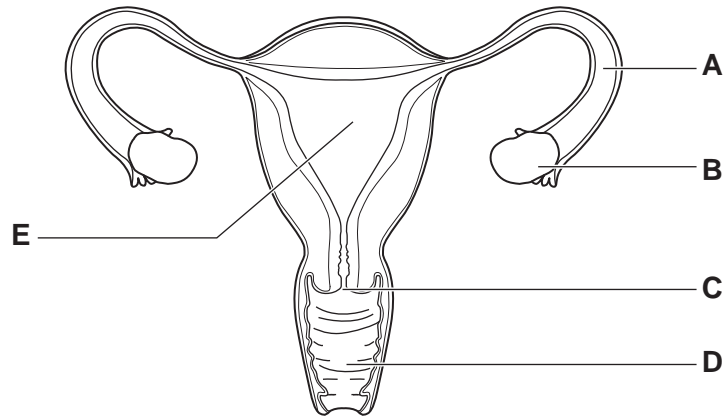


Fig. 1.1

Identify the letters in Fig. 1.1 that represent the part:

that produces female gametes

that receives the penis during sexual intercourse

where fertilisation occurs.

[3]

(b) State the names of the female gametes and the male gametes in humans.

female gametes

male gametes

[2]

(c) Gametes are cells.

Draw and label the main structures in a simple animal cell in the space provided.

[3]

3

- (d) Circle the correct word or phrase in bold in each sentence to describe early development in humans.

During fertilisation, the nuclei of gametes fuse forming a fertilised cell called **a fetus / a zygote / an embryo**.

This divides to form **a zygote / an embryo / an ovule** which is a ball of cells.

This ball of cells implants into the wall of the **cervix / uterus / vagina**.

[3]

[Total: 11]

- 2 (a) Air is a mixture of gases.

Fig. 2.1 shows two pie charts representing samples of air, **A** and **B**.

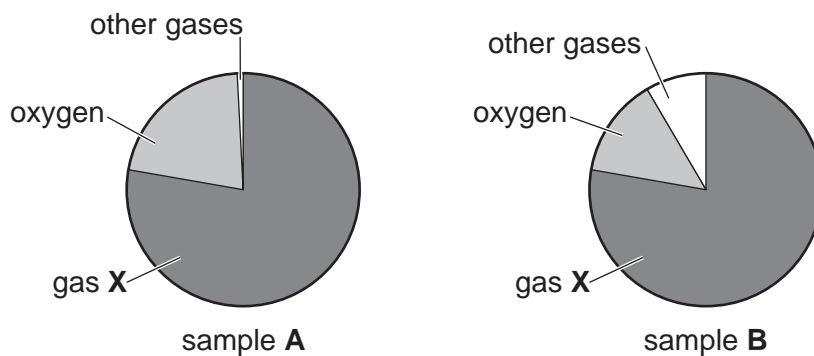


Fig. 2.1

- (i) State which sample, **A** or **B**, represents clean air.

Explain your answer.

sample

explanation

.....

[1]

- (ii) Identify gas **X**.

..... [1]

(b) Sulfur dioxide is a common pollutant found in air.

(i) State **one** adverse effect of sulfur dioxide on the health of humans.

.....
 [1]

(ii) State **one** source of sulfur dioxide in the air.

..... [1]

(iii) State **one** other common pollutant gas found in the air.

..... [1]

(iv) Sulfur dioxide dissolves in rainwater to make acid rain.

Suggest a pH value for acid rain.

pH = [1]

(v) Farmers need to treat acidic soil to neutralise the acidity.

State the chemical substance used by farmers to treat soil acidity.

..... [1]

(c) An atom of sulfur has an electronic structure 2, 8, 6.

(i) On Fig. 2.2, complete the electronic structure for this atom of sulfur.

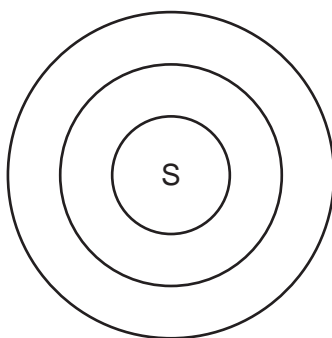


Fig. 2.2

[1]

(ii) Suggest how many electrons this sulfur atom gains to become a sulfide ion S^{2-} .

..... [1]

[Total: 9]

- 3 Fig. 3.1 shows four forces, **A**, **B**, **C** and **D**, acting on a submarine travelling underwater at a constant depth and at constant speed.

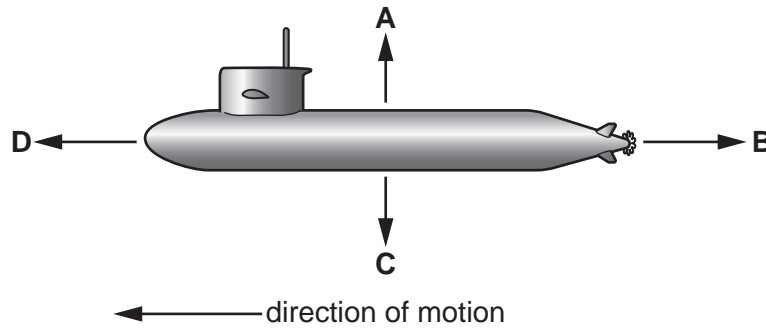


Fig. 3.1

- (a) (i) State the name of force **C**.
 [1]
- (ii) State how the magnitude of force **B** compares to the magnitude of force **D**.
 [1]

- (b) Sound above the maximum frequency that the healthy human ear can hear is called ultrasound.

The submarine stops moving and then uses ultrasound to determine the depth of the sea floor.

- (i) Suggest a value for the frequency of ultrasound.
 frequency = Hz [1]

- (ii) Pulses of ultrasound waves are sent out through the water. The ultrasound pulses reflect off the sea floor and the reflection is detected by the submarine 1.4 s later.

Ultrasound waves move through sea water at a speed of 1600 m/s.

Calculate the total distance travelled by the ultrasound pulse.

distance = m [2]

- (iii) Use your answer to (b)(ii) to calculate the distance between the sea floor and the submarine.

distance = m [1]

- (c) The submarine is powered by a nuclear reactor.

The nuclear reactor uses the nuclear fission of the isotope uranium-235.

- (i) State what is meant by the term isotope.

.....
..... [1]

- (ii) Describe what happens to the nucleus of a uranium-235 atom during nuclear fission.

.....
..... [1]

- (iii) Suggest **one** advantage of using nuclear fission to generate electricity.

.....
..... [1]

[Total: 9]

4 (a) A student records their pulse rate in beats per minute (bpm) during different types of activity.

Fig. 4.1 shows a bar chart of the results.

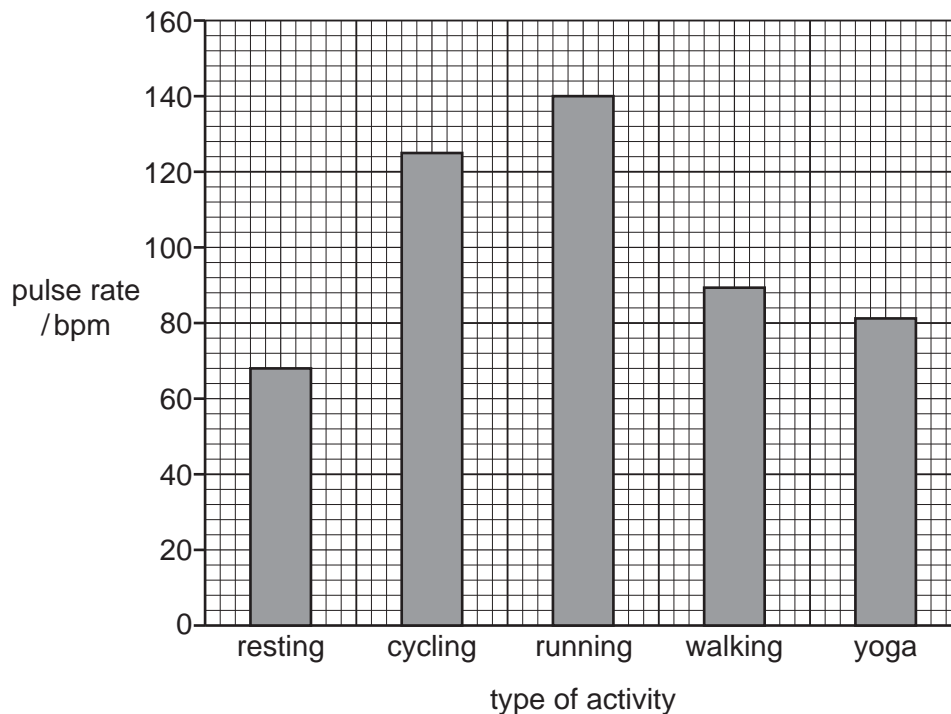


Fig. 4.1

(i) Identify the activity that results in the **smallest** increase in pulse rate from the resting pulse rate.

..... [1]

(ii) Calculate the percentage increase in pulse rate from resting to running shown in Fig. 4.1.

pulse rate during rest bpm

pulse rate during running bpm

percentage increase = [2]

(b) The rate of aerobic respiration increases during exercise.

(i) State the **two** reactants in aerobic respiration.

1

2

[2]

(ii) Suggest why the rate of respiration increases during exercise.

.....

.....

.....

..... [2]

(c) A hormone that causes pupils in the eye to widen also affects breathing and pulse rate.

(i) State the name of this hormone.

..... [1]

(ii) State the component of blood that transports hormones.

..... [1]

[Total: 9]

- 5 Table 5.1 shows five compounds, **A**, **B**, **C**, **D** and **E**, and the formula of each compound.

Table 5.1

compound	formula
A	CO
B	CO ₂
C	CH ₄
D	C ₂ H ₄
E	C ₂ H ₆

- (a) (i) State the compound from Table 5.1 that is an unsaturated hydrocarbon.

..... [1]

- (ii) Describe the chemical test that distinguishes between a saturated hydrocarbon and an unsaturated hydrocarbon and state the results for each.

test

.....

result for a saturated hydrocarbon

.....

result for an unsaturated hydrocarbon

.....

[3]

(b) (i) State the **name** of the **two** compounds from Table 5.1 that are possible products of the combustion of compound **E**.

1

2

[2]

(ii) State the name of the compound made when compound **D** reacts with steam.

..... [1]

(iii) State the name of the polymer made using compound **D** as a monomer.

..... [1]

(iv) Draw the structure of compound **E**, C_2H_6 .

[2]

(c) State the names of the **two** most common greenhouse gases from Table 5.1.

..... and [1]

[Total: 11]

6 (a) Fig. 6.1 shows an incomplete circuit diagram.

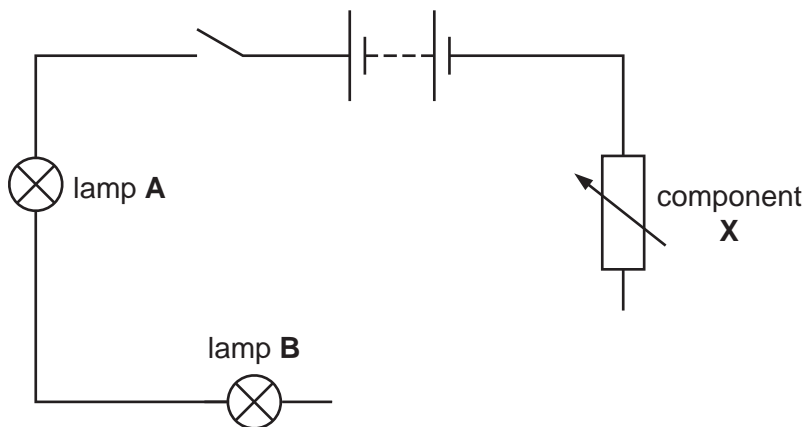


Fig. 6.1

(i) Complete the circuit diagram in Fig. 6.1 by:

- adding an ammeter to measure the current in lamp A
- adding a voltmeter to measure the potential difference across lamp A.

[3]

(ii) Identify component X.

..... [1]

(b) Lamp A has a resistance of $6.0\ \Omega$ and lamp B has a resistance of $4.0\ \Omega$.

The current in lamp A is 1.2 A .

(i) Calculate the potential difference across lamp A.

potential difference = V [2]

(ii) Calculate the combined resistance of the two lamps connected in series.

resistance = Ω [1]

(iii) The two lamps are now connected in parallel. Their combined resistance is different.

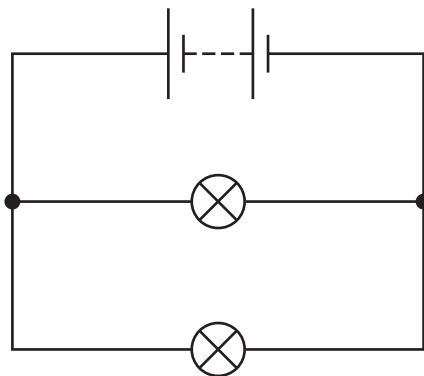


Fig. 6.2

Identify from the list the combined resistance of the two lamps connected in parallel.

Explain your answer.

- 2.4 Ω 4.0 Ω 6.0 Ω 10 Ω 24 Ω

combined resistance

explanation

..... [2]

(c) In lighting circuits in houses, lamps are connected in parallel.

State **two** advantages of using lamps connected in parallel rather than in series.

1

.....

2

.....

[2]

[Total: 11]

7 (a) Horses are herbivores.

Define the term herbivore.

.....

.....

..... [2]

(b) Fig. 7.1 is a photograph of the lower jaw of a horse.

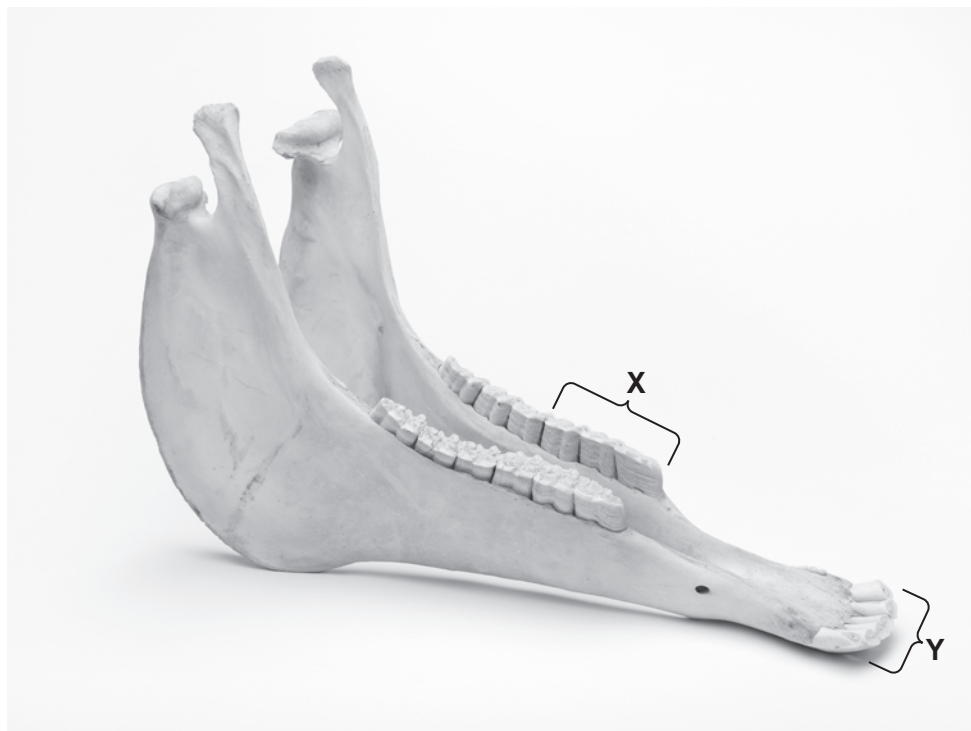


Fig. 7.1

(i) The dental pattern of a horse is similar to that of humans.

Identify the type of teeth labelled X and Y in Fig. 7.1.

X

Y

[2]

(ii) Identify the type of teeth found in a human jaw but **not** present in the jaw shown in Fig. 7.1.

..... [1]

(iii) State the name of the type of digestion that takes place using teeth.

..... [1]

(c) The statements describe some processes that occur in the alimentary canal.

Place ticks (✓) to show **all** the statements that describe the process of absorption.

food molecules are broken down so they become soluble	
food molecules become part of cells	
food molecules cross the wall of the small intestine	
food molecules enter the blood	
food molecules are taken in through the mouth	

[2]

(d) Complete these sentences about biological molecules.

Choose words or phrases from the list.

Each word or phrase may be used once, more than once or not at all.

amino acids fatty acids glycerol glycogen starch

Proteins are made from smaller molecules called

Glucose is used to make **two** larger molecules called

..... and

Iodine solution is used to test for the presence of

[4]

[Total: 12]

- 8 (a) Table 8.1 gives statements about molecules in solids and gases.

Put a tick (✓) next to each statement to show if it refers to a solid or to a gas.

Table 8.1

statement	solid	gas
molecules are closely packed		
molecules are free to move around		
molecules are widely separated		
molecules vibrate about fixed positions		

[2]

- (b) Use the list of substances to answer the following questions.

Each substance may be used once, more than once or not at all.

carbon chlorine copper ethanol oxygen water

- (i) Identify **one** substance which is a compound.

..... [1]

- (ii) Identify **two** substances which are solvents.

1

2

[2]

- (iii) Identify **one** substance which is a transition element.

..... [1]

- (iv) Identify **one** substance which is a halogen.

..... [1]

- (v) Identify **one** substance which consists of diatomic molecules.

..... [1]

[Total: 8]

- 9 (a) Train track is made of lengths of steel rails with small gaps between them.

Fig. 9.1 shows some train track.

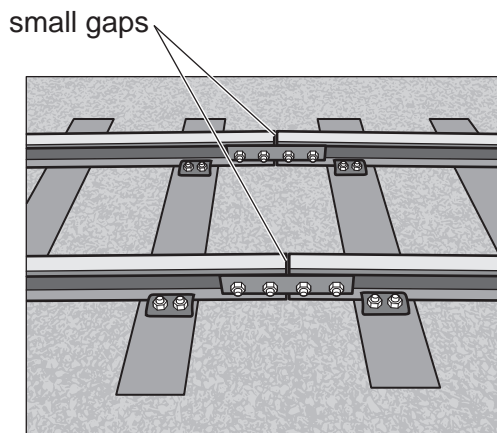


Fig. 9.1

- (i) Suggest why gaps are left between the steel rails.

.....

 [2]

- (ii) A steel rail has a volume of 0.13m^3 .

The density of steel is 7900kg/m^3 .

Calculate the mass of the steel rail.

mass = kg [2]

(b) (i) A train travels along the track for 600 s.

The train starts from rest and accelerates to a speed of 12.5 m/s in 200 s.

The train then travels at a constant speed for 300 s before slowing down and stopping after a further 100 s.

Complete the speed–time graph shown in Fig. 9.2 to show the motion of the train.

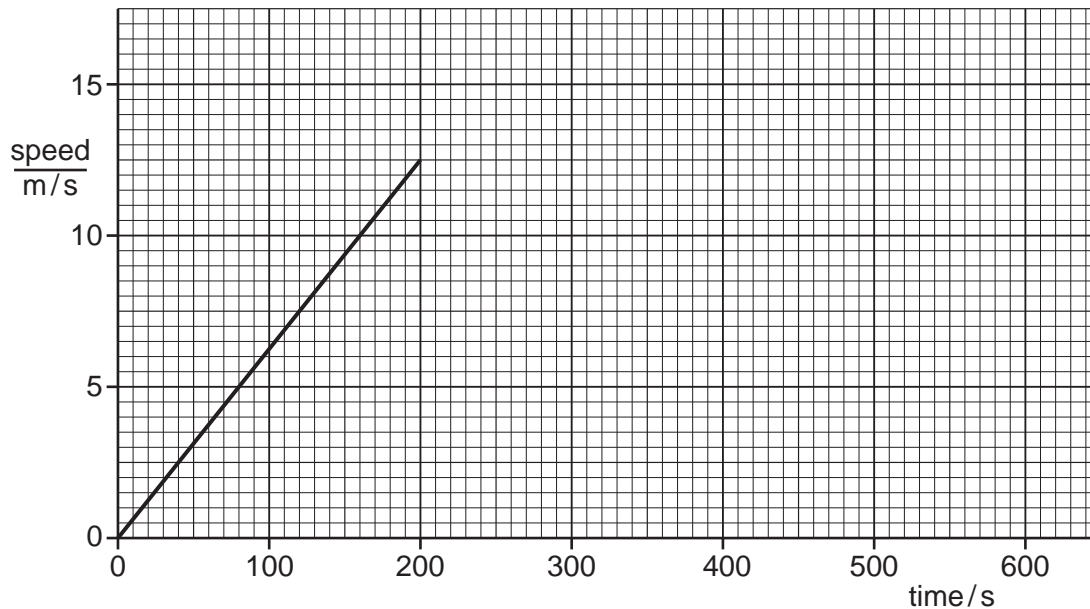


Fig. 9.2

[2]

(ii) During the journey, the train engine transfers 5×10^9 J of energy to the train.

State the work done on the train by the engine.

work done = J [1]

(c) Nuclear waste is carried by trains.

Nuclear waste emits ionising radiation.

(i) State **one** harmful effect of ionising radiation on human health.

.....
 [1]

(ii) Suggest how the nuclear waste is stored safely during the train journey.

.....
 [1]

(d) The headlamps of a train produce visible light.

Visible light is part of the electromagnetic spectrum.

Fig. 9.3 shows an incomplete electromagnetic spectrum.

Complete Fig. 9.3 to show all the parts of the electromagnetic spectrum.




Fig. 9.3

[2]

[Total: 11]

10 (a) A student investigates the conditions required for the germination of seeds.

Fig. 10.1 shows the apparatus and conditions.

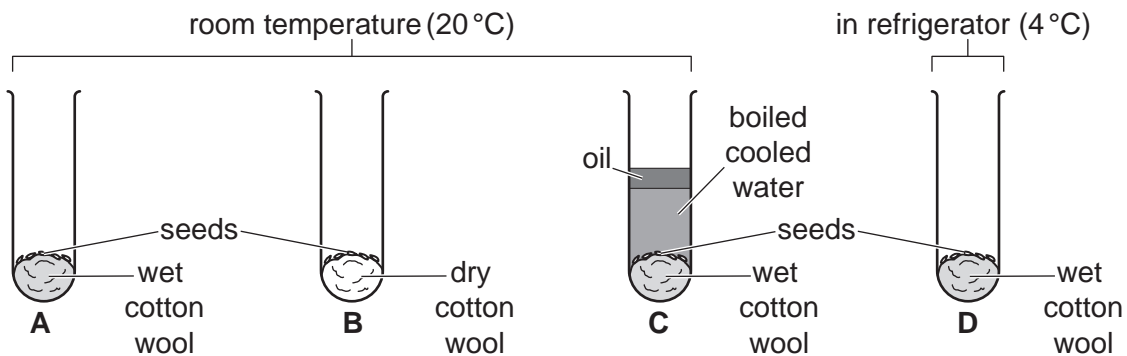


Fig. 10.1

Only the seeds in test-tube **A** germinate.

State why the seeds in test-tubes **B**, **C** and **D** do **not** germinate.

B

.....

C

.....

D

.....

[3]

(b) After germination, the shoots of the new plant grow towards the light.

(i) State the name of this tropic response.

..... [1]

(ii) Explain why plants grow towards light.

.....

.....

..... [2]

(c) Table 10.1 shows some of the names of the different layers of a leaf.

Complete Table 10.1.

Table 10.1

upper surface ↑ lower surface	
	upper epidermis
	spongy mesophyll
	lower epidermis

[2]

[Total: 8]

- 11 (a) A student investigates the reaction between magnesium and dilute sulfuric acid.

During the reaction, hydrogen gas and a salt are made.

- (i) Complete the word equation for this reaction.

sulfuric acid + → + [2]

- (ii) The reaction is exothermic.

Describe **two** observations which show that a chemical reaction occurs between magnesium and dilute sulfuric acid.

.....
 [2]

- (iii) The hydrogen made in the reaction exists as molecules of hydrogen, H₂.

Draw a dot-and-cross diagram to show the bonding in a molecule of hydrogen, H₂.

[2]

- (b) The formula of sulfuric acid is H₂SO₄.

- (i) State the number of different elements shown in this formula.

..... [1]

- (ii) State the total number of atoms shown in this formula.

..... [1]

(c) Magnesium is a metal.

(i) Describe **two** physical properties of metals.

1

2

[2]

(ii) Table 11.1 shows the percentage composition of a magnesium alloy.

Table 11.1

element	percentage by mass in the alloy / %
aluminium	3.0
magnesium	
zinc	1.0

Calculate the mass of magnesium contained in 50 kg of the alloy.

Show your working.

mass of magnesium = kg [2]

[Total: 12]

12 (a) A cyclist is riding a bicycle around a circular track.

The length of the track is 400m.

The cyclist completes five laps of the track.

The time taken for each lap is measured and recorded in Table 12.1.

Table 12.1

lap	time/s
1	35.3
2	34.7
3	37.2
4	35.0
5	34.3

(i) Calculate the average time for **one** lap.

average time for one lap = s [1]

(ii) The air in the tyres of the bicycle warms up during the ride.

Describe how the motion of the molecules of the gas in the tyres changes during the ride.

.....
 [1]

(iii) Select the correct word from the list to complete each sentence.

solids liquids gases

..... have **no** definite shape or volume.

..... have a definite volume but take the shape of the container.

[1]

(b) Fig. 12.1 shows a cyclist near a road junction.

A car driver at the junction can see the reflection of the cyclist in a plane mirror.

The ray of light shown allows the car driver to see the cyclist approaching the junction.

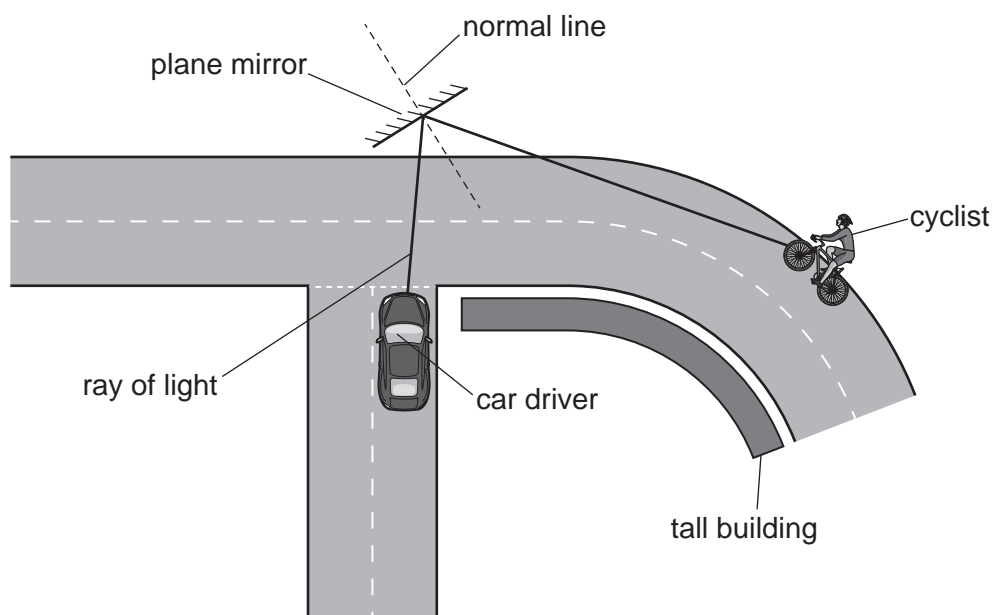


Fig. 12.1

- (i) On Fig. 12.1, draw an arrow on the ray of light to show the direction of travel of the ray of light. [1]
- (ii) On Fig. 12.1, label the angle of incidence with the letter i . [1]
- (c) The bicycle is left outside on a sunny day. Energy from the Sun heats the metal frame of the bicycle.
- (i) State the method of energy transfer between the Sun and the Earth.
 [1]
- (ii) State the method of energy transfer through the frame of the bicycle.
 [1]
- (iii) Describe a simple way of testing whether the frame of the bicycle is made from steel or from aluminium.

 [2]

[Total: 9]

BLANK PAGE

Permission to reproduce items where third-party owned material protected by copyright is included has been sought and cleared where possible. Every reasonable effort has been made by the publisher (UCLES) to trace copyright holders, but if any items requiring clearance have unwittingly been included, the publisher will be pleased to make amends at the earliest possible opportunity.

To avoid the issue of disclosure of answer-related information to candidates, all copyright acknowledgements are reproduced online in the Cambridge Assessment International Education Copyright Acknowledgements Booklet. This is produced for each series of examinations and is freely available to download at www.cambridgeinternational.org after the live examination series.

Cambridge Assessment International Education is part of Cambridge Assessment. Cambridge Assessment is the brand name of the University of Cambridge Local Examinations Syndicate (UCLES), which is a department of the University of Cambridge.

