



Cambridge IGCSE™ (9–1)

CANDIDATE
NAME

CENTRE
NUMBER

--	--	--	--	--

CANDIDATE
NUMBER

--	--	--	--



CO-ORDINATED SCIENCES

0973/31

Paper 3 Theory (Core)

May/June 2023

2 hours

You must answer on the question paper.

No additional materials are needed.

INSTRUCTIONS

- Answer **all** questions.
- Use a black or dark blue pen. You may use an HB pencil for any diagrams or graphs.
- Write your name, centre number and candidate number in the boxes at the top of the page.
- Write your answer to each question in the space provided.
- Do **not** use an erasable pen or correction fluid.
- Do **not** write on any bar codes.
- You may use a calculator.
- You should show all your working and use appropriate units.

INFORMATION

- The total mark for this paper is 120.
- The number of marks for each question or part question is shown in brackets [].
- The Periodic Table is printed in the question paper.

This document has **32** pages. Any blank pages are indicated.

1 (a) Fig. 1.1 is a diagram of the alimentary canal and associated organs.

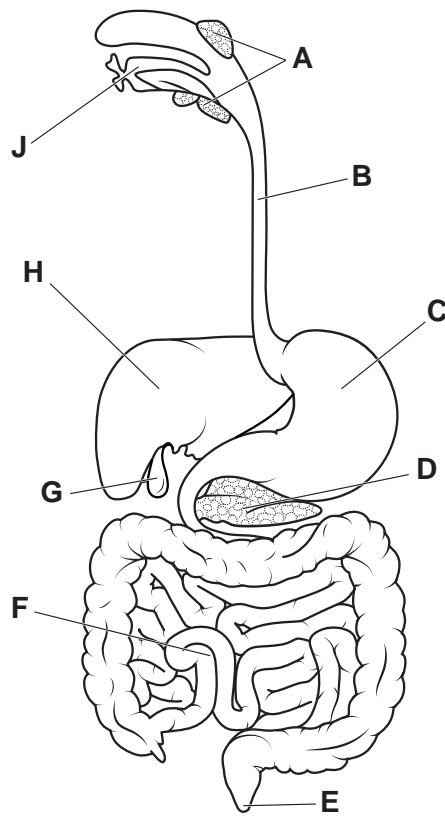


Fig. 1.1

(i) State the letter in Fig. 1.1 that identifies where:

most absorption occurs

egestion occurs

ingestion occurs

saliva is produced.

[4]

(ii) State the names of the parts labelled **D** and **H** in Fig. 1.1.

D

H

[2]

(iii) Complete the sentence to define the term digestion.

Digestion is the of large, insoluble food molecules into small, water-soluble molecules using mechanical and processes.

[2]

3

(b) The boxes on the left show some nutrients.

The boxes on the right show some principal sources of nutrients.

Draw **one** straight line from each nutrient to its principal source.

nutrient	principal source
carbohydrate	tuna fish
vitamin C	grapefruit
	rice

[2]

(c) Describe the dietary importance of iron.

.....
..... [1]

[Total: 11]

- 2 (a) (i) An iron nail rusts when it is exposed to damp air.

Rusting involves the oxidation of iron.

State what is meant by the term oxidation.

.....
..... [1]

- (ii) Describe **one** method used to prevent the iron nail from rusting.

Explain how this method prevents the iron nail from rusting.

method

.....

explanation

..... [2]

- (b) Complete the sentence.

Metal ores are a finite resource and therefore, metals need to be [1]

- (c) Iron is a transition element.

Put a tick (✓) in the boxes next to **all** the correct statements about iron.

iron acts as a catalyst

iron forms coloured compounds

iron has a low density

iron has a low melting point

iron is brown in colour

[2]

(d) Steel is an alloy of iron.

(i) Suggest why steel is used for making cars instead of pure iron.

.....
 [1]

(ii) Table 2.1 shows the percentage composition of stainless steel.

Table 2.1

element	percentage by mass in the alloy /%
carbon	1
chromium	18
iron	
manganese	2
molybdenum	2
nickel	12

Calculate the mass of iron contained in 80 kg of stainless steel.

mass of iron = kg [2]

(e) Iron is malleable.

State the meaning of malleable.

.....
 [1]

[Total: 10]

- 3 (a) (i) Fig. 3.1 shows a skier standing on the snow.



Fig. 3.1

When she stands on the snow without her skis, she sinks into the snow.

When she wears her skis, she can stand on the snow without sinking.

Explain these observations.

.....

 [2]

- (ii) The skier makes a sound near a high wall.

The sound travels through the air as a wave.

The skier hears an echo.

State what happens to the sound wave at the high wall to cause an echo to be heard.

..... [1]

- (b) Fig. 3.2 shows the forces acting on the skier on level snow when she is travelling in a snowmobile.

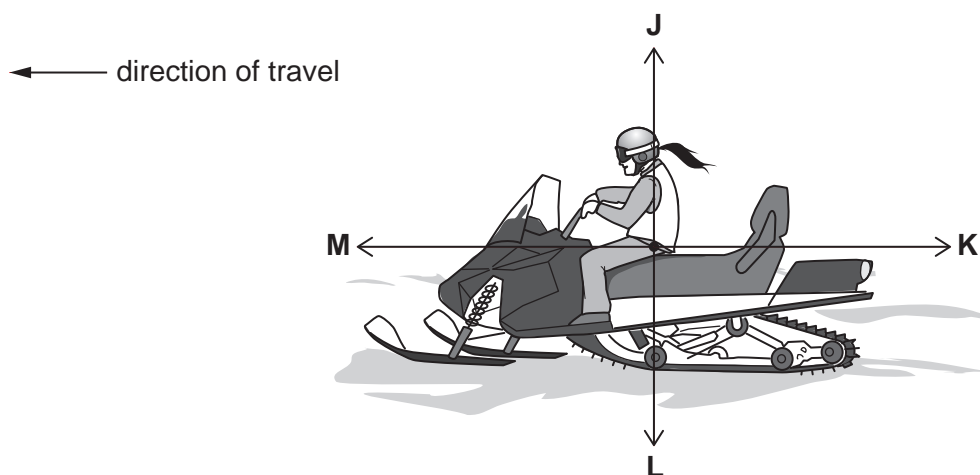


Fig. 3.2

- (i) State which force, **J**, **K**, **L** or **M**, is the weight of the snowmobile and skier.
- [1]
- (ii) State which force, **J**, **K**, **L** or **M**, is the friction force acting on the snowmobile.

..... [1]

(c) Fig. 3.3 shows the speed–time graph for the motion of the skier.

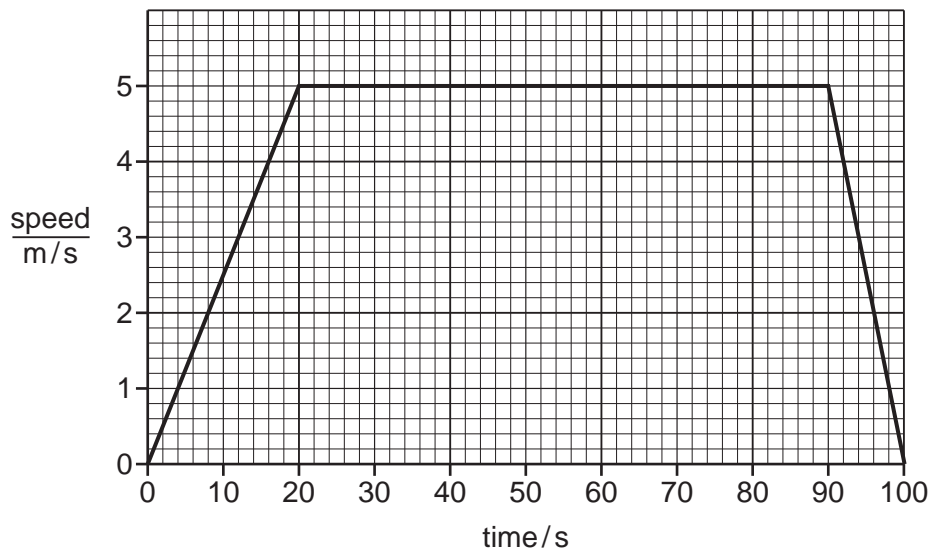


Fig. 3.3

(i) State the maximum speed of the skier.

speed = m/s [1]

(ii) The skier is accelerating during the first 20s of her journey.

Describe how the graph shows that the skier is accelerating.

.....
 [1]

(iii) Show that the distance travelled by the skier during the first 20s is 50 m.

[1]

(d) The skier is exposed to ultraviolet radiation from the Sun.

Ultraviolet radiation is a form of ionising radiation.

Describe **one** danger to humans of being exposed to large quantities of ultraviolet radiation.

.....
 [1]

[Total: 9]

BLANK PAGE

4 (a) Fig. 4.1 shows some different sources of pollution of the water in seas.

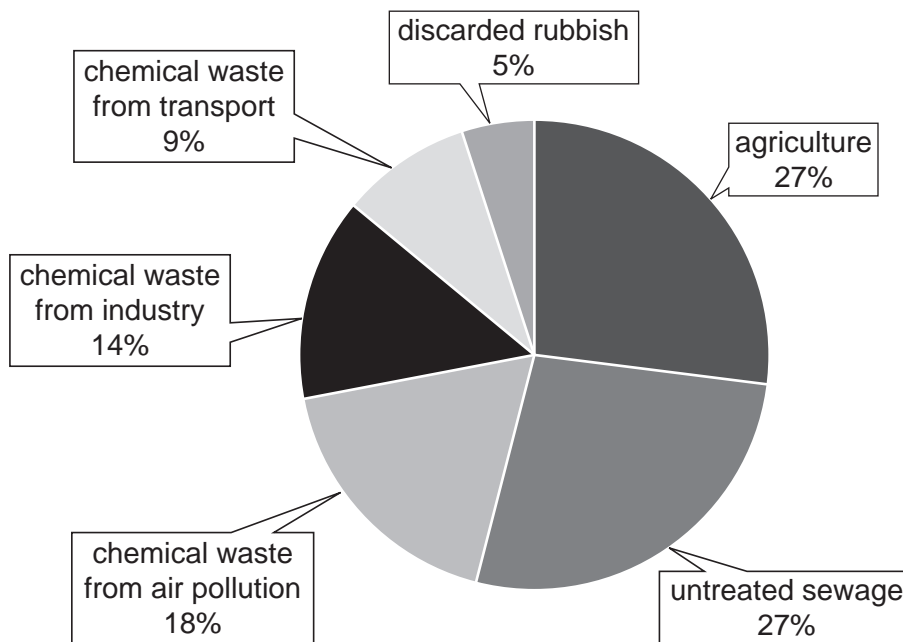


Fig. 4.1

(i) Complete the sentences using information from Fig. 4.1.

The two biggest sources of pollution are and

The total percentage of pollution caused by chemical waste is %.

The percentage of pollution caused by discarded rubbish is %.

[3]

(ii) Suggest **one** negative impact of untreated sewage on humans.

.....
..... [1]

(b) Polluted water affects the growth of plants.

A scientist measures the height of two pea plants, **A** and **B**, for one month.

Plant **A** is given unpolluted water.

Plant **B** is given polluted water.

Table 4.1 shows the increase in height for each plant.

Table 4.1

plant	type of water	increase in height/cm
A	unpolluted	29
B	polluted	11

(i) Calculate the difference in increase in height between plant **A** and plant **B** from Table 4.1.

..... cm [1]

(ii) Water is needed for germination of seeds.

State two other environmental conditions required for germination.

1

2

[2]

[Total: 7]

- 5 (a) Substances are separated from mixtures of substances using different methods.

Draw **one** straight line from each substance to the correct method of separating it from the mixture.

One line has been drawn for you.

substance separated from the mixture

method of separation

blue dye from black ink	chromatography
gas oil from petroleum	crystallisation
salt from salt water	distillation
sand from sand and water	filtration
water from salt water	fractional distillation

[3]

- (b) One reason for separating mixtures is to purify substances.

Explain the importance of purity in the manufacture of substances used in food additives.

.....
 [1]

- (c) The element lead is obtained from the compound lead(II) bromide by electrolysis.

- (i) Describe the difference between an element and a compound.

.....

 [1]

- (ii) Complete the sentences to describe the electrolysis of lead(II) bromide.

Electrolysis is the breakdown of molten lead(II) bromide

by the passage of

The gas released at the positive electrode is and

..... is formed at the negative electrode.

The negative electrode is called the

[3]

(d) A student reacts dilute hydrochloric acid with four metals.


The student's observations are shown in Table 5.1.

Table 5.1

metal	observation
calcium	reacts very quickly
copper	does not react
lead	reacts very slowly
magnesium	reacts quickly

Place the four metals in order of their reactivity from the most reactive to the least reactive.

..... most reactive
.....
.....
..... least reactive



[2]

[Total: 10]

- 6 (a) (i) Complete the sentences to describe the energy changes that occur during the generation of electricity in a nuclear power station.

Nuclear fission releases energy which heats up water in a boiler.

When the turbine and generator are turning, they have energy.

The generator produces energy. [3]

- (ii) Nuclear fission occurs in the nuclear power station.

State what happens to the nucleus of an atom during nuclear fission.

..... [1]

- (b) The radioactive decay of plutonium-239 produces an isotope of uranium, uranium-235.



- (i) State the charge on an α -particle.

..... [1]

- (ii) Describe how the numbers of protons and neutrons change in the nucleus of a plutonium-239 atom when it emits an α -particle.

protons

neutrons

[2]

- (iii) The half-life of plutonium-239 is 24 000 years.

A sample of nuclear fuel contains 6.0 g of plutonium-239.

Calculate the mass of plutonium-239 remaining after 72 000 years.

mass = g [3]

[Total: 10]

BLANK PAGE

7 (a) Fig. 7.1 is a drawing of a cross-section of a leaf.

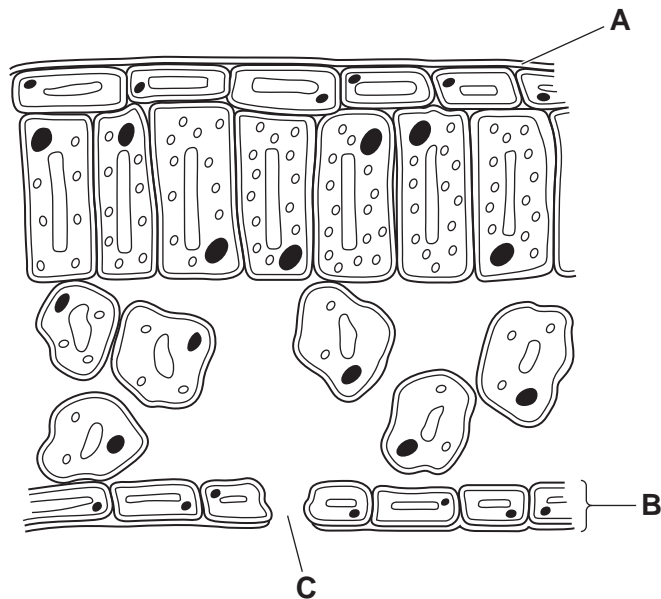


Fig. 7.1

State the names of the parts labelled **A**, **B** and **C** in Fig. 7.1.

- A
- B
- C

[3]

(b) Fig. 7.2 is a cell from the palisade mesophyll layer of the leaf.

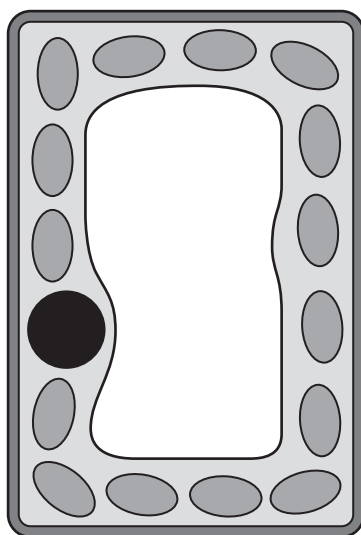


Fig. 7.2

On Fig. 7.2:

- Identify the part where photosynthesis takes place with a label line and the correct name.
- Identify the part that contains the genetic material with a label line and the letter **X**.

[3]

(c) Describe the process of photosynthesis.

.....
.....
.....
.....
..... [3]

(d) Plants need nitrate ions to make an important substance.

Circle the name of this substance.

- amino acid fatty acid starch
- glycogen glycerol

[1]

(e) State the name of the cell that absorbs mineral ions in a plant.

..... [1]

(f) State the name of the vessels that transport mineral ions in the stem.

..... [1]

[Total: 12]

- 8 (a) (i) Complete the dot-and-cross diagram in Fig. 8.1 to show the bonding in a molecule of methane, CH₄.

Show only the outer-shell electrons.

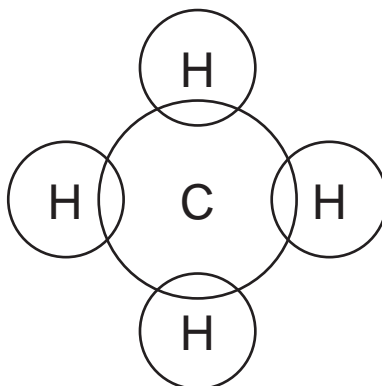


Fig. 8.1

[2]

- (ii) State the name of the type of chemical bonding present in a molecule of methane.

Explain your answer.

type of chemical bonding

explanation

.....

[2]

- (b) Complete the word equation for the complete combustion of methane.

methane + → + [2]

- (c) (i) State the name of the pollutant gas produced during the **incomplete** combustion of methane.

..... [1]

- (ii) State **one** adverse effect of the gas you have named in (c)(i) on the health of humans.

..... [1]

[Total: 8]

BLANK PAGE

9 Fig. 9.1 shows a washing machine.





Fig. 9.1

(a) (i) The washing machine uses:

- a heater to heat the water
- a motor to pump the hot water through the machine.

The motor and the heater are connected in a parallel circuit.

The motor and the heater are each operated by separate switches.

The circuit symbol for a heater is 


The circuit symbol for a motor is 

Fig. 9.2 shows an incomplete circuit diagram for the washing machine.

Complete the circuit diagram on Fig. 9.2.

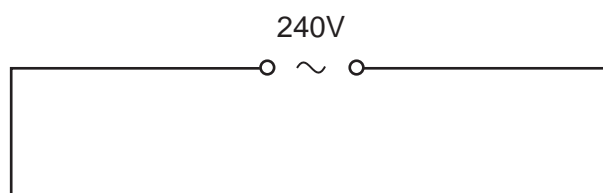


Fig. 9.2

[3]

- (ii) The resistance of the heater is $20\ \Omega$.

The resistance of the motor is $80\ \Omega$.

Identify from the list the most likely value for the combined resistance of the heater and motor connected in parallel.

Explain your answer.

$16\ \Omega$ $20\ \Omega$ $50\ \Omega$ $80\ \Omega$ $100\ \Omega$

combined resistance = Ω

explanation

..... [2]

- (iii) The current in the wires of the electrical circuit is a flow of charged particles.

State the name of the particles that flow in the wires of the electrical circuit.

..... [1]

- (iv) The current-carrying coil in the motor experiences a turning effect.

This turning effect can be increased by increasing the number of turns on the coil.

State two other ways to **increase** this turning effect.

1

2

[2]

(b) Inside the washing machine, some of the water evaporates.

During evaporation, water changes state from a liquid to a gas.

(i) Complete the diagrams in Fig. 9.3 to show the arrangement and separation of molecules in a liquid and in a gas.

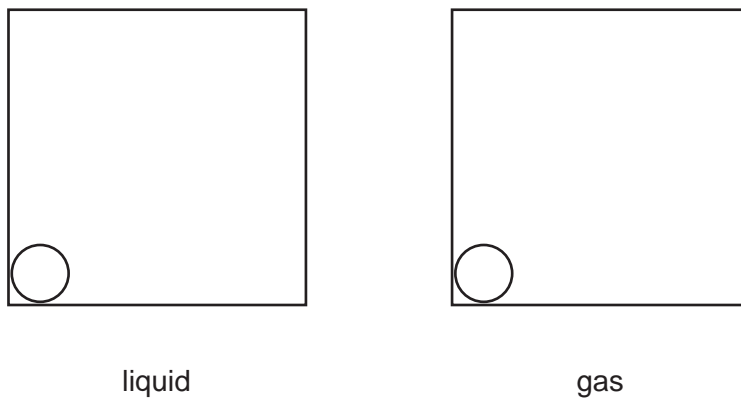


Fig. 9.3

[2]

(ii) During evaporation, the water does not boil.

State the boiling point of water.

..... °C [1]

[Total: 11]

BLANK PAGE

10 (a) A person touches a hot pan and instantly removes their hand.

This is a reflex action.

The reflex arc is shown in Fig. 10.1.

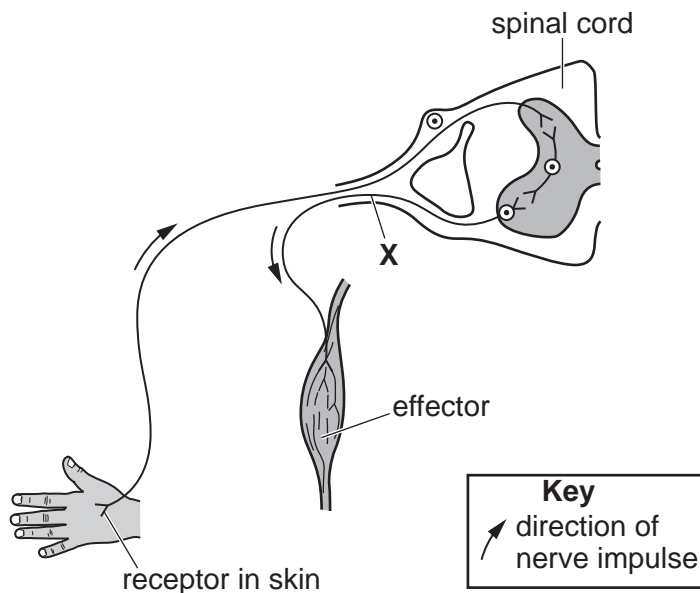


Fig. 10.1

(i) State the names of the stimulus and the effector in this reflex arc.

stimulus

effector

[2]

(ii) State the name of the neurone labelled X in Fig. 10.1.

..... [1]

(iii) The spinal cord is one part of the central nervous system.

State the name of the other part of the central nervous system.

..... [1]

(b) Neurones are the longest cells in the body.

One neurone measures 1.5 m in length.

One plant cell measures 0.1 mm in length.

Calculate how many times longer the neurone is than the plant cell.

..... [2]

(c) Hormones and nerve impulses both carry information around the body.

Identify if each statement is about **hormones** or **nerve impulses**.

They are carried in the blood.

They are produced by glands.

They are electrical signals.

[2]

(d) Adrenaline is a hormone released in 'fight or flight' situations.

Describe two effects of adrenaline on the body.

1

2

[2]

[Total: 10]

BLANK PAGE

11 (a) Limestone is insoluble in water.

Limestone is mixed with water and poured through filter paper.

(i) Explain how filter paper separates limestone from water.

.....
.....
..... [2]

(ii) The filtrate is tested to find its pH number.

One way of finding the pH number is to use a pH meter.

Describe **one** other way to find the pH number of the filtrate.

.....
.....
..... [2]

(b) Limestone is sometimes added to soil to reduce soil acidity.

Limestone is mainly calcium carbonate which reacts with acid.

(i) This soil treatment adds carbon dioxide to the atmosphere.

State **one** other reason why the amount of carbon dioxide in the atmosphere is increasing.

..... [1]

(ii) Describe how an increase in carbon dioxide in the atmosphere affects the environment.

.....
..... [1]

- (c) A student investigates the rate of reaction between excess dilute hydrochloric acid and a piece of limestone.

Fig. 11.1 shows the apparatus used.

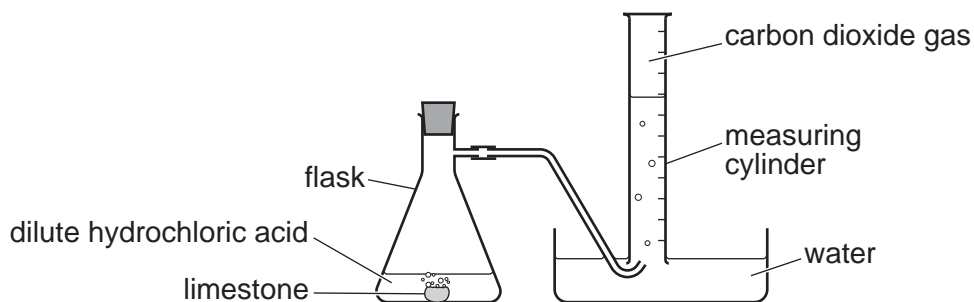


Fig. 11.1

The student measures the volume of carbon dioxide in the measuring cylinder every 20 seconds for 280 seconds.

A graph of the student's results is shown in Fig. 11.2.

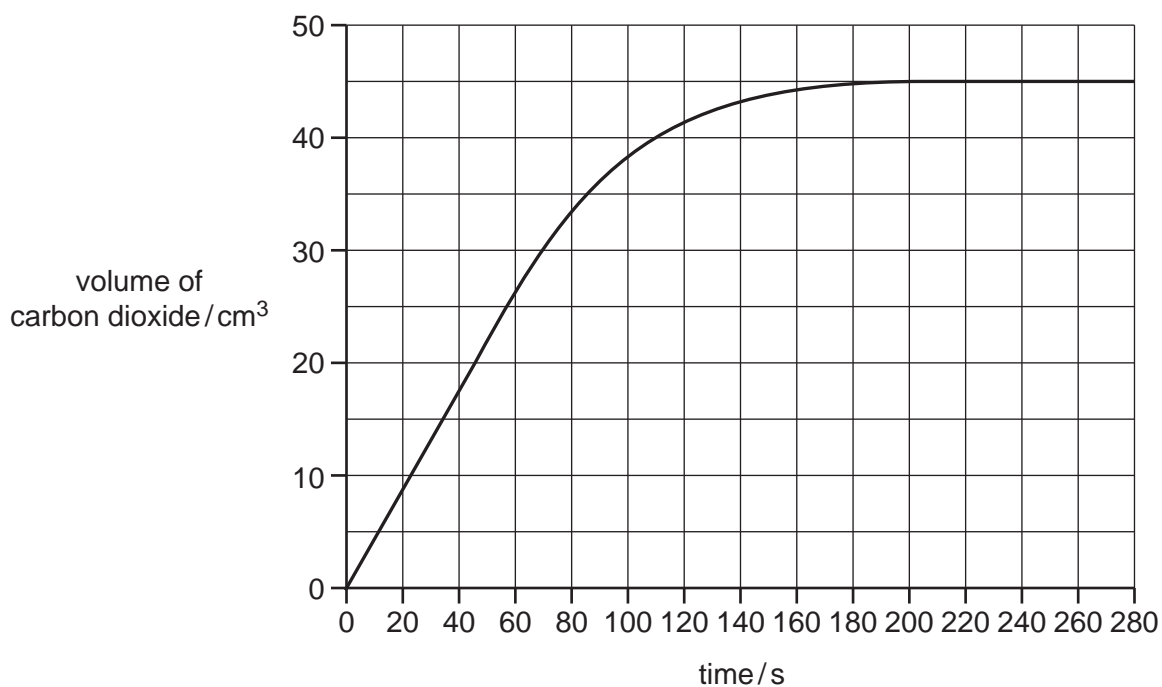


Fig. 11.2

- (i) Use Fig. 11.2 to find the total volume of carbon dioxide released.

volume = cm³ [1]

- (ii) Use Fig. 11.2 to find the time when the reaction finished.

time = s [1]

- (iii) The student repeats the experiment at a **higher** temperature.

On Fig. 11.2, sketch a line to show the results.

[2]

(iv) Increasing the temperature increases the rate of reaction.

State two other ways the student can increase the rate of the reaction.

1

2

[2]

[Total: 12]

12 (a) The mass of the Sun is 1.97×10^{30} kg.

The average density of the Sun is 1410 kg/m^3 .

Calculate the volume of the Sun.

volume = m^3 [2]

(b) The Sun is made of very hot gas.

(i) Suggest the main method of thermal energy transfer from the inside of the Sun to the surface of the Sun.

..... [1]

(ii) State the main method of energy transfer that occurs when infrared waves travel from the Sun to the Earth through space.

..... [1]

(iii) Sound energy is produced by the Sun.

Explain why we are unable to hear this sound on Earth.

.....
 [1]

(c) (i) Fig. 12.1 shows an incomplete electromagnetic spectrum.

Write infrared radiation in its correct place.

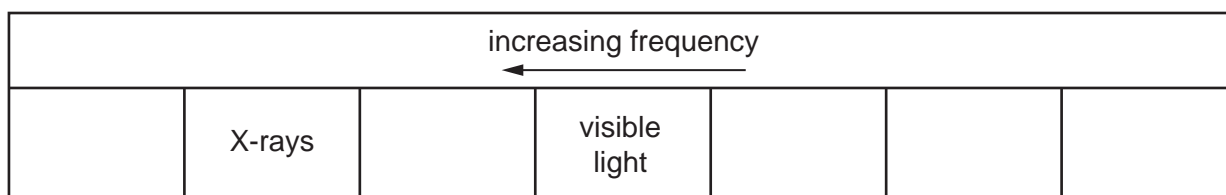


Fig. 12.1

[1]

(ii) State the electromagnetic radiation which has the highest frequency.

..... [1]

(iii) Explain why it takes the same time for infrared and visible light to travel from the Sun to the Earth.

..... [1]

(d) Fig. 12.2 shows a sound wave.

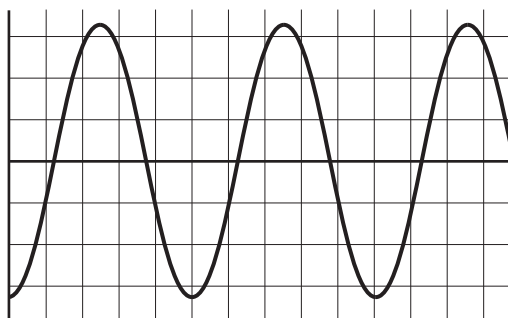


Fig. 12.2

- (i) On Fig. 12.2, label the amplitude of the wave with a double-headed arrow (\leftrightarrow) or (\updownarrow) and the letter **A**. [1]
- (ii) On Fig. 12.2, label the wavelength of one wave with a double-headed arrow (\leftrightarrow) or (\updownarrow) and the letter **W**. [1]

[Total: 10]

Permission to reproduce items where third-party owned material protected by copyright is included has been sought and cleared where possible. Every reasonable effort has been made by the publisher (UCLES) to trace copyright holders, but if any items requiring clearance have unwittingly been included, the publisher will be pleased to make amends at the earliest possible opportunity.

To avoid the issue of disclosure of answer-related information to candidates, all copyright acknowledgements are reproduced online in the Cambridge Assessment International Education Copyright Acknowledgements Booklet. This is produced for each series of examinations and is freely available to download at www.cambridgeinternational.org after the live examination series.

Cambridge Assessment International Education is part of Cambridge Assessment. Cambridge Assessment is the brand name of the University of Cambridge Local Examinations Syndicate (UCLES), which is a department of the University of Cambridge.

The Periodic Table of Elements

		Group																																																																																																																																																	
I	II	III	IV	V	VI	VII	VIII																																																																																																																																												
3 Li lithium 7	4 Be beryllium 9	1 H hydrogen 1	5 B boron 11	6 C carbon 12	7 N nitrogen 14	8 O oxygen 16	9 F fluorine 19	10 Ne neon 20																																																																																																																																											
11 Na sodium 23	12 Mg magnesium 24	<table border="1"> <thead> <tr> <th colspan="2">Key</th> </tr> <tr> <th>atomic number</th> <th>atomic symbol</th> </tr> <tr> <th>name</th> <th>relative atomic mass</th> </tr> </thead> <tbody> <tr> <td>26 Fe iron 56</td> <td>29 Cu copper 64</td> </tr> <tr> <td>27 Co cobalt 59</td> <td>47 Ag silver 108</td> </tr> <tr> <td>28 Ni nickel 59</td> <td>48 Cd cadmium 112</td> </tr> <tr> <td>29 Zn zinc 65</td> <td>80 Hg mercury 201</td> </tr> <tr> <td>30 Ga gallium 70</td> <td>81 Tl thallium 204</td> </tr> <tr> <td>31 Ge germanium 73</td> <td>82 Pb lead 207</td> </tr> <tr> <td>32 As arsenic 75</td> <td>83 Bi bismuth 209</td> </tr> <tr> <td>33 Se selenium 79</td> <td>84 Po polonium —</td> </tr> <tr> <td>34 Br bromine 80</td> <td>85 At astatine —</td> </tr> <tr> <td>35 Kr krypton 84</td> <td>86 Rn radon —</td> </tr> <tr> <td>36 Xe xenon 131</td> <td></td> </tr> <tr> <td>37 Rb rubidium 85</td> <td></td> </tr> <tr> <td>38 Sr strontium 88</td> <td></td> </tr> <tr> <td>39 Y yttrium 89</td> <td></td> </tr> <tr> <td>40 Zr zirconium 91</td> <td></td> </tr> <tr> <td>41 Nb niobium 93</td> <td></td> </tr> <tr> <td>42 Mo molybdenum 96</td> <td></td> </tr> <tr> <td>43 Tc technetium —</td> <td></td> </tr> <tr> <td>44 Ru ruthenium 101</td> <td></td> </tr> <tr> <td>45 Rh rhodium 103</td> <td></td> </tr> <tr> <td>46 Pd palladium 106</td> <td></td> </tr> <tr> <td>47 Ag silver 108</td> <td></td> </tr> <tr> <td>48 Cd cadmium 112</td> <td></td> </tr> <tr> <td>49 In indium 115</td> <td></td> </tr> <tr> <td>50 Sn tin 119</td> <td></td> </tr> <tr> <td>51 Sb antimony 122</td> <td></td> </tr> <tr> <td>52 Te tellurium 128</td> <td></td> </tr> <tr> <td>53 I iodine 127</td> <td></td> </tr> <tr> <td>54 Xe xenon 131</td> <td></td> </tr> <tr> <td>55 Cs caesium 133</td> <td></td> </tr> <tr> <td>56 Ba barium 137</td> <td></td> </tr> <tr> <td>57–71 lanthanoids</td> <td></td> </tr> <tr> <td>72 Hf hafnium 178</td> <td></td> </tr> <tr> <td>73 Ta tantalum 181</td> <td></td> </tr> <tr> <td>74 W tungsten 184</td> <td></td> </tr> <tr> <td>75 Re rhenium 186</td> <td></td> </tr> <tr> <td>76 Os osmium 190</td> <td></td> </tr> <tr> <td>77 Ir iridium 192</td> <td></td> </tr> <tr> <td>78 Pt platinum 195</td> <td></td> </tr> <tr> <td>79 Au gold 197</td> <td></td> </tr> <tr> <td>80 Hg mercury 201</td> <td></td> </tr> <tr> <td>81 Tl thallium 204</td> <td></td> </tr> <tr> <td>82 Pb lead 207</td> <td></td> </tr> <tr> <td>83 Bi bismuth 209</td> <td></td> </tr> <tr> <td>84 Po polonium —</td> <td></td> </tr> <tr> <td>85 At astatine —</td> <td></td> </tr> <tr> <td>86 Rn radon —</td> <td></td> </tr> <tr> <td>87 Fr francium —</td> <td></td> </tr> <tr> <td>88 Ra radium —</td> <td></td> </tr> <tr> <td>89–103 actinoids</td> <td></td> </tr> <tr> <td>104 Rf rutherfordium —</td> <td></td> </tr> <tr> <td>105 Db dubnium —</td> <td></td> </tr> <tr> <td>106 Sg seaborgium —</td> <td></td> </tr> <tr> <td>107 Bh bohrium —</td> <td></td> </tr> <tr> <td>108 Hs hassium —</td> <td></td> </tr> <tr> <td>109 Mt meitnerium —</td> <td></td> </tr> <tr> <td>110 Ds darmstadtium —</td> <td></td> </tr> <tr> <td>111 Rg roentgenium —</td> <td></td> </tr> <tr> <td>112 Cn copernicium —</td> <td></td> </tr> <tr> <td>113 Nh nihonium —</td> <td></td> </tr> <tr> <td>114 Fl flerovium —</td> <td></td> </tr> <tr> <td>115 Mc moscovium —</td> <td></td> </tr> <tr> <td>116 Lv livermorium —</td> <td></td> </tr> <tr> <td>117 Ts tennessine —</td> <td></td> </tr> <tr> <td>118 Og oganesson —</td> <td></td> </tr> </tbody> </table>										Key		atomic number	atomic symbol	name	relative atomic mass	26 Fe iron 56	29 Cu copper 64	27 Co cobalt 59	47 Ag silver 108	28 Ni nickel 59	48 Cd cadmium 112	29 Zn zinc 65	80 Hg mercury 201	30 Ga gallium 70	81 Tl thallium 204	31 Ge germanium 73	82 Pb lead 207	32 As arsenic 75	83 Bi bismuth 209	33 Se selenium 79	84 Po polonium —	34 Br bromine 80	85 At astatine —	35 Kr krypton 84	86 Rn radon —	36 Xe xenon 131		37 Rb rubidium 85		38 Sr strontium 88		39 Y yttrium 89		40 Zr zirconium 91		41 Nb niobium 93		42 Mo molybdenum 96		43 Tc technetium —		44 Ru ruthenium 101		45 Rh rhodium 103		46 Pd palladium 106		47 Ag silver 108		48 Cd cadmium 112		49 In indium 115		50 Sn tin 119		51 Sb antimony 122		52 Te tellurium 128		53 I iodine 127		54 Xe xenon 131		55 Cs caesium 133		56 Ba barium 137		57–71 lanthanoids		72 Hf hafnium 178		73 Ta tantalum 181		74 W tungsten 184		75 Re rhenium 186		76 Os osmium 190		77 Ir iridium 192		78 Pt platinum 195		79 Au gold 197		80 Hg mercury 201		81 Tl thallium 204		82 Pb lead 207		83 Bi bismuth 209		84 Po polonium —		85 At astatine —		86 Rn radon —		87 Fr francium —		88 Ra radium —		89–103 actinoids		104 Rf rutherfordium —		105 Db dubnium —		106 Sg seaborgium —		107 Bh bohrium —		108 Hs hassium —		109 Mt meitnerium —		110 Ds darmstadtium —		111 Rg roentgenium —		112 Cn copernicium —		113 Nh nihonium —		114 Fl flerovium —		115 Mc moscovium —		116 Lv livermorium —		117 Ts tennessine —		118 Og oganesson —	
Key																																																																																																																																																			
atomic number	atomic symbol																																																																																																																																																		
name	relative atomic mass																																																																																																																																																		
26 Fe iron 56	29 Cu copper 64																																																																																																																																																		
27 Co cobalt 59	47 Ag silver 108																																																																																																																																																		
28 Ni nickel 59	48 Cd cadmium 112																																																																																																																																																		
29 Zn zinc 65	80 Hg mercury 201																																																																																																																																																		
30 Ga gallium 70	81 Tl thallium 204																																																																																																																																																		
31 Ge germanium 73	82 Pb lead 207																																																																																																																																																		
32 As arsenic 75	83 Bi bismuth 209																																																																																																																																																		
33 Se selenium 79	84 Po polonium —																																																																																																																																																		
34 Br bromine 80	85 At astatine —																																																																																																																																																		
35 Kr krypton 84	86 Rn radon —																																																																																																																																																		
36 Xe xenon 131																																																																																																																																																			
37 Rb rubidium 85																																																																																																																																																			
38 Sr strontium 88																																																																																																																																																			
39 Y yttrium 89																																																																																																																																																			
40 Zr zirconium 91																																																																																																																																																			
41 Nb niobium 93																																																																																																																																																			
42 Mo molybdenum 96																																																																																																																																																			
43 Tc technetium —																																																																																																																																																			
44 Ru ruthenium 101																																																																																																																																																			
45 Rh rhodium 103																																																																																																																																																			
46 Pd palladium 106																																																																																																																																																			
47 Ag silver 108																																																																																																																																																			
48 Cd cadmium 112																																																																																																																																																			
49 In indium 115																																																																																																																																																			
50 Sn tin 119																																																																																																																																																			
51 Sb antimony 122																																																																																																																																																			
52 Te tellurium 128																																																																																																																																																			
53 I iodine 127																																																																																																																																																			
54 Xe xenon 131																																																																																																																																																			
55 Cs caesium 133																																																																																																																																																			
56 Ba barium 137																																																																																																																																																			
57–71 lanthanoids																																																																																																																																																			
72 Hf hafnium 178																																																																																																																																																			
73 Ta tantalum 181																																																																																																																																																			
74 W tungsten 184																																																																																																																																																			
75 Re rhenium 186																																																																																																																																																			
76 Os osmium 190																																																																																																																																																			
77 Ir iridium 192																																																																																																																																																			
78 Pt platinum 195																																																																																																																																																			
79 Au gold 197																																																																																																																																																			
80 Hg mercury 201																																																																																																																																																			
81 Tl thallium 204																																																																																																																																																			
82 Pb lead 207																																																																																																																																																			
83 Bi bismuth 209																																																																																																																																																			
84 Po polonium —																																																																																																																																																			
85 At astatine —																																																																																																																																																			
86 Rn radon —																																																																																																																																																			
87 Fr francium —																																																																																																																																																			
88 Ra radium —																																																																																																																																																			
89–103 actinoids																																																																																																																																																			
104 Rf rutherfordium —																																																																																																																																																			
105 Db dubnium —																																																																																																																																																			
106 Sg seaborgium —																																																																																																																																																			
107 Bh bohrium —																																																																																																																																																			
108 Hs hassium —																																																																																																																																																			
109 Mt meitnerium —																																																																																																																																																			
110 Ds darmstadtium —																																																																																																																																																			
111 Rg roentgenium —																																																																																																																																																			
112 Cn copernicium —																																																																																																																																																			
113 Nh nihonium —																																																																																																																																																			
114 Fl flerovium —																																																																																																																																																			
115 Mc moscovium —																																																																																																																																																			
116 Lv livermorium —																																																																																																																																																			
117 Ts tennessine —																																																																																																																																																			
118 Og oganesson —																																																																																																																																																			
19 K potassium 39	20 Ca calcium 40	21 Sc scandium 45	22 Ti titanium 48	23 V vanadium 51	24 Cr chromium 52	25 Mn manganese 55	26 Fe iron 56	27 Co cobalt 59	28 Ni nickel 59	29 Cu copper 64	30 Zn zinc 65	31 Ge germanium 73	32 As arsenic 75	33 Se selenium 79	34 Br bromine 80	35 Kr krypton 84	36 Xe xenon 131																																																																																																																																		

57 La lanthanum 139	58 Ce cerium 140	59 Pr praseodymium 141	60 Nd neodymium 144	61 Pm promethium —	62 Sm samarium 150	63 Eu europium 152	64 Gd gadolinium 157	65 Tb terbium 159	66 Dy dysprosium 163	67 Ho holmium 165	68 Er erbium 167	69 Tm thulium 169	70 Yb ytterbium 173	71 Lu lutetium 175
89 Ac actinium —	90 Th thorium 232	91 Pa protactinium 231	92 U uranium 238	93 Np neptunium —	94 Pu plutonium —	95 Am americium —	96 Cm curium —	97 Bk berkelium —	98 Cf californium —	99 Es einsteinium —	100 Fm fermium —	101 Md mendelevium —	102 No nobelium —	103 Lr lawrencium —

lanthanoids

actinoids

The volume of one mole of any gas is 24 dm³ at room temperature and pressure (r.t.p.).