

Q1.An investigation was carried out to show how thinking distance, braking distance and stopping distance are affected by the speed of a car.

The results are shown in the table.

Speed in metres per second	Thinking distance in metres	Braking distance in metres	Stopping distance in metres
10	6	6	12
15	9	14	43
20	12	24	36
25	15	38	53
30	18	55	73

(a) Draw a ring around the correct answer to complete each sentence.

As speed increases, thinking distance

decreases.

increases.

stays the same.

As speed increases, braking distance

decreases.

increases.

stays the same.

(2)

(b) One of the values of stopping distance is incorrect.

Draw a ring around the incorrect value in the table.

Calculate the correct value of this stopping distance.

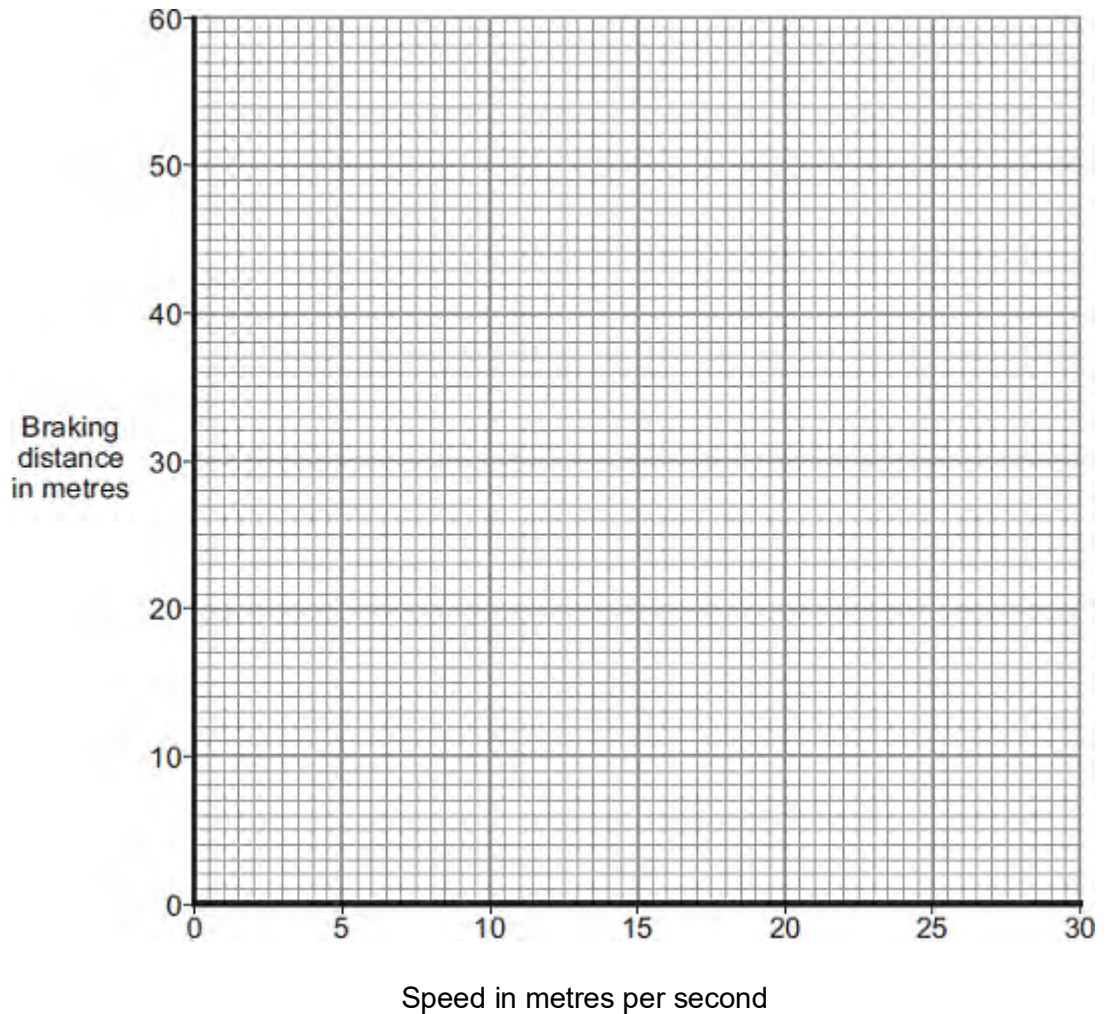
.....

Stopping distance = m

(2)

- (c) (i) Using the results from the table, plot a graph of braking distance against speed.

Draw a line of best fit through your points.



(3)

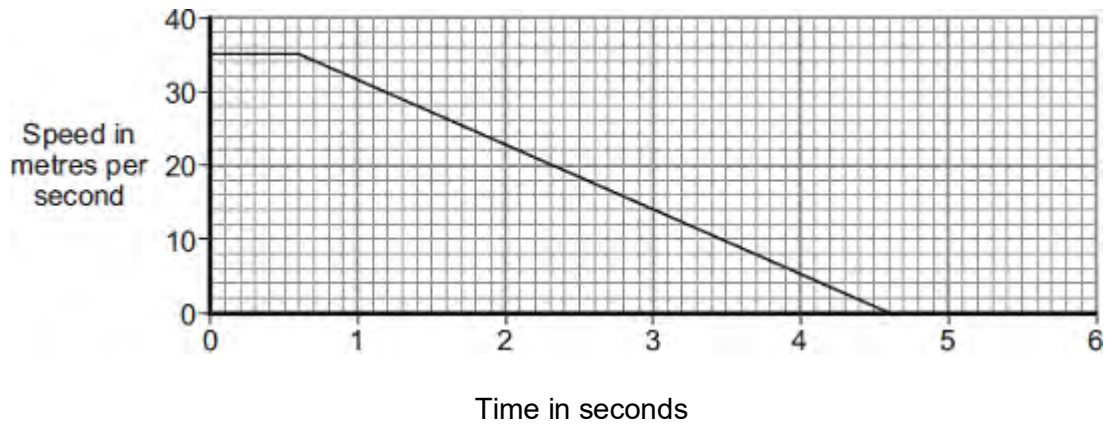
- (ii) Use your graph to determine the braking distance, in metres, at a speed of 22 m / s.

Braking distance = m

(1)

- (d) The speed–time graph for a car is shown below.

While travelling at a speed of 35 m / s, the driver sees an obstacle in the road at time $t = 0$. The driver reacts and brakes to a stop.



- (i) Determine the braking distance.

.....

Braking distance = m

(3)

- (ii) If the driver was driving at 35 m / s on an icy road, the speed–time graph would be different.

Add another line to the speed–time graph above to show the effect of travelling at 35 m / s on an icy road and reacting to an obstacle in the road at time $t = 0$.

(3)

- (e) A car of mass 1200 kg is travelling with a velocity of 35 m / s.

- (i) Calculate the momentum of the car.

Give the unit.

.....

.....

Momentum =

(3)

(ii) The car stops in 4 seconds.

Calculate the average braking force acting on the car during the 4 seconds.

.....

.....

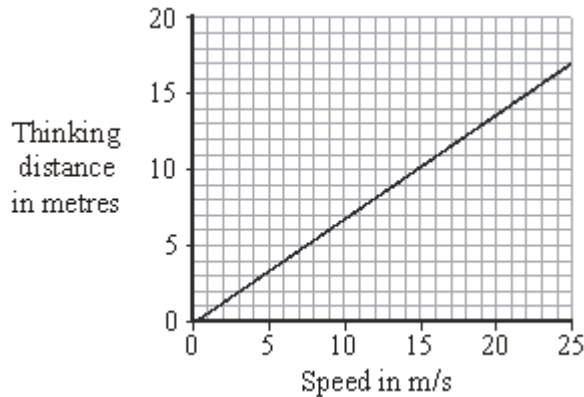
Force = N

(2)

(Total 19 marks)

Q2. (a) A car driver takes a short time to react to an emergency before applying the brakes. The distance the car will travel during this time is called the 'thinking distance'.

The graph shows how the thinking distance of a driver depends on the speed of the car.



(i) What is the connection between thinking distance and speed?

.....

(1)

(ii) Many people drive while they are tired.

Draw a new line on the graph to show how thinking distance changes with speed for a tired driver.

(1)

(iii) The graph was drawn using data given in the Highway Code.

Do you think that the data given in the Highway Code is likely to be reliable?

Draw a ring around your answer.

Yes No Maybe

Give a reason for your answer.

.....

.....

(1)

(b) The distance a car travels once the brakes are applied is called the 'braking distance'.

(i) What is the relationship between thinking distance, braking distance and stopping distance?

.....

(1)

- (ii) State **two** factors that could increase the braking distance of a car at a speed of 15 m/s.

1

2

(2)

(Total 6 marks)

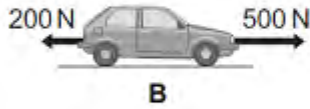
- Q3.** (a) A car is being driven along a straight road. The diagrams, **A**, **B** and **C**, show the horizontal forces acting on the moving car at three different points along the road.

Describe the motion of the car at each of the points, **A**, **B** and **C**.



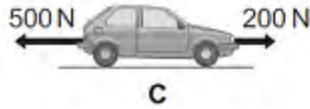
.....

.....



.....

.....




.....

.....

(3)

- (b) The diagram below shows the stopping distance for a family car, in good condition, driven at 22 m/s on a dry road. The stopping distance has two parts.
- (i) Complete the diagram below by adding an appropriate label to the second part of the stopping distance.

The distance the car travels during
the driver's reaction time



.....

.....


(1)

- (ii) State **one** factor that changes both the first part **and** the second part of the stopping distance.

.....

(1)

- (c) The front crumple zone of a car is tested at a road traffic laboratory. This is done by using a remote control device to drive the car into a strong barrier. Electronic sensors are attached to the dummy inside the car.



- (i) At the point of collision, the car exerts a force of 5000 N on the barrier.
State the size and direction of the force exerted by the barrier on the car.

.....
.....

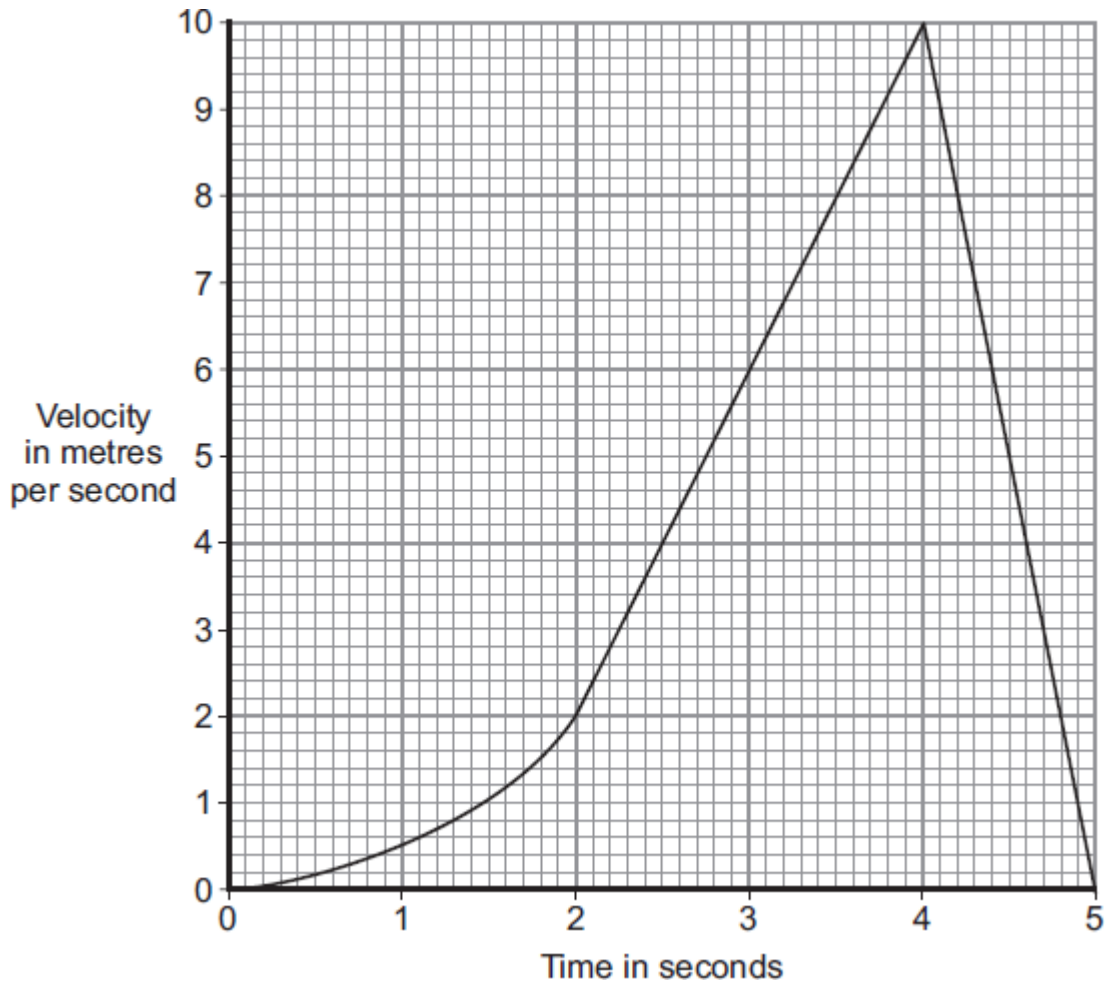
(1)

- (ii) Suggest why the dummy is fitted with electronic sensors.

.....
.....

(1)

- (iii) The graph shows how the velocity of the car changes during the test.



Use the graph to calculate the acceleration of the car just before the collision with the barrier.

Show clearly how you work out your answer, including how you use the graph, and give the unit.

.....

.....


.....

.....

Acceleration =

(3)
(Total 10 marks)

Q4.(a) The diagram shows a car at position X.



The handbrake is released and the car rolls down the slope to Y. The car continues to roll along a horizontal surface before stopping at Z. The brakes have **not** been used during this time.

(i) What type of energy does the car have at X?

.....

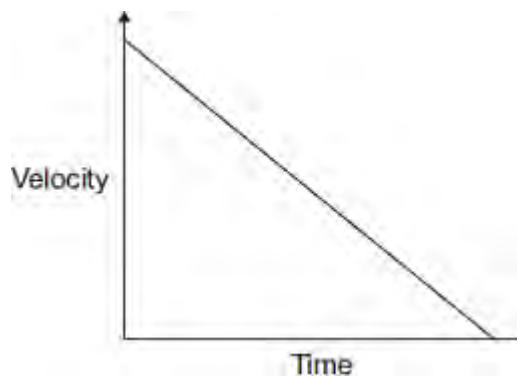
(1)

(ii) What type of energy does the car have at Y?

.....

(1)

(b) The graph shows how the velocity of the car changes with time between Y and Z.



(i) Which feature of the graph represents the negative acceleration between Y and Z?

.....

(1)

- (ii) Which feature of the graph represents the distance travelled between **Y** and **Z**?

.....

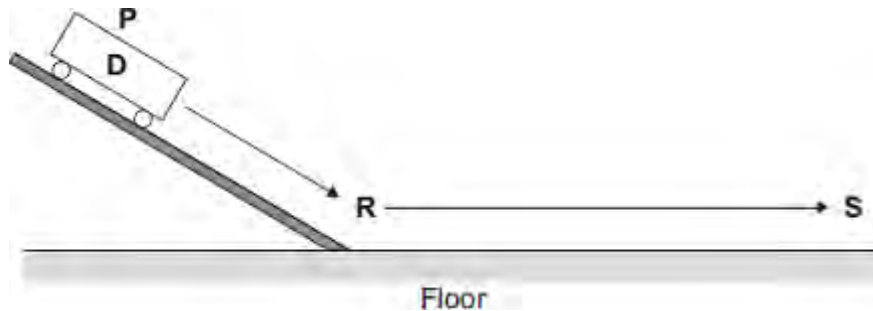
(1)

- (iii) The car starts again at position **X** and rolls down the slope as before. This time the brakes are applied lightly at **Y** until the car stops.

Draw on the graph another straight line to show the motion of the car between **Y** and **Z**.

(2)

- (c) Three students carry out an investigation. The students put trolley **D** at position **P** on a slope. They release the trolley. The trolley rolls down the slope and along the floor as shown in the diagram.



The students measure the distance from **R** at the bottom of the slope to **S** where the trolley stops. They also measure the time taken for the trolley to travel the distance **RS**.

They repeat the investigation with another trolley, **E**.

Their results are shown in the table.

Trolley	Distance RS in centimetres	Time taken in seconds	Average velocity in centimetres per second
D	65	2.1	

E	80	2.6	
----------	----	-----	--

- (i) Calculate the average velocity, in centimetres per second, between **R** and **S** for trolleys **D** and **E**. Write your answers in the table.

.....

.....

.....

(3)

- (ii) Before the investigation, each student made a prediction.

- Student **1** predicted that the two trolleys would travel the same distance.
- Student **2** predicted that the average velocity of the two trolleys would be the same.
- Student **3** predicted that the negative acceleration of the two trolleys would be the same.

Is each prediction correct?

Justify your answers.

.....

.....

.....

.....

.....

.....

(3)

(Total 12 marks)

Q5.A car has an oil leak. Every 5 seconds an oil drop falls from the bottom of the car onto the road.

(a) What force causes the oil drop to fall towards the road?

.....

(1)

(b) The diagram shows the spacing of the oil drops left on the road during part of a journey



Describe the motion of the car as it moves from **A** to **B**.

.....

Explain the reason for your answer.

.....
.....
.....
.....

(3)

(c) When the brakes are applied, a braking force slows down and stops the car.

(i) The size of the braking force affects the braking distance of the car.

State **one** other factor that affects the braking distance of the car.

.....

(1)

(ii) A braking force of 3 kN is used to slow down and stop the car in a distance of 25 m.

Calculate the work done by the brakes to stop the car and give the unit.

.....
.....
.....

Work done =

(3)

(Total 8 marks)