

**OCR**

Oxford Cambridge and RSA

**H**

Friday 24 June 2016 – Morning

**GCSE TWENTY FIRST CENTURY SCIENCE  
PHYSICS A/FURTHER ADDITIONAL SCIENCE A****A183/02** Module P7 (Higher Tier)Candidates answer on the Question Paper.  
A calculator may be used for this paper.**OCR supplied materials:**

None

**Other materials required:**

- Pencil
- Ruler (cm/mm)

**Duration:** 1 hour

Candidate forename		Candidate surname	
-----------------------	--	----------------------	--

Centre number						Candidate number				
---------------	--	--	--	--	--	------------------	--	--	--	--

**INSTRUCTIONS TO CANDIDATES**

- Write your name, centre number and candidate number in the boxes above. Please write clearly and in capital letters.
- Use black ink. HB pencil may be used for graphs and diagrams only.
- Answer **all** the questions.
- Read each question carefully. Make sure you know what you have to do before starting your answer.
- Write your answer to each question in the space provided. If additional space is required, you should use the lined page(s) at the end of this booklet. The question number(s) must be clearly shown.
- Do **not** write in the bar codes.

**INFORMATION FOR CANDIDATES**

- The quality of written communication is assessed in questions marked with a pencil (✎).
- A list of useful relationships is printed on pages **2** and **3**.
- The number of marks is given in brackets [ ] at the end of each question or part question.
- The total number of marks for this paper is **60**.
- This document consists of **16** pages. Any blank pages are indicated.

## TWENTY FIRST CENTURY SCIENCE EQUATIONS

### Useful relationships

#### The Earth in the Universe

$$\text{distance} = \text{wave speed} \times \text{time}$$

$$\text{wave speed} = \text{frequency} \times \text{wavelength}$$

#### Sustainable energy

$$\text{energy transferred} = \text{power} \times \text{time}$$

$$\text{power} = \text{voltage} \times \text{current}$$

$$\text{efficiency} = \frac{\text{energy usefully transferred}}{\text{total energy supplied}} \times 100\%$$

#### Explaining motion

$$\text{speed} = \frac{\text{distance travelled}}{\text{time taken}}$$

$$\text{acceleration} = \frac{\text{change in velocity}}{\text{time taken}}$$

$$\text{momentum} = \text{mass} \times \text{velocity}$$

$$\text{change of momentum} = \text{resultant force} \times \text{time for which it acts}$$

$$\text{work done by a force} = \text{force} \times \text{distance moved in the direction of the force}$$

$$\text{amount of energy transferred} = \text{work done}$$

$$\text{change in gravitational potential energy} = \text{weight} \times \text{vertical height difference}$$

$$\text{kinetic energy} = \frac{1}{2} \times \text{mass} \times [\text{velocity}]^2$$

#### Electric circuits

$$\text{power} = \text{voltage} \times \text{current}$$

$$\text{resistance} = \frac{\text{voltage}}{\text{current}}$$

$$\frac{\text{voltage across primary coil}}{\text{voltage across secondary coil}} = \frac{\text{number of turns in primary coil}}{\text{number of turns in secondary coil}}$$

#### Radioactive materials

$$\text{energy} = \text{mass} \times [\text{speed of light in a vacuum}]^2$$

**Observing the Universe**

$$\text{lens power} = \frac{1}{\text{focal length}}$$

$$\text{magnification} = \frac{\text{focal length of objective lens}}{\text{focal length of eyepiece lens}}$$

$$\text{speed of recession} = \text{Hubble constant} \times \text{distance}$$

$$\text{pressure} \times \text{volume} = \text{constant}$$

$$\frac{\text{pressure}}{\text{temperature}} = \text{constant}$$

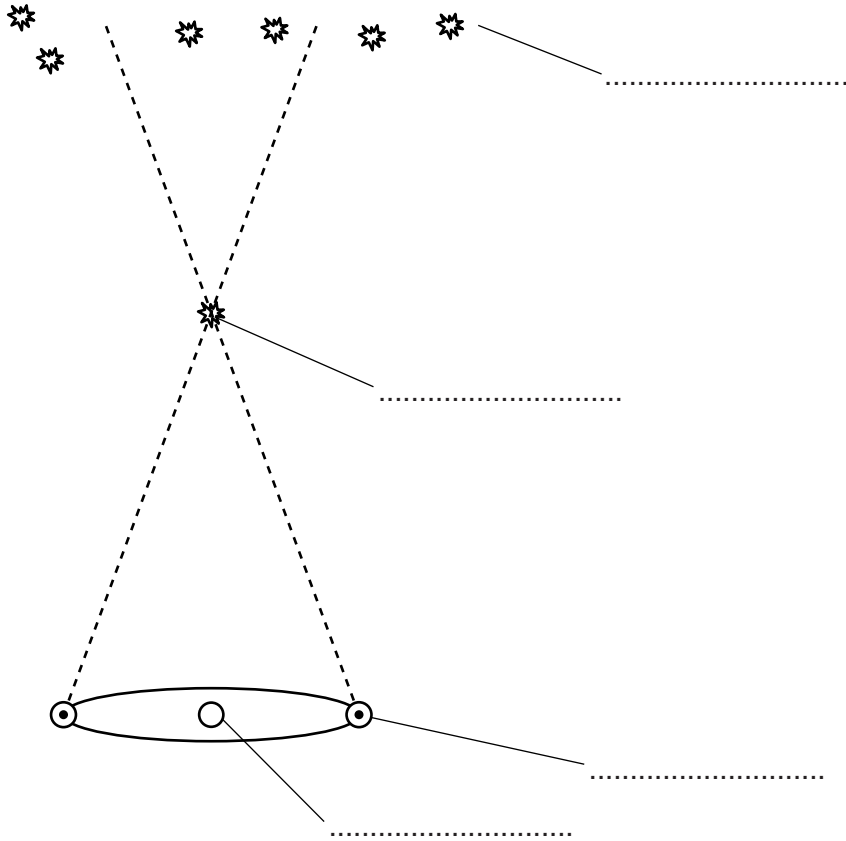
$$\frac{\text{volume}}{\text{temperature}} = \text{constant}$$

$$\text{energy} = \text{mass} \times [\text{speed of light in a vacuum}]^2$$

Answer **all** the questions.

1 Parallax can be used to find the distance to stars.

(a) (i) The diagram can show how parallax is used to find the distance to a star. Complete the labels on the diagram.



[4]

(ii) Draw a line on the diagram to show the parallax angle. Label the **angle P**.

[1]

(b) A star has a parallax angle of 0.71 seconds of arc.

Calculate the distance to the star and state the unit.


distance to star = ..... unit ..... [3]

[Total: 8]

5  
**BLANK PAGE**

**Question 2 begins on page 6**  
**PLEASE DO NOT WRITE ON THIS PAGE**

- 2 In 2014 the European Space Agency launched a space telescope called Gaia. Its main purpose is to measure the parallax of stars more accurately than ever before.



- (a) The European Space Agency is an international organisation. What are the advantages of having an international organisation involved in a project such as developing a space telescope?

.....  
.....  
.....  
..... [2]

- (b) The final decision about Gaia was not made by the scientists.

- (i) Suggest who would have made the final decision to build Gaia.

..... [1]

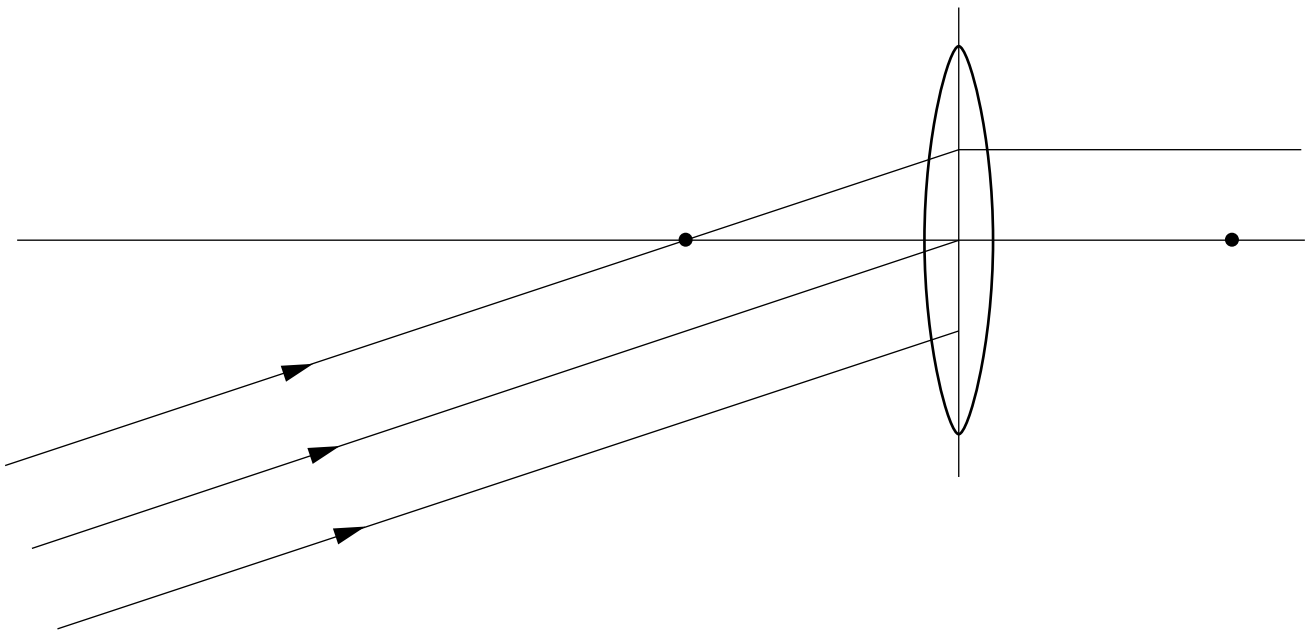


3 (a) A lens refracts light passing through it.

(i) Explain why a light ray can change direction when passing through a lens.

.....  
.....  
.....  
.....  
..... [3]

(ii) Complete the diagram to show how a lens can form an image of a distant object. The dots on the diagram are the focal points of the lens. **Label** the position of the image.



[3]



(b) June examines a set of converging lenses all made from the same glass.

Lens	Diameter (cm)	Focal length (m)
<b>W</b>	4	0.05
<b>X</b>	5	1
<b>Y</b>	9	1.5
<b>Z</b>	10	0.8

(i) Which lens will be the most powerful? ..... [1]

(ii) Which would be the best lens to use as an **eyepiece** lens in a telescope?  
Explain your answer.

.....  
 .....  
 ..... [2]

(iii) Which would be the best lens to use as the objective lens in a telescope for viewing **faint** stars?  
Give reasons for your answer.

.....  
 .....  
 .....  
 ..... [3]

(iv) June says that lenses **W** and **Y** would give a telescope with the highest magnification, with a magnification of 300.

Is June correct? Justify your answer.

.....  
 .....  
 .....  
 .....  
 ..... [4]

[Total: 16]

## 10

- 4 Here are the distances to some young stars that appear close together in the sky.

Star	Distance (light years)
A	165
B	570
C	160
D	320
E	175
F	40
G	180
H	1040

- (a) Some of the stars formed from the same gas cloud.

Calculate the best estimate for the approximate distance to the centre of the original gas cloud.

Justify your answer.

distance = ..... light years

.....

..... [2]

- (b) Suggest the approximate depth (thickness) of the original gas cloud.

Justify your answer.

depth = ..... light years

.....

..... [2]

[Total: 4]



## 12

6 Stars produce a great deal of energy.

(a) Describe the nuclear reaction producing energy in the Sun.

.....  
 .....  
 ..... [3]

(b) A single nuclear reaction in the Sun results in  $4.3 \times 10^{-12}$  J of energy being produced.

(i) How much mass is converted to energy in the nuclear reaction?  
 (speed of light =  $3.0 \times 10^8$  m/s)

mass = ..... kg [3]

(ii) The Sun's luminosity is  $3.9 \times 10^{26}$  J per second.

Calculate how many nuclear reactions are taking place in the Sun each second.

number of nuclear reactions each second = ..... [2]

(c) Describe how this energy is transferred within the Sun and then into space.

.....  
 .....  
 .....  
 ..... [3]

[Total: 11]



**ADDITIONAL ANSWER SPACE**

If additional space is required, you should use the following lined page(s). The question number(s) must be clearly shown in the margin(s).

A large area of lined paper for writing answers. It features a vertical margin line on the left side and horizontal dotted lines for writing. The lines are evenly spaced and cover most of the page area.

A grid of 20 columns and 30 rows of dotted lines for handwriting practice. The grid is formed by a solid vertical line on the left and horizontal dotted lines. The first column is a narrow margin, and the remaining 19 columns are of equal width.

A large area of the page is filled with horizontal dotted lines, providing a space for writing answers. A solid vertical line runs down the left side of this area, creating a margin.



**Copyright Information**

OCR is committed to seeking permission to reproduce all third-party content that it uses in its assessment materials. OCR has attempted to identify and contact all copyright holders whose work is used in this paper. To avoid the issue of disclosure of answer-related information to candidates, all copyright acknowledgements are reproduced in the OCR Copyright Acknowledgements Booklet. This is produced for each series of examinations and is freely available to download from our public website ([www.ocr.org.uk](http://www.ocr.org.uk)) after the live examination series.

If OCR has unwittingly failed to correctly acknowledge or clear any third-party content in this assessment material, OCR will be happy to correct its mistake at the earliest possible opportunity.

For queries or further information please contact the Copyright Team, First Floor, 9 Hills Road, Cambridge CB2 1GE.

OCR is part of the Cambridge Assessment Group; Cambridge Assessment is the brand name of University of Cambridge Local Examinations Syndicate (UCLES), which is itself a department of the University of Cambridge.