


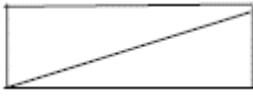
E and M fields MS

1.	B			[1]
2.	D			[1]
3.	A			[1]
4.	A			[1]
5.	B			[1]
6.	Use of $W=mg$		1	
	Use of $F=BIL$		1	
	$B = 0.04 T$		1	
				[3]
7.	(a) (Magnetic) Flux linkage		1	
			1	
	(b) QWC (i and iii) – spelling of technical terms must be correct and the answer must be organised in a logical sequence			
	Lenz's law / conservation of energy		1	
	<u>induced</u> current/emf (direction)		1	
	Opposes the <u>change</u> (that produced it)		1	
				[5]

8.	(a)	At least 3 parallel straight lines	1
		<u>ALL</u> Equispaced (except ignore a large gap in middle) [be firm]	1
		Arrow left to right	1
(b)		Use of eV [ eg $1.6 \times 10^{-19}$ or 2000/4000]	1
		(=) $\frac{1}{2} mv^2$	1
		Use of 2000	1
(c)		Use of $v = s/t$ [ eg = $1.5 / 23 (\times 10^{-6})$ ]	1
		(= 65000)	
		Sub into previous equation	1
		$m = 1.5 \times 10^{-25}$ kg	1
(d)		Some of the molecules in sample will travel further/less/not midway (1)	
		Duration of laser pulse (1)	
		Might emerge not horizontal (1)	
		Molecules may be doubly/integer ionised (1)	
		Time very small (1)	
	Not perfect vacuum / collides with other molecules (1)	Max 2	
			[11]
9.	(a)	(Trace) always positive/not negative/not below 0/ if it was AC the graph would be positive and negative	1
		Indicating one/same direction	1
	(b)	(i) Capacitor stores charge/charges up	1
	(If voltage is constant) capacitor doesn't discharge	1	
	(ii)	Recall of $E = \frac{1}{2} CV^2$ or use of $Q=CV$ and $QV/2$	1
		Substitution of C and any reasonable V [ignore power of 10 for C]	1
		eg = $\frac{1}{2} 10 \times 10^{-6} \times 5.5^2/5.6^2$	
		= $1.5 \times 10^{-4}$ - $1.6 \times 10^{-4}$ J	1
(c)	(i)	Capacitor charges up (1)	
		From the supply (1)	
		(then) Capacitor discharges (1)	
		Through circuit / exponentially (1) Max 3	

- (ii) Corresponding time interval for a change in V eg 6-7 ms for  $\Delta V = 2V$  1
- $V = V_0 e^{-t/RC}$  or rearrangement seen 1
- [eg  $\text{Ln } 0.7 = 6 \times 10^{-3} / RC$ ] 1
- R approx 1700  $\Omega$  (allow 1600 – 1800) 1
- or**
- Time constant = 14 – 20 ms 1
- $T = RC$  seen 1
- R approx 1700  $\Omega$  (allow 1600 – 1800) 1
- or**
- Corresponding time interval for a change in V eg 6-7 ms for  $\Delta V = 2V$  1
- $Q = C V$  and  $I = Q/t$  seen 1
- R approx 1700  $\Omega$  (allow 1600 – 1800) 1
- (iii) Use larger capacitor 1

[14]

10. (a) (Total / sum of) Kinetic energy conserved 1
- (b) These diagrams could appear in part c and should be credited in (b) 1
- 

- 1
- [allow first mark for any triangle or parallelogram ie do not insist on right angle]
- right angle labelled or approximately by eye / diagonal should be labelled “before” or “initial” or appropriately recognisable as incoming particle
- (c) KE as formula eg  $\frac{1}{2} mu^2 = \frac{1}{2} mv^2 + \frac{1}{2} ms^2 / p^2 / 2m = p^2 / 2m + p^2 / 2m$  1
- Recognition of “Pythagoras” 1
- (d) (i) Electric field 1
- Does work on proton/applies a force /repel/attract 1
- $qV / Fd / Eq$  1

- (ii) Mass of incoming proton larger (than rest mass) (1)  
 Due to moving near speed of light/high  
 speed/high energy/relativistic (1)

Alt answer : image not in plane of two protons after the event (2)      Max 2

- (e) Out of the plane of paper      1      [11]

11. C      [1]

12. C      [1]

13. Current in coil generates magnetic field (1)  
 Current drops/decreases (1)  
 Change of flux [accept flux cut] (1)  
 Rapid/quick/short time (1)  
 Large emf/200 V induced(1)  
 Field/flux linkage large due to many turns (1)      [4]

14. (a) Use of  $E = V/d$  (1)  
 Answer =  $1.5 \times 10^5 \text{ V m}^{-1}$  or  $\text{N C}^{-1}$  (1)  
 Eg  $E = 1.5 / 10 \times 10^{-6}$       2
- (b) Opposite forces (act on either end of molecule) (1)  
 Molecule rotates / aligns with field (1)  
 – at top / + at bottom (1)      3      [5]

15. (a) Straight lines (at least 4) touching proton (1)  
 Equi spread (by eye) (1)  
 Arrow on at least one pointing away from proton (1)      3

- (b) Use of  $F = k \frac{QQ}{r^2}$  [requires 2 subs to qualify as use] (1)  
 Know  $Q_p = 1.6 \times 10^{-19}$  (C) eg  $QQ = (1.6 \times 10^{-19})^2$  (1)  
 Answer =  $7.9 \times 10^{-8}$  N (1)  
 Eg  $F = 8.99 \times 10^9 (1.6 \times 10^{-19})^2 / (5.4 \times 10^{-11})^2$  3

[6]

16. (a) Charges (1)  
 Movement of electrons from one plate to the other  
 OR one plate becomes + the other – OR until pd  
 across C equals  $V_{\text{supply}}$  (1) 2
- (b) (i) Use of  $Q = It$  (both 0.74 and 0.1/0.2) (1)  
 Recognition of milli and  $\Delta t = 0.1$  (1)  
 Eg  $Q = 0.74 \times 10^{-3} \times 0.1 = 74 \times 10^{-6}$  C 2
- (ii) Use of  $V = Q/C$  (1)  
 Explains unit conversion (1)  
 Eg  $V = 278 \times 10^{-6} / 100 \times 10^{-6} = 2.78$  [accept  $\mu/\mu$ ] 2
- (c) (i) Recall of  $RC$  (1)  
 Answer = 0.3 (s) (1)  
 Eg  $T = 3000 \times 0.0001$   
**plus either**  
 1/e or 37% of initial (1)  
 =0.23 - 0.27 (s) (1)  
**or**  
 sub in formula  $I = I_0 e^{-t/RC}$  (1)  
 = 0.23 - 0.27 (s) (1)  
**or**  
 Initial Tangent drawn (1)  
 Time constant = 0.2-0.3 (s) (1) 4
- (ii) Plot  $\ln I / \log I$  (1)  
 Against  $t$  (1) (dependent on first mark)  
 or  
 Gradients of graph (1)  
 Against  $I$  (1) (dependent on first mark)  
 should be straight line (1) (dependent on previous 2) 3

[13]

17. C [1]
18. D [1]
19. D [1]
20. A [1]
21. D [1]
22. A [1]
23. B [1]
24. (a) (i) Use of  $E = \frac{1}{2} CV^2$  (1)  
 Answer [0.158 J] (1)  
 $E = \frac{1}{2} CV^2 = 0.5 \times 2200 \times 10^{-6} \text{ F} \times (12 \text{ V})^2$   
 $E = 0.158 \text{ J}$  2
- (ii) Correct substitution into  $\Delta E_p = \Delta mgh$  (1)  
 Answer 0.75 [75%] (1)  
 $\Delta E_p = 0.05 \text{ kg} \times 9.8 \text{ N kg}^{-1} \times 0.24 \text{ m} [= 0.12 \text{ J}]$   
 Efficiency =  $0.12 \div 0.16 \text{ J} = 0.75$  [75%] 2
- (b) (i)  $(t = CR) = 2200 \times 10^{-6} \text{ (F)} \times 16 \text{ (\Omega)} = 35.2 \text{ (ms)}$  (1) 1

- (ii) Curve starting on  $I$  axis but not reaching  $t$  axis (1)  
 $I_0 = 1.6 \text{ V} / 16\Omega = 100 \text{ mA}$  shown on axis (1)  
 Curve passing through about 37 mA at  $t = 35 \text{ ms}$  (1) 3

- (c) (i) The vibrations of the air particles (1)  
 are parallel to the direction of travel of the wave (energy) (1) 2
- (ii)  $T = 1/f = 50 \text{ ms}$  (1)  
 Sensible comment related to time constant of 35 ms (1) 2

[12]

25. (a) (i)  $W = QV$  (1)  
 Correct answer 3.2 nJ [ $3.2 \times 10^{-9} \text{ J}$ , etc.] (1)  
 Example of answer:  
 $W = QV = 0.8 \times 10^{-9} \text{ C} \times 4.0 \text{ V} = 3.2 \times 10^{-9} \text{ J}$  2

- (ii) +0.8 (nC) on top plate **and** -0.8 (nC) on bottom plate (1)  
 (both needed) 1

- (b) Statement ( $E =$ ) 'Area' **or** ( $E =$ )  $\frac{1}{2} QV$  (1)  
 See calculation  $\frac{1}{2} \times 4.0 \times 0.8$  **or**  $\frac{1}{2} \times \text{base} \times \text{height}$  (1)

**OR**

C found from graph (1)  
 Use of  $W = \frac{1}{2} CV^2$  (1)

Example of answer:

$$C = \frac{Q}{V} + \frac{8.0 \times 10^{-9} \text{ C}}{4.0 \text{ V}} = 2.0 \times 10^{-10} \text{ F}$$

$$\therefore W = \frac{1}{2} CV^2 = \frac{2.0 \times 10^{-10} \text{ F} \times (4.0 \text{ V})^2}{2} = 1.6 \times 10^{-9} \text{ J} \quad 2$$

- (c) (i) Correct answer 0.2 nC (1) 1
- (ii) Graph is straight and through origin (1)  
 ends at 3.0V and their Q (1) 2

(iii) Attempt to **use**  $C = Q/V$  or  $C = \Delta Q/\Delta V$  (1)

Correct answer 0.067 nF / 67 pF (1)

Example of answer:

$$C = \frac{Q}{V} = \frac{0.2 \times 10^{-9} \text{ C}}{3.0 \text{ V}} = 6.7 \times 10^{-11} \text{ F} \quad 2$$

[10]

26. (a) (i)  $1.2 \text{ keV} = 1.2 \times 10^3 \times 1.6 \times 10^{-19} \text{ J}$   
**OR**  
Use of  $e\Delta V$  with  $e$  as  $1.6 \times 10^{-19} \text{ C}$  and  $V$  as  $1200 \text{ V}$  (1)  
Use of  $\Delta(\frac{1}{2}m_e v^2)$  with  $m_e$  as  $9.1(1) \times 10^{-31} \text{ kg}$ . (1)  
Correct answer  $2.0 - 2.1 \times 10^7 \text{ m s}^{-1}$  (1) 3

(ii)  $1200 \times 8/100 = 96$  (eV delivered per electron) (1)  
 $96/2.4 = 40$  (1)  
**Or**  
 $2.4 \times 100/8 = 30$  (incident eV needed per photon) (1)  
 $1200/30 = 40$  (1)  
**Or**  
 $1200 / 2.4 = 500$  (photons per electron, ideally) (1)  
 $500 \times (8/100) = 40$  (1) 2

(b) Electrons on screen repel electrons in beam / force opposes electron motion/decelerating force (1)  
Electrons (in beam) decelerated /slowed / velocity reduced/ work done by electrons (against force) (1)  
Electron (kinetic) energy reduced (not "shared") (1)  
Fewer photons (per electron, stated or implied) (1)  
Trace less bright (1)  
QoWC (1) Max 4

[9]

27. (a) Scale interval is 0.1 (V) (1) 1



- (b) (i) Use of  $\epsilon = (-)N\Delta\phi/\Delta t$  (1)

Correct answer  $9.6 \times 10^{-7}$  (Wb) / 0.96 ( $\mu$ Wb) [ignore +/-] (1)

Example of answer:

$$\Delta\phi = \epsilon \times \frac{\Delta t}{N} = 0.12 \text{ V} \times \frac{40 \times 10^{-3} \text{ s}}{5000} = 9.6 \times 10^{-7} \text{ Wb} \quad 2$$

- (ii) Use of ' $\phi$ ' or ' $\Delta\phi$ ' or 'flux' =  $BA$ , or  $B = \epsilon \Delta t/NA$  (1)

Correct answer 0.012 T / 0.013 T (1)

Example of answer:

$$\phi = BA$$

$$\therefore B = \frac{\phi}{A} = \frac{9.6 \times 10^{-7} \text{ Wb}}{\pi \times \left( \frac{1.0 \times 10^{-2} \text{ m}}{2} \right)^2} = 0.012 \text{ T}$$

[N.B.  $\phi = 0.96 \mu\text{Wb} \rightarrow 0.012\text{T}$ ,  $\phi = 1\mu\text{Wb} \rightarrow 0.013\text{T}$ ] 2

[5]

28. (a) Lines (1)

[not crossing; minimum 2 lines starting from S pole of magnet]

Correct arrow(s) (1)

[minimum 1 arrow pointing towards S pole, any incorrect arrow scores 0] 2

- (b) (i) Use of  $F = BIl$  rearranged to  $B = F/Il$  OR with two correct subs (1)  
Leading to correct answer (1)

$$B = F/Il = 0.008/(5.8 \times 0.012) \text{ (T)}$$

$$B = 0.11 \text{ (T)} \quad 2$$

- (ii) Assumption:

parallel field/uniform field/constant field for 12 mm then falls to zero /  
assume wire perpendicular to field (at all points)/ $\theta = 90^\circ$  (where  $F = BIl \sin\theta$  given earlier)/force same at all points on the wire (1)

1

- (c) Experimental value less because field diverges

OR field strength decreases with distance

OR field could be 0.3 T at magnet surface and only 0.1 T at wire (1) 1

- (d) Wire would levitate (again) (1)  
 Two reversals cancel/applying FLHR (1)  
 [wire moves downwards due to current OR field reversed scores 1] 2

[8]

29. (a) capacitors need d.c. (1)  
 OR Mains is a.c. / mains current changes direction constantly  
 Charge given in one half of cycle is removed the next half (1)  
 OR C charged then discharges 2

- (b) (i) Voltage value for initial voltage  $\times 1/e$  [or use of 37%] (1)  
 OR use 2 values where 2<sup>nd</sup> is 1/eth of first  
 OR draw tangent at time = 0 s  
 OR  $V = V_0 e^{-t/RC}$  with correct substitution of (t,V) from graph  
 T = 0.07 s [allow 0.065 s – 0.075 s] (1) 2

- (ii) Recall time constant = CR (1)  
 Answer for R [allow ecf for T] (1)  
 $R = T/C = 0.07 \text{ s}/(100 \times 10^{-9} \text{ F})$   
 $R = 7 \times 10^5 \Omega$  2

- (c) (i) Recall  $Q = CV$  [equation or substitution] (1)  
 Answer for Q (1)  
 $Q = CV = 100 \times 10^{-6} \times 300$   
 $Q = 0.03 \text{ C}$  2

- (ii) Recall  $W = 1/2 CV^2$  OR  $W = 1/2 Q^2/C$  (1)  
 OR 2 correct subs into  $W = 1/2 QV$  [allow ecf]  
 Answer (1)  
 Eg:  $W = 1/2 QV = 0.5 \times 0.03 \times 300 \text{ (J)} = 4.5 \text{ J}$   
 OR  $W = 1/2 CV^2 = 0.5 \times 100 \times 10^{-9} \times 300 \times 300 \text{ (J)} = 4.5 \text{ J}$   
 OR  $W = 1/2 Q^2/C = 0.5 \times 0.03 \times 0.03/(100 \times 10^{-9}) \text{ (J)} = 4.5 \text{ J}$  2

[10]

30. (a) (i) P.d. across capacitor  
 Use of  $V_R = I \times R$  (1)  
 [allow one error of  $10^3$  in individual substitutions; disallow if  $V_R$  value is 6V]  
 $V_C = 6.0 \text{ V} - 4.0 \text{ V} (= 2.0\text{V})$  (1)  
 [No ecf] 2  
 Example of answer:  
 $V_R = 20 \times 10^{-6} \text{ A} \times 2.0 \times 10^5 \Omega = 4.0 \text{ V}$   
 Hence  $V_C = 6.0 \text{ V} - 4.0 \text{ V} = 2.0 \text{ V}$
- (b) Calculation of charge  
 Use of  $Q = C \times V$  with 560  $\mu\text{F}$  & 2.0 V (1)  
 [Check correct equation is being used; allow power of 10 error in capacitance value. If capacitance value mis-transcribed, allow this first mark only]  
 Answer 1.1 (2)mC (1120 $\mu\text{C}$ ) [no ecf] (1) 2
- (c) Calculation of energy stored  
 Use of  $W = \frac{1}{2}CV^2$  with given values, or  $W = \frac{1}{2}VQ$  with their Q, to get 1.1(2) mJ (1120 $\mu\text{J}$ ) or their correct answer. (1)  
 [same numerical value as in (b)] 1
- (d) Calculation of energy transferred  
 Use of  $E = QV$ , with their Q and  $V = 6.0 \text{ V}$ , to get 6.7(2) mJ (6720 $\mu\text{J}$ ) or their answer [ $6 \times$  value at part c] correctly found. (1) 1
- (e) Main reason for energy difference  
 Energy is transferred to thermal / heat energy in / work is done against, the resistance of the resistor in the circuit [NOT just 'the resistance of the wires', nor the 'components'] (1)  
 [Do not credit vague reference to energy dissipation, nor 'energy is lost to the surroundings'] 1

[7]

31. (a) Calculation of potential difference

Use of  $\frac{1}{2}m_p v^2$  with  $v = 2.77 \times 10^5 \text{ m s}^{-1}$

and  $m_p = 1.67 \times 10^{-27} \text{ kg}$  (1)

Use of eV with  $e = 1.60 \times 10^{-19} \text{ C}$  (1)

[beware confusion of  $v$  and  $V$ ]

Answer = 400(.4) / 401 V (1)

[If data used to 2 sf,  $\rightarrow$  380V, 384V or 364V, allow 2/3]

3

Example of answer:

$$eV = \frac{1}{2} m_p v^2$$

$$V = \frac{m_p v^2}{2e} = \frac{1.67 \times 10^{-27} \text{ kg} \times (2.77 \times 10^5 \text{ m s}^{-1})^2}{2 \times 1.6 \times 10^{-19} \text{ C}}$$

$$= 400\text{V}$$

[beware unit error of eV here]

(b) Add second path to diagram

Path at B stays equidistant from that at A [gauge by eye] (1)

1

(c) (i) Add  $\alpha$  path to diagram

Added path at A [allow through letter A] also curves upwards (1)

But is less curved than the original, straight beyond plates and continues to diverge from it (1)

2

(ii) Explanation

Charge on  $\alpha$  is double that on proton /  $\alpha$  has 2 protons /  
force on  $\alpha$  is double force on proton. (1)

Mass of a particle is (approx) 4 times / more than double that of the  
proton. (1)

[hence acceleration is approximately halved].

[Ignore reference to  $F = Bqv$ ; do not credit reference  
to  ${}^4_2\text{He}$  unless implication of numbers 4 and 2 is made clear].

2

[8]

32. (a) (i) Direction of current

Position 1 = Q to P / anticlockwise / to the left } (1)

Position 3 = P to Q / clockwise / to the right } (1)

[both needed; arrows added to diagram may give  
current directions at 1 & 3]

Position 2 = no current (1)

2

(ii) Current calculation

Use of  $\frac{\Delta\phi}{\Delta t} = \frac{\Delta(BA)}{\Delta t}$ , or  $\varepsilon = Blv$ ,  $= 2 \times 10^{-2} \text{ T} \times 0.12 \text{ m} \times 0.05 \text{ m s}^{-1}$  (1)

[ignore power of 10 errors in dimension and velocity values]

(Emf  $\Rightarrow$ )  $1.2 \times 10^{-4} \text{ V}$  (1)

$I = \frac{V}{R}$  or  $I = \frac{E}{R}$  seen or used (1)

Answer =  $6.0 \times 10^{-5} \text{ A}$  or  $60\mu\text{A}$  [ecf their emf] (1)

4

(b) Uniform acceleration?

QoWC (1)

Magnitude of current would be increasing as frame moves through position 1 (or position 3) (1)

Magnitude of current would be greater for position 3 than 1 [Beware comparison of position 3 with position 2 here] (1)

Reference to increased rate of flux cutting / increased rate of flux change / increased area swept out per second } (1)  
(Beware suggestion that B or flux density is changing) }

So induced emf is greater (1)

Current for position 2 is zero }  
[Do not credit equal and opposite }  
currents cancelling] } Both needed (1)

Since flux linkage is constant / }  
(net) rate of flux cutting is zero / }  
Emfs in PS and QR are equal and opposite }

Max 4

[10]

33. (a) use of  $Q = CV$  OR statement or use of  $W = CV^2/2$  OR  $Q^2/2C$  (1)  
answer (1)

$$W = CV^2/2$$
$$= 0.5 \times 2500 \times 2 \times 2 \text{ (J)} = 5000 \text{ J} \quad 2$$

(b) 1 correct value (1)  
All correct values; 1.62, 1.39, 1.16 (1)  
(1 mark for one correct or inappropriate sig figs) 2

(c) graph of  $\ln(y)$  v. time  $(x)$  (1)  
appropriate scales and both axes labelled fully (1)  
points plotted properly ( $\pm 1$  mm) (1)  
best fit line drawn (1) 4

- (d) recognise that gradient =  $(-)/RC$  (1)  
 evaluate gradient (1)  
 conversion days to seconds (1)  
 obtain appropriate value for R (1)  
 gradient =  $(-)$  0.92/(40 (days))  
 $R = 40 \times 24 \times 3600$  (s) /  $0.92 \times 2500$  (F)  
 $= 1500 \Omega$   
 (OR method using graph of V v. t)  
 recognise that time to  $V_0/e = RC$  (1)  
 this time estimated (42–45 days) (1)  
 conversion days to seconds (1)  
 obtain appropriate value for R (1)

Max 4

[12]

34. (i) Add to diagram.

Arrows at A and B, both pointing directly away from the nucleus. (1)  
 [Arrow end (head or tail) need not touch A /B, but direction must be correct.  
 Gauge by eye, accept dotted construction lines as indication of intent]

1

(ii) Calculation of force

Use of  $F = \frac{Q_1 Q_2}{4\pi\epsilon_0 r^2}$  or  $F = \frac{kQ_1 Q_2}{r^2}$  (1)

[ignore error/omission of '2' and/or '79' or 'e' or ' $1.6 \times 10^{-19}$ ', for this first mark, providing numerator clearly has a product of charges and denominator a distance value squared. Ignore power of 10 errors in values of  $Q$  or  $r$ ]

**$2 \times 1.6 \times 10^{-19}$  C and  $79 \times 1.6 \times 10^{-19}$  C** seen (**consequential** mark, dependent upon correct use of equation previously) (1)

Correct answer = 1.6 – 1.7 N (1)

Example of answer:

$$F = \frac{Q_1 Q_2}{4\pi\epsilon_0 r^2} = \frac{(79 \times 16 \times 10^{-19} \text{ C}) \times (2 \times 1.6 \times 10^{-19} \text{ C})}{4\pi \times 8.85 \times 10^{-12} \text{ F m}^{-1} \times (1.5 \times 10^{-13} \text{ m})^2}$$

= 1.62 N

3

(iii) Effect on motion of  $\alpha$

Slows down [decelerates] and then speeds up again [accelerates].  
 (both needed)

[accept 'slows down **at** A and speeds up **at** B] (1)

1

[5]

35. (a) (i) Direction of e.m.f.?  
 Hub ‘-’ and Rim ‘+’.  
 [Allow mark for either on its own, but not if contradicted.] (1) 1

(ii) Why a constant e.m.f.?  
 Reference to flux cutting / rate of change of flux / change of flux linkage due to spoke motion / spokes moving at right angles to field / Reference to Faraday’s Law (1)  
 Constant rate of spin implies constant rate of flux cutting.  
 [Link made clear] (1)  
 [continuous process does not mean constant rate] 2

(iii) The time for one revolution  
 Use of  $\varepsilon = \frac{BA}{t}$  with ‘A’ recognisable as area of a circle (1)  
 [ignore power of 10 errors for e.m.f. and radius values, and inclusion of N = 24]  
 Correct substitution of all values [ but only N = 1 acceptable here] (1)  
 Correct answer 0.31 – 0.32 s (1)  
 [t = 7.6s scores 1/3; t = 1.12s scores 0/3, t = 0.64s scores 1/3 here]  
 Example of answer:  

$$\varepsilon = \frac{\phi}{t} = \frac{BA}{t} \rightarrow t = \frac{BA}{\varepsilon}$$

$$\therefore t = \frac{2.8 \times 10^{-5} \text{ T} \times \pi \times (30 \times 10^{-2} \text{ m})^2}{25 \times 10^{-6} \text{ V}} = 0.317 \text{ s}$$
 3

Alternative answer

Use of  $\varepsilon = Blv$  with  $v$  = (mean) velocity of spoke. ((1))  
 $\rightarrow v = 2.98 \text{ m s}^{-1}$  ((1))  
 Hence rim velocity =  $2.98 \times 2 = 5.96 \text{ m s}^{-1}$ .  
 $\rightarrow t = \frac{2\pi r}{v_{RIM}} = \frac{2\pi \times 0.3 \text{ m}}{5.96 \text{ m s}^{-1}} = 0.316 \text{ s}$ . ((1))  
 [t = 0.63s scores 2/3 here]

(b) What effect?  
 (i) Reduced [accept ‘halved’] **AND**  
 Rate of flux cutting is reduced / Fewer field lines are being cut /  
 Component of Earth’s field perpendicular to the wheel is less /  
 Flux through wheel is less / Area of wheel perpendicular to field is less / Wheel is no longer perpendicular to the field (1)  
 [do not credit answers suggesting changes in the field strength itself] 1



(ii) Increased / increasing **AND**  
Rate of flux cutting [etc.] would be increasing **(1)** 1

(iii) (Reduced to) zero [but not 'very small' / 'negligible', etc.] **AND**  
No flux cut by spoke(s) / No component of the Earth's field  
perpendicular to the wheel / No flux through wheel / Wheel  
is spinning parallel to the field / in plane of field **(1)**  
[but not just ' $\Delta\Phi = 0$ ', nor 'motion is not perpendicular to field']  
[Allow 1/3 for three correct statements of 'ε' outcome without any  
explanation, but **only** if score would otherwise be zero.]  
[Disallow 'breaking' for 'cutting' on first occasion in entire  
question, but allow, ecf, thereafter] 3

[9]

36. (a) (i) arrow towards centre of curvature **(1)** 1

(ii) Use of formula with correct  $q$  OR  $v$  subbed **(1)**  
correct answer **(1)**  
 $F = Bqv$   
 $= 0.5 \times 1.6 \times 10^{-19} \times 800\,000 \text{ N (correct } q \text{ or } v) \text{ (1)}$   
 $= 6.4 \times 10^{-14} \text{ N (1)}$  2

(iii) Use of formula: EITHER correct  $m$  subbed OR  $d$  identified with  $r$  **(1)**  
correct answer  
 $r = p/Bq = 1.67 \times 10^{-27} \times 800\,000 / 0.5 \times 1.6 \times 10^{-19} \text{ (m) (1)}$   
 $= 0.017 \text{ m (1)}$   
[Penalise factor 1000 error once only in question] 2

(iv) derive formula for  $T$  **(1)**  
correct answer **(1)**  
 $T = \pi r/v$  (OR  $T = 2\pi r/v$  for **(1)x**) **(1)**  
 $= \pi \times 0.017 / 800\,000 \text{ (s) (ecf)}$   
 $= 6.6 \text{ (6.5 – 6.7)} \times 10^{-8} \text{ s (1)}$  2

(v) correct statement of force = change of momentum/time **(1)**  
correct use of factor 2 **(1)**  
correct answer **(1)**  
 $F = \text{change of momentum/time (1)}$   
 $= 2 \times 1.67 \times 10^{-27} \times 800\,000 / 6.7 \times 10^{-8} \text{ (N) (ecf) (1)}$   
 $= 4.1 \text{ (4.0)} \times 10^{-14} \text{ N [errors in } m \text{ are self-cancelling] (1)}$  3

- (b) Recall of formula (1)  
correct answer (1)

$$F = k q_1 q_2 / r^2 \text{ OR } F = q_1 q_2 / 4\pi\epsilon_0 r^2 \text{ OR } k = 1/4\pi\epsilon_0 \text{ (1)}$$

$$= 1.6 \times 10^{-19} \times 1.9 \times 10^{-6} / 4 \times \pi \times 8.85 \times 10^{-12} \times 5 \times 5 \text{ (N)}$$

$$= 1.1 \times 10^{-16} \text{ N (1)}$$

2

[12]

37. (i) magnetic field changing (1)  
field cuts across conductor/flux linkage changes (1)  
Faraday/V induced (1)  
V causes I (1)

(any 3)  
3

- (ii) Direction of induced current has an effect tending to cancel its cause OR [reasonable attempt at putting Lenz into words – not just “Lenz”] (1)

1

[4]

38. (a) (i) recall of formula (1)  
correct answer (1)

$$C = Q/V \text{ (stated or implied) [this way round] (1)}$$

$$= \text{(appropriate pair of values, eg 4 C/4.8 V)}$$

$$= 0.83 \text{ (0.82 – 0.84) F (1)}$$

2

- (ii) strip width  $\Delta Q$  (1)1  
 $\Delta W = V \cdot \Delta Q$  (1)2  
add strips => area under graph (1)3  
area =  $1/2 Q V$  (1)4  
energy stored = work done (1)5  
showing  $1/2 Q V$  has unit J/joule (1)6  
[integration answer – max (1)(1)]  
[answer in words – max (1)(1)]

(any 3)

3

- (iii) derive or recall  $E = 1/2 C V^2$  OR use correct  $Q$  value from graph (1)  
OR line across graph at 4 V  
correct answer (1)

$$E = 1/2 Q V$$

$$= 1/2 \times 3.3 \text{ (3.3–3.35) C} \times 4 \text{ V (1)}$$

$$= 6.6 \text{ (6.6–6.7) J (1)}$$

$$\text{OR } E = 1/2 C V^2 \text{ (1)}$$

$$= 1/2 \times 0.83 \text{ F} \times (4 \text{ V})^2 = 6.6 \text{ J (1)}$$

2

(b) (i)  $Q$  decreases  $\Rightarrow V$  decreases OR  $I$  decreases (1)  
 mention of  $P = VI$  (1) 2

(ii) 125–145 s (1) 1

[10]

39. (a) (i) Recall of  $Q = CV$  or  $W = 1/2 CV^2$  (1)  
 Correct calculation of  $W$  or  $V$  or  $C$  (1)  
 $\Rightarrow$  Conclusion [must be consistent] (1)

eg  $W = 1/2 CV^2$   
 $\Rightarrow C = 2W/V^2 = 2 \times 0.045 / (30,000)^2$  (F)  
 $= 1 \times 10^{-10}$  (F) = 100 (pF) ( $\Rightarrow$  NOT COMPATIBLE)

or  $\Rightarrow W = 1/2 \times 10 \times 10^{-12} \times (30,000)^2$  (J)  
 $= 0.0045$  (J) ( $\Rightarrow$  NOT COMPATIBLE) 3  
 [no mark for conclusion; but ue for saying 100pF ~ 10 pF]

(ii) Sub of one appropriate value into  $Q = CV$  or  $W = 1/2QV$  (1)  
 Correct value (1)  
 eg Charge =  $1 \times 10^{-10} \times 30,000$  (C)  
 $= 3 \times 10^{-6}$  C 2

(b) (i) Use of  $E = V/d$  [Rearranged or subbed into] (1)  
 Correct value (1)  
 eg  $d = V/E = 30,000/3 \times 10^6$  (m)  
 $= 0.01$  m 2

(ii) Use of  $E = F/q$  [Rearranged or subbed into – any charge value] (1)  
 Correct value (1)  
 eg  $F = Eq = 3 \times 10^6 \times 1.6 \times 10^{-19}$  (N)  
 $= 4.8 \times 10^{-13}$  N 2

- (c) Correct use of 1 mm in  $W = Fd$  **or**  $V = Ed$  [ecf from(b)(ii)] (1)  
 $\Rightarrow 3000$  (V or eV) (1)  
 $\Rightarrow$  correct value (1)

eg  $W = Fd = 4.8 \times 10^{-13} \text{ N} \times 0.001 \text{ m} (= 4.8 \times 10^{-16} \text{ J})$

$\Rightarrow 3000$  (eV)

$3000/35 = 85/86/85.7$

**or**  $V = Ed = (3 \times 10^6 \text{ V/m}) \times 0.001 \text{ (m)}$

$\Rightarrow 3000$  (V)

$3000/35 = 85/86/85.7$

3

[12]

40. (a) emf/voltage (1)  
induced / created / caused by flux change (1)

2

- (b) Lenz (1)  
effect opposes change producing it (1)

2

- (c) dynamo generates emf (1)  
lights off  $\Leftrightarrow$  no current (1)  
lights on  $\Leftrightarrow$  current flowing (1) **Any 4**  
If current, then force on dynamo rotor  $F = BIl$  (1)  
[**or** field acting against field in dynamo]  
This force opposes rotation (1)

4

[8]

41. (a) Shape [lines not crossing] (1)  
arrow(s) (1)

2

- (b) [reference to] changing B field/ flux cuts coil / changing flux  
(linkage) (1)1  
induces emf **or** current [NOT "output"] /EM induction (1)2  
emf  $\propto$  rate of change / Faraday's law stated (1)3  
output is gradient of flux graph (1)4  
signal +ve while  $\phi$  increases / -ve while  $\phi$  decreases (1)5  
max emf for max  $d\phi / dt$  / steepest gradient (1)6 **(Any 5)**  
Emf 0 when gradient = 0 (1)7  
[(1)5 (1)6 (1)7 can be gained by annotations on graph]

5

- (c) (Binary / 1 or 0 /  $2^{10}$   
maximum number  $\Rightarrow$  1024 (1)

1

(d) 10010 (1) 1

(e) Attempt to calculate circumference (formula or numbers) (1)

dividing by  $0.83 \times 10^{-6}$  (m) (1)

correct value (1)

eg  $C = \pi d = \pi \times 0.089$  m (= 0.2796 m)

No of bits along circumference =  $C \div (0.83 \times 10^{-6}$  m)

(=  $3.37 \times 10^5$ )

Rate =  $3.37 \times 10^5 \times 120$  (7200 revs/min = 120 Hz)

=  $4.04 \times 10^7$  s<sup>-1</sup>

[ $2.43 \times 10^9$  min<sup>-1</sup> is OK]

3

[12]

42. (a) Formula in words

(The force between two charged particles is directly) proportional to the **product** of their charges [plural] and (1)

inversely proportional to the square of their separation [not just 'radius']. (1)

OR Either equation for F\*, with valid word replacements for Q<sub>1</sub>, Q<sub>2</sub> (1)

and r or r<sup>2</sup> symbols. One mark for numerator, one for denominator. (1)

$$\left[ * \text{ i.e. words in } F = \frac{kQ_1Q_2}{r^2} \text{ or in } \frac{Q_1Q_2}{4\pi\epsilon_0 r^2} \right]$$

[If equation given in symbol form, followed by a key to the symbol meanings, then 1/2.]

2

(b) Base units of constant

[Either  $k$  or  $(4\pi)\epsilon_0$ , be sure which]

[ecf from part a if power of  $Q$  or  $r$  wrong]

$$F = \frac{kQ_1Q_2}{r^2} \quad \text{or} \quad F = \frac{Q_1Q_2}{4\pi\epsilon_0 r^2} \quad [\text{OR using } k \text{ units } \text{N m}^2 \text{ C}^{-2}]$$

$$Q_1Q_2 \text{ (or } \text{C}^2) \rightarrow \text{A}^2 \text{s}^2 \text{ (1)}$$

$$F \text{ (or } \text{N}) \rightarrow \text{kg m s}^{-2} \text{ (1)}$$

$$\rightarrow \text{(units of } k = \text{kg m}^3 \text{ A}^{-2} \text{ s}^{-4} \text{ OR (units of } \epsilon_0 = \text{kg}^{-1} \text{ m}^{-3} \text{ A}^2 \text{ s}^4 \text{ (1)}$$

OR using  $\epsilon_0$  units  $\text{F m}^{-1}$ :

$$C = \text{As} \text{ and either } F = \text{CV}^{-1} \text{ or } V = \text{JC}^{-1} \text{ (1)}$$

$$J = \text{kg m}^2 \text{ s}^{-2} \text{ or } \text{N} = \text{kg m s}^{-2} \text{ (1)}$$

$$\rightarrow \text{(units of } \epsilon_0 = \text{kg}^{-1} \text{ m}^{-3} \text{ A}^2 \text{ s}^4 \text{ (1)}$$

3

[5]

43. (a) Electron speed

Substitution of electronic charge and 5000V in  $eV$  (1)

Substitution of electron mass in  $\frac{1}{2}mv^2$  (1)

Correct answer  $[4.2 \text{ (4.19)} \times 10^7 \text{ (m s}^{-1}\text{), no ue}]$  to at least 2 sf (1)

[Bald answer scores zero, reverse working can score 2/3 only]

3

Example of answer:

$$v^2 = (2 \times 1.6 \times 10^{-19} \text{C} \times 5000 \text{ V}) / (9.11 \times 10^{-31} \text{ kg}) = 1.76 \times 10^{15}$$

$$v = 4.19 \times 10^7 \text{ m s}^{-1}$$

(b) (i) Value of  $E$

Correct answer  $[2.80 \times 10^4 \text{ V m}^{-1} / \text{N C}^{-1} \text{ or } 2.80 \times 10^2 \text{ V cm}^{-1}]$  (1)

1

Example of answer:

$$E = V/d = 1400 \text{ V} / 5.0 \times 10^{-2}$$

$$= 28\,000 \text{ V m}^{-1}$$

(ii) Value of force  $F$

Correct answer  $[4.5 \times 10^{-15} \text{ N, ecf for their } E]$  (1)

1

Example of answer:

$$F = Ee = 2.80 \times 10^4 \text{ V m}^{-1} \times 1.6 \times 10^{-19} \text{ C}$$

$$= 4.48 \times 10^{-15} \text{ N}$$

- (c) Calculation of  $h$  4  
 See  $a = \text{their } F / 9.11 \times 10^{-31} \text{ kg}$  (1)  
 $[\rightarrow a = 4.9 \times 10^{15} \text{ m s}^{-2}]$   
 See  $t = 12 (\times 10^{-2}) \text{ m} / 4 \times 10^7 \text{ m s}^{-1}$  (or use  $4.2 \times 10^7 \text{ m s}^{-1}$ ) (1)  
 $[t = d/v, \text{ with } d = \text{plate length; } 12 \text{ cm}]$   
 $[\rightarrow t = 3.0 \times 10^{-9} \text{ s, or } 2.86 \times 10^{-9} \text{ s}]$   
 See substitution of  $a$  and  $t$  values [**arrived at by above methods**] into  $\frac{1}{2} at^2$  (1)  
 Correct answer [ $h = 0.020 \text{ m} - 0.022 \text{ m}$ ] (1)  
 [Full ecf for their value of  $F$  **if** methods for  $a$  and  $t$  correct **and** their  $h \leq 5.0\text{cm}$ ]  
 Example of answer:  
 $h = \frac{1}{2} a t^2$   
 $= \frac{1}{2} \times 4.9 \times 10^{15} \text{ m s}^{-2} \times (2.86 \times 10^{-9} \text{ s})^2$   
 $= 2.0 \times 10^{-2} \text{ m}$
- (d) (i) Path A of electron beam 1  
 Less curved than original (1)
- (ii) Path B of electron beam 1  
 More curved than original, curve starting as beam enters field  
 [started by H of the Horizontal plate label] (1)  
 [For **both** curves:  
 • ignore any curvature beyond plates after exit  
 • new path must be same as original up to plates]  
 [No marks if lines not identified, OK if either one is labelled]
- [11]**
44. (a) (i) Additional force 1  
 Correct answer [ $3.9 \times 10^{-3} \text{ N}$ ] (1)  
 Example of answer:  
 $0.4 \times 10^{-3} \text{ kg} \times 9.81 \text{ N kg}^{-1} = 4 \times 10^{-3} \text{ N}$

- (ii) Explanation  
 Quality of written communication (1)  
 (Current produces) a magnetic field around the **rod** (1)  
 [Do not accept in the rod]  
 There is an interaction between the two magnetic fields / fields  
 combine to give catapult field (1)  
 Fleming's Left Hand Rule/ Fleming's Motor Rule (1)  
 The rod experiences an upward force (1)  
**Using Newton 3** → downward force on magnet Max 4
- (b) (i) Diagram  
 Lower pole labelled North/N and upper pole labelled South/S (1) 1
- (ii) Calculation of current in rod  
 Use of  $F = BIl$ . (Ignore  $10^x$ .  $F$  is their force and  $l$  is 5cm) (1)  
 See conversions; mT to T and cm to m (1)  
 Correct answer [2.6/2.7 A] (1) 3  
 Example of answer:  
 $I = 3.9 \times 10^{-3} \text{ N} / (30 \times 10^{-3} \text{ T} \times 5 \times 10^{-2} \text{ m}) = 2.6 \text{ A}$
- (iii) New reading on the balance  
 Value < 85g [not a negative value] (1)  
 84.6 g (1) 2

[11]

**45. Calculation of voltage**

Use of  $E = V/d$  [could be rearrangement] (1)

Correct answer [ $1.5 \times 10^9 \text{ V}$ ] (1) 2

Example of calculation:

$$V = Ed = 3 \times 10^5 \times 5000 \text{ V}$$

$$V = 1.5 \times 10^9 \text{ V}$$

Calculation of capacitance

Recall  $Q = CV$ (1)

Correct answer [ $2.7 \times 10^{-8} \text{ F}$ ](1) 2

Example of calculation:

$$C = Q / V$$

$$= 40 \text{ C} / 1.5 \times 10^9 \text{ V}$$

$$= 2.7 \times 10^{-8} \text{ F}$$



Resistance

Use of  $RC = 20 \text{ ms}$ , or an appropriate time (eg,  $20 \text{ ms} \div 5 = 4 \text{ ms}$ )(1)  
OR attempt to find current from  $I = Q/t$

Correct answer [ $7.5 \times 10^5 \Omega$  ( $1.5 \times 10^5 \Omega$ )](1)

Example 1:

$$\Rightarrow R = 20 \text{ ms} \div 2.7 \times 10^{-8} \text{ F} \text{ (} 4\text{ms} \div 2.7 \times 10^{-8} \text{ F)}$$
$$= 7.5 \times 10^5 \Omega \text{ (} 1.5 \times 10^5 \Omega \text{)}$$

Example 2:

$$I = 40 \text{ C} / 20 \text{ ms} = 2000 \text{ A}(1)$$


$$\Rightarrow R = \frac{V}{I} = \frac{1.5 \times 10^9 \text{ V}}{2000 \text{ A}}$$

$$\Rightarrow 7.5 \times 10^5 \Omega \text{ (1)}$$

2

[Also give credit for using “average” pd which is less than 1.5 GV  
say  $V/2 \rightarrow 3.75 \times 10^5 \Omega$ ]

Drawing of electric field region



$\geq 2$  radial lines (1)

Arrow(s) (1)

2

Electric field

$$\text{Recall } E = \frac{q}{4\pi\epsilon_0 r^2} \text{ OR } k = \frac{1}{4\pi\epsilon_0} = 9 \times 10^9 \text{ m F}^{-1} \text{ (1)}$$

Correct answer [ $1.44 \times 10^4 \text{ V m}^{-1}$ ] (1)

2

[Use of  $\frac{V}{d}$  scores 0]

Example of calculation:

$$E = \frac{q}{4\pi\epsilon_0 r^2}$$
$$= \frac{40}{(4\pi \times 8.85 \times 10^{-12} \times 5000^2)} \text{ V m}^{-1}$$
$$= 1.44 \times 10^4 \text{ V m}^{-1}$$

Lightening strike

Field stronger near cloud OR Greater force/acceleration on charges

OR Mention of force on charges OR Mention of ionising atoms by collision (1)

1

[11]

46. How electron gun creates beam of electrons

Any four from:

1. hot filament (1)
2. thermionic emission / electrons have enough energy to leave (1)
3. anode and cathode /  $\pm$  electrodes [identified] (1)
4. E-field **OR** force direction **OR** cause of acceleration (1)
5. collimation [eg gap in anode identified as causing beam] (1)
6. need for vacuum (1)

Max 4

Speed of electrons

$$(eV \Rightarrow) \frac{1}{2} mv^2 \text{ (1)}$$

Use of eV [ie substituted or rearranged] (1)

Answer [ $1.09 \times 10^7 \text{ m s}^{-1}$ ] (1)

$$1.6 \times 10^{-19} \times 340 \text{ (J)} = \frac{1}{2} \times 9.11 \times 10^{-31} \text{ (kg)} \times v^2$$

$$v = 1.09 \times 10^7 \text{ m s}^{-1}$$

3

Definition of term electric field

Region/area/space in which **charge** experiences **force** (1)  
ertical acceleration of electrons due to field

1

[Bald answer =0]

Use of equation  $E = V/d$  (1)

$$E = V/d = 2500 \text{ V} \div 0.09 \text{ m} = 28 \text{ (kV m}^{-1}\text{)}$$

Rearranged equation  $E = F/q$  or substitution into it (1)

$$F = Eq = 28 \text{ 000} \times 1.6 \times 10^{-19} \text{ (N)} = 4.4 \times 10^{-15} \text{ (N)}$$

Equation  $F = ma$  seen or substitution into it (1)

$$A = F/m = \frac{4.4 \times 10^{-15} \text{ (N)}}{9.11 \times 10^{-31} \text{ (hg)}}$$

$$= 4.9 \times 10^{15} \text{ (m s}^{-2}\text{)} \text{ (1)}$$

4

[at least 2 sig fig needed] [No u.e.] [Reverse calculation max 3]

[12]

47. (a) Advantage of avoiding metal contacts

Any one from:

- makes possible a sealed unit
- avoids electrocution
- stops corrosion (by water)
- water cannot enter/short contacts (1)

1

(b) How arrangement is able to charge the battery

Any six from:

1. current (in X) produces magnetic field
2. field links second coil
3. metal = iron
4. metal core increases field
5. field changes/alternates
6. changing  $\phi/B$  or  $d\phi/dt$  or Faraday induces/causes  $V$
7.  $V$  causes  $I$
8. diode needed (or a.c. so won't charge)
9. field penetrates plastic
10. like a transformer / X is a primary and Y is a secondary
11. electromagnetic induction

Max 6

[7]

48. (a) Direction of field lines

Downwards (1)

1

(b) (i) Calculation of force

Use of  $V/d$  i.e.  $250 \text{ V}/0.05 \text{ m}$  [if 5 used mark still awarded] (1)

Use of  $\frac{V}{d} e$  [Mark is for correct use of  $1.6 \times 10^{-19} \text{ C}$ ] (1)

$= 8.0 \times 10^{-16} \text{ N}$  (1)

3

(ii) Direction and explanation

(Vertically) upwards / towards AB (1)

No (component of ) force in the horizontal direction OR because (1)  
(the force) does no work in the horizontal direction

2

(c) Calculation of p.d.

Use of  $\Delta E_K = \frac{1}{2} mv^2 / \frac{1}{2} 9.11 \times 10^{-31} \text{ (kg)} \times (1.3 \times 10^7)^2$  (1)

Use of  $Ve / V \times 1.6 \times 10^{-19} \text{ (C)}$  (1)

$= 480 \text{ V}$  (1)

3

(d) Beam of electrons

Diagram showing:

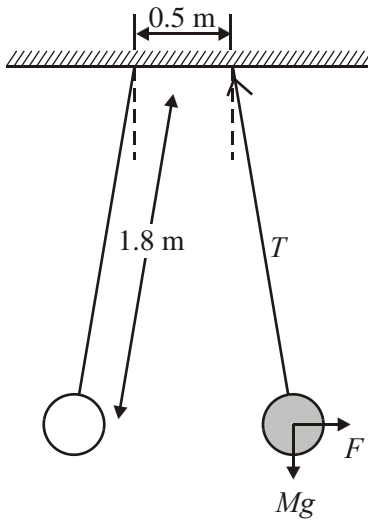
Spreading out from one point (1)  
fastest electrons labelled (1)



2

[11]

49. Minimum charge on balloon



any 2 forces correct (1)

$T$  3<sup>rd</sup> force correct (1)

2

$$F = kq_1q_2/r^2 / F = kq^2/r^2 \quad (1)$$

$$mg = T \cos \theta / T = 1.8 \times 10^{-2} \text{ N} \quad (1)$$

$$F = T \sin \theta / F = mg \tan \theta / F = 4.6 \times 10^{-4} \text{ N} \quad (1)$$

$$r = 0.5 + 2 \times 1.8 \sin 1.5^\circ (= 0.594 \text{ m}) \quad (1)$$

$$\Rightarrow q^2 = Fr^2/k = Fr^2 \times 4\pi\epsilon_0 \quad (1)$$

Max 3

$$= 0.0018 \times 9.81 \times \tan 1.5^\circ \times 0.594^2 \times 4\pi \epsilon_0$$

$$\Rightarrow q = 1.36 \times 10^{-7} \text{ C} \quad (1)$$

[NB 2 for diagram, maximum 3 for intermediate parts, and final 1 for the answer]

1

[6]

50. Results of experiments and conclusions

Most pass straight through/undeflected (1)

A few deflect/reflect (at large angles) (1)

Small nucleus/mostly empty space (1)

Concentrated mass and/or positive charge (1)

4

How to determine  $x$  graphically

Plot  $\log N$  v.  $\log (\sin \theta / 2)$  [OR  $\ln$  on both sides] [Any base] (1)

Gradient =  $x$  (1)

2

Meaning of numbers in the symbol for the gold nucleus

Bottom number: 79 protons (1)

Top number: 197 ns + ps )

OR )

197 nucleons ) (1)

OR )

$197 - 79 = 118$  ns )

2

Mass of alpha particle

Mass of alpha particle  $\approx 4 \times m_p$

$= 4 \times 1.67 \times 10^{-27} = 6.7$  [or 6.68]  $\times 10^{-27}$  kg (1)

1

Calculation of electric force

$F = kq_1q_2/r^2$  OR  $q_1q_2/4\pi\epsilon_0 r^2$  (1)

$q_1 = 79 \times 1.6 \times 10^{-19}$  C and  $q_2 = 2 \times 1.6 \times 10^{-19}$  C (1)

[stated or subbed]

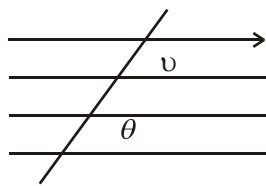
$\rightarrow F = 14.56$  N (1)

3

[12]

51. Situation to which equation refers

$F =$  force on particle (1)



$B =$  (magnetic) flux density/field strength (1)

$v =$  velocity/speed of particle } (1)

$q =$  charge of particle } (1)

$\theta =$  angle between  $B$  and  $v$ /motion /current (1)

$F$  is perpendicular to  $B$  and  $v$  (1)

[Some of these may be shown by diagram]

Max 4

Description of situation modelled by equation

Curved/circular motion of particle (1)

$p =$  momentum (1)

2

Why path of a particle is curved

Charged particles (1)

with (component of) motion perpendicular to field (1)

Force perpendicular to motion/ Fleming's L.H. rule (1)

Max 2

Why spiralling path decreases as it nears North Pole

Nearer pole  $\rightarrow$  field stronger (1)

Reference to  $r = p(mv)/Bq$  OR  $r \propto 1/B$

OR  $B$  increasing  $\rightarrow$  centripetal/inward  $F$  increases

Alternative:  $v \downarrow$  due to resistive force (1)

Reference to  $r = p(mv)/Bq$  OR  $r \propto p/v$

2

[10]

52. Explanation of why resultant flux in iron core is zero

Same current (in both coils) OR same turns (1)

Wound opposite ways (1)

2

OR leading to cancelling of magnetic effects

Explanation of how RCCB breaks circuit

Any five from:

Different currents give different (noncancelling) effects (1)

∴ net B OR  $\phi/B \neq 0$  (1)

Faraday/changing  $\phi/B$  (1)

⇒  $V$  induced in third coil [“ $I$  induced” is 4<sup>th</sup> (1) only] (1)

⇒  $I$  in third coil/relay coil (1)

⇒ relay coil magnetized (1)

⇒ relay contact opens (1)

Max 5

[7]

53. What happens in circuit after switch closed then opened again

Any seven from:

S closed → C charges (1)

up to  $V_s$  (1)

Instantly/very quickly (1)

S open: discharge starts (1)

Exponential discharge (1)

$$(V_c = V_s e^{-t/RC})$$

$$\frac{3}{4} V_s = V_s e^{-t/RC} \text{ (1)}$$

$$\Rightarrow \ln \frac{3}{4} = -t/RC \text{ (1)}$$

$$\Rightarrow t = 29.7 \text{ s OR } RC = 103 \text{ s [if no other calculation] (1)}$$

Buzzer sounds for 29.7 s [ecf] (1)

Max 7

[Marks 1-5 and mark 9 are available via appropriate graph. For mark 5 graph must have axes labelled with a  $V/Q/I$  and same  $t$ , and a recognisable exponential curve.]



54. Meaning of uniform magnetic field

Magnetic flux density constant / magnetic field lines parallel / (1)  
magnetic field strength is constant/ does not vary 1

Sizes and directions of forces on LM and NO

Force on LM:  $2.4 \times 10^{-4}$  N/ 0.24 mN (1)

Direction:

Downwards/into (paper) (1)

Force on NO: )

$2.4 \times 10^{-4}$  N / 0.24 mN [No unit penalty] ) Must have both (1) 3

Direction: )

Upwards / out of (paper) )

Why no forces on MN and OL

Wires/current and B field directions are parallel [allow 'same direction'] / field due to current and B field of magnet are perpendicular to each other (1) 1

The effect on the square

A (turning) moment will be applied / it will (begin) to turn / spin / rotate (1) 1

Moving the pole pieces further apart

Reduces the size of the forces, (1)

Because the flux density is reduced/ magnetic field (strength) reduced / B (field) reduced (1) 2

[8]

55. Charge on capacitor

$$220 \mu\text{F} \times 5 \text{ V} \text{ [use of CV ignore powers of 10]} \text{ (1)} \\ = 1100 \mu\text{C} \text{ (1)} \quad 2$$

Energy on capacitor

$$\frac{220}{2} \mu\text{F} \times (5 \text{ V})^2 / \frac{1100}{2} \mu\text{C} \times 5 \text{ V} / \frac{1100^2 \mu\text{C}^2}{2 \times 220 \mu\text{F}} \text{ [ignore powers of 10]} \text{ (1)} \\ = 2750 \mu\text{J} (2.8 \times 10^{-3} \text{ J}) \text{ (1)} \quad 2$$

Experiment

Method 1 (constant current method):

- Circuit (1)
- For a given  $V$  record time to charge capacitor at a constant rate (1)
- for a range of values of  $V$  (1)
- Use  $Q = It$  to calculate  $Q$  (1)
- Plot  $Q \rightarrow V$ – straight line graph through origin / sketch graph / divide  $Q/V$  and obtain constant value (1)

Method 2:

- Circuit (1)
- For a given value  $V$  measure  $I$  and  $t$  (1)
- Plot  $I \rightarrow t$  find area under graph  $Q$  (1)
- Repeat for a range of values of  $V$  (1)
- Plot  $Q \rightarrow V$  for straight line graph through origin/ sketch graph / divide  $Q/V$  and obtain constant value (1)

Method 3 (joulemeter method):

- Circuit (1)
- Record  $V$  and energy stored (1)
- For range of  $V$  (1)
- Determine  $Q$  from  $\frac{1}{2} QV$  or  $\frac{Q^2}{2C}$  (1)
- Plot  $Q \rightarrow V$ – straight line graph through origin / sketch graph / divide  $Q/V$  and obtain constant value (1) 5

[Coulombmeter (will not work with this value of capacitor)  
circuit (1) ; record charge  $Q$  on coulombmeter (1); for a range of values of  $V$  (1); Plot  
 $Q \rightarrow V$  for straight line through origin (1) – Max 3]

[9]

56. Lenz's law

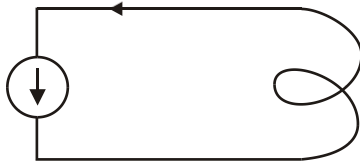
The direction of an induced current/emf/voltage is such as (1)  
to oppose the change (in flux) that produces it (1)

2

Polarity at top of coil

North (1)

Direction of current



Only ONE arrow required (1)

2

Graph

Magnet is moving faster / accelerating (under gravity) (1)

(Rate of) change/ cutting of flux is greater (1)

Induced emf is greater (1)

Max 2

[6]

57. Explanation of what has happened in circuit

Charging process (1)

Plates oppositely charged OR charge moves from one plate to another (1)

Charge flows anticlockwise OR electrons flow clockwise OR left  
plate becomes positive OR right plate becomes negative (1)

Build up of  $Q/V$  reduces flow rate (1)

Max 3

Explanation of what would have been seen

Same as ammeter 1 (1)

Reason: Same  $I$  everywhere OR series circuit OR same  $I/Q$  in each  
component (1)

2

Estimate of charge

Attempt to find area under correct region of graph (1)

= 52  $\mu\text{C}$  (1)

2

[Allow 45 – 65  $\mu\text{C}$ ]

Estimate of capacitance

p.d. across resistor at  $t = 10 \text{ s} = 100 \times 10^3 \Omega \times 3 \times 10^{-6} \text{ A} = 0.3 \text{ V}$  (1)

(hence p.d. across capacitor =  $1.5 \text{ V} - 0.3 \text{ V} = 1.2 \text{ V}$ )

$$C = \frac{Q}{V} = \frac{5 \times 10^{-5} \text{ C}}{1.2 \text{ V}} \text{ (equation or sub) [ecf] (1)}$$

$C = 42 \mu\text{F}$  [If 1.5 V is used to obtain  $C = 33 \mu\text{F}$ , then 2/3] (1) 3

Alternative method using  $e^{-t/RC}$

Correct answer appropriate to set of values (1)

Correct ln line (1)

Correct answer (40–44 $\mu\text{F}$ ) (1)

Alternative method using  $T = RC$

Using  $T = RC$  (1)

Appropriate  $T$  value (1)

$\Rightarrow$  correct answer (1)

Observations

Same picture as before (1)

since same  $\Delta V$  (1) 2

[OR C now carries twice the previous charge]

[12]

**58.** Meaning of  $E$

Voltage/e.m.f. (1)

Induced/caused/created (when magnetic field/flux changes) (1) 2

Definition of  $\phi$

$$\phi = BA \text{ (1)}$$

(Magnetic) flux OR magnetic field lines (1) 2

Additions to diagram of paths of currents

Joined up, and one each side and wholly on disk (1) 1

Explanations

- (i) Disc cuts  $B/\phi$  [relative motion implied] ( $\Rightarrow V/I$  induced) (1)
- (ii)  $B + I$  [or two interacting magnetic fields]  $\Rightarrow$  force (1)  
Lenz or LH rule ( $\Rightarrow$  opposing force) OR energy argument (1) 3

Explanation of reasoning

Mention of  $F = BIl$  (1)

$B \propto I_b$  (1)

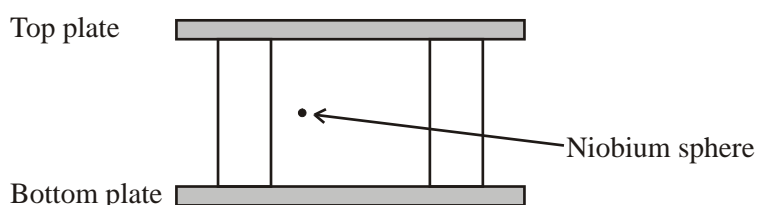
$I$  (in disc)  $\propto B/\phi$  (1) 3

[11]

59. Addition to diagram

2 lines or more, vertical (1)

Arrow downwards (1) 2



Electric field strength

$E = V/d$  OR  $2000 \div (0.8 \times 10^{-2})$  (1)  
 $= 250\,000 \text{ V m}^{-1}$  OR  $\text{N C}^{-1}$  [OR  $2500 \text{ V cm}^{-1}$ ] (1) 2

$(2.5 \times 10^5)$

Magnitude of charge

$F = ma$  OR  $1.8 \times 10^{-7} \times 3.0 \times 10^{-7}$  (N) OR  $5.4 \times 10^{-14}$  (N) (1)  
 $(F = Eq \Rightarrow) q = F/E$  OR  $5.4 \times 10^{-14} / 2.5 \times 10^5$  (C) (1)  
 $= -2.16$  (2, 2.2)  $\times 10^{-19} \text{ C}$  (1) (1) 4

[NB 1 mark for  $-$ , 1 mark for rest of answer]

Why a vacuum

Air/gas/molecules would **alter acceleration** OR provide another force OR collide with niobium sphere (1) 1

[9]

60. F proportional to I  
 Quality of written communication (1)  
 Any two from:  
 [In words or on diagram]
- Method of producing and measuring a varying direct current
  - Wire perpendicular to B field
  - Method of measuring/determining forces, e.g. moments / acceleration (1) (1)

Graph of  $F - I$  straight line through origin for  $F =$  added weight (1) 4

[OR correct straight line if  $F$  is total weight OR  $\frac{F}{I}$  constant]

Calculation of Initial acceleration

$$\begin{aligned}
 F &= BIl \\
 &= 0.20 \text{ T} \times 4.5 \text{ A} \times 5.0 \times 10^{-2} \text{ m} \\
 &= 4.5 \times 10^{-2} \text{ N} \\
 a &= F/m \\
 &= \frac{4.5 \times 10^{-2} \text{ N}}{50 \times 10^{-3} \text{ kg}} \\
 &= 0.90 \text{ m s}^{-2}
 \end{aligned}$$

Recall/state/use  $F = ma$  and  $F = BIl$  (1)

Use  $5.0 \times (10^{-2} \text{ m})$  for length (1)

Conversion of g to kg  $50 \times 10^{-3}$  (1)

$a = 0.90 \text{ m s}^{-2}$  (1) 4

[8]

61. E.m.f.  
 Motion of magnet (1)  
 produces changing magnetic field over the coil (1) 2  
 OR  
 Field lines (of magnet) cut across coil  
 OR  
 Produces changes in flux linkage between coil and magnets  
Diagram  
 X at both ends of path (1)  
 X in middle of path (1) 2

Rate of change of flux

$$\frac{\Delta\phi}{\Delta t} = \frac{3 \times (10^{-3})(V)}{500} \quad (1)$$

$$= 6.0 \times 10^{-6} \text{ wb s}^{-1}/\text{V/T m}^2 \text{ s}^{-1} \quad (1) \quad 2$$

Changes to apparatus

Any three from:

- more coils
- stronger magnet [Accept 'more powerful']
- decrease length of suspension ) [Not just 'increase']
- larger amplitude ) speed of magnet]
- larger cross sectional area of coil
- iron core within coil (1) (1) (1) 3

[9]

**62.** Diagram

Electric pattern:

Straight, parallel, reasonably perpendicular to plates and equispaced

[Minimum 3 lines] (1)

Correct direction labelled on one line [Downwards arrow] (1) 2

Equipotential lines:

Any two correct equipotentials with any labelling to identify potentials (rather than field lines) (1) 1

[Arrows on electric field lines – none on equipotential being sufficient labelling]

Force

$$E = \frac{3000V}{25 \times (10^{-3})\text{m}} \quad [\text{Correct substitution}] \quad (1)$$

Use of  $F = Ee$  even if value of "e" is incorrect (1)

$$F = 120 \times (10^3) \text{ V m}^{-1} \times 1.6 \times 10^{-19} \text{ C} \\ = 1.9 (2) \times 10^{-14} \text{ (N)} \quad (1) \quad 3$$

Graph

Straight horizontal line [Even if extending beyond 25 mm] (1)  
Value of  $F$  marked [e.c.f. their value] provided graph begins on force axis and is marked at this point (1) 2

Speed

Use (1)

$eV = \frac{1}{2} mv^2$ $v^2 = 2 eV/m$	$v^2 = 2 \left( \frac{F}{m} \right) s$	$Fd = \frac{1}{2} mv^2$ $v^2 = 2Fd/m$
---	--	--

Substitution (1)

$$V^2 = \frac{2 \times 1.6 \times 10^{-19} (\text{C}) \times 3000 (\text{V})}{9.11 \times 10^{-31} \text{kg}}$$

$$= 2 \frac{(1.92 \times 10^{-14} \text{N})}{9.11 \times 10^{-31} \text{kg}} \times 25 \times 10^{-3} \text{m}$$

$$= \frac{2 \times 1.92 \times 10^{-14} \text{N} \times 25 \times 10^{-3} \text{m}}{9.11 \times 10^{-31} \text{kg}}$$

Answer:  $V = 3.2 \times 10^7 \text{ ms}^{-1}$  (1)

3

[If  $F = 2 \times 10^{-14} \text{ N}$ , then  $V = 3.3 \times 10^7 \text{ ms}^{-1}$ ]

[11]

**63.** Formula for magnitude of force

$F = Eq$  (1)

1

Direction

Down page (1)

1

Calculation

$Eq = Bqv$  (1)

$\rightarrow v = E/B$  (\*)

$= 1.2 \times 10^4 / 0.4 \text{ ms}^{-1}$  (\*)

(\*) [Equation or substitution] (1)

$v = 3 \times 10^4 \text{ ms}^{-1}$  (1)

3

Explanation

$mg \ll eE$  and/or  $Bqv$  (1) (1)

[OR gravity force  $\ll E$  and/or B force

2 marks

OR  $m$  very small

1 mark only

OR gravity is a weak force

1 mark only

2

OR ion moving fast

1 mark only]

[7]



64. Alpha particle: diagram
- Curving path between plates 1
- Towards 0 V plate 1
- Emerging from plates and carrying on straight 1

Calculation

$$\text{Electric field} = \frac{2000 \text{ V}}{10 \times (10^{-3}) \text{ m}}$$

Substitution 1

$$\text{Force} = EQ$$

$$= \left( \frac{2000}{10 \times 10^{-3}} \right) \text{Vm}^{-1} \times (2) \times 1.6 \times 10^{-19} \text{ C}$$

Substitution [ecf their  $E$ ] 1

$$= 6.4 \times 10^{-14} \text{ N}$$

Correct answer 1

[6]

65. Horizontal component

$$4.8 \times 10^{-5} \text{ T} \times \cos 66^\circ$$

$$= 1.95 [2.0] \times 10^{-5} \text{ T}$$

Use  $\cos 66^\circ / \sin 24^\circ$  1

Answer 1

Calculation of induced voltage

$$\text{Speed after 2 seconds} = 9.81 \text{ m s}^{-2} \times 2 \text{ s} \quad 1$$

[ecf their B]

$$\text{Induced e.m.f.} = 1.95 \times 10^{-5} \text{ T} \times 2.5 \text{ m} \times [9.81 \text{ m s}^{-2} \times 2 \text{ s}] \quad 1$$

$$= 9.6 \times 10^{-4} \text{ V} \quad 1$$

North-south rod

Induced emf = 0 (V) 1

Rod does not cut magnetic field lines/no flux cutting/no change in flux 1

[7]

66. (i) Protons are positively charged / like current 1  
refer to Fleming or motor rule /  $Rev$  /  $Bqv$  / perpendicular  $F$  and 1  
 $v$   
[**not** right hand rule ]
- (ii)  $m \frac{v^2}{r} = Bev$   $mr\omega^2 = Bev$  2  
[accept  $q$  for  $e$  ]  
 $v = \frac{2\pi r}{T} / \frac{\pi r}{t}$   $\omega = \frac{2\pi}{T} / \frac{\pi}{t}$  1
- (iii) Quality of written communication 1  
Each time it crosses gap/between dees it accelerated / is 1  
attracted / is given  $E$   
Idea that p.d. between the dees reverses while the proton 1  
completes half a revolution / c.e.p.  
As energy becomes large the mass/inertia of the proton increases 1  
[**not** protons hit edge ]  
so it cannot exceed the speed of light [i.e. ref to  $c$  ]/synchronous 1  
property breaks down/formula no longer gives constant  $f$
- (iv)  $\Delta E = (1.6 \times 10^{-19} \text{ C}) (12000 \text{ V})$  [allow  $\times 12$ ] 1  
 $= 1.9/1.92 \times 10^{-15} \text{ (J)}$  [no e.c.f.] 1
- (v)  $r^2 = 2m \times \text{k.e.} \div B^2 e^2 r = \sqrt{\text{same}}$   
Substitute  $1.66 / 1.7 \times 10^{-27} \text{ kg} / 1860 m_e / 2000 m_e$  and  
 $1.6 \times 10^{-19} \text{ C}$  1  
Use of k.e. =  $(1.9 \times 10^{-15} \text{ J}) \times 850$  1  
[e.c.f. for  $1.9 \times 10^{-15} \text{ J}$  e.g.  $2 \times 10^{-15} \text{ J} \Rightarrow 1.7 \times 10^{-12} \text{ J}$ ]  
 $\Rightarrow r = 0.575 \text{ m} / 57.5 \text{ cm}$  1  
 $[2 \times 10^{-15} \text{ J} \Rightarrow 0.59 \text{ m}]$   
 $[9.1 \times 10^{-31} \text{ kg} \Rightarrow 0.0137 \text{ m e.o.p. max } 1/3]$

[15]

**67. Energy stored in a capacitor**

Justify area:  $W = QV$

OR

work/area of thin strip =  $V \times \Delta Q$  (1)

Area under graph (1)

2

Energy stored when capacitor charged to 5000 V

$$W = \frac{1}{2} QV = \frac{1}{2} \times 0.35 \times 5000 \text{ J}$$

$$= 875 \text{ J (1)}$$

1

Time constant for circuit

$$5000/e \text{ or } 3 = 1840/1667 \text{ V (1)}$$

$$\Rightarrow \text{T.C} = 3.3 \text{ m s [3.1 – 3.6 m s] (1)}$$

OR

Initial tangent  $\rightarrow t$ -axis (1)

Accept between 3.5 and 4.0 m s (1)

2

[Also allow use of exponential formula with appropriate substitution of correct  $V$  and  $t$ , e.g. 2000 and 3 ms]

Capacitance

$$C = \frac{T}{R} \text{ or as numbers (1)}$$

$$3.3 \text{ m s} \rightarrow 7.0 \times 10^{-5} \text{ F [Allow e.c.fs.]}$$

$$4.0 \text{ m s} \rightarrow 8.5 \times 10^{-5} \text{ F (1)}$$

2

[OR using graph:  $C = Q/V$  (1)

$$= 0.35/5000 = 7.0 \times 10^{-5} \text{ F (1)}$$

Energy left in capacitor

At 2 ms,  $V = 2700 \text{ V [2600 – 2800] (1)}$

$$\Rightarrow E = \frac{1}{2} CV^2 \text{ OR } \frac{1}{2} QV$$

$$= 255 \text{ J [e.c.f, depends on method] (1)}$$

2

Energy setting

$$\text{Energy leaving capacitor} = (875 - 255) \text{ J}$$

$$= 620 \text{ J [e.c.f] (1)}$$

$$\text{Energy delivered} = 620 \times 60/100 \text{ J}$$

$$= 372 \text{ J}$$

$$\Rightarrow 380 \text{ J setting [Allow e.c.f] (1)}$$

2

[11]

**68.** Electric field

$$\frac{100(\text{V})}{300 \times 10^{-6}(\text{m})} \text{ (1)}$$

$$= 3.3 \times 10^5 \text{ V m}^{-1} \text{ (1)}$$

2

Force

$$F = Eq = 3.3 \times 1.6 \times 10^{-19} \text{ (N)}$$

$$= 5.3 \times 10^{-14} \text{ N [Allow e.c.f] (1)}$$

2

Why force has this direction

Vertical line  $\uparrow$  (1)

Attracted to positive plate  
OR in terms of field direction } (1)

2

How much energy hole gains

$$W = F \times d = 5.3 \times 10^{-14} \times 2.8 \times 10^{-10} \text{ (J) (1)}$$

$$= 1.5 \times 10^{-23} \text{ J [Allow e.c.f] (1)}$$

2

[8]

**69.** How torch works and factors which affect brightness

At least two lines leaving N and S pole, diverging and crossing wires (1)

Arrow leaving N pole/towards S pole (1)

Field/flux lines cut wires (1)

→ changing  $B/\phi$  OR  $\frac{d\phi}{dt}$  OR Faraday's law causes  $V$  or  $I$  (1)

If causes  $V$  followed by causes  $I$  (1)

Any two of rotation, field strength, number of coils (1)

Appropriate direction e.g. faster rotation brighter/more  $V/I$  (1)

$R \downarrow \Rightarrow$  brighter (1)

[Max 6]

70. Reason

Even a very small resistance (in series) with 2000 A through it would generate much heat

[Answer must refer to where heating effect occurs]

OR

Such a big current would need thick wires in the meter design

OR

Have to break circuit to insert meter (1)

1

Explanation

Any four from:

- $I_1$  causes flux (in iron ring and coil)
- (flux) in iron ring/coil
- changing  $I_1 \Rightarrow$  changing flux
- $\therefore V$  in coil induced /  $V = N \frac{d\phi}{dt}$  /cutting flux /Faraday's law in context/  
 $I$  induced (1) (1)
- $V$  in coil  $I \Rightarrow I$  in coil (1) (1)

4

[5]

71. Observations of circuits

Any six from:

- capacitor is charged
- energy stored in  $C$ /goes to lamps...
- $\rightarrow$  heat and light in lamp
- as  $I/Q$  passes through lamp/discharges through lamp
- $E = \frac{1}{2} CV^2$
- $\Rightarrow V \times 2 \Rightarrow E \times 4$
- (hence) 4 lots of energy/4 lamps lit similarly

- 
- 5 V across 1 lamp  $\equiv$  same  $Q$  through each lamp as before
- discussion of  $T = RC$
- $R$  same for both circuits
- flash is bright and dies exponentially (1) (1) (1)
- $V \times 2 \rightarrow Q \times 2$  (1) (1) (1)
- $\rightarrow$  same  $Q$  or  $I$  as before alone each parallel branch

[6]

72. Faraday's law of electromagnetic induction

The induced e.m.f. (1)  
in a conductor is equal to/proportional to  
the rate of change of magnetic flux linkage (1)

OR

$$E = (-) \frac{d\phi}{dt} \text{ or } E \propto \frac{N\Delta\phi}{\Delta t} \text{ [Accept } \Delta\phi \text{ or } d\phi]$$

$E$  – induced voltage

$d\phi$  – change of magnetic flux (1)

$dt$  – time

[All symbols defined]

2

Conversion of sound waves into electrical signals

Any four from:

- quality of language (1)
- sound waves make the diaphragm/coil vibrate/oscillate (1)
- coil: change in flux linkage/coil cuts field lines (1)
- induced voltage across coil (1)
- frequency of sound wave is frequency of induced voltage/current/  
electrical wave (1)

Max 4

[6]

73. Calculation of charge

$$6000 \text{ V} \times 20 \times 10^{-6} \text{ F} \text{ (1)}$$

$$= 0.12 \text{ C} \text{ (1)}$$

2

Energy stored in capacitor

$$\left( \frac{CV^2}{2} \right) \frac{20 \times 10^{-6} \text{ C} \times (6000 \text{ V})^2}{2} \text{ (1)}$$

$$= 360 \text{ J} \text{ (1)}$$

2

Resistance

$$\frac{6000 \text{ V}}{40 \text{ A}} = 150 \Omega \quad (1)$$

1

Time to discharge capacitor

$$\text{Time} = \frac{0.12 \text{ C}}{40 \text{ A}} \text{ /their } Q \quad (1)$$

$$= 0.0030 \text{ s} / 3.0 \times 10^{-3} \text{ s [e.c.f.]} \quad (1)$$

2

Reason

Time is longer because the rate of discharge decreases/ current decreases with time (1)

1

[8]

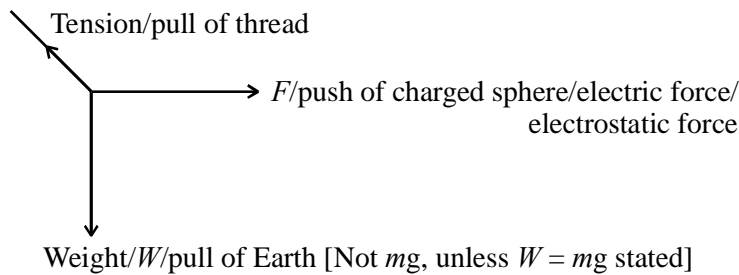
74. Free-body force diagram

Tension/pull of thread (1)

F/push of charged sphere/electric force/electrostatic force (1)

Weight/W/pull of Earth [Not  $mg$ , unless  $W = mg$  stated] (1)

3



Force equation

$$W = T \cos \theta \quad (1)$$

$$F = T \sin \theta \quad (1)$$

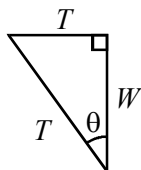
Processing mark, e.g.  $F = \frac{W}{\cos \theta} \sin \theta$  OR  $\tan \theta = \frac{\sin \theta}{\cos \theta} \quad (1)$

OR

F, T, W labelled (1)

both angles labelled (1)

2



Table

Distance  $r = 36 \times 10^{-3}$  m

$F = 35.5/36$  [No u.e.] (1)

Distance  $r = 27 \times 10^{-3}$  m

Using any pair of values (1)

Seeing correct constant for their pair of values (1)

$\rightarrow F = 63.1$  [n.o u.e.] (1)

OR

Valid simple ratio calculation using a pair of values (1)

stating produce  $Q_1Q$  or  $kQQ_2$  constant (1)

$\rightarrow F = 63.1$  [no u.e.] (1)

4

Measurements taken quickly because

Leakage/discharge of charge [Allow dissipation or description of process] (1)

1

[10]

75. (i)  $W_c = \frac{1}{2} CV^2 = \frac{1}{2} (0.0047 \text{ F}) (25 \text{ V})^2$  [Ignore  $10^n$ ] (1)  
 $= 1.5 \text{ J} / 1.47 \text{ J}$  [no e.c.f.] (1)

2

Quality of written communication

$W_c$  is (very) small (1)

Even at 50 V it is only 6 J (1)

Any  $\Delta T$  is difficult to measure/wire spread out/ (1)

something like a thermocouple is needed (1)

Wire (might) melt/fuse (1)

Heat/energy loss to air/surroundings [not to connecting wires] (1)

Max 4

- (ii) Exponential (decay) (1)

Radioactive decay/radioactivity [independent] (1)

Use of one of *five* approved methods [Name it] (1)

Data off graph appropriate to method [ignore  $10^n$ ] (1)

Use of  $RC$ /use of  $R = V/I$  (1)

$R = 7.2 \Omega - 8.5 \Omega$  [no e.c.f.] (1)

[7200  $\Omega$  – 8500 gets 3/4]

6

[12]

Methods:

M1  $RC = \text{time to } Q_0 \div e$  [35 – 39 ms]

M2  $RC \ln 2 = t_{1/2}$  [24 – 28 ms]

M3  $RC =$  where initial tangent hits  $t$  axis [32 – 40 ms]

M4 Use of  $RC$  in  $Q = Q_0 e^{-t/RC}$  with numbers

[ $\approx$  correct]

M5 Calculation of  $T_0$  initial current from gradient

[2.7 – 3.0 A]



76. How movement of magnet produces voltage shown on c.r.o screen

Any 4 from:

- Boxes correct
- Mention of Faraday's law/equation/word description
- Flux max when magnet vertical / box 1 / box 3
- Flux zero when magnet horizontal / box 2 / box 4
- When flux max, not changing,  $V = 0$
- When flux changing fastest,  $V$  max
- Appropriate comment about sense of voltage, e.g., when poles reversed,  $V$  reversed

4

Differences between figures (i) and (ii)

Qualitative points: (max 2)

(Faster turning, giving)  $\frac{d\phi}{dt} \uparrow$  (1)

=  $V \uparrow$  and  $f \uparrow$  OR  $T \downarrow$  (1)

OR

Quantitative points: (max 3)

$(f \times 2 =) \frac{d\phi}{dt} (\text{max}) \times 2$  (1)

=  $V \times 2$  (1)

$f \times 2$  (OR  $T \div 2$ ) (1)

3

-

Flux at each end of magnet

Area 1 big square =  $100 \mu(\text{Vs})$  or  $100 \times 10^{-6} (\text{Vs})$

OR area of 1 little square =  $4 \mu(\text{Vs})$  or  $4 \times 10^{-6} (\text{Vs})$

OR area = 32 little squares (29 – 35)

OR area =  $4/3$  big squares (1.2 – 1.4) (1)

Area =  $130 \times 10^{-6} (\text{Vs})$  (120 – 140) (1)

$\Phi = \text{Area} / 2 \times 240$

=  $2.7 \times 10^{-7} \text{ Wb}$  (2.5 – 2.9) (1)

3

Magnetic flux density at end of bar magnet

$$B = \Phi/A \text{ OR } \Phi = BA \text{ OR } A = 0.01 \times 0.005 \text{ OR } A = 5 \times 10^{-5} \text{ m}^2 \text{ (1)}$$

$$= 3.0 \times 10^{-7} / 5.0 \times 10^{-5}$$

$$= 6.0 \times 10^{-3} \text{ T (accept Wb m}^{-2}\text{) (1)}$$

2

[12]

77. Calculation of energy:

$$E = \frac{1}{2} CV^2 \text{ (1)}$$

$$= \frac{1}{2} \times 100 \times 10^{-6} \text{ F} \times (4 \text{ V})^2$$

$$= 8 \times 10^{-4} \text{ J (1)}$$

2

Parts of circuit which will transfer energy to surroundings:

$S_s$  / the wires between it and C

1

Discussion:

No – negligible energy

1

Completion of graph:

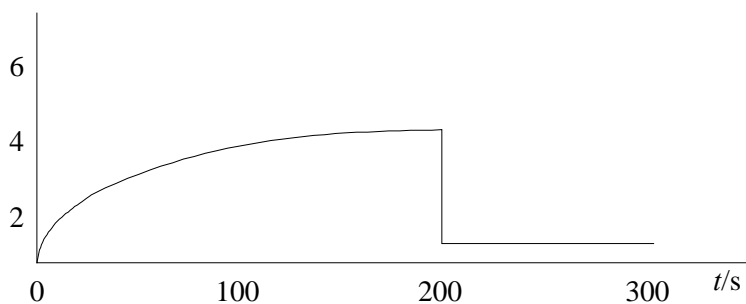
Convex curve up from 0 (1)

through (200, 4) (1)

Then drops to zero (1)

3

p.d./V



Approximate value for R:

Time constant =  $RC$  (1)

$$\Rightarrow R = 200 \text{ s} / 100 \mu\text{F}$$

$$= 2 \times 10^6 \Omega \text{ [Allow } 1.6 - 2.2 \text{ M}\Omega\text{] (1)}$$

2

Discussion of effect of increasing resistance,  $R$ :

$R$  goes up  $\Rightarrow T$  goes up (1)

$T$  goes up means longer toasting (1) 2

[11]

78. (a) The origin of the induced e.m.f.:

Faraday's law (1)

As conductor cuts field lines (1)

Electrons experience force along wire (1)

$\Rightarrow$  move to one end  $\Rightarrow$  e.m.f. (1) 3

(b) Reduction in orbit height due to flow of current:

Current + field  $\Rightarrow$  force OR Fleming L H rule (1)

Lenz's law: (1)

Force opposes motion (1)

Orbiting craft lose energy/speed (1) 3

[Max 5]

79. Relationship between current and charge:

Current is the rate of flow of charge/rate of change of charge OR current is charge per second

OR  $I = Q/t$  (with or without  $d$  or  $\Delta$ ) but with symbols defined (1)  
1

Explanation:

Since  $I$  is constant,  $Q$  on capacitor ( $= It$ ) increases at a steady rate OR charge flows at a constant rate (1)

Since  $V \propto Q$ ,  $V$  also increases at a steady rate (1)

OR

$V = Q/C = It/C$  (1)

and  $V = (I/C) \times t$  compared with  $y = (m) \times x$  2

Determination of current, using graph:

Use of $Q = CV$	Attempt to get grad	(1)	
Use of $I = Q/t$	Use of $I = C \times \text{grad}$	(1)	
= 1.1 mA	1.1 mA	(1)	3

Explanation:

Decrease [If increase, 0/3]	(1)	
As capacitor charges, $V_R$ decreases	(1)	
R must decrease because $I = V_R/R$ OR $R$ must decrease to prevent $I$ falling	(1)	3

Second graph:

Line added to graph showing:		
Any curve getting less steep with time [from origin; no maximum]	(1)	
And with same initial gradient as original straight line	(1)	2

[11]

**80.** Calculation of potential difference:

Use of $E = V/d$ [ $d$ in m or cm]	(1)	
$V = 90$ kV	(1)	
Calculation of maximum kinetic energy:		
Use of $\times 1.6 \times 10^{-19}$ [in $E = qV$ e.c.f. value of $V$ ] $1.4 \times 10^{-14}$ (J)	(1)	
[e.c.f. their $V \times 1.6 \times 10^{-19}$ ]	(1)	4

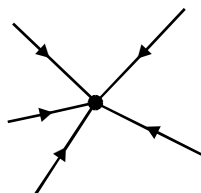
Maximum speed of one of these electrons:

Use of  $k.e. = \frac{1}{2} m v^2$  with  $m = \underline{9.1 \times 10^{-31} \text{ kg}}$  (1)

[Full e.c.f. their k.e. possible; make sure  $v$  is speed term]

$= 1.8 \times 10^8 \text{ m s}^{-1}$  [u.e. but only once] (1)

Diagram:



2

At least 3 radial lines touching object (1)

Direction towards electron (1)

2

Expression for electric potential  $V$ :

$$V = \frac{1}{4\pi\epsilon_0} \times \frac{1.6 \times 10^{-19}}{r} \quad \text{OR} \quad \frac{e}{4\pi\epsilon_0} r \quad \text{OR} \quad \frac{1.44 \times 10^{-9}}{r}$$

[not  $k$  unless defined]  $\left[ \text{Not } \frac{Q}{4\pi\epsilon_0 r} \text{ unless } Q \text{ defined} \right]$

[With or without “-” sign] (1)

1

[9]

81. Flux through closed window:

$$\text{Flux} = 20 \times 10^{-6} \text{ T} \times (1.3 \times 0.7) \text{ m}^2$$

[if two equations, must use  $(1.3 \times 0.7)$  each time] (1)

$B_H$  chosen OR area correct (1)

$$= 1.8 \times 10^{-5} \text{ Wb/T m}^2$$

2

Average e.m.f. induced:

$$E = \frac{1.8 \times 10^{-5} \text{ Wb}}{0.8 \text{ s}} \text{ [e.c.f.]} \quad (1)$$

$$= 2.3 \times 10^{-5} \text{ V} \text{ [} 5.6 \times 10^{-5} \text{ V if } B_v \text{ used]} \quad (1)$$

2

Effect on induced e.m.f. of converting window: (1)

Zero induced e.m.f. [Not “very small”]

No change in flux linkage OR no flux cut OR e.m.fs. in opposite sides cancel out 2/2  
[Consequential] (1)

2

[6]

82. Exponential shape (1)

Value at RC > 1.5 V [only if shape correct] (1)

Levels off at 3 V (1) 3

Why movement of diaphragm causes p.d:

No movement, no change in C, no signal (1)

OR moving diaphragm changes C

As C changes so V changes (1)

$V_C + IR$  is constant (1)

Hence IR changes – signal (1) 4

OR for last 3 marks

As C changes Q changes

Q flows through R

hence  $V = IR$  for resistor as signal 7

83. Credit to be given for all good, relevant Physics

**Examples** of mark scoring points [each relevant formula is also worth 1 mark]:

Between plates field is uniform

Acceleration is constant

Energy gained = 2000e

All ions have same F or same energy

From hole to detector is zero field/force

Ion travels at constant speed

g negligible

time proportional to 1 /velocity

time proportional to 1 /mass

in a vacuum there are no collisions or friction forces

[Max 7]

84.

Estimation of charge delivered:

Charge = area under graph (1)  
= a number of squares  $\times$  correct calculation for charge of one square i.e. correct attempt at area e.g. single triangle (1)  
=  $(3.5 \text{ to } 4.8) \times 10^{-3} \text{ C (A s, } \mu\text{A s) (1)}$

[Limit = triangle from 41  $\mu\text{A} \rightarrow 300 \text{ s}$ ]

OR

Charge = average current  $\times$  time (1)  
= (something between 10 and 20  $\mu\text{A}$ )  $\times 300 \text{ s (1)}$   
=  $(3.5 \text{ to } 4.8) \times 10^{-3} \text{ C (1)}$  3

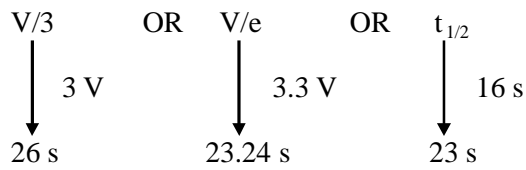
[But  $Q = It \rightarrow 0/3$ , e.g. 41  $\mu\text{A} \times 300 \text{ s}$ ]

Estimation of capacitance

C = calculated charge/9.0V time constant  $\approx 100 \text{ s (1)}$   
= 390 to 533  $\mu\text{F}$   $C = 100 \text{ s}/220 \text{ k}\Omega = 450 \mu\text{F (1)}$  2

[5]

85. Estimate of time constant, using graph:



Method (1)

Value 23 → 26 s (1)

2

Calculation of resistance and hence capacitance:

$$R = \frac{V}{i} \text{ OR } \frac{9}{0.19 \times 10^{-3}} \text{ (1)}$$

Resistance = 47 kΩ [ue] (1)

Substitute in  $t = RC$  [e.c.f their  $t$ , their  $R$ ] OR answer 300 μF

Capacitance = 500 μF (1)

3

Addition to graph of line showing how potential difference varies with time:

A curve of shape shown below, i.e. getting less steep (1)

Any convex curve ending at  $\approx 7.5$  V, crossing at  $\approx 15$  s (1)

2

[7]

86. Calculation of e.m.f. induced across falling rod:

Correct use of  $E = Blv$  (1)

$v = 25 \text{ m s}^{-1}$  (1)

e.m.f. =  $7.3 - 7.4 \times 10^{-4}$  V (1)

3

Explanation of why magnitude of vertical component is not required:

Earth's field is parallel to direction of fall/body falls vertically (1)

Therefore no flux cut (1)

2

[5]

87. Forces acting on molecule, shown on diagram A:

Forces not collinear and sense correct (1)

1



Explanation of why molecules align with field:

Forces not in same line (1)

Hence turning effect [OR torque] 2

Field lines shown on diagram B:

At least three lines drawn equidistant(1)

Direction correct (1) 2

Calculations of electric field strength:

$$E = \frac{V}{d} = \frac{1.5\text{V}}{1.0 \times 10^{-5}\text{m}} \quad (1)$$

$$= 1.5 \times 10^5 \text{ V m}^{-1} \quad (1) \quad 2$$

[7]

88. Capacitors and storage of energy:

$$E = \frac{1}{2} CV^2 \quad (1)$$

$$E_w = \frac{1}{2} \times 68 \times 10^{-3} \text{ F} \times (16 \text{ V})^2 = 8.7 \text{ J} \quad (1)$$

$$E_2 = \frac{1}{2} \times 1 \times 10^{-3} \text{ F} \times (400 \text{ V})^2 = 80 \text{ J} \quad (1) \quad 3$$

[Allow calculations in proportion using  $\left(\frac{C}{\mu\text{F}}\right)\left(\frac{V}{V}\right)^2$ ]

Range of actual value:

$$900 \mu\text{F} < C < 1500 \mu\text{F} \quad (1) \quad (1) \quad 2$$

(i) Calculation of charge:

$$Q = CV = 68 \times 10^{-3} \text{ F} \times 16 \text{ V} = 1.1 \text{ C} \quad (1) \quad 1$$

(ii) Demonstration that maximum leakage is about 3000  $\mu\text{A}$ :

$$I = 0.003 \times 10^{-6} \text{ A}/\mu\text{F V} \times 68 \text{ 000 } \mu\text{F} \times 16 \text{ V} \quad (1)$$

$$= 3.26 \times 10^{-3} \text{ A} [3.3 \text{ mA}] \quad (1) \quad 2$$

(iii) Estimate of time for capacitor to discharge with reasoning:

$$\frac{Q}{I_0} = \frac{1.09 \text{ C}}{3.26 \times 10^{-3} \text{ A}} = 334 \text{ s} \text{ [This is time constant] (1)}$$

Numerical example such as: for less than 0.7% remaining  $t = 5\tau = 1670 \text{ s}$  OR well-reasoned estimate showing  $t \gg 300 \text{ s}$  (1)

2

[10]

89. Why large voltage is generated in secondary circuit:

Faraday's Law in words including 'flux linkage'

Current flow in primary (1)

causes magnetic flux in core (1)

Flux links secondary (1)

Opening switch S causes flux to reduce (1)

Changing flux in. secondary induces e.m.f (1)

Many turns on secondary means large flux linkage (1)

Hence rate of change of flux linkage is large

reduction time is short (1)

Hence induced e.m.f. is large (1)

Max 6

[6]

90. Observations on voltmeter:

- (a) Movement which implies brief or pulsed then V reads zero
- (b) Negative reading with respect to direction above
- (c) Alternating reading positive to negative and continuous

[5]

91. Total magnetic flux through the loop when 30 mm from end of magnet:

$$\text{Flux} = B \times A$$

$$= 1 \times 10^{-3} \text{ T} \times 16 \times 10^{-4} \text{ m}^2 \quad (1)$$

[Substitution of 1, 16. Ignore  $\times 10$  here]

$$= 1.6 \times 10^{-6} \text{ Wb} \quad (1)$$

Total magnetic flux through the loop when 10 mm from end of magnet:

$$\begin{aligned}\text{Flux} &= 30 \times 10^{-3} \text{ T} \times 16 \times 10^{-4} \text{ m}^2 \\ &= 4.8 \times 10^{-5} \text{ Wb} \quad [\text{Unit penalty once only}] \quad (1)\end{aligned}$$

3

Average speed of movement of the loop:

$$\begin{aligned}E &= \Delta\phi / \Delta t \\ \Delta t &= \frac{46.4 \times 10^{-6} \text{ Wb}}{15 \times 10^{-6} \text{ V}} \quad (1) \\ &= 3.1 \text{ s}\end{aligned}$$

Use of speed = distance ÷ time = 20 mm ÷ 3.1 s (1)

$$= 6.5 \text{ mm s}^{-1} \quad (1)$$

3

Slow down nearer to the magnet (1)

1

[Total 7 marks]

92. State Lenz's law of electromagnetic induction

**Direction of induced emf is such as to oppose the charge producing it (2)**

(2 marks)

An exhibit at a science centre consists of three apparently identical vertical tubes, T<sub>1</sub>, T<sub>2</sub> and T<sub>3</sub>, each about 2 m long. With the tubes are three apparently identical small cylinders, one to each tube.

When the cylinders are dropped down the tubes those in T<sub>1</sub> and T<sub>2</sub> reach the bottom in less than 1 second, while that in T<sub>3</sub> takes a few seconds.

Explain why the cylinder in T<sub>3</sub> takes longer to reach the bottom of the tube than the cylinder in T<sub>1</sub>

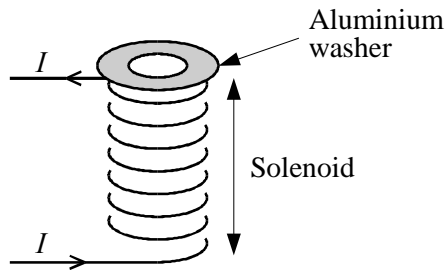
**In T<sub>3</sub> magnetic flux cuts copper tube (1)  
induction occurs (1)  
current in copper tube (1)  
creates magnetic field (1)  
opposite to magnet's which repels slows magnet  
T<sub>1</sub> is plastic so no induction/no current forms (1)**

(5 marks)

Explain why the cylinder in  $T_2$  takes the same time to reach the bottom as the cylinder in  $T_1$   
**In  $T_2$  falling cylinder unmagnetised so no flux cut or no induction (1)**  
**Both  $T_1$  and  $T_2$  have only force of gravity acting on them (1)**

**(2 marks)**  
**[Total 9 marks]**

93. A light aluminium washer rests on the end of a solenoid as shown in the diagram.



A large direct current is switched on in the solenoid. Explain why the washer jumps and immediately falls back.

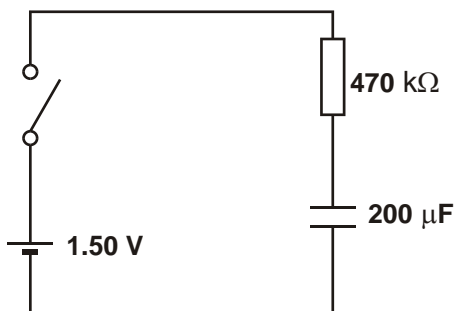
- B field produced by solenoid (1)**
- Flux lines CUT washer (1)**
- Induced current/e.m.f. in washer (1)**
- B field of solenoid opposite to B field washer (1)**
- Repulsive force lifts washer (1)**
- Steady current so no changing of flux/no induction (1)**
- OR explain by force on current carrying conductor in B field (LH rule)**

**[Total 5 marks]**

94. Define capacitance  
**Capacitance = Charge / Potential difference.**

**(2 marks)**

An uncharged capacitor of  $200 \mu\text{F}$  is connected in series with a  $470 \text{ k}\Omega$  resistor, a  $1.50 \text{ V}$  cell and a switch. Draw a circuit diagram of this arrangement.



**(1 mark)**

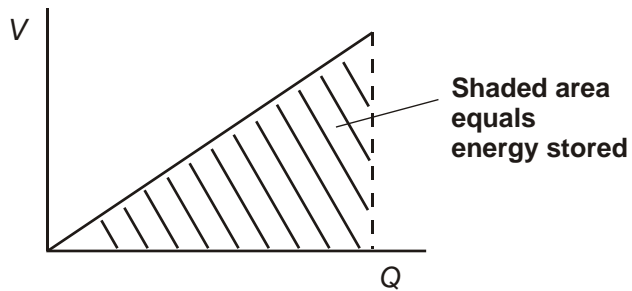
Calculate the maximum current that flows.

$$\text{Current} = 1.5 \text{ V} / 470 \text{ k}\Omega$$

$$\text{Current} = 3.2 \mu\text{A}$$

(2 marks)

Sketch a graph of voltage against charge for your capacitor as it charges. Indicate on the graph the energy stored when the capacitor is fully charged.



(4 marks)

Calculate the energy stored in the fully-charged capacitor.

$$\frac{1}{2}CV^2 = \frac{1}{2} (200 \mu\text{F}) (1.5 \text{ V})^2$$

$$\text{Energy} = 2.25 \mu\text{J}$$

(2 marks)

[Total 11 marks]