

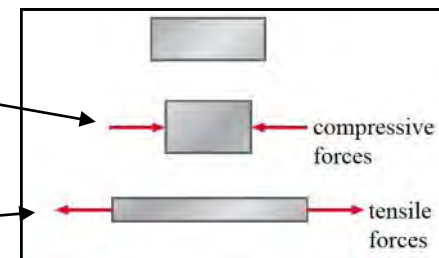
• Candidates should be able to :

- Describe how deformation is caused by a force in one dimension and can be **tensile** or **compressive**.
- Describe the behaviour of springs and wires in terms of **force**, **extension**, **elastic limit**, **Hooke's Law** and the **force constant** (i.e. force per unit extension or compression).
- Select and apply the equation  $F = kx$ , where  $k$  is the force constant of the spring or the wire.
- Determine the **area under a force / extension (or compression) graph** to find the **work done by the force**.
- Select and use the equations for elastic potential energy  $E = \frac{1}{2} Fx$  and  $E = \frac{1}{2} kx^2$ .
- Define and use the terms **stress**, **strain**, **Young modulus** and **ultimate tensile strength (breaking stress)**.
- Describe an experiment to determine the **Young modulus** of a metal in the form of a wire.
- Define the terms **elastic deformation** and **plastic deformation** of a material.
- Describe the shapes of the **stress / strain graphs** for typical **ductile**, **brittle** and **polymeric** materials.

- A pair of forces is needed to change the size and shape of a spring or wire.

**COMPRESSIVE** forces are applied if the spring is being shortened or compressed.

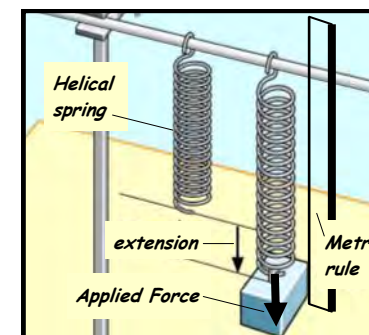
**TENSILE** forces are applied if the spring is being stretched or extended.



• **STIFFNESS OF A SPRING**

- A helical spring hangs from a rod clamped in a retort stand as shown opposite.

Using a mass hanger and 100 g slotted masses a force is applied to the spring and this is gradually increased.



The **EXTENSION (x)** (i.e. the increase in length of the spring) produced for each value of the **APPLIED FORCE (F)** is recorded in the results table below.

Applied Force, F/N	Pointer Reading/m	Extension, x/m
0.0		
1.0		
2.0		
3.0		
4.0		
5.0		
6.0		

- Using the above results, a graph of FORCE (F)/N versus EXTENSION (x)/m is plotted.

Section OA of the graph is a straight line passing through the origin, so for this section :

Extension (x)  $\propto$  Force (F)

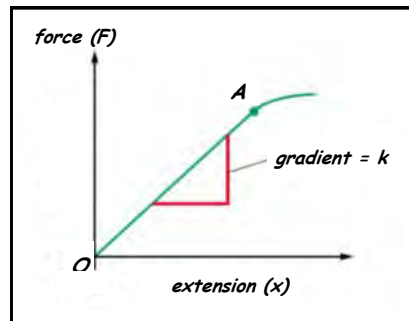
From which :

$$F = k x$$

(N)                      (N m<sup>-1</sup>)                      (m)

$$k = F/x$$

- is called the **SPRING CONSTANT** or **STIFFNESS**.
- can be determined from the **GRADIENT OF THE F/x GRAPH**.
- the **STIFFER** the spring is, the **GREATER** is the k-VALUE.



- Beyond point A, the graph is no longer a straight line. This is because the spring has been permanently deformed; it has been stretched beyond its **ELASTIC LIMIT**.

The **ELASTIC LIMIT** of a sample is that value of the stretching force beyond which the sample becomes permanently deformed (i.e. it stops behaving elastically).

- For section OA, the spring obeys **HOOKE'S LAW**.

A material obeys **HOOKE'S LAW** if the **EXTENSION** is directly proportional to the **APPLIED FORCE**. This is true as long as the material's **ELASTIC LIMIT** is not exceeded.

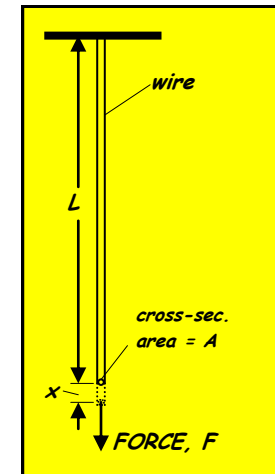
**TERMS USED IN SPRINGS AND MATERIALS**

- Consider a wire sample of **original length (L)** and **cross-sectional area (A)** subjected to a force (F) and suffering an **extension (x)**.

The **STRAIN** of a material sample is the **EXTENSION** produced per **UNIT LENGTH**.

$$\text{strain} = \frac{\text{extension}}{\text{original length}} = \frac{x}{L}$$

**NOTE** : Strain has **no units** and it is sometimes given as a **percentage**.



The **STRESS** on a material sample is the **FORCE** acting per unit **CROSS-SECTIONAL AREA** of the sample.

$$\text{Stress} = \frac{\text{force}}{\text{x-sec. area}} = \frac{F}{A}$$

(N)                      (m<sup>2</sup>)

The unit of **STRESS** is the **PASCAL (Pa)**.

The **STIFFNESS** of the material being stressed is called the **YOUNG MODULUS (E)** of the material.

$$\text{YOUNG MODULUS, } E = \frac{\text{Stress}}{\text{Strain}} = \frac{F/A}{x/L} = \frac{F L}{A x}$$

**NOTE**

- The unit of  $E$  is the **PASCAL (Pa)** - ( $1 \text{ Pa} = 1 \text{ N m}^{-2}$ ).
- $E$  is usually a large number and so it is sometimes given in :  
**megapascal (MPa)** (i.e.  $\text{Pa} \times 10^6$ ) or **gigapascal (GPa)** (i.e.  $\text{Pa} \times 10^9$ ).

$$E = \text{Gradient of a stress/strain graph}$$

2 The table opposite shows the **Young modulus** for a list of different materials.  
( $1 \text{ GPa} = 10^9 \text{ Pa}$ ).

(a) List the metals in the table from **stiffest to least stiff** (by labelling them **M1, M2...**).

(b) Which **non-metal** in the table is the stiffest? (Label it as **NM 1**).

Material	Young modulus/GPa
aluminium	70
brass	90–110
brick	7–20
concrete	40
copper	130
glass	70–80
iron (wrought)	200
lead	18
Perspex	3
polystyrene	2.7–4.2
rubber	0.01
steel	210
tin	50
wood	10 approx.

3 A metal bar of length **100 mm** and square cross section of side **20 mm** is extended by **0.030 mm** when it is subjected to a tensile force of **24 kN**.

Calculate : (a) The **stress** and the **strain** in the bar.

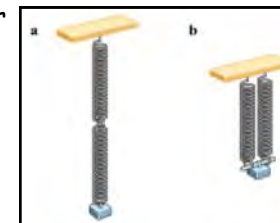
(b) The **Young modulus** for the material of the bar.

4 Calculate the extension of a copper wire of length **1.25 m** and radius **0.55 mm** when a tensile force of **25 N** is applied to the end of the wire. (Young modulus for copper =  $1.30 \times 10^{11} \text{ Pa}$ ).

5 Springs can be combined as in (a) In **SERIES**, or as in (b) In **PARALLEL**.

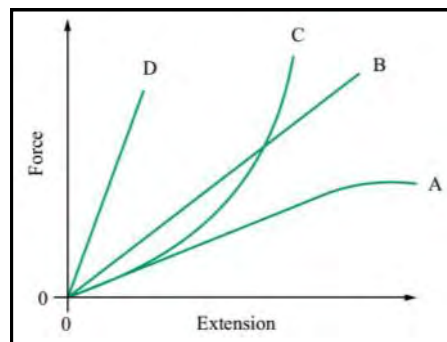
If the spring constant of a single spring is ' $k$ ', what is the equivalent **spring constant** for two springs : (a) In **SERIES** ?

(b) In **PARALLEL** ?



• **PRACTICE QUESTIONS (1)**

1 The diagram opposite shows the force/extension graphs for four springs labelled A to D.



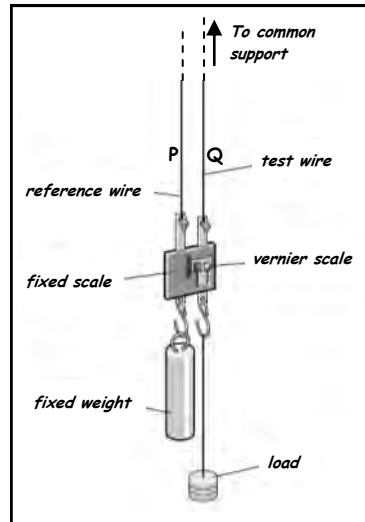
Which of the four springs :

- Has the greatest value of **spring constant** ?
- Is the **least stiff** ?
- Does not obey **Hooke's Law** ?

## • DETERMINATION OF THE YOUNG MODULUS (E)

- Two long wires (P & Q) of the same material, length and diameter are hung from a common support. Q is the wire under test and P is the comparison wire which is used as a reference so as to avoid errors due to :

- Expansion occurring as a result of temperature change.
- Sagging of the support.



- The ORIGINAL LENGTH (L) of wire Q is measured using a metal tape measure.
- The CROSS-SECTIONAL AREA (A) is determined by using a micrometer screw gauge to measure the diameter of Q at several points along the length of the wire. The mean diameter and hence the mean radius (R) is calculated. Then  $A = \pi R^2$ .
- The EXTENSION (x) of wire Q when it is loaded, is accurately measured by the vernier arrangement between P and Q.
- The test wire Q is then incrementally loaded and the corresponding extensions are measured and noted. The results are used to plot a graph of FORCE (LOAD) (F) versus EXTENSION (x) whose gradient =  $F/x$ . Then :

$$\text{Young modulus, } E = \frac{\text{stress}}{\text{Strain}} = \frac{F/A}{x/L} = \frac{FL}{xA} = \text{gradient of } F/x \text{ graph} \times \frac{L}{A}$$

**ELASTIC** behaviour is shown by a wire or spring if it returns to its original length when the applied deforming force (load) is removed.

- All materials show **ELASTIC** behaviour up to the **ELASTIC LIMIT**.
- When a sample (e.g. spring, wire..) is loaded beyond its **ELASTIC LIMIT**, it does not regain its original dimensions when the load is removed (i.e. it suffers permanent deformation).

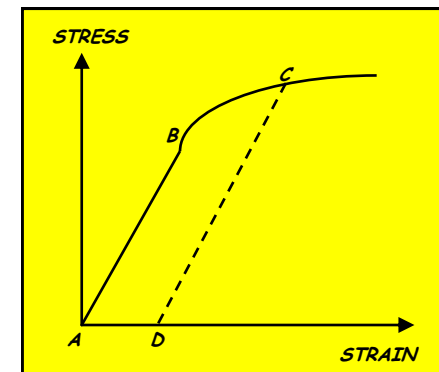
**PLASTIC** behaviour is shown by some materials when they are loaded beyond the elastic limit. The material is permanently deformed (or strained) when the load is

## A to B

There is **ELASTIC** deformation - When the stress is removed, the sample goes back to its original dimensions (i.e. there is zero strain).

## B onwards

There is **PLASTIC** deformation - When the stress is removed, the sample is left permanently deformed (i.e. there is a residual strain = AD).



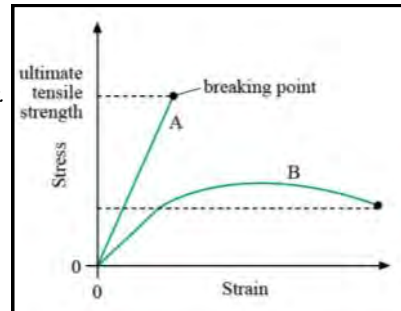
• **MATERIAL STRENGTH**

- When we talk about the **STRENGTH** of a material, we are referring to the **STRESS** value at which the material breaks.

The **ULTIMATE TENSILE STRENGTH** or **BREAKING STRESS** of a material is the stress value at which the material breaks.

Consider the **STRESS/STRAIN** graphs for two different materials **A** & **B** shown opposite.

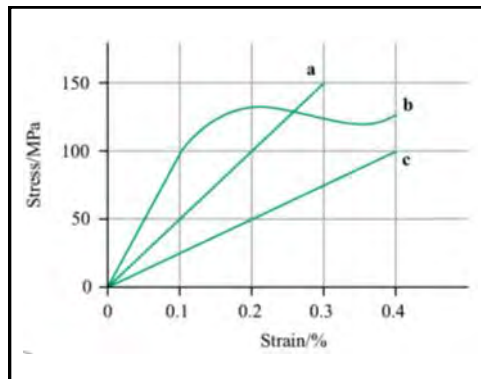
Material **A** has a **greater UTS** value than material **B** and this means that material **A** is **stronger** than material **B**.



• **PRACTICE QUESTIONS (2)**

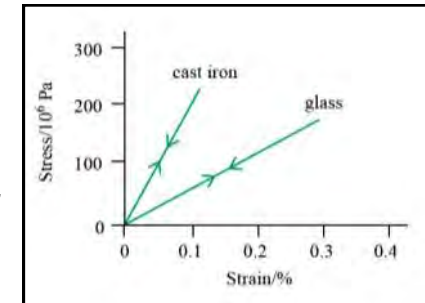
- 1 For each of the materials **a**, **b** and **c** whose **STRESS/STRAIN** graphs are shown opposite :

- (a) Calculate the value of the **YOUNG MODULUS (E)**.
- (b) State the **ULTIMATE TENSILE STRENGTH**.



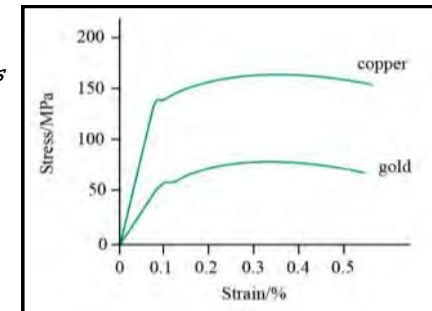
**BRITTLE MATERIALS** (e.g. glass, cast iron)

- As the stress on a **brittle** material is gradually increased, it stretches slightly, but further increase in the applied stress causes fracture.
- Brittle** materials show **ELASTIC** behaviour up to the point of fracture (Up to that point, if the applied stress is removed the sample returns to its original length).
- Sudden application of a large stress will cause a **brittle** material to shatter (e.g. dropping it onto a hard floor).



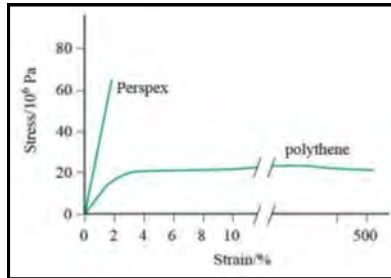
**DUCTILE MATERIALS** (e.g. copper, gold)

- As stress is applied to a **ductile** material it will behave elastically up to the **ELASTIC LIMIT**, but beyond this stress value the sample stretches more and more and it does not return to its original length when the stress is removed. The material shows **PLASTIC** behaviour and it is then permanently strained.
- Ductile** materials can be shaped by stretching, rolling, squashing and hammering (useful for making wires, jewellery etc.).



**POLYMERIC MATERIALS** (e.g. polythene, perspex)

- The behaviour of different polymers depends on their **temperature** as well as their **molecular structure**.



- The infamous shopping carrier bag is made of **polythene** and as we all know, it is very stretchy and easy to deform. Under stress, polythene quickly undergoes **PLASTIC** deformation and stretches a lot before becoming much stiffer and snapping (behaving much like a **DUCTILE** metal).

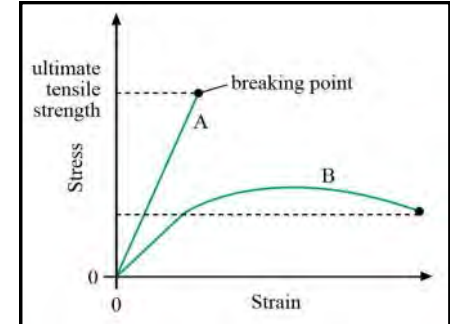
- Perspex** is a very tough, hard plastic which, when stressed, stretches elastically until it snaps (**BRITTLE** material behaviour). When it is warmed however, it ceases to be brittle and can be moulded into any shape. It is used for contact lenses, dentures, artificial eyes and a huge variety of other industrial uses.

**MATERIAL BEHAVIOUR SUMMARY**

- All materials show **ELASTIC** behaviour up to the **ELASTIC LIMIT**.
- BRITTLE** materials break at the **ELASTIC LIMIT** and shatter when subjected to a large, sudden stress.
- DUCTILE** materials exhibit **PLASTIC** behaviour (i.e. suffer permanent deformation) when they are stretched beyond the **ELASTIC LIMIT**.

- The value of the stress at which a material breaks is called the **ULTIMATE TENSILE STRESS (UTS)** or the **BREAKING STRESS**.

In the stress/strain graph shown opposite, material A is stronger than material B, since its UTS is greater.



• **ELASTIC POTENTIAL (STRAIN) ENERGY**

- This is the **energy stored** when a solid is **stretched** or **compressed**.
- If the solid has been strained **ELASTICALLY**, the stored energy can be recovered.

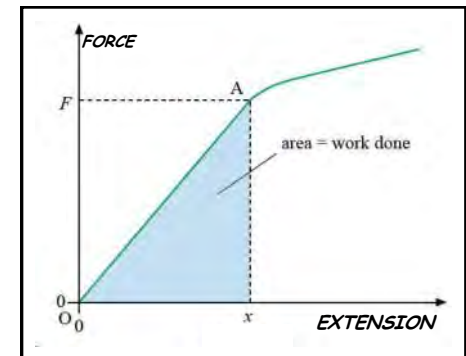
If the solid has been strained **PLASTICALLY**, some of the work done has gone into moving atoms past each other and the energy is non-recoverable.

- Consider a wire subjected to a gradually increasing force.

Up to the elastic limit :

Extension  $\propto$  applied force

- Initial value of force = 0
- Final value of force = F
- Average value of force =  $\frac{1}{2} F$



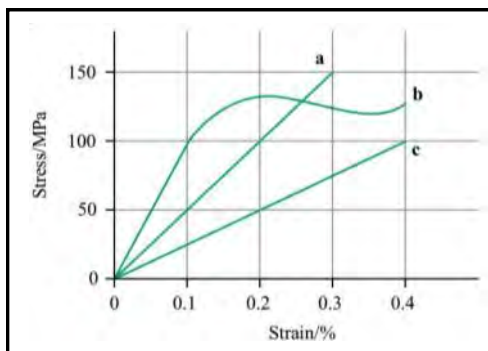
Elastic Potential Energy stored in the wire = Work done by the average force  
 = average force  $\times$  extension  
 =  $\frac{1}{2} F \times x$

Elastic Potential energy stored in the wire =  $\frac{1}{2} Fx$   
 (J)                      (N) (m)

- Elastic Potential Energy stored in the wire = Area Enclosed by the  $F/x$  Graph  
 $= \frac{1}{2} \times \text{base} \times \text{height}$   
 $= \frac{1}{2} x \times F$   
 $= \frac{1}{2} Fx$

- PRACTICE QUESTIONS (3)**

- 1 For each of the materials, *a*, *b* and *c* shown in the stress/strain graph opposite, deduce the values of the **YOUNG MODULUS** and the **ULTIMATE TENSILE STRESS**.

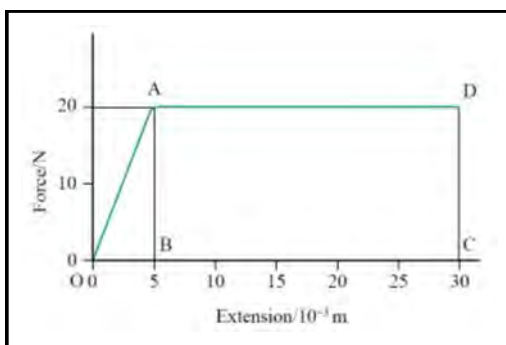


- 2 The diagram opposite shows a simplified **FORCE - EXTENSION** graph for a metal.

Use the graph to calculate :

- (a) The **STRAIN ENERGY** stored when the metal is stretched to its **ELASTIC LIMIT**.

- (b) The **TOTAL WORK** which needs to be done to break the metal.



- 3 A spring has a force constant of  $3.8 \times 10^3 \text{ N m}^{-1}$ . Calculate the **ELASTIC POTENTIAL ENERGY** stored in such a spring when it is stretched by **8.5 mm**. 7

- 4 An elastic string of cross-sectional area **3 mm<sup>2</sup>** and length **2.5 m**, stretches by **2.0 cm** when a force of **4.0 N** is applied to it.

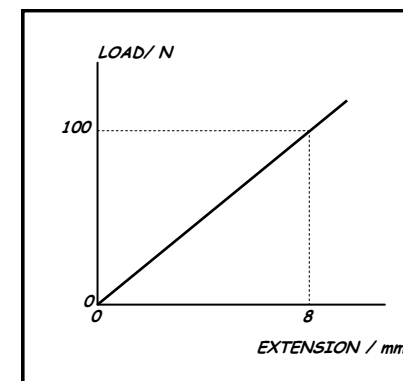
Calculate : (a) The **YOUNG MODULUS** of the string.

- (b) The **ELASTIC POTENTIAL ENERGY** stored in the string when it is stretched by **2.0 cm**.

- 5 The graph opposite shows the variation of extension with applied load for a wire of length **4.0 m** and radius **0.25 mm**.

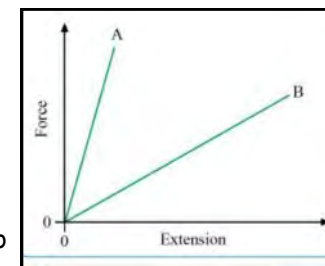
Calculate :

- (a) The **STRESS** in the wire when the load is **100 N**.
- (b) The **ELASTIC POTENTIAL ENERGY** stored in the wire when the load is **100 N**.



- 6 The diagram shows the force/extension graph for two pieces of polymer. **State with an explanation** which polymer :

- (a) Has the **greater stiffness**.
- (b) Requires the **greater force** to break it.
- (c) Requires the **greater amount of work** to be done in order to break it.



• HOMEWORK QUESTIONS

- 1 (a) (i) Define **STRESS**. (ii) Define **STRAIN**.
- (b) Describe an experiment to determine the **YOUNG MODULUS** of a metal in the form of a wire. Your description should include :

- A labelled diagram of the apparatus.
- The measurements to be taken.
- An explanation of how the equipment is used to obtain the measurements.
- An explanation of how the measurements would be used to determine the Young modulus.

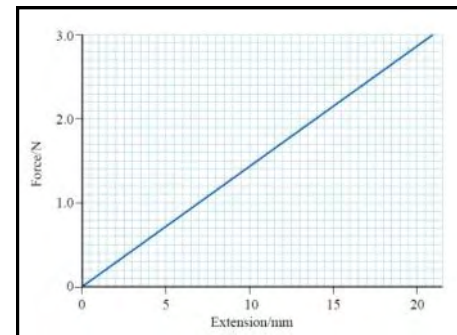
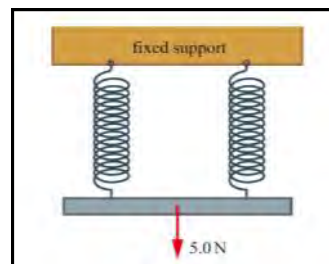
(OCR AS Physics - Module 2821 - Jan 2005)

- 2 (a) Define the **YOUNG MODULUS**.
- (b) The wire used in a piano string is made from steel. The original length of wire used was **0.75 m**. Fixing one end and applying a force to the other stretches the wire. The extension produced is **4.2 mm**.
- (i) Calculate the **STRAIN** produced in the wire.
- (ii) The Young modulus of the steel is  $2.0 \times 10^{11}$  Pa and the cross-sectional area of the wire is  $4.5 \times 10^{-7}$  m<sup>2</sup>. Calculate the **FORCE** required to produce the strain in the wire calculated in (i).
- (c) A different material is used for one of the strings in the piano. It has the same length, cross-sectional area and force applied. Calculate the **EXTENSION** produced in this wire if the Young modulus of this material is **half** that of steel.
- (d) (i) Define **DENSITY**.
- (ii) **State and explain** what happens to the density of the material of a wire when it is stretched. Assume that when the wire stretches, **the cross-sectional area remains constant**.

(OCR AS Physics - Module 2821 - June 2004)

Part of a force against extension graph for a spring is shown opposite. The spring obeys **HOOKE'S LAW** for forces up to **5.0 N**.

- (a) Calculate the **EXTENSION** produced by a force of **5.0 N**.



- (b) The diagram above shows a second identical spring that has been put in parallel with the first spring. A force of **5.0 N** is applied to this combination of springs.

For this arrangement, calculate :

- (i) The **EXTENSION** of each spring.
- (ii) The **ELASTIC POTENTIAL ENERGY** stored in the springs.
- (c) The Young modulus of the wire used in the springs is  $2.0 \times 10^{11}$  Pa. Each spring is made from a straight wire of length **0.40 m** and cross-sectional area  $2.0 \times 10^{-7}$  m<sup>2</sup>. Calculate the **EXTENSION** produced when a force of **5.0 N** is applied to this straight wire.
- (d) Describe and explain, **without further calculations**, the **difference in the elastic potential energies** in the straight wire and in the spring when a force of 5.0 N is applied to each.

(OCR AS Physics - Module 2821 - June 2006)



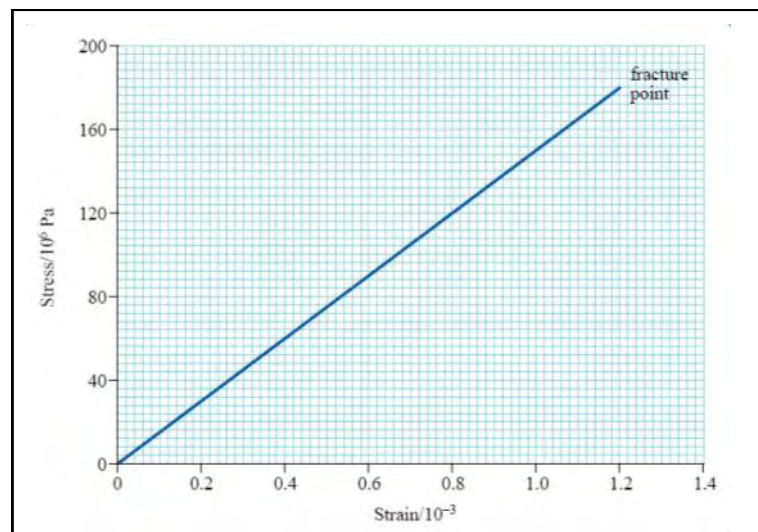
4 Use the words *ELASTIC*, *PLASTIC*, *BRITTLE* and *DUCTILE* to deduce what the following observations tell you about the materials described.

- (a) If you tap a *cast iron* bath gently with a hammer, the hammer bounces off. If you hit it hard, the bath shatters.
- (b) *Aluminium* drinks cans are made by forcing a sheet of aluminium into a mould at high pressure.
- (c) '*SILLY PUTTY*' can be stretched to many times its original length if it is pulled gently and slowly. If it is pulled hard and rapidly, it snaps.

(b) Using the graph or otherwise, describe the *stress against strain behaviour* of the cast iron up top and including the point of fracture.

(OCR AS Physics - Module 2821 - Jan 2006)

5



The diagram above shows a stress against strain graph up to the point of fracture for a rod of cast iron.

- (a) The rod of cast iron has a cross-sectional area of  $1.5 \times 10^{-4} \text{ m}^2$ . Calculate :
- (i) The *FORCE* applied to the rod *at the point of fracture*.
- (ii) The *YOUNG MODULUS* of cast iron.