

S14 C3(R)

1. Express

$$\frac{3}{2x+3} - \frac{1}{2x-3} + \frac{6}{4x^2-9}$$

as a single fraction in its simplest form.

$$\rightarrow = (2x-3)(2x+3) \quad (4)$$

$$\frac{3(2x-3) - (2x+3) + 6}{(2x+3)(2x-3)} = \frac{4x-6}{(2x+3)(2x-3)} = \frac{2(x-3)}{(2x+3)(2x-3)}$$

$$= \frac{2}{2x+3} \quad \#$$

2. A curve C has equation $y = e^{4x} + x^4 + 8x + 5$

(a) Show that the x coordinate of any turning point of C satisfies the equation

$$x^3 = -2 - e^{4x} \quad (3)$$

(b) On the axes given on page 5, sketch, on a single diagram, the curves with equations

(i) $y = x^3$,

(ii) $y = -2 - e^{4x}$

On your diagram give the coordinates of the points where each curve crosses the y -axis and state the equation of any asymptotes. (4)

(c) Explain how your diagram illustrates that the equation $x^3 = -2 - e^{4x}$ has only one root. (1)

The iteration formula

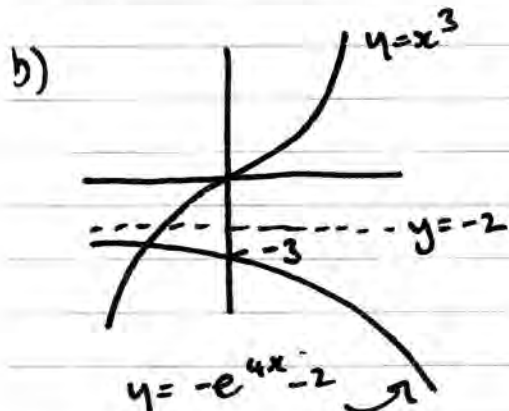
$$x_{n+1} = (-2 - e^{4x_n})^{\frac{1}{3}}, \quad x_0 = -1$$

can be used to find an approximate value for this root.

(d) Calculate the values of x_1 and x_2 , giving your answers to 5 decimal places. (2)

(e) Hence deduce the coordinates, to 2 decimal places, of the turning point of the curve C .

a) $\frac{dy}{dx} = 4e^{4x} + 4x^3 + 8$ TP $\frac{dy}{dx} = 0 \Rightarrow 4x^3 = -8 - 4e^{4x}$ (2)
 $\therefore x^3 = -2 - e^{4x}$ #



c) only one point of intersection.

d) $x_0 = -1$
 $x_1 = -1.26376$
 $x_2 = -1.26126$

e) $(-1.26, -2.55)$

3. (i) (a) Show that $2 \tan x - \cot x = 5 \operatorname{cosec} x$ may be written in the form

$$a \cos^2 x + b \cos x + c = 0$$

stating the values of the constants a, b and c .

(4)

(b) Hence solve, for $0 \leq x < 2\pi$, the equation

$$2 \tan x - \cot x = 5 \operatorname{cosec} x$$

giving your answers to 3 significant figures.

(4)

(ii) Show that

$$\tan \theta + \cot \theta = \lambda \operatorname{cosec} 2\theta, \quad \theta \neq \frac{n\pi}{2}, \quad n \in \mathbb{Z}$$

stating the value of the constant λ .

(4)

$$a) \frac{2 \sin x \times \sin x}{\cos x \times \sin x} - \frac{\cos x \times \cos x}{\sin x \times \cos x} = \frac{5 \times \cos x}{\sin x \times \cos x} = \frac{2 \sin^2 x - \cos^2 x}{\sin x \cos x} = \frac{5 \cos x}{\sin x \cos x}$$

$$\therefore 2(1 - \cos^2 x) - \cos^2 x = 5 \cos x \Rightarrow 3 \cos^2 x + 5 \cos x - 2 = 0$$

$$a = 3 \quad b = 5 \quad c = -2$$

$$b) (3 \cos x - 1)(\cos x + 2) = 0 \Rightarrow \cos x = \frac{1}{3} \quad x = \cos^{-1}\left(\frac{1}{3}\right)$$

No solution

$$x = \frac{1.23}{2}, \frac{5.05}{2}$$

$$ii) \frac{\sin \theta}{\cos \theta} + \frac{\cos \theta}{\sin \theta} = \frac{\sin^2 \theta + \cos^2 \theta}{\sin \theta \cos \theta} = \frac{1}{\sin \theta \cos \theta}$$

$$= \frac{2}{2 \sin \theta \cos \theta} = \frac{2}{\sin 2\theta} = 2 \operatorname{cosec}^2 2\theta \quad \lambda = \frac{2}{2}$$

4. (i) Given that

$$x = \sec^2 2y, \quad 0 < y < \frac{\pi}{4}$$

show that

$$\frac{dy}{dx} = \frac{1}{4x\sqrt{x-1}} \quad (4)$$

(ii) Given that

$$y = (x^2 + x^3) \ln 2x$$

find the exact value of $\frac{dy}{dx}$ at $x = \frac{e}{2}$, giving your answer in its simplest form.

(5)

(iii) Given that

$$f(x) = \frac{3 \cos x}{(x+1)^{\frac{1}{3}}}, \quad x \neq -1$$

show that

$$f'(x) = \frac{g(x)}{(x+1)^{\frac{4}{3}}}, \quad x \neq -1$$

where $g(x)$ is an expression to be found.

(3)

$$\begin{aligned} \text{i) } x &= (\sec 2y)^2 & \frac{dx}{dy} &= 2(\sec 2y) \times 2 \sec 2y \tan 2y \\ & & &= 4 \sec^2 2y \tan 2y \end{aligned}$$

$$\frac{\sin^2 y + \cos^2 y}{\cos^2 y \cos^2 y} = \frac{1}{\cos^2 y} \quad \therefore \frac{dy}{dx} = \frac{1}{4 \sec^2 2y \tan 2y}$$

$$\begin{aligned} \tan^2 y + 1 &= \sec^2 y \\ \tan y &= \sqrt{\sec^2 y - 1} \end{aligned} \quad \therefore \frac{dy}{dx} = \frac{1}{4x\sqrt{x-1}}$$

$$\begin{aligned} \text{ii) } u &= x^2 + x^3 & v &= \ln 2x & \frac{dy}{dx} &= (2x + 3x^2) \ln 2x + \frac{x^2 + x^3}{x} \\ u' &= 2x + 3x^2 & v' &= \frac{2}{2x} = \frac{1}{x} & &= x(2 + 3x) \ln 2x + x + x^2 \end{aligned}$$

$$\begin{aligned} x = \frac{e}{2} \quad \ln 2x &= \ln e = 1 \quad \Rightarrow \frac{dy}{dx} \Big|_{\frac{e}{2}} = \frac{e}{2} \left(2 + \frac{3e}{2} \right) + \frac{e}{2} + \frac{e^2}{4} \\ &= \frac{3}{2}e + \frac{4}{4}e^2 = \frac{3}{2}e(1 + \frac{2}{3}e) \end{aligned}$$

$$(iii) \quad u = 3 \cos x \quad v = (x+1)^{\frac{1}{3}} \\ u' = -3 \sin x \quad v' = \frac{1}{3}(x+1)^{-\frac{2}{3}} \quad \frac{-3(x+1)^{\frac{1}{3}} \sin x - (x+1)^{-\frac{2}{3}} \cos x}{(x+1)^{\frac{2}{3}}}$$

$$= \frac{(x+1)^{-\frac{2}{3}} [-3(x+1) \sin x - \cos x]}{(x+1)^{\frac{2}{3}}}$$

$$= \frac{-3(x+1) \sin x - \cos x}{(x+1)^{\frac{4}{3}}}$$

5. (a) Sketch the graph with equation

$$y = |4x - 3|$$

stating the coordinates of any points where the graph cuts or meets the axes.

(2)

Find the complete set of values of x for which

(b)

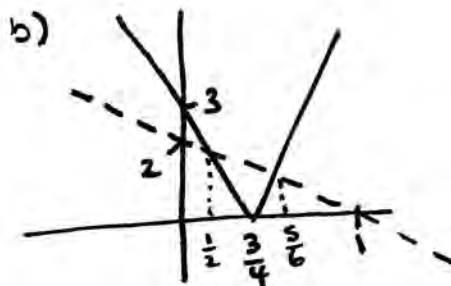
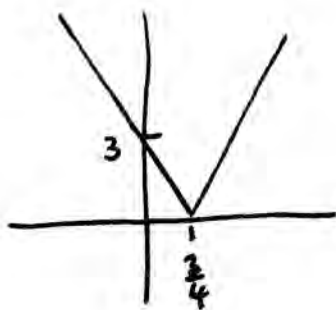
$$|4x - 3| > 2 - 2x$$

(4)

(c)

$$|4x - 3| > \frac{3}{2} - 2x$$

(2)



$$4x - 3 = 2 - 2x$$

$$6x = 5$$

$$x = \frac{5}{6}$$

$$4x - 3 = 2x - 2$$

$$2x = 1$$

$$x = \frac{1}{2}$$

$$x < \frac{1}{2} \text{ or } x > \frac{5}{6}$$

$$c) 4x - 3 = \frac{3}{2} - 2x$$

$$6x = \frac{9}{2}$$

$$x = \frac{9}{12} = \frac{3}{4}$$

$$x \in \mathbb{R}$$

$$x \neq \frac{3}{4}$$

6. The function f is defined by

$$f: x \rightarrow e^{2x} + k^2, \quad x \in \mathbb{R}, \quad k \text{ is a positive constant.}$$

(a) State the range of f .

(1)

(b) Find f^{-1} and state its domain.

(3)

The function g is defined by

$$g: x \rightarrow \ln(2x), \quad x > 0$$

(c) Solve the equation

$$g(x) + g(x^2) + g(x^3) = 6$$

giving your answer in its simplest form.

(4)

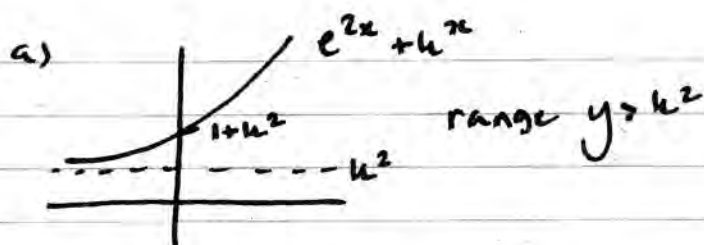
(d) Find $fg(x)$, giving your answer in its simplest form.

(2)

(e) Find, in terms of the constant k , the solution of the equation

$$fg(x) = 2k^2$$

(2)



$$b) \quad x = e^{2y} + k^2 \Rightarrow e^{2y} = x - k^2 \Rightarrow 2y = \ln|x - k^2|$$

$$\therefore y = \frac{1}{2} \ln|x - k^2| = f^{-1}(x)$$

$$x > k^2$$

domain

$$c) \quad g(x) + g(x^2) + g(x^3) = \ln(2x) + \ln(2x^2) + \ln(2x^3)$$

$$= \ln(2x \times 2x^2 \times 2x^3) = \ln(8x^6) = 6$$

$$8x^6 = e^6 \quad \therefore x = \sqrt[6]{\frac{1}{8}e^6} = \frac{1}{2}e$$

$$d) \quad fg(x) = f(\ln(2x)) = e^{2\ln(2x)} + k^2 = (2x)^2 + k^2 = 4x^2 + k^2$$

$$e) \quad 4x^2 + k^2 = 2k^2 \Rightarrow 4x^2 = k^2 \Rightarrow x^2 = \frac{1}{4}k^2 \quad \therefore x = \pm \frac{1}{2}k \quad \therefore x = \frac{1}{2}k$$

7.

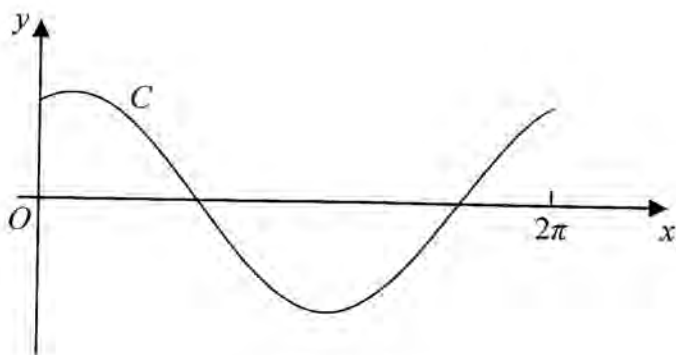


Figure 1

Figure 1 shows the curve C , with equation $y = 6 \cos x + 2.5 \sin x$ for $0 \leq x \leq 2\pi$

- (a) Express $6 \cos x + 2.5 \sin x$ in the form $R \cos(x - \alpha)$, where R and α are constants with $R > 0$ and $0 < \alpha < \frac{\pi}{2}$. Give your value of α to 3 decimal places.

(3)

- (b) Find the coordinates of the points on the graph where the curve C crosses the coordinate axes.

(3)

A student records the number of hours of daylight each Sunday throughout the year. She starts on the last Sunday in May with a recording of 18 hours, and continues until her final recording 52 weeks later.

She models her results with the continuous function given by

$$H = 12 + 6 \cos\left(\frac{2\pi t}{52}\right) + 2.5 \sin\left(\frac{2\pi t}{52}\right), \quad 0 \leq t \leq 52$$

where H is the number of hours of daylight and t is the number of weeks since her first recording.

Use this function to find

- (c) the maximum and minimum values of H predicted by the model,

(3)

- (d) the values for t when $H = 16$, giving your answers to the nearest whole number.

[You must show your working. Answers based entirely on graphical or numerical methods are not acceptable.]

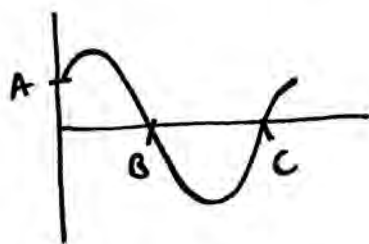
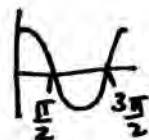
(6)

$$7a) R \cos(x-\alpha) = R \cos x \cos \alpha + R \sin x \sin \alpha$$

$$6 \cos x + 2.5 \sin x$$

$$\frac{R \sin \alpha = 2.5}{R \cos \alpha = 6} \Rightarrow \tan \alpha = \frac{5}{12} \quad \alpha = 0.395$$

$$R^2 = 2.5^2 + 6^2 \quad \therefore R = 6.5 \quad 6.5 \cos(x - 0.395 \dots)$$



$$x=0 \quad y=6 \quad A(0,6)$$

$$B, C \rightarrow 0.395 \dots$$

$$B(1.97, 0)$$

$$C(5.11, 0)$$

$$c) H = 12 + 6.5 \cos(x - 0.395 \dots) \quad \text{when } x = \frac{2\pi t}{52}$$

$$6.5 \cos(x - 0.395) \rightarrow \text{max} = 6.5 \quad \text{when } x = 0.395, 2\pi + 0.395 \dots$$

$$\rightarrow \text{min} = -6.5 \quad \text{when } x = \frac{\pi}{2} + 0.395, \frac{3\pi}{2} + 0.395 \dots$$

$$H_{\text{max}} = 18.5 \quad H_{\text{min}} = 5.5$$

$$d) 16 = 12 + 6.5 \cos(x - 0.395) \Rightarrow \cos(x - 0.395) = \frac{4}{6.5}$$

$$\therefore x - 0.395 = 0.9079, 5.375 \rightarrow +2\pi \text{ etc.}$$

$$\therefore x = 1.3027, 5.77, \dots$$

$$\frac{2\pi t}{52} = \uparrow$$

$$(52) \cdot (2\pi) \quad t = 10.78 ; 47.75$$

$$t = 11, 48$$