

1. $z = 3 + 2i, w = 1 - i$

Find in the form $a + bi$, where a and b are real constants,

(a) zw

(2)

(b) $\frac{z}{w^*}$, showing clearly how you obtained your answer.

(3)

Given that

$|z + k| = \sqrt{53}$, where k is a real constant

(c) find the possible values of k .

(4)

(a) $z = 3 + 2i, w = 1 - i$

$$\therefore zw = (3 + 2i)(1 - i) = 3 - 3i + 2i - 2i^2$$

$$\therefore zw = \underline{\underline{5 - i}}$$

(b) $w^* = 1 + i$

$$\therefore \frac{z}{w^*} = \frac{3 + 2i}{1 + i} = \frac{(3 + 2i)(1 - i)}{(1 + i)(1 - i)}$$

$$= \frac{5 - i}{1 - i^2} = \frac{5 - i}{2} = \frac{5}{2} - \frac{1}{2}i$$

$$\therefore \frac{z}{w^*} = \underline{\underline{\frac{5}{2} - \frac{1}{2}i}}$$

(c) $|z + k| = |3 + k + 2i| = \sqrt{53}$

$$\Rightarrow (3 + k)^2 + 2^2 = 53$$

$$\therefore (3 + k)^2 = 49$$

$$\therefore (k + 3) = \pm 7 \Rightarrow$$

$$k = 4$$

$$k = -10$$



2.

$$f(x) = x^2 - \frac{3}{\sqrt{x}} - \frac{4}{3x^2}, \quad x > 0$$

(a) Show that the equation $f(x) = 0$ has a root α in the interval $[1.6, 1.7]$

(2)

(b) Taking 1.6 as a first approximation to α , apply the Newton-Raphson process once to $f(x)$ to find a second approximation to α . Give your answer to 3 decimal places.

$$(a) \quad f(1.6) = 1.6^2 - \frac{3}{\sqrt{1.6}} - \frac{4}{3(1.6)^2} = -0.3325... \quad (5)$$

$$f(1.7) = 1.7^2 - \frac{3}{\sqrt{1.7}} - \frac{4}{3(1.7)^2} = 0.1277...$$

$\Rightarrow f(1.6) < 0$ & $f(1.7) > 0$
 \therefore There is a sign change in the interval $[1.6, 1.7]$.
 $\therefore \alpha \in [1.6, 1.7]$

(b) $\alpha_0 \approx 1.6$

$$\alpha_1 \approx \alpha_0 - \frac{f(\alpha_0)}{f'(\alpha_0)}$$

$$f(x) = x^2 - 3x^{-1/2} - \frac{4}{3}x^{-2}$$


$$\therefore f'(x) = 2x + \frac{3}{2}x^{-3/2} + \frac{8}{3}x^{-3}$$

$$f(1.6) = -0.3325...$$

$$f'(1.6) = 4.5922...$$

$$\therefore \alpha_1 \approx 1.6 - \frac{-0.3325...}{4.5922...} = 1.672 \text{ (3dp)}$$

$$\therefore \alpha_1 \approx \underline{\underline{1.672 \text{ (3dp)}}}$$



3. The quadratic equation

$$x^2 - 2x + 3 = 0$$

has roots α and β .

Without solving the equation,

(a) (i) write down the value of $(\alpha + \beta)$ and the value of $\alpha\beta$

(ii) show that $\alpha^2 + \beta^2 = -2$

(iii) find the value of $\alpha^3 + \beta^3$

(5)

(b) (i) show that $\alpha^4 + \beta^4 = (\alpha^2 + \beta^2)^2 - 2(\alpha\beta)^2$

(ii) find a quadratic equation which has roots

$$(\alpha^3 - \beta) \text{ and } (\beta^3 - \alpha)$$

giving your answer in the form $px^2 + qx + r = 0$ where p, q and r are integers.

(6)

$$3. \quad x^2 - 2x + 3$$

$$\text{(a) (i) } x^2 - 2x + 3 \equiv (x - \alpha)(x - \beta)$$

$$\therefore x^2 - 2x + 3 \equiv x^2 - \beta x - \alpha x + \alpha\beta$$

$$\therefore x^2 - 2x + 3 \equiv x^2 - (\alpha + \beta)x + \alpha\beta$$

Compare coefficients:

$$\Rightarrow \alpha + \beta = 2$$


$$\alpha\beta = 3$$

$$\text{(ii) LHS} = \alpha^2 + \beta^2 \equiv (\alpha + \beta)^2 - 2\alpha\beta$$

$$= 2^2 - 2(3)$$

$$= 4 - 6 = -2 = \text{RHS}$$

Q.E.D



$$(iii) (\alpha + \beta)^3 = \alpha^3 + 3\alpha^2\beta + 3\alpha\beta^2 + \beta^3 \quad (\text{via Binomial expansion})$$

$$(\alpha + \beta)^3 = \alpha^3 + \beta^3 + 3\alpha\beta(\alpha + \beta)$$

$$\therefore \alpha^3 + \beta^3 = (\alpha + \beta)^3 - 3\alpha\beta(\alpha + \beta)$$

$$\therefore \alpha^3 + \beta^3 = 2^3 - 3(3)(2)$$

$$\alpha^3 + \beta^3 = \underline{\underline{-10}}$$

(b) (i)

$$\text{RHS} = (\alpha^2 + \beta^2)^2 - 2(\alpha\beta)^2 = \alpha^4 + 2\alpha^2\beta^2 + \beta^4 - 2\alpha^2\beta^2$$

$$= \alpha^4 + \beta^4 = \underline{\underline{\text{LHS}}} \quad \square \text{ B.E.V}$$

$$(ii) [x - (\alpha^3 - \beta)] [x - (\beta^3 - \alpha)] = x^2 - x(\beta^3 - \alpha) - x(\alpha^3 - \beta) + (\alpha^3 - \beta)(\beta^3 - \alpha)$$

$$= x^2 - x(\beta^3 - \alpha + \alpha^3 - \beta) + (\alpha^3\beta^3 - \alpha^4 - \beta^4 + \alpha\beta)$$

$$= x^2 - x[\alpha^3 + \beta^3 - (\alpha + \beta)] + [(\alpha\beta)^3 - (\alpha^4 + \beta^4) + \alpha\beta]$$

$$= \underline{\underline{x^2 + 12x + 44}}$$

$$\begin{aligned} p &= 1 \\ q &= 12 \\ r &= 44 \end{aligned}$$

4.

$$A = \begin{pmatrix} -\frac{1}{\sqrt{2}} & \frac{1}{\sqrt{2}} \\ -\frac{1}{\sqrt{2}} & -\frac{1}{\sqrt{2}} \end{pmatrix}$$

(a) Describe fully the single geometrical transformation represented by the matrix A . (3)

(b) Hence find the smallest positive integer value of n for which

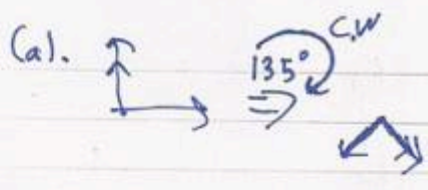
$$A^n = I$$

where I is the 2×2 identity matrix. (1)

The transformation represented by the matrix A followed by the transformation represented by the matrix B is equivalent to the transformation represented by the matrix C .

Given that $C = \begin{pmatrix} 2 & 4 \\ -3 & -5 \end{pmatrix}$,

(c) find the matrix B . (4)

(a).  A represents a 135° clockwise rotation about the origin.

(b) $A^n = I$, $n > 0$, $n \in \mathbb{Z}^+$

$n \neq 0$ $n = 8$

(c) $C = BA \Rightarrow CA^{-1} = BAA^{-1} \Rightarrow B = CA^{-1}$

~~$B =$~~ $A^{-1} = \frac{1}{1} \begin{pmatrix} -\frac{1}{\sqrt{2}} & \frac{1}{\sqrt{2}} \\ \frac{1}{\sqrt{2}} & -\frac{1}{\sqrt{2}} \end{pmatrix}$

$\therefore B = \begin{pmatrix} 2 & 4 \\ -3 & -5 \end{pmatrix} \begin{pmatrix} -\frac{1}{\sqrt{2}} & -\frac{1}{\sqrt{2}} \\ \frac{1}{\sqrt{2}} & -\frac{1}{\sqrt{2}} \end{pmatrix} = \begin{pmatrix} \sqrt{2} & -3\sqrt{2} \\ -\sqrt{2} & 4\sqrt{2} \end{pmatrix}$



5. (a) Use the standard results for $\sum_{r=1}^n r$ and $\sum_{r=1}^n r^3$ to show that, for all positive integers n ,

$$\sum_{r=1}^n (8r^3 - 3r) = \frac{1}{2} n(n+1)(2n+3)(an+b)$$

where a and b are integers to be found.

Given that

$$\sum_{r=5}^{10} (8r^3 - 3r + kr^2) = 22768$$

(b) find the exact value of the constant k .

5(a)

$$\text{LHS} = \sum_{r=1}^n (8r^3 - 3r) = 8 \sum_{r=1}^n r^3 - 3 \sum_{r=1}^n r$$

$$= \frac{8}{4} n^2(n+1)^2 - \frac{3n}{2} (n+1)$$

$$= 2n^2(n+1)^2 - \frac{3n}{2}(n+1)$$

$$= \frac{1}{2} n(n+1) [4n(n+1) - 3]$$

$$= \frac{1}{2} n(n+1) (4n^2 + 4n - 3)$$

$$= \frac{1}{2} n(n+1)(2n+3)(2n-1)$$

$$\therefore \begin{matrix} a=2 \\ b=-1 \end{matrix}$$

$$(b) \sum_{r=5}^{10} = \sum_{r=1}^{10} - \sum_{r=1}^4$$



$$= \sum_{r=1}^{10} (8r^3 - 3r) + k \sum_{r=1}^{10} r^2 - \sum_{r=1}^4 (8r^3 - 3r) - k \sum_{r=1}^4 r^2$$

$$= 24035 + k(385) - 770 - k(30)$$

$$= 23265 + 355k = 22768$$

$$\therefore 355k = -497$$

$$\Rightarrow k = -\frac{7}{5}$$

$$\sum_{r=1}^n (8r^3 - 3r) + k \sum_{r=1}^n r^2 = (23265 - 497k) \sum_{r=1}^n r^2 = 22768 \sum_{r=1}^n r^2$$

$$(1+n) \frac{n^2}{2} - \frac{3}{2} n^2 = (23265 - 497k) \frac{n^2}{2} = 22768 \frac{n^2}{2}$$

$$(1+n)n^2 - 3n^2 = (23265 - 497k)n^2 = 22768n^2$$

$$[1 + n - 3]n^2 = (23265 - 497k)n^2 = 22768n^2$$

$$(n - 2)n^2 = (23265 - 497k)n^2 = 22768n^2$$

$$\frac{n-2}{n^2} = \frac{23265 - 497k}{n^2} = \frac{22768}{n^2}$$

$$\frac{n-2}{n^2} = \frac{22768}{n^2} \quad (n) \quad \frac{n-2}{n^2} = \frac{22768}{n^2}$$

6. The rectangular hyperbola H has equation $xy = c^2$, where c is a non-zero constant.

The point $P\left(cp, \frac{c}{p}\right)$, where $p \neq 0$, lies on H .

(a) Show that the normal to H at P has equation

$$yp - p^3x = c(1 - p^4) \quad (5)$$

The normal to H at P meets H again at the point Q .

(b) Find, in terms of c and p , the coordinates of Q .

(4)

$$(a) \quad xy = c^2 \Rightarrow y = c^2 x^{-1}$$

$$\therefore \frac{dy}{dx} = -\frac{c^2}{x^2}$$

$$\therefore \text{at } P, \left(\frac{dy}{dx}\right)_{x=cp} = -\frac{c^2}{c^2 p^2} = -\frac{1}{p^2}$$

$$\therefore \text{gradient of Normal at } P = -\frac{1}{-1/p^2} = p^2$$


$$\therefore y - y_1 = m(x - x_1)$$

$$\therefore y - \frac{c}{p} = p^2(x - cp)$$

$$\textcircled{Xp} \Rightarrow yp - c = p^3x - cp^4$$

$$\Rightarrow yp - p^3x = c - cp^4$$

$$\Rightarrow yp - p^3x = \underline{c(1 - p^4)} \quad \text{D.E.D}$$



$$(b) \quad y = \frac{c^2}{x} \Rightarrow \frac{c^2}{x} p - p^3x = c(1 - p^4)$$

$$\therefore c^2 p - p^3 x^2 = cx(1 - p^4)$$



$$\therefore c^2 p - p^3 x^2 = c x - c p^4 x$$

$$\therefore p^3 x^2 + \frac{c - c p^4}{p^3} x - c^2 p = 0$$

$$\therefore x = \frac{c p^4 - c \pm \sqrt{c^2 (1 - p^4)^2 + 4 p^4 c^2}}{2 p^3}$$

$$\therefore x = \frac{c p^4 - c \pm \sqrt{c^2 - 2 c^2 p^4 + c^2 p^8 + 4 p^4 c^2}}{2 p^3}$$

$$\therefore x = \frac{c p^4 - c \pm \sqrt{c^2 p^8 + 2 c^2 p^4 + c^2}}{2 p^3}$$

$$\therefore x = \frac{c p^4 - c \pm \sqrt{c^2 (p^4 + 1)^2}}{2 p^3}$$

$$\therefore x = \frac{c p^4 - c \pm c (p^4 + 1)}{2 p^3} \left\{ \begin{array}{l} x_p = \frac{c p^4 - c + c p^4 + c}{2 p^3} = \frac{2 c p^4}{2 p^3} = c p \\ x_b = \frac{c p^4 - c - c p^4 - c}{2 p^3} = \frac{-2 c}{2 p^3} \end{array} \right.$$

$$\therefore y = \frac{c^2}{-\frac{c}{p^3}} = -\frac{c^2 p^3}{c} = -c p^3$$

$$\therefore Q: \left(-\frac{c}{p^3}, c p^3 \right)$$

$$f(x) = x^4 - 3x^3 - 15x^2 + 99x - 130$$

(a) Given that $x = 3 + 2i$ is a root of the equation $f(x) = 0$, use algebra to find the three other roots of the equation $f(x) = 0$

(7)

(b) Show the four roots of $f(x) = 0$ on a single Argand diagram.

(2)

(a) Another root must be $3 - 2i$

$\Rightarrow (x - (3 + 2i))(x - (3 - 2i))$ must be a factor

$$(x - (3 + 2i))(x - (3 - 2i)) =$$

$$x^2 - x(3 - 2i) - x(3 + 2i) + (3 + 2i)(3 - 2i)$$

$$= x^2 - x(\cancel{6}) + 9 + 4 = x^2 - \cancel{6}x + 13$$

$\therefore (x^2 - \cancel{6}x + 13)$ is a factor

$$\therefore x^4 - 3x^3 - 15x^2 + 99x - 130 = (x^2 - \cancel{6}x + 13)(x^2 + Bx - 10)$$

Compare coefficients:

$$x^3: -3 = B - \cancel{6} \Rightarrow B = \underline{\underline{3}}$$

$$\therefore (x^2 - 6x + 13)(x^2 + 3x - 10) = x^4 - 3x^3 - 15x^2 + 99x - 130$$

$$\Rightarrow x^2 + 3x - 10 = 0$$

$$\therefore \left(x + \frac{3}{2}\right)^2 - \frac{49}{4} = 0$$

$$\therefore x + \frac{3}{2} = \pm \frac{7}{2} \quad \therefore x = 2$$

$$\therefore x = 3 - 2i \quad x = -5$$



8. The parabola P has equation $y^2 = 4ax$, where a is a positive constant. The point S is the focus of P .

The point B , which does not lie on the parabola, has coordinates (q, r) where q and r are positive constants and $q > a$. The line l passes through B and S .

(a) Show that an equation of the line l is

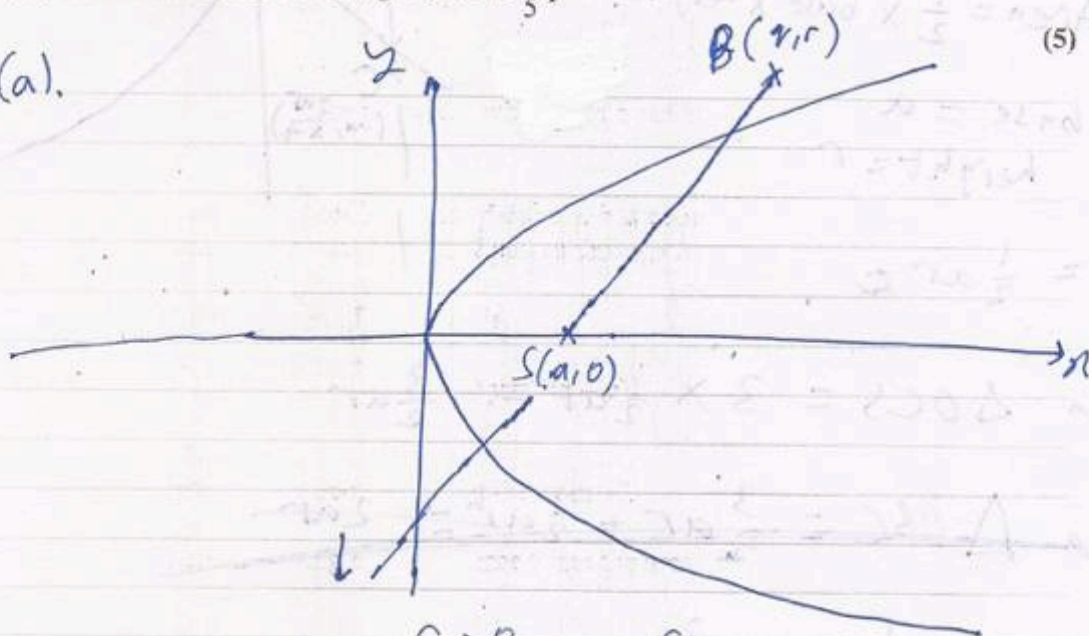
$$(q - a)y = r(x - a) \tag{3}$$

The line l intersects the directrix of P at the point C .

Given that the area of triangle OCS is three times the area of triangle OBS , where O is the origin,

(b) show that the area of triangle OBC is $\frac{6}{5}qr$

8(a).



$$\text{gradient of } l = \frac{r - 0}{q - a} = \frac{r}{q - a}$$


$$\therefore y - y_1 = m(x - x_1)$$

consider S :

$$\Rightarrow y - 0 = \frac{r}{q - a}(x - a)$$

$$\therefore y = \frac{r}{q - a}(x - a)$$

$$\Rightarrow (q - a)y = r(x - a) \quad \text{A.E.D.}$$




(b) At direction n , $x = -a$

$$\therefore (q-a)y = -2ar$$

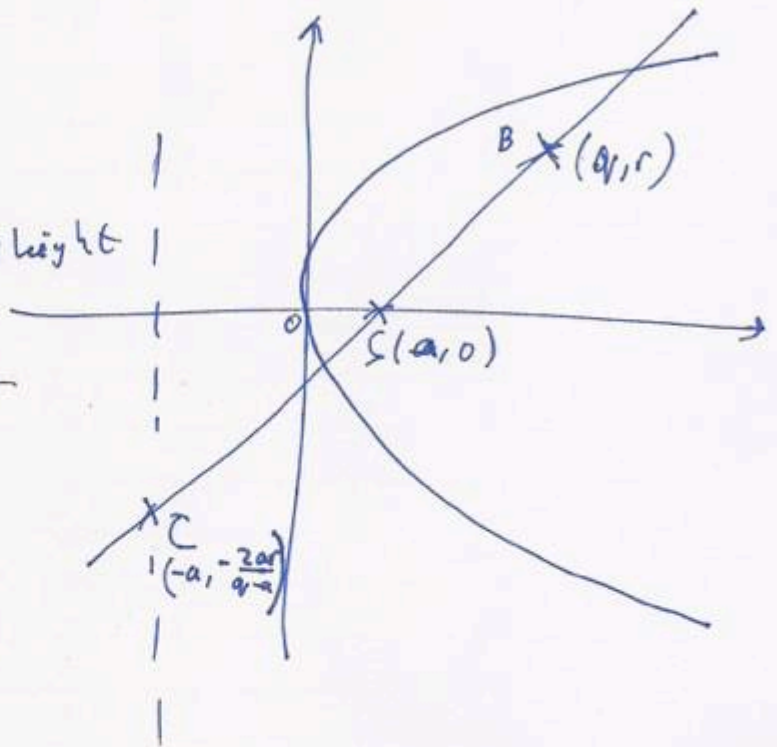
$$\therefore y = -\frac{2ar}{q-a} \Rightarrow C: \left(-a, -\frac{2ar}{q-a}\right)$$

Consider $\triangle OBS$:

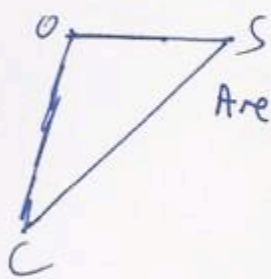


$$\text{Area} = \frac{1}{2} \times \text{base} \times \text{height}$$

$$= \frac{1}{2} \times a \times r = \frac{1}{2} ar$$



Consider $\triangle OCS$:



$$\text{Area} = \frac{1}{2} \times a \times \frac{2ar}{q-a}$$

$$= \frac{a^2 r}{q-a}$$

$$\text{Area } \triangle OCS = 3 \times \text{Area } \triangle OBS$$

$$\Rightarrow \frac{a^2 r}{q-a} = \frac{3}{2} ar$$

$$\textcircled{\div ar} \Rightarrow \frac{a}{q-a} = \frac{3}{2}$$

$$\therefore 2a = 3q - 3a \Rightarrow a = \frac{3q}{5}$$

$$\text{Area } \triangle OBC = \text{Area } \triangle OBS + \text{Area } \triangle OCS = \frac{1}{2} ar + \frac{3}{2} ar$$

$$= 2ar = 2 \times \frac{3q}{5} \times r = \frac{6qr}{5} \quad \text{Q.E.D.}$$

9. Prove by induction that, for $n \in \mathbb{Z}^+$

$$f(n) = 4^{n+1} + 5^{2n-1}$$

is divisible by 21

(6)

When $n=1$, $f(1) = 4^2 + 5^1 = 16 + 5 = 21$

$\therefore f(n)$ is divisible by 21 for $n=1$

Let us assume for $n=k$,

$$f(k) = 4^{k+1} + 5^{2k-1} \text{ is divisible by 21.}$$

When $n=k+1$, $f(k+1) = 4^{k+2} + 5^{2k+1}$

$$= 4(4^{k+1}) + 5^2(5^{2k-1})$$

$$= 4(4^{k+1}) + 25(5^{2k-1})$$

$$= 4(4^{k+1}) + 4(5^{2k-1}) + 21(5^{2k-1})$$

$$= 4(4^{k+1} + 5^{2k-1}) + 21(5^{2k-1})$$

$$\Rightarrow f(k+1) = 4f(k) + 21(5^{2k-1})$$

$4f(k)$ is divisible by 21 $\because f(k)$ is divisible by 21
 $21(5^{2k-1})$ is divisible by 21 \therefore

\therefore If the result is divisible by $n=k$,
 it is shown to be divisible by $n=k+1$.
 Since it is divisible by $n=1$, by induction
 $f(n)$ is divisible by 21 for all $n \in \mathbb{Z}^+$



