

Higher Check In - 1.04 Inverse operations

Fill in the missing values.

1. $\square^3 = 343$

2. $\frac{\square}{16 - 3^2} = 5$

3. $5 + \frac{24}{\sqrt{\square} + 1} = 11$

4. $\sqrt{\frac{22}{\square^4 + 7}} = \frac{1}{2}$

5. The reciprocal of a number is $1\frac{2}{3}$. What is the number?

6. Given that $x^3 = \frac{1}{512}$ and $y = \frac{1}{\sqrt[3]{x}}$, show that $y = 2$.

7. Ruth thinks of a number. She multiplies it by 5, adds 3 to it and then multiplies it by itself three times. The answer is 8. Explain how to find Ruth's original number.

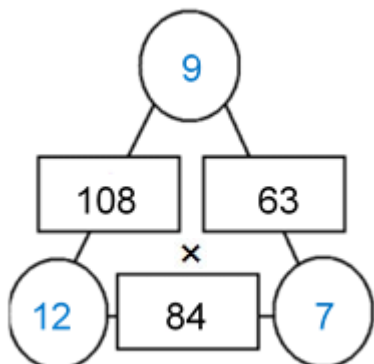
8. The mean weight of a bag of 5 apples is 73 g. Another apple is added to the bag and the new mean weight is 75 g. Show that the weight of the added apple is 85 g.

9. A cylindrical tube has a volume of 108 cm^3 and a length of 16 cm. Find the radius of the cylinder to 2 dp.

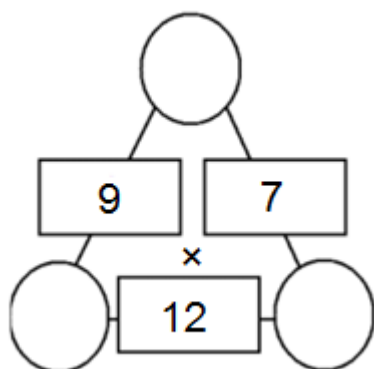
10. Peter wants to invest £500 for 10 years. Use the equation $1000 = 500\left(1 + \frac{i}{100}\right)^{10}$ to find the annual rate of compound interest (i) needed for Peter's investment to be worth £1000 at the end of 10 years.

GCSE (9–1) **MATHEMATICS**

Extension



This is an arithmagon. The numbers in the square boxes are made by multiplying the numbers in the circles on either side.



This is also an arithmagon. Can you work out what numbers go in the blank circles?

Make some of your own arithmagons.

GCSE (9–1) MATHEMATICS

Answers

1. 7

2. 35

3. 9

4. 3

5. $\frac{3}{5}$ or 0.6

6. $x = \frac{1}{\sqrt[3]{512}} = \frac{1}{8}$ so $\sqrt[3]{x} = \frac{1}{2}$ and therefore $y = 2$

7. Cube root 8, subtract 3 and then divide the number by 5 e.g. $\frac{\sqrt[3]{8}-3}{5} = -\frac{1}{5}$

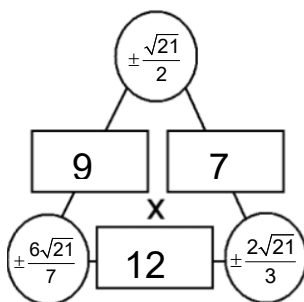
8. $73 \times 5 = 365$ g, $75 \times 6 = 450$ g, added apple = $450 - 365 = 85$ g

9. $V = \pi r^2 h$

$$r = \sqrt{\frac{V}{\pi h}} = \sqrt{\frac{108}{16\pi}} = 1.47 \text{ cm}$$

10. 7.2%

Extension



GCSE (9–1)

MATHEMATICS

We'd like to know your view on the resources we produce. By clicking on 'Like' or 'Dislike' you can help us to ensure that our resources work for you. When the email template pops up please add additional comments if you wish and then just click 'Send'. Thank you.

Whether you already offer OCR qualifications, are new to OCR, or are considering switching from your current provider/awarding organisation, you can request more information by completing the Expression of Interest form which can be found here:

www.ocr.org.uk/expression-of-interest

Looking for a resource? There is now a quick and easy search tool to help find free resources for your qualification:

www.ocr.org.uk/i-want-to/find-resources/

OCR Resources: *the small print*

OCR's resources are provided to support the delivery of OCR qualifications, but in no way constitute an endorsed teaching method that is required by the Board, and the decision to use them lies with the individual teacher. Whilst every effort is made to ensure the accuracy of the content, OCR cannot be held responsible for any errors or omissions within these resources. This formative assessment resource has been produced as part of our free GCSE teaching and learning support package. All the GCSE teaching and learning resources, including delivery guides, topic exploration packs, lesson elements and more are available on the qualification webpages. If you are looking for examination practice materials, you can find Sample Assessment Materials (SAMs) and Practice Papers on the qualification webpage <http://www.ocr.org.uk/qualifications/gcse-mathematics-j560-from-2015/>

© OCR 2019 - This resource may be freely copied and distributed, as long as the OCR logo and this message remain intact and OCR is acknowledged as the originator of this work.

OCR acknowledges the use of the following content: n/a

Please get in touch if you want to discuss the accessibility of resources we offer to support delivery of our qualifications: resources.feedback@ocr.org.uk

MATHEMATICS

| Assessment Objective | Qu. | Topic | R | A | G |
|----------------------|-----|---|---|---|---|
| AO1 | 1 | Solve one step equation involving cubing | | | |
| AO1 | 2 | Rearrange calculation using inverse operations | | | |
| AO1 | 3 | Rearrange calculation using inverse operations | | | |
| AO1 | 4 | Solve multi-step equation by using inverse operations | | | |
| AO1 | 5 | Find a reciprocal | | | |
| AO2 | 6 | Deduce given solution using inverse operations | | | |
| AO2 | 7 | Communicate solution involving inverse operations | | | |
| AO2 | 8 | Communicate solution involving inverse operations | | | |
| AO3 | 9 | Solve geometric problem using inverse operations | | | |
| AO3 | 10 | Solve a problem in context using inverse operations | | | |

| Assessment Objective | Qu. | Topic | R | A | G |
|----------------------|-----|-------|---|---|---|
| AO1 | 1 | | | | |
| AO1 | 2 | | | | |
| AO1 | 3 | | | | |
| AO1 | 4 | | | | |
| AO1 | 5 | | | | |
| AO2 | 6 | | | | |
| AO2 | 7 | | | | |
| AO2 | 8 | | | | |
| AO3 | 9 | | | | |
| AO3 | 10 | | | | |

| Assessment Objective | Qu. | Topic | R | A | G |
|----------------------|-----|-------|---|---|---|
| AO1 | 1 | | | | |
| AO1 | 2 | | | | |
| AO1 | 3 | | | | |
| AO1 | 4 | | | | |
| AO1 | 5 | | | | |
| AO2 | 6 | | | | |
| AO2 | 7 | | | | |
| AO2 | 8 | | | | |
| AO3 | 9 | | | | |
| AO3 | 10 | | | | |

| Assessment Objective | Qu. | Topic | R | A | G |
|----------------------|-----|-------|---|---|---|
| AO1 | 1 | | | | |
| AO1 | 2 | | | | |
| AO1 | 3 | | | | |
| AO1 | 4 | | | | |
| AO1 | 5 | | | | |
| AO2 | 6 | | | | |
| AO2 | 7 | | | | |
| AO2 | 8 | | | | |
| AO3 | 9 | | | | |
| AO3 | 10 | | | | |