

Prove that the angle subtended by an arc at the centre of a circle is twice the angle subtended at any point on the circumference

$$\text{Let } \angle BOC = x$$

$$\angle AOB = y$$

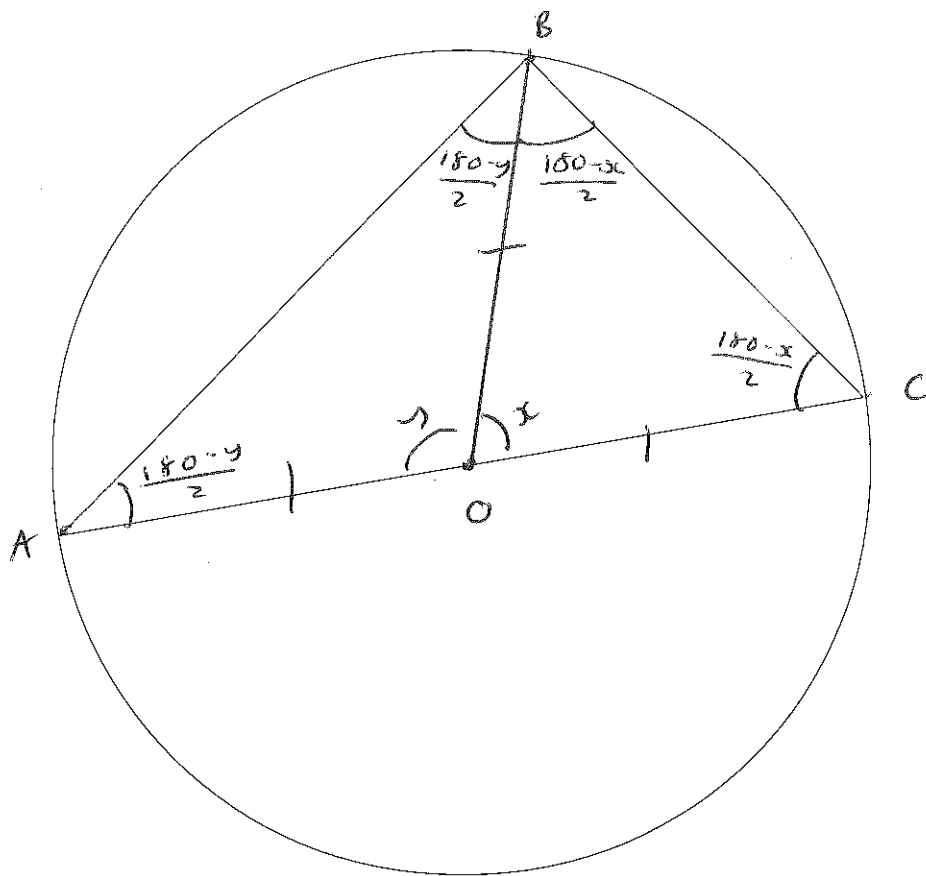
$$\therefore \angle AOC = 360 - x - y$$

$$\text{Angles } \angle CBO \text{ and } \angle BCO = \frac{180 - x}{2} \quad (\text{angles in isosceles triangle})$$

$$\text{Angles } \angle BAO \text{ and } \angle ABO = \frac{180 - y}{2} \quad \text{--- " ---}$$

$$\begin{aligned} \text{Angle } \angle ABC &= \frac{180 - y}{2} + \frac{180 - x}{2} \\ &= 90 - \frac{1}{2}y + 90 - \frac{1}{2}x \\ &= 180 - \frac{1}{2}x - \frac{1}{2}y \end{aligned}$$

$$\underline{360 - x - y = 2(180 - \frac{1}{2}x - \frac{1}{2}y)} \quad (4)$$



Prove the angle subtended at the circumference by a semicircle is a right angle

$$\text{Let } \angle AOB = y \quad \text{and} \quad \angle BOC = x$$

$$x + y = 180^\circ$$

$$\text{Angles } \angle ABO \text{ and } \angle BAO = \frac{180-y}{2}$$

$$\text{Angles } \angle BCO \text{ and } \angle CBO = \frac{180-x}{2}$$

(Angles in isosceles triangle)

$$\angle ABC = \frac{180-y}{2} + \frac{180-x}{2}$$

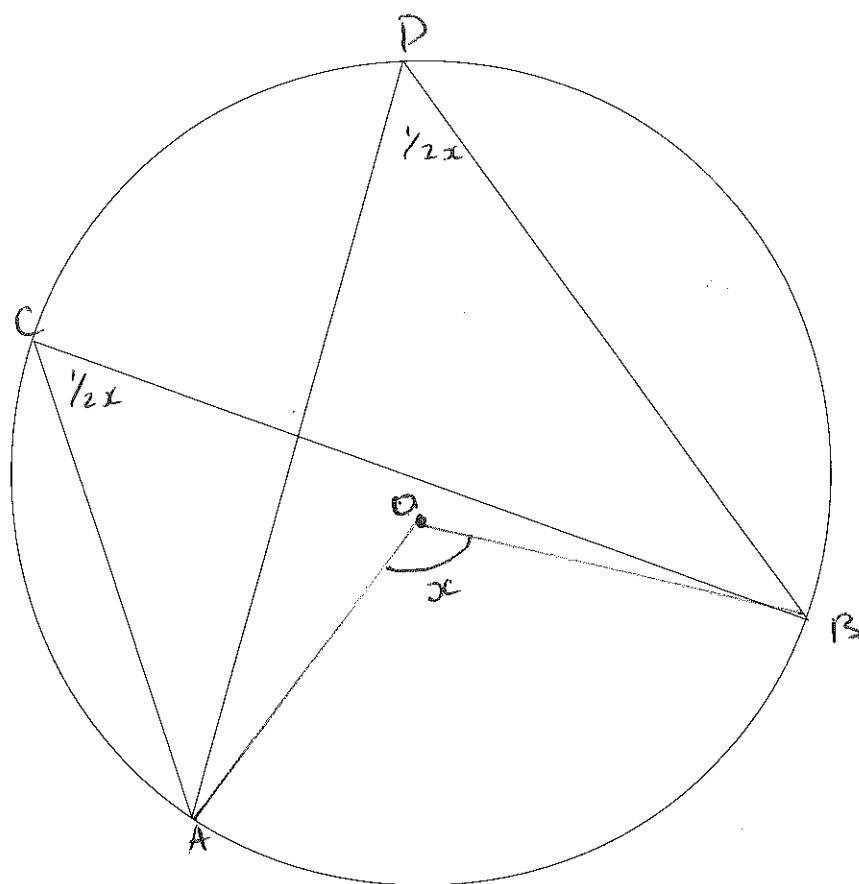
$$= 90 - \frac{1}{2}y + 90 - \frac{1}{2}x$$

$$= 180 - \frac{1}{2}y - \frac{1}{2}x$$

$$\left(\text{As } x + y = 180 \quad \frac{1}{2}x + \frac{1}{2}y = 90 \right)$$

$$= 180 - \left(\frac{1}{2}x + \frac{1}{2}y \right)$$

(4)



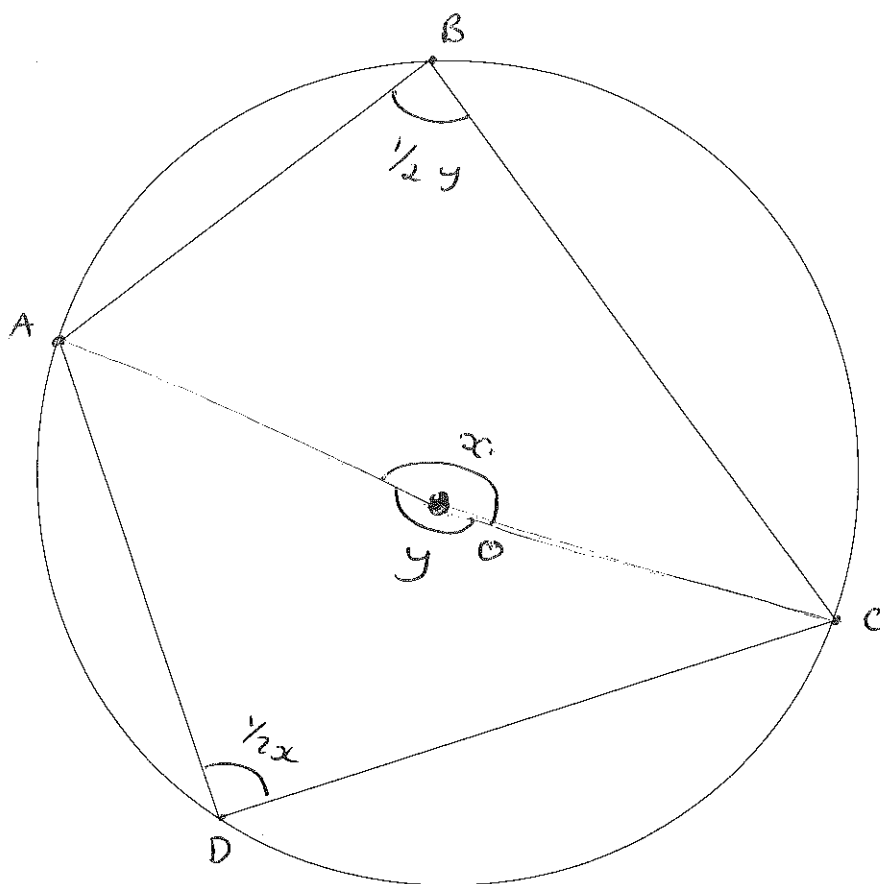
Prove that angles in the same segment are equal

$$\text{Angle } AOB = x$$

ACB and $ADB = \frac{1}{2}x$ (angles at circumference are half angles at centre)

$$\underline{\frac{1}{2}x = \frac{1}{2}x}$$

(4)



Prove that opposite angles of a cyclic quadrilateral sum to 180°

Let angle AOC (minor) = x

Let angle AOC (major) = y

Angle $x + y = 360^\circ$ (angles at a point)

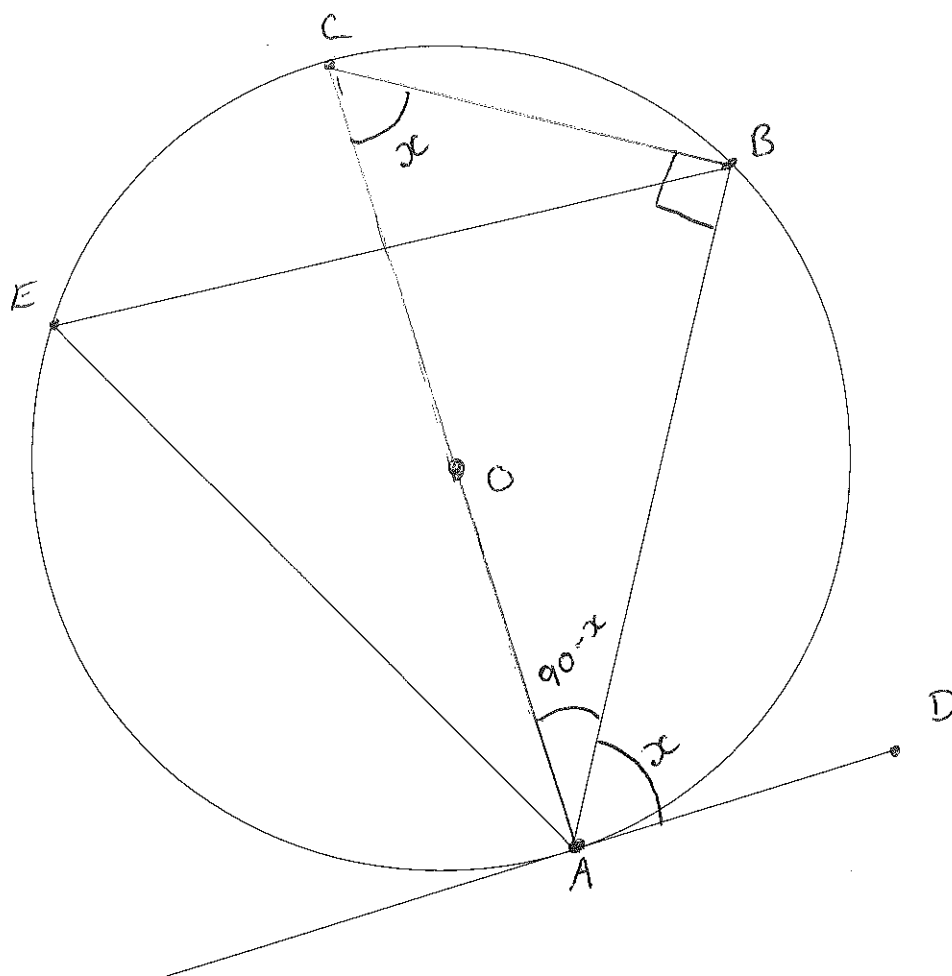
$\hat{A}DC = \frac{1}{2}x$ (Angle at circumference is half angle at centre.)

$\hat{A}BC = \frac{1}{2}y$

$$\text{As } x + y = 360$$

$$\underline{\frac{1}{2}x + \frac{1}{2}y = 180}$$

(4)



Prove the alternate segment theorem

The angle where tangent meets radius is 90°

The angle in a semi circle is 90°

Let angle $BAD = x$

\therefore Angle $BAC = 90 - x$ (tangent meets radius)

\therefore Angle $AEB = x$ (Angles in a triangle add up to 180° $180 - 90 - (90 - x) = x$)

Angle AEB also $= x$ (Angles in same segment are equal)

(4)