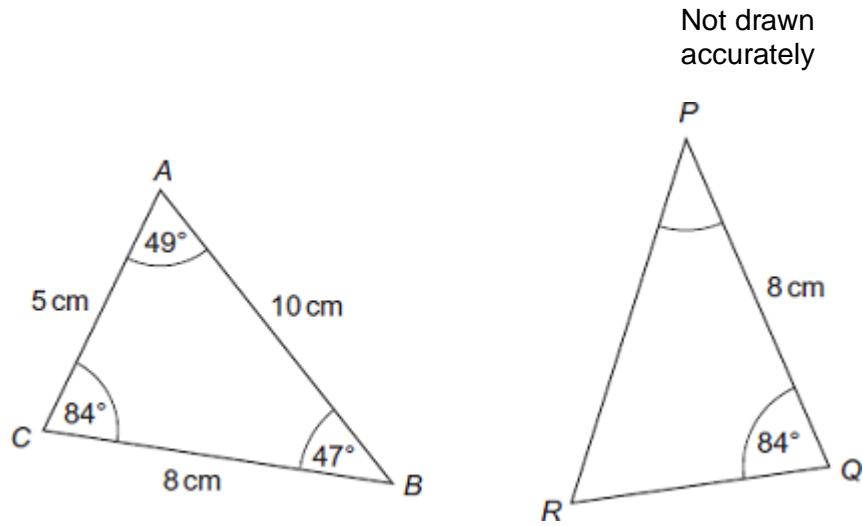


Q1. These two triangles are congruent.



- (a) What is the size of angle P ?
Circle your answer.

47° 49° 84° none of these

(1)

- (b) What is the length of PR ?
Circle your answer.

5 cm 8 cm 10 cm none of these

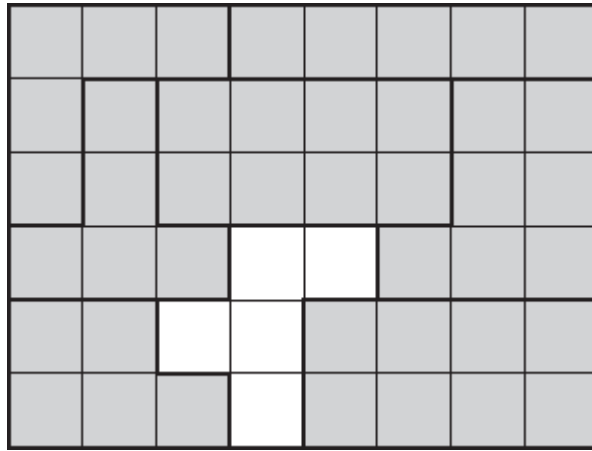
(1)

(Total 2 marks)

Q2.

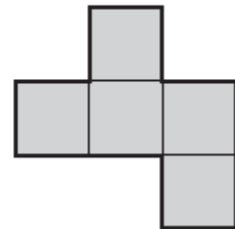
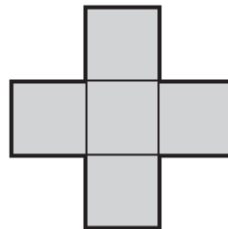
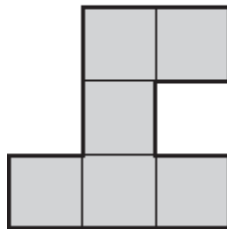
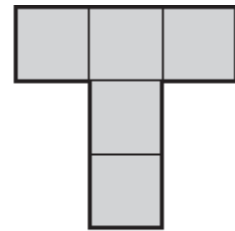
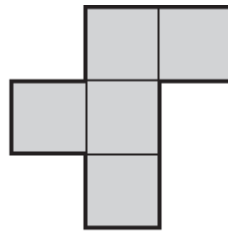
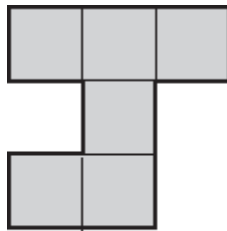
In a puzzle, you put shapes together to make a rectangle.

The puzzle is shown on a centimetre grid.



(a) One more shape will complete the puzzle.

Circle **two** shapes, either of which would complete the puzzle.



(2)

(b) Here is one of the shapes.



Work out the **perimeter** of this shape.

.....

Answer cm

(1)
(Total 3 marks)