

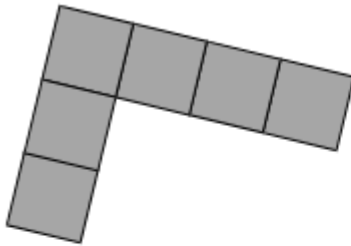
**Non-Calculator**

**Q1.**

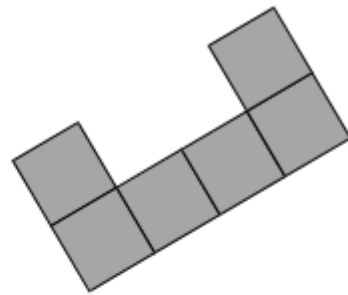
Which of these is the **net** of a **cube**?

Circle the correct letter.

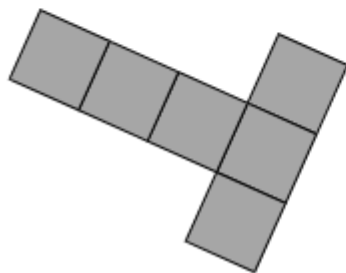
**A**



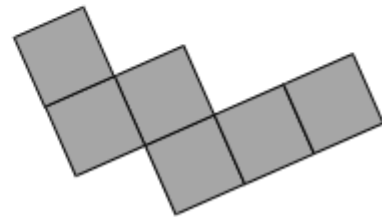
**B**



**C**



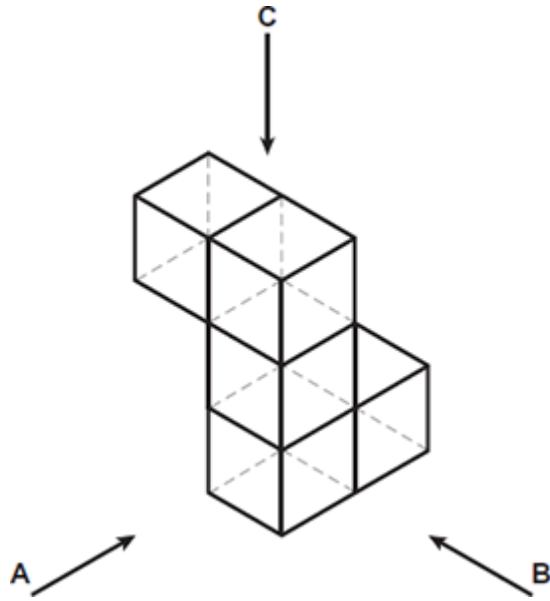
**D**



(Total 1 mark)

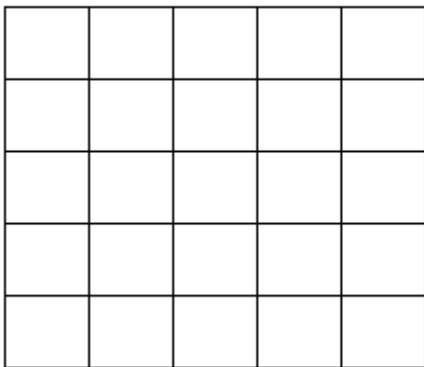
**Q2.**

This shape is made from **five** cubes.

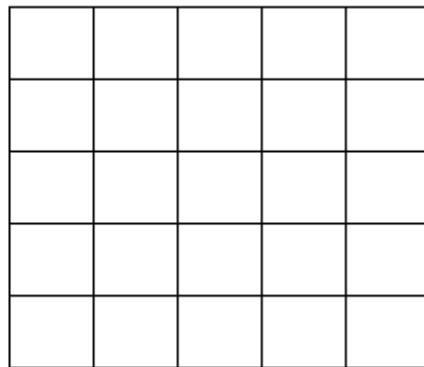


Draw what the shape looks like when seen from A, B and C.


**From A**



**From B**



**From C**

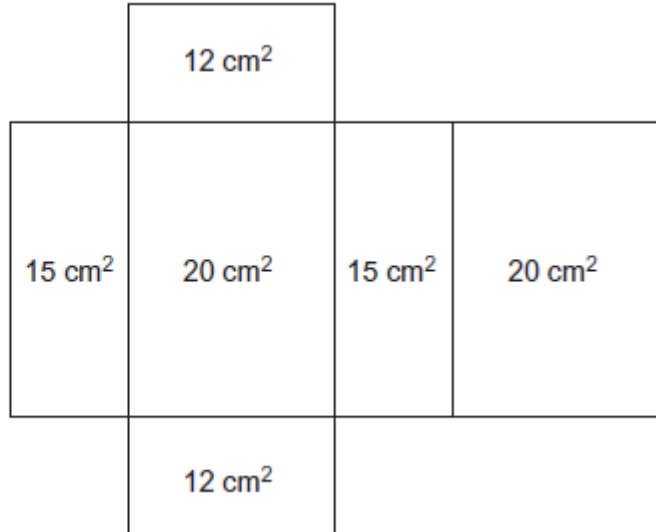
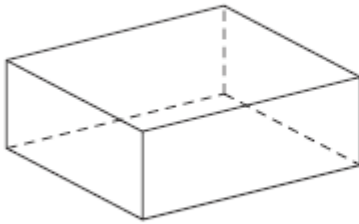


(Total 3 marks)

**Q3.**

Here is the net of a cuboid.  
The net shows the area of each face.

Not drawn accurately



Work out the **volume** of the cuboid.

---

---

---

---

---

---

---

---

---

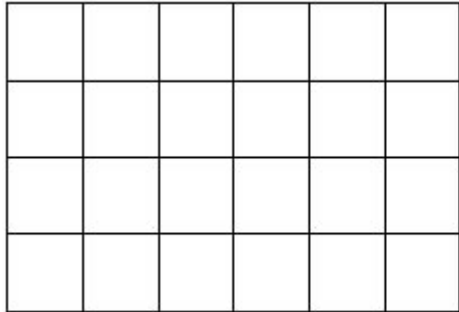
---

Answer \_\_\_\_\_ cm<sup>3</sup>  
**(Total 4 marks)**

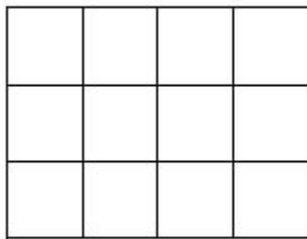
## Calculator

**Q4.**

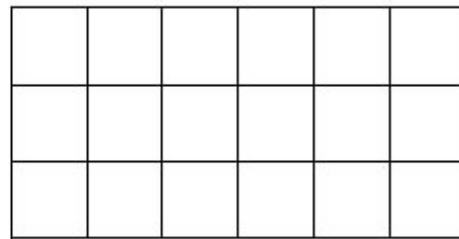
A solid cuboid is made from **centimetre cubes**.



Plan view



Front elevation



Side elevation

How many centimetre cubes were used to make the cuboid?

---


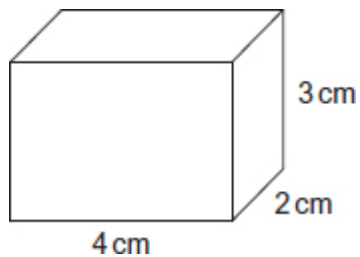
---

Answer \_\_\_\_\_

**(Total 2 marks)**

**Q5.**

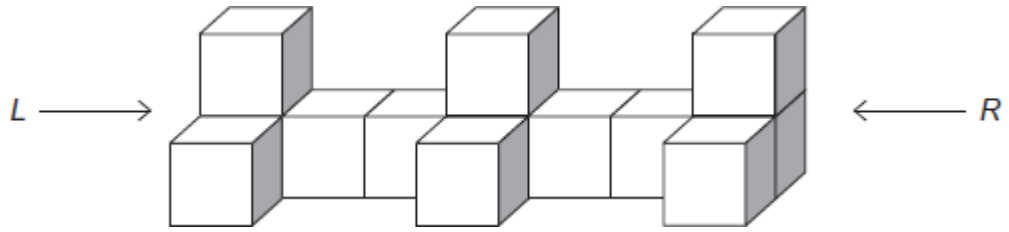
Make an accurate drawing of this cuboid on the isometric grid. One edge has been drawn for you.



**(Total 2 marks)**

**Q6.**

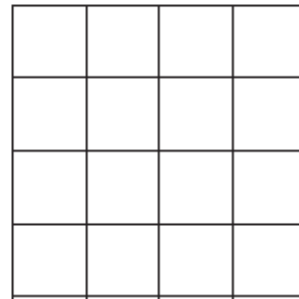
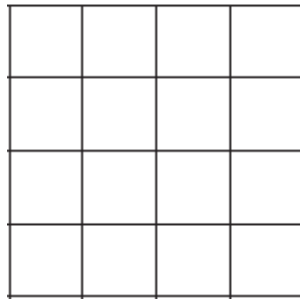
This solid shape is made from identical cubes.



(a) On the grids draw the side elevations *L* and *R*.

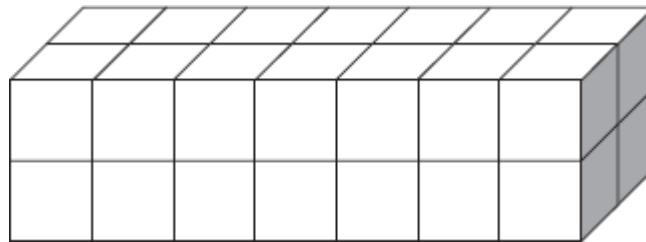
*L*

*R*



(2)

(b) How many cubes must be **added** to the shape to make this cuboid?



Answer \_\_\_\_\_

(2)

(Total 4 marks)

**Q7.**

The front elevation, side elevation and plan of a solid are all the same, as shown.




- (a) Write down the name of the solid.

Answer \_\_\_\_\_

(1)

- (b) The front elevation, side elevation and plan of a solid are all the same, as shown.



Write down the name of the solid.

Answer \_\_\_\_\_

(1)

(Total 2 marks)

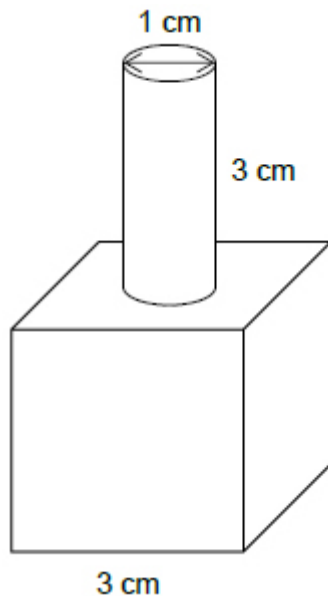
**Q8.**

A solid shape is made with a cube and a cylinder.

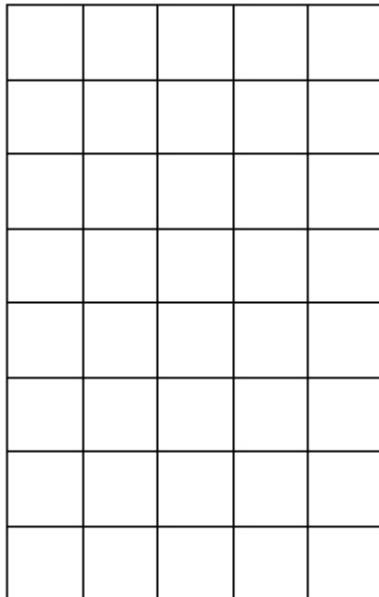
The cube has edge length 3 cm

The cylinder has diameter 1 cm and height 3 cm

- (a) The cylinder sits symmetrically on the centre of the top of the cube as shown.



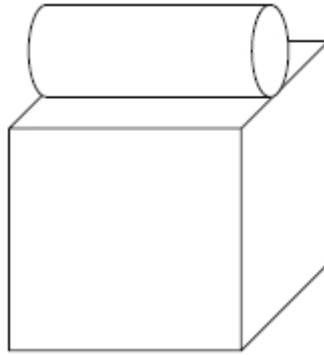
Draw the front elevation on the centimetre grid below.



(1)




- (b) The cylinder now sits symmetrically on the centre of the top of the cube as shown.

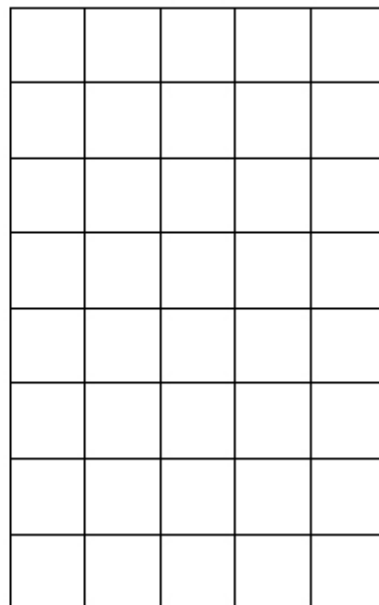


Draw the front elevation and the side elevation on the centimetre grids below.

**Front**



**Side**

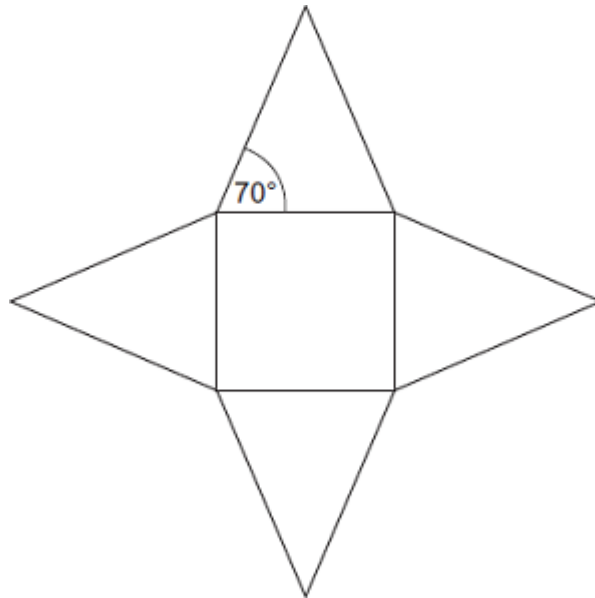


(2)  
(Total 3 marks)

**Q9.**

The diagram shows the net of a square-based pyramid.

Not drawn  
accurately



The area of the square base is  $36 \text{ cm}^2$ .

Work out the area of one triangular face.

---

---

---

---

---

---

---

---

Answer \_\_\_\_\_  $\text{cm}^2$   
(Total 5 marks)