


Please check the examination details below before entering your candidate information

Candidate surname					Other names					
<b>Pearson Edexcel</b>		Centre Number			Candidate Number					
<b>International GCSE</b>		<input type="text"/> <input type="text"/> <input type="text"/> <input type="text"/> <input type="text"/>			<input type="text"/> <input type="text"/> <input type="text"/> <input type="text"/>					
Time 2 hours		Paper reference		<b>4PM1/02</b>						
<b>Further Pure Mathematics</b>										
<b>PAPER 2</b>										
Calculators may be used.								Total Marks		

### Instructions

- Use **black** ink or ball-point pen.
- **Fill in the boxes** at the top of this page with your name, centre number and candidate number.
- Answer **all** questions.
- Without sufficient working, correct answers may be awarded no marks.
- Answer the questions in the spaces provided  
– *there may be more space than you need.*
- You must **NOT** write anything on the formulae page.  
Anything you write on the formulae page will gain NO credit.

### Information

- The total mark for this paper is 100.
- The marks for **each** question are shown in brackets  
– *use this as a guide as to how much time to spend on each question.*

### Advice

- Read each question carefully before you start to answer it.
- Check your answers if you have time at the end.
- Good luck with your examination.

Turn over ►

**P66027RRA**  
©2021 Pearson Education Ltd.  
1/1/1/1/1/1/1



P 6 6 0 2 7 R R A 0 1 3 6

  
**Pearson**

## International GCSE in Further Pure Mathematics Formulae sheet

### Mensuration

Surface area of sphere =  $4\pi r^2$

Curved surface area of cone =  $\pi r \times$  slant height

Volume of sphere =  $\frac{4}{3}\pi r^3$

### Series

#### Arithmetic series

Sum to  $n$  terms,  $S_n = \frac{n}{2} [2a + (n - 1)d]$

#### Geometric series

Sum to  $n$  terms,  $S_n = \frac{a(1 - r^n)}{(1 - r)}$

Sum to infinity,  $S_\infty = \frac{a}{1 - r}$   $|r| < 1$

#### Binomial series

$$(1 + x)^n = 1 + nx + \frac{n(n-1)}{2!}x^2 + \dots + \frac{n(n-1)\dots(n-r+1)}{r!}x^r + \dots \quad \text{for } |x| < 1, n \in \mathbb{Q}$$

### Calculus

#### Quotient rule (differentiation)

$$\frac{d}{dx} \left( \frac{f(x)}{g(x)} \right) = \frac{f'(x)g(x) - f(x)g'(x)}{[g(x)]^2}$$

### Trigonometry

#### Cosine rule

In triangle  $ABC$ :  $a^2 = b^2 + c^2 - 2bc \cos A$

$$\tan \theta = \frac{\sin \theta}{\cos \theta}$$

$$\sin(A + B) = \sin A \cos B + \cos A \sin B$$

$$\sin(A - B) = \sin A \cos B - \cos A \sin B$$

$$\cos(A + B) = \cos A \cos B - \sin A \sin B$$

$$\cos(A - B) = \cos A \cos B + \sin A \sin B$$

$$\tan(A + B) = \frac{\tan A + \tan B}{1 - \tan A \tan B}$$

$$\tan(A - B) = \frac{\tan A - \tan B}{1 + \tan A \tan B}$$

### Logarithms

$$\log_a x = \frac{\log_b x}{\log_b a}$$

DO NOT WRITE IN THIS AREA

DO NOT WRITE IN THIS AREA

DO NOT WRITE IN THIS AREA

DO NOT WRITE IN THIS AREA

DO NOT WRITE IN THIS AREA

DO NOT WRITE IN THIS AREA





DO NOT WRITE IN THIS AREA

DO NOT WRITE IN THIS AREA

DO NOT WRITE IN THIS AREA

DO NOT WRITE IN THIS AREA

DO NOT WRITE IN THIS AREA

DO NOT WRITE IN THIS AREA

**BLANK PAGE**  
**DO NOT WRITE ON THIS PAGE**



P 6 6 0 2 7 R R A 0 3 3 6





**Question 1 continued**

Handwriting practice area with 25 horizontal dotted lines.

**(Total for Question 1 is 5 marks)**

DO NOT WRITE IN THIS AREA

DO NOT WRITE IN THIS AREA

DO NOT WRITE IN THIS AREA

DO NOT WRITE IN THIS AREA

DO NOT WRITE IN THIS AREA

DO NOT WRITE IN THIS AREA



2 The finite region enclosed by the curve with equation  $y = 4 - x^2$  and the line with equation  $y = x + 2$  is rotated through  $360^\circ$  about the  $x$ -axis.

Use algebraic integration to find the exact volume of the solid formed.

(6)

Area with horizontal dotted lines for writing the solution.

DO NOT WRITE IN THIS AREA

DO NOT WRITE IN THIS AREA

DO NOT WRITE IN THIS AREA

DO NOT WRITE IN THIS AREA

DO NOT WRITE IN THIS AREA

DO NOT WRITE IN THIS AREA



**Question 2 continued**

Area with horizontal dotted lines for writing.

**(Total for Question 2 is 6 marks)**

DO NOT WRITE IN THIS AREA

DO NOT WRITE IN THIS AREA

DO NOT WRITE IN THIS AREA

DO NOT WRITE IN THIS AREA

DO NOT WRITE IN THIS AREA

DO NOT WRITE IN THIS AREA



P 6 6 0 2 7 R R A 0 7 3 6

3

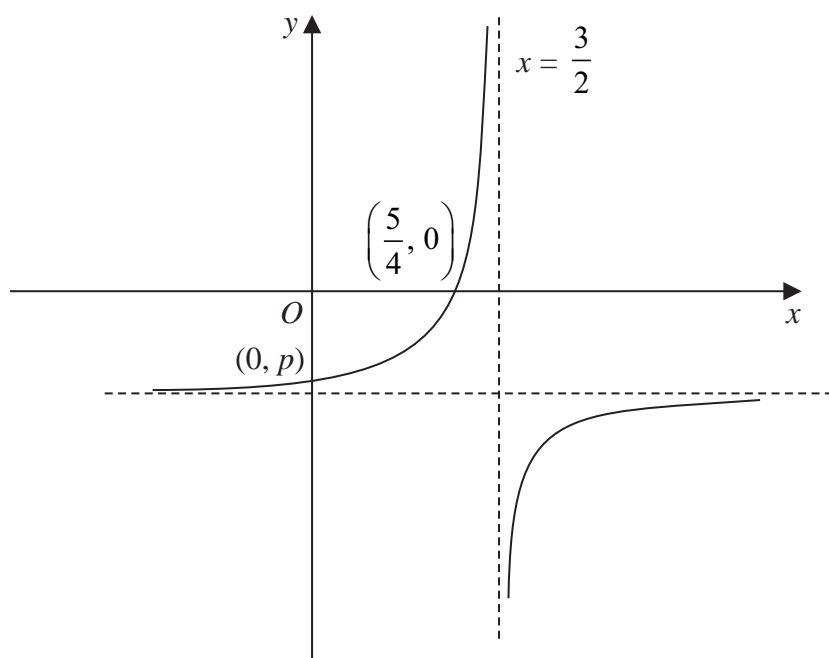
Diagram **NOT**  
accurately drawn

Figure 1

Figure 1 shows a sketch of the curve with equation

$$y = \frac{a - bx}{cx - d} \quad x \neq \frac{d}{c}$$

where  $a$ ,  $c$  and  $d$  are prime numbers and  $b$  is an integer.

The asymptote to the curve that is parallel to the  $y$ -axis has equation  $x = \frac{3}{2}$

- (a) Write down the value of  $c$  and the value of  $d$  (2)

The curve crosses the  $x$ -axis at the point  $\left(\frac{5}{4}, 0\right)$

- (b) Find the value of  $a$  and the value of  $b$  (2)

The curve crosses the  $y$ -axis at the point  $(0, p)$  where  $p$  is a rational number.

- (c) Find the value of  $p$  (2)

- (d) Find an equation of the asymptote to the curve that is parallel to the  $x$ -axis. (1)

.....

.....

.....

8



P 6 6 0 2 7 R R A 0 8 3 6

DO NOT WRITE IN THIS AREA

DO NOT WRITE IN THIS AREA

DO NOT WRITE IN THIS AREA

DO NOT WRITE IN THIS AREA

DO NOT WRITE IN THIS AREA

DO NOT WRITE IN THIS AREA





**Question 3 continued**

Handwriting practice area with horizontal dotted lines.

DO NOT WRITE IN THIS AREA

DO NOT WRITE IN THIS AREA

DO NOT WRITE IN THIS AREA

DO NOT WRITE IN THIS AREA

DO NOT WRITE IN THIS AREA

DO NOT WRITE IN THIS AREA



**Question 3 continued**

Area with horizontal dotted lines for writing.

**(Total for Question 3 is 7 marks)**

DO NOT WRITE IN THIS AREA

DO NOT WRITE IN THIS AREA

DO NOT WRITE IN THIS AREA

DO NOT WRITE IN THIS AREA

DO NOT WRITE IN THIS AREA

DO NOT WRITE IN THIS AREA





**Question 4 continued**

Area with horizontal dotted lines for writing.

**(Total for Question 4 is 11 marks)**

DO NOT WRITE IN THIS AREA

DO NOT WRITE IN THIS AREA

DO NOT WRITE IN THIS AREA

DO NOT WRITE IN THIS AREA

DO NOT WRITE IN THIS AREA

DO NOT WRITE IN THIS AREA



5  $y$  and  $x$  vary so that  $y = xe^{-2x}$

Given that the value of  $x$  increases by 3%, use calculus to find, in terms of  $x$ , an estimate for the percentage change in  $y$

Give your answer in the form  $a(b - cx)$  where  $a$ ,  $b$  and  $c$  are integers.

(6)

DO NOT WRITE IN THIS AREA

DO NOT WRITE IN THIS AREA

DO NOT WRITE IN THIS AREA

DO NOT WRITE IN THIS AREA

DO NOT WRITE IN THIS AREA

DO NOT WRITE IN THIS AREA



**Question 5 continued**

Handwriting practice area with horizontal dotted lines.

**(Total for Question 5 is 6 marks)**

DO NOT WRITE IN THIS AREA

DO NOT WRITE IN THIS AREA

DO NOT WRITE IN THIS AREA

DO NOT WRITE IN THIS AREA

DO NOT WRITE IN THIS AREA

DO NOT WRITE IN THIS AREA











**Question 7 continued**

Handwriting practice area with horizontal dotted lines.

DO NOT WRITE IN THIS AREA

DO NOT WRITE IN THIS AREA

DO NOT WRITE IN THIS AREA

DO NOT WRITE IN THIS AREA

DO NOT WRITE IN THIS AREA

DO NOT WRITE IN THIS AREA



**Question 7 continued**

Handwriting practice area with 28 horizontal dotted lines.

DO NOT WRITE IN THIS AREA

DO NOT WRITE IN THIS AREA

DO NOT WRITE IN THIS AREA

DO NOT WRITE IN THIS AREA

DO NOT WRITE IN THIS AREA

DO NOT WRITE IN THIS AREA



**Question 7 continued**

Area with horizontal dotted lines for writing.

**(Total for Question 7 is 10 marks)**

DO NOT WRITE IN THIS AREA

DO NOT WRITE IN THIS AREA

DO NOT WRITE IN THIS AREA

DO NOT WRITE IN THIS AREA

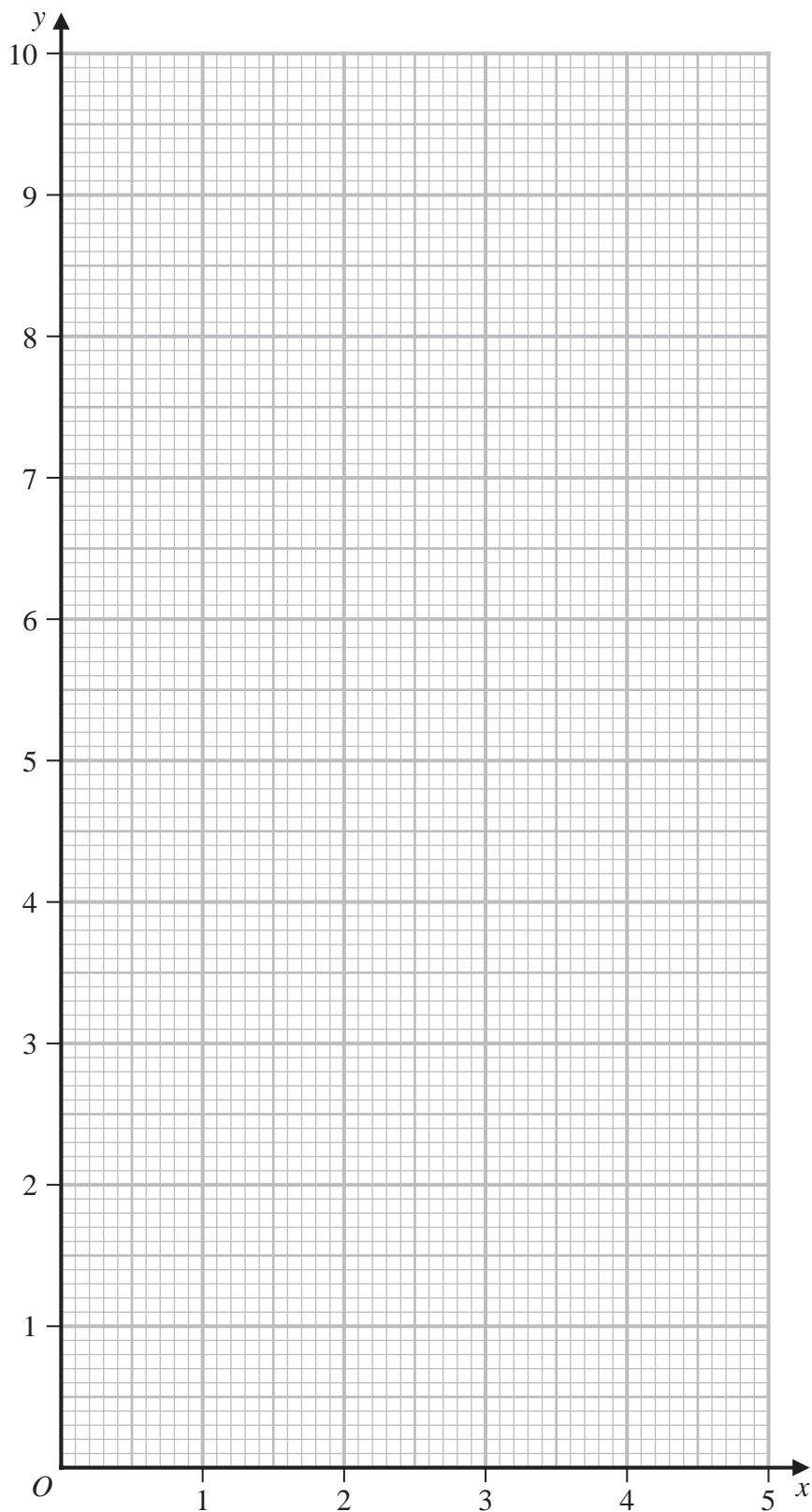
DO NOT WRITE IN THIS AREA

DO NOT WRITE IN THIS AREA





Question 8 continued



Turn over for a spare grid if you need to redraw your graph.

DO NOT WRITE IN THIS AREA

DO NOT WRITE IN THIS AREA

DO NOT WRITE IN THIS AREA

DO NOT WRITE IN THIS AREA

DO NOT WRITE IN THIS AREA

DO NOT WRITE IN THIS AREA



**Question 8 continued**

Handwriting practice area with 28 horizontal dotted lines.

DO NOT WRITE IN THIS AREA

DO NOT WRITE IN THIS AREA

DO NOT WRITE IN THIS AREA

DO NOT WRITE IN THIS AREA

DO NOT WRITE IN THIS AREA

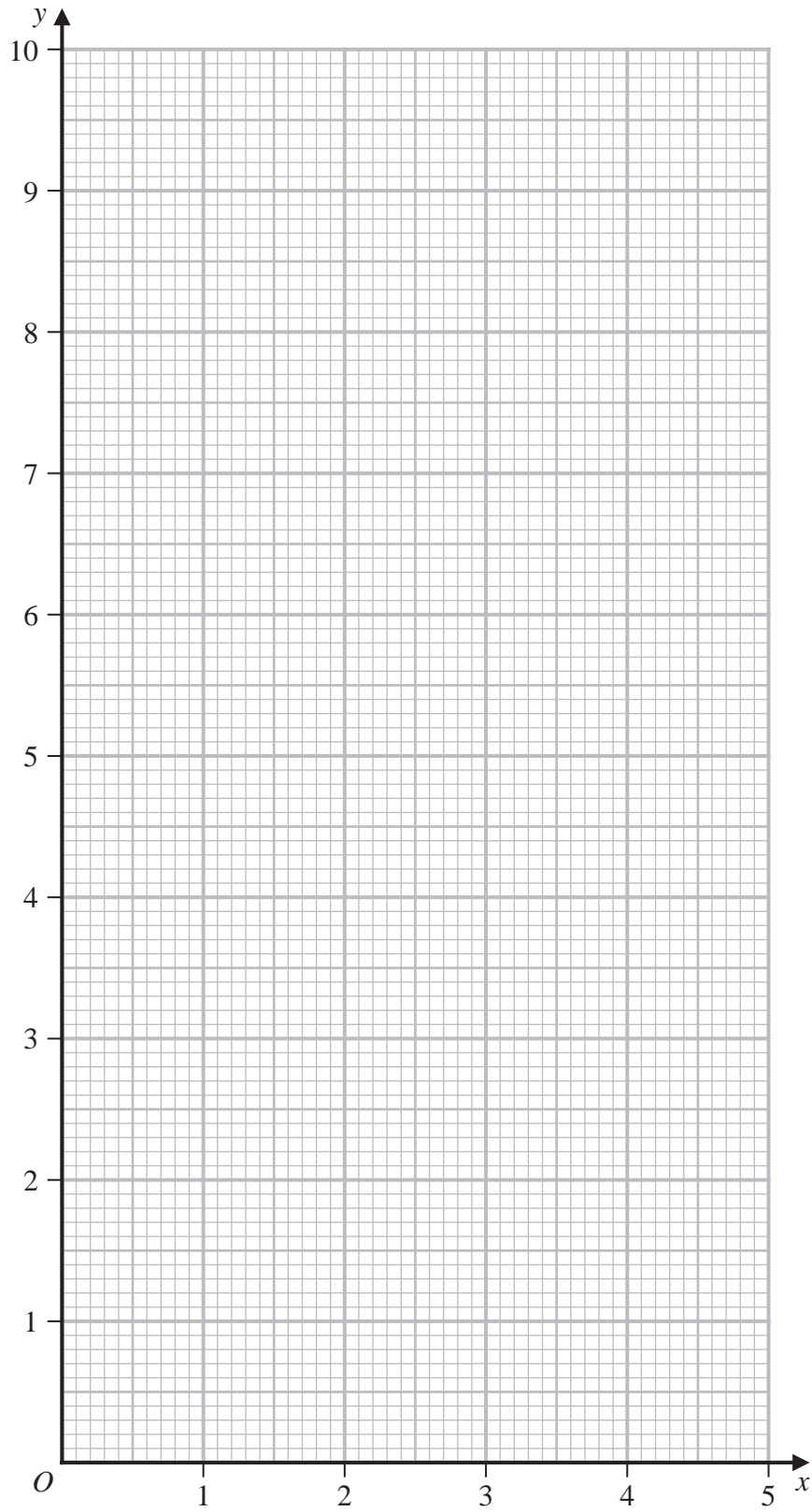
DO NOT WRITE IN THIS AREA





Question 8 continued

Only use this grid if you need to redraw your graph.



(Total for Question 8 is 9 marks)

DO NOT WRITE IN THIS AREA

DO NOT WRITE IN THIS AREA

DO NOT WRITE IN THIS AREA

DO NOT WRITE IN THIS AREA

DO NOT WRITE IN THIS AREA

DO NOT WRITE IN THIS AREA



9

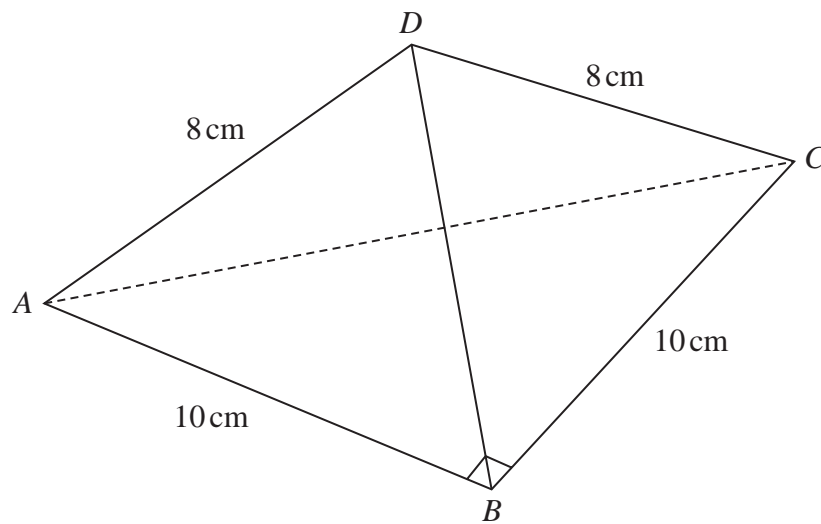


Figure 2

Figure 2 shows a triangular pyramid  $ABCD$  with base  $ABC$

$$AB = BC = 10 \text{ cm} \quad AD = CD = 8 \text{ cm} \quad \angle ABC = 90^\circ$$

- (a) Find the exact length of  $AC$

Give your answer in the form  $p\sqrt{q}$  cm where  $p$  is an integer and  $q$  is a prime number.

(2)

The point  $M$  is the midpoint of  $AC$

- (b) Find the exact length of  $BM$

Give your answer in the form  $m\sqrt{n}$  cm where both  $m$  and  $n$  are prime numbers.

(2)

Given that  $BD = 6$  cm,

- (c) find, in degrees to one decimal place, the size of the acute angle between the plane  $ACD$  and the plane  $ABC$

(4)

The base  $ABC$  of the pyramid is placed on a horizontal plane.

- (d) Find, in cm to 3 significant figures, the vertical height of  $D$  above the base.

(2)

.....

.....

.....

.....

.....

DO NOT WRITE IN THIS AREA

DO NOT WRITE IN THIS AREA

DO NOT WRITE IN THIS AREA

DO NOT WRITE IN THIS AREA

DO NOT WRITE IN THIS AREA

DO NOT WRITE IN THIS AREA





**Question 9 continued**

Handwriting practice area with 28 horizontal dotted lines.

DO NOT WRITE IN THIS AREA

DO NOT WRITE IN THIS AREA

DO NOT WRITE IN THIS AREA

DO NOT WRITE IN THIS AREA

DO NOT WRITE IN THIS AREA

DO NOT WRITE IN THIS AREA



**Question 9 continued**

Handwriting practice area consisting of 20 horizontal dotted lines.

**(Total for Question 9 is 10 marks)**

DO NOT WRITE IN THIS AREA

DO NOT WRITE IN THIS AREA

DO NOT WRITE IN THIS AREA

DO NOT WRITE IN THIS AREA

DO NOT WRITE IN THIS AREA

DO NOT WRITE IN THIS AREA







**Question 10 continued**

Handwriting practice area with horizontal dotted lines.

DO NOT WRITE IN THIS AREA

DO NOT WRITE IN THIS AREA

DO NOT WRITE IN THIS AREA

DO NOT WRITE IN THIS AREA

DO NOT WRITE IN THIS AREA

DO NOT WRITE IN THIS AREA





**Question 10 continued**

Handwriting practice area with horizontal dotted lines.

**(Total for Question 10 is 13 marks)**

DO NOT WRITE IN THIS AREA

DO NOT WRITE IN THIS AREA

DO NOT WRITE IN THIS AREA

DO NOT WRITE IN THIS AREA

DO NOT WRITE IN THIS AREA

DO NOT WRITE IN THIS AREA





**Question 11 continued**

Handwriting practice area with 20 horizontal dotted lines.

DO NOT WRITE IN THIS AREA

DO NOT WRITE IN THIS AREA

DO NOT WRITE IN THIS AREA

DO NOT WRITE IN THIS AREA

DO NOT WRITE IN THIS AREA

DO NOT WRITE IN THIS AREA



