

Please check the examination details below before entering your candidate information

Candidate surname	Other names
Centre Number	Candidate Number
<input style="width: 25px; height: 25px;" type="text"/> <input style="width: 25px; height: 25px;" type="text"/> <input style="width: 25px; height: 25px;" type="text"/> <input style="width: 25px; height: 25px;" type="text"/>	<input style="width: 25px; height: 25px;" type="text"/> <input style="width: 25px; height: 25px;" type="text"/> <input style="width: 25px; height: 25px;" type="text"/> <input style="width: 25px; height: 25px;" type="text"/>


Pearson Edexcel International GCSE

Time 2 hours 30 minutes

Paper reference	4MB1/02
-----------------	---------

Mathematics B

PAPER 2



<p>You must have: Ruler graduated in centimetres and millimetres, protractor, pair of compasses, pen, HB pencil, eraser, calculator. Tracing paper may be used.</p>	Total Marks
--	-------------

Instructions

- Use **black** ink or ball-point pen.
- **Fill in the boxes** at the top of this page with your name, centre number and candidate number.
- Answer **all** questions.
- Answer the questions in the spaces provided
– *there may be more space than you need.*
- **Calculators may be used.**

Information

- The total mark for this paper is 100.
- The marks for **each** question are shown in brackets
– *use this as a guide as to how much time to spend on each question.*

Advice

- Read each question carefully before you start to answer it.
- Check your answers if you have time at the end.
- Without sufficient working, correct answers may be awarded no marks.

Turn over ►

P72479A

©2023 Pearson Education Ltd.
J:1/1/1/1/1/




Pearson

Answer ALL TWELVE questions.

Write your answers in the spaces provided.

You must write down all the stages in your working.

- 1** A car travels at an average speed of 60 km/h for 2 hours.
It then travels at an average speed of x km/h for 3 hours.

The car travels at an average speed of 64.2 km/h for the whole journey.

Calculate the value of x

(4)

DO NOT WRITE IN THIS AREA

DO NOT WRITE IN THIS AREA

DO NOT WRITE IN THIS AREA

(Total for Question 1 is 4 marks)



2

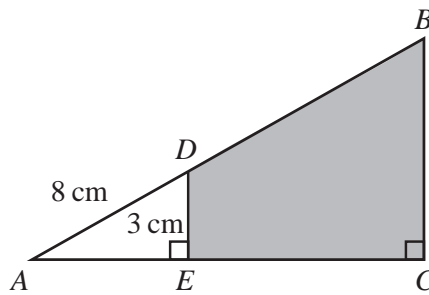


Diagram **NOT**
accurately drawn

Figure 1

Figure 1 shows triangle ABC

The point D lies on AB and the point E lies on AC such that DE and BC are parallel.

$$AD = 8 \text{ cm} \quad DE = 3 \text{ cm} \quad AE : EC = 1 : 2 \quad \angle DEA = \angle BCA = 90^\circ$$

Calculate the area, in cm^2 to 2 significant figures, of the region $BCED$ shown shaded in the diagram.

(5)

$$\left[\text{Area of trapezium} = \frac{1}{2}(a + b)h \right]$$

(Total for Question 2 is 5 marks)



P 7 2 4 7 9 A 0 3 3 2

3

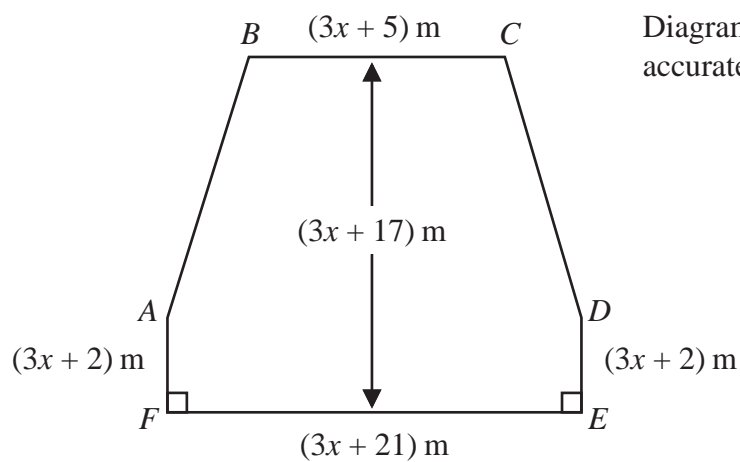
Diagram **NOT**
accurately drawn**Figure 2**

Figure 2 shows a hexagon $ABCDEF$ in which

$$BC = (3x + 5) \text{ metres} \quad AF = DE = (3x + 2) \text{ metres} \quad FE = (3x + 21) \text{ metres}$$

BC is parallel to FE and $AB = DC$

The perpendicular distance between BC and FE is $(3x + 17)$ metres.

The perimeter of the hexagon $ABCDEF$ is 172 metres.

Calculate the value of x

(5)

DO NOT WRITE IN THIS AREA

DO NOT WRITE IN THIS AREA

DO NOT WRITE IN THIS AREA

4



Question 3 continued

DO NOT WRITE IN THIS AREA

DO NOT WRITE IN THIS AREA

DO NOT WRITE IN THIS AREA

Area with horizontal dotted lines for writing.

(Total for Question 3 is 5 marks)



4

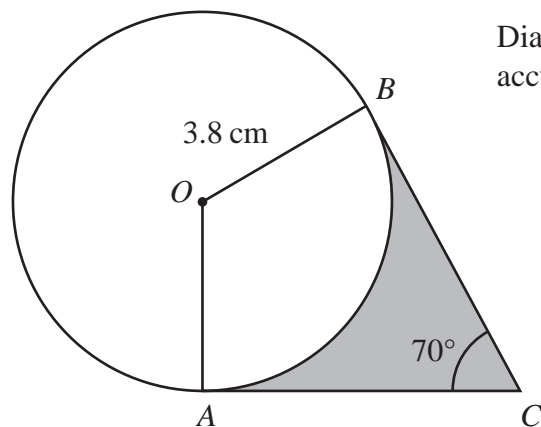


Figure 3

Figure 3 shows a circle centre O and radius 3.8 cm

The points A and B lie on the circle.

The point C is such that AC and BC are tangents to the circle and $\angle ACB = 70^\circ$

The region inside the quadrilateral $OACB$ but outside the circle is shown shaded in Figure 3

Calculate the area, in cm^2 to 3 significant figures, of the shaded region.

(6)

DO NOT WRITE IN THIS AREA

DO NOT WRITE IN THIS AREA

DO NOT WRITE IN THIS AREA

6



Question 4 continued

DO NOT WRITE IN THIS AREA

DO NOT WRITE IN THIS AREA

DO NOT WRITE IN THIS AREA

Area with horizontal dotted lines for writing.

(Total for Question 4 is 6 marks)



5 Solve the simultaneous equations

$$\begin{aligned}x + 5y &= 7 \\x^2 + 3xy &= 13\end{aligned}$$

Show clear algebraic working.

(6)

DO NOT WRITE IN THIS AREA

DO NOT WRITE IN THIS AREA

DO NOT WRITE IN THIS AREA

$$\left[\text{Solutions of } ax^2 + bx + c = 0 \text{ are } x = \frac{-b \pm \sqrt{b^2 - 4ac}}{2a} \right]$$



Question 5 continued

DO NOT WRITE IN THIS AREA

DO NOT WRITE IN THIS AREA

DO NOT WRITE IN THIS AREA

Area with horizontal dotted lines for writing.

(Total for Question 5 is 6 marks)



6

Diagram **NOT** accurately drawn

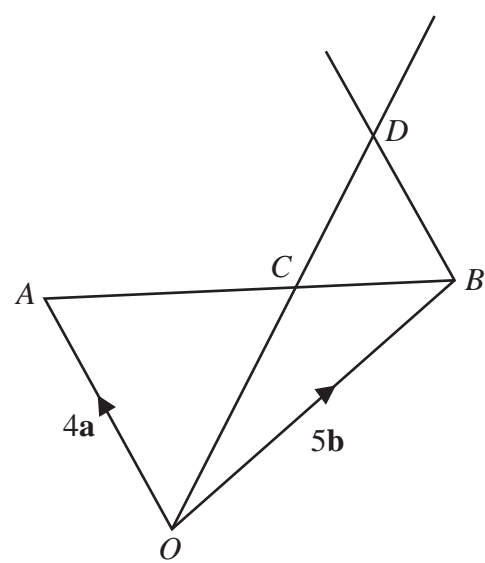


Figure 4

Figure 4 shows triangle OAB

The point C lies on AB such that $AC = \frac{3}{5}AB$

Given that $\vec{OA} = 4\mathbf{a}$ and $\vec{OB} = 5\mathbf{b}$

- (a) find an expression for \vec{OC} in terms of \mathbf{a} and \mathbf{b}
Give your answer in its simplest form.

(3)

The point D is such that OCD is a straight line.

Given that BD is parallel to OA

- (b) use a vector method to find an expression for \vec{OD} in terms of \mathbf{a} and \mathbf{b}
Give your answer in its simplest form.

(4)

.....

.....

.....

.....

.....

.....

.....

.....

.....

.....

.....

DO NOT WRITE IN THIS AREA

DO NOT WRITE IN THIS AREA

DO NOT WRITE IN THIS AREA



Question 6 continued

DO NOT WRITE IN THIS AREA

DO NOT WRITE IN THIS AREA

DO NOT WRITE IN THIS AREA

Area with horizontal dotted lines for writing.

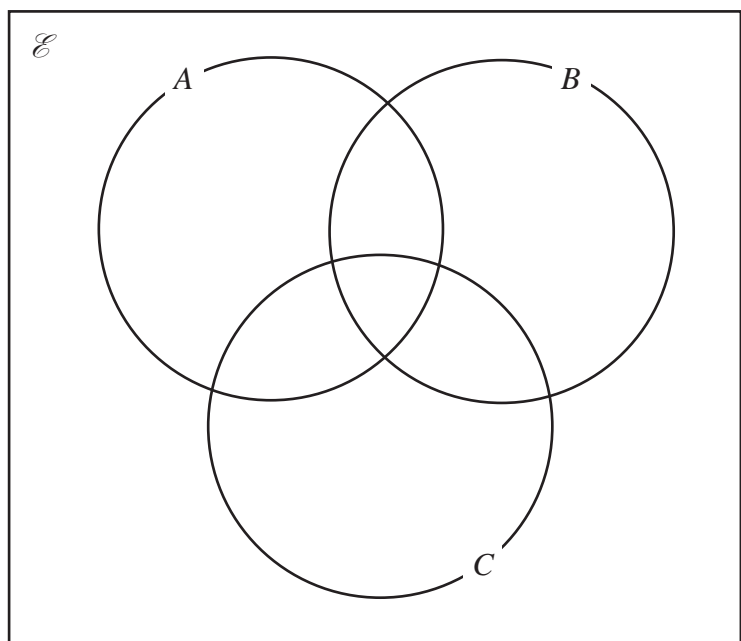
(Total for Question 6 is 7 marks)



P 7 2 4 7 9 A 0 1 1 3 2

- 7 $\mathcal{E} = \{\text{odd numbers between 0 and 30}\}$
 $A = \{\text{multiples of 3}\}$
 $B = \{\text{prime numbers}\}$
 $C = \{\text{factors of 30}\}$

(a) Complete the Venn diagram for this information showing the position of each of the numbers in the universal set.



(3)

(b) Find (i) $n([A \cup C] \cap B)$

(ii) $n([B \cap C'] \cup A')$

(2)

A number is chosen at random from the universal set, \mathcal{E}

(c) Write down the probability that the number is in the set $C \cap A'$

(2)

Given that the number chosen from \mathcal{E} is a multiple of 3

(d) find the probability that the number is also a factor of 30

(2)

.....

.....

.....

.....

.....

.....

.....



Question 7 continued

DO NOT WRITE IN THIS AREA

DO NOT WRITE IN THIS AREA

DO NOT WRITE IN THIS AREA

Area with horizontal dotted lines for writing.

(Total for Question 7 is 9 marks)



P 7 2 4 7 9 A 0 1 3 3 2

- 8 Aanshi makes granola.
She uses nuts, dried raspberries and oats in the ratios 2 : 3 : 7 by weight.
Aanshi uses 80 grams of nuts.

(a) Work out the weight, in grams, of oats she uses to make the granola.

(2)

Nuts cost \$26 for 500 grams.

(b) Work out the cost of the nuts used to make 270 grams of the granola.

(3)

Aanshi is going to buy 500 grams of dried raspberries from one of the following online supermarkets.

<p><u>US supermarket</u></p> <p>125 g dried raspberries \$30</p> <p>Special offer</p> <p>Buy 375 g get 125 g extra free</p> <p>Postage \$5</p>
--

<p><u>UK supermarket</u></p> <p>50 g dried raspberries</p> <p>£3.70 plus Tax at 25%</p> <p>Postage £20</p>

Using an exchange rate of

$$\$1 = \pounds 0.71$$

- (c) compare the cost, including postage, of 500 g of dried raspberries bought from the US supermarket with the cost of 500 g of dried raspberries bought from the UK supermarket.
State which supermarket is the cheaper when buying 500 g of dried raspberries.
Show your working clearly.

(5)

.....

.....

.....

.....

.....

.....

.....

.....

.....

.....

DO NOT WRITE IN THIS AREA

DO NOT WRITE IN THIS AREA

DO NOT WRITE IN THIS AREA



Question 8 continued

DO NOT WRITE IN THIS AREA

DO NOT WRITE IN THIS AREA

DO NOT WRITE IN THIS AREA

Area with horizontal dotted lines for writing.



P 7 2 4 7 9 A 0 1 5 3 2

Question 8 continued

Handwriting practice area with 25 horizontal dotted lines.

DO NOT WRITE IN THIS AREA

DO NOT WRITE IN THIS AREA

DO NOT WRITE IN THIS AREA



Question 8 continued

DO NOT WRITE IN THIS AREA

DO NOT WRITE IN THIS AREA

DO NOT WRITE IN THIS AREA

Area with horizontal dotted lines for writing.

(Total for Question 8 is 10 marks)



P 7 2 4 7 9 A 0 1 7 3 2

Question 9 continued

DO NOT WRITE IN THIS AREA

DO NOT WRITE IN THIS AREA

DO NOT WRITE IN THIS AREA

Area with horizontal dotted lines for writing.



P 7 2 4 7 9 A 0 1 9 3 2

Question 9 continued

Area with horizontal dotted lines for writing.

DO NOT WRITE IN THIS AREA

DO NOT WRITE IN THIS AREA

DO NOT WRITE IN THIS AREA



Question 9 continued

DO NOT WRITE IN THIS AREA

DO NOT WRITE IN THIS AREA

DO NOT WRITE IN THIS AREA

Area with horizontal dotted lines for writing.

(Total for Question 9 is 9 marks)



P 7 2 4 7 9 A 0 2 1 3 2

Question 10 continued

DO NOT WRITE IN THIS AREA

DO NOT WRITE IN THIS AREA

DO NOT WRITE IN THIS AREA

Area with horizontal dotted lines for writing.



P 7 2 4 7 9 A 0 2 3 3 2

Question 10 continued

Area with horizontal dotted lines for writing.

DO NOT WRITE IN THIS AREA

DO NOT WRITE IN THIS AREA

DO NOT WRITE IN THIS AREA



Question 10 continued

DO NOT WRITE IN THIS AREA

DO NOT WRITE IN THIS AREA

DO NOT WRITE IN THIS AREA

Area with horizontal dotted lines for writing.

(Total for Question 10 is 11 marks)



P 7 2 4 7 9 A 0 2 5 3 2

11 The equation of a curve C is $y = \frac{k}{x} + \frac{9}{x^2} + 1$ where k is a constant.

A minimum point on C occurs when $x = -1.5$

(a) Show that the value of k is 12 (4)

(b) Complete the table of values for $y = \frac{12}{x} + \frac{9}{x^2} + 1$

Give your values of y to 2 decimal places.

x	-6	-5	-4	-3	-2	-1	-0.8
y			-1.44	-2.00	-2.75	-2.00	

(2)

(c) (i) On the grid opposite, plot the minimum point and the points from your completed table.

(ii) Join all the points to form a smooth curve. (4)

(d) By drawing a suitable straight line on the grid, find the range of values, to one decimal place, of x in $-6 \leq x \leq -0.8$, for which

$$\frac{12}{x} + \frac{9}{x^2} + 1 \leq \frac{1}{2}x - 2 \tag{3}$$

.....

.....

.....

.....

.....

.....

.....

.....

.....

.....

.....

.....

.....

.....

.....

.....

.....

.....

.....

.....

.....

.....

.....

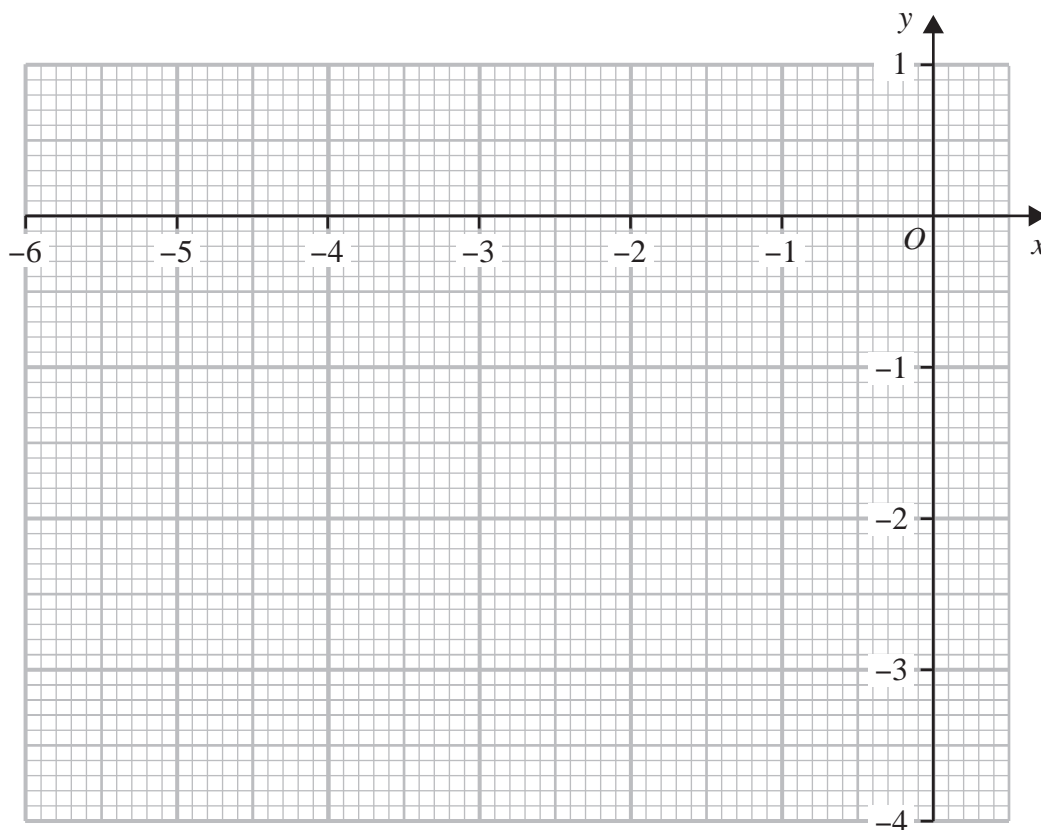
.....

.....

DO NOT WRITE IN THIS AREA



Question 11 continued



DO NOT WRITE IN THIS AREA

DO NOT WRITE IN THIS AREA

DO NOT WRITE IN THIS AREA

.....

.....

.....

.....

.....

.....

.....

.....

.....

.....

.....

.....

.....

.....

.....

.....

.....

.....

.....

.....

.....

.....

.....

Turn over for a spare grid if you need to redraw your graph.



Question 11 continued

Handwriting practice area consisting of 25 horizontal dotted lines for writing.

DO NOT WRITE IN THIS AREA

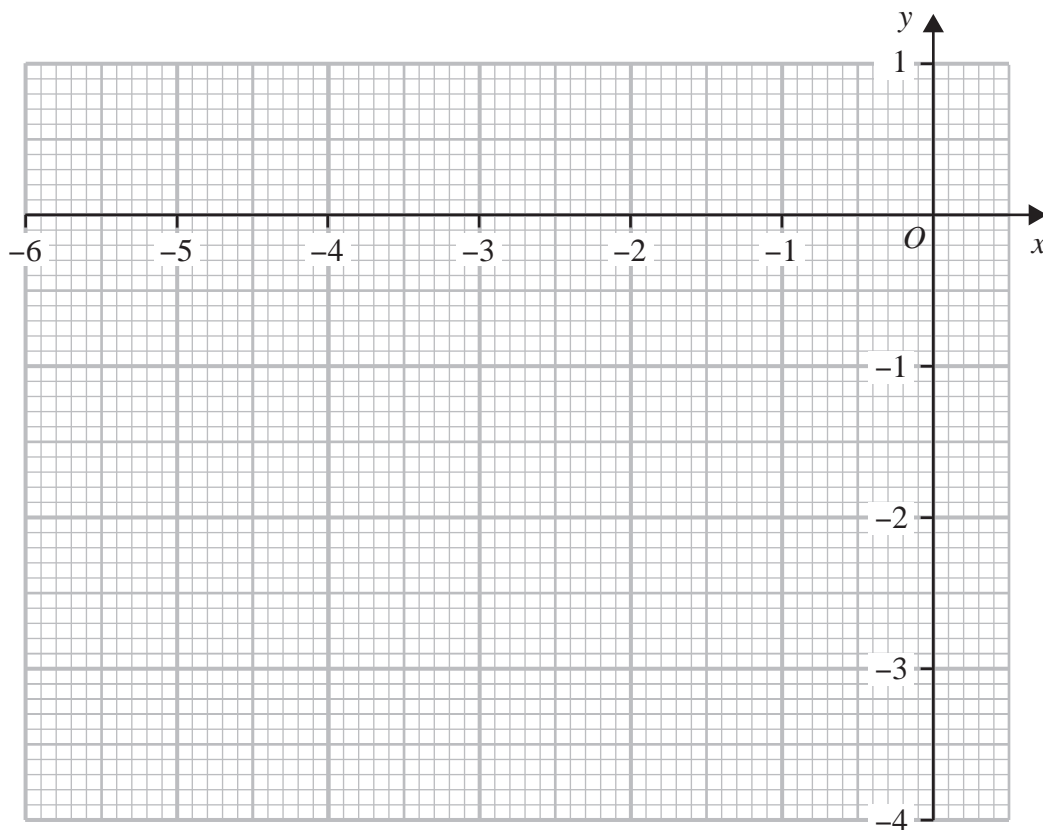
DO NOT WRITE IN THIS AREA

DO NOT WRITE IN THIS AREA



Question 11 continued

Only use this grid if you need to redraw your graph.



.....

.....

.....

.....

.....

.....

.....

.....

.....

.....

.....

.....

.....

.....

.....

.....

.....

.....

.....

.....

.....

.....

.....

(Total Question 11 is 13 marks)

DO NOT WRITE IN THIS AREA

DO NOT WRITE IN THIS AREA

DO NOT WRITE IN THIS AREA



12 The functions f and g are such that

$$f : x \mapsto 2x^2 - 4x + 1 \quad \text{where } x > 1$$

$$g : x \mapsto \frac{20}{5 + x}$$

- (a) State the value of x that must be excluded from any domain of g (1)
- (b) Find the value of k such that $g(k) = 8$ (3)
- (c) Find $fg(-3)$ (2)
- (d) Find the inverse of the function f in the form $f^{-1} : x \mapsto \dots$
Simplify your answer. (4)

The function h is defined for all values of x as

$$h : x \mapsto \frac{ax + b}{3}$$

where a and b are constants.

Given that

$$h(2) = 4$$

$$f^{-1}h(1.7) = 2.5$$

- (e) find the value of a and the value of b
Show clear algebraic working. (5)

$$\left[\text{Solutions of } ax^2 + bx + c = 0 \text{ are } x = \frac{-b \pm \sqrt{b^2 - 4ac}}{2a} \right]$$

DO NOT WRITE IN THIS AREA

DO NOT WRITE IN THIS AREA

DO NOT WRITE IN THIS AREA



Question 12 continued

DO NOT WRITE IN THIS AREA

DO NOT WRITE IN THIS AREA

DO NOT WRITE IN THIS AREA

Area with horizontal dotted lines for writing.



P 7 2 4 7 9 A 0 3 1 3 2

Question 12 continued

Area with horizontal dotted lines for writing.

DO NOT WRITE IN THIS AREA

DO NOT WRITE IN THIS AREA

DO NOT WRITE IN THIS AREA

(Total for Question 12 is 15 marks)

TOTAL FOR PAPER IS 100 MARKS

