


Please check the examination details below before entering your candidate information

| | | | |
|--|--|--|---|
| Candidate surname | | Other names | |
| Pearson Edexcel International GCSE | | Centre Number | Candidate Number |
| | | <input type="text"/> <input type="text"/> <input type="text"/> <input type="text"/> <input type="text"/> | <input type="text"/> <input type="text"/> <input type="text"/> <input type="text"/> |
| Tuesday 19 May 2020 | | | |
| Morning (Time: 2 hours) | | Paper Reference 4MA1/1FR | |
| Mathematics A Paper 1FR Foundation Tier | | |  |
| You must have: Ruler graduated in centimetres and millimetres, protractor, pair of compasses, pen, HB pencil, eraser, calculator. Tracing paper may be used. | | | Total Marks |

Instructions

- Use **black** ink or ball-point pen.
- **Fill in the boxes** at the top of this page with your name, centre number and candidate number.
- Answer **all** questions.
- Without sufficient working, correct answers may be awarded no marks.
- Answer the questions in the spaces provided
– *there may be more space than you need.*
- **Calculators may be used.**
- You must **NOT** write anything on the formulae page.
Anything you write on the formulae page will gain NO credit.

Information

- The total mark for this paper is 100.
- The marks for **each** question are shown in brackets
– *use this as a guide as to how much time to spend on each question.*

Advice

- Read each question carefully before you start to answer it.
- Check your answers if you have time at the end.

Turn over ►

P62651A

©2020 Pearson Education Ltd.

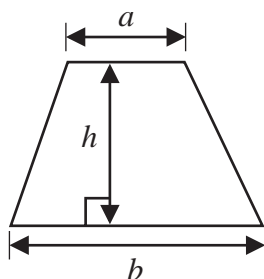
1/1/1/



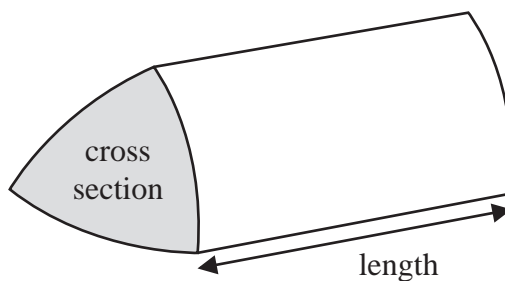

Pearson

International GCSE Mathematics
Formulae sheet – Foundation Tier

Area of trapezium = $\frac{1}{2}(a + b)h$

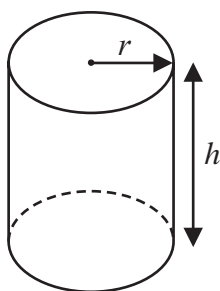


Volume of prism = area of cross section \times length



Volume of cylinder = $\pi r^2 h$

Curved surface area of cylinder = $2\pi r h$



DO NOT WRITE IN THIS AREA

DO NOT WRITE IN THIS AREA

DO NOT WRITE IN THIS AREA



Answer ALL TWENTY SEVEN questions.

Write your answers in the spaces provided.

You must write down all the stages in your working.

- 1 Here is a shape made of squares.



- (a) Shade $\frac{1}{6}$ of the shape. $18 \times \frac{1}{6} = 3$ so shade 3 squares

(1)

- (b) Change $\frac{19}{5}$ into a mixed number.

$$\frac{19}{5} = \frac{15}{5} + \frac{4}{5} = 3 + \frac{4}{5}$$

↑ ↑
whole remainder

$$3 \frac{4}{5}$$

(1)

$\frac{7}{11}$ of a class walk to school.

- (c) What fraction of the class do **not** walk to school?

'whole class' is equal to 1.

$$1 - \frac{7}{11} = \frac{11}{11} - \frac{7}{11} = \frac{4}{11}$$

denominators are the same, so subtract numerators

$$\frac{4}{11}$$

(1)

- (d) Write down a fraction that is equivalent to $\frac{7}{9}$

$$\frac{7}{9} = \frac{2 \times 7}{2 \times 9} = \frac{14}{18}$$

↑ '2' could be any number

$$\frac{14}{18}$$

(1)

- (e) Write 0.03 as a fraction.

$$0.03 = \frac{0.03}{1} = \frac{0.03 \times 100}{1 \times 100} = \frac{3}{100}$$

multiply top and bottom by 100 ↑





$$\frac{3}{100}$$

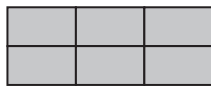
(1)

(Total for Question 1 is 5 marks)



- 2 The pictogram gives information about the number of eggs laid by Ellie's chickens in April, in May and in June.

| | |
|--------------|---|
| April |  |
| May |  |
| June |  |
| July |  ① (-) |



represents 24 eggs

- (a) How many eggs were laid by Ellie's chickens in April?

$$6 \text{ boxes} = 24 \text{ eggs}$$

$$24 \div 6 = 4$$

$$\text{so } 1 \text{ box} = 4 \text{ eggs}$$

$$\text{April} = 10 \text{ boxes}$$

$$10 \times 4 = 40 \text{ eggs}$$

$$40 \text{ ①}$$

(1)

Ellie's chickens laid more eggs in June than in May.

- (b) How many more?

$$\text{May} = 8 \text{ boxes}$$

$$8 \times 4 = 32 \text{ eggs}$$

$$\text{June} = 17 \text{ boxes}$$

$$17 \times 4 = 68 \text{ eggs}$$

$$\text{① } 68 - 32 = 36 \text{ eggs (36 more eggs in June)}$$

$$\begin{array}{cc} \uparrow & \uparrow \\ \text{June} & \text{May} \end{array}$$

$$36 \text{ ①}$$

(2)

Ellie's chickens laid 52 eggs in July.

- (c) Show this information on the pictogram.

$$52 \div 4 = 13 \text{ boxes}$$

$$\frac{13}{6} = 2 \text{ groups of 6 and 1 remaining.}$$

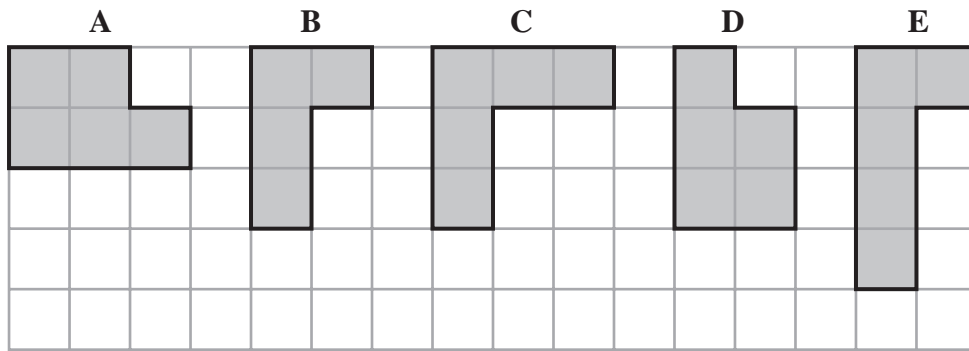
group the boxes into groups of 6, like the pictogram shows (see pictogram).

(1)

(Total for Question 2 is 4 marks)



- 3 The diagram shows five shaded shapes on a grid of squares.



Two of the shapes are **congruent**. ← congruent = exactly the same shape and size

- (a) Write down the letters of these shapes.

A

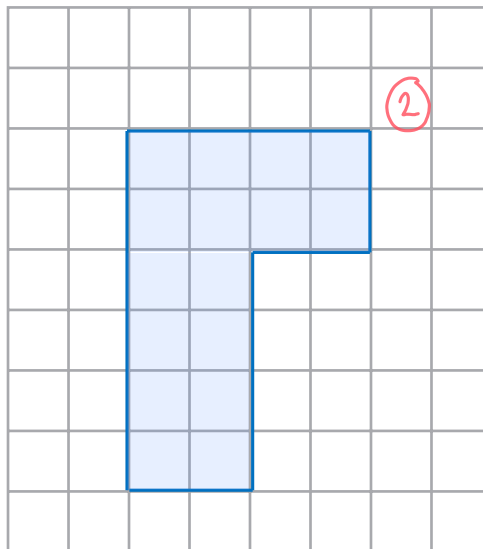
and

D

(1)

- (b) On the square grid below, draw a shape that is **similar** to but is **not** congruent to shape B.

↑ the same shape but NOT the same size.



(2)

All of the shapes on the grid have **6 sides**.

- (c) Write down the **mathematical name** for a shape that has 6 sides.

hexagon

(1)

(Total for Question 3 is 4 marks)



4 There are 12 beads in a bag.

6 of the beads are green

4 of the beads are blue

2 of the beads are pink

Peter takes at random a bead from the bag.

(a) Circle the word in the list below that best describes the likelihood that the bead is green.

impossible

unlikely

evens

likely

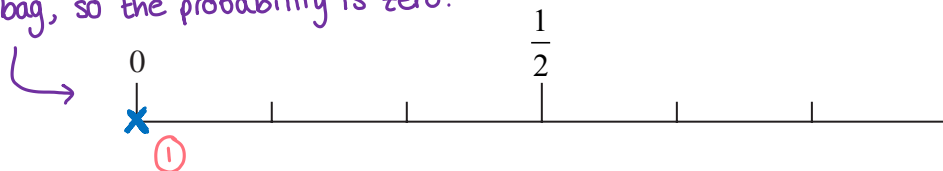
certain

$$\frac{6}{12} = \text{half the beads are green}$$

(1)

(b) On the probability scale, mark with a cross (X) the probability that the bead is orange.

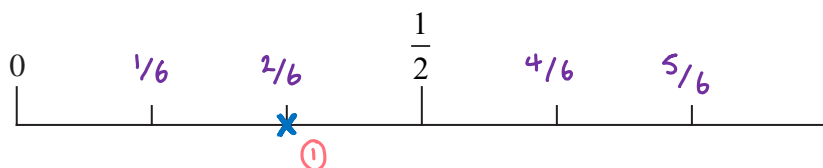
there are no orange beads in the bag, so the probability is zero.



(1)

(c) On the probability scale, mark with a cross (X) the probability that the bead is blue.

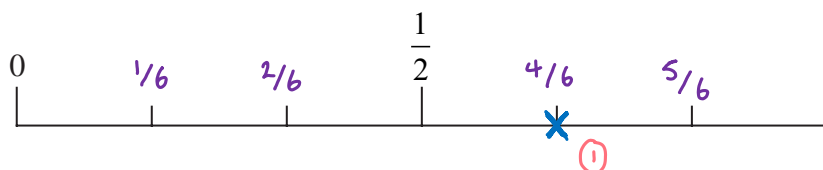
$$\frac{4}{12} = \frac{2}{6}$$



(1)

(d) On the probability scale, mark with a cross (X) the probability that the bead is green or pink.

$$\begin{aligned} \text{green} & \downarrow 6 \\ \text{pink} & \downarrow 2 \\ \hline 6 + 2 & = 8 \\ \hline 12 & = \frac{8}{12} \\ \hline \frac{8}{12} & = \frac{4}{6} \end{aligned}$$



(1)

(Total for Question 4 is 4 marks)

DO NOT WRITE IN THIS AREA

DO NOT WRITE IN THIS AREA

DO NOT WRITE IN THIS AREA



DO NOT WRITE IN THIS AREA

DO NOT WRITE IN THIS AREA

DO NOT WRITE IN THIS AREA

5 (a) **Simplify** $\underbrace{w + w + w + w}_{+4} - \underbrace{w}_{-1}$

$$4w - w = 3w$$

$$3w \quad (1)$$

(1)

(b) **Simplify** $\underbrace{4 \times a}_{\text{ }} \times \underbrace{2}_{\text{ }}$

$$4a \times 2 = 8a$$

multiply integer parts: $4 \times 2 = 8$

$$8a \quad (1)$$

(1)

(c) **Simplify** $\underbrace{f \times f \times f \times f \times f}_{\substack{1 \quad 2 \quad 3 \quad 4 \quad 5}}$

$$f^5 \quad \leftarrow \begin{array}{l} f \text{ 'to the power of 5'} \\ \text{means} \\ f \text{ multiplied by itself} \\ 5 \text{ times} \end{array}$$

$$f^5 \quad (1)$$

(1)

(d) **Simplify** $4c + 4h + 5c - 6h$

Parts with the same variable (letter) can be added / subtracted.

$$\left. \begin{array}{l} 4c + 5c = 9c \\ 4h - 6h = -2h \end{array} \right\} 9c - 2h$$

$$9c - 2h \quad (1) \quad (1)$$

(2)

(e) **Factorise** $10d + 15$

The highest common factor of 10 and 15 is 5

$$\begin{array}{l} 10 \div 5 = 2 \quad 15 \div 5 = 3 \\ \downarrow \quad \downarrow \\ 5(2d + 3) \end{array}$$

$$5(2d + 3) \quad (1)$$

(1)

(f) Make t the **subject** of $e = 7t + g$

↑
write it as $t = \dots$

$$\begin{array}{l} e = 7t + g \\ -g \quad \downarrow \\ e - g = 7t \quad (1) \\ \div 7 \quad \downarrow \\ \frac{e - g}{7} = t \end{array}$$

$$t = \frac{e - g}{7} \quad (1)$$

(2)

(Total for Question 5 is 8 marks)



- 6 Candles cost £3.05 each.
 Theo has £30 to spend on candles.
 He buys as many candles as he can for £30

Work out how much change Theo should get.

$$30 \div 3.05 = 9.83 \text{ (1)}$$

So Theo can get 9 whole candles

$$9 \times 3.05 = 27.45$$

9 candles cost £27.45

$$30 - 27.45 = 2.55 \text{ (1)}$$

the change is £2.55

£ 2.55 (1)

(Total for Question 6 is 3 marks)

DO NOT WRITE IN THIS AREA

DO NOT WRITE IN THIS AREA

DO NOT WRITE IN THIS AREA



7

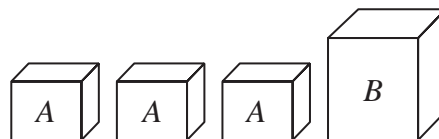


Diagram **NOT**
accurately drawn

The diagram shows four parcels.

The total weight of the four parcels is **8.3 kg**.

The weight of the parcel labelled **B** is **3.2 kg**.

Each of the three parcels labelled **A** have the **same weight**.

(a) Work out the weight of each of the parcels labelled **A**.

$$\begin{aligned}
 8.3 &= 3A + B \\
 8.3 &= 3A + 3.2 \quad \left. \begin{array}{l} B = 3.2 \\ \text{---} \end{array} \right\} \\
 -3.2 &\quad \left. \begin{array}{l} \text{---} \\ \text{---} \end{array} \right\} \quad \left. \begin{array}{l} \text{---} \\ \text{---} \end{array} \right\} \quad \textcircled{1} \\
 5.1 &= 3A \\
 1.7 &= A \quad \left. \begin{array}{l} \text{---} \\ \text{---} \end{array} \right\} \div 3
 \end{aligned}$$

$$\begin{array}{r}
 1.7 \quad \textcircled{1} \\
 \hline
 (2)
 \end{array}
 \text{ kg}$$

Here are another three parcels.

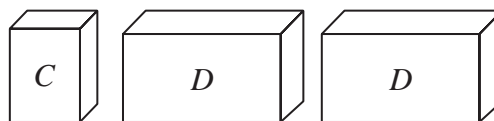


Diagram **NOT**
accurately drawn

The total weight of the three parcels is 9.45 kg.

Each of the two parcels labelled **D** have the same weight.

The weight of each parcel labelled **D** is $3 \times$ the weight of the parcel labelled **C**.

(b) Work out the weight of the parcel labelled **C**.

$$\begin{aligned}
 9.45 &= 2D + C \\
 9.45 &= 2(3C) + C \quad \left. \begin{array}{l} D = 3 \times C \text{ so replace } D \text{ with } 3C \end{array} \right\} \\
 9.45 &= 6C + C \\
 9.45 &= 7C \quad \textcircled{1} \\
 \div 7 &\quad \left. \begin{array}{l} \text{---} \\ \text{---} \end{array} \right\} \quad \left. \begin{array}{l} \text{---} \\ \text{---} \end{array} \right\} \quad \textcircled{1} \\
 1.35 &= C
 \end{aligned}$$

$$\begin{array}{r}
 1.35 \quad \textcircled{1} \\
 \hline
 (2)
 \end{array}
 \text{ kg}$$

(Total for Question 7 is 4 marks)



- 8 There are 150 people at an international conference. These 150 people were each asked to say what their main method of transport was to get to the conference. The two-way table shows some information about these people and their answers.

① $29 - 17 = 12$

| | bus | train | plane | total |
|-------|-----|-------|-------|-------|
| men | 12 | 15 | 53 | 80 |
| women | 17 | 28 | 25 | 70 |
| total | 29 | 43 | 78 | 150 |

③ $80 - 15 - 12 = 53$

④ $150 - 80 = 70$

② $43 - 15 = 28$

⑤ $70 - 28 - 17 = 25$

⑥ $150 - 29 - 43 = 78$

- (a) Complete the two-way table.

Follow the steps
in the order shown.

(Other orders will work too!)

(3)

One of the men from these 150 people is selected at random.

- (b) Write down the probability that this man's main method of transport was train.

Men = 80 people

Men who use the train = 15 people (from the table)

Therefore $\frac{15}{80}$ men use the train

$\frac{15}{80}$

(1)

(Total for Question 8 is 4 marks)

DO NOT WRITE IN THIS AREA

DO NOT WRITE IN THIS AREA

DO NOT WRITE IN THIS AREA



9 A box is to be filled with cartons.

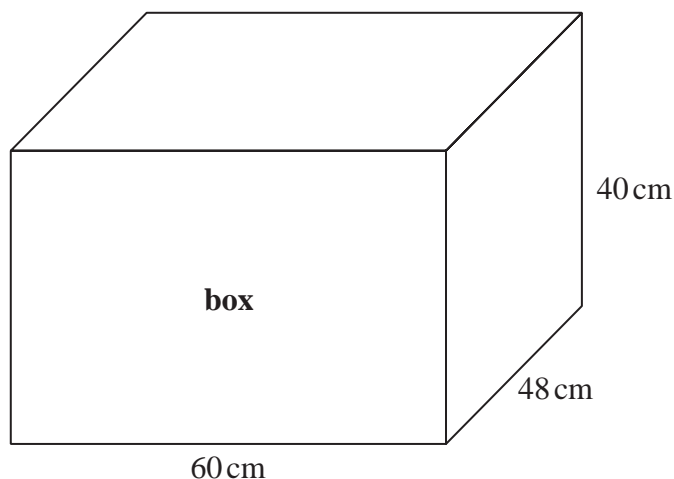
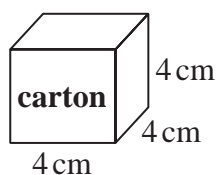


Diagram **NOT** accurately drawn

Each carton is a cube that measures 4 cm by 4 cm by 4 cm.
The box is a cuboid that measures 60 cm by 48 cm by 40 cm.

VOLUME
width \times length \times height

Work out the number of cartons that can completely fill the box.

Work out how many cartons fit into the box's volume

$$\text{Volume of carton} = 4 \times 4 \times 4 = 64 \text{ cm}^3 \quad (1)$$

$$\text{Volume of box} = 60 \times 48 \times 40 = 115\,200 \text{ cm}^3$$

$$(1) \quad 115\,200 \div 64 = 1800 \text{ cartons}$$

— OR —

Work out how many cartons fit along each edge.

$$60 \div 4 = 15 \text{ cartons along width}$$

$$48 \div 4 = 12 \text{ cartons along depth}$$

$$40 \div 4 = 10 \text{ cartons along height}$$

$$(1) \quad 15 \times 12 \times 10 = 1800$$

1800 (1)

(Total for Question 9 is 3 marks)



10 The diagram shows a square and an isosceles triangle.

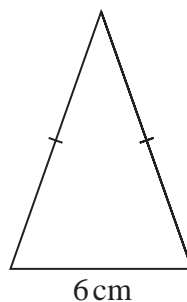
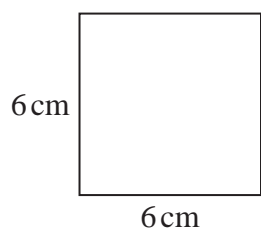


Diagram **NOT** accurately drawn

The square has sides of length 6 cm.
The base of the isosceles triangle is 6 cm.

The perimeter of the square is equal to the perimeter of the isosceles triangle.

The shaded shape is made by putting three of the isosceles triangles around the square as shown in the diagram below.

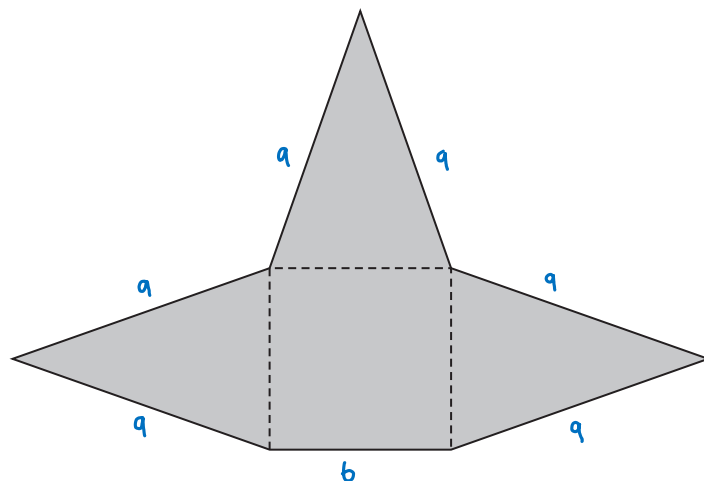
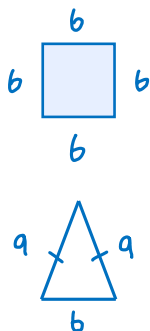


Diagram **NOT** accurately drawn

Work out the perimeter of the shaded shape.
Show your working clearly.



$$\text{Perimeter of square} = 4 \times b = 24 \text{ cm} \quad (1)$$

$$\text{Long side of triangle} = \frac{24 - b}{2} = 9 \quad (1)$$

perimeter of square = perimeter of triangle

$$\begin{aligned} \text{Perimeter of shaded shape} &= (b \times 9) + b \quad (1) \\ &= 60 \text{ cm} \end{aligned}$$

(see diagram)

60 (1) cm

(Total for Question 10 is 4 marks)

DO NOT WRITE IN THIS AREA

DO NOT WRITE IN THIS AREA

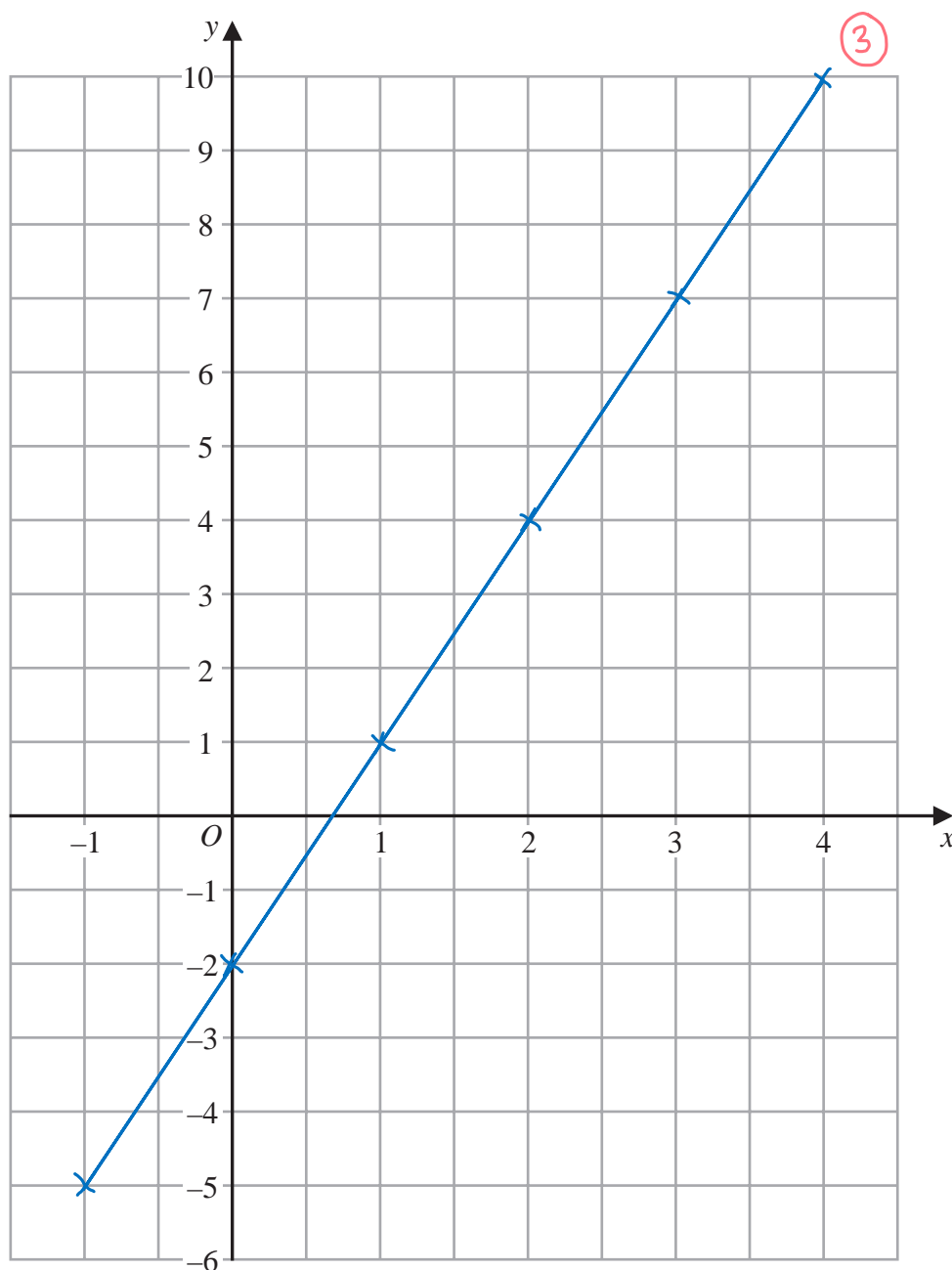
DO NOT WRITE IN THIS AREA



11 On the grid, draw the graph of $y = 3x - 2$ for values of x from -1 to 4

| | | | | | | |
|-----|----|----|---|---|---|----|
| x | -1 | 0 | 1 | 2 | 3 | 4 |
| y | -5 | -2 | 1 | 4 | 7 | 10 |

$(3 \times -1) - 2$ $(3 \times 0) - 2$ $(3 \times 1) - 2$ $(3 \times 2) - 2$ $(3 \times 3) - 2$ $(3 \times 4) - 2$



(Total for Question 11 is 3 marks)

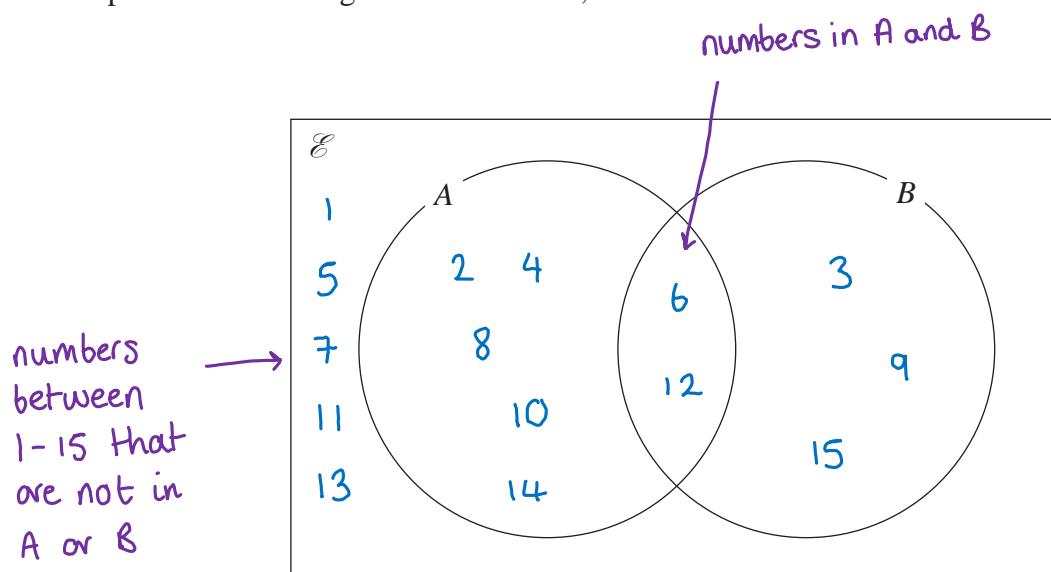


12 $\mathcal{E} = \{\text{whole numbers from 1 to 15}\}$

$A = \{\text{even numbers}\}$

$B = \{3, 6, 9, 12, 15\}$

Complete the Venn diagram for the sets \mathcal{E} , A and B .



(Total for Question 12 is 3 marks)

13 Find which is larger

32% of 450

or

$\frac{2}{5}$ of 375

You must show all your working.

$$32\% = \frac{32}{100} = 0.32$$

$$0.32 \times 450 = 144 \quad (1)$$

$$\frac{2}{5} \times 375 = 150 \quad (1)$$

$150 > 144$ therefore ' $\frac{2}{5}$ of 375' is larger than '32% of 450'

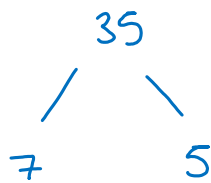
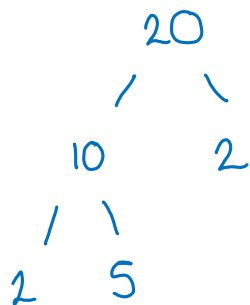
$\frac{2}{5}$ of 375 1

(Total for Question 13 is 3 marks)



14 Find the lowest common multiple (LCM) of 20 and 35

Split numbers into common factors



↑ This has already been included

$$2 \times 2 \times 5 \times 7 = 140$$

List multiples of each

| | |
|-----|-----|
| 20 | 35 |
| 40 | 70 |
| 60 | 105 |
| 80 | 140 |
| 100 | |
| 120 | |
| 140 | |

140

(Total for Question 14 is 2 marks)

15

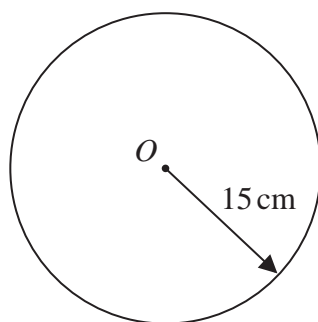


Diagram NOT accurately drawn

The diagram shows a circle, centre O , with radius 15 cm.

Work out the area of the circle.

Give your answer in cm^2 correct to the nearest whole number.

$$\text{Area of a circle} = \pi r^2$$

$$\text{Area} = \pi \times 15 \times 15 \quad (1)$$

$$= \pi \times 225 \quad \leftarrow \text{put this into a calculator, or use } \pi \approx 3.1415...$$

$$= 706.8...$$

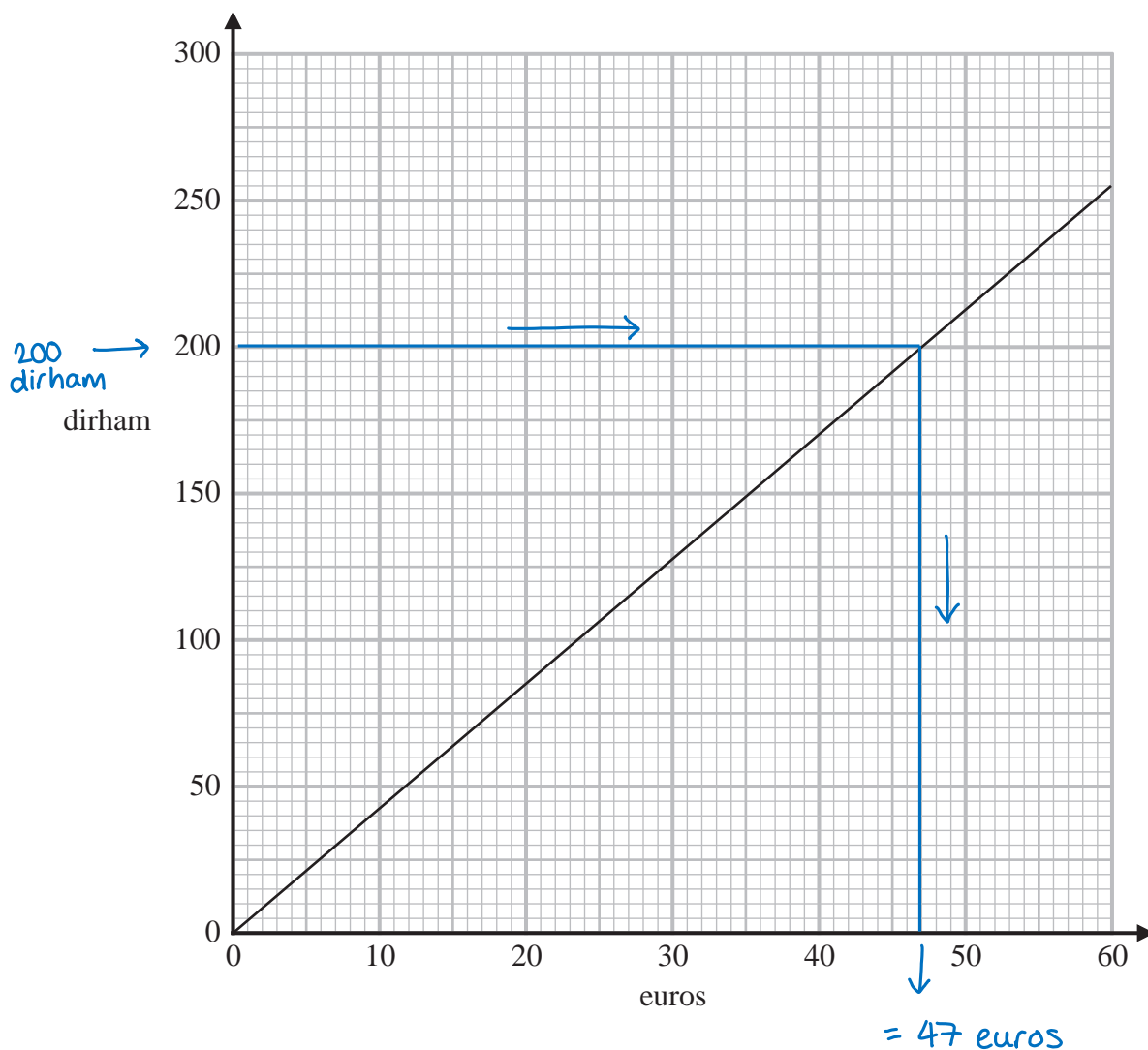
$$\approx 707 \quad \leftarrow \begin{array}{l} .8 \text{ is bigger than } .5, \\ \text{so round up} \end{array}$$

$$707 \quad (1) \quad \text{cm}^2$$

(Total for Question 15 is 2 marks)



16 The graph below can be used to change between euros and dirham.



(a) Use the graph to change 200 dirham to euros.

See graph. ↑

47 ^① euros
(1)

The price of a jacket is 90 euros in France and 400 dirham in the United Arab Emirates.

(b) In which of these countries is the jacket cheaper?

You must show your working.

$$\begin{aligned} 400 \text{ Dirham} &= 2 \times 200 \text{ Dirham} \\ &= 2 \times 47 \text{ euros (using previous question)} \\ &= 94 \text{ euros } \textcircled{1} \end{aligned}$$

The jacket is 90 euros in France, so it is cheaper in France

France ^①
(2)

(Total for Question 16 is 3 marks)



17 Show that $3\frac{3}{4} \times \frac{7}{9} = 2\frac{11}{12}$

$$3\frac{3}{4} = 3\left(\frac{4}{4}\right) + \frac{3}{4} = \frac{12}{4} + \frac{3}{4} = \frac{15}{4} \quad (1)$$

$$\frac{15}{4} \times \frac{7}{9} = \frac{15 \times 7}{4 \times 9} = \frac{105}{36} \quad (1)$$

$$\frac{105}{36} = \frac{72}{36} + \frac{33}{36} = 2 + \frac{33}{36} = 2\frac{11}{12} \quad (1) \quad \frac{33}{36} \xrightarrow{\div 3} \frac{11}{12}$$

\uparrow whole part \uparrow remainder

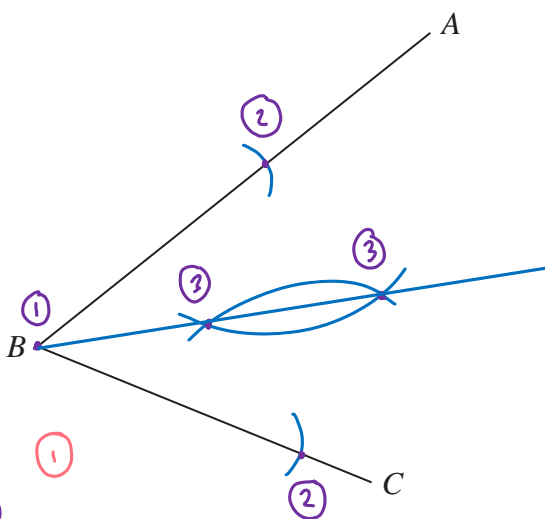
(Total for Question 17 is 3 marks)

18 Using ruler and compasses only, construct the bisector of angle ABC .
You must show all your construction lines.

① Place compass on B and draw arcs on BA and BC

② Place compass where these arcs meet the lines and draw 2 more arcs at the centre.

③ Place a ruler where these arcs meet and draw a line through B.



(Total for Question 18 is 2 marks)



19 (a) Simplify $h^7 \times h^2$ $x^a \times x^b = x^{a+b}$

$$h^7 \times h^2 = h^{7+2}$$

$$= h^9$$

$$h^9$$

(1)

$$G = c^2 - 4c$$

(b) Find the value of G when $c = -5$

$$G = c^2 - 4c$$

$$= (-5)^2 - 4(-5)$$

$$= 25 - (-20)$$

$$= 45$$

$$G = 45$$

(2)

(c) Solve $\frac{5x-3}{4} = 2x+3$

Show clear algebraic working.

$$\frac{5x-3}{4} = 2x+3 \quad (1)$$

$$5x-3 = 4 \times (2x+3)$$

$$5x-3 = 8x+12$$

$$-3 = 3x+12 \quad (1) \quad -5x$$

$$-15 = 3x \quad -12$$

$$-5 = x \quad \div 3$$

$$x = -5 \quad (1)$$

(3)

(Total for Question 19 is 6 marks)

DO NOT WRITE IN THIS AREA

DO NOT WRITE IN THIS AREA

DO NOT WRITE IN THIS AREA



- 20 The table gives information about the length of time, in minutes, that each of 60 students took to travel to school on Monday.

midpoints:

5

15

25

35

45

| Length of time (t minutes) | Frequency |
|----------------------------------|-----------|
| $0 < t \leq 10$ | 4 |
| $10 < t \leq 20$ | 10 |
| $20 < t \leq 30$ | 15 |
| $30 < t \leq 40$ | 25 |
| $40 < t \leq 50$ | 6 |

Work out an **estimate** for the **mean** length of time taken by these 60 students to travel to school on Monday.

Give your answer correct to **one decimal place**.

$$\text{mean} = \frac{\text{sum of entries}}{\text{no. of entries}}$$

"estimate" so work out the midpoints of each range

$$\begin{aligned} \text{sum of entries} &= 5 \times 4 + 15 \times 10 + 25 \times 15 + 35 \times 25 + 45 \times 6 \\ &= 1690 \quad (2) \end{aligned}$$

$$\text{mean} = \frac{1690}{60} = 28.166... = 28.2 \text{ (1 d.p.)}$$

↑
·6 > .5 so round up

given in question

28.2 minutes

(Total for Question 20 is 4 marks)



- 21 In 2017, the population of a village was 7500
In 2019, the population of the village was 8265

(a) Work out the percentage increase in the population of the village from 2017 to 2019

$$8265 - 7500 = 765 \leftarrow \text{increase}$$

$$\frac{765}{7500} \times 100 = 10.2\%$$

↑
original population

..... 10.2 %
(3)

In a sale, normal prices are reduced by 30%
The sale price of a T-shirt was 31.50 euros.

(b) Work out the normal price of the T-shirt.

$$100\% - 30\% = 70\% \leftarrow \text{sale price is } 70\% \text{ of original price}$$

$$\frac{31.50}{0.7} = 45 \quad (2)$$

↑
 $70\% = 0.7$

..... 45 (1) euros
(3)

(Total for Question 21 is 6 marks)

DO NOT WRITE IN THIS AREA

DO NOT WRITE IN THIS AREA

DO NOT WRITE IN THIS AREA



- 22 Point A has coordinates $(-3, 11)$
 Point B has coordinates $(47, b)$
 The midpoint of AB has coordinates $(a, -19)$

Find the value of a and the value of b .

$$\text{midpoint AB} = \frac{x_A + x_B}{2}, \frac{y_A + y_B}{2}$$

$$a = \frac{-3 + 47}{2} = 22 \quad (1)$$

$$-19 = \frac{11 + b}{2} \quad \times 2$$

$$-38 = 11 + b$$

$$-49 = b \quad -11$$

$$a = 22 \quad (1)$$

$$b = -49$$

(Total for Question 22 is 2 marks)

- 23 Pedro drove from Toulouse to Montpellier in 2 hours 42 minutes.
 He drove at an average speed of 90 km/hour.

Janine drove from Toulouse to Montpellier along the same route as Pedro.
 The journey took her 3 hours.

Work out Janine's average speed for the journey.

$$\text{speed} = \frac{\text{distance}}{\text{time}}$$

$$2 \text{ hrs } 42 \text{ mins} = 2.7 \text{ hrs} = 162 \text{ mins} \quad (1)$$

$$2 + \frac{42}{60} = 2.7 \quad (2 \times 60) + 42 = 162$$

$$90 \text{ km/hr} \times 2.7 \text{ hr} = 243 \text{ km} \quad (1) \leftarrow \text{distance from T to M}$$

$$243 \text{ km} \div 3 \text{ hrs} = 81 \text{ km/hr} \quad (1)$$

↑
 Janine's speed

$$81 \quad (1) \text{ km/hour}$$

(Total for Question 23 is 4 marks)



- 24 Harold bought an antique clock for £1200

The clock increased in value by 8% per year.

Find the value of the clock exactly 3 years after Harold bought the clock.

Give your answer correct to the nearest £.

$$\text{increase by } 8\% = 100\% + 8\% = 108\%$$

↑
original value

$$1200 \times 1.08 \times 1.08 \times 1.08 = 1511.6544 \quad (2)$$

↑ ↑ ↑
year 1 year 2 year 3

$$= 1512 \quad \swarrow \cdot 6 > \cdot 5 \text{ so round up}$$

£ 1512 (1)

(Total for Question 24 is 3 marks)


- 25 A box is put on a horizontal table.

The face of the box in contact with the table is a square of side 1.5 metres.

The pressure on the table due to the box is 34.8 newtons/m²

Work out the force exerted by the box on the table.

$$\text{pressure} = \frac{\text{force}}{\text{area}}$$

1.5  area = 1.5 × 1.5 = 2.25m² (1)

1.5

$$34.8 = \frac{\text{force}}{2.25}$$

× 2.25

$$34.8 \times 2.25 = \text{force} \quad (1)$$

$$= 78.3 \text{ N}$$

78.3 (1) newtons

(Total for Question 25 is 3 marks)

DO NOT WRITE IN THIS AREA

DO NOT WRITE IN THIS AREA

DO NOT WRITE IN THIS AREA



26 Alex makes 80 cakes to sell.

He makes chocolate cakes, lemon cakes and fruit cakes where

$$\begin{array}{ccc} \text{number of} & : & \text{number of} & : & \text{number of} \\ \text{chocolate cakes} & & \text{lemon cakes} & & \text{fruit cakes} \end{array} = 3 : 2 : 5$$

Alex sells

all of the chocolate cakes

$\frac{3}{4}$ of the lemon cakes

$\frac{7}{8}$ of the fruit cakes

The profit he makes on each cake he sells is shown in the table.

| Type of cake | Profit per cake he sells |
|--------------|--------------------------|
| chocolate | £2.00 |
| lemon | £1.70 |
| fruit | £2.40 |

Work out the total profit that Alex makes from the cakes he sells.

$$\text{total parts in ratio} = 3 + 2 + 5 = 10$$

so 10 parts represents 80 cakes

$$\text{chocolate} \quad \frac{3}{10} \times 80 = 24 \quad (1)$$

$$24 \times 2.00 = 48$$

$$\text{lemon} \quad \frac{2}{10} \times 80 = 16 \quad (1)$$

$$\frac{3}{4} \times 16 \times 1.70 = 20.4$$

$$\text{fruit} : \quad \frac{5}{10} \times 80 = 40 \quad (1)$$

$$\frac{7}{8} \times 40 \times 2.40 = 84 \quad (1)$$

$$\text{profit} = 84 + 20.4 + 48 = £152.40$$

$$£ \quad 152.40 \quad (1)$$

(Total for Question 26 is 5 marks)



27 The diagram shows a regular octagon $ABCDEFGH$.

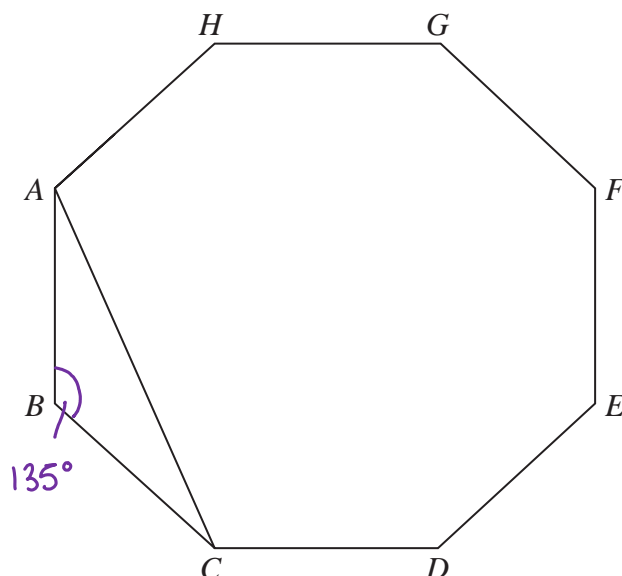


Diagram NOT
accurately drawn

Work out the size of angle HAC .

$$\text{Interior angle of } n\text{-sided shape} = 180 - \frac{360}{n}$$

$$180 - \frac{360}{8} = 135^\circ \quad \text{①} \quad \leftarrow \hat{ABC}$$

$$\begin{aligned} \hat{BAC} &= \frac{180 - 135}{2} \quad \leftarrow \text{angles in a triangle sum to } 180^\circ \\ &= 22.5^\circ \quad \text{①} \quad \leftarrow \hat{BAC} = \hat{BCA} \end{aligned}$$

$$\begin{aligned} \hat{HAC} &= 135 - 22.5 \\ &= 112.5^\circ \end{aligned}$$

$$112.5^\circ \quad \text{①}$$

(Total for Question 27 is 3 marks)

TOTAL FOR PAPER IS 100 MARKS

DO NOT WRITE IN THIS AREA

DO NOT WRITE IN THIS AREA

DO NOT WRITE IN THIS AREA

