

Write your name here

Surname

Other names

Centre Number

Candidate Number

Edexcel GCSE

Mathematics B

Unit 1: Statistics and Probability (Calculator)

Foundation Tier

Sample Assessment Material

Paper Reference

Time: 1 hour 15 minutes**5MB1/1F****You must have:**

Ruler graduated in centimetres and millimetres, protractor, compasses, pen, HB pencil, eraser, calculator. Tracing paper may be used.

Total Marks

Instructions

- Use **black** ink or ball-point pen.
- **Fill in the boxes** at the top of this page with your name, centre number and candidate number.
- Answer **all** questions.
- Answer the questions in the spaces provided
– *there may be more space than you need.*
- **Calculators may be used.**
- If your calculator does not have a π button, take the value of π to be 3.142 unless the question instructs otherwise.



Information

- The total mark for this paper is 60.
- The marks for **each** question are shown in brackets
– *use this as a guide as to how much time to spend on each question.*
- Questions labelled with an **asterisk** (*) are ones where the quality of your written communication will be assessed
– *you should take particular care with your spelling, punctuation and grammar, as well as the clarity of expression, on these questions.*

Advice

- Read each question carefully before you start to answer it.
- Keep an eye on the time.
- Try to answer every question.
- Check your answers if you have time at the end.

S37725A

©2010 Edexcel Limited.

3/2/2/



S 3 7 7 2 5 A 0 1 1 8

Turn over 

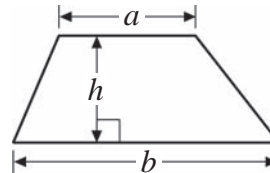
edexcel 
advancing learning, changing lives

GCSE Mathematics 2MB01

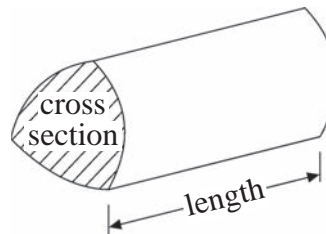
Formulae: Foundation Tier

**You must not write on this formulae page.
Anything you write on this formulae page will gain NO credit.**

Area of trapezium = $\frac{1}{2}(a + b)h$



Volume of prism = area of cross section \times length



Answer ALL questions.

Write your answers in the spaces provided.

You must write down all stages in your working.

- 1** Hannah carried out a survey of 20 people at a Fitness Centre. She asked them which activity they liked best.

Here are her results.

Gym	Tennis	Squash	Swimming	Gym
Swimming	Gym	Tennis	Gym	Squash
Gym	Tennis	Squash	Tennis	Squash
Squash	Gym	Swimming	Gym	Swimming

- (a) Complete the table to show Hannah's results.

(2)

Activity	Tally	Frequency
Gym		
Tennis		
Squash		
Swimming		

- (b) Write down the number of people who liked Squash the best.

(1)

.....

- (c) Which activity was liked best by the most people?

(1)

.....

(Total for Question 1 = 4 marks)

- 2 Mandy lives in Weymouth.
She is planning a shopping trip to Bournemouth.
She will travel by train.

Here is part of the train timetable from Weymouth to Southampton and from Southampton to Weymouth.

Weymouth to Southampton					
Weymouth	0903	1003	1103	1203	1303
Dorchester	0913	1013	1113	1213	1313
Poole	0940	1040	1140	1240	1340
Bournemouth	0953	1053	1153	1253	1353
Brockenhurst	1020	1120	1220	1320	1420
Southampton	1026	1126	1226	1326	1426

Southampton to Weymouth					
Southampton	1224	1324	1424	1524	1624
Brockenhurst	1237	1337	1437	1537	1637
Bournemouth	1300	1400	1500	1600	1700
Poole	1335	1435	1535	1635	1735
Dorchester	1344	1444	1544	1644	1744
Weymouth	1355	1455	1555	1655	1755

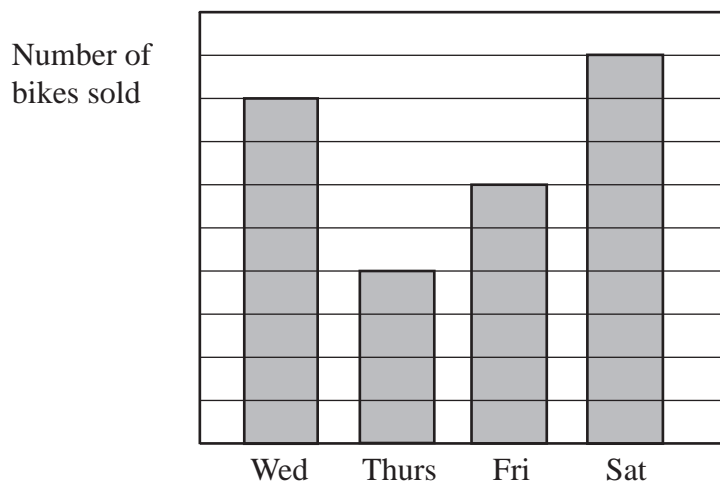
It takes Mandy 25 minutes to walk from home to the train station at Weymouth.
She wants to be in Bournemouth for 3 hours.

Plan a schedule for Mandy's shopping trip.

	Time
Mandy leaves home	
Train departs Weymouth	
Train arrives Bournemouth	
Train leaves Bournemouth (Mandy comes home)	
Train arrives Weymouth	
Mandy arrives home	


(Total for Question 2 = 5 marks)

- 3 The bar chart shows the numbers of bikes a shop sold on Wednesday, Thursday, Friday and Saturday.



Michael started to draw a pictogram to show the **same** information. He has shown the number of bikes sold on Wednesday.

Complete the pictogram.

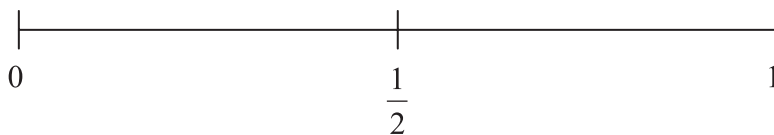
Wednesday	
Thursday	
Friday	
Saturday	

(Total for Question 3 = 3 marks)

4 Liam rolls an ordinary dice.

- (a) On the probability scale below, mark with a cross (X) the probability that he gets a number less than 7

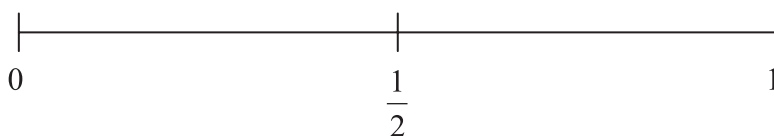
(1)



A bag contains 3 blue counters and 1 red counter.
Kenneth takes at random one counter from the bag.

- (b) On the probability scale below, mark with a cross (X) the probability that he takes a red counter.

(1)



Terry spins a coloured spinner.

The probability that the spinner will land on green is 0.25

The probability that the spinner will land on yellow is 0.35

- (c) (i) Write 0.25 as a fraction.

(1)

.....

- (ii) Write 0.35 as a percentage.

(1)

.....

A weather forecaster says that the probability it will rain tomorrow is s .

- (d) Write down, in terms of s , the probability that it will **not** rain tomorrow.

(1)


.....

(Total for Question 4 = 5 marks)

*5 The table shows information about some students' favourite pets.

	Cat	Dog	Rabbit	Hamster	Goldfish
Boys	6	12	4	10	5
Girls	10	7	6	5	5

On the grid, represent this information in a suitable diagram or chart.



(Total for Question 5 = 4 marks)

6 Ishmael has four white cards and three grey cards.



Ishmael takes at random one white card and one grey card.

(a) Show all the possible outcomes he could get.

(2)

Ishmael takes at random one white card and one grey card.

(b) Work out the probability that he will get a C and a 3.

(1)

(Total for Question 6 = 3 marks)

*7 Harry and Edith are planning their holiday.

They want to travel by airplane.

They can travel with one of three airplane companies, Aireways, King Lingus or Easy Plane.

The tables show the cost per adult and the cost per child to travel with each airplane company.

Aireways									
		July				August			
Week		1 – 8	9 – 15	16 – 22	23 – 31	1 – 12	13 – 19	20 – 26	27 – 31
Adult	AM	£197	£200	£215	£215	£224	£209	£199	£188
	PM	£174	£177	£192	£192	£201	£186	£176	£165
Child	AM	£110	£113	£128	£128	£137	£122	£112	£101
	PM	£87	£90	£105	£105	£114	£99	£89	£78

King Lingus									
		July				August			
Week		1 – 8	9 – 15	16 – 22	23 – 31	1 – 12	13 – 19	20 – 26	27 – 31
Adult	AM	£193	£195	£197	£211	£220	£213	£208	£204
	PM	£176	£178	£180	£191	£203	£196	£191	£187
Child	AM	£119	£121	£123	£134	£146	£139	£134	£130
	PM	£102	£104	£106	£117	£129	£122	£117	£113

Easy Plane									
		July				August			
Week		1 – 8	9 – 15	16 – 22	23 – 31	1 – 12	13 – 19	20 – 26	27 – 31
Adult	AM	£198	£206	£213	£223	£232	£214	£210	£205
	PM	£181	£189	£196	£206	£215	£197	£193	£188
Child	AM	£94	£102	£109	£119	£128	£110	£106	£101
	PM	£77	£85	£92	£102	£111	£93	£89	£84

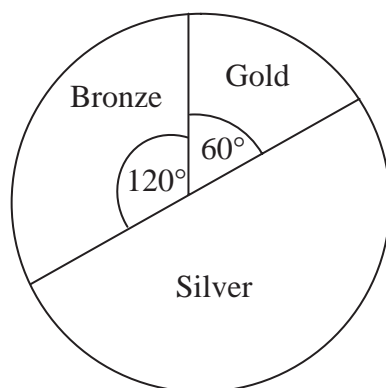
Harry and Edith have 3 children.

They want to travel on the morning of 27th July.

Work out the cheapest cost.

.....
(Total for Question 7 = 6 marks)

- 8 The pie chart shows some information about the numbers of medals won by Canada in the 2008 Olympic Games.

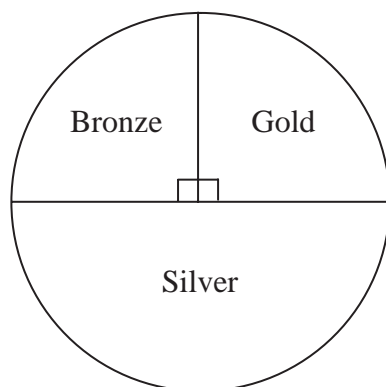


Canada won 3 gold medals.

- (a) Work out the **total** number of medals Canada won.

(2)

The pie chart below shows some information about the numbers of medals won by Canada in the 2004 Olympic Games.



Maria says

“The pie charts show that Canada won the same number of silver medals in 2008 as in 2004”.

- (b) Is Maria correct? Yes No

Explain your answer.

(1)

(Total for Question 8 = 3 marks)

***9** Some students did a test.
Here are their scores.

Boys' scores	27	20	12	28	35	28	37		
Girls' scores	29	31	35	15	18	25	35	27	40

Compare fully the scores of these students.

(Total for Question 9 = 6 marks)

10 Charles wants to find out how much people spend on sweets.

He will use a questionnaire.

(a) Design a suitable question for Charles to use in his questionnaire.

(2)

Charles asks the people in his class to do his questionnaire.

(b) Give a reason why this may not be a suitable sample.

(1)

.....

.....

(Total for Question 10 = 3 marks)

- *11** Kylie wants to invest £1000 for one year.
She considers two investments, Investment A and Investment B.

Investment A

£1000

Earns £2.39 per month

plus

£4.50 bonus for each complete year

Interest paid monthly by cheque.

Investment B

£1000

Earns 3.29% interest per annum

Interest paid yearly by cheque.

Kylie wants to get the greatest return on her investment.

Which of these investments should she choose?

(Total for Question 11= 5 marks)

12 Nadine asked 50 people which of the newspapers the Times, the Guardian and the Telegraph they like best.

Here is information about her results.

19 out of the 25 males said they like the Telegraph best.

5 females said they like the Guardian best.

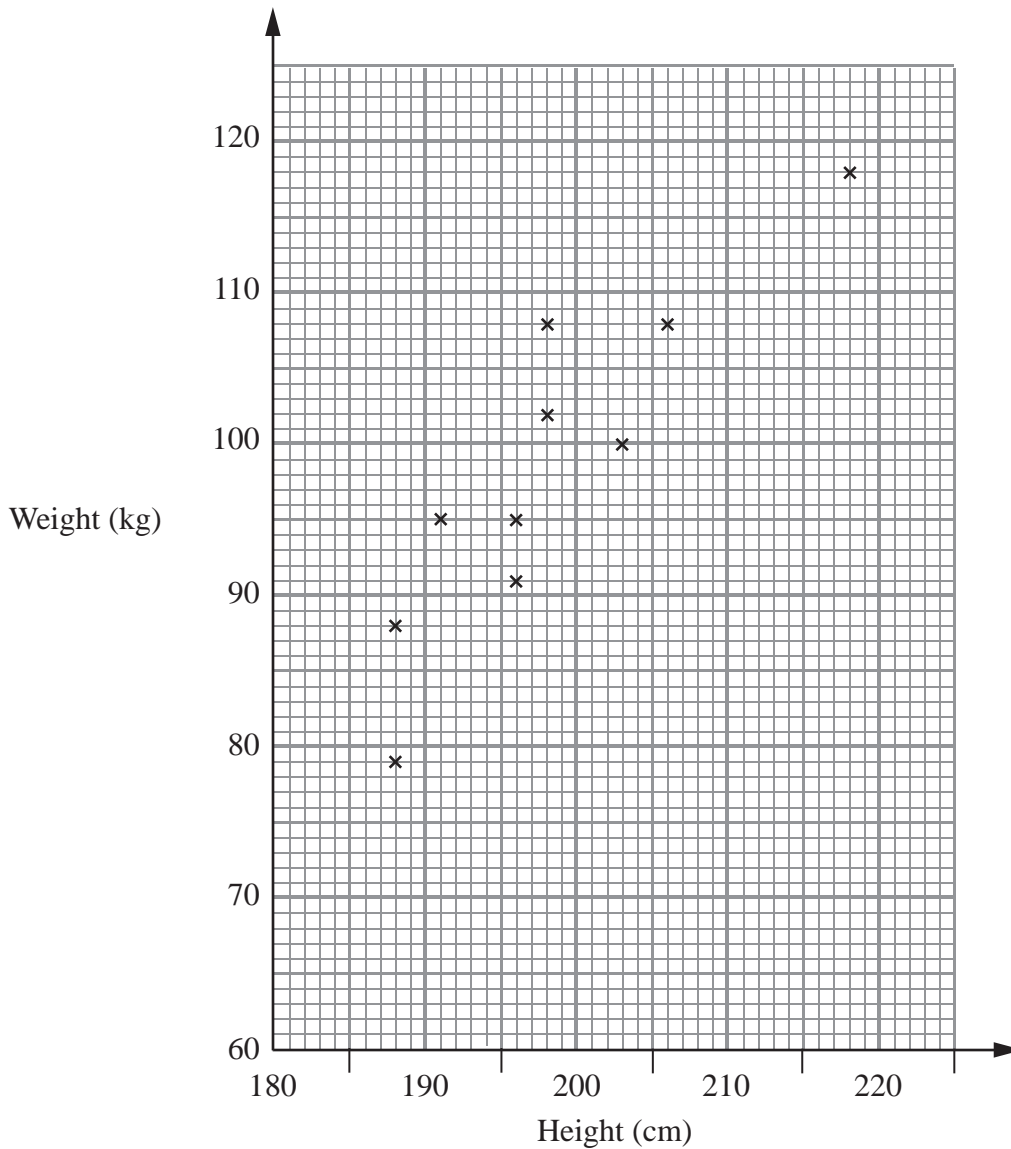
4 out of the 7 people who said they like the Times best were female.

Work out the number of people who like the Telegraph best.

.....
(Total for Question 12 = 4 marks)

- 13 The scatter graph shows some information about a random sample of ten male players at a basketball club.

For each player it shows his height and his weight.



- (a) (i) On the scatter graph, draw a line of best fit.

(ii) Work out the gradient of your line of best fit.

(3)

.....

- (b) Estimate the proportion of male players in the club whose weight is greater than 99 kg and whose height is less than 200 cm.

(2)

.....

(Total for Question 13 = 5 marks)

14 Jenny uses her mother's recipe to make cheese scones.

Her recipe uses a mixture of self-raising flour, butter and cheese in the ratio 6 : 2 : 1 by weight.

In her kitchen, Jenny has:

2 kg of self-raising flour,

500 grams of butter,

200 grams of cheese.

When Jenny makes cheese scones each scone needs about 45 grams of mixture.

Work out the largest number of cheese scones that Jenny can make.

(Total for Question 14 = 4 marks)

TOTAL FOR PAPER: 60 MARKS)