

Write your name here

Surname

Other names

**Pearson**  
**Edexcel GCSE**

Centre Number

--	--	--	--	--	--

Candidate Number

--	--	--	--	--

# Mathematics A

## Paper 2 (Calculator)

**Higher Tier**

Friday 7 November 2014 – Morning

**Time: 1 hour 45 minutes**

Paper Reference

**1MA0/2H**

**You must have:** Ruler graduated in centimetres and millimetres, protractor, pair of compasses, pen, HB pencil, eraser, calculator. Tracing paper may be used.

Total Marks

### Instructions

- Use **black** ink or ball-point pen.
- **Fill in the boxes** at the top of this page with your name, centre number and candidate number.
- Answer **all** questions.
- Answer the questions in the spaces provided – *there may be more space than you need.*
- **Calculators may be used.**
- If your calculator does not have a  $\pi$  button, take the value of  $\pi$  to be 3.142 unless the question instructs otherwise.



### Information

- The total mark for this paper is 100
- The marks for **each** question are shown in brackets – *use this as a guide as to how much time to spend on each question.*
- Questions labelled with an **asterisk** (\*) are ones where the quality of your written communication will be assessed.

### Advice

- Read each question carefully before you start to answer it.
- Keep an eye on the time.
- Try to answer every question.
- Check your answers if you have time at the end.

Turn over ►

P44587A

©2014 Pearson Education Ltd.

6/7/6/



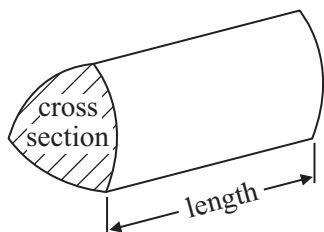
**PEARSON**

## GCSE Mathematics 1MA0

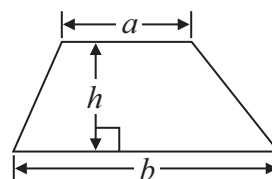
Formulae: Higher Tier

**You must not write on this formulae page.**  
**Anything you write on this formulae page will gain NO credit.**

**Volume of prism** = area of cross section  $\times$  length

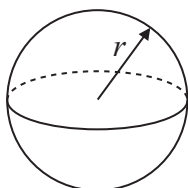


**Area of trapezium** =  $\frac{1}{2} (a + b)h$



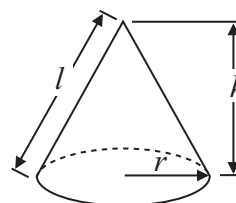
**Volume of sphere** =  $\frac{4}{3} \pi r^3$

**Surface area of sphere** =  $4\pi r^2$

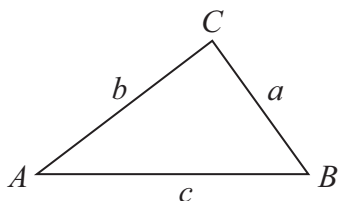


**Volume of cone** =  $\frac{1}{3} \pi r^2 h$

**Curved surface area of cone** =  $\pi r l$



**In any triangle ABC**



**The Quadratic Equation**

The solutions of  $ax^2 + bx + c = 0$   
 where  $a \neq 0$ , are given by

$$x = \frac{-b \pm \sqrt{b^2 - 4ac}}{2a}$$

**Sine Rule**  $\frac{a}{\sin A} = \frac{b}{\sin B} = \frac{c}{\sin C}$

**Cosine Rule**  $a^2 = b^2 + c^2 - 2bc \cos A$

**Area of triangle** =  $\frac{1}{2} ab \sin C$



**Answer ALL questions.**

**Write your answers in the spaces provided.**

**You must write down all stages in your working.**

- 1** Here are the ingredients needed to make 10 pancakes.

<b>Pancakes</b>	
Ingredients to make <b>10</b> pancakes	
300 ml	of milk
120 g	of flour
2	eggs

Matthew makes 30 pancakes.

- (a) Work out how much flour he uses.

.....  
(2)

Tara makes some pancakes.  
She uses 750 ml of milk.

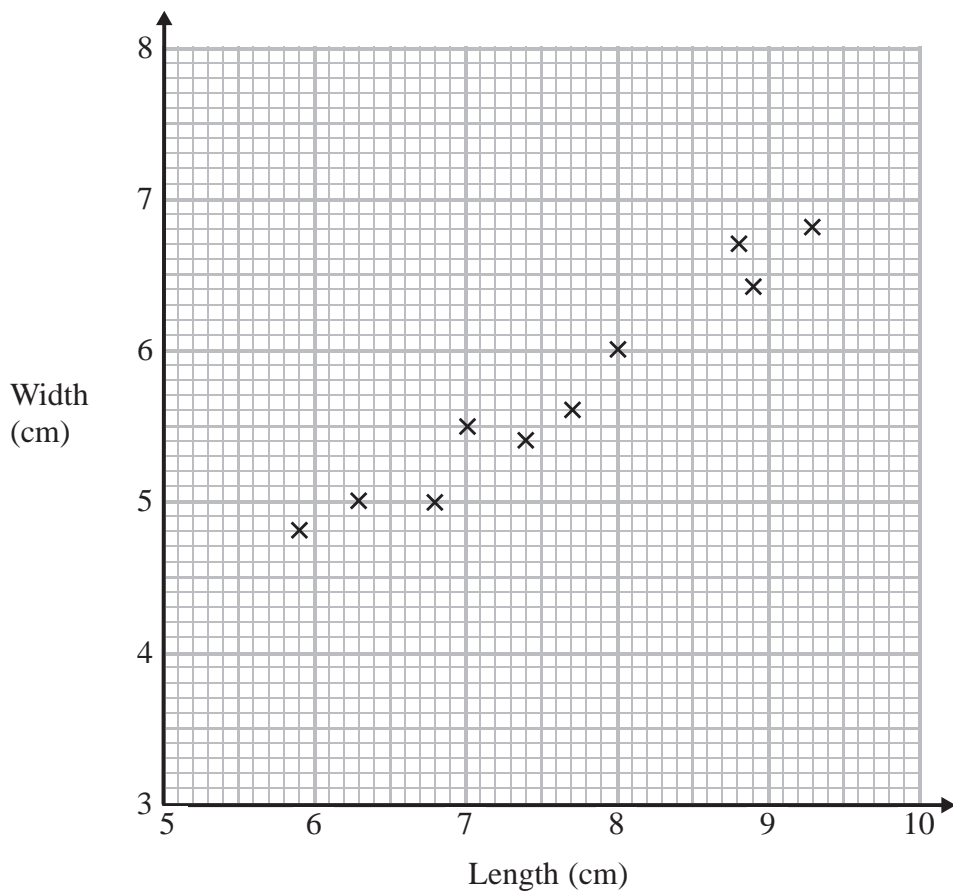
- (b) Work out how many pancakes she makes.

.....  
(2)

**(Total for Question 1 is 4 marks)**



- 2 The scatter graph shows some information about ten pine cones from the same tree. It shows the length and the width of each pine cone.



- (a) Describe the relationship between the length and the width of a pine cone.

.....

.....

(1)

Another pine cone from this tree has a length of 8.4 cm.

- (b) Estimate the width of this pine cone.

.....cm

(2)

**(Total for Question 2 is 3 marks)**



**3**  $f = 3g + 7h$

(a) Work out the value of  $f$  when  $g = -5$  and  $h = 2$

$$f = \dots\dots\dots$$

(2)

(b) Factorise  $3x + 6$

$$\dots\dots\dots$$

(1)

(c) Expand and simplify  $5(y - 2) + 2(y - 3)$

$$\dots\dots\dots$$

(2)

(d) Simplify  $m^5 \times m^3$

$$\dots\dots\dots$$

(1)

(e) Simplify  $\frac{p^6}{p^2}$

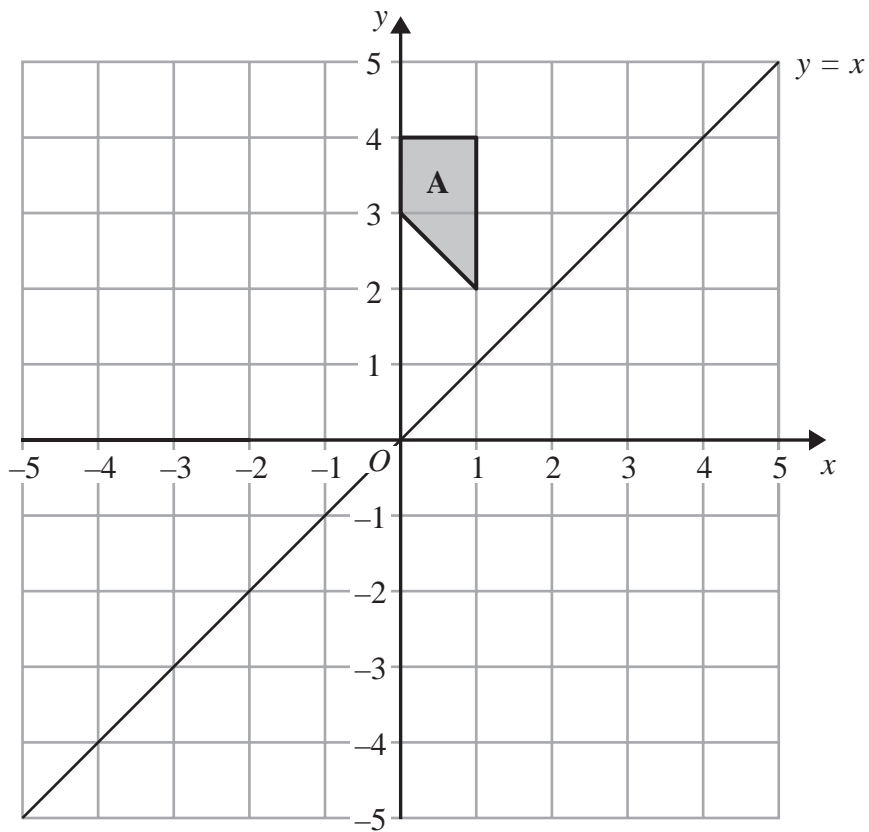
$$\dots\dots\dots$$

(1)

**(Total for Question 3 is 7 marks)**

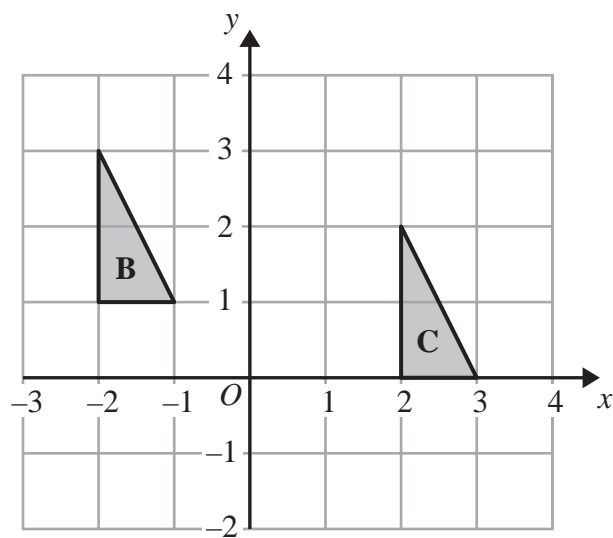


4



(a) On the grid, reflect shape **A** in the line  $y = x$ .

(2)



(b) Describe fully the single transformation that maps triangle **B** onto triangle **C**.

.....

.....

(2)

(Total for Question 4 is 4 marks)



- 5 There are some green counters, some yellow counters, some blue counters and some red counters in a bag.

The table shows the probabilities that a counter taken at random from the bag will be green or yellow or red.

Colour	Green	Yellow	Blue	Red
Probability	0.16	0.4		0.24

Mary takes at random a counter from the bag.

- (a) Work out the probability that the counter will be blue.

.....  
(2)

Mary puts the counter back into the bag.  
There are 125 counters in the bag.

- (b) Work out the number of green counters in the bag.

.....  
(2)

**(Total for Question 5 is 4 marks)**



6 Margaret is on holiday in France.

She buys an English newspaper.

The cost of the newspaper is 5 euros.

In England, the cost of the same newspaper is £2.50

The exchange rate is £1 = 1.16 euros.

Work out the difference between the cost of the newspaper in France and the cost of the newspaper in England.

.....  
(Total for Question 6 is 3 marks)

7 Here are the first five terms of an arithmetic sequence.

2      6      10      14      18

(a) Write down an expression, in terms of  $n$ , for the  $n$ th term of this sequence.

.....  
(2)

\*(b) Is 86 a term in the sequence?

You must give a reason for your answer.

(1)

(Total for Question 7 is 3 marks)

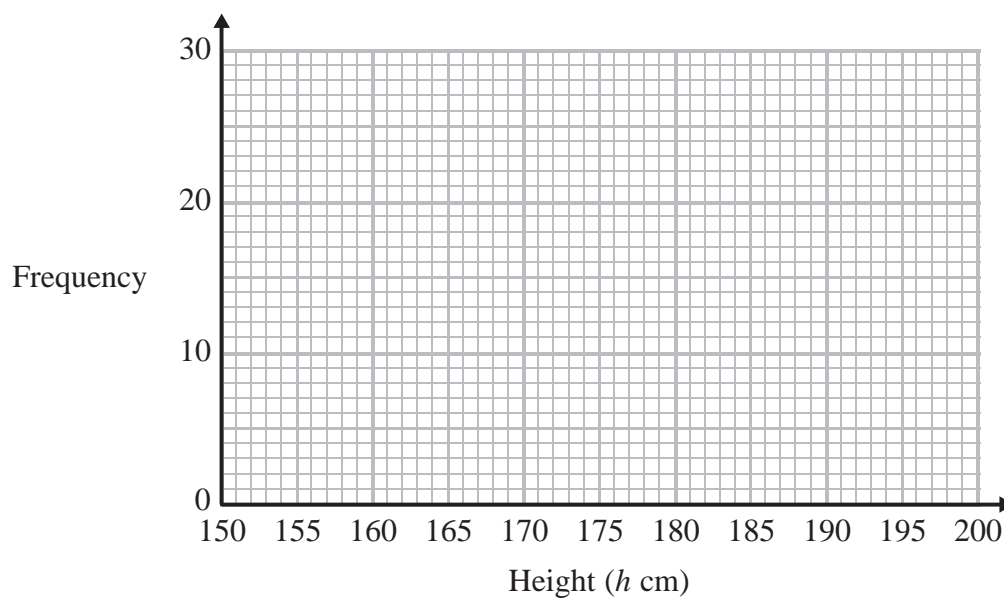




- 8 The frequency table gives information about the heights of some people.

Height ( $h$ cm)	Frequency
$160 < h \leq 165$	2
$165 < h \leq 170$	5
$170 < h \leq 175$	10
$175 < h \leq 180$	21
$180 < h \leq 185$	16
$185 < h \leq 190$	4

Draw a frequency polygon for this information.



(Total for Question 8 is 2 marks)



\*9 The table gives some information about student attendance at a school on Friday.

Year	Number of students		
	Present	Absent	Total
Year 7	192	16	208
Year 8	219	22	241
Year 9	234	28	262
Year 10	233	28	261
Year 11	214	24	238

The school has a target of 94% of students being present each day.

Did the school meet its target on Friday?

---

(Total for Question 9 is 3 marks)



**10** The equation

$$x^3 - 2x = 125$$

has a solution between 5 and 6

Use a trial and improvement method to find this solution.

Give your answer correct to 1 decimal place.

You must show all your working.

$x = \dots\dots\dots$

**(Total for Question 10 is 4 marks)**

---



- \*11 Saphia is organising a conference.  
People at the conference will sit at circular tables.



Diagram **NOT**  
accurately drawn

Each table has a diameter of 140 cm.  
Each person needs 60 cm around the circumference of the table.


There are 12 of these tables in the conference room.  
A total of 90 people will be at the conference.

Are there enough tables in the conference room?

(Total for Question 11 is 4 marks)



**12** On the grid, draw the graph of  $y = 2x - 3$  for values of  $x$  from  $-2$  to  $3$



(Total for Question 12 is 4 marks)



13 The diagram shows a swimming pool in the shape of a prism.

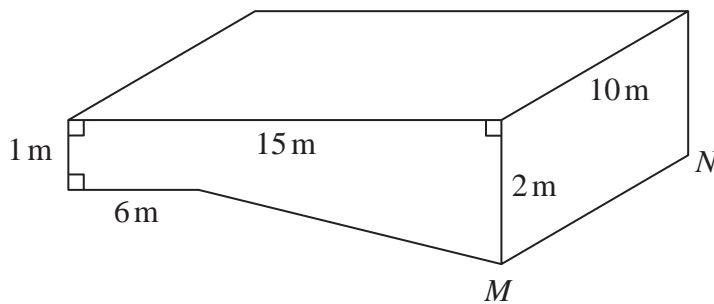


Diagram **NOT**  
accurately drawn

The swimming pool is empty.

The swimming pool is filled with water at a constant rate of 50 litres per minute.

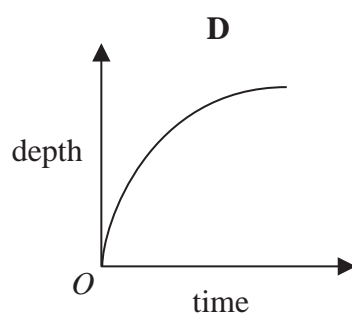
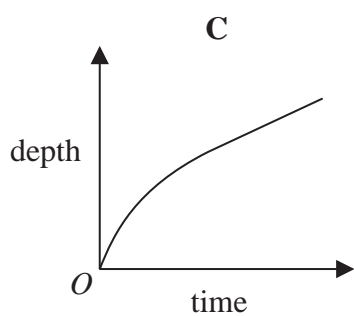
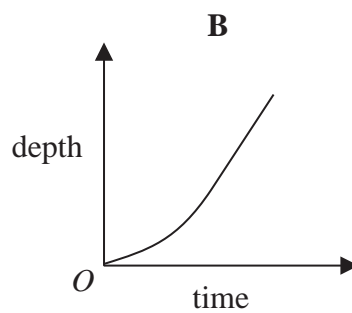
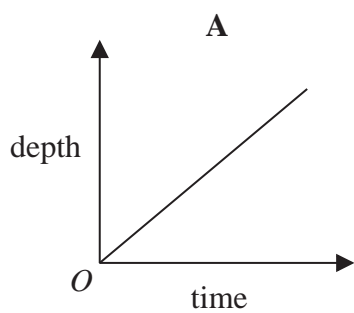
- (a) Work out how long it will take for the swimming pool to be completely full of water.  
Give your answer in hours.  
( $1 \text{ m}^3 = 1000 \text{ litres}$ )

..... hours

(5)



Here are four graphs.



(b) Write down the letter of the graph that best shows how the depth of the water in the pool above the line  $MN$  changes with time as the pool is filled.

.....  
(1)

(Total for Question 13 is 6 marks)



\*14 Peter has £20 000 to invest in a savings account for 2 years.

He finds information about two savings accounts.

**Bonus Saver**

Compound interest

4% for the first year

then

1.5% each year

**Fixed Rate**

Compound interest

2.5% each year

Peter wants to have as much money as possible in his savings account at the end of 2 years.

Which of these savings accounts should he choose?

(Total for Question 14 is 4 marks)





**15** A cinema sells adult tickets and child tickets.

The total cost of 3 adult tickets and 1 child ticket is £30

The total cost of 1 adult ticket and 3 child tickets is £22

Work out the cost of an adult ticket and the cost of a child ticket.

adult ticket £.....

child ticket £.....

**(Total for Question 15 is 4 marks)**



16 The diagram represents a metal frame.

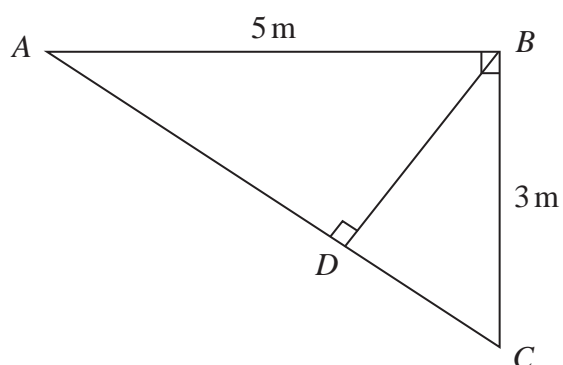


Diagram **NOT**  
accurately drawn

The frame is made from four metal bars,  $AB$ ,  $AC$ ,  $BC$  and  $BD$ .

Angle  $ABC = \text{angle } ADB = 90^\circ$

$AB = 5 \text{ m}$

$BC = 3 \text{ m}$

Work out the total length of the four metal bars of the frame.

Give your answer correct to 3 significant figures.

..... m

(Total for Question 16 is 5 marks)



17

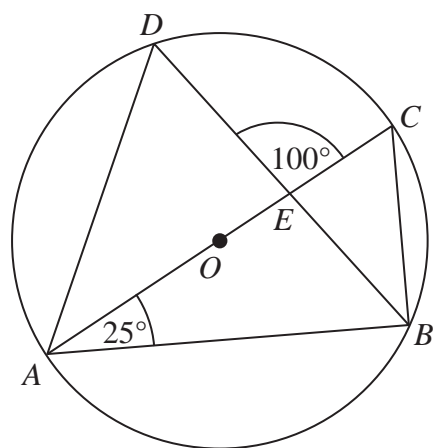


Diagram **NOT**  
accurately drawn

$A$ ,  $B$ ,  $C$  and  $D$  are points on the circumference of a circle, centre  $O$ .  
 $AC$  is a diameter of the circle.  
 $AC$  and  $BD$  intersect at  $E$ .

Angle  $CAB = 25^\circ$   
 Angle  $DEC = 100^\circ$

Work out the size of angle  $DAC$ .  
 You must show all your working.

(Total for Question 17 is 4 marks)



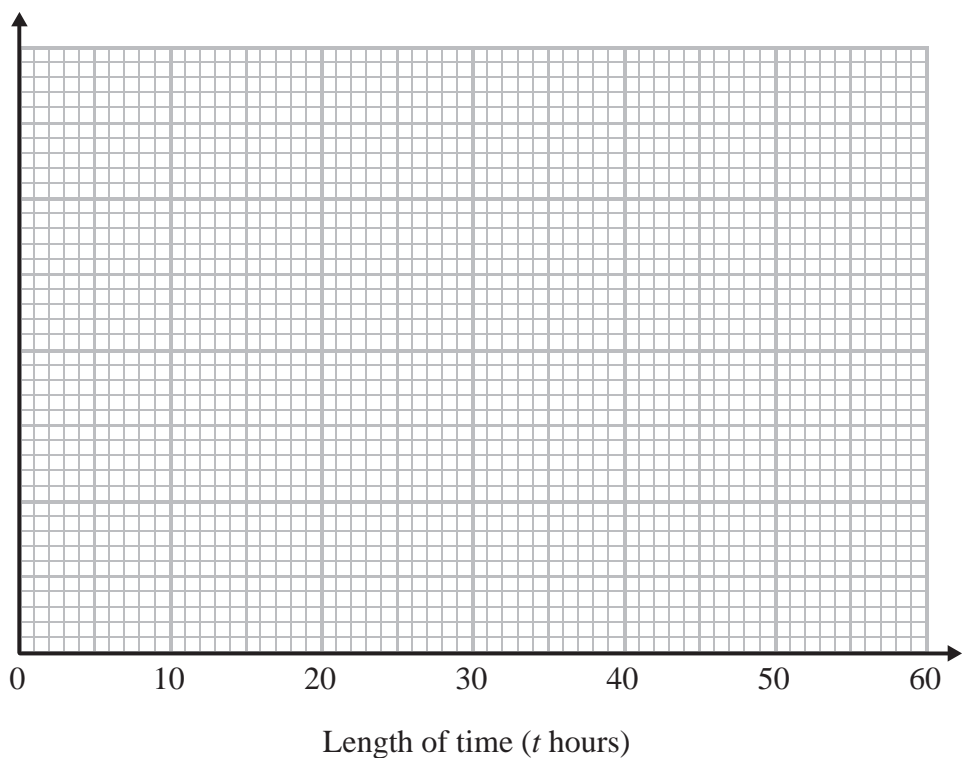
18 The table gives some information about the lengths of time, in hours, that some adults watched TV last week.

Length of time ( $t$ hours)	Frequency
$0 \leq t < 10$	8
$10 \leq t < 15$	15
$15 \leq t < 20$	11
$20 \leq t < 30$	10
$30 \leq t < 50$	6

(a) Work out an estimate for the mean length of time.

..... hours  
(4)

(b) Draw a histogram for the information in the table.



(3)

(Total for Question 18 is 7 marks)





- 20 Solve  $3x^2 - 5x - 1 = 0$   
Give your solutions correct to 3 significant figures.

.....  
(Total for Question 20 is 3 marks)

---



21

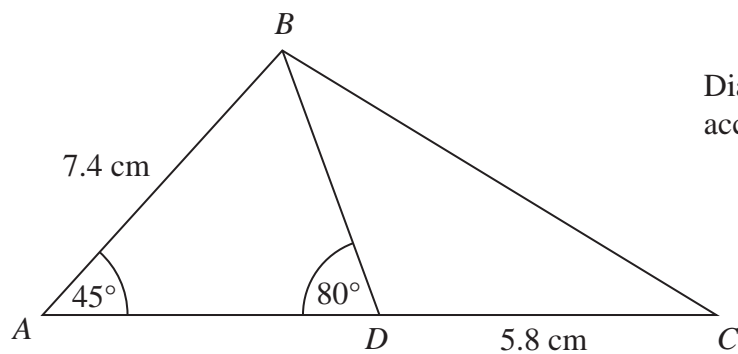


Diagram **NOT**  
accurately drawn

$ABC$  is a triangle.  
 $D$  is a point on  $AC$ .  
 Angle  $BAD = 45^\circ$   
 Angle  $ADB = 80^\circ$   
 $AB = 7.4 \text{ cm}$   
 $DC = 5.8 \text{ cm}$

Work out the length of  $BC$ .  
 Give your answer correct to 3 significant figures.

..... cm

(Total for Question 21 is 5 marks)



22 (a) Simplify fully  $\frac{2x^2 - 5x + 3}{x^2 + 5x - 6}$

.....  
(3)

(b) Make  $m$  the subject of

$$\frac{m}{v} - \frac{t}{b} = \frac{m - t}{R}$$

.....  
(4)

(Total for Question 22 is 7 marks)





**\*23** A road is 4530 m long, correct to the nearest 10 metres.  
Kirsty drove along the road in 205 seconds, correct to the nearest 5 seconds.

The average speed limit for the road is 80 km/h.

Could Kirsty's average speed have been greater than 80 km/h?  
You must show your working.

---

(Total for Question 23 is 5 marks)

---

**TOTAL FOR PAPER IS 100 MARKS**



**BLANK PAGE**



**BLANK PAGE**



**BLANK PAGE**

