

Write your name here

Surname

Other names

Pearson
Edexcel GCSE

Centre Number

--	--	--	--	--	--

Candidate Number

--	--	--	--	--

Mathematics A

Paper 1 (Non-Calculator)

Higher Tier

Monday 9 June 2014 – Morning

Time: 1 hour 45 minutes

Paper Reference

1MA0/1H

You must have: Ruler graduated in centimetres and millimetres, protractor, pair of compasses, pen, HB pencil, eraser. Tracing paper may be used.

Total Marks

Instructions

- Use **black** ink or ball-point pen.
- **Fill in the boxes** at the top of this page with your name, centre number and candidate number.
- Answer **all** questions.
- Answer the questions in the spaces provided – *there may be more space than you need.*
- **Calculators must not be used.**



Information

- The total mark for this paper is 100
- The marks for **each** question are shown in brackets – *use this as a guide as to how much time to spend on each question.*
- Questions labelled with an **asterisk** (*) are ones where the quality of your written communication will be assessed.

Advice

- Read each question carefully before you start to answer it.
- Keep an eye on the time.
- Try to answer every question.
- Check your answers if you have time at the end.

Turn over ►

P44022A

©2014 Pearson Education Ltd.

6/5/5/



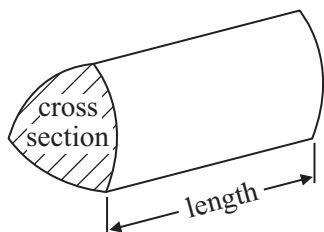
PEARSON

GCSE Mathematics 1MA0

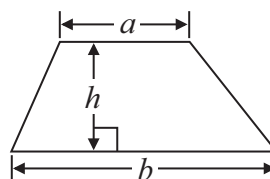
Formulae: Higher Tier

**You must not write on this formulae page.
Anything you write on this formulae page will gain NO credit.**

Volume of prism = area of cross section \times length

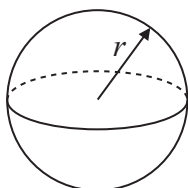


Area of trapezium = $\frac{1}{2} (a + b)h$



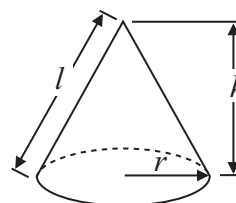
Volume of sphere = $\frac{4}{3} \pi r^3$

Surface area of sphere = $4\pi r^2$

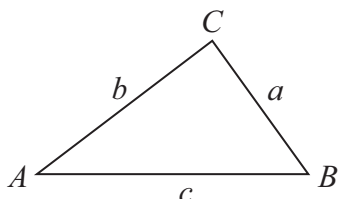


Volume of cone = $\frac{1}{3} \pi r^2 h$

Curved surface area of cone = $\pi r l$



In any triangle ABC



The Quadratic Equation

The solutions of $ax^2 + bx + c = 0$
where $a \neq 0$, are given by

$$x = \frac{-b \pm \sqrt{b^2 - 4ac}}{2a}$$

Sine Rule $\frac{a}{\sin A} = \frac{b}{\sin B} = \frac{c}{\sin C}$

Cosine Rule $a^2 = b^2 + c^2 - 2bc \cos A$

Area of triangle = $\frac{1}{2} ab \sin C$



Answer ALL questions.

Write your answers in the spaces provided.

You must write down all stages in your working.

You must NOT use a calculator.

1 (a) Work out $\frac{1}{7} \times \frac{2}{3}$

.....
(1)

(b) Work out $\frac{3}{5} - \frac{1}{3}$

.....
(2)

(Total for Question 1 is 3 marks)



2 Here are the times, in minutes, that 20 children took to walk to school.

13 21 19 27 31 5 23 29 18 25
34 15 28 23 22 40 16 19 32 9

Draw an ordered stem and leaf diagram for these times.



Key:

(Total for Question 2 is 3 marks)



3 50 people each did one activity at a sports centre.

Some of the people went swimming.

Some of the people played squash.

The rest of the people used the gym.

21 of the people were female.

6 of the 8 people who played squash were male.

18 of the people used the gym.

9 males went swimming.

Work out the number of females who used the gym.

.....
(Total for Question 3 is 4 marks)



4 Mr Brown and his 2 children are going to London by train.

An adult ticket costs £24

A child ticket costs £12

Mr Brown has a Family Railcard.

Family Railcard gives

$\frac{1}{3}$ off adult tickets

60% off child tickets

Work out the total cost of the tickets when Mr Brown uses his Family Railcard.

£.....

(Total for Question 4 is 4 marks)



- 5 Rebecca wants to find out how many books people buy.
She is going to use a questionnaire.

Design a suitable question for Rebecca to use in her questionnaire.

(Total for Question 5 is 2 marks)

- 6 (a) Expand $2m(m + 3)$

.....
(1)

- (b) Factorise fully $3xy^2 - 6xy$

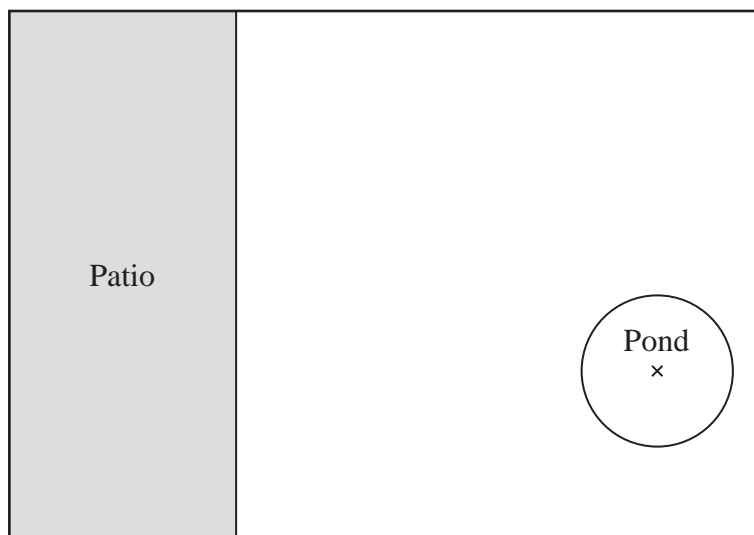
.....
(2)

(Total for Question 6 is 3 marks)



8 The diagram shows a garden in the shape of a rectangle.

The scale of the diagram is 1 cm represents 2 m.



Scale: 1 cm represents 2 m

Irfan is going to plant a tree in the garden.

The tree must be

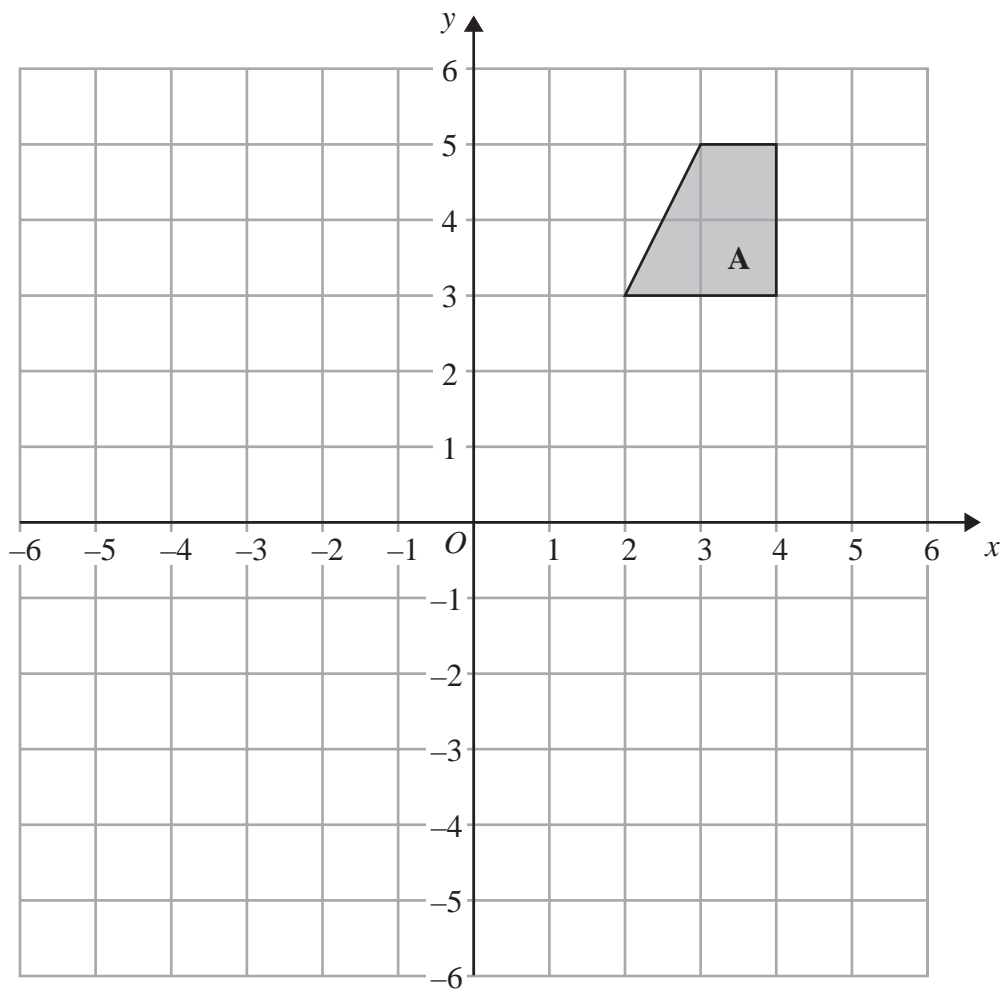
and more than 3 metres from the patio
more than 6 metres from the centre of the pond.

On the diagram, shade the region where Irfan can plant the tree.

(Total for Question 8 is 3 marks)



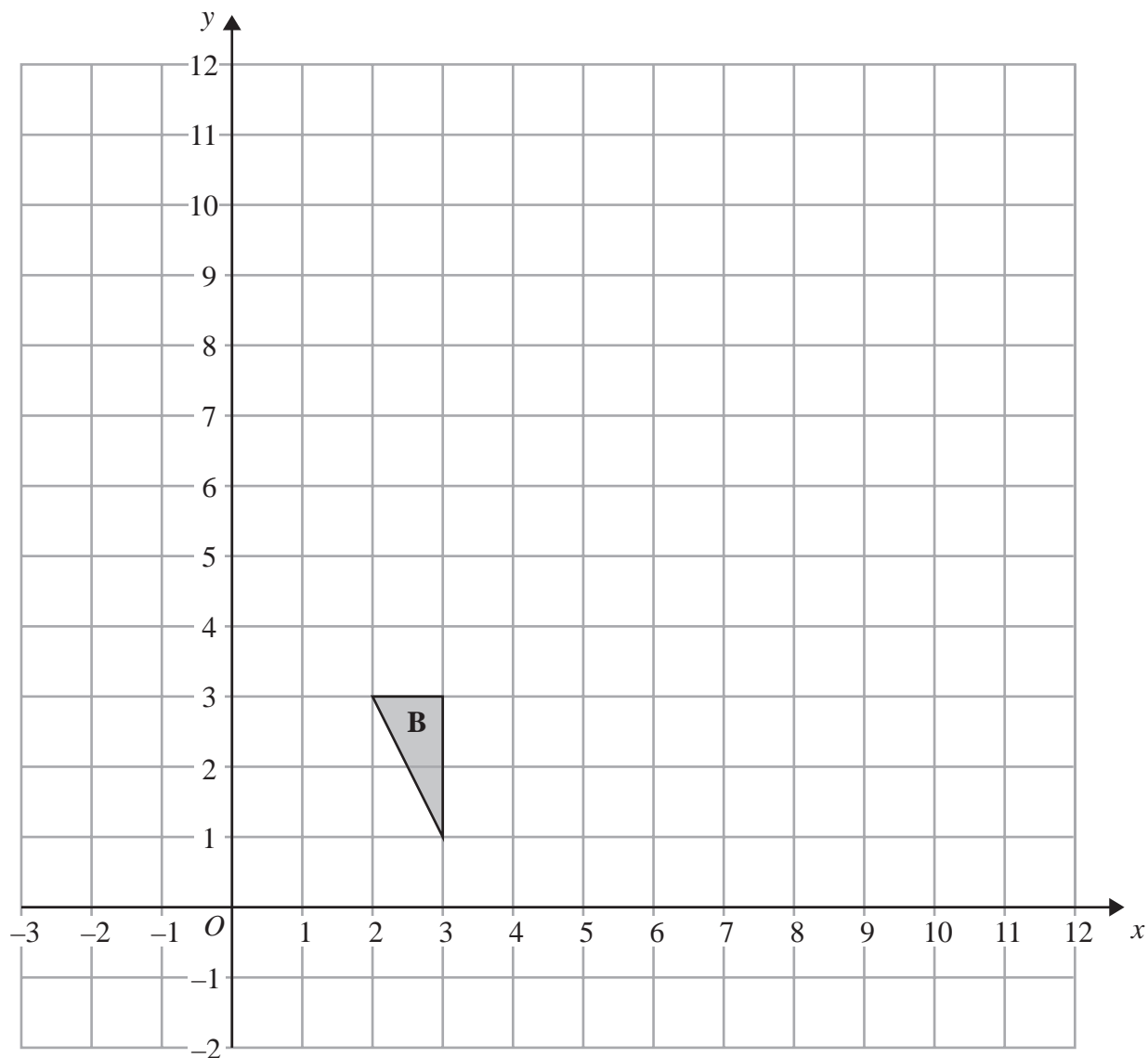
9



(a) On the grid, rotate shape A 180° about the point (1, 1).

(2)





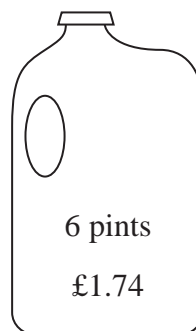
(b) On the grid, enlarge triangle **B** by scale factor 3, centre (0, 0).

(2)

(Total for Question 9 is 4 marks)



*10 Milk is sold in two sizes of bottle.



A 4 pint bottle of milk costs £1.18

A 6 pint bottle of milk costs £1.74

Which bottle of milk is the best value for money?

You must show all your working.

(Total for Question 10 is 3 marks)



11

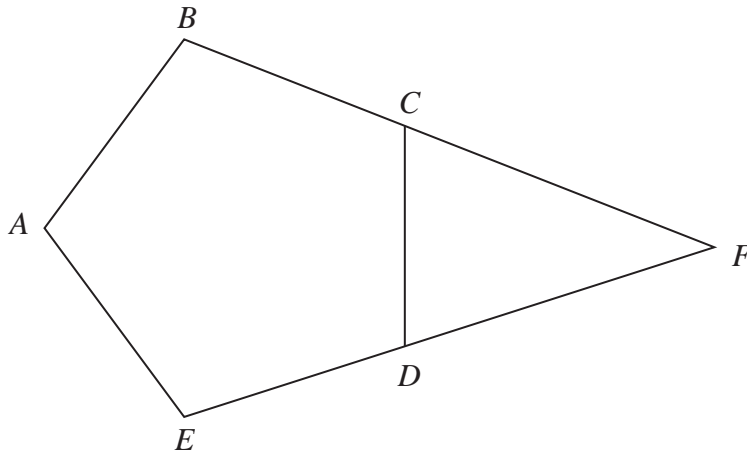


Diagram **NOT**
accurately drawn

$ABCDE$ is a regular pentagon.
 BCF and EDF are straight lines.

Work out the size of angle CFD .
You must show how you got your answer.

.....
(Total for Question 11 is 3 marks)



12 You can change temperatures from °F to °C by using the formula

$$C = \frac{5(F - 32)}{9}$$

F is the temperature in °F.

C is the temperature in °C.

The minimum temperature in an elderly person's home should be 20°C.

Mrs Smith is an elderly person.

The temperature in Mrs Smith's home is 77°F.

*(a) Decide whether or not the temperature in Mrs Smith's home is lower than the minimum temperature should be.

(3)

(b) Make F the subject of the formula $C = \frac{5(F - 32)}{9}$

.....
(3)

(Total for Question 12 is 6 marks)



13*Competition**

a prize every 2014 seconds

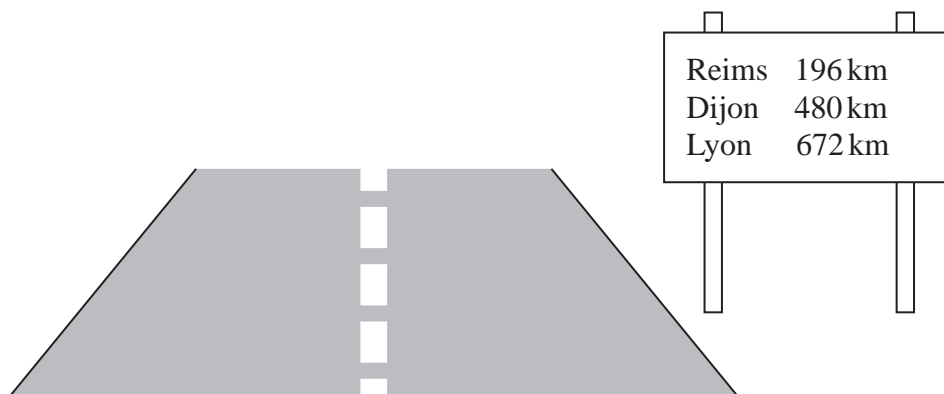
In a competition, a prize is won every 2014 seconds.

Work out an estimate for the number of prizes won in 24 hours.
You must show your working.

(Total for Question 13 is 4 marks)



- 14 Emily is driving in France.
She sees this sign.



Emily is going to drive to Dijon.
She plans to drive at an average speed of 50 miles per hour.

Work out how long it should take Emily to drive to Dijon.

.....
(Total for Question 14 is 4 marks)

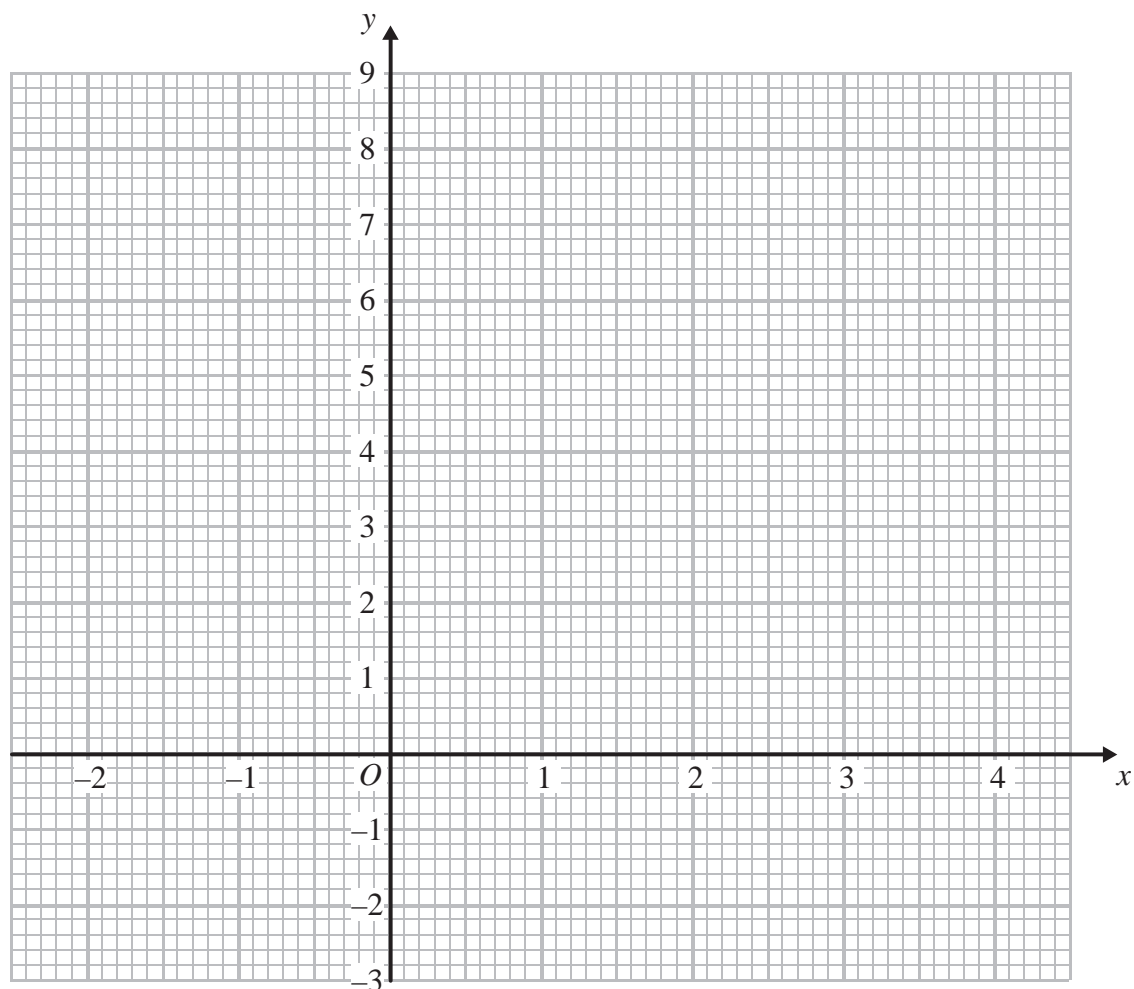


15 (a) Complete the table of values for $y = x^2 - 2x - 1$

x	-2	-1	0	1	2	3	4
y	7			-2	-1		

(2)

(b) On the grid, draw the graph of $y = x^2 - 2x - 1$ for values of x from -2 to 4



(2)

(c) Solve $x^2 - 2x - 1 = x + 3$

(2)

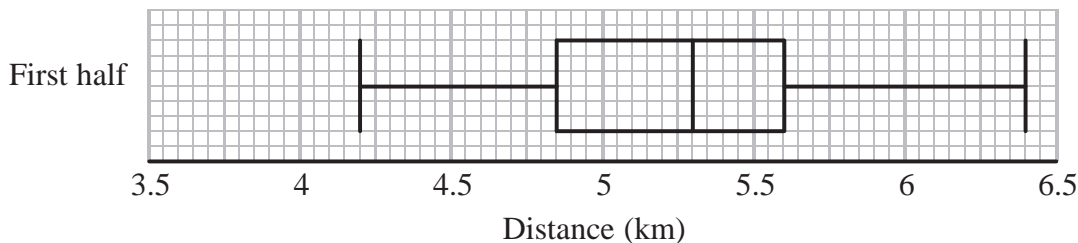
(Total for Question 15 is 6 marks)



16 Colin took a sample of 80 football players.

He recorded the total distance, in kilometres, each player ran in the first half of their matches on Saturday.

Colin drew this box plot for his results.



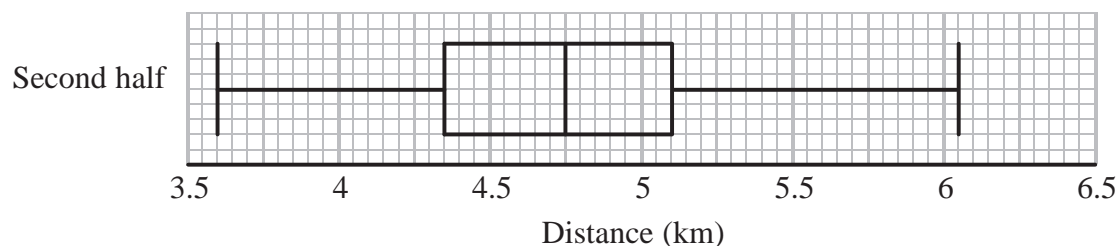
(a) Work out the interquartile range. km
(2)

There were 80 players in Colin's sample.

(b) Work out the number of players who ran a distance of more than 5.6 km.
(2)

Colin also recorded the total distance each player ran in the second half of their matches.

He drew the box plot below for this information.



(c) Compare the distribution of the distances run in the first half with the distribution of the distances run in the second half.
.....
.....
.....
(2)

(Total for Question 16 is 6 marks)



17 (a) Write down the value of 10^0

.....
(1)

(b) Write down the value of 10^{-2}

.....
(1)

(c) Write these numbers in order of size.
Start with the smallest number.

2.73×10^3

27.3×10^{-3}

273×10^2

0.00273

.....
(2)

(Total for Question 17 is 4 marks)



18 Solve the simultaneous equations

$$4x + y = 25$$

$$x - 3y = 16$$

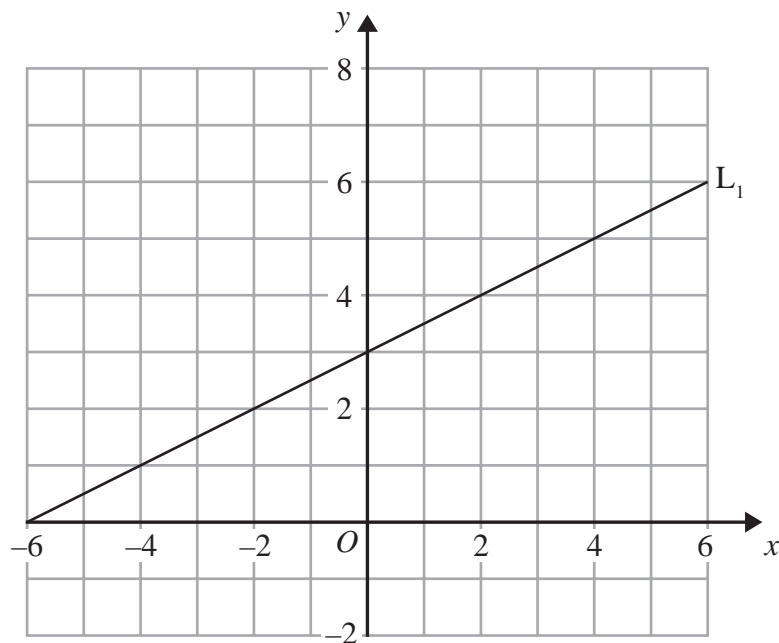
$x = \dots\dots\dots$

$y = \dots\dots\dots$

(Total for Question 18 is 3 marks)



19 The diagram shows a straight line, L_1 , drawn on a grid.



A straight line, L_2 , is parallel to the straight line L_1 and passes through the point $(0, -5)$.

Find an equation of the straight line L_2 .

.....
(Total for Question 19 is 3 marks)



20 Steve has a photo and a rectangular piece of card.

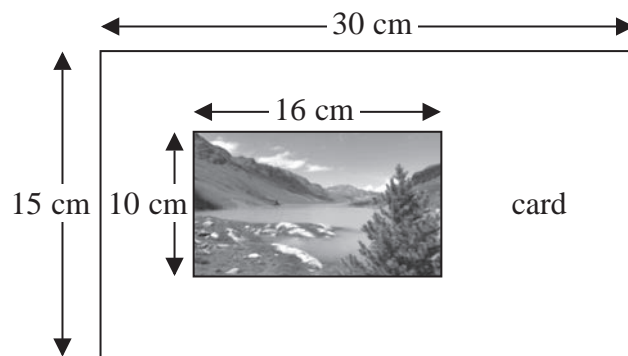
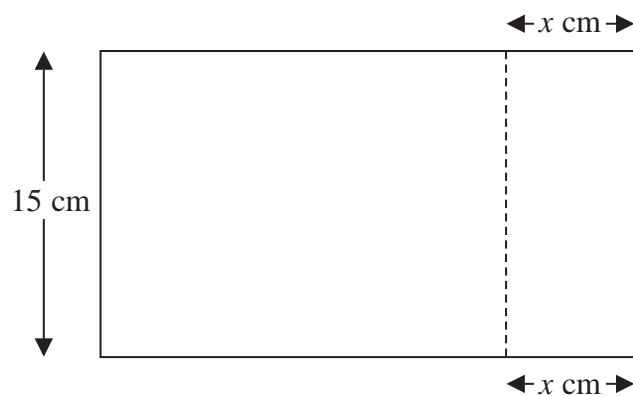


Diagram **NOT** accurately drawn

The photo is 16 cm by 10 cm.

The card is 30 cm by 15 cm.

Steve cuts the card along the dotted line shown in the diagram below.



Steve throws away the piece of card that is 15 cm by x cm.

The piece of card he has left is mathematically similar to the photo.

Work out the value of x .

(Total for Question 20 is 3 marks)



21

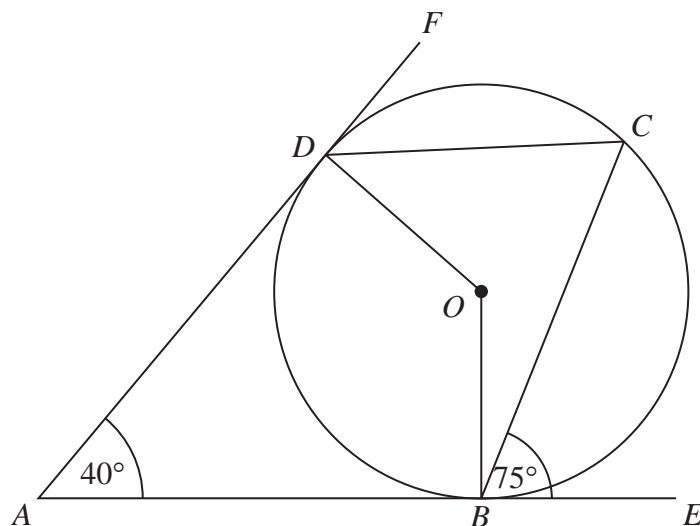


Diagram **NOT**
accurately drawn

B , C and D are points on the circumference of a circle, centre O .
 ABE and ADF are tangents to the circle.

Angle $DAB = 40^\circ$

Angle $CBE = 75^\circ$

Work out the size of angle ODC .

(Total for Question 21 is 3 marks)



22 (a) Simplify $(3x^2y^4)^3$

.....
(2)

(b) Simplify $\frac{x^2 - 9}{2x^2 + 5x - 3}$

.....
(3)

(Total for Question 22 is 5 marks)

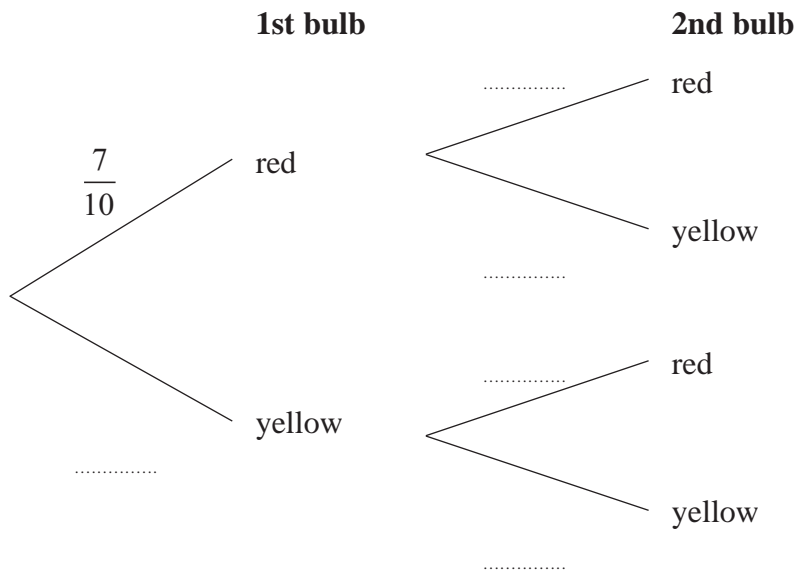


23 Yvonne has 10 tulip bulbs in a bag.

7 of the tulip bulbs will grow into red tulips.
 3 of the tulip bulbs will grow into yellow tulips.

Yvonne takes at random two tulip bulbs from the bag.
 She plants the bulbs.

(a) Complete the probability tree diagram.



(2)

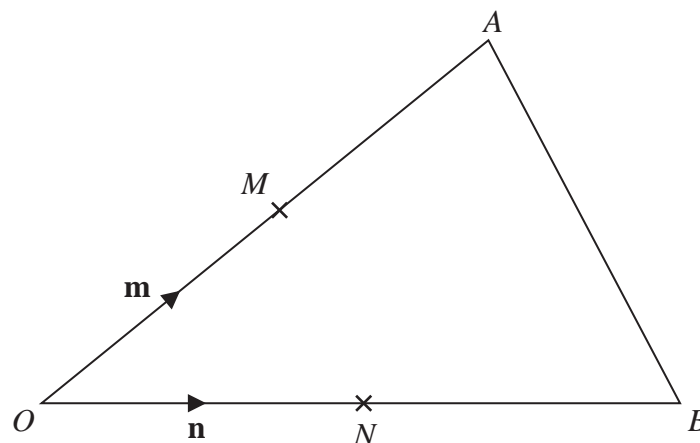
(b) Work out the probability that at least one of the bulbs will grow into a yellow tulip.

.....
 (3)

(Total for Question 23 is 5 marks)



*24

Diagram **NOT**
accurately drawn OAB is a triangle. M is the midpoint of OA . N is the midpoint of OB .

$$\vec{OM} = \mathbf{m}$$

$$\vec{ON} = \mathbf{n}$$

Show that AB is parallel to MN .

(Total for Question 24 is 3 marks)



25 (a) Rationalise the denominator of $\frac{12}{\sqrt{3}}$

.....
(2)

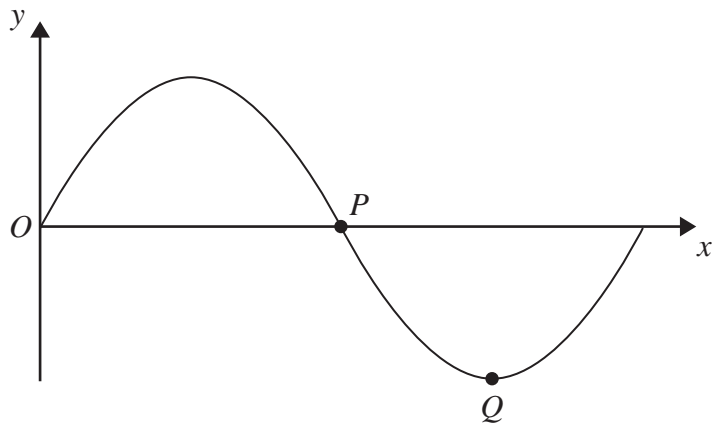
(b) Work out the value of $(\sqrt{2} + \sqrt{8})^2$

.....
(2)

(Total for Question 25 is 4 marks)



26 The diagram shows part of a sketch of the curve $y = \sin x^\circ$.



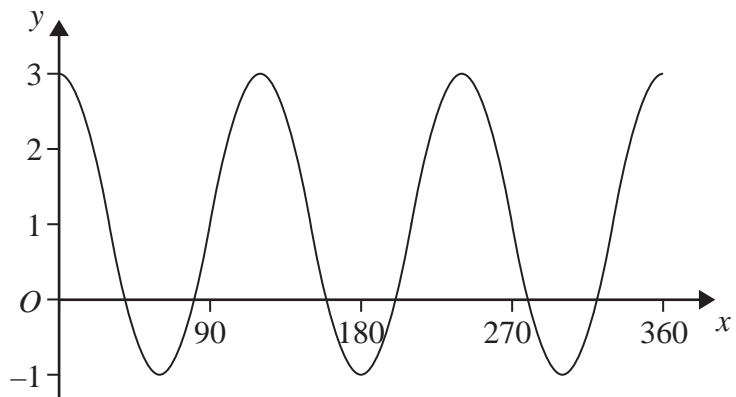
(a) Write down the coordinates of the point P .

(.....,)
(1)

(b) Write down the coordinates of the point Q .

(.....,)
(1)

Here is a sketch of the curve $y = a \cos bx^\circ + c$, $0 \leq x \leq 360$



(c) Find the values of a , b and c .

$a =$
 $b =$
 $c =$
(3)

(Total for Question 26 is 5 marks)

TOTAL FOR PAPER IS 100 MARKS

