



Cambridge IGCSE™

CANDIDATE
NAME

CENTRE
NUMBER

| | | | | |
|--|--|--|--|--|
| | | | | |
|--|--|--|--|--|

CANDIDATE
NUMBER

| | | | |
|--|--|--|--|
| | | | |
|--|--|--|--|



ADDITIONAL MATHEMATICS

0606/11

Paper 1

October/November 2023

2 hours

You must answer on the question paper.

No additional materials are needed.

INSTRUCTIONS

- Answer **all** questions.
- Use a black or dark blue pen. You may use an HB pencil for any diagrams or graphs.
- Write your name, centre number and candidate number in the boxes at the top of the page.
- Write your answer to each question in the space provided.
- Do **not** use an erasable pen or correction fluid.
- Do **not** write on any bar codes.
- You should use a calculator where appropriate.
- You must show all necessary working clearly; no marks will be given for unsupported answers from a calculator.
- Give non-exact numerical answers correct to 3 significant figures, or 1 decimal place for angles in degrees, unless a different level of accuracy is specified in the question.

INFORMATION

- The total mark for this paper is 80.
- The number of marks for each question or part question is shown in brackets [].

This document has **16** pages.

Mathematical Formulae**1. ALGEBRA***Quadratic Equation*

For the equation $ax^2 + bx + c = 0$,

$$x = \frac{-b \pm \sqrt{b^2 - 4ac}}{2a}$$

Binomial Theorem

$$(a + b)^n = a^n + \binom{n}{1}a^{n-1}b + \binom{n}{2}a^{n-2}b^2 + \dots + \binom{n}{r}a^{n-r}b^r + \dots + b^n$$

where n is a positive integer and $\binom{n}{r} = \frac{n!}{(n-r)!r!}$

Arithmetic series $u_n = a + (n-1)d$

$$S_n = \frac{1}{2}n(a+l) = \frac{1}{2}n\{2a + (n-1)d\}$$

Geometric series $u_n = ar^{n-1}$

$$S_n = \frac{a(1-r^n)}{1-r} \quad (r \neq 1)$$

$$S_\infty = \frac{a}{1-r} \quad (|r| < 1)$$

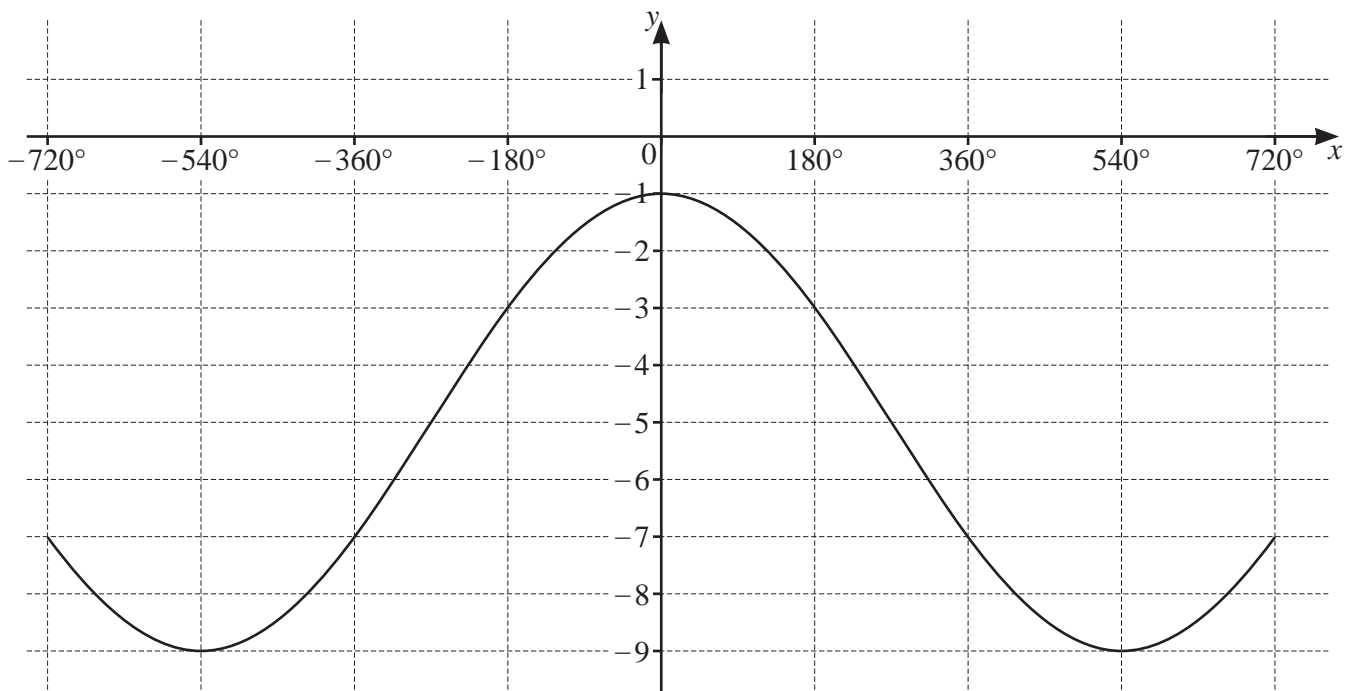
2. TRIGONOMETRY*Identities*

$$\begin{aligned} \sin^2 A + \cos^2 A &= 1 \\ \sec^2 A &= 1 + \tan^2 A \\ \operatorname{cosec}^2 A &= 1 + \cot^2 A \end{aligned}$$

Formulae for $\triangle ABC$

$$\begin{aligned} \frac{a}{\sin A} &= \frac{b}{\sin B} = \frac{c}{\sin C} \\ a^2 &= b^2 + c^2 - 2bc \cos A \\ \Delta &= \frac{1}{2}bc \sin A \end{aligned}$$

1



The diagram shows part of the graph of $y = a \cos\left(\frac{x}{b}\right) + c$, where a , b and c are integers. Find the values of a , b and c . [3]

4

2 The polynomial $P(x)$ is such that $P(x) = ax^3 - 11x^2 + bx + c$, where a , b and c are integers. $P(x)$ is divisible by x and has a remainder of $\frac{3}{2}$ when divided by $2x + 1$. It is also given that $P'(2) = 18$.

(a) Find the values of a , b and c . [6]

(b) Hence write $P(x)$ as a product of three linear factors. [2]

3 The point A has position vector $\begin{pmatrix} 2 \\ -6 \end{pmatrix}$. The point B has position vector $\begin{pmatrix} -3 \\ 6 \end{pmatrix}$.

(a) Find, in vector form, the displacement of B from A . [2]

(b) Find the distance AB . [1]

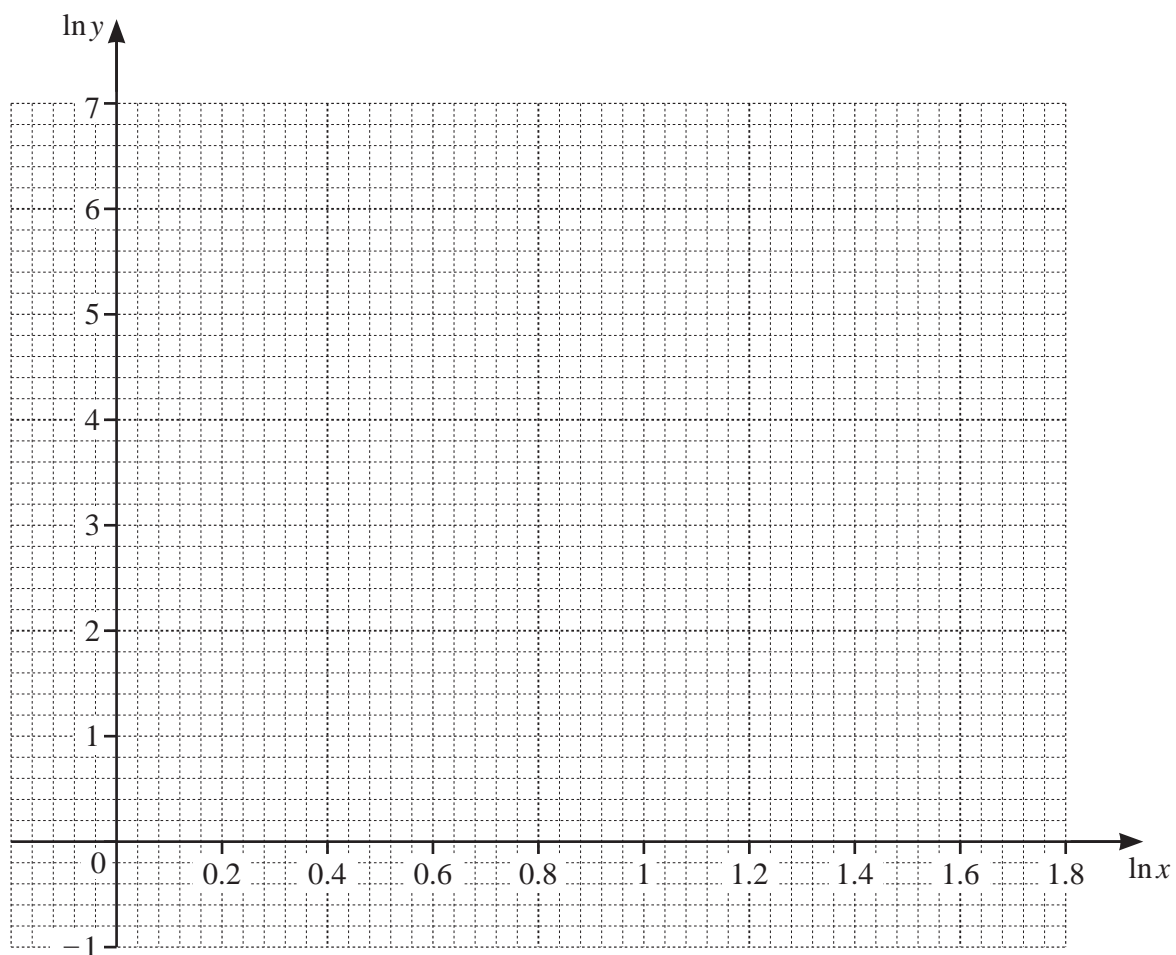
The point X is such that $3\overrightarrow{AB} = 2\overrightarrow{AX}$.

(c) Find the position vector of X . [2]

| | | | | | |
|-----|----|----|-----|-----|-----|
| x | 1 | 2 | 3 | 4 | 5 |
| y | 20 | 57 | 104 | 160 | 224 |

The table shows values of the variables x and y , which are related by the equation $y = Ax^b$, where A and b are constants.

- (a) Use the data to draw a straight line graph of $\ln y$ against $\ln x$. [3]



7

- (b) Use your graph to estimate the values of A and b . Give your answers correct to 2 significant figures. [4]

- (c) Use your graph to estimate the value of y when $x = 3.5$. [2]

8

- 5 (a)** A 4-digit code is to be formed from the digits 0, 1, 2, 3, 4, 5, 6, 7, 8 and 9. No digit may be used more than once in any code. A code may start with 0.
- (i)** Find how many codes can be formed. [1]
- (ii)** Find how many codes form an odd number. [1]
- (iii)** Find how many codes form a number greater than 1000. [2]
- (b)** A team of 9 people is to be chosen from a group of 15 people. The group includes a family of 4 people who must not be separated. Find the number of teams that can be chosen. [3]

6 (a) Write $3\lg x - \frac{1}{2}\lg 4 + 2$ as a single logarithm to base 10. [3]

(b) Solve the equation $2\log_a 4 - 3\log_4 a - 5 = 0$, giving your answers in exact form. [5]

10

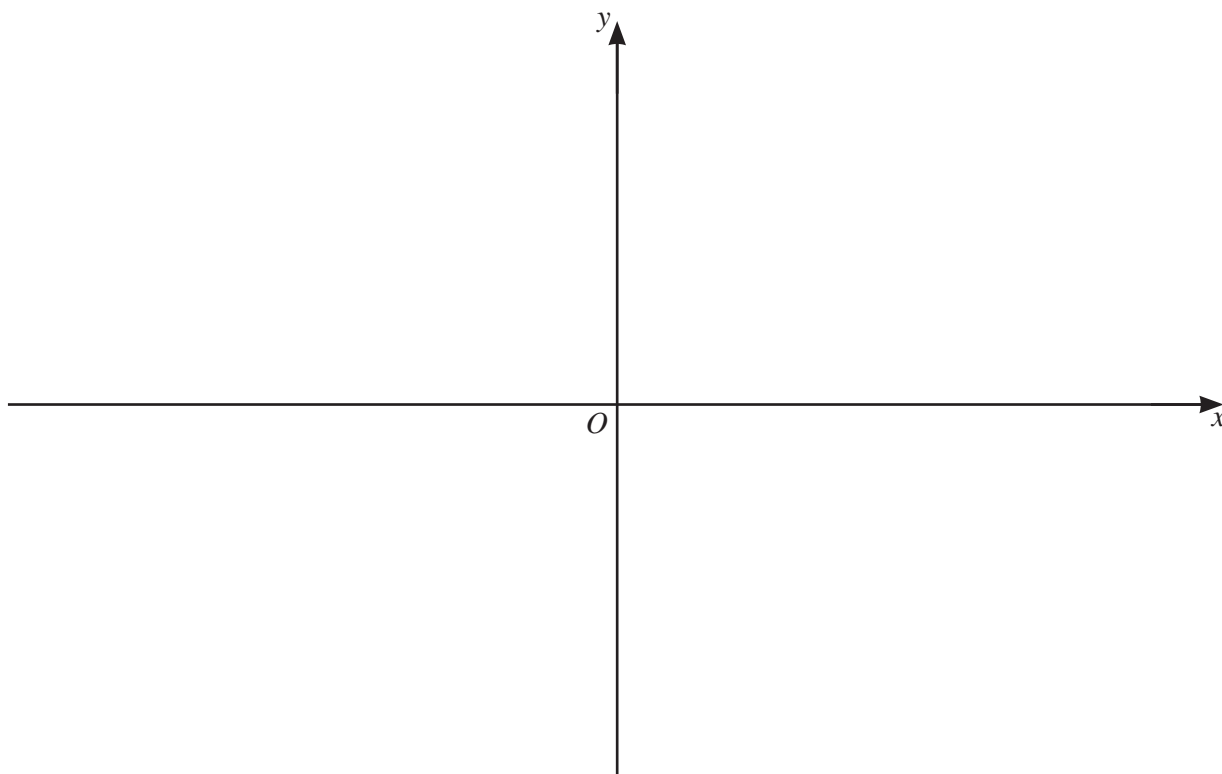
7 A curve has equation $y = f(x)$, where $f(x) = (2x+1)(3x-2)^2$.

(a) Show that $f'(x)$ can be written in the form $2(3x-2)(px+q)$, where p and q are integers. [3]

(b) Hence find the coordinates of the stationary points on the curve. [2]

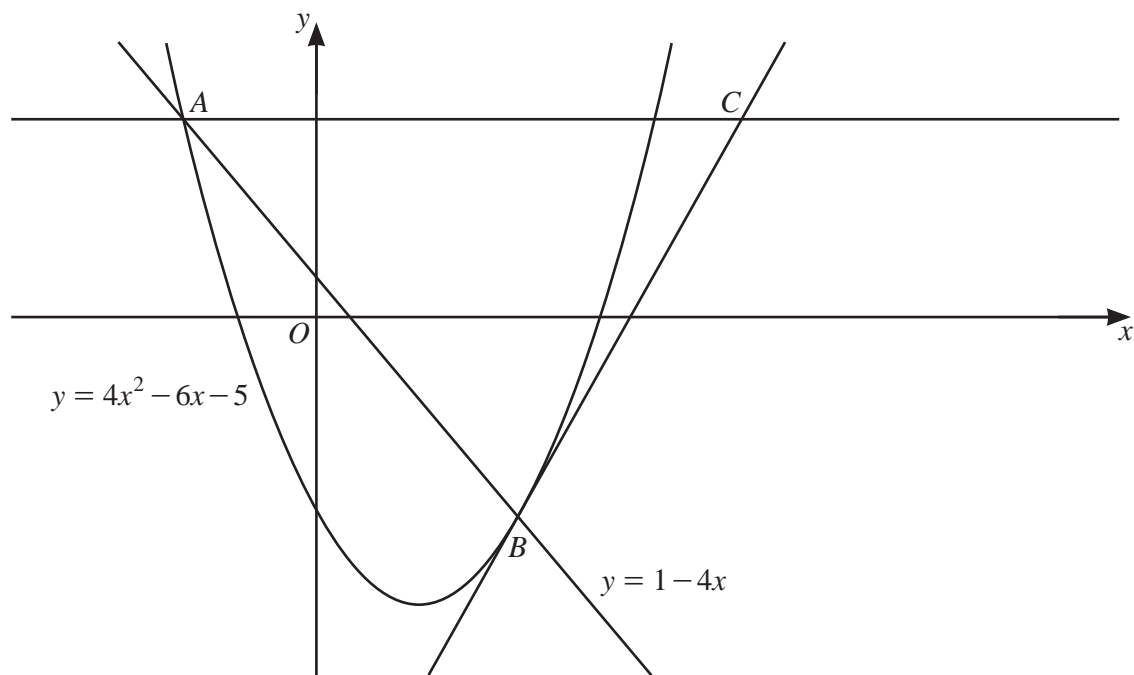
11

- (c) On the axes below, sketch the graph of $y = f(x)$, stating the intercepts with the coordinate axes. [3]



- (d) Find the values of k such that the equation $f(x) = k$ has 3 distinct solutions. [2]

8



The diagram shows the line $y = 1 - 4x$ meeting the curve $y = 4x^2 - 6x - 5$ at the points A and B . The tangent to the curve at B meets the horizontal line through A at the point C . Find the x -coordinate of C , giving your answer correct to 2 decimal places. [10]

Additional working space for Question 8.

9 (a) The first three terms of an arithmetic progression are $-3 \tan \frac{\theta}{2}$, $-\tan \frac{\theta}{2}$, $\tan \frac{\theta}{2}$, where $0 < \theta < \frac{\pi}{2}$.

(i) Given that the 12th term of this progression is equal to $\frac{19\sqrt{3}}{3}$, find the exact value of θ . [4]

(ii) Hence find the exact value of the sum to ten terms of this progression. [2]

- (b) The first three terms of a geometric progression are $\frac{1}{16}\operatorname{cosec}^4\phi$, $\frac{1}{4}\operatorname{cosec}^2\phi$, 1,
where $-\frac{\pi}{2} < \phi < \frac{\pi}{2}$.
- (i) Given that the sum of the 3rd and 4th terms of this progression is equal to 4, find the possible values of ϕ . [4]

- (ii) Determine whether or not this progression has a sum to infinity. [2]

Question 10 is printed on the next page.

- 10 (a) Given that $y = \frac{\sqrt{3x^2 - 2}}{x - 4}$, show that $\frac{dy}{dx}$ can be written in the form $\frac{Ax + B}{(x - 4)^2 \sqrt{3x^2 - 2}}$, where A and B are integers to be found. [5]

- (b) Hence find, in terms of h , the approximate change in y when x increases from 3 to $3 + h$, where h is small. [3]

Permission to reproduce items where third-party owned material protected by copyright is included has been sought and cleared where possible. Every reasonable effort has been made by the publisher (UCLES) to trace copyright holders, but if any items requiring clearance have unwittingly been included, the publisher will be pleased to make amends at the earliest possible opportunity.

To avoid the issue of disclosure of answer-related information to candidates, all copyright acknowledgements are reproduced online in the Cambridge Assessment International Education Copyright Acknowledgements Booklet. This is produced for each series of examinations and is freely available to download at www.cambridgeinternational.org after the live examination series.

Cambridge Assessment International Education is part of Cambridge Assessment. Cambridge Assessment is the brand name of the University of Cambridge Local Examinations Syndicate (UCLES), which is a department of the University of Cambridge.