



Please write clearly in block capitals.

Centre number

--	--	--	--	--

Candidate number

--	--	--	--

Surname

---

Forename(s)

---

Candidate signature

---

# GCSE MATHEMATICS (LINEAR)

# F

Foundation Tier Paper 2

Thursday 9 June 2016

Morning

Time allowed: 1 hour 45 minutes

## Materials

For this paper you must have:

- a calculator
- mathematical instruments.



## Instructions

- Use black ink or black ball-point pen. Draw diagrams in pencil.
- Answer **all** questions.
- You must answer the questions in the spaces provided. Do not write outside the box around each page or on blank pages.
- Do all rough work in this book.

## Information

- The marks for questions are shown in brackets.
- The maximum mark for this paper is 105.
- The quality of your written communication is specifically assessed in Questions 4, 17 and 22. These questions are indicated with an asterisk (\*).
- You may ask for more answer paper, graph paper and tracing paper. These must be tagged securely to this answer book.

## Advice

- In all calculations, show clearly how you work out your answer.



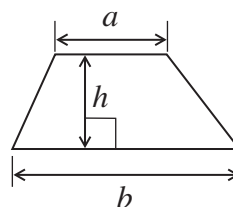
J U N 1 6 4 3 6 5 2 F 0 1

WMP/Jun16/E6

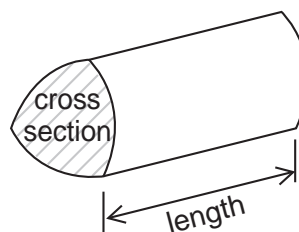
**4365/2F**

**Formulae Sheet: Foundation Tier**

**Area of trapezium** =  $\frac{1}{2}(a+b)h$



**Volume of prism** = area of cross section  $\times$  length



Answer **all** questions in the spaces provided.

**1 (a)** Circle the multiple of 9

4.5      19      36      42      60

[1 mark]

**1 (b)** Circle the factor of 76

4      6      8      24      152

[1 mark]

**1 (c)** Circle the cube number.

4      16      30      81      1000

[1 mark]

**Turn over for the next question**



**2 (a)** Here are some letter cards.



Here is a list of words that describe chance.

impossible      unlikely      evens      likely      certain

A card is picked at random.


Choose **one** word from the list to describe each sentence.

**[2 marks]**

The card has a letter T on it. \_\_\_\_\_

The card has a letter W on it. \_\_\_\_\_

**2 (b)** Here are seven blank cards.



Write a letter on each card so that when picking a card at random,


B is likely

**and** D has twice the chance of being picked as C.

**[2 marks]**



**2 (c)** Here are five blank cards.



Write the number 2, 3 or 4 on each card so that when picking a card at random,

4 has the greatest chance of being picked but is **not** certain

**and** 2 and 3 have the same chance of being picked.

**[2 marks]**

**Turn over for the next question**



**3 (a)** 30 men and 10 women choose one activity from fishing, walking and climbing.

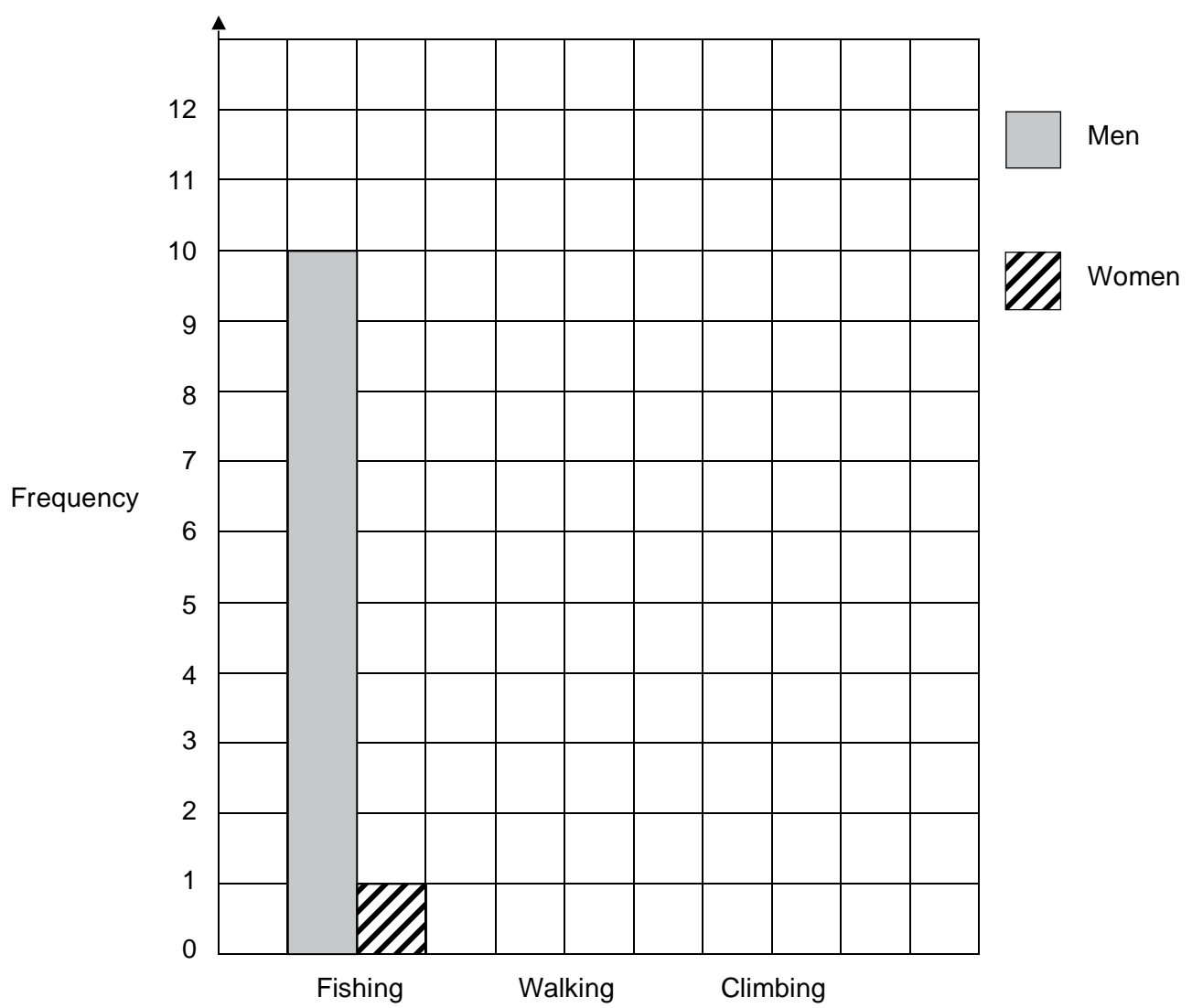
10 men choose fishing.

1 woman chooses fishing.

12 men choose walking.

2 more men than women choose climbing.

Complete the dual bar chart.



**[3 marks]**



3 (b) 38 children choose a sport.

Sport	Football	Hockey	Tennis
Number of children	24	10	4

For each sport a **minimum** of 1 adult for every 8 children is needed.

Work out the **minimum** number of adults needed in total.  
Put your answers in the table.

[3 marks]

Sport	Football	Hockey	Tennis	Total
Number of children	24	10	4	38
Minimum number of adults needed				

Turn over for the next question



**4** Jack's normal pay is £10.50 per hour.

**\*4 (a)** Work out his pay for working 35 hours.

**[2 marks]**

---

Answer £ \_\_\_\_\_

**4 (b)** On Saturday, his pay per hour is £5.25 **more** than his normal pay of £10.50

How much is he paid for working 4 hours on Saturday?

**[2 marks]**

---

---

---

Answer £ \_\_\_\_\_





**4 (c)** Another week he  
works 28 hours at normal pay  
**and** works on Saturday.

His total pay for the week is £372.75

How many hours does he work on Saturday?

**[3 marks]**

---

---

---

---

---

---

---

Answer \_\_\_\_\_ hours

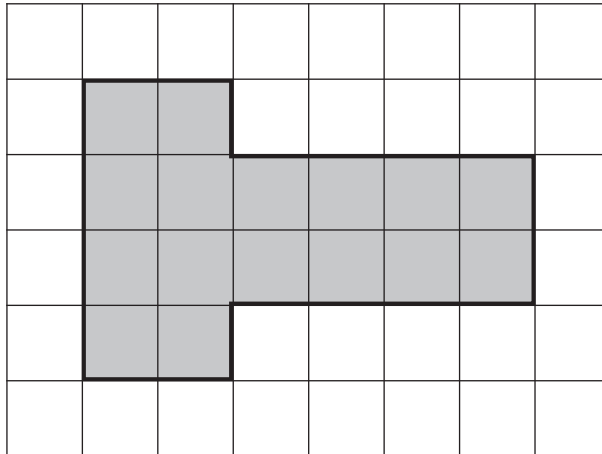
**Turn over for the next question**

7

**Turn over ►**



- 5 (a) The diagram shows a shape on a centimetre grid.



Work out the area of the shape.  
State the units of your answer.

[2 marks]

Answer \_\_\_\_\_

- 5 (b) Tick any statements that are true for the shape in part (a).

[2 marks]

The shape covers **less** than one-third of the grid.

The shape covers **exactly** one-third of the grid.

The shape covers **more** than one-third of the grid.

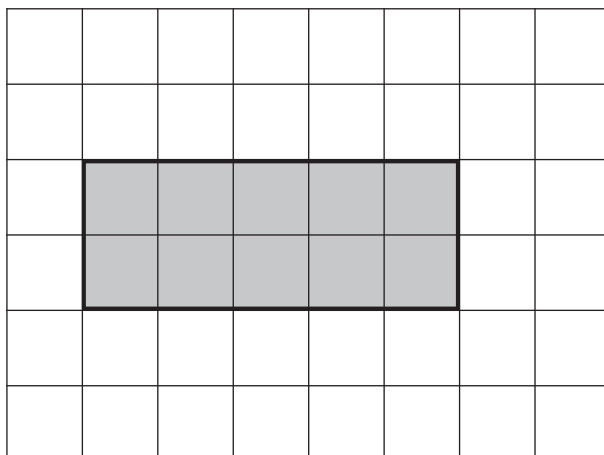
The shape covers **less** than one-half of the grid.

The shape covers **exactly** one-half of the grid.

The shape covers **more** than one-half of the grid.



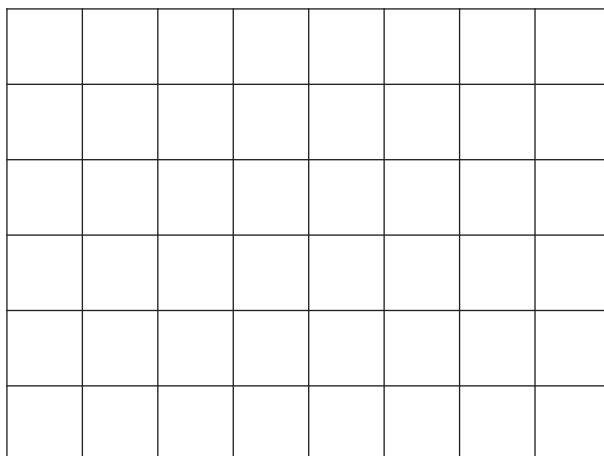
5 (c) On this centimetre grid, a rectangle is shown.



On the centimetre grid below, draw a different rectangle  
with the **same** perimeter and a **smaller** area.

Use whole squares only.

[2 marks]



- 6 (a)** Ali is paid £20 000 a year.  
He saves three-eighths of this amount.

How much does he save?

**[2 marks]**

---

---

Answer £ \_\_\_\_\_

- 6 (b)** Belle is paid £32 000 a year.  
Her rent is £6000

Write the rent as a percentage of her pay.

**[2 marks]**

---

---

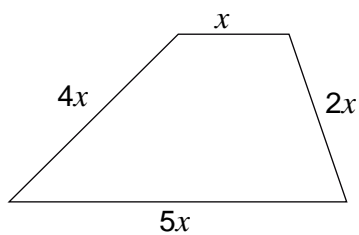
---

Answer \_\_\_\_\_ %



- 7 The diagram shows a trapezium.  
All sides are measured in centimetres.

Not drawn accurately



Work out the total length of the sides when  $x = 2.5$  cm

[2 marks]

---

---

---

---

Answer \_\_\_\_\_ cm

Turn over for the next question



- 8 (a)** Work out  $10 \text{ km} + 1.5 \text{ km} + 500 \text{ m}$   
Give your answer in metres.

**[2 marks]**

---

---

---

---

Answer \_\_\_\_\_ metres

- 8 (b)** How many 125 millimetre glasses can be filled from a 2 litre bottle of water?

**[2 marks]**

---

---

Answer \_\_\_\_\_

- 8 (c)** Use  $5 \text{ miles} = 8 \text{ km}$  to show that 240 miles is approximately 380 km

**[2 marks]**

---

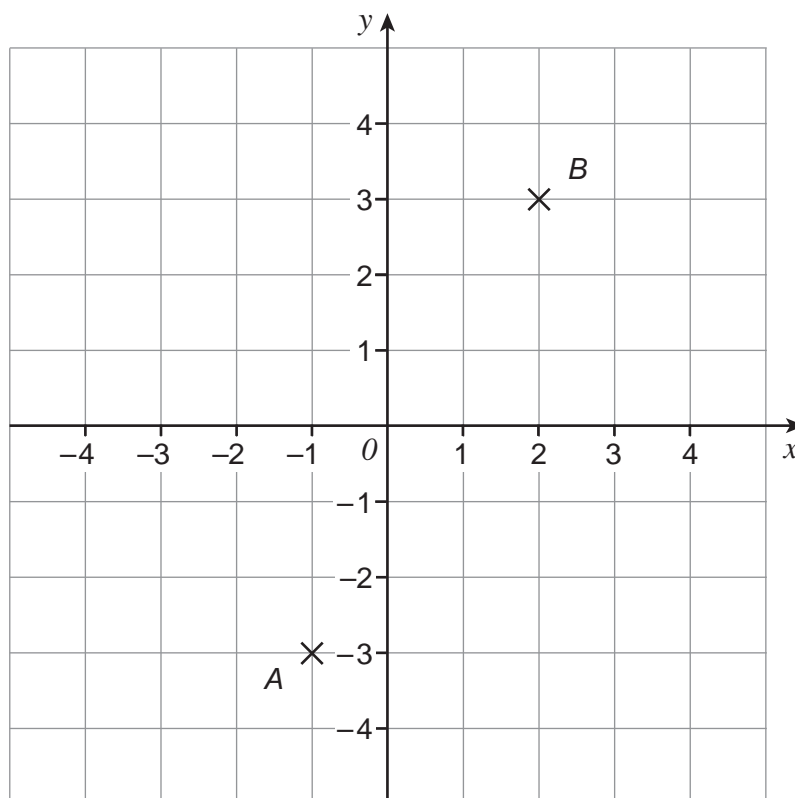
---

---

---



- 9 Points  $A$  and  $B$  are plotted on the centimetre grid.



- 9 (a) Write down the coordinates of  $A$ .

[1 mark]

Answer ( \_\_\_\_\_ , \_\_\_\_\_ )

- 9 (b)  $C$  is a point on the grid.  
The coordinates of  $C$  are integers.

$$AC = 3 \text{ cm} \quad \text{and} \quad BC = 6 \text{ cm}$$

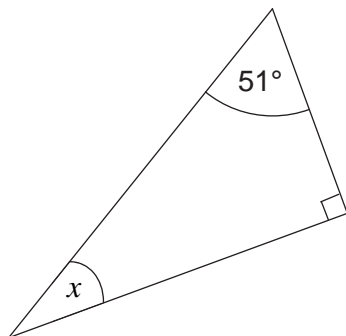
Work out the coordinates of  $C$ .

[2 marks]

Answer ( \_\_\_\_\_ , \_\_\_\_\_ )



10 (a)



Not drawn accurately

Work out the size of angle  $x$ .

[1 mark]

---

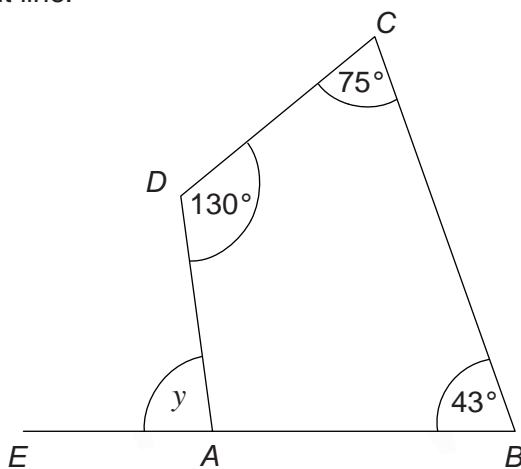


---

Answer \_\_\_\_\_ degrees

10 (b)

$ABCD$  is a quadrilateral.  
 $EAB$  is a straight line.



Not drawn accurately

Work out the size of angle  $y$ .

[2 marks]

---



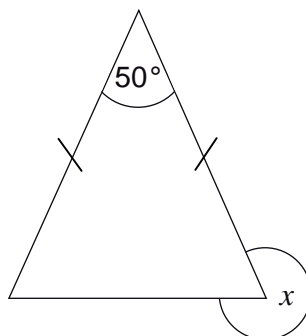
---

Answer \_\_\_\_\_ degrees





- 10 (c) The diagram shows an isosceles triangle.



Not drawn accurately

Work out the size of angle  $x$ .

[3 marks]

---

---

---

Answer \_\_\_\_\_ degrees

- 11 (a) Simplify  $5a + 4b - 2a + b$

[2 marks]

---

Answer \_\_\_\_\_

- 11 (b) Solve  $4x - 7 = 9$

[2 marks]

---

$x =$  \_\_\_\_\_



12 Here is a menu.

Menu	
Starter	Main course
Soup	Curry
Melon	Burger
Paté	

Sarah wants to have one starter and one main course.

List **all** the different choices she can have.

**[2 marks]**



- 13 (a)** Work out the value of  $8.2^3$   
Give your answer to 1 decimal place.

[2 marks]

---

Answer \_\_\_\_\_

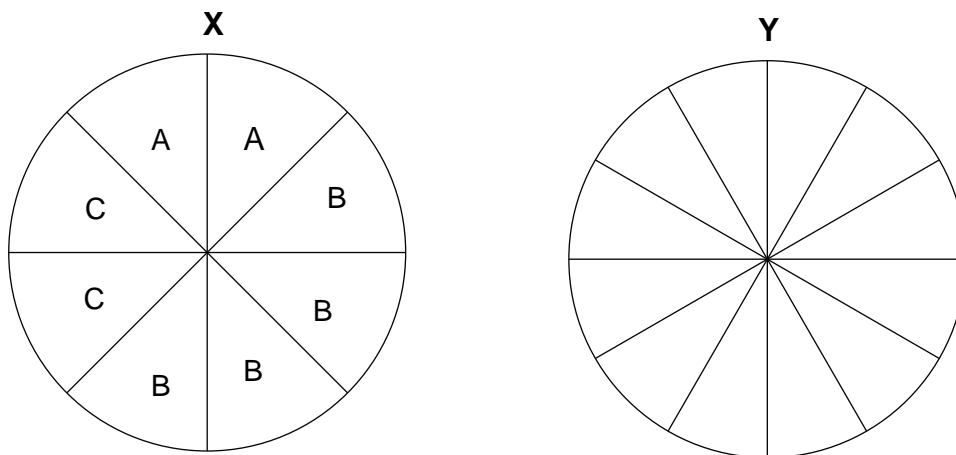
- 13 (b)** Work out the value of  $\frac{\sqrt{6.76}}{2.5}$

[1 mark]

---

Answer \_\_\_\_\_

- 14** Here are two fair spinners X and Y.



Put the letter A, B or C on each section of spinner Y so that the probability of landing on each letter is the same for each spinner.

[2 marks]

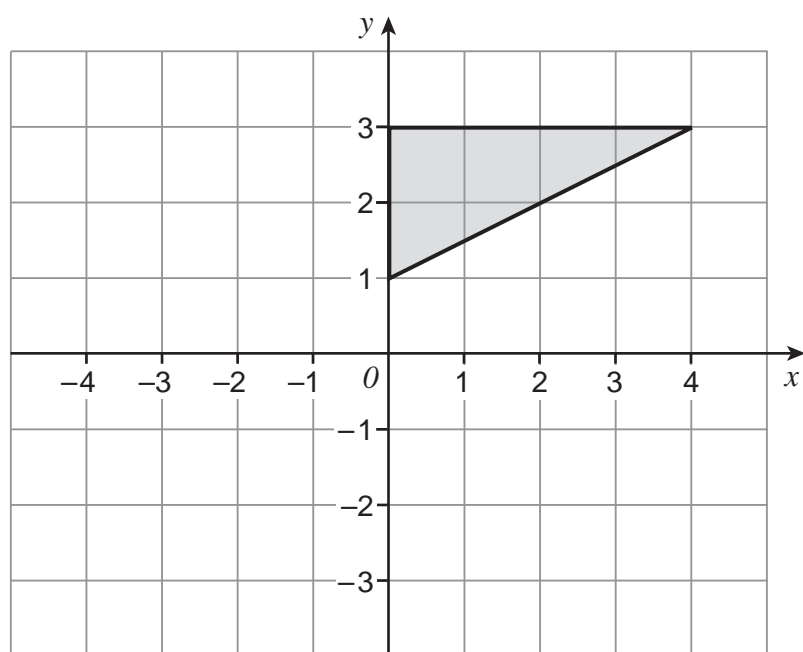
7
---

Turn over ►



15 (a) Reflect this triangle in the  $x$ -axis.

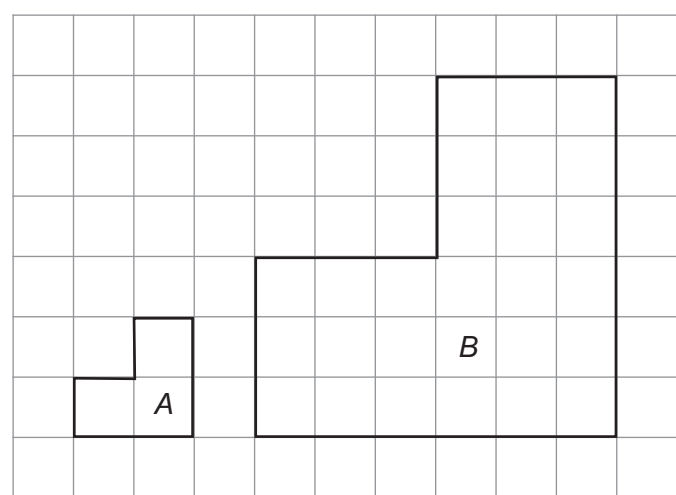
[1 mark]



15 (b) Shape  $B$  is an enlargement of shape  $A$ .

Write down the scale factor of the enlargement.

[1 mark]




Answer \_\_\_\_\_



16

Sam played in 15 hockey matches.  
The stem-and-leaf diagram shows the time he played in each match.

Key: 2 | 5 represents 25 minutes



The table shows information about the number of goals that Sam scored.

<b>Number of minutes Sam played in a match</b>	less than 30	30 to 45	more than 45
<b>Average number of goals Sam scored in each match</b>	0	1	2

Work out the number of goals that Sam scored in the 15 matches.

**[3 marks]**

---



---



---



---

Answer \_\_\_\_\_

5
---

Turn over ►



**\*17 (a)** Alice wants to book a holiday for one adult and one child.

<p style="text-align: center;"><b>Holiday</b></p> <p style="text-align: center;">£720 per adult</p> <p style="text-align: center;">£430 per child</p> <p style="text-align: center;"><b>Special Offer</b> 15% off</p>
---

Alice has £1000

Does she have enough money to book this holiday using the special offer?  
Tick a box.

Yes

No

You **must** show your working.

**[5 marks]**

---

---

---

---

---

---

---

---



**17 (b)** Ben changes £800 to Euros before he goes on holiday.  
£1 = 1.25 Euro

He spends 895 Euros.

He changes the Euros that he has left to Pounds (£).  
The exchange rate is now £1 = 1.40 Euro

How many Pounds does he get back?

**[4 marks]**

---

---

---

---

---

---

---

Answer £ \_\_\_\_\_

**Turn over for the next question**



**18** Here are the ingredients to make 8 biscuits.

75 g	flour
50 g	sugar
40 g	butter
2	egg yolks

Work out the ingredients to make 20 biscuits.

**[3 marks]**

---

---

---

\_\_\_\_\_ g flour

\_\_\_\_\_ g sugar

\_\_\_\_\_ g butter

\_\_\_\_\_ egg yolks





- 19 This formula converts degrees Celsius ( $C$ ) to degrees Fahrenheit ( $F$ ).

$$F = \frac{9}{5}C + 32$$

Use the formula to convert  $28^{\circ}\text{C}$  to  $^{\circ}\text{F}$   
Give your answer to the nearest whole number.

[3 marks]

---

---

---

Answer \_\_\_\_\_  $^{\circ}\text{F}$

Turn over for the next question



**20 (a)** The  $n$ th term of a sequence is  $6 - 2n$

Work out the first three terms of the sequence.

**[2 marks]**

---

---

Answer \_\_\_\_\_ , \_\_\_\_\_ , \_\_\_\_\_

**20 (b)** Here is the term-to-term rule for a different sequence.

Multiply previous term by 2 and then subtract 3

The third term in this sequence is 31

Work out the **first** term.

**[3 marks]**

---

---

---

---

---

---

Answer \_\_\_\_\_



- 21** The table shows information about the pay per hour of 40 people.

Pay per hour, $x$ (£)	Frequency		
$5 < x \leq 15$	14		
$15 < x \leq 25$	12		
$25 < x \leq 35$	11		
$35 < x \leq 45$	2		
$45 < x \leq 55$	1		
	Total = 40		

- 21 (a)** Which group contains the median pay per hour?  
Circle your answer.

[1 mark]

$5 < x \leq 15$        $15 < x \leq 25$        $25 < x \leq 35$        $35 < x \leq 45$        $45 < x \leq 55$

- 21 (b)** Work out an estimate of the mean pay per hour.

[4 marks]

---



---



---

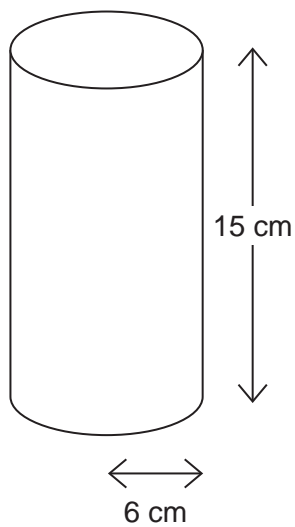


---

Answer £ \_\_\_\_\_



22 (a) The diagram shows a cylinder.



The radius of the base is 6 cm

The height is 15 cm

Work out the volume.

[3 marks]

---

---

---

Answer \_\_\_\_\_  $\text{cm}^3$



**\*22 (b)**  $1000 \text{ cm}^3 = 1 \text{ litre}$

A tank contains  $45\,000 \text{ cm}^3$  of water.  
The tank leaks at  $0.75 \text{ litres/minute}$ .

How long does the tank take to empty?

**[4 marks]**

---

---

---

---

---

---

---

Answer \_\_\_\_\_

**Turn over for the next question**

7
---

**Turn over ►**



**23** A baker makes 130 loaves so that there are  
6 times as many white loaves as granary loaves  
half as many brown loaves as white loaves.

How many of each type does he make?

**[3 marks]**

---

---

---

---

---

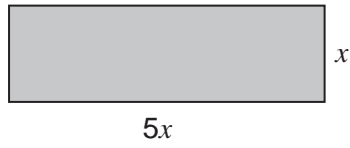
White \_\_\_\_\_

Brown \_\_\_\_\_

Granary \_\_\_\_\_

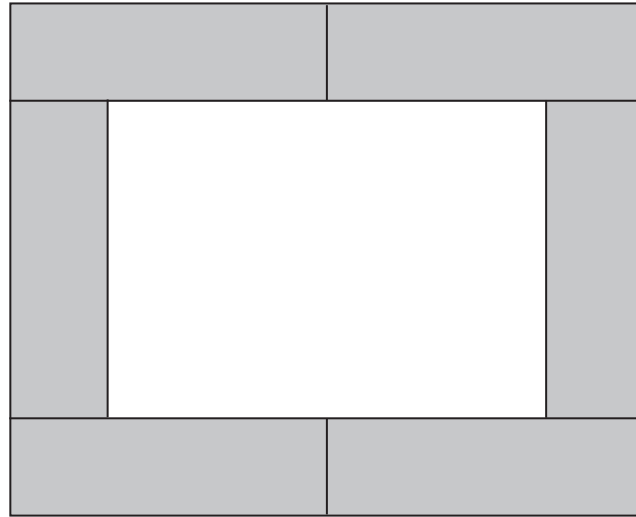


24 The diagram shows a rectangle.



Not drawn accurately

Six of these rectangles are joined to make this shape.



The area of the white rectangle in the middle is  $1440 \text{ cm}^2$

Work out the area of **one** shaded rectangle.

[5 marks]

---

---

---

---

---

---

---

---

Answer \_\_\_\_\_  $\text{cm}^2$

**END OF QUESTIONS**



**There are no questions printed on this page**

**DO NOT WRITE ON THIS PAGE  
ANSWER IN THE SPACES PROVIDED**

**Copyright Information**

For confidentiality purposes, from the November 2015 examination series, acknowledgements of third party copyright material will be published in a separate booklet rather than including them on the examination paper or support materials. This booklet is published after each examination series and is available for free download from [www.aqa.org.uk](http://www.aqa.org.uk) after the live examination series.

Permission to reproduce all copyright material has been applied for. In some cases, efforts to contact copyright-holders may have been unsuccessful and AQA will be happy to rectify any omissions of acknowledgements. If you have any queries please contact the Copyright Team, AQA, Stag Hill House, Guildford, GU2 7XJ.

Copyright © 2016 AQA and its licensors. All rights reserved.

