

Centre Number						Candidate Number				
Surname										
Other Names										
Candidate Signature										



General Certificate of Secondary Education
Higher Tier
June 2015

Mathematics

43602H

Unit 2

Thursday 4 June 2015 9.00 am to 10.15 am

H

<p>For this paper you must have:</p> <ul style="list-style-type: none"> mathematical instruments. <p>You must not use a calculator.</p>	
--	--

For Examiner's Use	
Examiner's Initials	
Pages	Mark
2 – 3	
4 – 5	
6 – 7	
8 – 9	
10 – 11	
12 – 13	
14 – 15	
16 – 17	
TOTAL	

Time allowed

- 1 hour 15 minutes

Instructions

- Use black ink or black ball-point pen. Draw diagrams in pencil.
- Fill in the boxes at the top of this page.
- Answer **all** questions.
- You must answer the questions in the spaces provided. Do not write outside the box around each page or on blank pages.
- Do all rough work in this book.

Information

- The marks for questions are shown in brackets.
- The maximum mark for this paper is 66.
- The quality of your written communication is specifically assessed in Questions 5 and 14. These questions are indicated with an asterisk (*).
- You may ask for more answer paper and graph paper. These must be tagged securely to this answer book.

Advice

- In all calculations, show clearly how you work out your answer.



Answer **all** questions in the spaces provided.

1



Bag A



Bag B

Bag A contains £7.20 in 20p coins.

Bag B contains only 5p coins.

The number of coins in bag B is three-quarters of the number of coins in bag A.

How much money is in bag B?

[4 marks]

.....

.....

.....

.....

.....

.....

.....

.....

.....

.....

.....

Answer £



2 The table shows information about grocery items.

	Small	Medium	Large
Bag of apples	–	495 grams	795 grams
Tin of fish	195 grams	285 grams	–
Packet of nuts	37 grams	57 grams	87 grams

Use approximations to estimate the **total** amount these items weigh.

- 2 large bags of apples
- 1 small tin of fish
- 2 medium packets of nuts

You **must** show your working.

[3 marks]

.....

.....

.....

.....

.....

Answer grams

Turn over for the next question

7

Turn over ►



3 $x + y = 100$

x is a square number.
 y is a prime number.

Work out the values of x and y .

[2 marks]

.....

.....

.....

.....

$x = \dots\dots\dots y = \dots\dots\dots$

4 Solve $5x - 6 = 3x + 7$

[3 marks]

.....

.....

.....

.....

.....

$x = \dots\dots\dots$



- *5 (a)** Write 200 as the product of prime factors.
Give your answer in index form.

[3 marks]

Answer

- 5 (b)** Circle the **two pairs** of numbers that have

Highest Common Factor (HCF) 4

and

Least Common Multiple (LCM) 60

[2 marks]

4 and 60

4 and 30

4 and 12

12 and 30

12 and 20

10

Turn over ►



6 The cash price for a boiler is £2000
Customers can pay the cash price or pay monthly.

<p style="text-align: center;">Cash Price £2000</p>
--

<p style="text-align: center;">Pay Monthly 60 monthly payments of £40</p>
--

Work out the percentage increase from the cash price when paying monthly.

[4 marks]

.....

.....

.....

.....

.....

.....

.....

.....

.....

.....

Answer %



7 Work out **all** the integers that satisfy the inequality $8 < 2n \leq 16$ **[2 marks]**

.....

.....

.....

Answer

8 (a) Work out the value of $8^1 + 8^0$ **[2 marks]**

.....

Answer

8 (b) Write $6^{10} \div 6^2$ as a single power of 6 **[1 mark]**

.....

Answer

8 (c) Simplify fully $5x^3y^2 \times 3x^4y^3$ **[2 marks]**

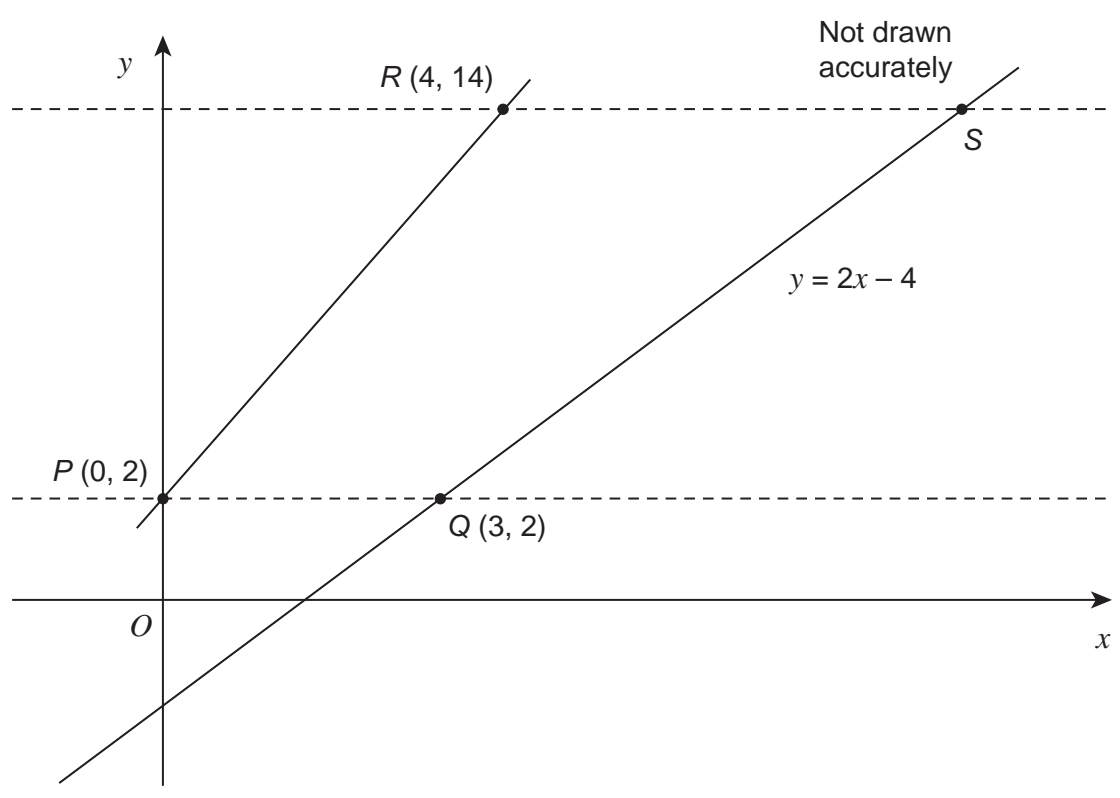
.....

.....

Answer



9 The two dashed lines are both parallel to the x axis.



9 (a) Circle the equation of line PR .

[1 mark]

$y = 2x + 2$

$y = 3x + 2$

$y = 4x + 2$

$y = 3.5x + 2$

9 (b) The equation of line QS is $y = 2x - 4$

Work out the ratio of lengths $PQ : RS$

[3 marks]

.....

.....

.....

.....

.....

Answer :



10

A pop concert has a crowd of 2000 people rounded to 1 significant figure.

A rock concert has a crowd of 2000 people rounded to 2 significant figures.

Work out the largest possible difference between the exact numbers of the two crowds.

[3 marks]

.....

.....

.....

.....

.....

Answer

Turn over for the next question

7

Turn over ►



11 (a) Expand and simplify $(x + 5)(x + 9)$

[2 marks]

.....

.....

.....

Answer

11 (b) Factorise fully $5x^2 - 10xy$

[2 marks]

.....

.....

Answer

12 Factorise $9a^2 - b^2$

[2 marks]

.....

.....

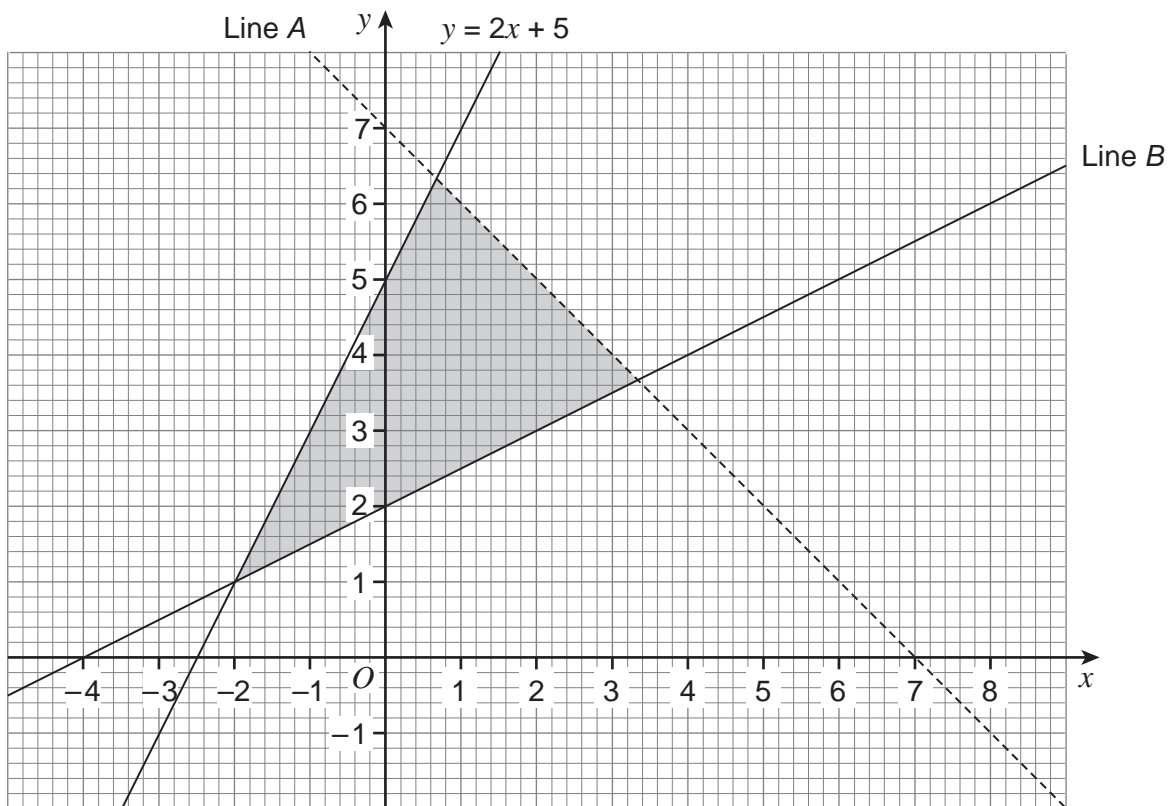
.....

Answer



13 Points in the shaded region satisfy three inequalities.

One of the inequalities is $y \leq 2x + 5$



13 (a) Circle the inequality with boundary line A.

[1 mark]

$x + y \geq 7$

$x + y < 7$

$x + y \leq 7$

$x + y > 7$

13 (b) Circle the inequality with boundary line B.

[1 mark]

$2y \geq x + 4$

$2y \leq x + 4$

$y \geq x + 2$

$y \leq x + 2$



***14 (a)** Show that $\frac{4}{9}$ is equivalent to $0.\dot{4}$

[1 mark]

.....

.....

.....

.....

.....

.....

14 (b) Using part (a), or otherwise, write $0.9\dot{4}$ as a fraction.

[2 marks]

.....

.....

.....

.....

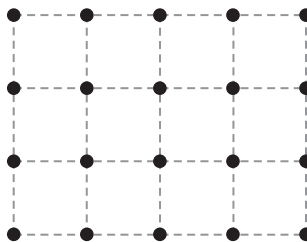
.....

.....

Answer



15 A 4×3 grid has 20 dots as shown.



15 (a) How many dots does an 8×6 grid have?

[1 mark]

.....

Answer

15 (b) How many dots does a $4 \times y$ grid have?

[1 mark]

.....

Answer

15 (c) How many dots does an $x \times y$ grid have?

[1 mark]

.....

Answer

15 (d) How many dots does a $2x \times y$ grid have?

[1 mark]

.....

Answer

7

Turn over ►



16

Make y the subject of

$$x = \frac{5y + 4}{2y - 3}$$

[4 marks]

.....

.....

.....

.....

.....

.....

.....

.....

.....

.....

Answer



17 $(3x - 1)(ax + b) \equiv 12x^2 - 19x + c$

Work out the values of a , b and c .

[4 marks]

.....

.....

.....

.....

.....

.....

.....

.....

$a = \dots\dots\dots b = \dots\dots\dots c = \dots\dots\dots$

Turn over for the next question

8

Turn over ►



18 (a) Simplify fully $\sqrt{72}$

Circle your answer.

[1 mark]

$36\sqrt{2}$

$3\sqrt{8}$

$6\sqrt{2}$

$2\sqrt{18}$

18 (b) Given that $p = \sqrt{3}$ $q = \sqrt{8}$ and $r = \sqrt{6}$

work out the value of $\frac{pq}{r}$

[2 marks]

.....

.....

.....

.....

.....

Answer



There are no questions printed on this page

**DO NOT WRITE ON THIS PAGE
ANSWER IN THE SPACES PROVIDED**



There are no questions printed on this page

**DO NOT WRITE ON THIS PAGE
ANSWER IN THE SPACES PROVIDED**



There are no questions printed on this page

**DO NOT WRITE ON THIS PAGE
ANSWER IN THE SPACES PROVIDED**

Copyright © 2015 AQA and its licensors. All rights reserved.

