

Solutionbank S1

Edexcel AS and A Level Modular Mathematics

Correlation

Exercise A, Question 1

Question:

The following scatter diagrams were drawn.



a Describe the type of correlation shown by each scatter diagram.

b Interpret each correlation.

Solution:

a i) no correlation – points in all four quadrants

ii) negative correlation – most points in second and fourth quadrant

iii) positive correlation – most points in first and third quadrant.

b i) There is no association between height and intelligence

ii) As age increases price decreases

iii) As length increases breadth increases

Solutionbank S1

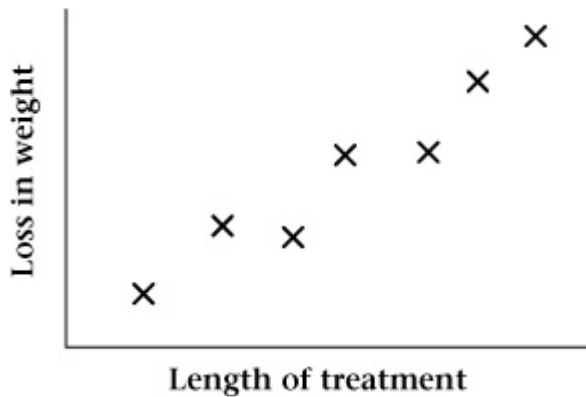
Edexcel AS and A Level Modular Mathematics

Correlation

Exercise A, Question 2

Question:

Some research was done into the effectiveness of a weight reducing drug. Seven people recorded their weight loss and this was compared with the length of time for which they had been treated. A scatter diagram was drawn to represent these data.



a Describe the type of correlation shown by the scatter diagram.

b Interpret the correlation in context.

Solution:

a Positive correlation.

b The longer the treatment the greater the loss of weight.

Solutionbank S1

Edexcel AS and A Level Modular Mathematics

Correlation

Exercise A, Question 3

Question:

Eight metal ingots were chosen at random and measurements were made of their breaking strength (x) and their hardness (y). The results are shown in the table below.

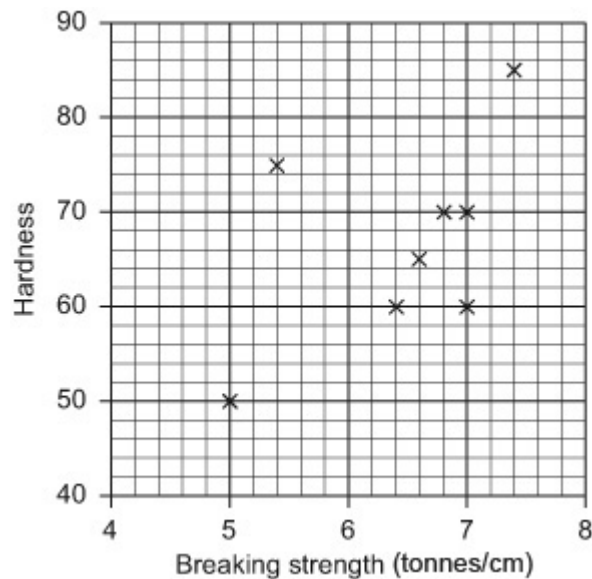
x (tonne/cm)	5	7	7.4	6.8	5.4	7	6.6	6.4
y (hardness units)	50	70	85	70	75	60	65	60

a Draw a scatter diagram to represent these data.

b Describe and interpret the correlation between the variables 'hardness' and 'breaking strength'.

Solution:

a



b There is positive correlation between hardness and breaking strength, but it is not very strong. There is some reason to believe that as breaking strength increases so does hardness.

Solutionbank S1

Edexcel AS and A Level Modular Mathematics

Correlation

Exercise A, Question 4

Question:

For each of the following data sets plot a scatter diagram, and then describe the correlation.

a

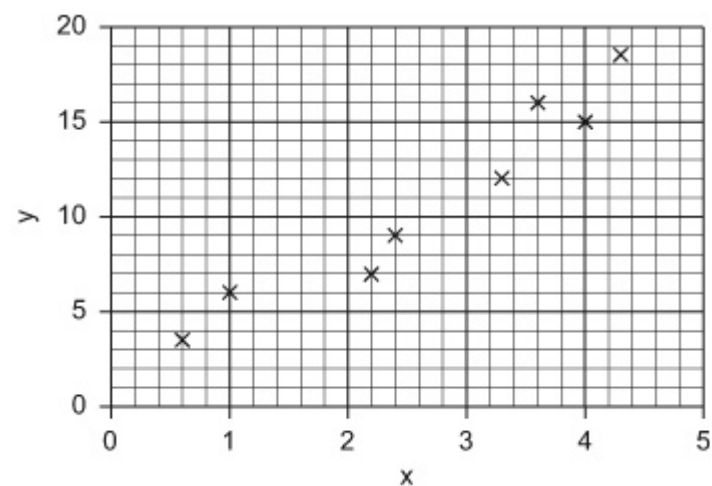
x	1	2.4	3.6	2.2	4.3	3.3	4.0	0.6
y	6.0	9.0	15.8	7.1	18.6	12.1	15.0	3.7

b

x	123	160	285	210	150	240	280	115	180
y	75	70	50	65	70	55	50	80	70

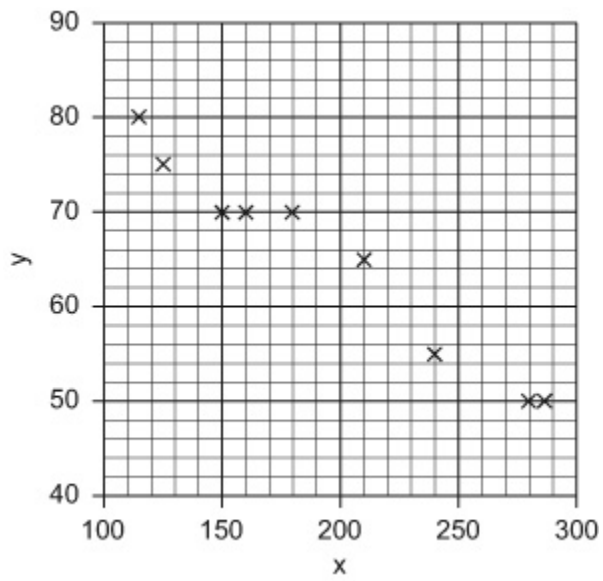
Solution:

a



The correlation is positive

b



The correlation is negative

© Pearson Education Ltd 2008

Solutionbank S1

Edexcel AS and A Level Modular Mathematics

Correlation

Exercise A, Question 5

Question:

The table shows the armspan, in cm, and the height, in cm, of 10 adult men.

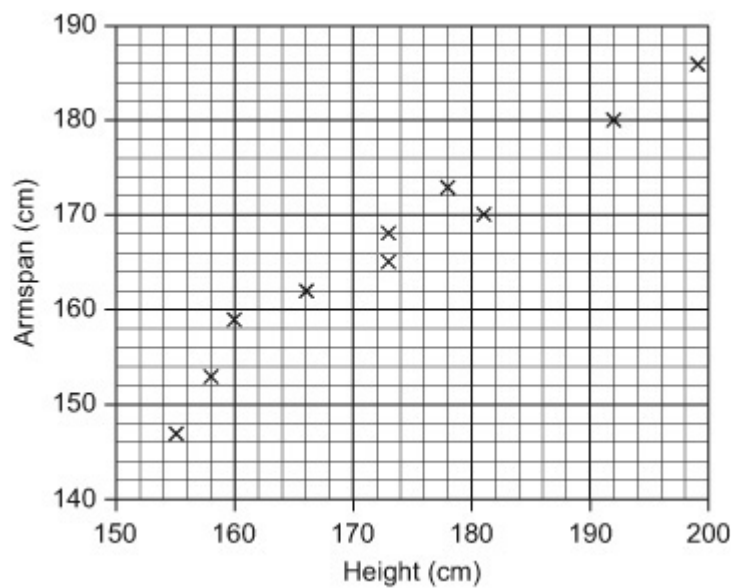
Height x (cm)	155	160	173	192	181	178	199	166	158	173
Armspan y (cm)	147	159	168	180	170	173	186	162	153	168

a Draw a scatter diagram to represent these data.

b Describe and interpret the correlation between the two variables 'height' and 'armspan'.

Solution:

a



b It is positive correlation.

As height increases arm-span increases.

Solutionbank S1

Edexcel AS and A Level Modular Mathematics

Correlation

Exercise A, Question 6

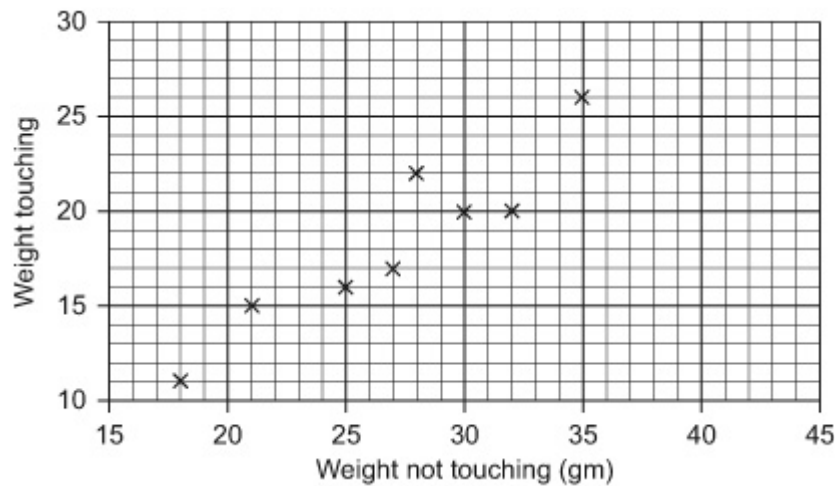
Question:

Eight students were asked to estimate the mass of a bag of sweets in grams. First they were asked to estimate the mass without touching the bag and then they were told to pick the bag up and estimate the mass again. The results are shown in the table below.

Student	A	B	C	D	E	F	G	H
Estimate of mass not touching bag (g)	25	18	32	27	21	35	28	30
Estimate of mass holding bag (g)	16	11	20	17	15	26	22	20

- a Draw a scatter diagram to represent these data.
- b Describe and interpret the correlation between the two variables.

Solution:



- b. It shows positive correlation. As the weight not touching the bag increased so did the weight touching it. OR Students who guessed a heavy weight not touching the bag also did touching it and vice versa.

Solutionbank S1

Edexcel AS and A Level Modular Mathematics

Correlation

Exercise B, Question 1

Question:

Given $\Sigma x = 18.5$ $\Sigma x^2 = 36$ $n = 10$ find the value of S_{xx} .

Solution:

$$S_{xx} = 36 - \frac{18.5 \times 18.5}{10} = 36 - 34.225 = 1.775$$

© Pearson Education Ltd 2008

Solutionbank S1

Edexcel AS and A Level Modular Mathematics

Correlation

Exercise B, Question 2

Question:

Given $\Sigma y = 25.7$ $\Sigma y^2 = 140$ $n = 5$ find the value of S_{yy} .

Solution:

$$S_{yy} = 140 - \frac{25.7 \times 25.7}{5} = 140 - 132.098 = \mathbf{7.90}$$

© Pearson Education Ltd 2008

Solutionbank S1

Edexcel AS and A Level Modular Mathematics

Correlation

Exercise B, Question 3

Question:

Given $\Sigma x = 15$ $\Sigma y = 35$ $\Sigma xy = 91$ $n = 5$ find the value of S_{xy} .

Solution:

$$S_{xy} = 91 - \frac{15 \times 35}{5} = 91 - 105 = \mathbf{-14}$$

© Pearson Education Ltd 2008

Solutionbank S1

Edexcel AS and A Level Modular Mathematics

Correlation

Exercise B, Question 4

Question:

Given that $S_{xx} = 92$, $S_{yy} = 112$ and $S_{xy} = 100$ find the value of the product moment correlation coefficient.

Solution:

$$\frac{100}{\sqrt{92 \times 112}} = \frac{100}{101.50862} = \mathbf{0.985 \dots}$$

© Pearson Education Ltd 2008

Solutionbank S1

Edexcel AS and A Level Modular Mathematics

Correlation

Exercise B, Question 5

Question:

Given the following summary data,

$$\Sigma x = 367 \quad \Sigma y = 270 \quad \Sigma x^2 = 33\,845 \quad \Sigma y^2 = 12976 \quad \Sigma xy = 17\,135 \quad n = 6$$

calculate the product moment correlation coefficient (r) using the formula:

$$r = \frac{S_{xy}}{\sqrt{S_{xx}S_{yy}}}$$

Solution:

$$S_{xx} = 33845 - \frac{367 \times 367}{6} = 33845 - 22448.166\ldots = 11396.833\ldots$$

$$S_{yy} = 12976 - \frac{270 \times 270}{6} = 12976 - 12150 = 826$$

$$S_{xy} = 17135 - \frac{367 \times 270}{6} = 17135 - 16515 = 620$$

$$r = \frac{620}{\sqrt{11396.833 \times 826}} = \frac{620}{3068.189} = \mathbf{0.202}$$

© Pearson Education Ltd 2008

Solutionbank S1

Edexcel AS and A Level Modular Mathematics

Correlation

Exercise B, Question 6

Question:

The ages, a years, and heights, h cm, of seven members of a team were recorded. The data were summarised as follows:

$$\Sigma a = 115 \qquad \Sigma a^2 = 1899 \qquad S_{hh} = 571.4 \qquad S_{ah} = 72.1$$

a Find S_{aa} .

b Find the value of the product moment correlation coefficient between a and h .

c Describe and interpret the correlation between the age and height of these seven people based on these data.

Solution:

a $S_{aa} = 1899 - \frac{115 \times 115}{7} = \mathbf{9.7142 \dots}$

b $r = \frac{72.1}{\sqrt{9.7142 \dots \times 571.4}} = \frac{72.1}{74.50 \dots} = 0.9677 \dots = \mathbf{0.968}$

c This is positive correlation. The older the age the taller the person.

© Pearson Education Ltd 2008

Solutionbank S1

Edexcel AS and A Level Modular Mathematics

Correlation

Exercise B, Question 7

Question:

In research on the quality of bacon produced by different breeds of pig, data were obtained about the leanness (l) and taste (t) of the bacon. The data is shown in the table.

Leanness l	1.5	2.6	3.4	5.0	6.1	8.2
Taste t	5.5	5.0	7.7	9.0	10.0	10.2

a Find S_{ll} , S_{tt} and S_{lt} .

b Calculate the product moment correlation coefficient between l and t using the values found in **a**. If you have a calculator that will work out r use it to check your answer.

Solution:

$$\mathbf{a} \quad \sum l = 26.8 \quad \sum_{n=6} l^2 = 150.02 \quad \sum t = 47.4 \quad \sum t^2 = 399.58 \quad \sum lt = 237.07$$

$$S_{ll} = 150.02 - \frac{26.8 \times 26.8}{6} = 150.02 - 119.7066 \dots = \mathbf{30.3133 \dots}$$

$$S_{tt} = 399.58 - \frac{47.4 \times 47.4}{6} = 399.58 - 374.46 = \mathbf{25.12}$$

$$S_{lt} = 237.07 - \frac{26.8 \times 47.4}{6} = 237.07 - 211.72 = \mathbf{25.35}$$

$$\mathbf{b} \quad r = \frac{25.35}{\sqrt{30.3133 \times 25.12}} = \frac{25.35}{27.5947 \dots} = 0.9186 \dots = \mathbf{0.919}$$

© Pearson Education Ltd 2008

Solutionbank S1

Edexcel AS and A Level Modular Mathematics

Correlation

Exercise B, Question 8

Question:

Eight children had their IQ measured and then took a general knowledge test. Their IQ, (x), and their marks, (y), for the test were summarised as follows:

$$\Sigma x = 973 \quad \Sigma x^2 = 120\,123 \quad \Sigma y = 490 \quad \Sigma y^2 = 33\,000 \quad \Sigma xy = 61\,595.$$

a Calculate the product moment correlation coefficient.

b Describe and interpret the correlation coefficient between IQ and general knowledge.

Solution:

$$\mathbf{a} \quad S_{xx} = 120123 - \frac{973 \times 973}{8} = 120123 - 118341.125 = \mathbf{1781.875}$$

$$S_{yy} = 33000 - \frac{490 \times 490}{8} = 33000 - 30012.5 = \mathbf{2987.5}$$

$$S_{xy} = 61595 - \frac{973 \times 490}{8} = 61595 - 59596.25 = \mathbf{1998.75}$$

$$r = \frac{1998.75}{\sqrt{1781.875 \times 2987.5}} = \frac{1998.75}{2307.2389} = 0.8662 \dots = \mathbf{0.866}$$

b The correlation is positive. The higher the IQ, the higher the mark gained in the general knowledge test. (OR The higher the mark gained in the intelligence test the higher the IQ.)

Solutionbank S1

Edexcel AS and A Level Modular Mathematics

Correlation

Exercise B, Question 9

Question:

In a training scheme for young people, the average time taken for each age group to reach a certain level of proficiency was measured. The data are shown in the table.

Age x (years)	16	17	18	19	20	21	22	23	24	25
Average time y (hours)	12	11	10	9	11	8	9	7	6	8

- a** Find S_{xx} , S_{yy} and S_{xy} .
- b** Use your answers to calculate the product moment correlation coefficient (r).
- c** Describe and interpret the relationship between average time and age.

Solution:

$$\mathbf{a} \quad \sum x = 205 \quad \sum x^2 = 4285 \quad \sum y = 91 \quad \sum y^2 = 861 \quad \sum xy = 1821$$

$$S_{xx} = 4285 - \frac{205 \times 205}{10} = 4285 - 4202.5 = \mathbf{82.5}$$

$$S_{yy} = 861 - \frac{91 \times 91}{10} = 861 - 828.1 = \mathbf{32.9}$$

$$S_{xy} = 1821 - \frac{205 \times 91}{10} = 1821 - 1865.5 = \mathbf{-44.5}$$

$$\mathbf{b} \quad r = \frac{-44.5}{\sqrt{82.5 \times 32.9}} = \frac{-44.5}{52.09846 \dots} = -0.8541 \dots = \mathbf{-0.854}$$

- c** The correlation is negative. The greater the age the less time taken to reach the required level of proficiency.

Solutionbank S1

Edexcel AS and A Level Modular Mathematics

Correlation

Exercise C, Question 1

Question:

The following product moment correlation coefficients were calculated

i -0.96 **ii** -0.35 **iii** 0 **iv** 0.72

Write down the coefficient that

a shows the least correlation, **b** shows the most correlation.

Solution:

a (iii) The value 0 shows no correlation.

b (i) -0.96 is high negative correlation.

© Pearson Education Ltd 2008

Solutionbank S1

Edexcel AS and A Level Modular Mathematics

Correlation

Exercise C, Question 2

Question:

Here are some product moment correlation coefficients.

i -1 , **ii** -0.5 , **iii** 0 **iv** 0.5 , **v** 1 .

Write down which one shows

a perfect negative correlation, **b** zero correlation.

Solution:

a (i)

b (iii)

© Pearson Education Ltd 2008

Solutionbank S1

Edexcel AS and A Level Modular Mathematics

Correlation

Exercise C, Question 3

Question:

Ahmed works out the product moment correlation coefficient between the heights of a group of fathers and the heights of their sons to be 0.954. Write down what this tells you about the relationship between their heights.

Solution:

There is a strong positive correlation between the heights of fathers and their sons.

The taller the father the taller the son will be.

© Pearson Education Ltd 2008

Solutionbank S1

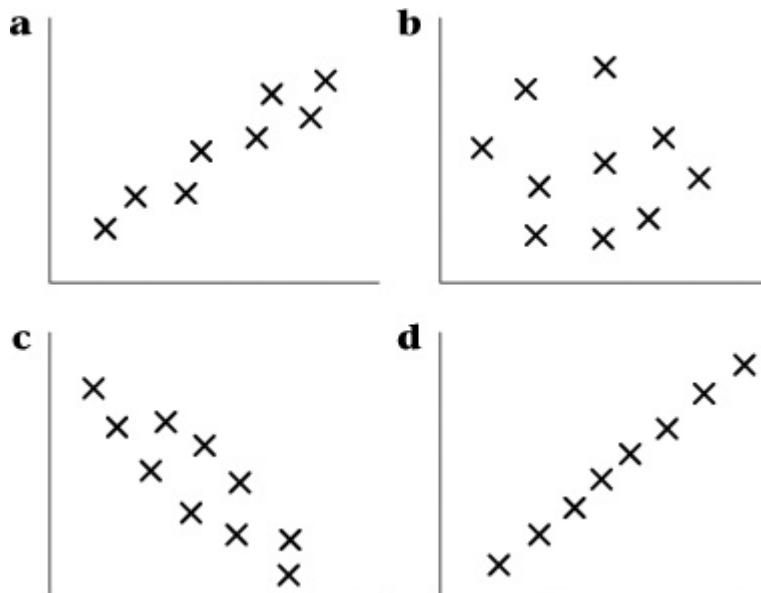
Edexcel AS and A Level Modular Mathematics

Correlation

Exercise C, Question 4

Question:

Maria draws some scatter diagrams. They are shown below.



Write down which scatter diagram shows:

- i a correlation of +1,
- ii a correlation that could be described as strong positive correlation,
- iii a correlation of about -0.97 ,
- iv a correlation that shows almost no correlation.

Solution:

a goes with (ii)

b goes with (iv)

c goes with (iii)

d goes with (i).

© Pearson Education Ltd 2008

Solutionbank S1

Edexcel AS and A Level Modular Mathematics

Correlation

Exercise C, Question 5

Question:

Jake finds that the product moment correlation coefficients between two variables x and y is 0.95. The product moment correlation coefficient between two other variables s and t was -0.95 . Discuss how these two coefficients differ.

Solution:

x and y have a positive correlation that is close to 1. As one increases so does the other.

s and t have a negative correlation that is close to -1 . As one rises the other falls.

The rate of rise in one pair of variables is the same as the rate of fall of the other pair.

© Pearson Education Ltd 2008

Solutionbank S1

Edexcel AS and A Level Modular Mathematics

Correlation

Exercise C, Question 6

Question:

Patsy collects some data to find out if there is any relationship between the numbers of car accidents and computer ownership. She calculates the product moment correlation coefficient between the two variables. There is a strong positive correlation. She says as car accidents increase so does computer ownership. Write down whether or not this is sensible. Give reasons for your answer.

Solution:

This is not sensible as there is no way that one is directly dependent on the other. It could be that you are more likely to drive a car if you own a computer.

© Pearson Education Ltd 2008

Solutionbank S1

Edexcel AS and A Level Modular Mathematics

Correlation

Exercise C, Question 7

Question:

Raj collects some data to find out whether there is any relationship between the height of students in his year group and the pass rate in driving tests. He finds that there is a strong positive correlation. He says that as height increases, so does your chance of passing your driving test. Is this sensible? Give reasons for your answer.

Solution:

This is not sensible. Pass rates in driving tests do not depend on height. There will be some other reason for his results. Possibly the ages of the students are different or it could just be accidental.

© Pearson Education Ltd 2008

Solutionbank S1

Edexcel AS and A Level Modular Mathematics

Correlation

Exercise D, Question 1

Question:

Coding is to be used to work out the value of the product moment correlation coefficient for the following sets of data. Suggest a suitable coding for each.

a

x	2000	2010	2015	2005	2003	2006
y	3	6	21	6	9	18

b

s	100	300	200	400	300	700
t	2	0	1	3	3	6

Solution:

a

$x - 2000$ and $\frac{y}{3}$ (OR $x -$ any number beginning 20--)

b $\frac{s}{100}$ and leave t as it is.

© Pearson Education Ltd 2008

Solutionbank S1

Edexcel AS and A Level Modular Mathematics

Correlation

Exercise D, Question 2

Question:

For the two variables x and y the coding of $A = x - 7$ and $B = y - 100$ is to be used.

The product moment correlation coefficient for A and B is found to be 0.973.

What is the product moment correlation coefficient for x and y ?

Solution:

0.973

© Pearson Education Ltd 2008

Solutionbank S1

Edexcel AS and A Level Modular Mathematics

Correlation

Exercise D, Question 3

Question:

Use the coding: $p = x$ and $q = y - 100$ to work out the product moment correlation coefficient for the following data.

x	0	5	3	2	1
y	100	117	112	110	106

Solution:

p	0	5	3	2	1
q	0	17	12	10	6

$$\Sigma p = 11 \quad \Sigma p^2 = 39 \quad \Sigma q = 45 \quad \Sigma q^2 = 569 \quad \Sigma pq = 147$$

$$S_{pp} = 39 - \frac{11 \times 11}{5} = 14.8$$

$$S_{qq} = 569 - \frac{45 \times 45}{5} = 164$$

$$S_{pq} = 147 - \frac{11 \times 45}{5} = 48$$

$$r = \frac{48}{\sqrt{14.8 \times 164}} = \frac{48}{49.2666 \dots} = 0.9742 \dots = \mathbf{0.974}$$

Coding does not affect the value of the product moment correlation coefficient.

So for x and y we have $r = \mathbf{0.974}$

Solutionbank S1

Edexcel AS and A Level Modular Mathematics

Correlation

Exercise D, Question 4

Question:

The product moment correlation is to be worked out for the following data set using coding.

x	50	40	55	45	60
y	4	3	5	4	6

a Using the coding $p = \frac{x}{5}$ and $t = y$ find the values of S_{pp} , S_{tt} and S_{pt} .

b Calculate the product moment correlation between p and t .

c Write down the product moment correlation between x and y .

Solution:

a

p	10	8	11	9	12
t	4	3	5	4	6

$$\Sigma p = 50 \quad \Sigma p^2 = 510 \quad \Sigma t = 22 \quad \Sigma t^2 = 102 \quad \Sigma pt = 227$$

$$S_{pp} = 510 - \frac{50 \times 50}{5} = 10$$

$$S_{tt} = 102 - \frac{22 \times 22}{5} = 5.2$$

$$S_{pt} = 227 - \frac{50 \times 22}{5} = 7$$

b

$$r = \frac{7}{\sqrt{10 \times 5.2}} = \frac{7}{7.2111 \dots} = 0.9707 \dots = \mathbf{0.971}$$

c

$r = \mathbf{0.971}$ (Coding has no effect on the value of r)

Solutionbank S1

Edexcel AS and A Level Modular Mathematics

Correlation

Exercise D, Question 5

Question:

The tail length (t cm) and the mass (m grams) for each of eight woodmice were measured. The data is shown in the table.

t (cm)	8.5	7.5	8.6	7.3	8.1	7.5	8.0	7.8
m (g)	28	22	26	21	25	20	20	22

a Using the coding $x = t - 7.3$ and $y = m - 20$ complete the following table

x	1.2		0					0.5
y	8		1					

b Find S_{xx} , S_{yy} and S_{xy} .

c Calculate the value of the product moment correlation coefficient between x and y .

d Write down the product moment correlation coefficient between t and m .

e Write down the conclusion that can be drawn about the relationship between tail length and mass of woodmice.

Solution:

a

x	1.2	0.2	1.3	0	0.8	0.2	0.7	0.5
y	8	2	6	1	5	0	0	2

b

$$\Sigma x = 4.9 \quad \Sigma x^2 = 4.59 \quad \Sigma y = 24 \quad \Sigma y^2 = 134 \quad \Sigma xy = 22.8$$

$$S_{xx} = 4.59 - \frac{4.9 \times 4.9}{8} = \mathbf{1.58875}$$

$$S_{yy} = 134 - \frac{24 \times 24}{8} = \mathbf{62}$$

$$S_{xy} = 22.8 - \frac{4.9 \times 24}{8} = \mathbf{8.1}$$

c

$$r = \frac{8.1}{\sqrt{1.58875 \times 62}} = \frac{8.1}{9.9248 \dots} = 0.8161 \dots = \mathbf{0.816}$$

d

$$r = 0.816$$

e Positive correlation.

The greater the mass of a wood mouse the longer the tail length.

© Pearson Education Ltd 2008

Solutionbank S1

Edexcel AS and A Level Modular Mathematics

Correlation

Exercise D, Question 6

Question:

A shopkeeper thinks that the more newspapers he sells in a week the more sweets he sells. He records the amount of money (m pounds) that he takes in newspaper sales and also the amount of money he takes in sweet sales (s pounds) each week for seven weeks. The data are shown in the following table.

Newspaper sales (m pounds)	380	402	370	365	410	392	385
Sweet sales (s pounds)	560	543	564	573	550	544	530

a Use the coding $x = m - 365$ and $y = s - 530$ to find S_{xx} , S_{yy} and S_{xy} .

b Calculate the product moment correlation coefficient for m and s .

c State, with a reason, whether or not what the shopkeeper thinks is correct.

Solution:

a

x	15	37	5	0	45	27	20
y	30	13	34	43	20	14	0

$$\Sigma x = 149 \quad \Sigma x^2 = 4773 \quad \Sigma y = 154 \quad \Sigma y^2 = 4670 \quad \Sigma xy = 2379$$

$$S_{xx} = 4773 - \frac{149 \times 149}{7} = \mathbf{1601.4285}$$

$$S_{yy} = 4670 - \frac{154 \times 154}{7} = \mathbf{1282}$$

$$S_{xy} = 2379 - \frac{149 \times 154}{7} = \mathbf{-899}$$

b

$$r = \frac{-899}{\sqrt{1601.4285 \times 1282}} = \frac{-899}{1432.84 \dots} = -0.6274 \dots = \mathbf{-0.627}$$

c The shopkeeper is not correct. This is negative correlation so as the newspaper sales go up the sweet sales go down

Solutionbank S1

Edexcel AS and A Level Modular Mathematics

Correlation

Exercise E, Question 1

Question:

The following table shows the distance (x) in miles and the cost (y) in pounds of each of 10 taxi journeys.

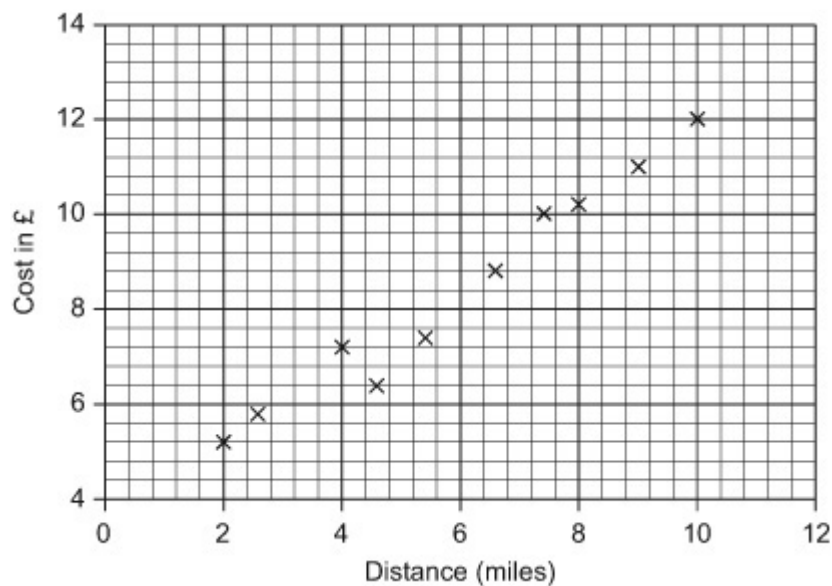
x (miles)	8	6.5	4	2.5	5.5	9	2	10	4.5	7.5
y (pounds)	10.2	8.8	7.2	5.7	7.4	11.0	5.2	12.0	6.4	10.0

a Draw a scatter diagram to represent these data.

b Describe and interpret the correlation between the two variables.

Solution:

a



b

The correlation is positive. The further the taxi travels the more it costs.

Solutionbank S1

Edexcel AS and A Level Modular Mathematics

Correlation

Exercise E, Question 2

Question:

The following scatter diagrams were drawn.



a State whether each shows positive, negative or no correlation.

b Interpret each scatter diagram in context.

Solution:

a i is positive correlation. ii is negative correlation. iii is no correlation.

b i – The older the snake the longer it is likely to be.

ii – The higher the unemployment the lower the drop in wages.

iii – There is no correlation between the age and the height of men.

Solutionbank S1

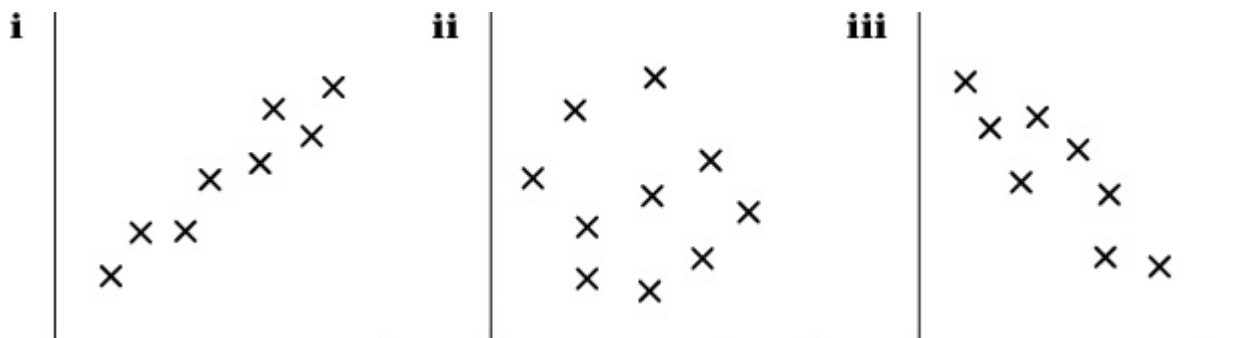
Edexcel AS and A Level Modular Mathematics

Correlation

Exercise E, Question 3

Question:

The following scatter diagrams were drawn by a student.



The student calculated the product moment correlation coefficient for each set of data. The values were:

a -0.12

b 0.87

c -0.81

Write down which value corresponds to each scatter diagram. Give a reason for your answer.

Solution:

(i) is 0.87

(ii) is -0.12

(iii) is -0.81 .

Solutionbank S1

Edexcel AS and A Level Modular Mathematics

Correlation

Exercise E, Question 4

Question:

The product moment correlation coefficient for a person's age and his score on a memory test is -0.86 . Interpret this value.

Solution:

As a person's age increases their score on a memory test decreases.

© Pearson Education Ltd 2008

Solutionbank S1

Edexcel AS and A Level Modular Mathematics

Correlation

Exercise E, Question 5

Question:

Wai wants to know whether the 10 people in her group are as good at Science as they are at Art. She collected the end of term test marks for Science (s), and Art (a), and coded them using $x = \frac{s}{10}$ and $y = \frac{a}{10}$.

The data she collected can be summarised as follows,

$$\Sigma x = 67 \quad \Sigma x^2 = 465 \quad \Sigma y = 65 \quad \Sigma y^2 = 429 \quad \Sigma xy = 434.$$

a Work out the product moment correlation coefficient for x and y .

b Write down the product moment correlation coefficient for s and a .

c Write down whether or not it is true to say that the people in Wai's group who are good at Science are also good at Art. Give a reason for your answer.

Solution:

a

$$S_{xx} = 465 - \frac{67 \times 67}{10} = 16.1$$

$$S_{yy} = 429 - \frac{65 \times 65}{10} = 6.5$$

$$S_{xy} = 434 - \frac{67 \times 65}{10} = -1.5$$

$$r = \frac{-1.5}{\sqrt{16.1 \times 6.5}} = \frac{-1.5}{10.2298 \dots} = -0.1466 \dots = -\mathbf{0.147}$$

b $r = -\mathbf{0.147}$

c This is negative correlation that is close to 0. There is little evidence to suggest that students in the group who are good at science will also be good at art.

Solutionbank S1

Edexcel AS and A Level Modular Mathematics

Correlation

Exercise E, Question 6

Question:

Nimer thinks that oranges that are very juicy cost more than those that are not very juicy. He buys 20 oranges from different places, and measures the amount of juice (j ml), that each orange produces. He also notes the price (p) of each orange.

The data can be summarised as follows,

$$\Sigma j = 979 \quad \Sigma p = 735 \quad \Sigma j^2 = 52\,335 \quad \Sigma p^2 = 32\,156 \quad \Sigma jp = 39\,950.$$

a Find S_{jj} , S_{pp} and S_{jp} .

b Using your answers to **a** calculate the product moment correlation coefficient.

c Describe the type of correlation between the amount of juice and the cost and state, with a reason, whether or not Nimer is correct.

Solution:

a

$$S_{jj} = 52335 - \frac{979 \times 979}{20} = \mathbf{4412.95}$$

$$S_{pp} = 32156 - \frac{735 \times 735}{20} = \mathbf{5144.75}$$

$$S_{jp} = 39950 - \frac{979 \times 735}{20} = \mathbf{3971.75}$$

b

$$r = \frac{3971.75}{\sqrt{4412.95 \times 5144.75}} = \frac{3971.75}{4764.8215} = 0.8335 \dots = \mathbf{0.834}$$

c This is a positive correlation that is close to 1 so Nimer is correct.

Solutionbank S1

Edexcel AS and A Level Modular Mathematics

Correlation

Exercise E, Question 7

Question:

The following table shows the values of two variables v and m .

v	50	70	60	82	45	35	110	70	35	30
m	140	200	180	210	120	100	200	180	120	60

The results were coded using $x = v - 30$ and $y = \frac{m}{20}$.

a Complete the table for x and y .

x	20	40			15			40		0
y	7	10		10.5	6					3

b Calculate S_{xx} , S_{yy} and S_{xy} .

(You may use $\Sigma x = 287$, $\Sigma x^2 = 13\,879$, $\Sigma y = 75.5$, $\Sigma y^2 = 627.25$, $\Sigma xy = 2661$.)

c Using your answers to **b** calculate the product moment correlation coefficient for x and y .

d Write down the product moment correlation coefficient for v and m .

e Describe and interpret your product moment correlation coefficient for v and m .

Solution:

a

x	20	40	30	52	15	5	80	40	5	0
y	7	10	9	10.5	6	5	10	9	6	3

b

$$S_{xx} = 13879 - \frac{287 \times 287}{10} = \mathbf{5642.1}$$

$$S_{yy} = 627.25 - \frac{75.5 \times 75.5}{10} = \mathbf{57.225}$$

$$S_{xy} = 2661 - \frac{287 \times 75.5}{10} = \mathbf{494.15}$$

$$\mathbf{c} \quad r = \frac{494.15}{\sqrt{5642.1 \times 57.225}} = \frac{494.15}{568.2} = 0.8696 \dots = \mathbf{0.870}$$

d $r = \mathbf{0.870}$

e This is positive correlation that is close to 1. As v increases so m increases.

Solutionbank S1

Edexcel AS and A Level Modular Mathematics

Correlation

Exercise E, Question 8

Question:

Each of 10 cows was given an additive (x) every day for four weeks to see if it would improve their milk yield (y). At the beginning the average milk yield per day was 4 gallons. The milk yield of each cow was measured on the last day of the four weeks. The data collected is shown in the table.

Cow	A	B	C	D	E	F	G	H	I	J
Additive, x (25 gm units)	1	2	3	4	5	6	7	8	9	10
Yield, y (gallons)	4.0	4.2	4.3	4.5	4.5	4.7	5.2	5.2	5.1	5.1

a Draw a scatter diagram of these data.

b Write down any conclusions you can draw from the scatter diagram.

c From the diagram write down, with a reason, the amount of additive that could be given to each cow to maximise yield and minimise cost.

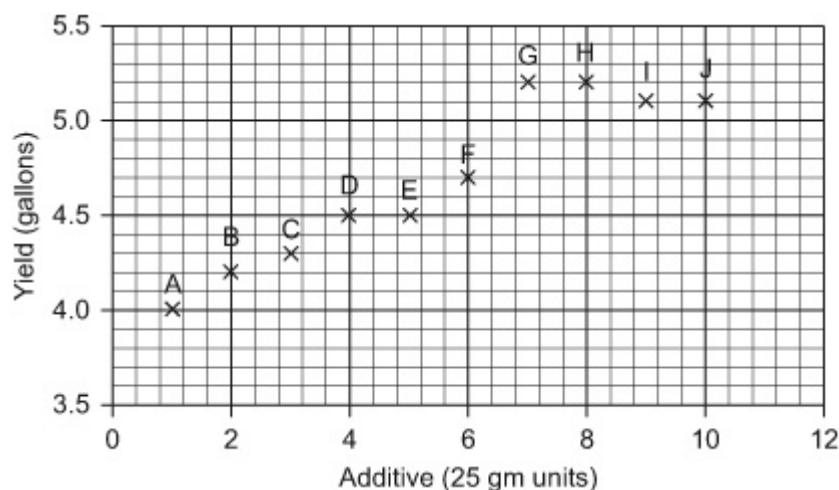
d The product moment correlation coefficient is to be calculated for the first seven cows. Write down why you think cows H, I and J are being left out for this calculation.

e Use the values $S_{xx} = 28$, $S_{yy} = 0.90857$ and $S_{xy} = 4.8$ to calculate the product moment correlation coefficient for the seven cows.

f Write down, with a reason, how the product moment correlation coefficient for all 10 cows would differ from your answer to e.

Solution:

a



b

The additive seems to improve milk yield as the scatter diagram shows positive correlation. Generally as the additive is increased so the yield increases.

There could however be some other reasons for some of the increase in yield.

c Seven units. (The yield levels off at this point.)

d The scatter diagram stops rising after cow seven (G).

$$\mathbf{e} \quad r = \frac{4.8}{\sqrt{28 \times 0.90857}} = \frac{4.8}{5.0438 \dots} = 0.9516 \dots = \mathbf{0.952}$$

f It would go down as the scatter diagram ceases to rise for the last three cows – it goes down for the last two so the correlation would not be as strong.

© Pearson Education Ltd 2008

Solutionbank S1

Edexcel AS and A Level Modular Mathematics

Correlation

Exercise E, Question 9

Question:

The following table shows the engine size (c), in cubic centimetres, and the fuel consumption (f), in miles per gallon to the nearest mile, for 10 car models.

c (cm ³)	1000	1200	1400	1500	1600	1800	2000	2200	2500	3000
f (mpg)	46	42	43	39	41	37	35	29	28	25

- a On graph paper draw a scatter diagram to represent these data.
- b Write down whether the correlation coefficient between c and f is positive or negative. Give a reason for your answer.

The data can be summarised as follows:

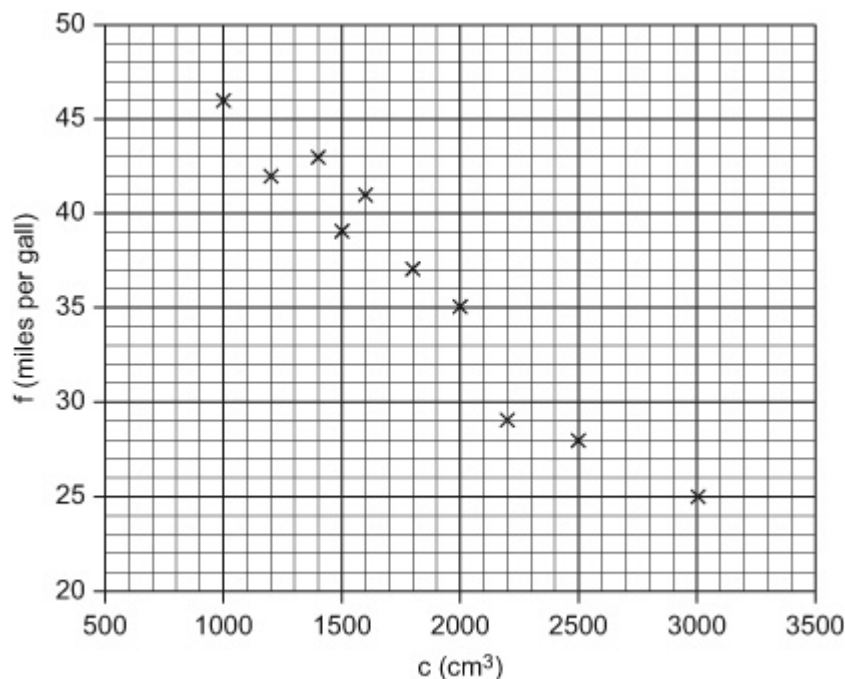
$$\Sigma cf = 626\,100, \Sigma c = 18\,200, \Sigma f = 365$$

- c Calculate S_{cf}

- d The product moment correlation coefficient could be found by using coding. Suggest suitable coding.

Solution:

a



- b The correlation is negative. As the number of cc's goes up the petrol consumption goes down. If the axes were moved to go through the mean point most values would be in the second and fourth quadrant.

c $S_{cf} = 626100 - \frac{18200 \times 365}{10} = -38200$

d $\frac{c}{100}$ or $\frac{c}{200}$ and $f - 25$ ($\frac{c - 1000}{100}$ is another alternative)

© Pearson Education Ltd 2008

Solutionbank S1

Edexcel AS and A Level Modular Mathematics

Correlation

Exercise E, Question 10

Question:

In a study on health, a clinic measured the age, (a years), and the diastolic blood pressure, (d in mm of mercury), of eight patients. The table shows the results.

a (years)	20	35	50	25	60	45	25	70
d (mm)	55	60	80	85	75	85	70	85

a Using the coding $x = \frac{a}{5}$ and $y = \frac{d}{5} - 11$ calculate S_{xx} , S_{yy} and S_{xy} .

b Using your answers to **a** work out the product moment correlation coefficient for x and y .

c Write down the product moment correlation coefficient between a and d .

d Interpret your answer to **c**.

Solution:

a

x	4	7	10	5	12	9	5	14
y	0	1	5	6	4	6	3	6

$$\Sigma x = 66 \quad \Sigma x^2 = 636 \quad \Sigma y = 31 \quad \Sigma y^2 = 159 \quad \Sigma xy = 288$$

$$S_{xx} = 636 - \frac{66 \times 66}{8} = \mathbf{91.5}$$

$$S_{yy} = 159 - \frac{31 \times 31}{8} = \mathbf{38.875}$$

$$S_{xy} = 288 - \frac{66 \times 31}{8} = \mathbf{32.25}$$

$$\mathbf{b} \quad r = \frac{32.25}{\sqrt{91.5 \times 38.875}} = \frac{32.25}{59.6411 \dots} = 0.5407 \dots = \mathbf{0.541}$$

c $r = \mathbf{0.541}$

d This is a positive correlation that is midway between 0 and 1. There is some evidence to suggest that as age increases so does blood pressure.