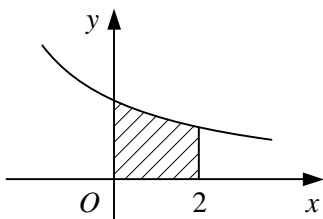


INTEGRATION

1



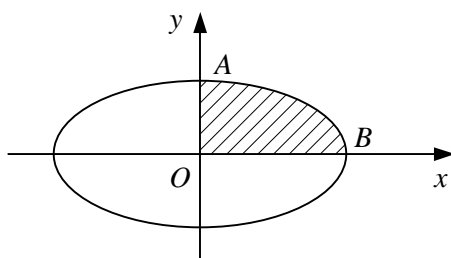
The diagram shows part of the curve with parametric equations

$$x = 2t - 4, \quad y = \frac{1}{t}.$$

The shaded region is bounded by the curve, the coordinate axes and the line $x = 2$.

- Find the value of the parameter t when $x = 0$ and when $x = 2$.
- Show that the area of the shaded region is given by $\int_2^3 \frac{2}{t} dt$.
- Hence, find the area of the shaded region.
- Verify your answer to part c by first finding a cartesian equation for the curve.

2



The diagram shows the ellipse with parametric equations

$$x = 4 \cos \theta, \quad y = 2 \sin \theta, \quad 0 \leq \theta < 2\pi,$$

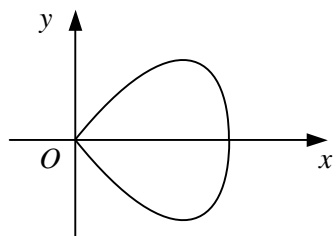
which meets the positive coordinate axes at the points A and B .

- Find the value of the parameter θ at the points A and B .
- Show that the area of the shaded region bounded by the curve and the positive coordinate axes is given by

$$\int_0^{\frac{\pi}{2}} 8 \sin^2 \theta d\theta.$$

- Hence, show that the area of the region enclosed by the ellipse is 8π .

3



The diagram shows the curve with parametric equations

$$x = 2 \sin t, \quad y = 5 \sin 2t, \quad 0 \leq t < \pi.$$

- Show that the area of the region enclosed by the curve is given by $\int_0^{\frac{\pi}{2}} 20 \sin 2t \cos t dt$.
- Evaluate this integral.