




Oxford Cambridge and RSA

Monday 4 October 2021 – Afternoon

A Level Further Mathematics A

Y540/01 Pure Core 1

Time allowed: 1 hour 30 minutes



You must have:

- the Printed Answer Booklet
- the Formulae Booklet for A Level Further Mathematics A
- a scientific or graphical calculator

INSTRUCTIONS

- Use black ink. You can use an HB pencil, but only for graphs and diagrams.
- Write your answer to each question in the space provided in the **Printed Answer Booklet**. If you need extra space use the lined pages at the end of the Printed Answer Booklet. The question numbers must be clearly shown.
- Fill in the boxes on the front of the Printed Answer Booklet.
- Answer **all** the questions.
- Where appropriate, your answer should be supported with working. Marks might be given for using a correct method, even if your answer is wrong.
- Give non-exact numerical answers correct to **3** significant figures unless a different degree of accuracy is specified in the question.
- The acceleration due to gravity is denoted by $g \text{ m s}^{-2}$. When a numerical value is needed use $g = 9.8$ unless a different value is specified in the question.
- Do **not** send this Question Paper for marking. Keep it in the centre or recycle it.

INFORMATION

- The total mark for this paper is **75**.
- The marks for each question are shown in brackets [].
- This document has **8** pages.

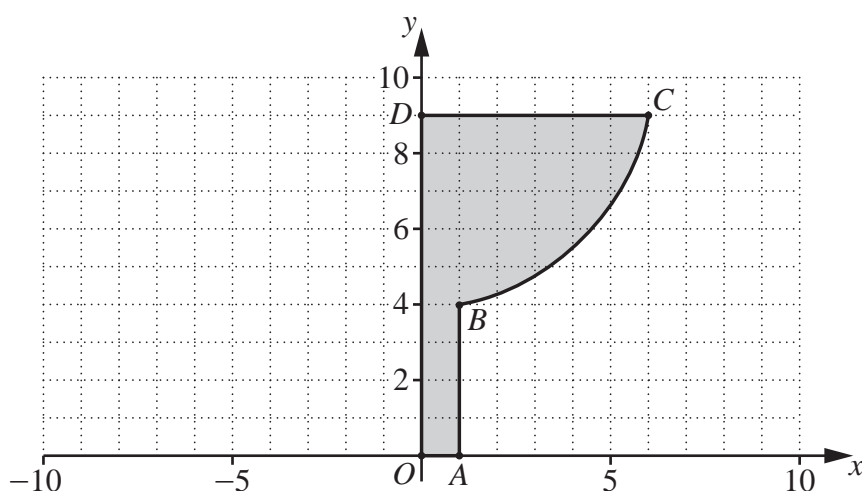
ADVICE

- Read each question carefully before you start your answer.

Answer **all** the questions.

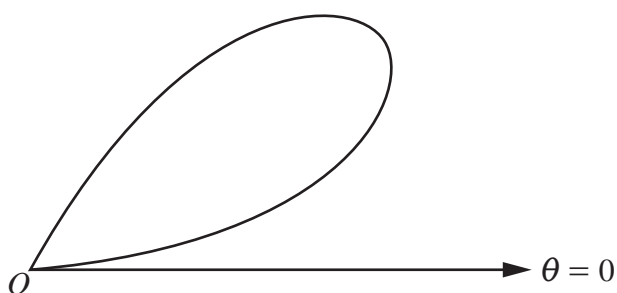
- 1 (a) Sketch on a single Argand diagram the loci given by
- (i) $|z - 1 + 2i| = 3$, [2]
- (ii) $|z + 1| = |z - 2|$. [2]
- (b) Indicate, by shading, the region of the Argand diagram for which $|z - 1 + 2i| \leq 3$ and $|z + 1| \leq |z - 2|$. [2]
- 2 You are given that $f(x) = \tan^{-1}(1 + x)$.
- (a) (i) Find the value of $f(0)$. [1]
- (ii) Determine the value of $f'(0)$. [2]
- (iii) Show that $f''(0) = -\frac{1}{2}$. [3]
- (b) Hence find the Maclaurin series for $f(x)$ up to and including the term in x^2 . [2]
- 3 A function $f(z)$ is defined on all complex numbers z by $f(z) = z^3 - 3z^2 + kz - 5$ where k is a real constant. The roots of the equation $f(z) = 0$ are α , β and γ . You are given that $\alpha^2 + \beta^2 + \gamma^2 = -5$.
- (a) Explain why $f(z) = 0$ has only one real root. [3]
- (b) Find the value of k . [3]
- (c) Find a cubic equation with integer coefficients that has roots $\frac{1}{\alpha}$, $\frac{1}{\beta}$ and $\frac{1}{\gamma}$. [2]
- 4 Points A , B and C have coordinates $(4, 2, 0)$, $(1, 5, 3)$ and $(1, 4, -2)$ respectively. The line l passes through A and B .
- (a) Find a cartesian equation for l . [3]
- M is the point on l that is closest to C .
- (b) Find the coordinates of M . [4]
- (c) Find the exact area of the triangle ABC . [4]

- 5 Use de Moivre's theorem to find the constants A , B and C in the identity $\sin^5 \theta \equiv A \sin \theta + B \sin 3\theta + C \sin 5\theta$. [4]
- 6 O is the origin of a coordinate system whose units are cm. The points A , B , C and D have coordinates $(1, 0)$, $(1, 4)$, $(6, 9)$ and $(0, 9)$ respectively. The arc BC is part of the curve with equation $x^2 + (y - 10)^2 = 37$. The closed shape $OABCD$ is formed, in turn, from the line segments OA and AB , the arc BC and the line segments CD and DO (see diagram). A funnel can be modelled by rotating $OABCD$ by 2π radians about the y -axis.



Find the volume of the funnel according to the model. [3]

- 7 The diagram below shows the curve with polar equation $r = \sin 3\theta$ for $0 \leq \theta \leq \frac{1}{3}\pi$.



- (a) Find the values of θ at the pole. [1]
- (b) Find the polar coordinates of the point on the curve where r takes its maximum value. [2]
- (c) **In this question you must show detailed reasoning.**
Find the exact area enclosed by the curve. [4]
- (d) Given that $\sin 3\theta = 3 \sin \theta - 4 \sin^3 \theta$, find a cartesian equation for the curve. [2]

8 You are given that $f(x) = 4 \sinh x + 3 \cosh x$.

(a) Show that the curve $y = f(x)$ has no turning points. [3]

(b) Determine the exact solution of the equation $f(x) = 5$. [5]

9 You are given that the matrix $\begin{pmatrix} 2 & 1 \\ -1 & 0 \end{pmatrix}$ represents a transformation T.

(a) You are given that the line with equation $y = kx$ is invariant under T.

Determine the value of k . [4]

(b) Determine whether the line with equation $y = kx$ in part (a) is a line of invariant points under T. [1]

10 Using an algebraic method, determine the least value of n for which $\sum_{r=1}^n \frac{1}{(2r-1)(2r+1)} \geq 0.49$. [8]

- 11** The displacement of a door from its equilibrium (closed) position is measured by the angle, θ radians, which the door makes with its closed position. The door can swing either side of the equilibrium position so that θ can take positive and negative values. The door is released from rest from an open position at time $t = 0$.

A proposed differential equation to model the motion of the door for $t \geq 0$ is

$$\frac{d^2\theta}{dt^2} + \lambda \frac{d\theta}{dt} + 3\theta = 0 \text{ where } \lambda \text{ is a constant and } \lambda \geq 0.$$

- (a) (i) According to the model, for what value of λ will the motion of the door be simple harmonic? [1]
- (ii) Explain briefly why modelling the motion of the door as simple harmonic is unlikely to be realistic. [1]
- (b) Find the range of values of λ for which the model predicts that the door will never pass through the equilibrium position. [2]
- (c) Sketch a possible graph of θ against t when λ lies **outside** the range found in part (b) but the motion is not simple harmonic. [1]

END OF QUESTION PAPER

BLANK PAGE

BLANK PAGE

OCR

Oxford Cambridge and RSA

Copyright Information

OCR is committed to seeking permission to reproduce all third-party content that it uses in its assessment materials. OCR has attempted to identify and contact all copyright holders whose work is used in this paper. To avoid the issue of disclosure of answer-related information to candidates, all copyright acknowledgements are reproduced in the OCR Copyright Acknowledgements Booklet. This is produced for each series of examinations and is freely available to download from our public website (www.ocr.org.uk) after the live examination series.

If OCR has unwittingly failed to correctly acknowledge or clear any third-party content in this assessment material, OCR will be happy to correct its mistake at the earliest possible opportunity.

For queries or further information please contact The OCR Copyright Team, The Triangle Building, Shaftesbury Road, Cambridge CB2 8EA.

OCR is part of the Cambridge Assessment Group; Cambridge Assessment is the brand name of University of Cambridge Local Examinations Syndicate (UCLES), which is itself a department of the University of Cambridge.