

Please check the examination details below before entering your candidate information

Candidate surname					Other names				
Centre Number				Candidate Number					
<input type="text"/>	<input type="text"/>	<input type="text"/>	<input type="text"/>	<input type="text"/>	<input type="text"/>	<input type="text"/>	<input type="text"/>	<input type="text"/>	<input type="text"/>

## Pearson Edexcel International Advanced Level

Time 1 hour 30 minutes

Paper  
reference

**WME02/01**

### Mathematics

#### International Advanced Subsidiary/Advanced Level Mechanics M2

**You must have:**

Mathematical Formulae and Statistical Tables (Yellow), calculator

Total Marks

**Candidates may use any calculator permitted by Pearson regulations. Calculators must not have the facility for symbolic algebra manipulation, differentiation and integration, or have retrievable mathematical formulae stored in them.**

#### Instructions

- Use **black** ink or ball-point pen.
- If pencil is used for diagrams/sketches/graphs it must be dark (HB or B).
- **Fill in the boxes** at the top of this page with your name, centre number and candidate number.
- Answer **all** questions.
- Answer the questions in the spaces provided  
– *there may be more space than you need.*
- You should show sufficient working to make your methods clear. Answers without working may not gain full credit.
- Whenever a numerical value of  $g$  is required, take  $g = 9.8 \text{ m s}^{-2}$ , and give your answer to either 2 significant figures or 3 significant figures.

#### Information

- A booklet 'Mathematical Formulae and Statistical Tables' is provided.
- There are 8 questions in this question paper. The total mark for this paper is 75.
- The marks for **each** question are shown in brackets  
– *use this as a guide as to how much time to spend on each question.*

#### Advice

- Read each question carefully before you start to answer it.
- Try to answer every question.
- Check your answers if you have time at the end.
- If you change your mind about an answer, cross it out and put your new answer and any working underneath.

Turn over ►

P72153A

©2022 Pearson Education Ltd.

B:1/1/



Pearson

Leave  
blank

1. Three particles of masses  $2m$ ,  $3m$  and  $4m$  are placed at the points with coordinates  $(-2, 5)$ ,  $(2, -3)$  and  $(3k, k)$  respectively, where  $k$  is a constant.  
The centre of mass of the three particles is at the point  $(\bar{x}, \bar{y})$ .

(a) Show that  $\bar{x} = \frac{2 + 12k}{9}$  (2)

The centre of mass of the three particles lies at a point on the straight line with equation  $x + 2y = 3$

(b) Find the value of  $k$ . (4)

---

---

---

---

---

---

---

---

---

---

---

---

---

---

---

---

---

---

---

---

---

---

---

---

---

---

---

---

DO NOT WRITE IN THIS AREA

DO NOT WRITE IN THIS AREA

DO NOT WRITE IN THIS AREA





Leave  
blank

2. A car of mass 900 kg is moving down a straight road which is inclined at an angle  $\alpha$  to the horizontal, where  $\sin \alpha = \frac{1}{12}$

The engine of the car is working at a constant rate of 15 kW.  
The resistance to the motion of the car is modelled as a constant force of magnitude 400 N.

Find the acceleration of the car at the instant when it is moving at  $16 \text{ m s}^{-1}$

(5)

DO NOT WRITE IN THIS AREA

DO NOT WRITE IN THIS AREA

DO NOT WRITE IN THIS AREA



Leave  
blank

**Question 2 continued**

DO NOT WRITE IN THIS AREA

[Lined writing area]

Q2

**(Total 5 marks)**



Leave  
blank

3. A particle  $P$  of mass  $0.2\text{ kg}$  is moving with velocity  $(4\mathbf{i} - 3\mathbf{j})\text{ m s}^{-1}$ .  
The particle receives an impulse  $\lambda(\mathbf{i} + \mathbf{j})\text{ N s}$ , where  $\lambda$  is a constant.  
Immediately after receiving the impulse, the speed of  $P$  is  $7\text{ m s}^{-1}$ .  
Find the possible values of  $\lambda$ .

(6)

DO NOT WRITE IN THIS AREA

DO NOT WRITE IN THIS AREA

DO NOT WRITE IN THIS AREA









Leave blank

**Question 4 continued**

Lined writing area for the answer to Question 4.

DO NOT WRITE IN THIS AREA

DO NOT WRITE IN THIS AREA

DO NOT WRITE IN THIS AREA



P 7 2 1 5 3 A 0 9 2 8



Leave blank

**Question 4 continued**

DO NOT WRITE IN THIS AREA

DO NOT WRITE IN THIS AREA

DO NOT WRITE IN THIS AREA

Horizontal lines for writing.

**(Total 10 marks)**

**Q4**

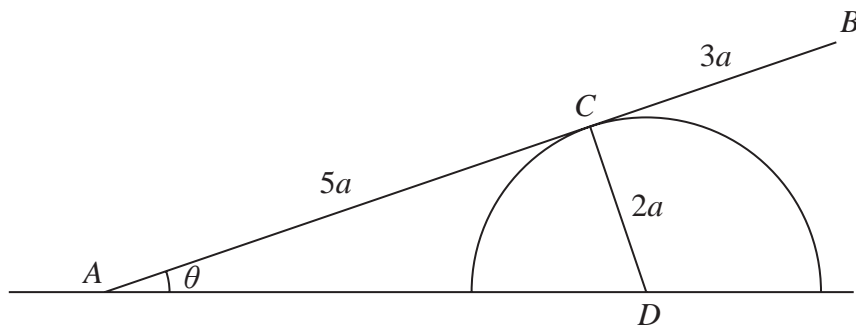
--	--



P 7 2 1 5 3 A 0 1 1 2 8

Leave blank

5.



**Figure 1**

A uniform rod  $AB$  has length  $8a$  and weight  $W$ .  
 The end  $A$  of the rod is freely hinged to horizontal ground.  
 The rod rests in equilibrium against a block which is also fixed to the ground.  
 The block is modelled as a smooth solid hemisphere with radius  $2a$  and centre  $D$ .  
 The point of contact between the rod and the block is  $C$ , where  $AC = 5a$   
 The rod is at an angle  $\theta$  to the ground, as shown in Figure 1.  
 Points  $A$ ,  $B$ ,  $C$  and  $D$  all lie in the same vertical plane.

(a) Show that  $AD = \sqrt{29}a$  (1)

(b) Show that the magnitude of the normal reaction at  $C$  between the rod and the  
 block is  $\frac{4}{\sqrt{29}}W$  (3)

The resultant force acting on the rod at  $A$  has magnitude  $kW$  and acts at an angle  $\alpha$  to the ground.

(c) Find (i) the exact value of  $k$   
 (ii) the exact value of  $\tan \alpha$  (8)

---

---

---

---

---

---

---

---

---

---

---

---

---

---

---

---

---

---

---

---

---

---

---

---

DO NOT WRITE IN THIS AREA



Leave blank

**Question 5 continued**

Lined writing area for the answer to Question 5 continued.

DO NOT WRITE IN THIS AREA

DO NOT WRITE IN THIS AREA

DO NOT WRITE IN THIS AREA



P 7 2 1 5 3 A 0 1 3 2 8

Leave blank

Question 5 continued

Lined area for writing the answer to Question 5.

DO NOT WRITE IN THIS AREA

DO NOT WRITE IN THIS AREA

DO NOT WRITE IN THIS AREA



Leave blank

**Question 5 continued**

DO NOT WRITE IN THIS AREA

DO NOT WRITE IN THIS AREA

DO NOT WRITE IN THIS AREA

Q5

--	--

(Total 12 marks)



P 7 2 1 5 3 A 0 1 5 2 8

6.

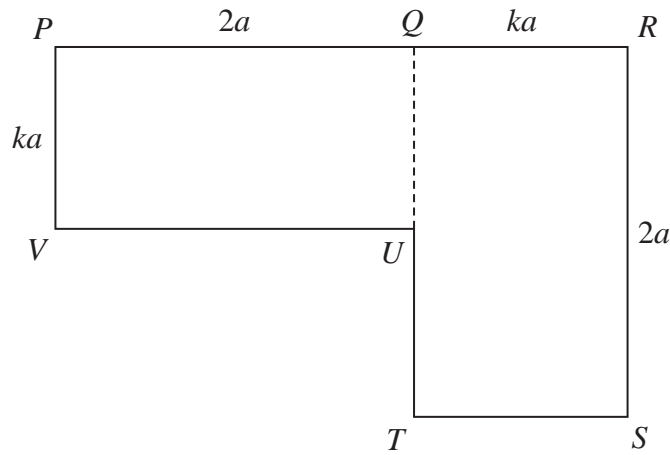


Figure 2

The uniform lamina  $PQRSTUV$  shown in Figure 2 is formed from two identical rectangles,  $PQUV$  and  $QRSTU$ .

The rectangles have sides  $PQ = RS = 2a$  and  $PV = QR = ka$ .

- (a) Show that the centre of mass of the lamina is  $\left(\frac{6+k}{4}\right)a$  from  $PV$  (3)

The lamina is freely suspended from  $P$  and hangs in equilibrium with  $PR$  at an angle of  $\alpha$  to the downward vertical.

Given that  $\tan \alpha = \frac{7}{15}$

- (b) find the value of  $k$ . (6)

---

---

---

---

---

---

---

---

---

---

---

---

---

---

---

---

---

---

---

---

---

---

---

---

DO NOT WRITE IN THIS AREA

DO NOT WRITE IN THIS AREA

DO NOT WRITE IN THIS AREA









Leave  
blank**Question 6 continued**

DO NOT WRITE IN THIS AREA

DO NOT WRITE IN THIS AREA

DO NOT WRITE IN THIS AREA

Q6  
□**(Total 9 marks)**

P 7 2 1 5 3 A 0 1 9 2 8





Leave blank

**Question 7 continued**

Lined writing area for the answer.

DO NOT WRITE IN THIS AREA

DO NOT WRITE IN THIS AREA

DO NOT WRITE IN THIS AREA





Leave blank

8. [In this question, the unit vectors  $\mathbf{i}$  and  $\mathbf{j}$  are in a vertical plane, with  $\mathbf{i}$  being horizontal and  $\mathbf{j}$  being vertically upwards.]

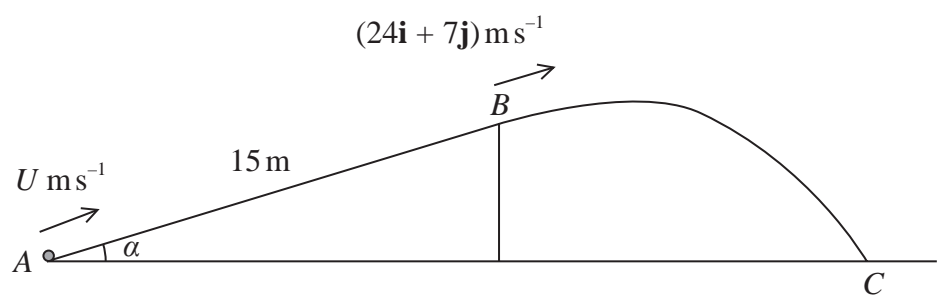


Figure 3

A rough ramp is fixed to horizontal ground.

The ramp is inclined to the ground at an angle  $\alpha$ , where  $\tan \alpha = \frac{7}{24}$

The point  $A$  is at the bottom of the ramp and the point  $B$  is at the top of the ramp. The line  $AB$  is a line of greatest slope of the ramp and  $AB = 15 \text{ m}$ , as shown in Figure 3.

A particle  $P$  of mass  $0.3 \text{ kg}$  is projected with speed  $U \text{ m s}^{-1}$  from  $A$  directly towards  $B$ . At the instant  $P$  reaches the point  $B$ , the velocity of  $P$  is  $(24\mathbf{i} + 7\mathbf{j}) \text{ m s}^{-1}$ . The particle leaves the ramp at  $B$ , and moves freely under gravity until it hits the horizontal ground at the point  $C$ .

The coefficient of friction between  $P$  and the ramp is  $\frac{1}{5}$

(a) Find the work done against friction as  $P$  moves from  $A$  to  $B$ . (3)

(b) Use the work-energy principle to find the value of  $U$ . (4)

(c) Find the time taken by  $P$  to move from  $B$  to  $C$ . (3)

At the instant immediately before  $P$  hits the ground at  $C$ , the particle is moving downwards at  $\theta^\circ$  to the horizontal.

(d) Find the value of  $\theta$  (4)

---

---

---

---

---

---

---

---

---

---

DO NOT WRITE IN THIS AREA

DO NOT WRITE IN THIS AREA

DO NOT WRITE IN THIS AREA











Leave blank

Question 8 continued

Lined writing area for the answer to Question 8 continued.

DO NOT WRITE IN THIS AREA

DO NOT WRITE IN THIS AREA

DO NOT WRITE IN THIS AREA

Q8

(Total 14 marks)

TOTAL FOR PAPER IS 75 MARKS

END

