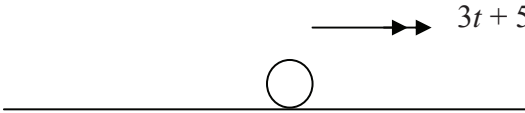
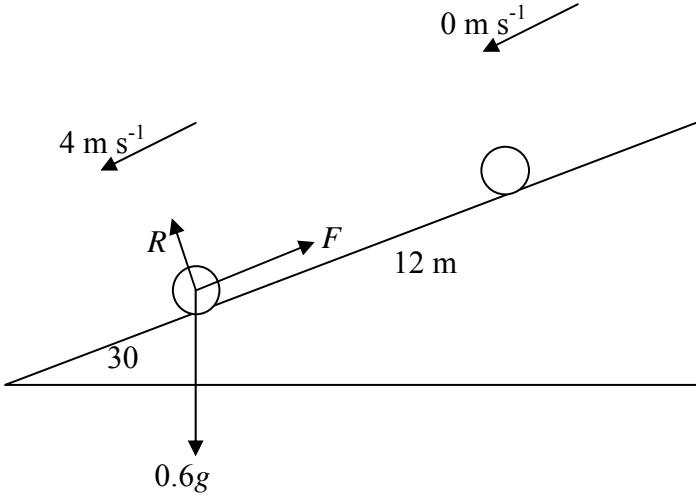


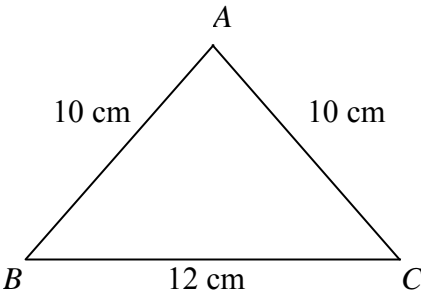
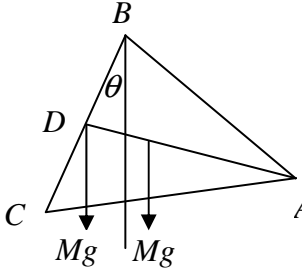
WME02/01: Mechanics 2

Question Number	Scheme	Marks
Q1	<div style="text-align: center;">  </div> $\frac{dv}{dt} = 3t + 5$ $v = \int (3t + 5) dt$ $v = \frac{3}{2}t^2 + 5t \quad (+c)$ $t = 0 \quad v = 2 \Rightarrow c = 2$ $v = \frac{3}{2}t^2 + 5t + 2$ $t = T \quad 6 = \frac{3}{2}T^2 + 5T + 2$ $12 = 3T^2 + 10T + 4$ $3T^2 + 10T - 8 = 0$ $(3T - 2)(T + 4) = 0$ $T = \frac{2}{3} \quad (T = -4)$ $\therefore T = \frac{2}{3} \quad (\text{or } 0.67)$	<p>M1*</p> <p>A1</p> <p>B1</p> <p>DM1*</p> <p>M1</p> <p>A1</p> <p style="text-align: right;">[6]</p>

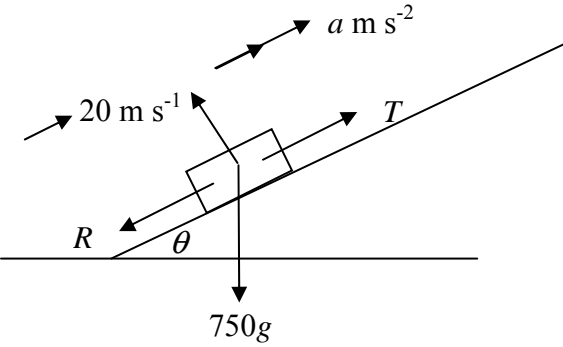
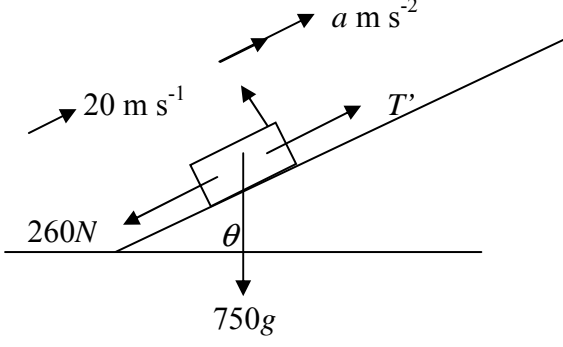
WME02/01: Mechanics 2

Question Number	Scheme	Marks
Q2	 <p data-bbox="197 824 1104 1106"> (a) K.E. gained = $\frac{1}{2} \times 0.6 \times 4^2$ P.E. lost = $0.6 \times g \times (12 \sin 30)$ Change in energy = P.E. lost - K.E. gained $= 0.6 \times g \times 12 \sin 30 - \frac{1}{2} \times 0.6 \times 4^2$ $= 30.48$ Work done against friction = 30 or 30.5 J </p>	<p data-bbox="1254 972 1374 1003">M1 A1 A1</p> <p data-bbox="1254 1070 1449 1102">A1 (4)</p>
	<p data-bbox="197 1182 635 1525"> (b) $R(\uparrow)$ $R = 0.6g \cos 30$ $F = \frac{30.48}{12}$ $F = \mu R$ $\mu = \frac{30.48}{12 \times 0.6g \cos 30}$ $\mu = 0.4987$ $\mu = 0.499$ or 0.50 </p>	<p data-bbox="1254 1196 1289 1227">B1</p> <p data-bbox="1254 1263 1315 1294">B1ft</p> <p data-bbox="1254 1397 1289 1429">M1</p> <p data-bbox="1254 1496 1449 1527">A1 (4)</p> <p data-bbox="1410 1532 1449 1563">[8]</p>

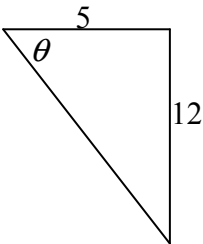
WME02/01: Mechanics 2

Question Number	Scheme					Marks
Q3						
(a)		AB	AC	BC	frame	
	mass ratio	10	10	12	32	B1
	dist. from BC	4	4	0	\bar{x}	B1
	Moments about BC: $10 \times 4 + 10 \times 4 + 0 = 32\bar{x}$ $\bar{x} = \frac{80}{32}$ $\bar{x} = 2\frac{1}{2} \quad (2.5)$					M1 A1 A1 (5)
(b)	 <p>Moments about B:</p> $Mg \times 6 \sin \theta = Mg \times (\bar{x} \cos \theta - 6 \sin \theta)$ $12 \sin \theta = \bar{x} \cos \theta$ $\tan \theta = \frac{\bar{x}}{12}$ $\theta = 11.768\dots = 11.8^\circ$ <p>Alternative method : C of M of loaded frame at distance $\frac{1}{2}\bar{x}$ from D along DA</p> $\tan \theta = \frac{\frac{1}{2}\bar{x}}{6}$ $\theta = 11.768\dots = 11.8^\circ$					M1 A1 A1 A1 (4) B1 M1 A1 A1 [9]

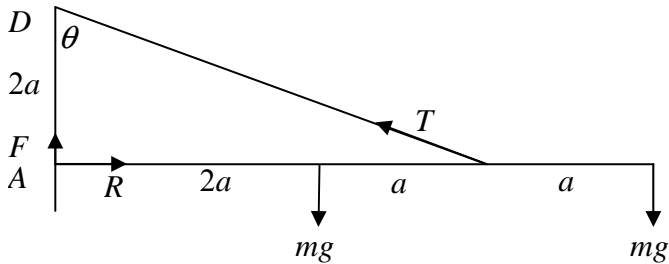
WME02/01: Mechanics 2

Question Number	Scheme	Marks
Q4	<div style="text-align: center;">  </div> <p>(a)</p> $T = \frac{15000}{20} = 750$ <p>R(parallel to road) $T = R + 750g \sin \theta$</p> $R = 750 - 750 \times 9.8 \times \frac{1}{15}$ $R = 260 *$	<p>M1</p> <p>M1 A1</p> <p>A1 (4)</p>
(b)	<div style="text-align: center;">  </div> <p>(b)</p> $T' = \frac{18000}{20} = 900$ $T' - 260 - 750g \sin \theta = 750a$ $a = \frac{900 - 260 - 750 \times 9.8 \times \frac{1}{15}}{750}$ $a = 0.2$	<p>M1</p> <p>M1 A1</p> <p>A1 (4)</p> <p>[8]</p>

WME02/01: Mechanics 2

Question Number	Scheme	Marks
Q5 (a)	$\mathbf{I} = m\mathbf{v} - m\mathbf{u}$ $= 0.5 \times 20\mathbf{i} - 0.5(10\mathbf{i} + 24\mathbf{j})$ $= 5\mathbf{i} - 12\mathbf{j}$ $ 5\mathbf{i} - 12\mathbf{j} = 13 \text{ Ns}$	M1 A1 M1 A1 (4)
(b)	 $\tan \theta = \frac{12}{5}$ $\theta = 67.38$ $\theta = 67.4^\circ$	M1 A1 (2)
(c)	$\text{K.E. lost} = \frac{1}{2} \times 0.5(10^2 + 24^2) - \frac{1}{2} \times 0.5 \times 20^2$ $= 69 \text{ J}$	M1 A1 A1 (3) [9]

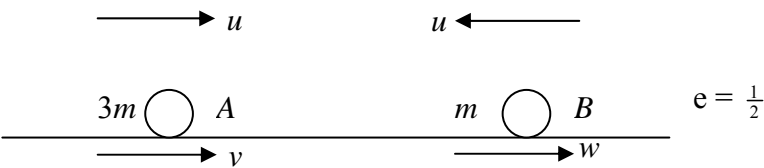

WME02/01: Mechanics 2

Question Number	Scheme	Marks
Q6	 <p data-bbox="196 622 236 656">(a)</p> $M(A) \quad 3a \times T \cos \theta = 2amg + 4amg$ $\cos \theta = \frac{2}{\sqrt{9+4}} = \frac{2}{\sqrt{13}}$ $\frac{6}{\sqrt{13}}T = 6mg$ $T = mg\sqrt{13} \quad *$	<p data-bbox="1252 622 1332 683">M1 A1 A1</p> <p data-bbox="1252 716 1284 750">B1</p> <p data-bbox="1252 869 1444 907">A1 (5)</p>
(b)	$3a \times T \times \cos \theta = 2amg + 4aMg$ $T = \frac{(2mg + 4Mg)}{6} \sqrt{13} \leq 2mg\sqrt{13}$ $mg + 2Mg \leq 6mg$ $M \leq \frac{5}{2}m \quad *$	<p data-bbox="1252 996 1292 1030">M1</p> <p data-bbox="1252 1052 1292 1086">A1</p> <p data-bbox="1165 1176 1212 1209">CSO</p> <p data-bbox="1252 1176 1444 1209">A1 (3)</p> <p data-bbox="1404 1265 1452 1299">[8]</p>

WME02/01: Mechanics 2

Question Number	Scheme	Marks
Q7 (a)	Vertical motion: $v^2 = u^2 + 2as$ $(40 \sin \theta)^2 = 2 \times g \times 12$ $(\sin \theta)^2 = \frac{2 \times g \times 12}{40^2}$ $\theta = 22.54 = 22.5^\circ$ (accept 23)	M1 A1 A1 (3)
(b)	Vert motion $P \rightarrow R$: $s = ut + \frac{1}{2}at^2$ $-36 = 40 \sin \theta t - \frac{g}{2}t^2$ $\frac{g}{2}t^2 - 40 \sin \theta t - 36 = 0$ $t = \frac{40 \sin 22.54 \pm \sqrt{(40 \sin 22.54)^2 + 4 \times 4.9 \times 36}}{9.8}$ $t = 4.694\dots$ Horizontal P to R: $s = 40 \cos \theta t$ $= 173 \text{ m}$ (or 170 m)	M1 A1 A1 A1 M1 A1 (6)
(c)	Using Energy: $\frac{1}{2}mv^2 - \frac{1}{2}m \times 40^2 = m \times g \times 36$ $v^2 = 2(9.8 \times 36 + \frac{1}{2} \times 40^2)$ $v = 48.0\dots\dots$ $v = 48 \text{ m s}^{-1}$ (accept 48.0)	M1 A1 A1 (3) [12]

WME02/01: Mechanics 2

Question Number	Scheme	Marks
<p>Q8</p> <p>(a)</p> <p>(i)</p>	 <p>Con. of Mom: $3mu - mu = 3mv + mw$ $2u = 3v + w$ (1)</p> <p>N.L.R: $\frac{1}{2}(u+u) = w - v$ $u = w - v$ (2)</p> <p>(1) - (2) $u = 4v$ $v = \frac{1}{4}u$</p> <p>(ii) In (2) $u = w - \frac{1}{4}u$ $w = \frac{5}{4}u$</p>	<p>M1# A1 M1# A1 DM1# A1 A1 (7)</p>
<p>(b)</p>	<p>B to wall: N.L.R: $\frac{5}{4}u \times \frac{2}{5} = V$ $V = \frac{1}{2}u$</p>	<p>M1 A1ft (2)</p>
<p>(c)</p>	 <p>B to wall: $\text{time} = 4a \div \frac{5}{4}u = \frac{16a}{5u}$</p> <p>Dist. Travelled by A = $\frac{1}{4}u \times \frac{16a}{5u} = \frac{4}{5}a$</p> <p>In t secs, A travels $\frac{1}{4}ut$, B travels $\frac{1}{2}ut$</p> <p>Collide when speed of approach = $\frac{1}{2}ut + \frac{1}{4}ut$, distance to cover = $4a - \frac{4}{5}a$</p> <p>$\therefore t = \frac{4a - \frac{4}{5}a}{\frac{3}{4}u} = \frac{16a}{5} \times \frac{4}{3u} = \frac{64a}{15u}$</p> <p>Total time = $\frac{16a}{5u} + \frac{64a}{15u} = \frac{112a}{15u}$ *</p>	<p>B1ft B1ft M1\$ DM1\$ A1 A1 (6)</p> <p>15</p>