



ADVANCED GCE
MATHEMATICS

Mechanics 4

WEDNESDAY 18 JUNE 2008

4731/01

Morning

Time: 1 hour 30 minutes

Additional materials (enclosed): None

Additional materials (required):

Answer Booklet (8 pages)

List of Formulae (MF1)

INSTRUCTIONS TO CANDIDATES

- Write your name in capital letters, your Centre Number and Candidate Number in the spaces provided on the Answer Booklet.
- Read each question carefully and make sure you know what you have to do before starting your answer.
- Answer **all** the questions.
- Give non-exact numerical answers correct to 3 significant figures unless a different degree of accuracy is specified in the question or is clearly appropriate.
- The acceleration due to gravity is denoted by $g \text{ m s}^{-2}$. Unless otherwise instructed, when a numerical value is needed, use $g = 9.8$.
- You are permitted to use a graphical calculator in this paper.

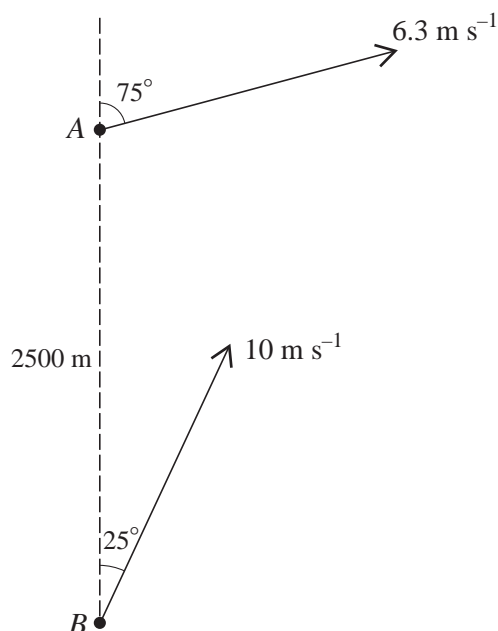
INFORMATION FOR CANDIDATES

- The number of marks is given in brackets [] at the end of each question or part question.
- The total number of marks for this paper is **72**.
- **You are reminded of the need for clear presentation in your answers.**

This document consists of **4** printed pages.

- 1 Two flywheels F and G are rotating freely, about the same axis and in the same direction, with angular speeds 21 rad s^{-1} and 36 rad s^{-1} respectively. The flywheels come into contact briefly, and immediately afterwards the angular speeds of F and G are 28 rad s^{-1} and 34 rad s^{-1} , respectively, in the same direction. Given that the moment of inertia of F about the axis is 1.5 kg m^2 , find the moment of inertia of G about the axis. [4]
- 2 A rotating turntable is slowing down with constant angular deceleration. It makes 16 revolutions as its angular speed decreases from 8 rad s^{-1} to rest.
- (i) Find the angular deceleration of the turntable. [2]
- (ii) Find the angular speed of the turntable at the start of its last complete revolution before coming to rest. [2]
- (iii) Find the time taken for the turntable to make its last complete revolution before coming to rest. [2]
- 3 The region bounded by the curve $y = 2x + x^2$ for $0 \leq x \leq 3$, the x -axis, and the line $x = 3$, is occupied by a uniform lamina. Find the coordinates of the centre of mass of this lamina. [9]

4



A boat A is travelling with constant speed 6.3 m s^{-1} on a course with bearing 075° . Boat B is travelling with constant speed 10 m s^{-1} on a course with bearing 025° . At one instant, A is 2500 m due north of B (see diagram).

- (i) Find the magnitude and bearing of the velocity of A relative to B . [5]
- (ii) Find the shortest distance between A and B in the subsequent motion. [3]

3

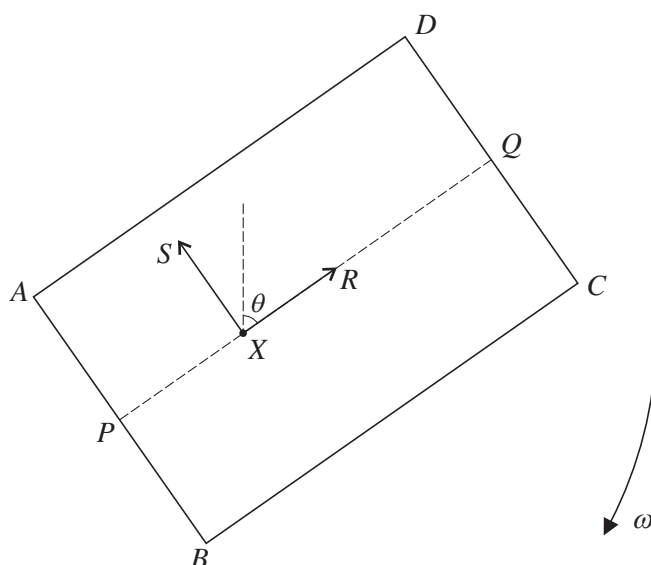
- 5 The region bounded by the curve $y = \sqrt{ax}$ for $a \leq x \leq 4a$ (where a is a positive constant), the x -axis, and the lines $x = a$ and $x = 4a$, is rotated through 2π radians about the x -axis to form a uniform solid of revolution of mass m .

(i) Show that the moment of inertia of this solid about the x -axis is $\frac{7}{5}ma^2$. [8]

The solid is free to rotate about a fixed horizontal axis along the line $y = a$, and makes small oscillations as a compound pendulum.

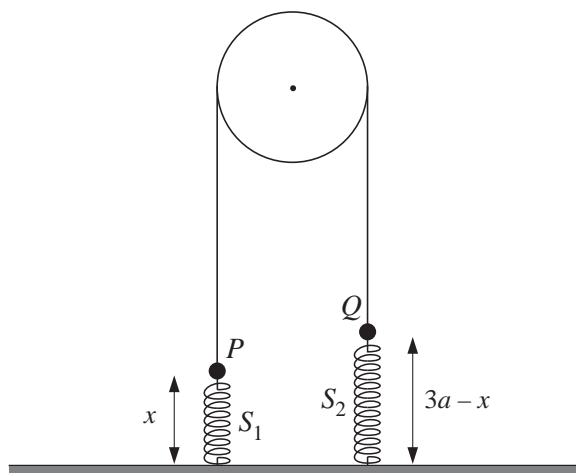
(ii) Find, in terms of a and g , the approximate period of these small oscillations. [4]

6



A uniform rectangular lamina $ABCD$ has mass m and sides $AB = 2a$ and $BC = 3a$. The mid-point of AB is P and the mid-point of CD is Q . The lamina is rotating freely in a vertical plane about a fixed horizontal axis which is perpendicular to the lamina and passes through the point X on PQ where $PX = a$. Air resistance may be neglected. When Q is vertically above X , the angular speed is $\sqrt{\frac{9g}{10a}}$. When XQ makes an angle θ with the upward vertical, the angular speed is ω , and the force acting on the lamina at X has components R parallel to PQ and S parallel to BA (see diagram).

- (i) Show that the moment of inertia of the lamina about the axis through X is $\frac{4}{3}ma^2$. [3]
- (ii) At an instant when $\cos \theta = \frac{3}{5}$, show that $\omega^2 = \frac{6g}{5a}$. [3]
- (iii) At an instant when $\cos \theta = \frac{3}{5}$, show that $R = 0$, and given also that $\sin \theta = \frac{4}{5}$ find S in terms of m and g . [9]



Particles P and Q , with masses $3m$ and $2m$ respectively, are connected by a light inextensible string passing over a smooth light pulley. The particle P is connected to the floor by a light spring S_1 with natural length a and modulus of elasticity mg . The particle Q is connected to the floor by a light spring S_2 with natural length a and modulus of elasticity $2mg$. The sections of the string not in contact with the pulley, and the two springs, are vertical. Air resistance may be neglected. The particles P and Q move vertically and the string remains taut; when the length of S_1 is x , the length of S_2 is $(3a - x)$ (see diagram).

- (i) Find the total potential energy of the system (taking the floor as the reference level for gravitational potential energy). Hence show that $x = \frac{4}{3}a$ is a position of stable equilibrium. [9]
- (ii) By differentiating the energy equation, and substituting $x = \frac{4}{3}a + y$, show that the motion is simple harmonic, and find the period. [9]

Permission to reproduce items where third-party owned material protected by copyright is included has been sought and cleared where possible. Every reasonable effort has been made by the publisher (OCR) to trace copyright holders, but if any items requiring clearance have unwittingly been included, the publisher will be pleased to make amends at the earliest possible opportunity.

OCR is part of the Cambridge Assessment Group. Cambridge Assessment is the brand name of University of Cambridge Local Examinations Syndicate (UCLES), which is itself a department of the University of Cambridge.