



ADVANCED GCE
MATHEMATICS
 Mechanics 3

4730

Candidates answer on the Answer Booklet

OCR Supplied Materials:

- 8 page Answer Booklet
- List of Formulae (MF1)

Other Materials Required:

None

Monday 25 January 2010
Morning

Duration: 1 hour 30 minutes



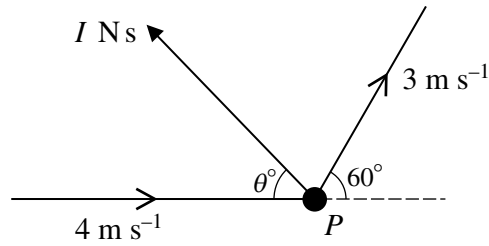
INSTRUCTIONS TO CANDIDATES

- Write your name clearly in capital letters, your Centre Number and Candidate Number in the spaces provided on the Answer Booklet.
- Use black ink. Pencil may be used for graphs and diagrams only.
- Read each question carefully and make sure that you know what you have to do before starting your answer.
- Answer **all** the questions.
- Do **not** write in the bar codes.
- Give non-exact numerical answers correct to 3 significant figures unless a different degree of accuracy is specified in the question or is clearly appropriate.
- The acceleration due to gravity is denoted by $g \text{ m s}^{-2}$. Unless otherwise instructed, when a numerical value is needed, use $g = 9.8$.
- You are permitted to use a graphical calculator in this paper.

INFORMATION FOR CANDIDATES

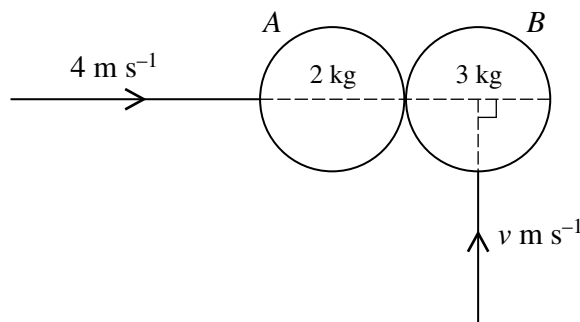
- The number of marks is given in brackets [] at the end of each question or part question.
- **You are reminded of the need for clear presentation in your answers.**
- The total number of marks for this paper is **72**.
- This document consists of **4** pages. Any blank pages are indicated.

1



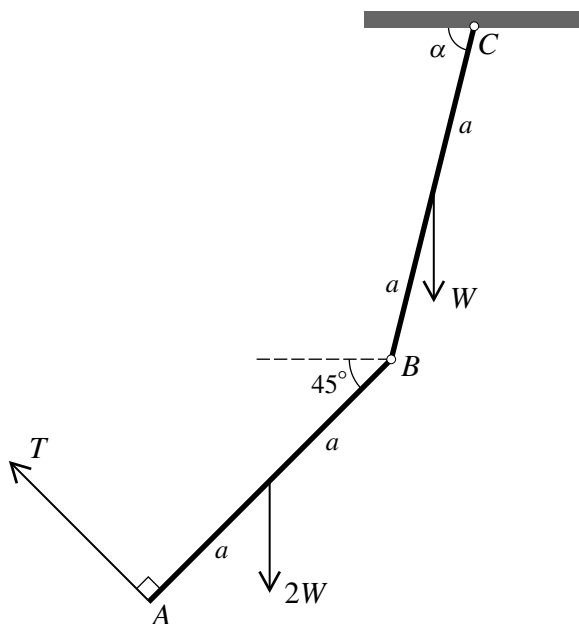
A particle P of mass 0.4 kg is moving horizontally with speed 4 m s^{-1} when it receives an impulse of magnitude $I \text{ N s}$, in a direction which makes an angle $(180 - \theta)^\circ$ with the direction of motion of P . Immediately after the impulse acts P moves horizontally with speed 3 m s^{-1} . The direction of motion of P is turned through an angle of 60° by the impulse (see diagram). Find I and θ . [7]

2



Two uniform smooth spheres A and B , of equal radius, have masses 2 kg and 3 kg respectively. They are moving on a horizontal surface when they collide. Immediately before the collision, A has speed 4 m s^{-1} and is moving along the line of centres, and B has speed $v \text{ m s}^{-1}$ and is moving perpendicular to the line of centres (see diagram). The coefficient of restitution is 0.6 . The direction of motion of B after the collision makes an angle of 45° with the line of centres. Find the value of v . [7]

3



Two uniform rods AB and BC , each of length $2a$, have weights $2W$ and W respectively. The rods are freely jointed to each other at B , and BC is freely jointed to a fixed point at C . The rods are held in equilibrium in a vertical plane by a light string attached to A and perpendicular to AB . The rods AB and BC make angles 45° and α , respectively, with the horizontal. The tension in the string is T (see diagram).

(i) By taking moments about B for AB , show that $W = \sqrt{2}T$. [3]

(ii) Find the value of $\tan \alpha$. [6]

4 A particle P of mass 0.2 kg travels in a straight line on a horizontal surface. It passes through a point O on the surface with speed 2 m s^{-1} . A resistive force of magnitude $0.2(v + v^2)$ N acts on P in the direction opposite to its motion, where $v \text{ m s}^{-1}$ is the speed of P when it is at a distance x m from O .

(i) Show that $\frac{1}{1+v} \frac{dv}{dx} = -1$. [3]

(ii) By solving the differential equation in part (i) show that $\frac{-e^x}{3-e^x} \frac{dx}{dt} = -1$, where t s is the time taken for P to travel x m from O . [5]

(iii) Hence find the value of t when $x = 1$. [3]

5 A light elastic string of natural length 1.6 m has modulus of elasticity 120 N. One end of the string is attached to a fixed point O and the other end is attached to a particle P of weight 1.5 N. The particle is released from rest at the point A , which is 2.1 m vertically below O . It comes instantaneously to rest at B , which is vertically above O .

(i) Verify that the distance AB is 4 m. [4]

(ii) Find the maximum speed of P during its upward motion from A to B . [7]

6

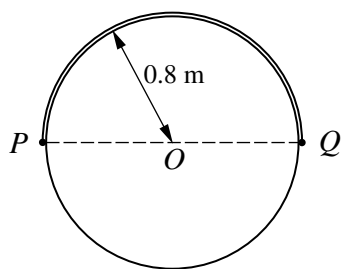


Fig. 1

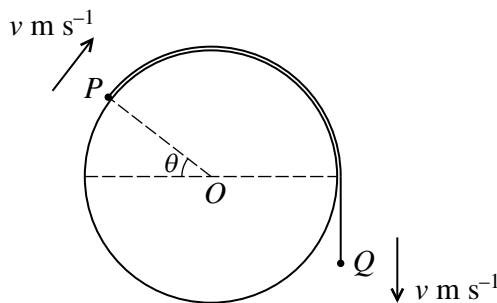


Fig. 2

A light inextensible string of length $0.8\pi\text{ m}$ has particles P and Q , of masses 0.4 kg and 0.58 kg respectively, attached to its ends. The string passes over a smooth horizontal cylinder of radius 0.8 m , which is fixed with its axis horizontal and passing through a fixed point O . The string is held at rest in a vertical plane perpendicular to the axis of the cylinder, with P and Q at opposite ends of the horizontal diameter of the cylinder through O (see Fig. 1). The string is released and Q begins to descend. When OP has rotated through θ radians, with P remaining in contact with the cylinder, the speed of each particle is $v\text{ m s}^{-1}$ (see Fig. 2).

- (i) By considering the total energy of the system, obtain an expression for v^2 in terms of θ . [5]
- (ii) Show that the magnitude of the force exerted on P by the cylinder is $(7.12 \sin \theta - 4.64\theta)\text{ N}$. [4]
- (iii) Given that P leaves the surface of the cylinder when $\theta = \alpha$, show that $1.53 < \alpha < 1.54$. [4]

7 A particle P of mass 0.5 kg is attached to one end of each of two identical light elastic strings of natural length 1.6 m and modulus of elasticity 19.6 N . The other ends of the strings are attached to fixed points A and B on a line of greatest slope of a smooth plane inclined at 30° to the horizontal. The distance AB is 4.8 m and A is higher than B .

- (i) Find the distance AP for which P is in equilibrium on the line AB . [5]

P is released from rest at a point on AB where both strings are taut. The strings remain taut during the subsequent motion of P and t seconds after release the distance AP is $(2.5 + x)\text{ m}$.

- (ii) Use Newton's second law to obtain an equation of the form $\frac{d^2x}{dt^2} = kx$. State the property of the constant k for which the equation indicates that P 's motion is simple harmonic, and find the period of this motion. [5]
- (iii) Given that $x = 0.5$ when $t = 0$, find the values of x for which the speed of P is 2.8 m s^{-1} . [4]



Copyright Information

OCR is committed to seeking permission to reproduce all third-party content that it uses in its assessment materials. OCR has attempted to identify and contact all copyright holders whose work is used in this paper. To avoid the issue of disclosure of answer-related information to candidates, all copyright acknowledgements are reproduced in the OCR Copyright Acknowledgements Booklet. This is produced for each series of examinations, is given to all schools that receive assessment material and is freely available to download from our public website (www.ocr.org.uk) after the live examination series.

If OCR has unwittingly failed to correctly acknowledge or clear any third-party content in this assessment material, OCR will be happy to correct its mistake at the earliest possible opportunity. For queries or further information please contact the Copyright Team, First Floor, 9 Hills Road, Cambridge CB2 1GE.

OCR is part of the Cambridge Assessment Group; Cambridge Assessment is the brand name of University of Cambridge Local Examinations Syndicate (UCLES), which is itself a department of the University of Cambridge.