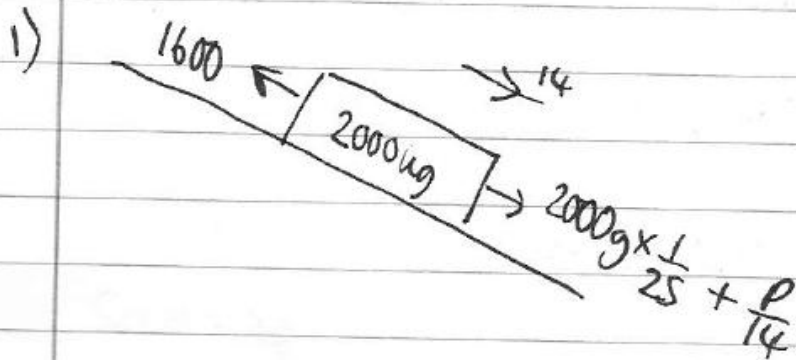
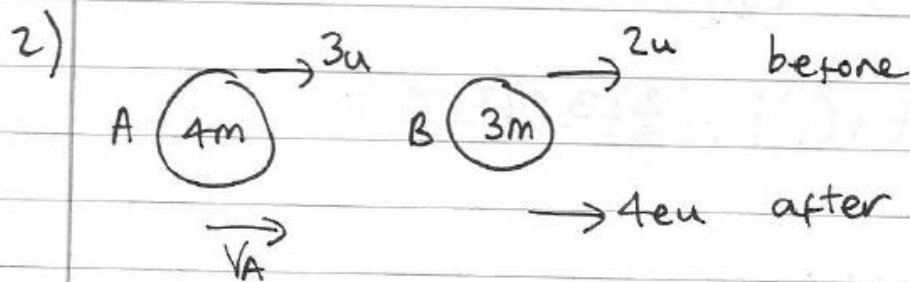


M2 JUNE 08

$$\frac{P}{14} + \frac{2000\text{g}}{25} = 1600$$

$$\frac{P}{14} = 816 \Rightarrow P = 11424\text{u}$$

$$P = \underline{11.4\text{kw}} \text{ (3sf)}$$



$$e = \frac{4eu - v_A}{u}$$

$$eu = 4eu - v_A$$

$$\Rightarrow v_A = 3eu.$$

$$\text{CLM} \Rightarrow 12mu + 6mu = 4m \times 3eu + 3m \times 4eu$$

$$18mu = 24meu \Rightarrow e = \frac{18}{24} \Rightarrow e = \frac{3}{4}$$

b) $K\bar{E}_{\text{before}} = \frac{1}{2}(4m)(3u)^2 + \frac{1}{2}(3m)(2u)^2 = 24mu^2$

$$v_A = 3eu = 3\left(\frac{3}{4}\right)u = \frac{9}{4}u \quad v_B = 4eu = 4\left(\frac{3}{4}\right)u = 3u$$

$$K\bar{E}_{\text{after}} = \frac{1}{2}(4m)\left(\frac{9}{4}u\right)^2 + \frac{1}{2}(3m)(3u)^2 = \frac{189}{8}mu^2$$

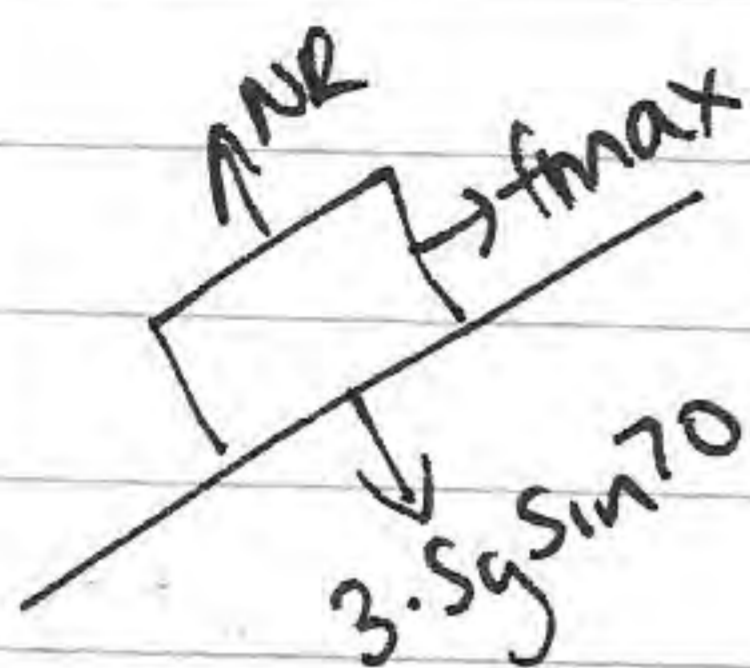
$$\Rightarrow K\bar{E}_{\text{lost}} = \underline{\frac{3}{8}mu^2} \text{ J.}$$

$$3) \text{ loss in KE} = \frac{1}{2}(3.5)(12^2 - 8^2) = 140 \text{ J}$$

$$\text{loss in PE} = 3.5g(14 \sin 20) = 164.238 \dots \text{ J}$$

$$\text{Total Energy lost} = \underline{304 \text{ J}} \text{ (3sf)}$$

$$b) \text{ Total Energy lost} = \text{Wd against friction} = f_{\max} \times 14$$



$$f_{\max} = \mu NR = \mu(3.5g \sin 70)$$

$$304.238 \dots = \mu \times 32.2314 \dots \times 14$$

$$\mu = \underline{0.67} \text{ (2sf)}$$

$$4) \mathbf{F} = (6t-5)\mathbf{i} + (t^2-2t)\mathbf{j} = m\mathbf{a} = \frac{1}{2}\mathbf{a}$$

$$\Rightarrow \mathbf{a} = (12t-10)\mathbf{i} + (2t^2-4t)\mathbf{j}$$

$$\mathbf{v} = \int \mathbf{a} dt = (6t^2-10t+C_1)\mathbf{i} + \left(\frac{2}{3}t^3-2t^2+C_2\right)\mathbf{j}$$

$$t=0 \quad \mathbf{v} = \mathbf{i} - 4\mathbf{j} = C_1\mathbf{i} + C_2\mathbf{j} \quad C_1 = 1 \quad C_2 = -4$$

$$\mathbf{v} = (6t^2-10t+1)\mathbf{i} + \left(\frac{2}{3}t^3-2t^2-4\right)\mathbf{j}$$

$$t=3, \quad \mathbf{v} = 25\mathbf{i} + -4\mathbf{j}$$

$$\text{Mom at } t=3 = m\mathbf{v} = 12.5\mathbf{i} - 2\mathbf{j}$$

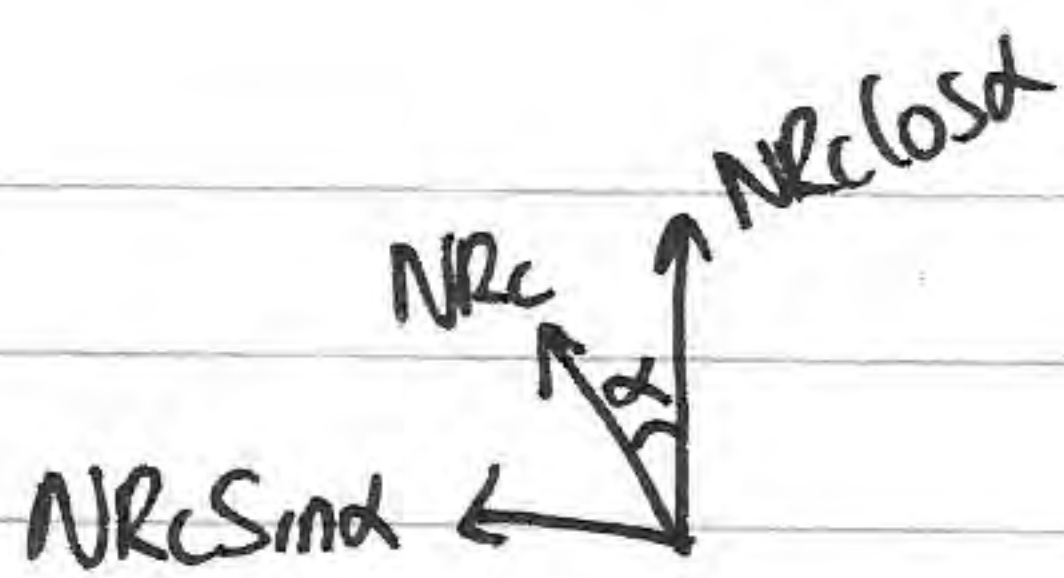
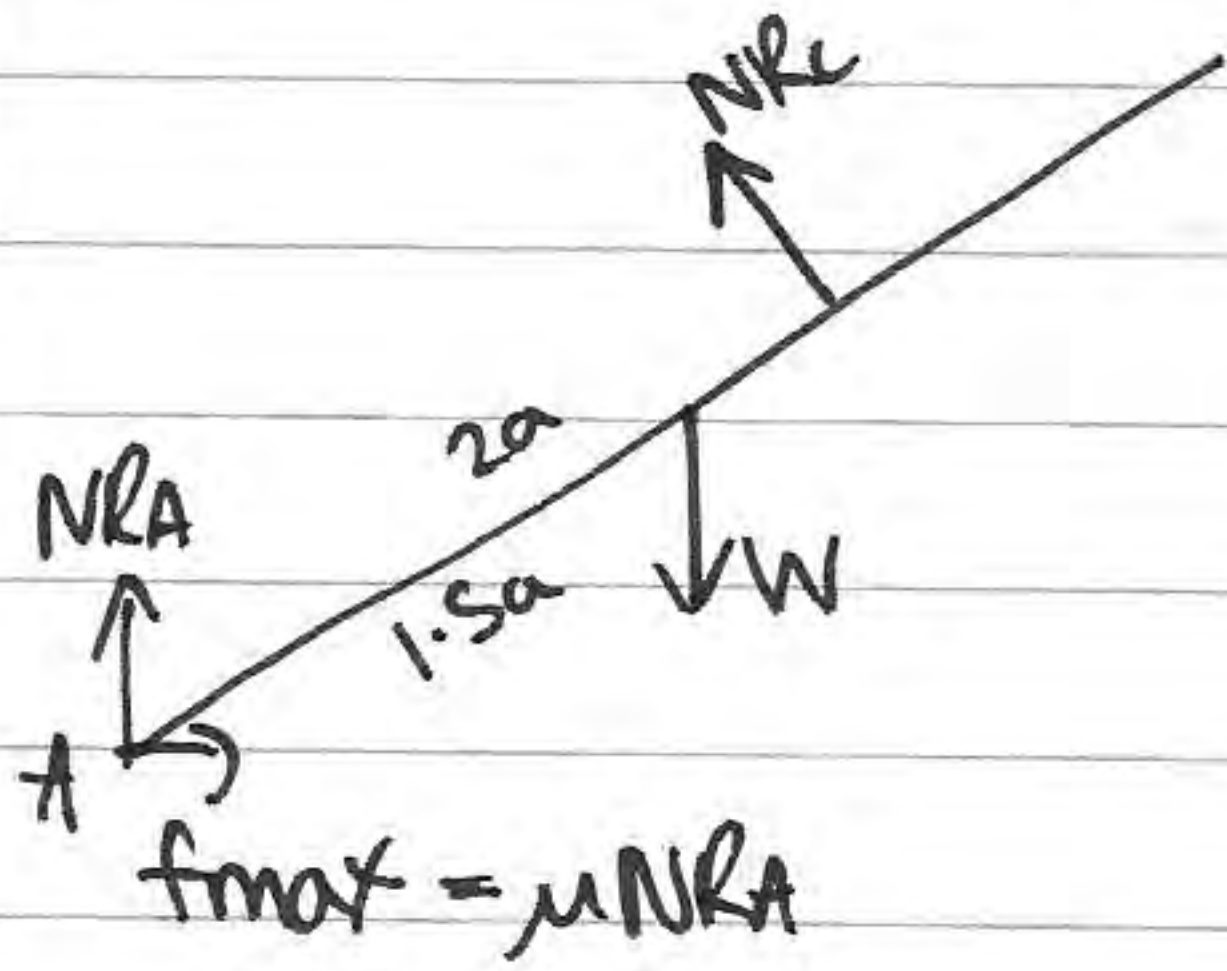
$$+ \text{Impulse} = -5\mathbf{i} + 12\mathbf{j}$$

$$\Rightarrow \text{Mom after} = m\mathbf{v} = 7.5\mathbf{i} + 10\mathbf{j}$$

$$\Rightarrow \mathbf{v} \text{ after} = 15\mathbf{i} + 20\mathbf{j}$$

$$\Rightarrow \text{Speed} = \sqrt{15^2 + 20^2} = \underline{25 \text{ ms}^{-1}}$$

5)



$$R_f \uparrow = 0$$

$$NR_c \cos \alpha + NRA = W$$

$$R_f' = 0$$

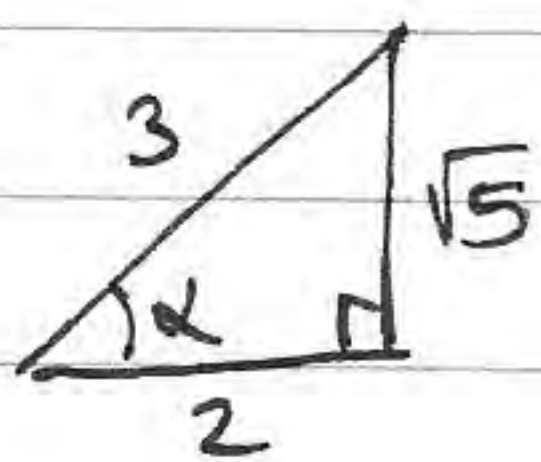
$$NR_c \sin \alpha = f_{\max} = \mu NRA$$

$$A \curvearrowright W \times 1.5a \cos \alpha = NR_c \times 2a \Rightarrow NR_c = \frac{3}{4} W \cos \alpha$$

$$\Rightarrow \left(\frac{3}{4} W \cos \alpha \right) \cos \alpha + NRA = W \Rightarrow NRA = W - \frac{3}{4} W \cos^2 \alpha$$

$$\therefore NRA = \frac{1}{4} W (4 - 3 \cos^2 \alpha) \#$$

$$\cos \alpha = \frac{2}{3}$$



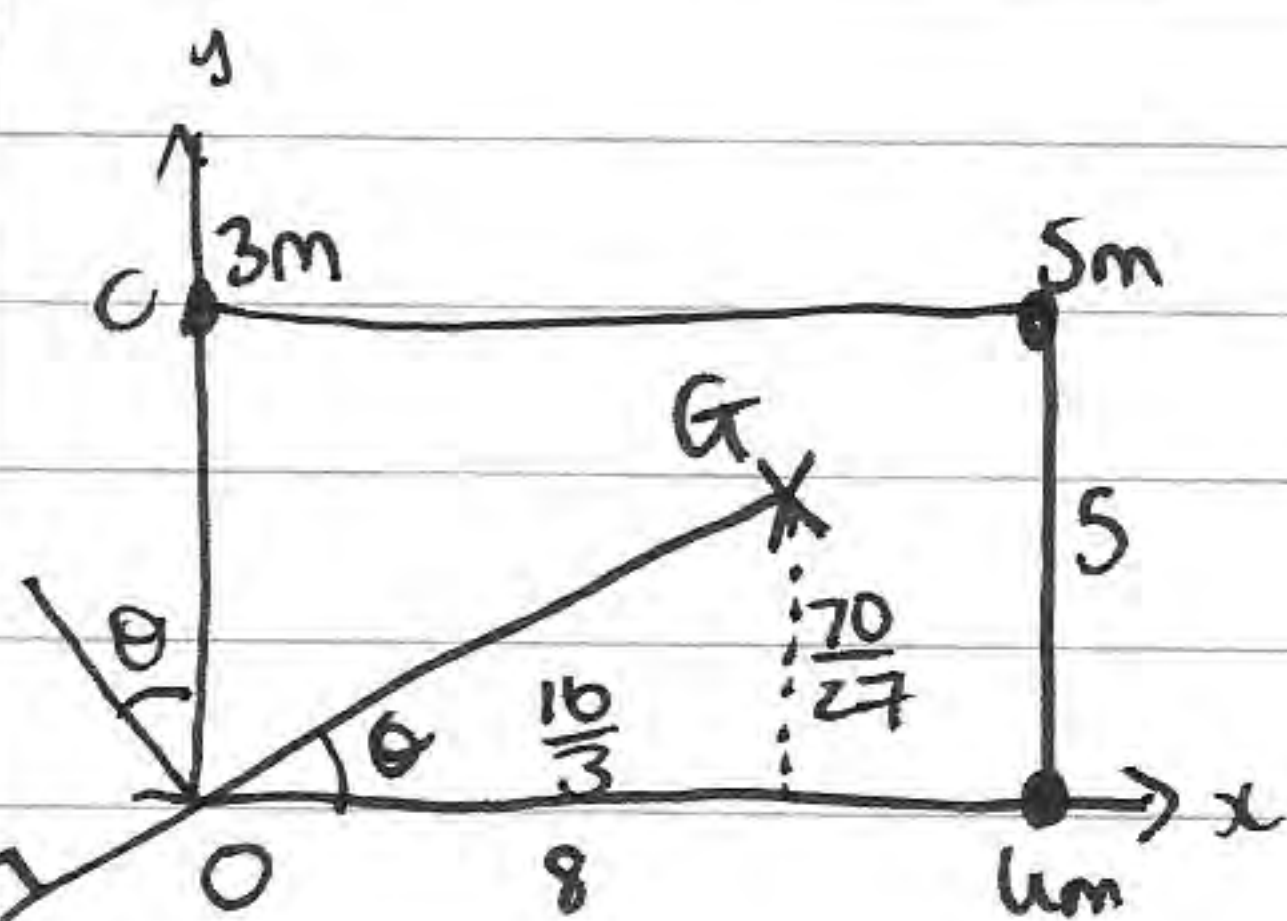
$$NRA = \frac{1}{4} W (4 - (\frac{2}{3})^2) = \frac{2}{3} W$$

$$\sin \alpha = \frac{\sqrt{5}}{3}$$

$$NR_c = \frac{3}{4} W (\frac{2}{3}) = \frac{1}{2} W$$

$$\Rightarrow \left(\frac{1}{2} W \right) \frac{\sqrt{5}}{3} = \mu \left(\frac{2}{3} W \right) \Rightarrow \frac{\sqrt{5}}{6} = \frac{2}{3} \mu \Rightarrow \mu = \frac{\sqrt{5}}{4}$$

6



$$3mg \times 0 + 5mg \times 8 + 6mg \times 8 = (8+6)mg \times \bar{x}$$

$$\Rightarrow 40 + 8u = (8+u) \times 6.4$$

$$\Rightarrow 1.6u = 11.2$$

$$\Rightarrow u = 7 \#$$

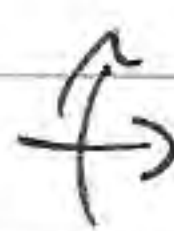
$$c) \theta = \tan^{-1} \left(\frac{\frac{70}{27}}{\frac{16}{3}} \right)$$



$$15mg \times 6.4 + 12mg \times 4 = 27mg \times \bar{x}$$

$$\bar{x} = \frac{16}{3}$$

$$\theta = \tan^{-1} \left(\frac{35}{72} \right)$$



$$7mg \times 0 + 5mg \times 5 + 3mg \times 5 + 12mg \times 2.5 = 27mg \bar{y}$$

$$\Rightarrow 70 = 27\bar{y} \Rightarrow \bar{y} = \frac{70}{27} \quad G \left(\frac{16}{3}, \frac{70}{27} \right)$$

$$\theta = 25.9^\circ (35f)$$

7) $\textcircled{v \downarrow}$ $u \downarrow = 25 \sin 30 = 12.5$
 $a \downarrow = 9.8$
 $s \downarrow = 12$

$$s = ut + \frac{1}{2}at^2$$

$$12 = 12.5t + 4.9t^2$$

$$4.9t^2 + 12.5t - 12 = 0$$

$$t = 0.743377\dots$$

\textcircled{H} $v_{el} = 25 \cos 30 = \frac{25\sqrt{3}}{2}$ $\alpha = OB$ $t = 0.743377\dots$
 $t = 0.74 (2sf)$

b) $OB = \frac{25\sqrt{3}}{2} \times 0.743377\dots = 16.1 \Rightarrow TB = \underline{1.1 \text{ m}} (2sf)$

c) \textcircled{H} $\alpha = 1s$ $v_{el} = \frac{25\sqrt{3}}{2} \Rightarrow t = \frac{1s}{\frac{25\sqrt{3}}{2}} = \frac{6}{5\sqrt{3}}$

$\textcircled{v \downarrow}$ $u \downarrow = 12.5$ $v \downarrow = u + at = 12.5 + 9.8 \times \frac{6}{5\sqrt{3}}$
 $a \downarrow = 9.8$
 $t = \frac{6}{5\sqrt{3}}$ $v \downarrow = 19.289639\dots$

