

M2 514 uu

1. Three particles of mass $3m$, $2m$ and km are placed at the points whose coordinates are $(1, 5)$, $(6, 4)$ and $(a, 1)$ respectively. The centre of mass of the three particles is at the point with coordinates $(3, 3)$.

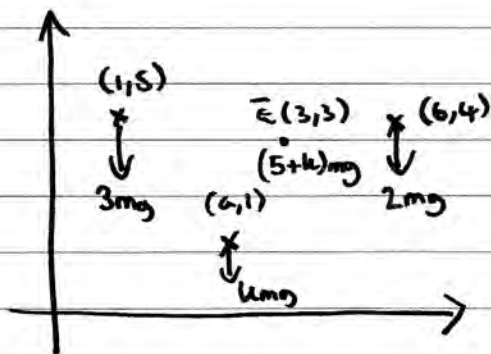
Find

(a) the value of k ,

(3)

(b) the value of a .

(3)



a) \rightarrow $kmg \times 1 + 3mg \times 5 + 2mg \times 6 = (5+k)mg \times 3$

$$\Rightarrow kmg + 23mg = 15mg + 3kmg$$

$$\Rightarrow 8mg = 2kmg \quad \therefore 2k = 8 \quad \therefore k = \frac{4}{2}$$

b) \uparrow $3mg \times 1 + kmg \times a + 2mg \times 6 = 9mg \times 3$

$$4mg a + 15mg = 27mg$$

$$4mg a = 12mg$$

$$a = 3$$

2. At time t seconds, where $t \geq 0$, a particle P is moving on a horizontal plane with acceleration $[(3t^2 - 4t)\mathbf{i} + (6t - 5)\mathbf{j}] \text{ m s}^{-2}$.

When $t = 3$ the velocity of P is $(11\mathbf{i} + 10\mathbf{j}) \text{ m s}^{-1}$.

Find

- (a) the velocity of P at time t seconds,

(5)

- (b) the speed of P when it is moving parallel to the vector \mathbf{i} .

(4)

$$a = \begin{pmatrix} 3t^2 - 4t \\ 6t - 5 \end{pmatrix}$$

$$v = \int a dt = \begin{pmatrix} t^3 - 2t^2 + c_1 \\ 3t^2 - 5t + c_2 \end{pmatrix}$$

$$t=3 \quad \begin{pmatrix} 9 + c_1 \\ 12 + c_2 \end{pmatrix} = \begin{pmatrix} 11 \\ 10 \end{pmatrix} \quad \therefore \begin{matrix} c_1 = 2 \\ c_2 = -2 \end{matrix}$$

$$\therefore v = \begin{pmatrix} t^3 - 2t^2 + 2 \\ 3t^2 - 5t - 2 \end{pmatrix}$$

b) moving parallel to $\mathbf{i} \rightarrow \Rightarrow$ \mathbf{j} component of v is 0

$$(3t^2 - 5t - 2) = 0 \quad (3t + 1)(t - 2) = 0 \quad \therefore t = 2$$

$$v = \begin{pmatrix} 2 \\ 0 \end{pmatrix} \quad \therefore \text{speed} = 2$$

3.

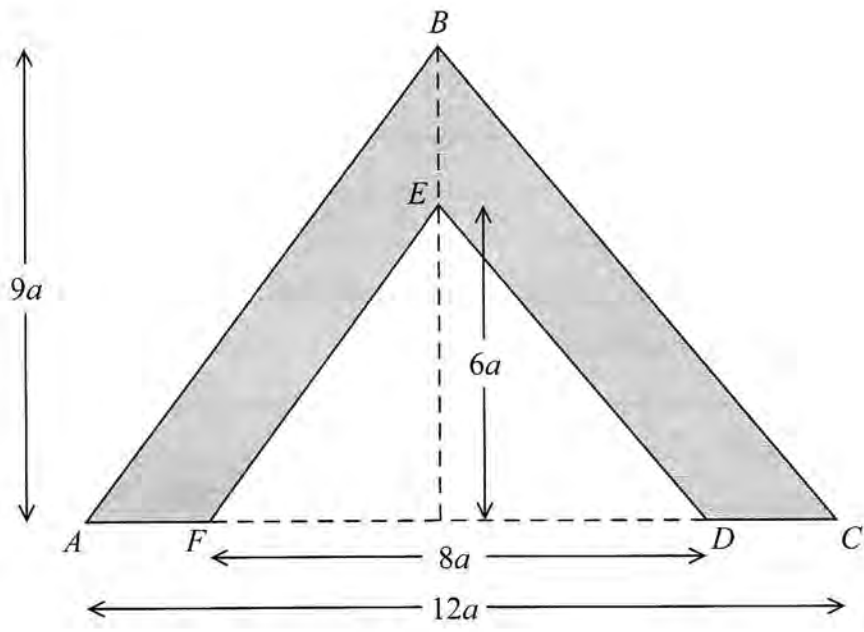


Figure 1

The uniform lamina $ABCDEF$, shown shaded in Figure 1, is symmetrical about the line through B and E . It is formed by removing the isosceles triangle FED , of height $6a$ and base $8a$, from the isosceles triangle ABC of height $9a$ and base $12a$.

(a) Find, in terms of a , the distance of the centre of mass of the lamina from AC . (5)

The lamina is freely suspended from A and hangs in equilibrium.

(b) Find, to the nearest degree, the size of the angle between AB and the downward vertical. (4)

mass per unit area $a^2 = u$



$G_1(0, 2a) \quad M = 24a^2u$



$G_2(0, \bar{y}) \quad M = 30a^2u$

$24a^2u \times 2a + 30a^2u \times \bar{y}$
 $= 54a^2u \times 3a$



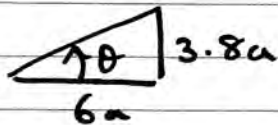
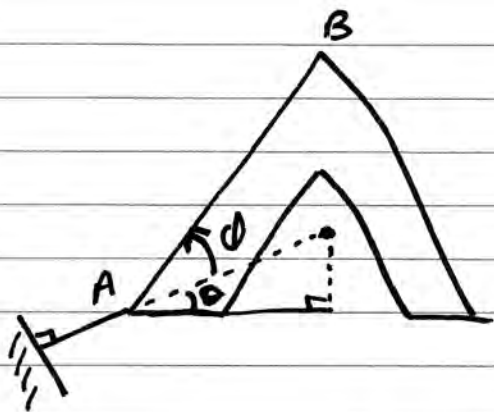
$G(0, 3a) \quad M = 54a^2u$

$\therefore 24 \times 2a + 30\bar{y} = 162a$

$30\bar{y} = 114a$

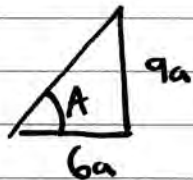
$\bar{y} = 3.8a$





$$\therefore \theta = \tan^{-1} \left(\frac{3.8}{6} \right) = 32.3^\circ$$

$$\approx \underline{\underline{32^\circ}}$$



$$A = \tan^{-1} \left(\frac{9a}{6a} \right) = 56.3$$

$$\therefore \theta = 56.3 - 32.3 \approx \underline{\underline{24^\circ}}$$

4. A truck of mass 1800 kg is towing a trailer of mass 800 kg up a straight road which is inclined to the horizontal at an angle α , where $\sin \alpha = \frac{1}{20}$. The truck is connected to the trailer by a light inextensible rope which is parallel to the direction of motion of the truck. The resistances to motion of the truck and the trailer from non-gravitational forces are modelled as constant forces of magnitudes 300 N and 200 N respectively. The truck is moving at constant speed $v \text{ m s}^{-1}$ and the engine of the truck is working at a rate of 40 kW.

(a) Find the value of v .

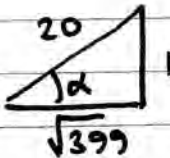
(5)

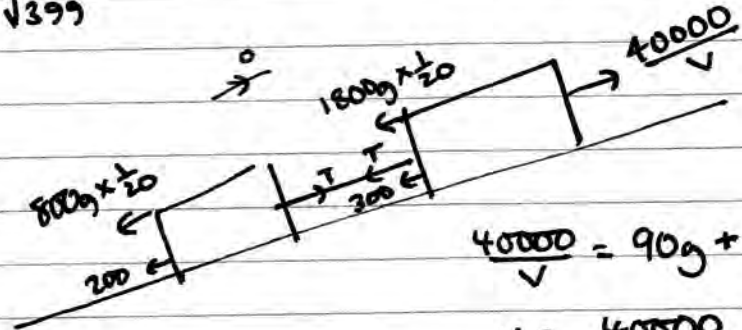
As the truck is moving up the road the rope breaks.

(b) Find the acceleration of the truck immediately after the rope breaks.

(4)

a)



$$\tan \alpha = \frac{1}{\sqrt{399}} \quad \cos \alpha = \frac{\sqrt{399}}{20}$$


$$\frac{40000}{v} = 90g + 40g + 300 + 200$$

$$v = \frac{40000}{1774} = 22.5 \text{ (3sf)}$$

b)

$$R_T = ma \quad \frac{40000}{1774} - 90g - 300 = 1800a$$

$$592 = 1800a \quad \therefore a = 0.329$$

5. A particle of mass m kg lies on a smooth horizontal surface. Initially the particle is at rest at a point O midway between a pair of fixed parallel vertical walls. The walls are 2 m apart. At time $t = 0$ the particle is projected from O with speed u m s⁻¹ in a direction perpendicular to the walls. The coefficient of restitution between the particle and each wall is $\frac{2}{3}$. The magnitude of the impulse on the particle due to the first impact with a wall is λmu N s.

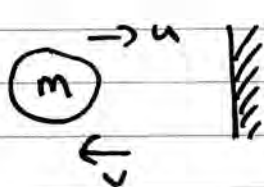
(a) Find the value of λ .

(3)

The particle returns to O , having bounced off each wall once, at time $t = 3$ seconds.

(b) Find the value of u .

(6)



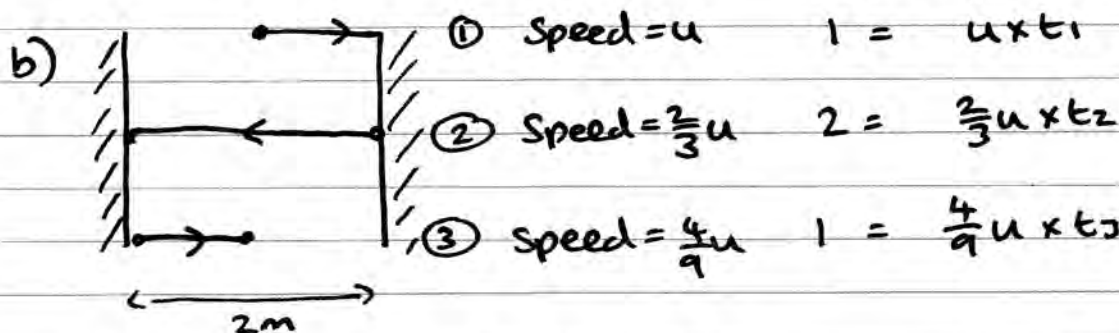
$$e = \frac{\text{Sep}}{\text{app}} = \frac{v}{u} = \frac{2}{3} \therefore v = \frac{2}{3}u$$

$$\text{Mom before} = mu$$

$$\text{Mom after} = m\left(-\frac{2}{3}u\right) = -\frac{2}{3}mu \therefore \text{Impulse} = \frac{5}{3}mu$$

$$\frac{5}{3}mu = \lambda mu \therefore \lambda = \frac{5}{3}$$

$$\text{Dist} = \text{Speed} \times \text{time}$$



$$t_1 = \frac{1}{u} \quad t_2 = \frac{3}{u} \quad t_3 = \frac{9}{4u} \quad t_1 + t_2 + t_3 = 3$$

$$\frac{1}{u} + \frac{3}{u} + \frac{9}{4u} = 3 \quad \frac{1 \times 4}{u \times 4} + \frac{9}{4u} = \frac{25}{4u} = 3$$

$$\therefore 25 = 12u \quad \therefore u = \frac{25}{12}$$

2

6.

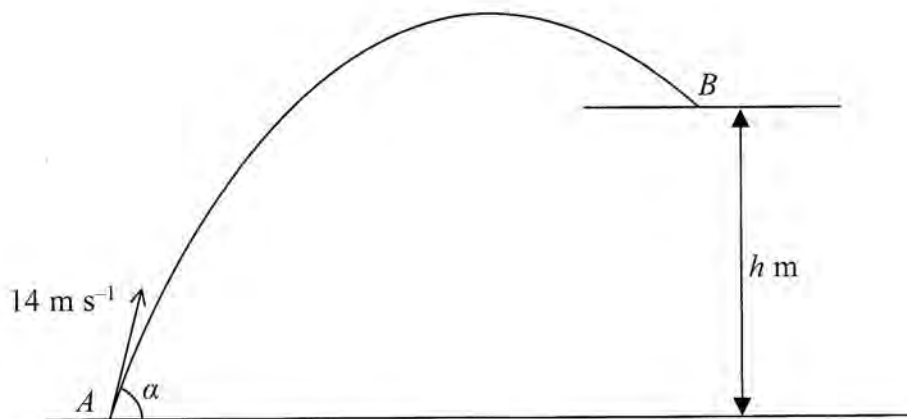


Figure 2

A small ball is projected with speed 14 m s^{-1} from a point A on horizontal ground. The angle of projection is α above the horizontal. A horizontal platform is at height h metres above the ground. The ball moves freely under gravity until it hits the platform at the point B , as shown in Figure 2. The speed of the ball immediately before it hits the platform at B is 10 m s^{-1} .

(a) Find the value of h .

(4)

Given that $\sin \alpha = 0.85$,

(b) find the horizontal distance from A to B .

(8)

$$\begin{array}{l} \vec{v} \uparrow \quad S = h \\ \quad \quad u = 14 \sin \alpha \\ \quad \quad \checkmark \\ \quad \quad a = -9.8 \\ \quad \quad t \end{array} \qquad \begin{array}{l} \vec{u} \rightarrow \quad \text{Dist} = x \\ \quad \quad \text{speed} = 14 \cos \alpha \end{array}$$

$$KE_A = \frac{1}{2} m (14)^2$$

$$PE_A = 0$$

$$\text{Total A} = 98m$$

$$KE_B = \frac{1}{2} m (10)^2$$

$$PE_B = mgh$$

$$\text{Total} = 9.8mh + 50m$$

$$CE \Rightarrow 98m = 9.8mh + 50m \Rightarrow 9.8h = 48 \Rightarrow h = \frac{240}{49}$$

$$b) \quad S = \frac{240}{49}$$

$$u = 14 \sin \alpha = 11.9$$

$$\checkmark$$

$$a = -9.8$$

$$t =$$

$$S = ut + \frac{1}{2} at^2$$

$$\frac{240}{49} = 11.9t - 4.9t^2$$

$$4.9t^2 - 11.9t + \frac{240}{49} = 0$$

$$t_1 = 0.525$$

$$t_2 = 1.903$$

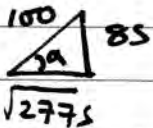
$$\hat{=} \frac{4.9m}{2}$$

$$\underline{2}$$

$$\vec{H} \quad x = 14 \cos \alpha \times 1.903 \dots$$

$$x = 14 \frac{\sqrt{2775}}{100} \times 1.903 \dots$$

$$x \approx 14 \text{ m}$$



$$\cos \alpha = \frac{\sqrt{2775}}{100}$$

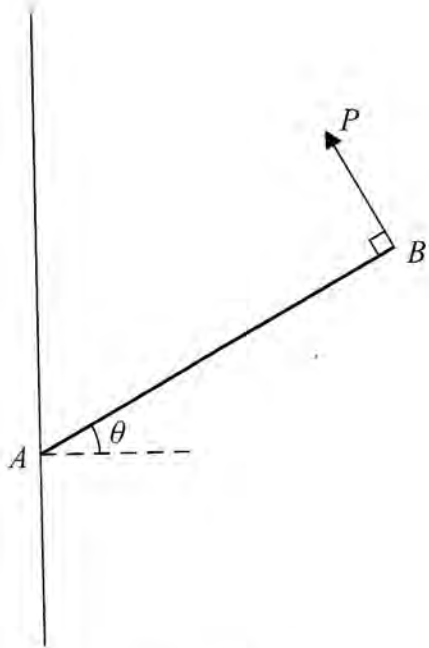


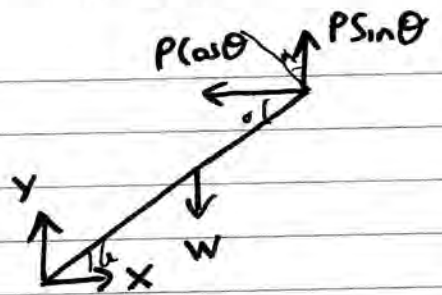
Figure 3

A uniform rod AB of weight W has its end A freely hinged to a point on a fixed vertical wall. The rod is held in equilibrium, at angle θ to the horizontal, by a force of magnitude P . The force acts perpendicular to the rod at B and in the same vertical plane as the rod, as shown in Figure 3. The rod is in a vertical plane perpendicular to the wall. The magnitude of the vertical component of the force exerted on the rod by the wall at A is Y .

(a) Show that $Y = \frac{W}{2}(2 - \cos^2 \theta)$. (6)

Given that $\theta = 45^\circ$

(b) find the magnitude of the force exerted on the rod by the wall at A , giving your answer in terms of W . (6)



$$\uparrow = \downarrow \Rightarrow Y + P \sin \theta = W$$

$$\rightarrow = \leftarrow \Rightarrow X = P \cos \theta$$

$$\text{A2 } W \times \frac{l}{2} \cos \theta = P \sin \theta \times l \cos \theta + P \cos \theta \times l \sin \theta$$

$$\frac{1}{2} W \cos \theta = P \times l \times \cos \theta$$

$$W \times \frac{l}{2} \cos \theta = 2l P \sin \theta \cos \theta$$

$$P = \frac{1}{2} W \cos \theta$$

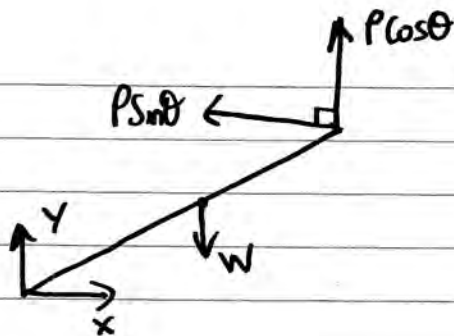
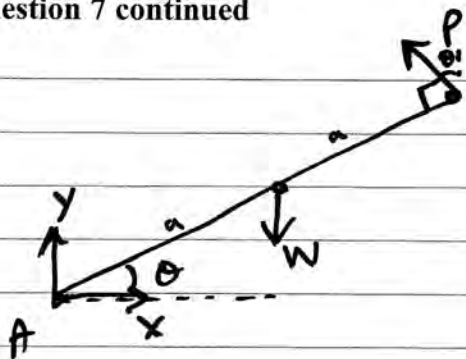
$$\frac{1}{2} W = 2 P \sin \theta$$

$$Y + \frac{1}{2} W \cos \theta \sin \theta = \frac{1}{2} W$$

$$\therefore P \sin \theta = \frac{1}{4} W$$

$$Y = \frac{1}{2} W (2 - \sin^2 \theta)$$

Question 7 continued



$$A^2 = W \times a \cos \theta = P \times 2a$$

$$P = \frac{1}{2} W \cos \theta$$

$$\Rightarrow Y = W - \frac{1}{2} W \cos^2 \theta$$

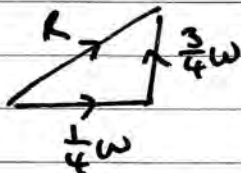
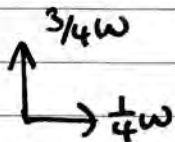
$$\therefore Y = \frac{1}{2} W (2 - \cos^2 \theta) \quad \#$$

$$\uparrow = \downarrow = Y + P \cos \theta = W$$

$$Y = W - P \cos \theta$$

b) $\theta \Rightarrow \cos 45 = \frac{\sqrt{2}}{2} \quad \cos^2 \theta = \frac{2}{4} = \frac{1}{2} \Rightarrow Y = \frac{3}{4} W$

$$\rightarrow = \leftarrow \quad X = P \sin 45 = \left[\frac{1}{2} W \left(\frac{\sqrt{2}}{2} \right) \right] \left(\frac{\sqrt{2}}{2} \right) = \frac{1}{4} W$$



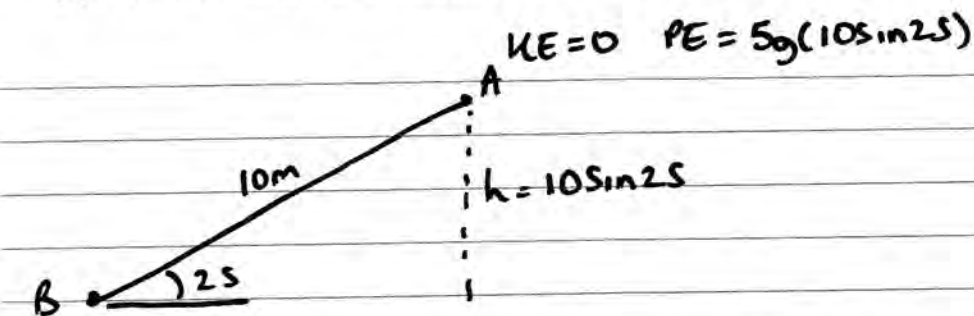
$$R^2 = \left(\frac{1}{4} W \right)^2 + \left(\frac{3}{4} W \right)^2$$

$$R^2 = \frac{5}{8} W^2 \quad \therefore R = \frac{1}{4} W \sqrt{10}$$

8. The points A and B are 10 m apart on a line of greatest slope of a fixed rough inclined plane, with A above B . The plane is inclined at 25° to the horizontal. A particle P of mass 5 kg is released from rest at A and slides down the slope. As P passes B , it is moving with speed 7 m s^{-1} .

(a) Find, using the work-energy principle, the work done against friction as P moves from A to B . (4)

(b) Find the coefficient of friction between the particle and the plane. (5)



$$PE = 0$$

$$KE = \frac{1}{2}(5)(7)^2$$

$$= 122.5$$

$$\text{Total A} - \text{Wd against } f = \text{total B}$$

$$207.0829... - \text{Wd } f = 122.5$$

$$\therefore \text{Wd } f = 84.6 \text{ N}$$

b) $\text{Wd } f = f_{\max} \times 10 \quad \therefore f_{\max} = 8.46 \dots$



$$5g \cos 25$$

$$\therefore f_{\max} = \mu NR$$

$$8.45829... = \mu \times 5g \cos 25$$

$$\therefore \mu = 0.19$$