

Centre No.						Paper Reference					Surname	Initial(s)	
Candidate No.						6	6	7	7	/	0	1	Signature

Paper Reference(s)
6677/01

Edexcel GCE

Mechanics M1

Advanced/Advanced Subsidiary

Wednesday 21 May 2008 – Afternoon
Time: 1 hour 30 minutes

Examiner's use only

--	--	--

Team Leader's use only

--	--	--

Question Number	Leave Blank
1	
2	
3	
4	
5	
6	
7	
8	
Total	

Materials required for examination **Items included with question papers**
Mathematical Formulae (Green) Nil

Candidates may use any calculator allowed by the regulations of the Joint Council for Qualifications. Calculators must not have the facility for symbolic algebra manipulation, differentiation and integration, or have retrievable mathematical formulae stored in them.

Instructions to Candidates

In the boxes above, write your centre number, candidate number, your surname, initials and signature. Check that you have the correct question paper.
Answer ALL the questions. Write your answers in the spaces provided in this question paper. If you need more space to complete your answer to any question, use additional answer sheets. Whenever a numerical value of g is required, take $g = 9.8 \text{ m s}^{-2}$.
When a calculator is used, the answer should be given to an appropriate degree of accuracy.

Information for Candidates

A booklet 'Mathematical Formulae and Statistical Tables' is provided.
Full marks may be obtained for answers to ALL questions.
The marks for individual questions and the parts of questions are shown in round brackets: e.g. (2).
There are 8 questions in this question paper. The total mark for this question paper is 75.
There are 24 pages in this question paper. Any blank pages are indicated.

Advice to Candidates

You must ensure that your answers to parts of questions are clearly labelled.
You should show sufficient working to make your methods clear to the Examiner.
Answers without working may not gain full credit.

This publication may be reproduced only in accordance with Edexcel Limited copyright policy.
©2008 Edexcel Limited.



Leave blank

4. A car is moving along a straight horizontal road. The speed of the car as it passes the point A is 25 m s^{-1} and the car maintains this speed for 30 s . The car then decelerates uniformly to a speed of 10 m s^{-1} . The speed of 10 m s^{-1} is then maintained until the car passes the point B . The time taken to travel from A to B is 90 s and $AB = 1410\text{ m}$.

(a) Sketch, in the space below, a speed-time graph to show the motion of the car from A to B . (2)

(b) Calculate the deceleration of the car as it decelerates from 25 m s^{-1} to 10 m s^{-1} . (7)



Leave
blank

5.

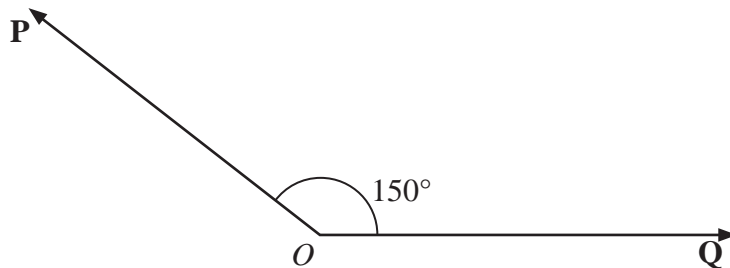


Figure 1

Two forces **P** and **Q** act on a particle at a point O . The force **P** has magnitude 15 N and the force **Q** has magnitude X newtons. The angle between **P** and **Q** is 150° , as shown in Figure 1. The resultant of **P** and **Q** is **R**.

Given that the angle between **R** and **Q** is 50° , find

(a) the magnitude of **R**, (4)

(b) the value of X . (5)



Leave blank

6.

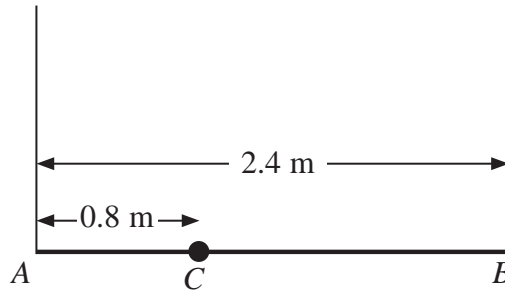


Figure 2

A plank AB has mass 12 kg and length 2.4 m . A load of mass 8 kg is attached to the plank at the point C , where $AC = 0.8 \text{ m}$. The loaded plank is held in equilibrium, with AB horizontal, by two vertical ropes, one attached at A and the other attached at B , as shown in Figure 2. The plank is modelled as a uniform rod, the load as a particle and the ropes as light inextensible strings.

- (a) Find the tension in the rope attached at B . (4)

The plank is now modelled as a non-uniform rod. With the new model, the tension in the rope attached at A is 10 N greater than the tension in the rope attached at B .

- (b) Find the distance of the centre of mass of the plank from A . (6)



Leave
blank

Question 6 continued

Lined writing area consisting of approximately 30 horizontal lines.



Leave blank

7.

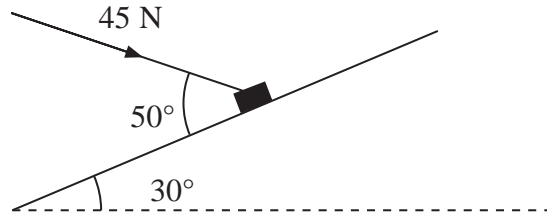


Figure 3

A package of mass 4 kg lies on a rough plane inclined at 30° to the horizontal. The package is held in equilibrium by a force of magnitude 45 N acting at an angle of 50° to the plane, as shown in Figure 3. The force is acting in a vertical plane through a line of greatest slope of the plane. The package is in equilibrium on the point of moving up the plane. The package is modelled as a particle. Find

- (a) the magnitude of the normal reaction of the plane on the package, (5)
- (b) the coefficient of friction between the plane and the package. (6)



Leave
blank

Question 7 continued

Handwriting lines for the answer to Question 7.



Leave blank

8.




Figure 4

Two particles P and Q , of mass 2 kg and 3 kg respectively, are joined by a light inextensible string. Initially the particles are at rest on a rough horizontal plane with the string taut. A constant force F of magnitude 30 N is applied to Q in the direction PQ , as shown in Figure 4. The force is applied for 3 s and during this time Q travels a distance of 6 m. The coefficient of friction between each particle and the plane is μ . Find

- (a) the acceleration of Q , (2)
- (b) the value of μ , (4)
- (c) the tension in the string. (4)
- (d) State how in your calculation you have used the information that the string is inextensible. (1)

When the particles have moved for 3 s, the force F is removed.

- (e) Find the time between the instant that the force is removed and the instant that Q comes to rest. (4)



Leave
blank

Question 8 continued

Q8

(Total 15 marks)

TOTAL FOR PAPER: 75 MARKS

END

