

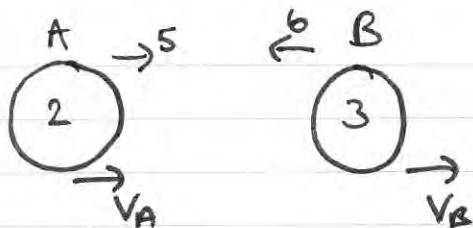
1. Two particles  $A$  and  $B$ , of mass  $2\text{ kg}$  and  $3\text{ kg}$  respectively, are moving towards each other in opposite directions along the same straight line on a smooth horizontal surface. The particles collide directly. Immediately before the collision the speed of  $A$  is  $5\text{ m s}^{-1}$  and the speed of  $B$  is  $6\text{ m s}^{-1}$ . The magnitude of the impulse exerted on  $B$  by  $A$  is  $14\text{ N s}$ . Find

(a) the speed of  $A$  immediately after the collision,

(3)

(b) the speed of  $B$  immediately after the collision.

(3)



$$\begin{aligned} \text{Mom A before} &= 10 & \Rightarrow \text{Impulse} = 14 & \therefore 2v_A = -4 \\ \text{Mom A after} &= 2v_A & & \underline{v_A = -2} \end{aligned}$$

$$\text{b) CLM} \quad 5 \times 2 + 3 \times -6 = 2 \times -2 + 3v_B$$

$$\Rightarrow -8 = -4 + 3v_B \Rightarrow 3v_B = -4 \therefore v_B = -\frac{4}{3}$$

2.

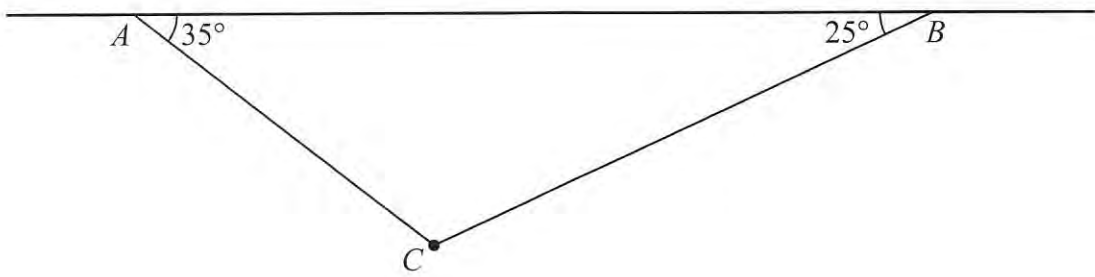
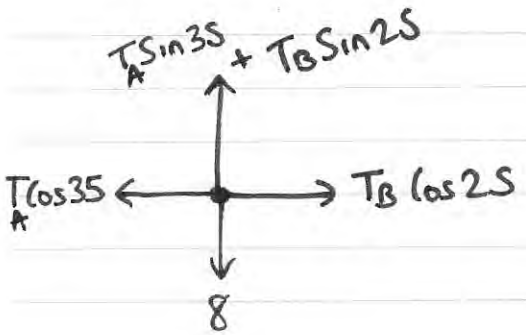


Figure 1

A particle of weight 8 N is attached at C to the ends of two light inextensible strings AC and BC. The other ends, A and B, are attached to a fixed horizontal ceiling. The particle hangs at rest in equilibrium, with the strings in a vertical plane. The string AC is inclined at 35° to the horizontal and the string BC is inclined at 25° to the horizontal, as shown in Figure 1. Find

- (i) the tension in the string AC,
- (ii) the tension in the string BC.

(8)



$$\vec{R}_F = 0 \therefore T_A \cos 35^\circ = T_B \cos 25^\circ$$

$$\Rightarrow T_B = \frac{T_A \cos 35^\circ}{\cos 25^\circ}$$

$$R_{\uparrow} = 0 \Rightarrow T_A \sin 35^\circ + T_B \sin 25^\circ = 8$$

$$\Rightarrow T_A \sin 35^\circ + \frac{T_A \cos 35^\circ \sin 25^\circ}{\cos 25^\circ} = 8$$

$$\Rightarrow 0.9555533 T_A = 8 \Rightarrow T_A = \underline{8.37 \text{ N}}$$

$$T_B = \underline{7.57 \text{ N}}$$

3.

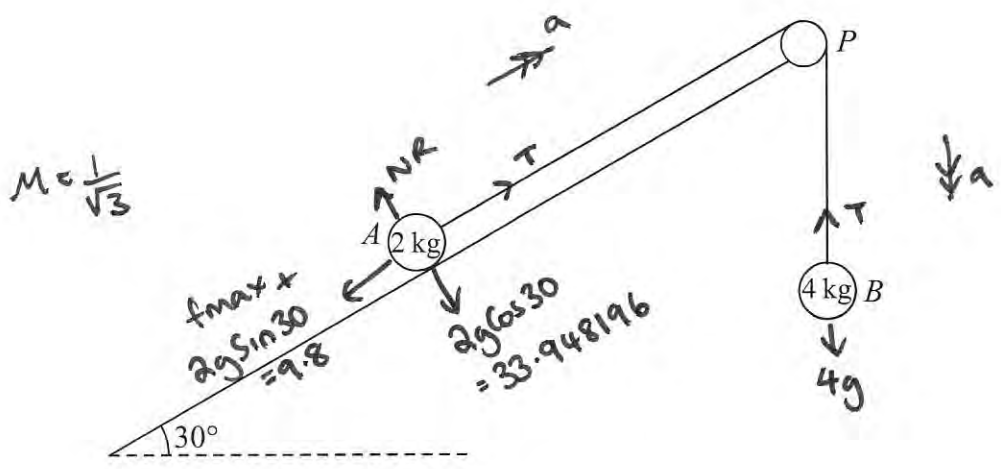


Figure 2

A fixed rough plane is inclined at  $30^\circ$  to the horizontal. A small smooth pulley  $P$  is fixed at the top of the plane. Two particles  $A$  and  $B$ , of mass  $2 \text{ kg}$  and  $4 \text{ kg}$  respectively, are attached to the ends of a light inextensible string which passes over the pulley  $P$ . The part of the string from  $A$  to  $P$  is parallel to a line of greatest slope of the plane and  $B$  hangs freely below  $P$ , as shown in Figure 2. The coefficient of friction between  $A$  and the plane is  $\frac{1}{\sqrt{3}}$ . Initially  $A$  is held at rest on the plane. The particles are released from rest with the string taut and  $A$  moves up the plane.

Find the tension in the string immediately after the particles are released.

(9)

$$NR = 33.948196 \Rightarrow f_{max} = \mu NR = \frac{1}{\sqrt{3}} (2g) \cos 30 = g$$

(A)  $\Rightarrow$  total force down the plane =  $T - f_{max} - 2g \sin 30 = 2g$

(B)  $4g - T = 4a$

(A)  $T - 2g = 2a$

(A) & (B)  $4g - T = 4a \Rightarrow 4g - T = 2T - 4g$

$\therefore 3T = 8g$   
 $\therefore T = \frac{8}{3}g$

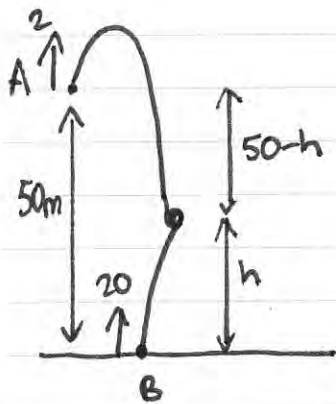
4. At time  $t = 0$ , two balls  $A$  and  $B$  are projected vertically upwards. The ball  $A$  is projected vertically upwards with speed  $2 \text{ m s}^{-1}$  from a point  $50 \text{ m}$  above the horizontal ground. The ball  $B$  is projected vertically upwards from the ground with speed  $20 \text{ m s}^{-1}$ . At time  $t = T$  seconds, the two balls are at the same vertical height,  $h$  metres, above the ground. The balls are modelled as particles moving freely under gravity. Find

(a) the value of  $T$ ,

(5)

(b) the value of  $h$ .

(2)



$$\textcircled{A} \quad S = -(50-h)$$

$$u = 2$$

$$v$$

$$a = -9.8$$

$$t = T$$

$$\textcircled{B} \quad S = h$$

$$u = 20$$

$$v$$

$$a = -9.8$$

$$t = T$$

$$S = ut + \frac{1}{2}at^2 \Rightarrow h - 50 = 2T - 4.9T^2 \quad \textcircled{A}$$

$$h = 20T - 4.9T^2 \quad \textcircled{B} \quad 4.9T^2 = 20T - h$$

$$\Rightarrow h - 50 = 2T + h - 20T \Rightarrow -50 = -18T \therefore T = \frac{25}{9} \text{ sec}$$

$$\text{b) } h = 20\left(\frac{25}{9}\right) - 4.9\left(\frac{25}{9}\right)^2 = \underline{\underline{17.7 \text{ m}}}$$

5.

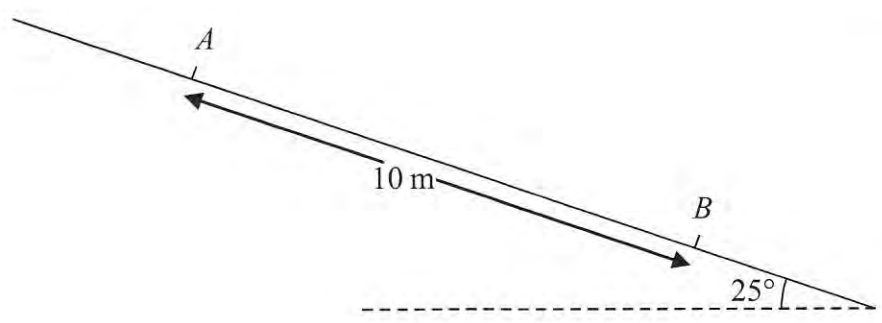
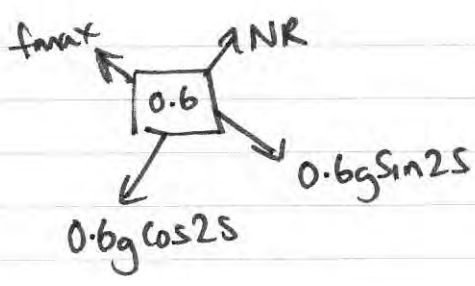


Figure 3

A particle  $P$  of mass  $0.6$  kg slides with constant acceleration down a line of greatest slope of a rough plane, which is inclined at  $25^\circ$  to the horizontal. The particle passes through two points  $A$  and  $B$ , where  $AB = 10$  m, as shown in Figure 3. The speed of  $P$  at  $A$  is  $2 \text{ m s}^{-1}$ . The particle  $P$  takes  $3.5$  s to move from  $A$  to  $B$ . Find

- (a) the speed of  $P$  at  $B$ , (3)
- (b) the acceleration of  $P$ , (2)
- (c) the coefficient of friction between  $P$  and the plane. (5)



$$NR = 5.329089788$$

$$\therefore f_{max} = 5.3290898\mu$$

$$Rf \downarrow = ma$$

$$\Rightarrow 2.484995 - 5.3290898\mu = 0.6a$$

$$s = 10 \quad s = ut + \frac{1}{2}at^2 \Rightarrow 10 = 7 + \frac{1}{2}a(3.5)^2$$

$$u = 2$$

$$v \quad a \quad b) \therefore a = \frac{24}{49}$$

$$t = 3.5 \quad a) v = u + at \quad v = 2 + \left(\frac{24}{49}\right)\left(\frac{7}{2}\right) = \frac{26}{7}$$

$$c) 2.484995 - 0.6\left(\frac{24}{49}\right) = 5.3290898\mu$$

$$\therefore \mu = 0.41 \text{ (2sf)}$$

6. [In this question **i** and **j** are horizontal unit vectors due east and due north respectively. Position vectors are given with respect to a fixed origin *O*.]

A ship *S* is moving with constant velocity  $(3\mathbf{i} + 3\mathbf{j}) \text{ km h}^{-1}$ . At time  $t = 0$ , the position vector of *S* is  $(-4\mathbf{i} + 2\mathbf{j}) \text{ km}$ .

(a) Find the position vector of *S* at time  $t$  hours. (2)

A ship *T* is moving with constant velocity  $(-2\mathbf{i} + n\mathbf{j}) \text{ km h}^{-1}$ . At time  $t = 0$ , the position vector of *T* is  $(6\mathbf{i} + \mathbf{j}) \text{ km}$ . The two ships meet at the point *P*.

(b) Find the value of  $n$ . (5)

(c) Find the distance *OP*. (4)

a)  $v = \begin{pmatrix} 3 \\ 3 \end{pmatrix}$        $s = \begin{pmatrix} -4 \\ 2 \end{pmatrix} + t \begin{pmatrix} 3 \\ 3 \end{pmatrix}$

b)  $T = \begin{pmatrix} 6 \\ 1 \end{pmatrix} + t \begin{pmatrix} -2 \\ n \end{pmatrix}$        $6 - 2t = -4 + 3t$   
 $10 = 5t$        $t = 2$

$2 + 3t = 1 + tn \Rightarrow 2 + 6 = 1 + 2n \Rightarrow 2n = 7 \Rightarrow n = 3.5$

c)  $p = \begin{pmatrix} -4 \\ 2 \end{pmatrix} + \begin{pmatrix} 6 \\ 6 \end{pmatrix} = \begin{pmatrix} 2 \\ 8 \end{pmatrix}$        $\vec{OP} = \sqrt{2^2 + 8^2}$   
 $= 8.25 \text{ km (3sf)}$

7.

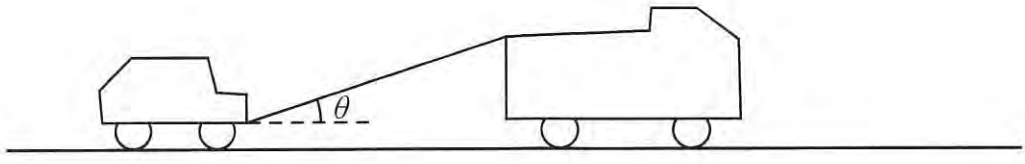


Figure 4

A truck of mass 1750 kg is towing a car of mass 750 kg along a straight horizontal road. The two vehicles are joined by a light towbar which is inclined at an angle  $\theta$  to the road, as shown in Figure 4. The vehicles are travelling at  $20 \text{ m s}^{-1}$  as they enter a zone where the speed limit is  $14 \text{ m s}^{-1}$ . The truck's brakes are applied to give a constant braking force on the truck. The distance travelled between the instant when the brakes are applied and the instant when the speed of each vehicle is  $14 \text{ m s}^{-1}$  is 100 m.

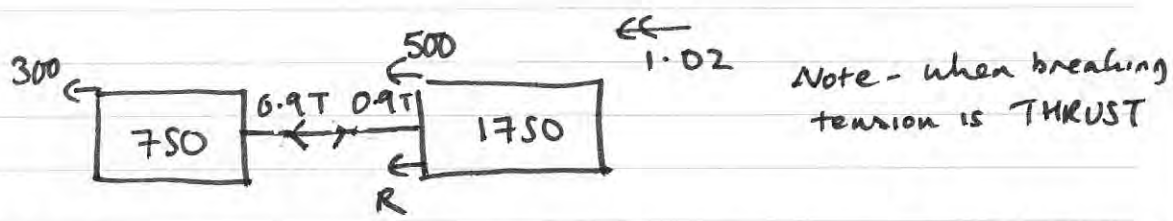
(a) Find the deceleration of the truck and the car. (3)

The constant braking force on the truck has magnitude  $R$  newtons. The truck and the car also experience constant resistances to motion of 500 N and 300 N respectively. Given that  $\cos \theta = 0.9$ , find

(b) the force in the towbar, (4)

(c) the value of  $R$ . (4)

$$\begin{aligned}
 s &= 100 & v^2 &= u^2 + 2as & 196 &= 400 + 200a \\
 u &= 20 \\
 v &= 14 & \Rightarrow & 200a = -204 & \Rightarrow & a = \underline{\underline{-1.02}} \\
 a & & & & & \\
 t & & & & & \therefore \text{deceleration} = \underline{\underline{1.02}}
 \end{aligned}$$



c) whole system  $R + 500 + 300 + 0.9T - 0.9T = 2500 \times 1.02$   
 $\Rightarrow R + 800 = 2550 \therefore R = \underline{\underline{1750 \text{ N}}}$

b) Car  $300 + 0.9T = 750(1.02) \Rightarrow \text{Thrust} = 517 \text{ N}$   
~~300 = 750~~ (3sf)

8.

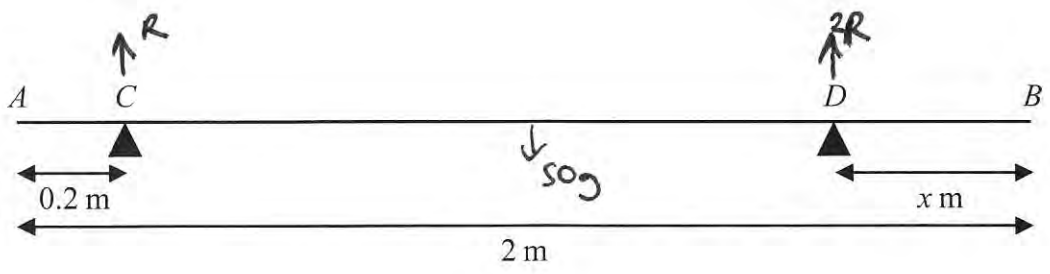


Figure 5

A uniform rod  $AB$  has length 2 m and mass 50 kg. The rod is in equilibrium in a horizontal position, resting on two smooth supports at  $C$  and  $D$ , where  $AC = 0.2$  metres and  $DB = x$  metres, as shown in Figure 5. Given that the magnitude of the reaction on the rod at  $D$  is twice the magnitude of the reaction on the rod at  $C$ ,

(a) find the value of  $x$ . (6)

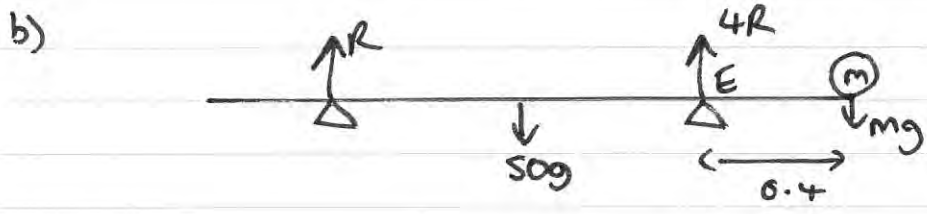
The support at  $D$  is now moved to the point  $E$  on the rod, where  $EB = 0.4$  metres. A particle of mass  $m$  kg is placed on the rod at  $B$ , and the rod remains in equilibrium in a horizontal position. Given that the magnitude of the reaction on the rod at  $E$  is four times the magnitude of the reaction on the rod at  $C$ ,

(b) find the value of  $m$ . (7)

a)  $\uparrow = \downarrow \Rightarrow 3R = 50g \quad R = \frac{50}{3}g \quad 2R = \frac{100}{3}g.$

$B \curvearrowright \quad \frac{100}{3}g \times x + \frac{50}{3}g \times 1.8 = 50g \times 1$

$\Rightarrow \frac{100}{3}g \times x = 20g \quad \therefore x = \underline{0.6 \text{ m}}$



$B \curvearrowright \quad 4R \times 0.4 + R \times 1.8 = 50g \times 1 \quad \Rightarrow 3.4R = 50g$

$\therefore R = \frac{250}{17}g$

$\uparrow = \downarrow \Rightarrow 5R = 50g + mg \quad \Rightarrow \frac{1250}{17}g = \frac{850}{17}g + mg$

$\therefore m = \frac{400}{17} \quad \underline{23.5 \text{ kg}} \quad (3sf)$