

MECHANICS (A) UNIT 1**TEST PAPER 7**

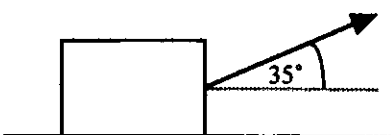
Take $g = 9.8 \text{ ms}^{-2}$ and give all answers correct to 3 significant figures where necessary.

- Briefly define the following terms used in modelling in Mechanics:
 - lamina,
 - uniform rod,
 - smooth surface,
 - particle.

(4 marks)
- Two forces \mathbf{F} and \mathbf{G} are given by $\mathbf{F} = (6\mathbf{i} - 5\mathbf{j}) \text{ N}$, $\mathbf{G} = (3\mathbf{i} + 17\mathbf{j}) \text{ N}$, where \mathbf{i} and \mathbf{j} are unit vectors in the x and y directions respectively and the unit of length on each axis is 1 cm.
 - Find the magnitude of \mathbf{R} , the resultant of \mathbf{F} and \mathbf{G} . **(3 marks)**
 - Find the angle between the direction of \mathbf{R} and the positive x -axis. **(2 marks)**

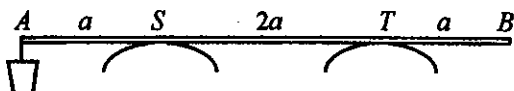
\mathbf{R} acts through the point $P(-4, 3)$. O is the origin $(0, 0)$.

 - Use the fact that OP is perpendicular to the line of action of \mathbf{R} to calculate the moment of \mathbf{R} about an axis through the origin and perpendicular to the x - y plane. **(3 marks)**

- A string is attached to a packing case of mass 12 kg, which is at rest on a rough horizontal plane. When a force of magnitude 50 N is applied at the other end of the string, and the string makes an angle of 35° with the vertical as shown, the case is on the point of moving.
 
 - Find the coefficient of friction between the case and the plane. **(5 marks)**

The force is now increased, with the string at the same angle, and the case starts to move along the plane with constant acceleration, reaching a speed of 2 ms^{-1} after 4 seconds.

 - Find the magnitude of the new force. **(5 marks)**
 - State any modelling assumptions you have made about the case and the string. **(2 marks)**

- A uniform yoke AB , of mass 4 kg and length $4a \text{ m}$, rests on the shoulders S and T of two oxen. 

$AS = TB = a \text{ m}$. A bucket of mass $x \text{ kg}$ is suspended from A .

 - Show that the vertical force on the yoke at T has magnitude $(2 - \frac{1}{2}x)g \text{ N}$ and find, in terms of x and g , the vertical force on the yoke at S . **(7 marks)**
 - If the ratio of these vertical forces is $5 : 1$, find the value of x . **(3 marks)**
 - Find the maximum value of x for which the yoke will remain horizontal. **(2 marks)**

- Two small smooth spheres A and B , of equal radius but masses $m \text{ kg}$ and $km \text{ kg}$ respectively, where $k > 1$, move towards each other along a straight line and collide directly. Immediately before the collision, A has speed 5 m s^{-1} and B has speed 3 m s^{-1} . In the collision, the impulse exerted by A on B has magnitude $7km \text{ N s}$.

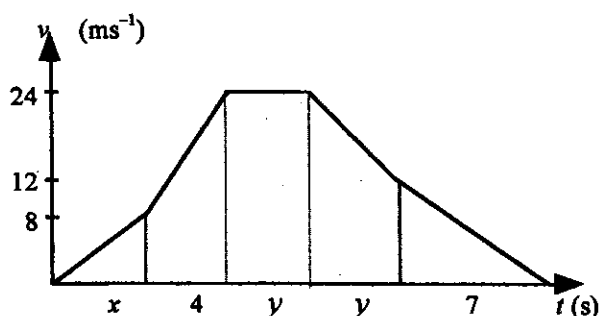
Q. 5 continued on next page ...

MECHANICS 1 (A) TEST PAPER 7 Page 2

5. continued ...

(a) Find the speed of B after the impact. **(3 marks)**(b) Show that the speed of A immediately after the collision is $(7k - 5) \text{ ms}^{-1}$ and deduce that the direction of A 's motion is reversed. **(5 marks)** B is now given a further impulse of magnitude $mu \text{ Ns}$, as a result of which a second collision between it and A occurs.(c) Show that $u > k(7k - 1)$. **(4 marks)**

6.

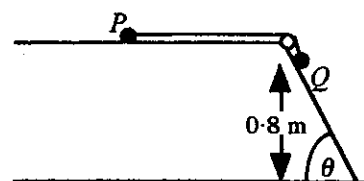


The velocity-time graph illustrates the motion of a particle which accelerates from rest to 8 ms^{-1} in x seconds and then to 24 ms^{-1} in a further 4 seconds. It then travels at a constant speed for another y seconds before decelerating to 12 ms^{-1} over the next y seconds and then to rest in the final 7 seconds of its motion.

Given that the total distance travelled by the particle is 496 m,

(a) show that $2x + 21y = 195$. **(4 marks)**Given also that the average speed of the particle during its motion is 15.5 ms^{-1} ,(b) show that $x + 2y = 21$. **(3 marks)**(c) Hence find the values of x and y , **(3 marks)**(d) Write down the acceleration for each section of the motion. **(3 marks)**

7. Two particles P and Q , of masses $2m$ and $3m$ respectively, are connected by a light string. Initially, P is at rest on a smooth horizontal table. The string passes over a small smooth pulley and Q rests on a rough plane inclined at an angle θ to the horizontal, where $\tan \theta = \frac{4}{3}$. The coefficient of friction between Q and the inclined plane is $\frac{1}{6}$.

The system is released from rest with Q at a distance of 0.8 metres above a horizontal floor.(a) Show that the acceleration of P and Q is $\frac{21g}{50}$, stating a modelling assumption which you must make to ensure that both particles have the same acceleration. **(7 marks)**(b) Find the speed with which Q hits the floor. **(2 marks)**After Q hits the floor and does not rebound, P moves a further 0.2 m until it hits the pulley.(c) Find the total time after the system is released before P hits the pulley. **(5 marks)**