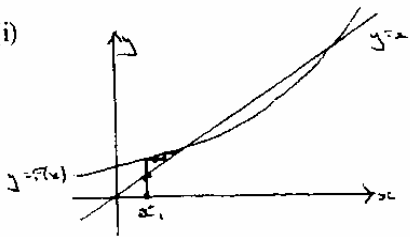


OCR Maths FP2

Mark Scheme Pack

2006-2014

4726 FP2	MARK SCHEME	January 2006	Final Draft
1(i) Use standard $\ln(1+3x) = 3x - \frac{(3x)^2}{2} + \frac{(3x)^3}{3}$	M1	Allow e.g. $3x^2, 2!$ etc.	
	M1	Attempt to simplify $(3x)^2$ etc.	
$= 3x - 9x^2/2 + 9x^3$	A1	cao	
(ii) Produce $(1 + x + x^2/2)$	B1		
	M1	Mult. 2 reasonable attempts, each of 3 terms (non-zero)	
Get $3x - 3x^2/2 + 6x^3$	A1√	From their series	
	SC M1	Reasonable attempt at diff. and replace $x = 0$ (2 correct)	
	M1√	Put <u>their</u> values into correct Maclaurin expansion	
	A1	cao	
		(Applies to either/both parts)	
2 Write as $f(x) = \pm(x - e^{-x})$	B1	Or equivalent	
So $f'(x) = \pm(1 + e^{-x})$	B1	Correct from their $f(x)$	
Use $x_{n+1} = x_n - f(x_n)/f'(x_n)$ with $x_0 = 0.5$	M1	Clear evidence of N-R on their f, f'	
Get $x_1 = 0.56631, x_2 = 0.56714$	A1√	At least one to 4d.p.	
Get $x_3 = 0.567(1)$	A1	cao to 3 d.p.	
3 Use $A/x + (Bx + C)/(x^2 + 2)$	B1		
Equate $x+6$ to $A(x^2 + 2) + (Bx+C)x$ (or equiv.)	M1√	Equate to their P.F. (e.g. if $B = 0$ or $C = 0$ used)	
Use $x = 0$ or equiv. for A (or equate coeff.etc.)	M1√	Include cover-up	
Correctly find one of B,C	A1		
Get $A=3, B=-3, C=1$	A1		
4(i)	B1	Line from x_1 to curve	
	B1	Then to line	
	B1	Clear explanation; allow use of step/staircase	
(ii)(a) Converges to $x=a$	B1, B1		
(b) Diverges (does not give either root)	B1		
5 (i) Give $x = -2$	B1		
Attempt to divide out	M1	Giving $y = x+k$; allow $k = 0$ here	
Get $y = x + 1$	A1	Must be =	
(ii) Write as quad. $x^2 + x(3 - y) + (3 - 2y) = 0$	M1	SC Differentiate M1	
Use for real $x, b^2 - 4ac \geq 0$	M1	Solve $dy/dx = 0$ M1	
Produce quad. inequality in y	M1	Get 2 x, y values correct A1	
Attempt to solve quad. inequality	M1	Attempt at max/min M1	
Get A.G. clearly e.g. graph	A1	Justify, e.g. graph, constraints on y A1	

- 6 (i) Use parts to $(-e^{-x}.x^n - \int -e^{-x}.nx^{n-1} dx)$ M1 Reasonable attempt e.g. $+e^{-x}$
 A1 cao
 Use limits to get e^{-1} B1 Allow \pm
 Tidy correctly to A.G. A1
- (ii) Use $I_3 = 3I_2 - e^{-1}$ B1 One such seen
 $I_2 = 2I_1 - e^{-1}$
 $I_1 = I_0 - e^{-1}$
 Work out $I_0 = 1 - e^{-1}$ or $I_1 = 1 - 2e^{-1}$ M1,A1
 Get $6 - 16e^{-1}$ A1
- 7 (i) Area under graph = $\int \sqrt{x} dx$ B1 Explain RHS (limits need not be specified)
 $>$ Sum of areas of rectangles from 1 to $N+1$ B1
 Area of each rect. = Width x Height = $1 \times \sqrt{x}$ B1
- (ii) Similarly, area under curve from 0 to N B1
 $<$ sum of areas of rect. from 0 to N B1
 Clear explanation of A.G. B1
- (iii) Integrate $x^{0.5}$ and use 2 different sets of limits M1,M1
 Get area between $\frac{2}{3}((N+1)^{1.5}-1)$ and
 $\frac{2}{3}N^{1.5}$ A1
- 8 (i) Max. $r = 2$ at $\theta = 0$ and π B1,B1 Two θ needed (rads only);
 ignore θ out of range
- (ii) Solve $r = 0$ for θ , giving $\theta = \frac{1}{2}\pi$ and $\frac{3}{2}\pi$ M1,A1 Two θ needed (rads only);
 ignore θ out of range
- (iii) Use correct formula with correct r M1
 Expand r M1
 Get $\int A + B \cos 2\theta + C \cos 4\theta d\theta$ M1 $C \neq 0$
 Integrate their expression correctly M1 $\sqrt{\quad}$
 Get $3\pi/8$ A1 cao
- (iv) Express $\cos 2\theta = \cos^2\theta - \sin^2\theta$ or similar M1
 Use $\cos \theta = x/r$ and/or $\sin \theta = y/r$ M1
 Simplify to $(x^2 + y^2)^{1.5} = 2x^2$ or similar M1,A1
- 9 (i) Correct defⁿ of cosh x and sinh x B1,B1
 Expand $2 \cdot \frac{1}{2} (e^x - e^{-x}) \cdot \frac{1}{2} (e^x + e^{-x})$ M1 Reasonable attempt
 Clearly get $\frac{1}{2} (e^{2x} - e^{-2x})$ to A.G. A1
- (ii) Attempt to diff. and solve $dy/dx = 0$ M1 Reasonable attempt
 Use (i) to get $A \cosh x (B \sinh x + C) = 0$ M1
 Clearly see $\cosh x > 0$ or similar for one useable factor only B1
 Attempt to solve $\sinh x = -C/B$ M1 Quote or via e^{-x} correctly
 Get $x = \ln((3+\sqrt{13})/2)$ A1
 Justify one answer only for $\sinh x = -C/B$ B1
 Accurate test for MINIMUM B1 First or second diff^d test with numeric evidence
 B1 Correct value(s) for min.

1 Correct expansion of $\sin x$ Multiply their expansion by $(1 + x)$ Obtain $x + x^2 - x^3/6$	B1 Quote or derive $x^{-1}/6x^3$ M1 Ignore extra terms A1√ On their $\sin x$; ignore extra terms; allow 3! SC Attempt product rule M1 Attempt $f(0), f'(0), f''(0) \dots$ (at least 3) M1 Use Maclaurin accurately cao A1
2 (i) Get $\sec^2 y \frac{dy}{dx} = 1$ or equivalent $\frac{dy}{dx}$ Clearly use $1 + \tan^2 y = \sec^2 y$ Clearly arrive at A.G.	M1 M1 May be implied A1
(ii) Reasonable attempt to diff. to $\frac{-2x}{(1+x^2)^2}$ Substitute their expressions into D.E. Clearly arrive at A.G.	M1 Use of chain/quotient rule M1 Or attempt to derive diff. equ ⁿ . A1 SC Attempt diff. of $(1+x^2)\frac{dy}{dx} = 1$ M1,A1 $\frac{dy}{dx}$ Clearly arrive at A.G. B1
3 (i) State $y = 0$ (or seen if working given)	B1 Must be = ; accept x-axis; ignore any others
(ii) Write as quad. in x^2 Use for real $x, b^2 - 4ac \geq 0$ Produce quad. inequality in y Attempt to solve inequality Justify A.G.	M1 ($x^2y - x + (3y-1) = 0$) M1 Allow $>$; or $<$ for no real x M1 $1 \geq 12y^2 - 4y$; $12y^2 - 4y - 1 \leq 0$ M1 Factorise/ quadratic formula A1 e.g. diagram / table of values of y SC Attempt diff. by product/quotient M1 Solve $dy/dx = 0$ for two real x M1 Get both $(-3, -1/6)$ and $(1, 1/2)$ A1 Clearly prove min./max. A1 Justify fully the inequality e.g. detailed graph B1
4 (i) Correct definition of $\cosh x$ or $\cosh 2x$ Attempt to sub. in RHS and simplify Clearly produce A.G.	B1 M1 or LHS if used A1
(ii) Write as quadratic in $\cosh x$ Solve their quadratic accurately Justify one answer only Give $\ln(4 + \sqrt{15})$	M1 ($2\cosh^2 x - 7\cosh x - 4 = 0$) A1√ Factorise/quadratic formula B1 State $\cosh x \geq 1$ /graph; allow ≥ 0 A1 cao; any one of $\pm \ln(4 \pm \sqrt{15})$ or decimal equivalent of $\ln()$
5 (i) Get $(t + 1/2)^2 + 3/4$	B1 cao
(ii) Derive or quote $dx = \frac{2}{1+t^2} dt$ Derive or quote $\sin x = 2t/(1+t^2)$ Attempt to replace all x and dx Get integral of form $A/(Bt^2+Ct+D)$ Use complete square form as $\tan^{-1}(f(t))$ Get A.G.	B1 B1 M1 A1√ From their expressions, $C \neq 0$ M1 From formulae book or substitution A1

- 6 (i) Attempt to sum areas of rectangles
Use G.P. on $h(1+3^h+3^{2h}+\dots+3^{(n-1)h})$

Simplify to A.G.

- (ii) Attempt to find sum areas of different rect.
Use G.P. on $h(3^h+3^{2h}+\dots+3^{nh})$

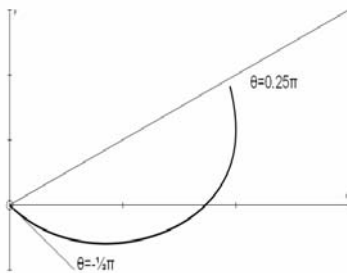
Simplify to A.G.

- (iii) Get 1.8194(8), 1.8214(8) correct

- 7 (i) Attempt to solve $r=0$, $\tan \theta = -\sqrt{3}$
Get $\theta = -\frac{1}{3}\pi$ only

- (ii) $r = \sqrt{3} + 1$ when $\theta = \frac{1}{4}\pi$

- (iii)



M1 $(h.3^h + h.3^{2h} + \dots + h.3^{(n-1)h})$

M1 All terms not required, but last term needed (or 3^{1-h}); or specify a , r and n for a G.P.

A1 Clearly use $nh = 1$

M1 Different from (i)

M1 All terms not required, but last term needed; G.P. specified as in (i), or deduced from (i)

A1

B1,B1 Allow $1.81 \leq A \leq 1.83$

M1 Allow $\pm\sqrt{3}$

A1 Allow -60°

B1,B1 AEF for r , 45° for θ

B1 Correct r at correct end-values of θ ;
Ignore extra θ used

B1 Correct shape with r not decreasing

- (iv) Formula with correct r used
Replace $\tan^2\theta = \sec^2\theta - 1$
Attempt to integrate their expression

Get $\theta + \sqrt{3} \ln \sec\theta + \frac{1}{2} \tan\theta$
Correct limits to $\frac{1}{4}\pi + \sqrt{3} \ln\sqrt{2} + \frac{1}{2}$

M1 r^2 may be implied

B1

M1 Must be 3 different terms leading to any 2 of $a\theta + b \ln(\sec\theta/\cos\theta) + c \tan\theta$

A1 Condone answer $\times 2$ if $\frac{1}{2}$ seen elsewhere

A1 cao; AEF

- 8 (i) Attempt to diff. using product/quotient
Attempt to solve $dy/dx = 0$
Rewrite as A.G.

M1

M1

A1 Clearly gain A.G.

- (ii) Diff. to $f'(x) = 1 \pm 2 \operatorname{sech}^2 x$
Use correct form of N-R with their expressions from correct $f(x)$
Attempt N-R with $x_1 = 2$ from previous M1
Get $x_2 = 1.9162(2)$ (3 s.f. min.)
Get $x_3 = 1.9150(1)$ (3 s.f. min.)

B1 Or $\pm 2 \operatorname{sech}^2 x - 1$

M1

M1 To get an x_2

A1

A1 cao

- (iii) Work out e_1 and e_2 (may be implied)

B1 $\sqrt{-0.083(8)}$, -0.0012 (allow \pm if both of same sign); e_1 from 0.083 to 0.085

Use $e_2 \approx ke_1^2$ and $e_3 \approx ke_2^2$ Get $e_3 \approx e_2^3/e_1^2 = -0.0000002$ (or 3)	M1 A1 $\sqrt{\quad}$ \pm if same sign as B1 $\sqrt{\quad}$ SC B1 only for $x_4 - x_3$
9 (i) Rewrite as quad. in e^y Solve to $e^y = (x \pm \sqrt{x^2 + 1})$ Justify one solution only	M1 Any form A1 Allow $y = \ln(\quad)$ B1 $x - \sqrt{x^2 + 1} < 0$ for all real x SC Use $C^2 - S^2 = 1$ for $C = \pm\sqrt{1+x^2}$ M1 Use/state $\cosh y + \sinh y = e^y$ A1 Justify one solution only B1
(ii) Attempt parts on $\sinh x$. $\sinh^{n-1} x$ Get correct answer Justify $\sqrt{2}$ by $\sqrt{1+\sinh^2 x}$ for $\cosh x$ when limits inserted Replace $\cosh^2 = 1 + \sinh^2$; tidy at this stage Produce I_{n-2} Gain A.G. <u>clearly</u>	M1 A1 $(\cosh x \cdot \sinh^{n-1} x - \int \cosh^2 x \cdot (n-1) \sinh^{n-2} x \, dx)$ B1 Must be clear M1 A1 A1
(iii) Attempt $4I_4 = \sqrt{2} - 3I_2$, $2I_2 = \sqrt{2} - I_0$ Work out $I_0 = \sinh^{-1} 1 = \ln(1 + \sqrt{2}) = \alpha$ Sub. back completely for I_4 Get $\frac{1}{8}(3 \ln(1+\sqrt{2}) - \sqrt{2})$	M1 Clear attempt at iteration (one at least seen) B1 Allow I_2 M1 A1 AEEF

1 (i) $f(0) = \ln 3$

$f'(0) = 1/3$

$f''(0) = -1/9$ **A.G.**

B1

B1

B1 Clearly derived

(ii) Reasonable attempt at Maclaurin

$f(x) = \ln 3 + 1/3x - 1/18x^2$

M1 Form $\ln 3 + ax + bx^2$, with a, b related to f and f'

A1/J On their values of f' and f''

SR Use $\ln(3+x) = \ln 3 + \ln(1 + 1/3x)$

x) M1 Use Formulae Book to get

$\ln 3 + 1/3x - 1/18x^2 =$

$\ln 3 + 1/3x - 1/18x^2$

A1

2 (i) $f(0.8) = -0.03, f(0.9) = +0.077$ (accurately e.g. accept -0.02 to -0.04)

Explain (change of sign, graph etc.)

B1

B1

SR Use $x = \sqrt{J(\tan^{-1}x)}$ and compare x to

$\sqrt{J(\tan^{-1}x)}$ for $x=0.8, 0.9$

B1

Explain "change in sign"

B1

(ii) Differentiate two terms

Use correct form of Newton-Raphson with 0.8, using their $f'(x)$

Use their N-R to give one more approximation to 3 d.p. minimum

Get $x = 0.835$

3 (i) Show area of rect. = $1/4(e^{1/16} + e^{1/4} + e^{9/16} + e^1)$

Show area = 1.7054

Explain the < 1.71 in terms of areas

B1 Get $2x - 1/(1+x^2)$

M1 $0.8 - f(0.8)/f'(0.8)$

M1

A1 3d.p. - accept answer which rounds

M1 Or numeric equivalent

A1 At least 3 d.p. correct

B1 AG. Inequality required

(ii) Identify areas for $>$ sign

Show area of rect. = $1/4(e^0 + e^{1/16} + e^{1/4} + e^{9/16})$

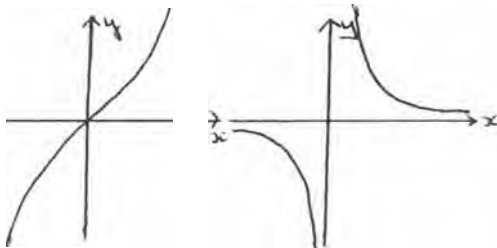
Get $A > 1.27$

B1 Inequality or diagram required

M1 Or numeric evidence

A1 cao; or answer which rounds down

4 (i)



B1 Correct shape for $\sinh x$

B1 Correct shape for $\operatorname{cosech} x$

B1 Obvious point ($dy/dx \neq 0$)/asymptotes clear

(ii) Correct definition of $\sinh x$

Invert and mult. by e^x to AG.

Sub. $u = e^x$ and $du = e^x dx$

Replace to $2/(u^2 - 1) du$

Integrate to $\ln((u-1)/(u+1))$

Replace u

B1 May be implied

B1 Must be clear; allow $2/(e^x - e^{-x})$ as minimum simplification

M1 Or equivalent, all x eliminated and not $dx = du$

A1

A1 Use formulae book, PT, or $\operatorname{atanh}^{-1}u$

A1 No need for c

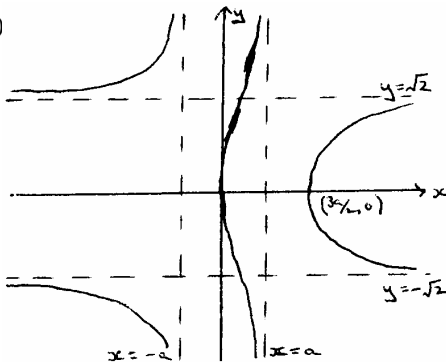
- 5 (i) Reasonable attempt at parts Get
 $x \sin x - \int \sin x \cdot nx^{n-1} dx$
 Attempt parts again Accurately
 Clearly derive AG.
- (ii) Get $I_4 = (\frac{1}{2}\pi)^4 - 12I_2$ or $I_2 = (\frac{1}{2}\pi)^2 - 2I_0$
 Show clearly $I_0 = 1$
 Replace their values in relation Get
 $I_4 = \frac{1}{16}\pi^4 - 3\pi^2 + 24$

- M1 Involving second integral A1
 M1
 A1
 A1 Indicate $(\frac{1}{2}\pi)^n$ and 0 from limits
- B1
 B1 May use I_2
 M1
 A1 cao

- 6 (i) $x = \pm a, y = 2$

B1, B1, B1 Must be =; no working needed

(ii)



- B1 Two correct labelled asymptotes $\parallel Ox$ and approaches
 B1 Two correct labelled asymptotes $\parallel Oy$ and approaches
 B1 Crosses at $(\frac{3}{2}a, 0)$ (and $(0,0)$ - may be implied)
 B1 90° where it crosses Ox ; smoothly
 B1 Symmetry in Ox

- 7 (i) Write as $A/t + B/t^2 + (Ct + D)/(t^2 + 1)$
 Equate $At(t^2 + 1) + B(t^2 + 1) + (Ct+D)t^2$ to
 $1 - t^2$
 Insert t values / equate coeff.
 Get $A = C = 0, B = L D = -2$

- M1 Allow $(At+B)/t^2$; justify $B/t^2 + D/(t^2 + 1)$
 if only used
 M1 \checkmark
 M1 Lead to at least two constant values
 A1
 SR Other methods leading to correct PF
 can earn 4 marks; 2 M marks for
 reasonable method going wrong

- (ii) Derive or quote $\cos x$ in terms of t
 Derive or quote $dx = 2 dt/(1 + t^2)$
 Sub. in to correct P.F.
 Integrate to $-1/t - 2 \tan^{-1}t$
 Use limits to clearly get AG.

- B1
 B1
 M1 Allow $k(1-t^2)/((t^2+1)^2)$ or equivalent
 A1 \checkmark From their k
 A1

- 8 (i) Get $(e^y - e^{-y})/(e^y + e^{-y})$

B1 Allow $(e^{2y}-1)/(e^{2y}+1)$ or if x used

- (ii) Attempt quad. in e^y
 Solve for e^y
 Clearly get AG.

- M1 Multiply by e^y and tidy
 M1
 A1

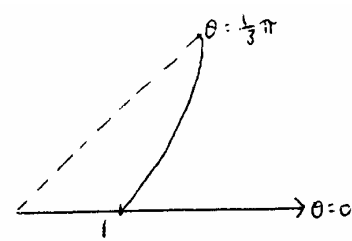
- (iii) Rewrite as $\tanh x = k$
 Use (ii) for $x = \frac{1}{2} \ln 7$ or equivalent

- M1 SR Use hyp defⁿ to get quad. in e^x M I
 A1 Solve $e^{2x} = 7$ for $x = \frac{1}{2} \ln 7$ A1

- (iv) Use of log laws
 Correctly equate $\ln A = \ln B$ to $A = B$
 Get $x = \pm \frac{3}{5}$

- B1 One used correctly
 M1 Or $\ln(A/B) = 0$
 A1

9 (i)



B1 Shape for correct θ ; ignore other θ
Used; start at $(r,0)$

B1 $\theta=0$, $r=1$ and increasing r

- (ii) Use correct formula with correct r
 $\int \sec^2 x \, dx = \tan x$ used
 Quote $\int 2 \sec x \tan x \, dx = 2 \sec x$
 Replace $\tan^2 x$ by $\sec^2 x - 1$ to integrate
 Reasonable attempt to integrate 3 terms And
 to use limits correctly
 Get $\sqrt{3} + 1 - \frac{1}{6}\pi$

B1
 B1
 B1 Or sub. correctly
 M1
 M1
 A1 Exact only

- (iii) Use $x = r \cos \theta$, $y = r \sin \theta$, $r = (x^2 + y^2)^{1/2}$
 Reasonable attempt to eliminate r, θ
 Get $y = (x-1)\sqrt{(x^2 + y^2)}$

M1
 M1
 A1 Or equivalent

1	Correct formula with correct r Rewrite as $a + b\cos 6\theta$ Integrate their expression correctly Get $\frac{1}{3}\pi$	M1 Allow $r^2 = 2\sin^2 3\theta$ M1 $a, b \neq 0$ A1√ From $a + b\cos 6\theta$ A1 cao
2	(i) Expand to $\sin 2x \cos \frac{1}{4}\pi + \cos 2x \sin \frac{1}{4}\pi$ Clearly replace $\cos \frac{1}{4}\pi, \sin \frac{1}{4}\pi$ to A.G.	B1 B1
	(ii) Attempt to expand $\cos 2x$ Attempt to expand $\sin 2x$ Get $\frac{1}{2}\sqrt{2} (1 + 2x - 2x^2 - 4x^3/3)$	M1 Allow $1 - 2x^2/2$ M1 Allow $2x - 2x^3/3$ A1 Four correct unsimplified terms in any order; allow bracket; AEEF SR Reasonable attempt at $f^n(0)$ for $n=0$ to 3 M1 Attempt to replace their values in Maclaurin M1 Get correct answer only A1
3	(i) Express as $A/(x-1) + (Bx+C)/(x^2+9)$ Equate (x^2+9x) to $A(x^2+9) + (Bx+C)(x-1)$ Sub. for x or equate coeff. Get $A=1, B=0, C=9$	M1 Allow $C=0$ here M1√ May imply above line; on their P.F. M1 Must lead to at least 3 coeff.; allow cover-up method for A A1 cao from correct method
	(ii) Get $A\ln(x-1)$ Get $C/3 \tan^{-1}(x/3)$	B1√ On their A B1√ On their C ; condone no constant; ignore any $B \neq 0$
4	(i) Reasonable attempt at product rule Derive or quote diff. of $\cos^{-1}x$ Get $-x^2(1-x^2)^{-1/2} + (1-x^2)^{1/2} + (1-x^2)^{-1/2}$ Tidy to $2(1-x^2)^{1/2}$	M1 Two terms seen M1 Allow + A1 A1 cao
	(ii) Write down integral from (i) Use limits correctly Tidy to $\frac{1}{2}\pi$	B1 On any $k\sqrt{1-x^2}$ M1 In any reasonable integral A1 SR Reasonable sub. B1 Replace for new variable and attempt to integrate (ignore limits) M1 Clearly get $\frac{1}{2}\pi$ A1

5	(i)	Attempt at parts on $\int 1 (\ln x)^n dx$	M1	Two terms seen
		Get $x (\ln x)^n - \int^n (\ln x)^{n-1} dx$	A1	
		Put in limits correctly in line above	M1	
		Clearly get A.G.	A1	$\ln e = 1, \ln 1 = 0$ seen or implied
	(ii)	Attempt I_3 to I_2 as $I_3 = e - 3I_2$	M1	
		Continue sequence in terms of I_n	A1	$I_2 = e - 2I_1$ and/or $I_1 = e - I_0$
		Attempt I_0 or I_1	M1	$(I_0 = e - 1, I_1 = 1)$
		Get $6 - 2e$	A1	cao
6	(i)	Area under graph ($= \int 1/x^2 dx, 1$ to $n+1$)	B1	Sum (total) seen or implied eg diagram; accept areas (of rectangles)
		< Sum of rectangles (from 1 to n)		
		Area of each rectangle = Width x Height		
		$= 1 \times 1/x^2$		
	(ii)	Indication of new set of rectangles	B1	
		Similarly, area under graph from 1 to n	B1	Sum (total) seen or implied
		> sum of areas of rectangles from 2 to n	B1	Diagram; use of left-shift of previous areas
	(iii)	Show complete integrations of RHS, using correct, different limits	M1	Reasonable attempt at $\int x^{-2} dx$
		Correct answer, using limits, to one integral	A1	
		Add 1 to their second integral to get complete series	M1	
Clearly arrive at A.G.		A1		
(iv)	Get one limit	B1	Quotable	
	Get both 1 and 2	B1	Quotable; limits only required	

7	(i)	Use correct definition of cosh or sinh x	B1	Seen anywhere in (i)
		Attempt to mult. their cosh/sinh	M1	
		Correctly mult. out and tidy	A1√	
		Clearly arrive at A.G.	A1	Accept e^{x-y} and e^{y-x}
	(ii)	Get $\cosh(x - y) = 1$	M1	
		Get or imply $(x - y) = 0$ to A.G.	A1	
	(iii)	Use $\cosh^2 x = 9$ or $\sinh^2 x = 8$	B1	
		Attempt to solve $\cosh x = 3$ (not -3)	M1	$x = \ln(3 + \sqrt{8})$ from formulae book
		or $\sinh x = \pm\sqrt{8}$ (allow $+\sqrt{8}$ or $-\sqrt{8}$ only)		or from basic cosh definition
		Get at least one x solution correct	A1	
		Get both solutions correct, x and y	A1	$x, y = \ln(3 \pm 2\sqrt{2})$; AEEF
			SR	Attempt $\tanh = \sinh/\cosh$ B1
				Get $\tanh x = \pm\sqrt{8}/3$ (+ or -) M1
				Get at least one sol. correct A1
				Get both solutions correct A1
			SR	Use exponential definition B1
				Get quadratic in e^x or e^{2x} M1
				Solve for one correct x A1
				Get both solutions, x and y A1
8	(i)	$x_2 = 0.1890$	B1	
		$x_3 = 0.2087$	B1√	From their x_1 (or any other correct)
		$x_4 = 0.2050$	B1√	Get at least two others correct,
		$x_5 = 0.2057$		all to a minimum of 4 d.p.
		$x_6 = 0.2055$		
		$x_7 (= x_8) = 0.2056$ (to x_7 minimum)		
		$\alpha = 0.2056$	B1	cao; answer may be retrieved despite some errors
	(ii)	Attempt to diff. $f(x)$	M1	$k/(2+x)^3$
		Use α to show $f'(\alpha) \neq 0$	A1√	Clearly seen, or explain $k/(2+x)^3 \neq 0$ as $k \neq 0$; allow ± 0.1864
			SR	Translate $y=1/x^2$ M1
				State/show $y=1/x^2$ has no TP A1
	(iii)	$\delta_3 = -0.0037$ (allow -0.004)	B1√	Allow \pm , from their x_4 and x_3
	(iv)	Develop from $\delta_{10} = f'(\alpha) \delta_9$ etc. to get δ_i		
		or quote $\delta_{10} = \delta_3 f'(\alpha)^7$	M1	Or any δ_i eg use $\delta_9 = x_{10} - x_9$
		Use their δ_i and $f'(\alpha)$	M1	
		Get 0.000000028	A1	Or answer that rounds to ± 0.00000003

9	(i)	Quote $x = a$ Attempt to divide out Get $y = x - a$	B1 M1 A1 A1	Allow M1 for $y=x$ here; allow $(x-a) + k/(x-a)$ seen or implied Must be equations
	(ii)	Attempt at quad. in x ($=0$) Use $b^2 - 4ac \geq 0$ for real x Get $y^2 + 4a^2 \geq 0$ State/show their quad. is always >0	M1 M1 A1 B1	Allow $>$ Allow \geq
	(iii)		B1√ B1	Two asymptotes from (i) (need not be labelled) Both crossing points
			B1√ SR rule M1	Approaches – correct shape Attempt diff. by quotient/product rule
			A1	Get quadratic in x for $dy/dx = 0$ and note $b^2 - 4ac < 0$
			B1	Consider horizontal asymptotes
			B1	Fully justify answer

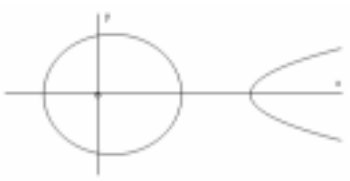
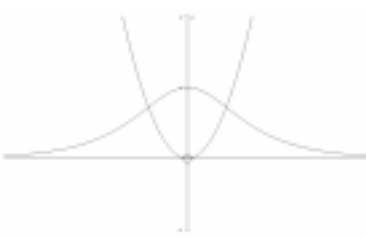
4726 Further Pure Mathematics 2

1	(i)	Get $f'(x) = \pm \sin x / (1 + \cos x)$	M1	Reasonable attempt at chain at any stage
		Get $f''(x)$ using quotient/product rule	M1	Reasonable attempt at quotient/product
		Get $f(0) = \ln 2$, $f'(0) = 0$, $f''(0) = -1/2$	B1	Any one correct from correct working
			A1	All three correct from correct working
	(ii)	Attempt to use Maclaurin correctly	M1	Using their values in $af(0) + bf'(0)x + cf''(0)x^2$; may be implied
		Get $\ln 2 - 1/4 x^2$	A1✓	From their values; must be quadratic
2	(i)	Clearly verify in $y = \cos^{-1} x$	B1	i.e. $x = 1/2\sqrt{3}$, $y = \cos^{-1}(1/2\sqrt{3}) = 1/6\pi$, or similar
		Clearly verify in $y = 1/2\sin^{-1} x$	B1	Or solve $\cos y = \sin 2y$
			SR	Allow one B1 if not sufficiently clear detail
	(ii)	Write down at least one correct diff' al	M1	Or reasonable attempt to derive; allow \pm
		Get gradient of -2	A1	cao
		Get gradient of 1	A1	cao
3	(i)	Get y - values of 3 and $\sqrt{28}$	B1	
		Show/explain areas of two rectangles equal y - value x 1 , and relate to A	B1	Diagram may be used
	(ii)	Show $A > 0.2(\sqrt{1+2^3} + \sqrt{1+2.2^3} + \dots$ $\dots \sqrt{1+2.83})$ $= 3.87(28)$	M1	Clear areas attempted below curve (5 values)
		Show $A < 0.2(\sqrt{1+2.2^3} + \sqrt{1+2.4^3} + \dots$ $\dots + \sqrt{1+3^3})$ $= 4.33(11) < 4.34$	A1	To min. of 3 s.f.
			M1	Clear areas attempted above curve (5 values)
			A1	To min. of 3 s.f.
4	(i)	Correct formula with correct r	M1	May be implied
		Expand r^2 as $A + B\sec\theta + C\sec^2\theta$	M1	Allow $B = 0$
		Get $C \tan\theta$	B1	
		Use correct limits in their answer	M1	Must be 3 terms
		Limits to $1/12\pi + 2 \ln(\sqrt{3}) + 2\sqrt{3}/3$	A1	AEEF; simplified
	(ii)	Use $x = r \cos\theta$ and $r^2 = x^2 + y^2$	B1	Or derive polar form from given equation
		Eliminate r and θ	M1	Use their definitions
		Get $(x-2)\sqrt{x^2 + y^2} = x$	A1	A.G.

- 5 (i) Attempt use of product rule M1
Clearly get $x=1$ A1 Allow substitution of $x=1$
- (ii) Explain use of tangent for next approx. B1 Not use of G.C. to show divergence
Tangents at successive approx. give $x>1$ B1 Relate to crossing x -axis; allow diagram
- (iii) Attempt correct use of N-R with their derivative M1
Get $x_2 = -1$ A1√
Get $-0.6839, -0.5775, (-0.5672\dots)$ A1 To 3 d.p. minimum
Continue until correct to 3 d.p. M1 May be implied
Get -0.567 A1 cao
- 6 (i) Attempt division/equate coeff. M1 To lead to some $ax+b$ (allow $b=0$ here)
Get $a = 2, b = -9$ A1
Derive/quote $x = 1$ B1 Must be equations
- (ii) Write as quadratic in x M1 $(2x^2 - x(11+y) + (y-6) = 0)$
Use $b^2 \geq 4ac$ (for real x) M1 Allow $<, >$
Get $y^2 + 14y + 169 \geq 0$ A1
Attempt to justify positive/negative M1 Complete the square/sketch
Get $(y+7)^2 + 120 \geq 0$ – true for all y A1
SC Attempt diff; quot./prod. rule M1
Attempt to solve $dy/dx = 0$ M1
Show $2x^2 - 4x + 17 = 0$ has
no real roots e.g. $b^2 - 4ac < 0$ A1
Attempt to use no t.p. M1
Justify all y e.g. consider
asymptotes and approaches A1
- 7 (i) Get $x(1+x^2)^{-n} - \int x \cdot (-n(1+x^2)^{-n-1} \cdot 2x) dx$ M1 Reasonable attempt at parts
Accurate use of parts A1
Clearly get A.G. B1 Include use of limits seen
- (ii) Express x^2 as $(1+x^2) - 1$
Get $\frac{x^2}{(1+x^2)^{n+1}} = \frac{1}{(1+x^2)^n} - \frac{1}{(1+x^2)^{n+1}}$ B1 Justified
Show $I_n = 2^{-n} + 2n(I_n - I_{n+1})$ M1 Clear attempt to use their first line above
Tidy to A.G. A1
- (iii) See $2I_2 = 2^{-1} + I_1$ B1
Work out $I_1 = \frac{1}{4}\pi$ M1 Quote/derive $\tan^{-1}x$
Get $I_2 = \frac{1}{4} + \frac{1}{8}\pi$ A1

8	(i)	Use correct exponential for $\sinh x$	B1	
		Attempt to expand cube of this	M1	Must be 4 terms
		Correct cubic	A1	
		Clearly replace in terms of \sinh	B1	(Allow $\text{RHS} \rightarrow \text{LHS}$ or $\text{RHS} = \text{LHS}$ separately)
(ii)	Replace and factorise	Attempt to solve for $\sinh^2 x$	M1	Or state $\sinh x \neq 0$
		Get $k > 3$	M1	(= $\frac{1}{4}(k-3)$) or for k and use $\sinh^2 x > 0$
			A1	Not \geq
(iii)	Get $x = \sinh^{-1} c$	Replace in \ln equivalent	M1	($c = \pm \frac{1}{2}$); allow $\sinh x = c$
		Repeat for negative root	A1 \checkmark	As $\ln(\frac{1}{2} + \sqrt{\frac{5}{4}})$; their x
			A1 \checkmark	May be given as neg. of first answer (no need for $x=0$ implied)
			SR	Use of exponential definitions
				Express as cubic in $e^{2x} = u$ M1
		Factorise to $(u-1)(u^2-3u+1)=0$ A1		
		Solve for $x=0, \frac{1}{2}\ln(\frac{3}{2} \pm \sqrt{\frac{5}{2}})$ A1		
9	(i)	Get $\sinh y \frac{dy}{dx} = 1$	M1	Or equivalent; allow \pm
		Replace $\sinh y = \sqrt{\cosh^2 y - 1}$	A1	Allow use of \ln equivalent with Chain Rule
		Justify positive grad. to A.G.	B1	e.g. sketch
(ii)	Get $k \cosh^{-1} 2x$	Get $k = \frac{1}{2}$	M1	No need for c
			A1	
(iii)	Sub. $x = k \cosh u$	Replace all x to $\int k_1 \sinh^2 u \, du$	M1	
		Replace as $\int k_2 (\cosh 2u - 1) \, du$	A1	
		Integrate correctly	M1	Or exponential equivalent
		Attempt to replace u with x equivalent	A1 \checkmark	No need for c
		Tidy to reasonable form	M1	In their answer
			A1	cao ($\frac{1}{2}x\sqrt{4x^2 - 1} - \frac{1}{4} \cosh^{-1} 2x (+c)$)

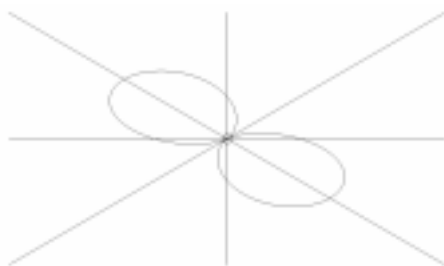
4726 Further Pure Mathematics 2

1	<p>Write as $\frac{A}{x-2a} + \frac{Bx+C}{x^2+a^2}$</p> <p>Get $2ax = A(x^2+a^2) + (Bx+C)(x-2a)$</p> <p>Choose values of x and/or equate coeff.</p> <p>Get $A = \frac{4}{5}, B = -\frac{4}{5}, C = \frac{2}{5}a$</p>	<p>M1 Accept $C=0$</p> <p>A1√ Follow-on for $C=0$</p> <p>M1 Must lead to at least one of their A,B,C</p> <p>A1 For two correct from correct working only</p> <p>A1 For third correct</p> <p>5</p>
2		<p>B1 Get $(4,0), (3,0), (-2,0)$ only</p> <p>B1 Get $(0,\sqrt{5})$ as “maximum”</p> <p>B1 Meets x-axis at 90° at all crossing points</p> <p>B1 Use $-2 \leq x \leq 3$ and $x \geq 4$ only</p> <p>B1 Symmetry in Ox</p> <p>5</p>
3	<p>Quote/derive $dx = \frac{2}{1+t^2} dt$</p> <p>Replace all x and dx from their expressions</p> <p>Tidy to $2/(3t^2+1)$</p> <p>Get $k \tan^{-1}(At)$</p> <p>Get $k = \frac{2}{3}\sqrt{3}, A = \sqrt{3}$</p> <p>Use limits correctly to $\frac{2}{9}, \sqrt{3}\pi$</p>	<p>B1</p> <p>M1 Not $dx=dt$; ignore limits</p> <p>A1 Not $a/(3t^2+1)$</p> <p>M1 Allow $A=1$ if from $p/(t^2+1)$ only</p> <p>A1√ Allow $k=a/\sqrt{3}$ from line 3; AEEF</p> <p>A1 AEEF</p> <p>6</p>
4 (i)		<p>B1 Correct $y = x^2$</p> <p>B1 Correct shape/asymptote</p> <p>B1 Crossing $(0,1)$</p> <p>3</p>
(ii)	<p>Define $\operatorname{sech} x = 2/(e^x + e^{-x})$</p> <p>Equate their expression to x^2 and attempt to simplify</p> <p>Clearly get A.G.</p>	<p>B1 AEEF</p> <p>M1</p> <p>A1</p> <p>3</p>
(iii)	<p>Cobweb</p> <p>Values $>$ and then $<$ root</p>	<p>B1</p> <p>B1 Only from cobweb</p> <p>2</p>

<p>5 (i) Factorise to $\tan^{n-2}x(1+\tan^2x)$ Clearly use $1+\tan^2 = \sec^2$ Integrate to $\tan^{n-1}x/(n-1)$ Use limits and tidy to A.G.</p>	<p>B1 Or use $\tan^n x = \tan^{n-2} x \cdot \tan^2 x$ M1 Allow wrong sign A1 Quote or via substitution A1 Must be clearly derived</p>
<p>(ii) Get $3(I_4 + I_2) = 1, I_2 + I_0 = 1$ Attempt to evaluate I_0 (or I_2) Get $\frac{1}{4}\pi$ (or $1 - \frac{1}{4}\pi$) Replace to $\frac{1}{4}\pi - \frac{2}{3}$</p>	<p>B1 Write down one correct from reduction formula M1 $I_2 = a \tan x + b, a, b \neq 0$ A1 A1</p>
<p>6 (i) Attempt to use N-R of correct form with clear $f'(x)$ used Get 2.633929, 2.645672</p>	<p>M1 A1 For one correct to minimum of 6 d.p. A1√ For other correct from their x_2 in correct NR</p>
<p>(ii) $\sqrt{7}$</p>	<p>B1 Allow \pm</p>
<p>(iii) Get $e_1 = 0.14575, e_2 = 0.01182$ Get $e_3 = 0.00008$ Verify both ≈ 0.00008</p>	<p>B1√ From their values B1√ B1 From $0.000077..$ or $0.01182^3/0.14575^2$</p>
<p>7 (i) Attempt quotient/product on bracket Get $-3/(2+x)^2$ Use Formulae Booklet or derive from $\tanh y = (1-x)/(2+x)$ Get $\frac{-3}{(2+x)^2} \cdot \frac{1}{1 - ((1-x)/(2+x))^2}$ Clearly tidy to A.G. Get $f''(x) = 2/(1+2x)^2$</p>	<p>M1 A1 May be implied M1 Attempt \tanh^{-1} part in terms of x A1√ From their results above A1 B1 cao</p>
<p>(ii) Attempt $f(0), f'(0)$ and $f''(0)$ Get $\tanh^{-1} \frac{1}{2}, -1$ and 2 Replace $\tanh^{-1} \frac{1}{2} = \frac{1}{2} \ln 3 (= \ln \sqrt{3})$ Get $\ln \sqrt{3} - x + x^2$</p>	<p>SC Use reasonable \ln definition M1 Get $y = \frac{1}{2} \ln((1-k)/(1+k))$ for $k = (1-x)/(1+2x)$ A1 Tidy to $y = \frac{1}{2} \ln(3/(1+2x))$ A1 Attempt chain rule M1 Clearly tidy to A.G. A1 Get $f''(x)$ B1</p>
	<p>M1 From their differentiation A1√ B1 Only A1 A1 SC Use standard expansion from $\frac{1}{2} \ln 3 - \frac{1}{2} \ln(1+2x)$</p>

<p>8 (i) Attempt to solve $r = 0$ Get $\alpha = \frac{1}{4}\pi$</p>	<p>M1 A1 2</p>	<p>From correct method; ignore others; allow θ</p>
<p>(ii) (a) Get $1 - \sin((2k+1)\pi - 2\theta)$ Expand as $\sin(A+B)$ Use k as integer so $\sin(2k+1)\pi = 0$, And $\cos(2k+1)\pi = -1$</p>	<p>M1 M1 A1 3</p>	<p>Attempt $f(\frac{1}{2}(2k+1)\pi - \theta)$, leading to 2θ here Or discuss periodicity for general k Needs a clear explanation</p>
<p>(b) Quote $\frac{1}{4}(2k+1)\pi$ Select or give $k = 0,1,2,3$</p>	<p>B1 B1 2</p>	<p>For general answer or 2 correct (ignore other answers given) For all 4 correct in $0 \leq \theta < 2\pi$</p>

(iii) roughly **B1** Correct shape; 2 branches only, as shown



B1 Clear symmetry in correct rays
B1 Get max. $r = 2$
B1 At $\theta = \frac{3}{4}\pi$ and $\frac{7}{4}\pi$; both required (allow correct answers not in $0 \leq \theta < 2\pi$ here)
4

<p>9 (i) Attempt to use parts Divide out $x/(1+x)$ Correct answer $x \ln(1+x) - x + \ln(1+x)$ Limits to correct A.G.</p>	<p>M1 M1 A1 A1 4 SC SC</p>	<p>Two terms, one yet to be integrated Or use substitution Quote $\int \ln x \, dx$ Clear use of limits to A.G. Attempt to differentiate by product rule Clear use of limits to A.G.</p>	<p>M1 A1 M1 A1</p>
---	---	---	--

(ii) (a) Use sum of areas of rect. < Area under curve (between limits 0 and 70)
Areas = $1 \times \text{heights} = 1(\ln 2 + \ln 3 + \dots + \ln 70)$ **B1**
B1 Areas to be specified **2**

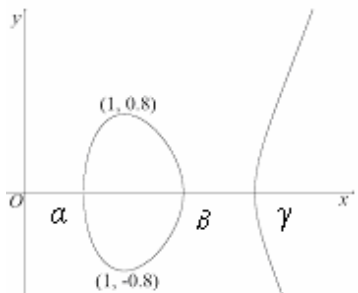
(b) Explain use of 69 **B1** Allow diagram or use of left shift of 1 unit
Explain first rectangle **B1**
Areas as above > area under curve **B1**
3

(c) Show/quote $\ln 2 + \ln 3 + \dots + \ln 70 = \ln 70!$ **B1**
Use $N = 69, 70$ in (i) **M1** No other numbers; may be implied by 228.39.. or 232.65.. seen; allow 228.4, 232.6 or 232.7

Get 228.3, 232.7 **A1**
3

4726 Further Pure Mathematics 2

- 1 (i) Give $1 + 2x + (2x)^2/2$
Get $1 + 2x + 2x^2$
- M1 Reasonable 3 term attempt e.g. allow $2x^2/2$
A1 cao
SC Reasonable attempt at $f'(0)$ and $f''(0)$ M1
Get $1+2x+2x^2$ cao A1
- (ii) $\ln((1+2x+2x^2) + (1-2x+2x^2)) =$
 $\ln(2+4x^2) =$
 $\ln 2 + \ln(1 + 2x^2)$
 $\ln 2 + 2x^2$
- M1 Attempt to sub for e^{2x} and e^{-2x}
A1√ On their part (i)
M1 Use of log law in reasonable expression
A1 cao
SC Use of Maclaurin for $f'(x)$ and $f''(x)$ M1
One correct A1
Attempt $f(0)$, $f'(0)$ and $f''(0)$ M1
Get cao A1
- 2 (i) $x_2 = 1.8913115$
 $x_3 = 1.8915831$
 $x_4 = 1.8915746$
- B1 x_2 correct; allow answers which round
B1√ For any other from their working
B1 For all three correct
- (ii) $e_3/e_2 = -0.031(1)$
 $e_4/e_3 = -0.036(5)$
State $f'(\alpha) \approx e_3/e_2 \approx e_4/e_3$
- M1 Subtraction and division on their values;
allow \pm
A1 Or answers which round to -0.031 and -0.037
B1√ Using their values but only if approx. equal;
allow differentiation if correct conclusion;
allow gradient for f'
- 3 (i) Diff. $\sin y = x$
Use $\sin^2 + \cos^2 = 1$ to A.G.
Justify +
- M1 Implicit diff. to $dy/dx = \pm(1/\cos y)$
A1 Clearly derived; ignore \pm
B1 e.g graph/ principal values
- (ii) Get $2/(\sqrt{1-4x^2}) + 1/(\sqrt{1-y^2}) dy/dx = 0$
Find $y = \sqrt{3}/2$
Get $-2\sqrt{3}/3$
- M1 Attempt implicit diff. and chain rule; allow e.g. $(1-2x^2)$ or $a/\sqrt{1-4x^2}$
A1
M1 Method leading to y
A1√ AEEF; from their a above
SC Write $\sin(\frac{1}{2}\pi - \sin^{-1}2x) = \cos(\sin^{-1}2x)$ B1
Attempt to diff. as above M1
Replace x in reasonable dy/dx and attempt to tidy M1
Get result above A1

<p>4 (i) Let $x = \cosh \theta$ such that $dx = \sinh \theta d\theta$ Clearly use $\cosh^2 - \sinh^2 = 1$</p>	<p>M1 A1</p>	<p>Clearly derive A.G.</p>
<p>(ii) Replace $\cosh^2 \theta$ Attempt to integrate their expression Get $\frac{1}{4} \sinh 2\theta + \frac{1}{2} \theta (+c)$ Clearly replace for x to A.G.</p>	<p>M1 M1 A1 B1</p>	<p>Allow $a (\cosh 2\theta \pm 1)$ Allow $b \sinh 2\theta \pm a\theta$ Condone no $+c$ SC Use expo. defⁿ; three terms Attempt to integrate Get $\frac{1}{8}(e^{2\theta} - e^{-2\theta}) + \frac{1}{2}\theta (+c)$ Clearly replace for x to A.G.</p>
<p>5 (i) (a) State $(x=) \alpha$ None of roots</p>	<p>B1 B1</p>	<p>No explanation needed</p>
<p>(b) Impossible to say All roots can be derived</p>	<p>B1 B1</p>	<p>Some discussion of values close to 1 or 2 or central leading to correct conclusion</p>
<p>(ii) </p>	<p>B1 B1 B1 B1 B1</p>	<p>Correct x for $y=0$; allow 0.591, 1.59, 2.31 Turning at (1,0.8) and/or (1,-0.8) Meets x-axis at 90° Symmetry in x-axis; allow</p>
<p>6 (i) Correct definitions used Attempt at $(e^x - e^{-x})^2 / 4 + 1$ Clearly derive A.G.</p>	<p>B1 M1 A1</p>	<p>Allow $(e^x + e^{-x})^2 + 1$; allow /2</p>
<p>(ii) Form a quadratic in $\sinh x$ Attempt to solve Get $\sinh x = -\frac{1}{2}$ or 3 Use correct ln expression Get $\ln(-\frac{1}{2} + \frac{\sqrt{5}}{2})$ and $\ln(3 + \sqrt{10})$</p>	<p>M1 M1 A1 M1 A1</p>	<p>Factors or formula On their answer(s) seen once</p>
<p>7 (i) $OP = 3 + 2\cos \alpha$ $OQ = 3 + 2\cos(\frac{1}{2}\pi + \alpha)$ $= 3 - 2\sin \alpha$ Similarly $OR = 3 - 2\cos \alpha$ $OS = 3 + 2\sin \alpha$ Sum = 12</p>	<p>M1 M1 A1</p>	<p>Any other unsimplified value Attempt at simplification of at least two correct expressions cao</p>
<p>(ii) Correct formula with attempt at r^2 Square r correctly Attempt to replace $\cos^2 \theta$ with $a(\cos 2\theta \pm 1)$ Integrate their expression Get $\frac{11\pi}{4} - 1$</p>	<p>M1 A1 M1 A1 A1</p>	<p>Need not be expanded, but three terms if it is Need three terms cao</p>

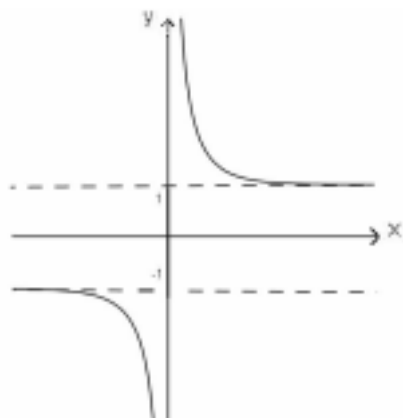
8	(i)	Area = $\int 1/(x+1) dx$	B1	Include or imply correct limits
		Use limits to $\ln(n+1)$	B1	
		Compare area under curve to areas of rectangles	B1	Justify inequality
		Sum of areas = $1x(1/2 + 1/3 + \dots + 1/(n+1))$	M1	Sum seen or implied as $1 \times y$ values
		Clear detail to A.G.	A1	Explanation required e.g. area of last rectangle at $x=n$, area under curve to $x=n$
(ii)	Show or explain areas of rectangles above curve	M1		
	Areas of rectangles (as above) > area under curve	A1	First and last heights seen or implied; A.G.	
(iii)	Add 1 to both sides in (i) to make $\sum(1/r)$	B1	Must be clear addition	
	Add $1/(n+1)$ to both sides in (ii) to make $\sum(1/r)$	B1	Must be clear addition; A.G.	
(iv)	State divergent	B1	Allow not convergent	
	Explain e.g. $\ln(n+1) \rightarrow \infty$ as $n \rightarrow \infty$	B1		
9	(i)	Require denom. = 0	B1	
		<u>Explain</u> why denom. $\neq 0$	B1	Attempt to solve, explain always > 0 etc.
(ii)	Set up quadratic in x	M1		
	Get $2yx^2 - 4x + (2a^2y + 3a) = 0$	A1		
	Use $b^2 \geq 4ac$ for real x	M1	Produce quadratic inequality in y from their quad.; allow use of = or <	
	Attempt to solve their inequality	M1	Factors or formula	
	Get $y > 1/2a$ and $y < -2/a$	A1	Justified from graph	
			SC Attempt diff. by quot./product rule M1	
			Solve $dy/dx = 0$ for two values of x M1	
			Get $x=2a$ and $x=-a/2$ A1	
			Attempt to find two y values M1	
			Get correct inequalities (graph used to justify them) A1	
(iii)	Split into two separate integrals	M1		
	Get $k \ln(x^2+a^2)$	A1	Or $p \ln(2x^2+2a^2)$	
	Get $k_1 \tan^{-1}(x/a)$	A1	k_1 not involving a	
	Use limits and attempt to simplify	M1		
	Get $\ln 2.5 - 1.5 \tan^{-1} 2 + 3\pi/8$	A1	AEEF	
			SC Sub. $x = a \tan \theta$ and $dx = a \sec^2 \theta d\theta$ M1	
			Reduce to $\int p \tan \theta - p_1 d\theta$ (ignore limits here) A1	
			Integrate to $p \ln(\sec \theta) - p_1 \theta$ A1	
			Use limits (old or new) and attempt to simplify M1	
			Get answer above A1	

4726 Further Pure Mathematics 2

1(i)	Attempt area = $\pm \Sigma(0.3y)$ for at least three y values Get 1.313(1..) or 1.314	M1 A1	May be implied Or greater accuracy
(ii)	Attempt \pm sum of areas (4 or 5 values) Get 0.518(4..)	M1 A1	May be implied Or greater accuracy SC If answers only seen, 1.313(1..) or 1.314 B2 0.518(4..) B2 -1.313(1..) or -1.314 B1 -0.518(4..) B1
	Or Attempt answer to part (i)–final rectangle Get 0.518(4..)	M1 A1	
(iii)	Decrease width of strips	B1	Use more strips or equivalent
2	Attempt to set up quadratic in x Get $x^2(y-1) - x(2y+1) + (y-1)=0$ Use $b^2 \geq 4ac$ for real x on their quadratic Clearly solve to AG	M1 A1 M1 A1	Must be quadratic; = 0 may be implied Allow =, >, <, \leq here; may be implied If other (in)equalities used, the step to AG must be clear SC Reasonable attempt to diff. using prod/quot rule M1 Solve correct $dy/dx=0$ to get $x=-1, y=1/4$ A1 Attempt to justify inequality e.g. graph or to show $d^2y/dx^2 > 0$ M1 Clearly solve to AG A1
3(i)	Reasonable attempt at chain rule Reasonable attempt at product/quotient rule Correctly get $f'(0)=1$ Correctly get $f''(0)=1$	M1 M1 A1 A1	Product in answer Sum of two parts SC Use of $\ln y = \sin x$ follows same scheme
(ii)	Reasonable attempt at Maclaurin with their values Get $1 + x + \frac{1}{2}x^2$	M1 A1 \checkmark	In $af(0) + bf'(0)x + cf''(0)x^2$ From their $f(0), f'(0), f''(0)$ in a correct Maclaurin; all non-zero terms
4	Attempt to divide out. Get $x^3 = A(x-2)(x^2+4) + B(x^2+4) + (Cx+D)(x-2)$ State/derive/quote $A=1$ Use x values and/or equate coeff	M1 M1 A1 M1	Or $A+B/(x-2) + (Cx+D)/(x^2+4)$; allow $A=1$ and/or $B=1$ quoted Allow \checkmark mark from their Part Fract; allow $D=0$ but not $C=0$ To potentially get all their constants

	Get $B=1, C=1, D=-2$	A1	For one other correct from cwo
		A1	For all correct from cwo
5(i)	Derive/quote $d\theta=2dt/(1+t^2)$	B1	May be implied
	Replace their $\cos \theta$ and their $d\theta$, both in terms of t	M1	Not $d\theta = dt$
	Clearly get $\int(1-t^2)/(1+t^2) dt$ or equiv	A1	Accept limits of t quoted here
	Attempt to divide out	M1	Or use AG to get answer above
	Clearly get/derive AG	A1	
			SC
			Derive $d\theta = 2\cos^2\frac{1}{2}\theta dt$ B1
			Replace $\cos\theta$ in terms of half-angles and their $d\theta$ ($\neq dt$) M1
			Get $\int 2\cos^2\frac{1}{2}\theta - 1 dt$ or
			$\int 1 - 1/2\cos^2\frac{1}{2}\theta .2/(1+t^2) dt$ A1
			Use $\sec^2\frac{1}{2}\theta = 1+t^2$ M1
			Clearly get/derive AG A1
(ii)	Integrate to $a\tan^{-1}bt - t$	M1	
	Get $1/2\pi - 1$	A1	
6	Get $k \sinh^{-1}k_1x$	M1	For either integral; allow attempt at ln version here
	Get $1/3 \sinh^{-1}3/4x$	A1	Or ln version
	Get $1/2 \sinh^{-1}2/3x$	A1	Or ln version
	Use limits in their answers	M1	
	Attempt to use correct ln laws to set up a solvable equation in a	M1	
	Get $a = 2^{1/3} \cdot 3^{1/2}$	A1	Or equivalent

7(i)



- B1 y-axis asymptote; equation may be implied if clear
- B1 Shape
- B1 $y = \pm 1$ asymptotes; may be implied if seen as on graph

(ii) Reasonable attempt at product rule, giving two terms

M1

Use correct Newton-Raphson at least once with their $f'(x)$ to produce an x_2

M1

May be implied

Get $x_2 = 2.0651$

A1√

One correct at any stage if reasonable

Get $x_3 = 2.0653, x_4 = 2.0653$

A1

cao; or greater accuracy which rounds

(iii) Clearly derive $\coth x = 1/2x$

B1

AG; allow derivation from AG
Two roots only

Attempt to find second root e.g. symmetry

M1

Get ± 2.0653

\pm their iteration in part (ii)

A1√

8(i) (a) Get $\frac{1}{2}(e^{\ln a} + e^{-\ln a})$
Use $e^{\ln a} = a$ and $e^{-\ln a} = 1/a$
Clearly derive AG

M1

M1

A1

(b) Reasonable attempt to multiply out their attempts at exponential definitions of cosh and sinh

M1

4 terms in each

Correct expansion seen as $e^{(x+y)}$ etc.

A1

Clearly tidy to AG

A1

With $e^{-(x-y)}$ seen or implied

(ii) Use $x = y$ and $\cosh 0 = 1$ to get AG

B1

(iii) Attempt to expand and equate coefficients

M1

$(13 = R \cosh \ln a = R(a^2+1)/2a$
 $5 = R \sinh \ln a = R(a^2-1)/2a)$

Attempt to eliminate R (or a) to set up a solvable equation in a (or R)

M1

SC
If exponential definitions used,
 $8e^x + 18e^{-x} = Re^x/a + Rae^{-x}$ and
same scheme follows

Get $a = 3/2$ (or $R = 12$)

A1

Replace for a (or R) in relevant equation to set up solvable equation in R (or a)

M1

Get $R=12$ (or $a = 3/2$)

A1

Ignore if $a=2/3$ also given

(iv) Quote/derive $(\ln^3/2, 12)$

B1√

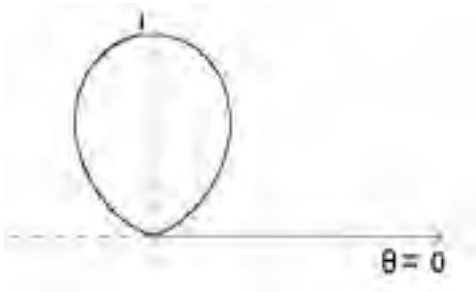
On their R and a

B1√


9(i) Use $\sin \theta \cdot \sin^{n-1} \theta$ and parts

M1

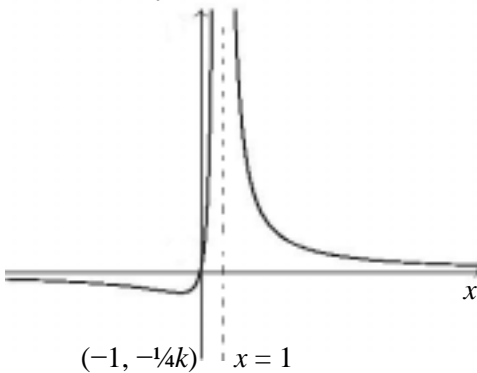
Reasonable attempt with 2 parts, one yet to be integrated

Get	A1	Signs need to be carefully considered
$-\cos\theta.\sin^{n-1}\theta+(n-1)\int\sin^{n-2}\theta.\cos^2\theta d\theta$		
Replace $\cos^2 = 1 - \sin^2$	M1	
Clearly use limits and get AG	A1	
(ii) (a) Solve for $r=0$ for at least one θ	M1	θ need not be correct
Get $(\theta) = 0$ and π	A1	Ignore extra answers out of range
	B1	General shape (symmetry stated or approximately seen)
		
	B1	Tangents at $\theta=0, \pi$ and max r seen
(b) Correct formula used; correct r	M1	May be $\int r^2 d\theta$ with correct limits
Use $6I_6 = 5I_4, 4I_4 = 3I_2$	M1	At least one
Attempt I_0 (or I_2)	M1	($I_0 = \frac{1}{2}\pi$)
Replace their values to get I_6	M1	
Get $5\pi/32$	A1	
Use symmetry to get $5\pi/32$	A1	May be implied but correct use of limits must be given somewhere in answer
Or		
Correct formula used; correct r	M1	
Reasonable attempt at formula		
$(2i\sin\theta)^6 = (z - 1/z)^6$	M1	
Attempt to multiply out both sides		
(7 terms)	M1	
Get correct expansion	A1	
Convert to trig. equivalent and integrate their expression	M1	cwo
Get $5\pi/32$	A1	
Or		
Correct formula used; correct r	M1	
Use double-angle formula and attempt to cube (4 terms)	M1	
Get correct expression	A1	
Reasonable attempt to put $\cos^2 2\theta$ into integrable form and integrate	M1	
Reasonable attempt to integrate $\cos^3 2\theta$ as e.g. $\cos^2 2\theta.\cos 2\theta$	M1	cwo
Get $5\pi/32$	A1	

4726 Further Pure Mathematics 2

1	(i)	Get 0.876096, 0.876496, 0.876642	B1√	For any one correct or √ from wrong answer; radians only
			B1	All correct
	(ii)	Subtract correctly (0.00023(0), 0.000084)	B1√	On their answers
		Divide their errors as e_4/e_3 only	M1	May be implied
		Get 0.365(21...)	A1	Cao
2	(i)	Find $f'(x) = 1/(1+(1+x)^2)$	M1	Quoted or derived; may be simplified or left as $\sec^2 y \, dy/dx = 1$
		Get $f(0) = 1/4\pi$ and $f'(0) = 1/2$	A1√	On their $f'(0)$; allow $f(0)=0.785$ but not 45
		Attempt $f''(x)$	M1	Reasonable attempt at chain/quotient rule or implicit differentiation
		Correctly get $f''(0) = -1/2$	A1	A.G.
	(ii)	Attempt Maclaurin as $af(0)+bf'(0)+cf''(0)$	M1	Using their $f(0)$ and $f'(0)$
		Get $1/4\pi + 1/2x - 1/4x^2$	A1	Cao; allow 0.785
3	(i)	Attempt gradient as $\pm f(x_1)/(x_2 - x_1)$	M1	Allow reasonable y -step/ x -step
		Equate to gradient of curve at x_1	M1	Allow \pm
		Clearly arrive at A.G.	A1	Beware confusing use of \pm
	SC	Attempt equation of tangent	M1	As $y - f(x_1) = f'(x_1)(x - x_1)$
		Put $(x_2, 0)$ into their equation	M1	
	Clearly arrive at A.G.	A1		
	(ii)	Diagram showing at least one more tangent	B1	
		Description of tangent meeting x -axis, used as next starting value	B1	
	(iii)	Reasonable attempt at N-R	M1	Clear attempt at differentiation
		Get 1.60	A1	Or answer which rounds
4	(i)	State $r = 1$ and $\theta = 0$.	B1	May be seen or implied
			B1	Correct shape, decreasing r (not through O)
	(ii)	Use $1/2 \int r^2 \, d\theta$ with $r = e^{-2\theta}$ seen or implied	M1	Allow $1/2 \int e^{4\theta} \, d\theta$
		Integrate correctly as $-1/8 e^{-4\theta}$	A1	
		Use limits in correct order	M1	In their answer
		Use $r_1^2 = e^{-4\theta}$ etc.	M1	May be implied
		Clearly get $k = 1/8$	A1	

5	(i)	Use correct definitions of cosh and sinh	B1	
		Attempt to square and subtract	M1	On their definitions
		Clearly get A.G.	A1	
		Show division by \cosh^2	B1	Or clear use of first result
<hr/>				
(ii)		Rewrite as quadratic in sech and attempt to solve	M1	Or quadratic in cosh
		Eliminate values outside $0 < \operatorname{sech} \leq 1$	B1	Or eliminate values outside $\cosh \geq 1$ (allow positive)
		Get $x = \ln(2+\sqrt{3})$	A1	
		Get $x = -\ln(2+\sqrt{3})$ or $\ln(2-\sqrt{3})$	A1	
<hr/>				
6	(i)	Attempt at correct form of P.F.	M1	Allow $Cx/(x^2+1)$ here; not $C = 0$
		Rewrite as $4 =$		
		$A(1+x)(1+x^2) + B(1-x)(1+x^2) + (Cx+D)(1-x)(1+x)$	M1	From their P.F.
		Use values of x /equate coefficients	M1	
		Get $A = 1, B = 1$	A1	cwo
		Get $C = 0, D = 2$	A1	
				SC Use of cover-up rule for A, B M1 If both correct A1 cwo
<hr/>				
(ii)		Get $A \ln(1+x) - B \ln(1-x)$	M1	Or quote from List of Formulae
		Get $D \tan^{-1}x$	B1	
		Use limits in their integrated expressions	M1	
		Clearly get A.G.	A1	
<hr/>				
7	(i)	LHS = sum of areas of rectangles, area = $1 \times y$ -value from $x = 1$ to $x = n$	B1	
		RHS = Area under curve from $x = 0$ to n	B1	
<hr/>				
(ii)		Diagram showing areas required	B1	
		Use sum of areas of rectangles	B1	
		Explain/show area inequality with limits in integral clearly specified	B1	
<hr/>				
(iii)		Attempt integral as $kx^{4/3}$	M1	
		Limits gives 348(.1) and 352(.0)	A1	Allow one correct
		Get 350	A1	From two correct values only

8	(i)	Get $x = 1, y = 0$	B1, B1	
	(ii)	Rewrite as quadratic in x Use $b^2 - 4ac \geq 0$ for all real x Get correct inequality State use of $k > 0$ to A.G.	M1 M1 A1 A1	$(x^2y - x(2y + k) + y = 0)$ Allow $>, =$ here $4ky + k^2 \geq 0$
				SC Use differentiation (parts (ii) and (iii)) Attempt prod/quotient rule M1 Solve $= 0$ for $x = -1$ A1 Use $x = -1$ only (reject $x = 1$), $y = -1/4k$ A1 Fully justify minimum B1 Attempt to justify for all x M1 Clearly get A.G. A1
	(iii)	Replace $y = -1/4k$ in quadratic in x Get $x = -1$ only	M1 A1	
			B1 B1	Through origin with minimum at $(-1, -1/4k)$ seen or given in the answer Correct shape (asymptotes and approaches)
				SC (Start again) Differentiate and solve $dy/dx = 0$ for at least one x -value, independent of k M1 Get $x = -1$ only A1
9	(i)	Rewrite $\tanh y$ as $(e^y - e^{-y})/(e^y + e^{-y})$ Attempt to write as quadratic in e^{2y} Clearly get A.G.	B1 M1 A1	Or equivalent
	(ii)	(a) Attempt to diff. and solve $= 0$ Get $\tanh x = b/a$ Use $(-1) < \tanh x < 1$ to show $b < a$	M1 A1 B1	SC Use exponentials M1 Get $e^{2x} = (a + b)/(a - b)$ A1 Use $e^{2x} > 0$ to show $b < a$ B1
				SC Write $x = \tanh^{-1}(b/a)$ M1 $= 1/2 \ln((1 + b/a)/(1 - b/a))$ A1 Use $() > 0$ to show $b < a$ B1
		(b) Get $\tanh x = 1/a$ from part (ii)(a) Replace as \ln from their answer Get $x = 1/2 \ln((a + 1)/(a - 1))$ Use $e^{1/2 \ln((a+1)/(a-1))} = \sqrt{(a + 1)/(a - 1)}$ Clearly get A.G. Test for minimum correctly	B1 M1 A1 M1 A1 B1	At least once
				SC Use of $y = \cosh x(a - \tanh x)$ and $\cosh x = 1/\operatorname{sech} x = 1/\sqrt{1 - \tanh^2 x}$

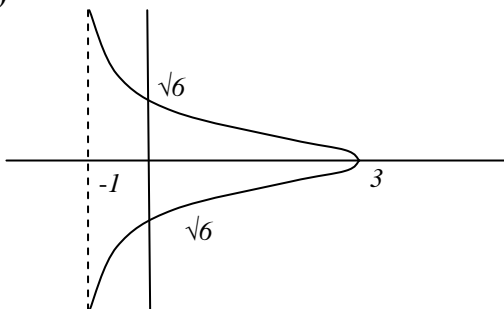
- 1** Derive/quote $g'(x) = p/(1+x^2)$
 Attempt $f'(x)$ as $a/(1+bx^2)$
 Use $x = 1/2$ to set up a solvable equation in p , leading to at least one solution
 Get $p = 5/4$ only
- 2** Reasonable attempt at $e^{2x}(1+2x+2x^2)$
 Multiply out their expressions to get all terms up to x^2
 Get $1+3x+4x^2$
 Use binomial, equate coefficients to get 2 solvable equations in a and n
 Reasonable attempt to eliminate a or n
 Get $n=9, a=1/3$ cwo
- 3** Quote/derive correct $dx=2dt/(1+t^2)$
 Replace all x (not $dx=dt$)
 Get $2/(t-1)^2$ or equivalent
 Reasonable attempt to integrate their expression
 Use correct limits in their correct integral
 Clearly tidy to $\sqrt{3}+1$ from cwo
- 4 (i)** Get $a = -2$
 Get $b = 6$
 Get $c = 1$

- B1
 M1 Allow any $a, b=2$ or 4
 M1
 A1 AEEF
- M1 3 terms of the form $1+2x+ax^2, a \neq 0$
 M1 (3 terms) x (minimum of 2 terms)
 A1 cao
 Reasonable attempt at binomial, each term
 M1 involving a and n ($an=3, a^2n(n-1)/2=4$)
 M1
 A1 cao
 SC Reasonable $f'(x)$ and $f''(x)$ using product rule (2 terms) M1
 Use their expressions to find $f'(0)$ and $f''(0)$ M1
 Get $1+3x+4x^2$ cao A1

- B1
 M1 From their expressions
 A1
 M1
 A1√ Must involve $\sqrt{3}$
 A1 A.G.

- B1 May be quoted
 B1 May be quoted
 B1 May be quoted
- (from correct working)

(ii)



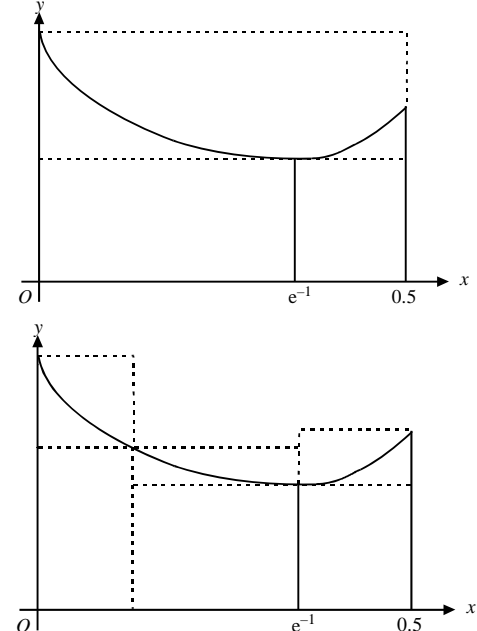
- B1 Correct shape in $-1 < x \leq 3$ only (allow just top or bottom half)
- B1 90° (at $x=3$) (must cross x -axis i.e. symmetry)
- B1 Asymptote at $x = -1$ only (allow -1 seen)
- B1√ Correct crossing points; $\pm\sqrt{(b/c)}$ from their b, c

- 5 (i)** Reasonable attempt at parts
 Get $e^x(1-2x)^n - \int e^x \cdot n(1-2x)^{n-1} \cdot -2 dx$
 Evidence of limits used in integrated part
 Tidy to A.G.
- M1 Leading to second integral
 A1 Or $(1-2x)^{n+1}/(-2(n+1))e^x - \int (1-2x)^{n+1}/(-2(n+1))e^x dx$
 M1 Should show ± 1
 A1 Allow $I_{n+1} = 2(n+1)I_n - 1$
- (ii)** Show any one of $I_3=6I_2-1$, $I_2=4I_1-1$,
 $I_1=2I_0-1$
 Get $I_0(=e^{1/2}-1)$ or $I_1(=2e^{1/2}-3)$
 Substitute their values back for their I_3
 Get $48e^{1/2} - 79$
- B1 May be implied
 B1
 M1 Not involving n
 A1
- 6 (i)** Reasonable attempt to differentiate
 $\sinh y = x$ to get dy/dx in terms of y
 Replace $\sinh y$ to A.G.
- M1 Allow $\pm \cosh y dy/dx = 1$
 A1 Clearly use $\cosh^2 - \sinh^2 = 1$
 SC Attempt to diff. $y = \ln(x + \sqrt{x^2+1})$
 using chain rule M1
 Clearly tidy to A.G. A1
- (ii)** Reasonable attempt at chain rule
 Get $dy/dx = a \sinh(asinh^{-1}x)/\sqrt{x^2+1}$
 Reasonable attempt at product/quotient
 Get d^2y/dx^2 correctly in some form
 Substitute in and clearly get A.G.
- M1 To give a product
 A1
 M1 Must involve \sinh and \cosh
 A1 $\sqrt{\text{From } dy/dx = k \sinh(asinh^{-1}x)/\sqrt{x^2+1}}$
 A1
 SC Write $\sqrt{x^2+1}dy/dx = k \sinh(asinh^{-1}x)$
 or similar
 Derive the A.G.
- 7 (i)** Get 5.242, 5.239, 5.237
 Get 5.24
- B1 $\sqrt{\text{Any 3(minimum) correct from previous value}}$
 B1 Allow one B1 for 5.24 seen if 2 d.p.used
- (ii)** Show reasonable staircase for any region
 Describe any one of the three cases
 Describe all three cases
- B1 Drawn curve to line
 B1
 B1
- (iii)** Reasonable attempt to use log/expo. rules
 Clearly get A.G.
 Attempt $f'(x)$ and use at least once in
 correct N-R formula
 Get answers that lead to 1.31
- M1 Allow derivation either way
 A1
 M1
 A1 Minimum of 2 answers; allow
 truncation/rounding to at least 3 d.p.
- (iv)** Show $f'(\ln 36) = 0$
 Explain why N-R would not work
- B1
 B1 Tangent parallel to Ox would not meet Ox again
 or divide by 0 gives an error

- 8 (i)** Use correct definition of $\cosh x$ B1
 Attempt to cube their definition involving e^x and e^{-x} (or e^{2x} and e^x) M1 Must be 4 terms
 Put their 4 terms into LHS and attempt to simplify M1
 Clearly get A.G. A1
 SC Allow one B1 for correct derivation from $\cosh 3x = \cosh(2x+x)$
- (ii)** Rewrite as $k\cosh 3x = 13$ M1
 Use \ln equivalent on $13/k$ M1 Allow $\pm \ln$ or $\ln(13/k \pm \sqrt{(13/k)^2 - 1})$ for their k or attempt to set up and solve quadratic via exponentials
 Get $x = (\pm) \frac{1}{3} \ln 5$ A1
 Replace in $\cosh x$ for u M1
 Use $e^{aln b} = b^a$ at least once M1
 Get $\frac{1}{2}(5^{1/3} + 5^{-1/3})$ A1
- 9 (i)** Attempt integral as $k(2x+1)^{1.5}$ M1
 Get 9 A1 cao
 Attempt subtraction of areas M1 Their answer – triangle
 Get 3 A1 $\sqrt{\text{Their answer} - 6} (>0)$
- (ii)** Use $r^2 = x^2 + y^2$ and $x = r\cos\theta, y = r\sin\theta$ B1
 Eliminate x and y to produce quadratic equation ($=0$) in r (or $\cos\theta$) M1
 Solve their quadratic to get r in terms of θ (or vice versa) A1 $\sqrt{\quad}$
 Clearly get A.G. A1 $r > 0$ may be assumed
 Clearly show θ_1 (at B) = $\tan^{-1} \frac{3}{4}$ and θ_2 (at A) = π B1
 SC Eliminate y to get r in terms of x only M1
 Get $r = x + 1$ A1
 SC Start with $r = 1/(1 - \cos\theta)$ and derive cartesian
- (iii)** Use area = $\frac{1}{2} \int r^2 d\theta$ with correct r B1 cwo; ignore limits
 Rewrite as $k\operatorname{cosec}^4(\frac{1}{2}\theta)$ M1 Not just quoted
 Equate to their part (i) and tidy M1 To get $\int = \text{some constant}$
 Get 24 A1 A.G.

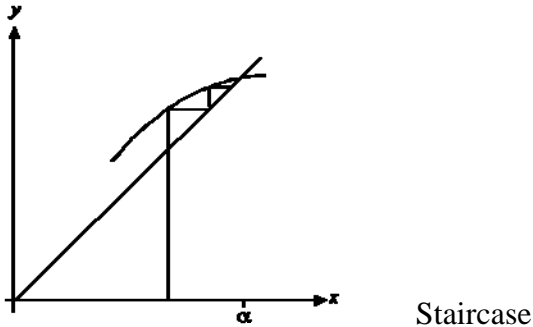
1	$t = \tan \frac{1}{2}x \Rightarrow dt = \frac{1}{2} \sec^2 \frac{1}{2}x dx = \frac{1}{2}(1+t^2) dx$ $\int \frac{1}{1 + \sin x + \cos x} dx = \int \frac{1}{1 + \frac{2t}{1+t^2} + \frac{1-t^2}{1+t^2}} \cdot \frac{2}{1+t^2} dt$ $= \int \frac{1}{1+t} dt = \ln 1+t (+c)$ $= \ln k \left 1 + \tan \frac{1}{2}x \right (+c)$	B1 M1 A1 M1 A1 5	For correct result AEF (may be implied) For substituting throughout for x For correct unsimplified t integral For integrating (even incorrectly) to $a \ln f(t) $. Allow $ $ or $()$ For correct x expression k may be numerical, c is not required
2 (i)	$f(x) = \tanh^{-1} x, f'(x) = \frac{1}{1-x^2}, f''(x) = \frac{2x}{(1-x^2)^2}$ $f'''(x) = \frac{2(1-x^2)^2 - 2x \cdot 2(1-x^2) \cdot -2x}{(1-x^2)^4} \text{ OR } \frac{2x \cdot 4x}{(1-x^2)^3} + \frac{2}{(1-x^2)^2}$ $= \frac{2(1-x^2)^2 + 8x^2(1-x^2)}{(1-x^2)^4} \text{ OR } \frac{8x^2}{(1-x^2)^3} + \frac{2(1-x^2)}{(1-x^2)^3}$ $= \frac{2(1+3x^2)}{(1-x^2)^3}$	M1 A1 M1 A1 A1 5	For quoting $f'(x) = \frac{1}{1 \pm x^2}$ and attempting to differentiate $f'(x)$ For $f''(x)$ correct WWW For using quotient <i>OR</i> product rule on $f''(x)$ For correct unsimplified $f'''(x)$ For simplified $f'''(x)$ WWW AG
(ii)	$f(0) = 0, f'(0) = 1, f''(0) = 0$ $f'''(0) = 2 \Rightarrow \tanh^{-1} x = x + \frac{1}{3}x^3$	B1√ M1 A1 3	For all values correct (may be implied) f.t. from (i) For evaluating $f'''(0)$ and using Maclaurin expansion For correct series
3 (i)(a)	Asymptote $y = 0$	B1 1	For correct equation (allow x -axis)
(b)	METHOD 1 $y = \frac{5ax}{x^2 + a^2} \Rightarrow yx^2 - 5ax + a^2y = 0$ $b^2 \geq 4ac \Rightarrow 25a^2 \geq 4a^2y^2 \Rightarrow -\frac{5}{2} \leq y \leq \frac{5}{2}$	M1 M1 A1 A1 4	For expressing as a quadratic in x For using $b^2 - 4ac \leq 0$ For $25a^2 - 4a^2y^2$ seen or implied For correct range
	METHOD 2 $y = \frac{5ax}{x^2 + a^2} \Rightarrow \frac{dy}{dx} = \frac{-5a(x^2 - a^2)}{(x^2 + a^2)^2}$ $\frac{dy}{dx} = 0 \Rightarrow x = \pm a \Rightarrow y = \pm \frac{5}{2}$ Asymptote, sketch etc $\Rightarrow -\frac{5}{2} \leq y \leq \frac{5}{2}$	M1* A1 M1 A1 (*dep)	For differentiating y by quotient <i>OR</i> product rule For correct values of x For finding y values and giving argument for range For correct range
(ii)(a)	$y = 0$	B1 1	For correct equation (allow x -axis)
(b)	Maximum $\sqrt{\frac{5}{2}}$, minimum $-\sqrt{\frac{5}{2}}$	B1√ B1√ 2	For correct maximum f.t. from (i)(b) For correct minimum f.t. from (i)(b) Allow decimals
(c)	$x \geq 0$	B1 1	For correct set of values (allow in words)

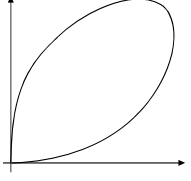
4 (i)	$8\sinh^4 x \equiv \frac{8}{16}(e^x - e^{-x})^4$ $\equiv \frac{8}{16}(e^{4x} - 4e^{2x} + 6 - 4e^{-2x} + e^{-4x})$ $\equiv \frac{1}{2}(e^{4x} + e^{-4x}) - \frac{4}{2}(e^{2x} + e^{-2x}) + \frac{6}{2}$ $\equiv \cosh 4x - 4\cosh 2x + 3$	B1 M1 M1 A1	$\sinh x = \frac{1}{2}(e^x - e^{-x})$ seen or implied For attempt to expand $(\dots)^4$ by binomial theorem <i>OR</i> otherwise For grouping terms for $\cosh 4x$ <i>or</i> $\cosh 2x$ <i>OR</i> using e^{4x} <i>or</i> e^{2x} expressions from RHS For correct expression AG
SR may be done wholly from RHS to LHS		M1 M1 B1 A1	Evidence of factorising required for 2nd M1
(ii)	METHOD 1 $\cosh 4x - 3\cosh 2x + 1 = 0$ $\Rightarrow (8\sinh^4 x + 4\cosh 2x - 3) - 3\cosh 2x + 1 = 0$ $\Rightarrow 8\sinh^4 x + 2\sinh^2 x - 1 = 0$ $\Rightarrow (4\sinh^2 x - 1)(2\sinh^2 x + 1) = 0 \Rightarrow \sinh x = \pm \frac{1}{2}$ $\Rightarrow x = \ln\left(\pm \frac{1}{2} + \frac{1}{2}\sqrt{5}\right) = \pm \ln\left(\frac{1}{2} + \frac{1}{2}\sqrt{5}\right)$	M1 A1 M1 A1 A1√	For using (i) and $\cosh 2x \equiv \pm 1 \pm 2\sinh^2 x$ For correct equation For solving their quartic for $\sinh x$ For correct $\sinh x$ (ignore other roots) For correct answers (and no more) f.t. from their value(s) for $\sinh x$
SR Similar scheme for $8\cosh^4 x - 14\cosh^2 x + 5 = 0 \Rightarrow \cosh x = \frac{1}{2}\sqrt{5} \Rightarrow x = \pm \ln\left(\frac{1}{2} + \frac{1}{2}\sqrt{5}\right)$			
METHOD 2 $\cosh 4x - 3\cosh 2x + 1 = 0$			
$\Rightarrow (2\cosh^2 2x - 1) - 3\cosh 2x + 1 = 0$ $\Rightarrow 2\cosh^2 2x - 3\cosh 2x = 0$ $\Rightarrow \cosh 2x = \frac{3}{2} \Rightarrow x = \frac{1}{2}\ln\left(\frac{3}{2} \pm \frac{1}{2}\sqrt{5}\right)$ $= \pm \frac{1}{2}\ln\left(\frac{3}{2} + \frac{1}{2}\sqrt{5}\right)$		M1 A1 M1 A1 A1√	For using $\cosh 4x \equiv \pm 2\cosh^2 2x \pm 1$ For correct equation For solving for $\cosh 2x$ For correct $\cosh 2x$ (ignore others) For correct answers (and no more) f.t. from value(s) for $\cosh 2x$
METHOD 3 Put all into exponentials			
$\Rightarrow e^{4x} - 3e^{2x} + 2 - 3e^{-2x} + e^{-4x} = 0$ $\Rightarrow (e^{4x} + 1)(e^{4x} - 3e^{2x} + 1) = 0$ $\Rightarrow e^{2x} = \frac{1}{2}(3 \pm \sqrt{5}) \Rightarrow x = \frac{1}{2}\ln\left(\frac{3}{2} \pm \frac{1}{2}\sqrt{5}\right)$		M1 A1 M1 A1 A1√	For changing to $e^{\pm kx}$ For correct equation For solving for e^{2x} For correct e^{2x} (ignore others) For correct answers (and no more) f.t. from value(s) for e^{2x}
9			
5 (i)	$x_{n+1} = x_n - \frac{x_n^3 - 5x_n + 3}{3x_n^2 - 5} = \frac{2x_n^3 - 3}{3x_n^2 - 5}$	M1 A1 A1	For attempt at N-R formula For correct N-R expression For correct answer (necessary details needed) AG
Allow omission of suffixes			
(ii)	$F'(x) = \frac{6x^2(3x^2 - 5) - 6x(2x^3 - 3)}{(3x^2 - 5)^2} = \frac{6x(x^3 - 5x + 3)}{(3x^2 - 5)^2}$ $F'(\alpha) = \frac{6\alpha(\alpha^3 - 5\alpha + 3)}{(3\alpha^2 - 5)^2} = 0 \text{ since } \alpha^3 - 5\alpha + 3 = 0$	M1 M1 A1	For using quotient <i>OR</i> product rule to find $F'(x)$ For factorising numerator to show $k(x^3 - 5x + 3)$ For correct explanation of AG
(iii)	$x_1 = 2 \Rightarrow 1.85714, 1.83479, 1.83424, 1.83424$ $(\alpha =) 1.8342$ SR For starting value leading to another root allow up to B1 B1 B0	B1 B1 B1	First iterate correct to at least 4 d.p. <i>OR</i> $\frac{13}{7}$ For 2 equal iterates to at least 4 d.p. For correct α to 4 d.p. Allow answer rounding to 1.8342 SR If not N-R, B0 B0 B0
9			

<p>6 (i)</p> $y = x^x \Rightarrow \ln y = x \ln x \Rightarrow \frac{1}{y} \frac{dy}{dx} = 1 + \ln x$ $\frac{dy}{dx} = x^x (1 + \ln x) = 0 \Rightarrow \ln x = -1 \Rightarrow x = e^{-1}$	<p>M1 For differentiating $\ln y$ OR $x \ln x$ w.r.t. x</p> <p>A1 For $(1 + \ln x)$ seen or implied</p> <p>A1 3 For correct x-value from fully correct working AG</p>
<p>(ii)</p> $A > 0.2 \times 0.5^{0.5} + 0.2 \times 0.7^{0.7} + 0.1 \times 0.9^{0.9}$ $\Rightarrow A > 0.3881(858) > 0.388$	<p>M1 For areas of 3 lower rectangles</p> <p>A1 2 For lower bound rounding to AG</p>
<p>(iii)</p> $A < 0.2 \times 0.7^{0.7} + 0.2 \times 0.9^{0.9} + 0.1 \times 1^1$ $\Rightarrow A < 0.4377(177) < 0.438$	<p>M1 For areas of 3 upper rectangles</p> <p>A1 2 For upper bound rounding to 0.438</p>
<p>(iv)</p> 	<p>M1 Consider rectangle of height $f(e^{-1})$</p> <p>A1 Use at least 1 lower rectangle, height $f(e^{-1})$</p> <p>B1 3 Use at least 1 upper rectangle, height $f(0)$</p> <p>SR If more than one rectangle is used for either bound, they must be shown correctly</p>
<p>10</p>	
<p>7 (i)</p> $\cos 3\theta = \cos(-3\theta) \text{ OR } \cos \theta = \cos(-\theta) \text{ for all } \theta$ $\Rightarrow \text{equation is unchanged, so symmetrical about } \theta = 0$	<p>M1 For a correct procedure for symmetry related to the equation OR to $\cos 3\theta$</p> <p>A1 2 For correct explanation relating to equation AG</p>
<p>(ii)</p> $r = 0 \Rightarrow \cos 3\theta = -1$ $\Rightarrow \theta = \pm \frac{1}{3}\pi, \pi$	<p>M1 For obtaining equation for tangents</p> <p>A1 A1 for any 2 values</p> <p>A1 3 A1 for all, no extras (ignore outside range)</p>
<p>(iii)</p> $\int_{-\frac{1}{3}\pi}^{\frac{1}{3}\pi} \frac{1}{2}(1 + \cos 3\theta)^2 (d\theta)$ $= \frac{1}{2} \int_{-\frac{1}{3}\pi}^{\frac{1}{3}\pi} 1 + 2 \cos 3\theta + \cos^2 3\theta d\theta$ $= \frac{1}{2} \int_{-\frac{1}{3}\pi}^{\frac{1}{3}\pi} 1 + 2 \cos 3\theta + \frac{1}{2}(1 + \cos 6\theta) d\theta$ $= \frac{1}{2} \left[\theta + \frac{2}{3} \sin 3\theta + \left(\frac{1}{2} \theta + \frac{1}{12} \sin 6\theta \right) \right]_{-\frac{1}{3}\pi}^{\frac{1}{3}\pi}$ $= \frac{1}{2} \pi$	<p>B1 For correct integral with limits soi (limits may be $[0, \frac{1}{3}\pi]$ at any stage)</p> <p>M1* For multiplying out, giving at least 2 terms</p> <p>M1 For integration to $A\theta + B \sin 3\theta + C \sin 6\theta$ AEF</p> <p>M1 For completing integration and substituting</p> <p>(*dep) their limits into terms in $\frac{\cos}{\sin} n\theta$</p> <p>A1 5 For correct area WWW</p>
<p>10</p>	

8 (i)	METHOD 1		
	$\sinh(\cosh^{-1} 2) =$	M1	For appropriate use of $\sinh^2 \theta = \cosh^2 \theta - 1$
	$\sinh \beta = \sqrt{\cosh^2 \beta - 1} = \sqrt{2^2 - 1} = \sqrt{3}$	A1 2	For correct verification to AG
METHOD 2			
$\sinh^{-1} \sqrt{3} = \ln(\sqrt{3} + 2), \cosh^{-1} 2 = \ln(2 + \sqrt{3})$	M1	For attempted use of \ln forms of $\sinh^{-1} x$ and $\cosh^{-1} x$	
$\Rightarrow \sinh(\cosh^{-1} 2) = \sqrt{3}$	A1	For both \ln expressions seen	
METHOD 3			
$\cosh^{-1} 2 = \ln(2 + \sqrt{3})$	M1	For use of \ln form of $\cosh^{-1} x$ and definition of $\sinh x$	
$\sinh(\cosh^{-1} 2) = \frac{1}{2} \left(e^{\ln(2+\sqrt{3})} - e^{-\ln(2+\sqrt{3})} \right)$	A1	For correct verification to AG	
$= \frac{1}{2} (2 + \sqrt{3} - (2 - \sqrt{3})) = \sqrt{3}$		SR Other similar methods may be used Note that $\ln(2 + \sqrt{3}) = -\ln(2 - \sqrt{3})$	
(ii)			
$I_n = \int_0^\beta \cosh^n x \, dx$	M1*	For attempt to integrate $\cosh x \cdot \cosh^{n-1} x$ by parts	
$= \left[\sinh x \cdot \cosh^{n-1} x \right]_0^\beta - \int_0^\beta \sinh^2 x \cdot (n-1) \cosh^{n-2} x \, dx$	A1	For correct first stage of integration (ignore limits)	
$= \sinh \beta \cdot \cosh^{n-1} \beta - (n-1) \int_0^\beta (\cosh^2 x - 1) \cosh^{n-2} x \, dx$	M1 (*dep)	For using $\sinh^2 x = \cosh^2 x - 1$	
$= 2^{n-1} \sqrt{3} - (n-1)(I_n - I_{n-2})$	A1	For $(n-1)(I_n - I_{n-2})$ correct	
$\Rightarrow n I_n = 2^{n-1} \sqrt{3} + (n-1) I_{n-2}$	B1 A1 6	For $2^{n-1} \sqrt{3}$ correct at any stage For correct result AG	
(iii)			
$I_1 = \int_0^\beta \cosh x \, dx = \sinh \beta = \sqrt{3}$	B1	For correct value	
$I_3 = \frac{1}{3} (2^2 \sqrt{3} + 2\sqrt{3}) = 2\sqrt{3}$	M1 A1	For using (ii) with $n = 3$ OR $n = 5$ For $I_3 = \frac{1}{3} (2^2 \sqrt{3} + 2I_1)$	
$I_5 = \frac{1}{5} (2^4 \sqrt{3} + 8\sqrt{3}) = \frac{24}{5} \sqrt{3}$	A1 4	OR $I_5 = \frac{1}{5} (2^4 \sqrt{3} + 4I_3)$ For correct value	

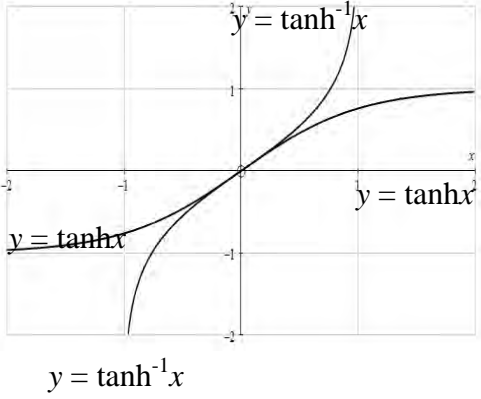
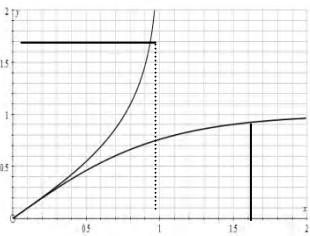
1	$\frac{2x+3}{(x+3)(x^2+9)} \equiv \frac{A}{x+3} + \frac{Bx+C}{x^2+9}$ $A = -\frac{1}{6}$ $2x+3 \equiv A(x^2+9) + (Bx+C)(x+3)$ $B = \frac{1}{6}, \quad C = \frac{3}{2}$ $\Rightarrow \frac{-1}{6(x+3)} + \frac{x+9}{6(x^2+9)}$	B1 B1 M1 A1 A1 5	For correct form seen anywhere with letters or values For correct A (cover up or otherwise) For equating coefficients at least once.(or substituting values) into correct identity. For correct B and C For correct final statement cao, oe
2(i)	Asymptote $x = 2$ $y = x - 4 - \frac{13}{x-2}$ $\Rightarrow \text{asymptote } y = x - 4$	B1 M1 A1 3	For correct equation For dividing out (remainder not required) For correct equation of asymptote (ignore any extras)
(ii)	METHOD 1 $x^2 - (y+6)x + (2y-5) = 0$ $b^2 - 4ac (\geq 0) \Rightarrow (y+6)^2 - 4(2y-5) (\geq 0)$ $\Rightarrow y^2 + 4y + 56 (\geq 0)$ $\Rightarrow (y+2)^2 + 52 \geq 0: \text{ this is true } \forall y$ So y takes all values	M1 M1 A1 A1	N.B. answer given For forming quadratic in x For considering discriminant For correct simplified expression in y soi For completing square (or equivalent) and correct conclusion www
	METHOD 2 Obtain $\frac{dy}{dx} = \frac{x^2 - 4x + 17}{(x-2)^2} \quad \text{OR} \quad 1 + \frac{13}{(x-2)^2}$ $\Rightarrow \frac{dy}{dx} \geq 1 \quad \forall x,$ so y takes all values.	M1 A1 M1 A1 4	For finding $\frac{dy}{dx}$ either by direct differentiation or dividing out first For correct expression oe. For drawing a conclusion For correct conclusion www
	Alternate scheme: Sketching graph Graph correct approaching asymptotes from both side Graph completely correct Explanation about no turning values Correct conclusion	B1 B1 B1 B1	A graph with no explanation can only score 2

3(i)	$x_1 = 3.1 \Rightarrow x_2 = 3.13140,$ $x_3 = 3.14148$	B1 B1 2	For correct x_2 For correct x_3
(ii)	$F'(\alpha) \approx \frac{e_3}{e_2} = \frac{0.00471}{0.01479} = 0.318 \text{ (0.31846)}$ $F'(\alpha) = \frac{1}{\alpha} = 0.3178 \text{ (0.31784)}$	M1 A1 B1 3	For dividing e_3 by e_2 For estimate of $F'(\alpha)$ For true $F'(\alpha)$ obtained from $\frac{d}{dx}(2 + \ln x)$ TMDP anywhere in (i) (ii) deduct 1 once (but answers must round to given values or A0)
(iii)	 <p style="text-align: right;">Staircase</p>	B1 B1 B1 3	For $y = x$ and $y = F(x)$ drawn, crossing as shown For lines drawn to illustrate iteration (Min 2 horizontal and 2 vertical seen) For stating “staircase”

4(i)	$x = r \cos \theta, y = r \sin \theta$ $\Rightarrow r = \frac{a \cos \theta \sin \theta}{\cos^3 \theta + \sin^3 \theta}$ <p>for $0 \leq \theta \leq \frac{1}{2}\pi$</p>	M1 A1 A1 3	For substituting for x and y For correct equation oe (Must be $r = \dots$) For correct limits for θ (Condone $<$)
(ii)	$f\left(\frac{1}{2}\pi - \theta\right) = \frac{a \cos\left(\frac{1}{2}\pi - \theta\right) \sin\left(\frac{1}{2}\pi - \theta\right)}{\cos^3\left(\frac{1}{2}\pi - \theta\right) + \sin^3\left(\frac{1}{2}\pi - \theta\right)}$ $= \frac{a \sin \theta \cos \theta}{\sin^3 \theta + \cos^3 \theta}$ $f(\theta) = f\left(\frac{1}{2}\pi - \theta\right) \Rightarrow \alpha = \frac{1}{4}\pi$	M1 A1 A1 3	N.B. answer given For replacing θ by $\left(\frac{1}{2}\pi - \theta\right)$ in their $f(\theta)$ For correct simplified form. (Must be convincing) For correct reason for $\alpha = \frac{1}{4}\pi$
(iii)	$r = \frac{a \cdot \frac{1}{\sqrt{2}} \cdot \frac{1}{\sqrt{2}}}{\left(\frac{1}{\sqrt{2}}\right)^3 + \left(\frac{1}{\sqrt{2}}\right)^3} = \frac{1}{2}\sqrt{2}a$	B1 1	For correct value of r . oe
(iv)		B1 B1 2	Closed curve in 1st quadrant only, symmetrical about $\theta = \frac{1}{4}\pi$ Diagram showing $\theta = 0, \frac{1}{2}\pi$ tangential at O

5(i)	$x = \sin y \Rightarrow \frac{dx}{dy} = \cos y$ $\Rightarrow \frac{dy}{dx} = \frac{1}{\sqrt{1-\sin^2 y}} = \frac{1}{\sqrt{1-x^2}}$ <p>$+\sqrt{\quad}$ taken since $\sin^{-1} x$ has positive gradient</p>	M1 A1 B1 3	For implicit diffn to $\frac{dy}{dx} = \pm \frac{1}{\cos y}$ oe For using $\sin^2 y + \cos^2 y = 1$ to obtain N.B. Answer given For justifying + sign
(ii)	$f(0) = 0, f'(0) = 1$ $f''(x) = \frac{x}{(1-x^2)^{\frac{3}{2}}}$ $f'''(x) = \frac{(1-x^2)^{\frac{3}{2}} + 3x^2(1-x^2)^{\frac{1}{2}}}{(1-x^2)^3}$ $\Rightarrow f''(0) = 0, f'''(0) = 1$ $\Rightarrow \sin^{-1} x = x + \frac{1}{6}x^3$	B1 M1 M1 A1 A1 5	For correct values Use of chain rule to differentiate $f'(x)$ Use of quotient or product rule to differentiate $f''(0)$. For correct values www, soi For correct series (allow 3!) www
	Alternative Method: $f(0) = 0, f'(0) = 1$ $f'(x) = \frac{1}{\sqrt{1-x^2}} = (1-x^2)^{-\frac{1}{2}} = 1 + \frac{1}{2}x^2 + \frac{3}{8}x^4 + \dots$ $f''(x) = x + \frac{3}{2}x^3 + \dots$ $f'''(x) = 1 + \frac{9}{2}x^2 + \dots$ $\Rightarrow f'(0) = 1, f''(0) = 0, f'''(0) = 1$ $\Rightarrow \sin^{-1} x = x + \frac{1}{6}x^3$	B1 M1 M1 A1 A1	For correct values Correct use of binomial Differentiate twice Correct values Correct series
(iii)	$(\sin^{-1} x) \ln(1+x)$ $= \left(x + \frac{1}{6}x^3\right) \left(x - \frac{1}{2}x^2 + \frac{1}{3}x^3\right)$ $= x^2 - \frac{1}{2}x^3 + \frac{1}{2}x^4$	B1ft M1 A1 A1 4	For terms in both series to at least x^3 f.t. from their (ii) multiplied together For multiplying terms to at least x^3 For correct series up to x^3 www For correct term in x^4 www

<p>6(i)</p>	$I_n = \int_0^1 x^n (1-x)^{\frac{3}{2}} dx$ $= \left[-\frac{2}{5} x^n (1-x)^{\frac{5}{2}} \right]_0^1 + \frac{2}{5} n \int_0^1 x^{n-1} (1-x)^{\frac{5}{2}} dx$ $\Rightarrow I_n = \frac{2}{5} n \int_0^1 x^{n-1} (1-x)^{\frac{5}{2}} dx$ $\Rightarrow I_n = \frac{2}{5} n \int_0^1 x^{n-1} (1-x)(1-x)^{\frac{3}{2}} dx$ $\Rightarrow I_n = \frac{2}{5} n I_{n-1} - \frac{2}{5} n I_n$ $\Rightarrow I_n = \frac{2n}{2n+5} I_{n-1}$	<p>M1</p> <p>A1</p> <p>A1</p> <p>M1</p> <p>A1</p> <p>A1</p> <p>A1</p> <p>A1</p> <p>6</p>	<p>For integrating by parts (correct way round)</p> <p>For correct first stage</p> <p>For splitting $(1-x)^{\frac{5}{2}}$ suitably</p> <p>For obtaining correct relation between I_n and I_{n-1}</p> <p>For correct result (N.B. answer given)</p>
<p>(ii)</p>	$I_0 = \left[-\frac{2}{5} (1-x)^{\frac{5}{2}} \right]_0^1 = \frac{2}{5}$ $I_3 = \frac{6}{11} I_2 = \frac{6}{11} \times \frac{4}{9} I_1 = \frac{6}{11} \times \frac{4}{9} \times \frac{2}{7} I_0$ $I_3 = \frac{32}{1155}$	<p>M1</p> <p>M1</p> <p>A1</p> <p>A1</p> <p>4</p>	<p>For evaluating I_0 [OR I_1 by parts]</p> <p>For using recurrence relation 3 [OR 2] times (may be combined together)</p> <p>For 3 [OR 2] correct fractions</p> <p>For correct exact result</p>

<p>7(i)</p>	 <p>$y = \tanh^{-1}x$</p> <p>$y = \tanh x$</p> <p>$y = \tanh^{-1}x$</p>	<p>B1</p> <p>B1</p> <p>B1</p> <p>B1</p> <p>4</p>	<p>Both curves of the correct shape (ignore overlaps) and labelled</p> <p>gradient = 1 at $x = 0$ stated</p> <p>For asymptotes $y = \pm 1$ and $x = \pm 1$ (or on sketch)</p> <p>Sketch all correct</p>
<p>(ii)</p>	$\int_0^k \tanh x \, dx = [\ln(\cosh x)]_0^k = \ln(\cosh k)$	<p>M1</p> <p>A1</p> <p>2</p>	<p>For substituting limits into $\ln \cosh x$</p> <p>For correct answer</p>
<p>(iii)</p>	 <p>Areas shown are equal: $x = \tanh k$ $\Rightarrow y = k$</p> $\Rightarrow \int_0^{\tanh k} \tanh^{-1} x \, dx$ <p>= rectangle $(k \times \tanh k)$ – (ii)</p> $= k \tanh k - \ln(\cosh k)$	<p>M1</p> <p>A1</p> <p>M1</p> <p>A1</p> <p>4</p>	<p>For consideration of areas</p> <p>For sufficient justification</p> <p>For subtraction from rectangle</p> <p>For correct answer N.B. answer given</p> <p>Alternative: Otherwise by parts, as $1 \times \tanh^{-1} x$ OR $1 \times \frac{1}{2} \ln \left(\frac{1+x}{1-x} \right)$</p>

PTO for alternative schemes

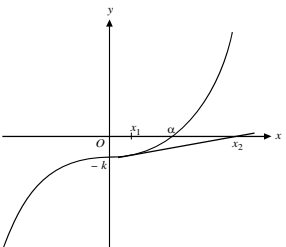
7(iii)	<p>Alternative method 1</p> <p>By parts:</p> $I = \int_0^{\tanh k} \tanh^{-1} x \, dx$ $u = \tanh^{-1} x \quad dv = dx$ $du = \frac{1}{1-x^2} dx \quad v = x$ $\Rightarrow I = \left[x \tanh^{-1} x \right]_0^{\tanh k} - \int_0^{\tanh k} \frac{x}{1-x^2} dx$ $= k \tanh k + \frac{1}{2} \left[\ln(1-x^2) \right]_0^{\tanh k}$ $= k \tanh k + \frac{1}{2} \ln(1 - \tanh^2 k)$ $= k \tanh k + \frac{1}{2} \ln(\operatorname{sech}^2 k)$ $= k \tanh k + \ln(\operatorname{sech} k)$	<p>M1</p> <p>A1</p> <p>M1</p> <p>A1</p>	<p>For integrating by parts (correct way round)</p> <p>For getting this far</p> <p>Dealing with the resulting integral</p>
	<p>Alternative method 2</p> <p>By substitution</p> <p>Let $y = \tanh^{-1} x \Rightarrow x = \tanh y$</p> $\Rightarrow dx = \operatorname{sech}^2 y \, dy$ <p>When $x = 0$, $y = 0$</p> <p>When $x = \tanh k$, $y = k$</p> $\Rightarrow I = \int_0^{\tanh k} \tanh^{-1} x \, dx = \int_0^k y \operatorname{sech}^2 y \, dy$ $u = y \quad dv = \operatorname{sech}^2 y \, dy$ $du = dy \quad v = \tanh y$ $\Rightarrow I = \left[y \tanh y \right]_0^k - \int_0^k \tanh y \, dy$ $= k \tanh k - \ln \cosh k$	<p>M1</p> <p>A1</p> <p>M1</p> <p>A1</p>	<p>For substitution to obtain equivalent integral</p> <p>Correct so far</p> <p>For integration by parts (correct way round)</p> <p>Final answer</p>

8(i)	$x = \cosh^2 u \Rightarrow du = 2 \cosh u \sinh u du$ $\int \sqrt{\frac{x}{x-1}} dx = \int \frac{\cosh u}{\sinh u} 2 \cosh u \sinh u du$ $= \int 2 \cosh^2 u du$ $= \int (\cosh 2u + 1) du = \sinh u \cosh u + u$ $= x^{\frac{1}{2}}(x-1)^{\frac{1}{2}} + \ln \left(x^{\frac{1}{2}} + (x-1)^{\frac{1}{2}} \right) (+c)$	B1 M1 A1 M1 A1 M1 A1 7	For correct result For substituting throughout for x For correct simplified u integral For attempt to integrate $\cosh^2 u$ For correct integration For substituting for u For correct result oe as $f(x) + \ln(g(x))$
(ii)	$2\sqrt{3} + \ln(2 + \sqrt{3})$	B1 1	
(iii)	$V = (\pi) \int_1^4 \frac{x}{x-1} dx = (\pi) [x + \ln(x-1)]_1^4$ $V \rightarrow \infty$	M1 A1 B1 3	For attempt to find $\int \frac{x}{x-1} dx$ For correct integration (ignore π) For statement that volume is infinite (independent of M mark)

Question	Answer	Marks	Guidance	
1	$f'(x) = \frac{-3\sin 3x}{\cos 3x} = -3\tan 3x \Rightarrow f'(0) = 0$ $f''(x) = -9\sec^2 3x \Rightarrow f''(0) = -9$ $\Rightarrow f(x) = -\frac{9}{2}x^2$	<p>M1</p> <p>A1</p> <p>M1</p> <p>A1</p>	<p>For differentiating $f(x)$ twice (y' as a function of a function)</p> <p>For correct $f'(0)$ and $f''(0)$ www (soi by correct expansion)</p> <p>For use of Maclaurin soi</p> <p>For correct series (condone $a = -\frac{9}{2}x^2$)</p>	<p>If $f'(0) = f''(0) = f(0) = 0$ then M0</p>
	<p>ALT:</p> $\ln(\cos 3x) = \ln\left(1 - \frac{1}{2}(3x)^2\right) = -\frac{9}{2}x^2$	<p>[4]</p>	<p>SC Use of standard cos and ln series can earn second M1</p> <p>A1</p>	
		<p>[4]</p>		
2	$= \int_{\frac{1}{2}}^{\frac{3}{2}} \frac{1}{(2x-1)^2 + 4} dx \text{ OR } \frac{1}{4} \int_{\frac{1}{2}}^{\frac{3}{2}} \frac{1}{\left(x - \frac{1}{2}\right)^2 + 1} dx$ $= \frac{1}{2} \left[\frac{1}{2} \tan^{-1} \frac{2x-1}{2} \right]_{\frac{1}{2}}^{\frac{3}{2}} \text{ OR } \frac{1}{4} \left[\tan^{-1} \left(x - \frac{1}{2}\right) \right]_{\frac{1}{2}}^{\frac{3}{2}}$ $= \frac{1}{4} \left(\tan^{-1} 1 - \tan^{-1} 0 \right) = \frac{1}{16} \pi$	<p>B1</p> <p>M1</p> <p>A1</p> <p>M1</p> <p>A1</p> <p>[5]</p>	<p>For correct denominator (in 2nd case must include $\frac{1}{4}$)</p> <p>For integration to $k \tan^{-1}(ax+b)$ or $k \ln\left(\frac{ax+b-c}{ax+b+c}\right)$</p> <p>FT for $ax+b$ from their denominator For correct integration</p> <p>For substituting limits in any \tan^{-1} expression</p> <p>For correct value</p>	

Question	Answer	Marks	Guidance
3	$\frac{2x^3 + x + 12}{(2x-1)(x^2+4)} \equiv A + \frac{B}{2x-1} + \frac{Cx+D}{x^2+4}$ $2x^3 + x + 12 \equiv$ $A(2x-1)(x^2+4) + B(x^2+4) + (Cx+D)(2x-1)$ $A = 1, B = 3$ $x^3: 2 = 2A \quad x^2: 0 = -A + B + 2C$ $x^1: 1 = 8A - C + 2D \quad x^0: 12 = -4A + 4B - D$ $C = -1, D = -4$ $\Rightarrow 1 + \frac{3}{2x-1} + \frac{-x-4}{x^2+4}$	<p>B1</p> <p>M1</p> <p>B1</p> <p>M1</p> <p>A1A1</p> <p>A1</p> <p>[7]</p>	<p>For correct form soi (A can be Px + Q, but not 0)</p> <p>For multiplying out from their form</p> <p>For either A or B correct (dep on 1st B1)</p> <p>For equating at least 2 coefficients (or substitute two values for x or one of each)</p> <p>For C, D correct</p> <p>For correct expression WWW</p> <p>SC4 $\Rightarrow \frac{3}{2x-1} + \frac{x^2-x}{x^2+4}$</p>
	<p>ALT: Divide out as not proper</p> $\Rightarrow 1 + \frac{x^2 - 7x + 16}{(2x-1)(x^2+4)}$ $= 1 + \frac{A}{2x-1} + \frac{Bx+C}{x^2+4}$ $x^2 - 7x + 16 \equiv A(x^2+4) + (Bx+C)(2x-1)$ $x^2: 1 = A + 2B \quad x: -7 = -B + 2C$ $1: 16 = 4A - C$ $\Rightarrow A = 3, B = -1, C = -4$ $\Rightarrow 1 + \frac{3}{2x-1} + \frac{-x-4}{x^2+4}$	<p>B1</p> <p>B1</p> <p>M1</p> <p>M1</p> <p>A1</p> <p>A1</p> <p>A1</p>	<p>Divide out</p> <p>Writing in this form including 1</p> <p>For multiplying out from their form</p> <p>For equating at least 2 coefficients (or substitute two values for x or one of each)</p> <p>B correct</p> <p>C correct</p> <p>For correct expression WWW</p>

Question		Answer	Marks	Guidance
4	(i)	Given expression is sum of areas of rectangles of width $\frac{1}{n}$, heights $e^{-1/x}$	B1	For identifying rectangle widths and heights
		Given integral is area under the curve which is clearly greater	B1 [2]	For correct explanation of lower bound
4	(ii)	Upper bound = $\frac{1}{n} \left(e^{-n} + e^{-\frac{n}{2}} + e^{-\frac{n}{3}} + \dots + e^{-\frac{n}{n-1}} + e^{-1} \right)$	M1 A1 [2]	For using n upper rectangles soi by e^{-n} and e^{-1} For correct expression
4	(iii)	Lower bound = 0.104(31) Upper bound = 0.196(28)	B1 B1 [2]	For correct value For correct value – accept 0.197
4	(iv)	$\frac{1}{n} e^{-1} < 0.001$	B1	For a correct statement (includes <)
		$\Rightarrow n > \frac{1000}{e} = 367.879$	M1	For rearranging (ignore < > = and allow RHS = $10^{\pm m} e^{\pm 1}$)
		\Rightarrow least $N = 368$	A1 [3]	For correct value
5	(i)	$x_{n+1} = x_n - \frac{x_n^3 - k}{3x_n^2}$ $\Rightarrow x_{n+1} = \frac{2x_n^3 + k}{3x_n^2}$	M1 A1 [2]	For correct $\frac{f(x)}{f'(x)}$ seen (x or x_n) For simplification to AG (x_n and x_{n+1} required)

Question		Answer	Marks	Guidance
5	(ii)		<p>B1</p> <p>M1</p> <p>A1</p> <p>[3]</p>	<p>For correct curve with α (or $\sqrt[3]{k}$) and $-k$ marked</p> <p>For a suitable tangent shown</p> <p>with x_1 and x_2 marked such that $\alpha - x_2 > \alpha - x_1$</p> <p>Curve looks like cubic with one pt of inflection (g not nec. 0) at y axis</p>
5	(iii)	$\alpha = \sqrt[3]{100}$ $x_2 = 4.66667$ $x_3 = 4.64172$	<p>B1</p> <p>B1</p> <p>B1</p> <p>[3]</p>	<p>For correct α (Condone $x = \dots$)</p> <p>For correct x_2 (to at least 5dp)</p> <p>For correct x_3 (to at least 5dp)</p>
5	(iv)	$e_1 = -0.35841, \quad e_2 = -0.02508, \quad e_3 = -0.00013$ $\frac{e_2^3}{e_1^2} = -0.00012$	<p>M1</p> <p>A1</p> <p>A1</p> <p>[3]</p>	<p>For calculating e_1, e_2, e_3 from α or something better than x_3</p> <p>All correct to 5 dp</p> <p>For obtaining -0.00012</p> <p>SC2 for consistently without $-ve$ signs</p>
6	(i)	$\cos y = x \Rightarrow -\sin y \frac{dy}{dx} = 1$ $\Rightarrow \frac{dy}{dx} = -\frac{1}{\sin y} = -\frac{1}{\sqrt{1-x^2}}$ <p>$-$ sign since $\frac{dy}{dx} < 0$ (e.g. by graph)</p>	<p>M1</p> <p>A1</p> <p>B1</p> <p>[3]</p>	<p>For differentiating $\cos y$ wrt x</p> <p>For using $\cos^2 y + \sin^2 y = 1$ to obtain AG</p> <p>For justification of $+\sqrt{\quad}$ taken</p> <p>SC1 if in fractions $\frac{14}{3}$ and $\frac{2047}{441}$</p>

Question	Answer	Marks	Guidance
6 (ii)	$\frac{dy}{dx} = -\frac{-2x}{\sqrt{1-(1-x^2)^2}}$ $= \frac{2x}{\sqrt{2x^2-x^4}} = \frac{2}{\sqrt{2-x^2}}$ $\frac{d^2y}{dx^2} = 2 \cdot -\frac{1}{2} \cdot -2x(2-x^2)^{-\frac{3}{2}} = \frac{2x}{(2-x^2)^{\frac{3}{2}}}$ $\Rightarrow (2-x^2) \frac{d^2y}{dx^2} = \frac{2x}{\sqrt{2-x^2}} = x \frac{dy}{dx}$	M1 A1 A1 M1 A1 [5]	For differentiating $\cos^{-1}(1-x^2)$ (as a function of a function) For correct $\frac{dy}{dx}$ (unsimplified) For correct $\frac{dy}{dx}$ (simplified) For differentiating $\frac{dy}{dx}$ using chain rule correctly (or product or quotient if y' is wrong) For verification of AG
7 (i)	$x = \sinh y = \frac{e^y - e^{-y}}{2}$ $\Rightarrow e^{2y} - 2xe^y - 1 = 0 \Rightarrow e^y = x \pm \sqrt{x^2 + 1}$ <p>reject - sign as $e^y > 0 \Rightarrow y = \ln(x + \sqrt{x^2 + 1})$</p>	M1 A1 A1 [3]	For correct expression for $\sinh y$ and attempt to obtain quadratic For correct solution(s) for e^y For justification of + sign to AG
	<p>Alt:</p> $\sinh y + \cosh y = e^y$ $\sinh y = x \Rightarrow \cosh y = \pm \sqrt{x^2 + 1}$ <p>reject -ve sign as $e^y > 0$</p> $\Rightarrow e^y = x + \sqrt{x^2 + 1} \Rightarrow y = \ln(x + \sqrt{x^2 + 1})$		

Question	Answer	Marks	Guidance	
7 (ii)	$\ln(x + \sqrt{x^2 + 1}) - \ln(x + \sqrt{x^2 - 1}) = \ln 2$ $\Rightarrow \frac{x + \sqrt{x^2 + 1}}{x + \sqrt{x^2 - 1}} = 2$ $\Rightarrow \sqrt{x^2 + 1} - 2\sqrt{x^2 - 1} = x$ $\Rightarrow 4x^2 - 3 = 4\sqrt{x^4 - 1}$ $\Rightarrow 24x^2 = 25 \Rightarrow x = \frac{5}{\sqrt{24}} \left(= \frac{5}{12}\sqrt{6} \right)$	M1 A1 M1 A1 A1 [5]	For stating both ln expressions and attempting to exponentiate For correct equation AG For attempting to square once For a correct equation with $\sqrt{\quad}$ as subject For correct x and no others isw	Removing lns is not an attempt to exponentiate
8 (i)	$2\cos^2 \alpha = 2\sin 2\alpha = 4\sin \alpha \cos \alpha$ $\Rightarrow \tan \alpha = \frac{1}{2}$	M1 A1 [2]	For equation in $\cos \alpha$ and $\sin \alpha$ (only - ie dealing with $\sin 2\alpha$ leading to AG (θ may be used instead of α) SR Allow verification only if exact	
8 (ii)	$\text{Area} = \frac{1}{2} \int_0^\alpha r_2^2 d\theta + \frac{1}{2} \int_\alpha^{\frac{1}{2}\pi} r_1^2 d\theta$ $= \frac{1}{2} \int_0^\alpha 2\sin 2\theta d\theta + \frac{1}{2} \int_\alpha^{\frac{1}{2}\pi} (1 + \cos 2\theta) d\theta$ $= \left[-\frac{1}{2} \cos 2\theta \right]_0^\alpha + \left[\frac{1}{2} \theta + \frac{1}{4} \sin 2\theta \right]_\alpha^{\frac{1}{2}\pi}$ $= \left(-\frac{1}{2} \cos 2\alpha + \frac{1}{2} \right) + \left(\frac{1}{4} \pi - \frac{1}{2} \alpha - \frac{1}{4} \sin 2\alpha \right)$ $= \left(-\frac{1}{2} (1 - 2\sin^2 \alpha) + \frac{1}{2} \right) + \left(\frac{1}{4} \pi - \frac{1}{2} \alpha - \frac{1}{2} \sin \alpha \cos \alpha \right)$ $= \frac{1}{5} + \frac{1}{4} \pi - \frac{1}{2} \alpha - \frac{1}{2} \cdot \frac{1}{\sqrt{5}} \cdot \frac{2}{\sqrt{5}}$ $= \frac{1}{4} \pi - \frac{1}{2} \alpha$	M1 M1 M1 A1 A1 M1 A1 [7]	For both integrals added with limits so i Allow θ for α , and reversal of r^2 terms For using $2\cos^2 \theta = 1 + \cos 2\theta$ in 2nd integral For $k \cos 2\theta$ as first integrated term For correct first area For correct second area For using Pythagoras to find $\sin \alpha$ or $\cos \alpha$ OR t formula for $\cos 2\alpha$ or $\sin 2\alpha$ For simplification to AG	

Question		Answer	Marks	Guidance
9	(i)	$\tanh(\ln n) = \frac{e^{\ln n} - e^{-\ln n}}{e^{\ln n} + e^{-\ln n}}$ $= \frac{n - \frac{1}{n}}{n + \frac{1}{n}} = \frac{n^2 - 1}{n^2 + 1}$	<p>M1</p> <p>A1</p> <p>[2]</p>	<p>For definition of $\tanh(\ln n)$ seen</p> <p>Or working with $\tanh(\ln n) = x$, definition of $\tanh^{-1}x$ seen</p> <p>For simplification to AG</p> <p>SC1 $\tanh(\ln n) = \frac{e^{\ln n} - e^{-\ln n}}{e^{\ln n} + e^{-\ln n}} = \frac{e^{2\ln n} - 1}{e^{2\ln n} + 1} = \frac{n^2 - 1}{n^2 + 1}$</p>
9	(ii)	$I_n - I_{n-2} = \int_0^{\ln 2} (\tanh^n u - \tanh^{n-2} u) du$ $= \int_0^{\ln 2} \tanh^{n-2} u (\tanh^2 u - 1) du = -\int_0^{\ln 2} \tanh^{n-2} u \operatorname{sech}^2 u du$ $\Rightarrow I_n - I_{n-2} = -\left[\frac{1}{n-1} \tanh^{n-1} u \right]_0^{\ln 2}$ $\Rightarrow I_n - I_{n-2} = -\frac{1}{n-1} \left(\frac{3}{5}\right)^{n-1}$	<p>M1</p> <p>A1</p> <p>A1</p> <p>[3]</p>	<p>For factorising and replacing $(\tanh^2 u - 1)$ by $\pm \operatorname{sech}^2 u$ (or similarly considering I_n)</p> <p>For correct integrated term</p> <p>For simplification to AG</p>
9	(iii)	$I_1 = \int_0^{\ln 2} \tanh u du = [\ln \cosh u]_0^{\ln 2}$ $= \ln(\cosh(\ln 2)) = \ln \frac{e^{\ln 2} + e^{-\ln 2}}{2} = \ln \frac{5}{4}$ $I_3 = I_1 - \frac{1}{2} \left(\frac{3}{5}\right)^2 = -\frac{9}{50} + \ln \frac{5}{4}$	<p>M1</p> <p>M1</p> <p>A1</p> <p>B1ft</p> <p>[4]</p>	<p>For integration to $k \ln \frac{\cosh u}{\sinh u}$</p> <p>For simplifying $\frac{\cosh}{\sinh}(\ln 2)$</p> <p>For correct value of I_1</p> <p>For correct I_3. FT from I_1</p> <p>SC $I_3 = -\frac{9}{50} + \ln(\cosh(\ln 2))$ M1 B1ft</p>
9	(iv)	$(I_n - I_{n-2}) + (I_{n-2} - I_{n-4}) + \dots + (I_3 - I_1)$ $= I_n - I_1 = -\left(\frac{1}{n-1} \left(\frac{3}{5}\right)^{n-1} + \frac{1}{n-3} \left(\frac{3}{5}\right)^{n-3} + \dots + \frac{1}{2} \left(\frac{3}{5}\right)^2 \right)$ $\Rightarrow \frac{1}{2} \left(\frac{3}{5}\right)^2 + \frac{1}{4} \left(\frac{3}{5}\right)^4 + \frac{1}{6} \left(\frac{3}{5}\right)^6 + \dots = I_1 = \ln \frac{5}{4}$	<p>M1</p> <p>A1ft</p> <p>[2]</p>	<p>For attempting to sum equations of the form of (ii) and cancelling soi</p> <p>For correct answer ft from I_1</p>

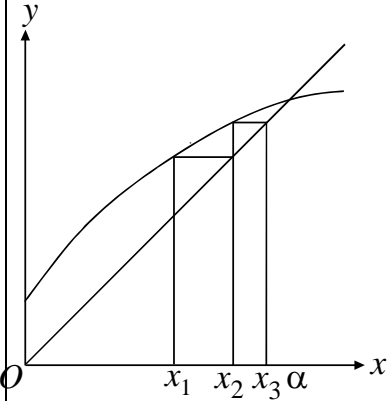
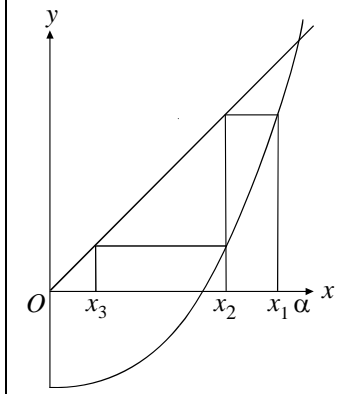
Alternative to Q9(ii)

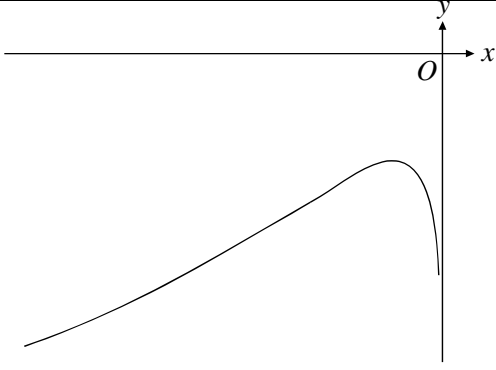
Question	Answer	Marks	Guidance
9 (ii)	$I_n = \int_0^{\ln 2} \tanh^n u \, du = \int_0^{\ln 2} \tanh^{n-2} u \cdot \tanh^2 u \, du$ $= \int_0^{\ln 2} \tanh^{n-2} u \cdot (1 - \operatorname{sech}^2 u) \, du$ $= \int_0^{\ln 2} \tanh^{n-2} u \, du - \int_0^{\ln 2} \tanh^{n-2} u \operatorname{sech}^2 u \, du$ $\Rightarrow I_n = I_{n-2} - \left[\frac{\tanh^{n-1} u}{n-1} \right]_0^{\ln 2}$ $\Rightarrow I_n - I_{n-2} = -\frac{\tanh^{n-1}(\ln 2)}{n-1}$ $= -\frac{1}{n-1} \left(\frac{2^2-1}{2^2+1} \right)^{n-1} = -\frac{1}{n-1} \left(\frac{3}{5} \right)^{n-1}$	<p>M1</p> <p>A1</p> <p>A1</p> <p>[3]</p>	<p>For attempt to integrate by parts.</p> <p>For correct integrated term</p> <p>For simplification to AG</p>

Question	Answer	Marks	Guidance
1	$\operatorname{sech} 2x = \frac{2}{e^{2x} + e^{-2x}}$ $u = e^{2x} \Rightarrow du = 2e^{2x} dx$ <p style="text-align: center;">or $x = \frac{1}{2} \ln u \Rightarrow dx = \frac{1}{2u} du$</p> $\Rightarrow I = \int \operatorname{sech} 2x dx = \int \frac{2}{e^{2x} + e^{-2x}} dx$ $= \int \frac{2}{(e^{2x} + e^{-2x})} \cdot \frac{du}{2e^{2x}}$ $= \int \frac{1}{u^2 + 1} du$ $= \tan^{-1} u (+c) = \tan^{-1}(e^{2x}) + c$	<p>B1</p> <p>M1</p> <p>A1</p> <p>M1</p> <p>A1</p> <p>[5]</p>	<p>For sech2x expression oe</p> <p>For differentiating substitution correctly and substituting into <i>their</i> integral</p> <p>For correct integral</p> <p>For integration to $\tan^{-1}()$</p> <p>For correct expression (<i>c</i> required)</p>

Question		Answer	Marks	Guidance
2	(i)	$r = 0 \Rightarrow \cos \theta = 0, \sin 2\theta = 0$ $\Rightarrow \theta = 0, \frac{1}{2}\pi$	M1 A1 [2]	For $r = 0$ (soi) and attempt to solve for θ For both values and no others (ignore values outside range)
2	(ii)	$\frac{dr}{d\theta} = -\sin \theta \sin 2\theta + 2 \cos 2\theta \cos \theta$ $= 0$ <i>Alternatively:</i> $r = 2 \cos^2 \theta \sin \theta \Rightarrow \frac{dr}{d\theta} = 2 \cos^3 \theta - 4 \cos \theta \sin^2 \theta$ $\Rightarrow 2 \sin^2 \theta \cos \theta = 2(1 - 2 \sin^2 \theta) \cos \theta$ $\Rightarrow \sin \theta = \frac{1}{\sqrt{3}} \left(\cos \theta = \frac{\sqrt{2}}{\sqrt{3}}, \tan \theta = \frac{1}{\sqrt{2}} \right)$ $\Rightarrow r = \frac{4}{3\sqrt{3}} = \frac{4}{9}\sqrt{3}$	M1 A1 A1 A1 [4]	For attempt to find $\frac{dr}{d\theta}$ using product rule For correct $\frac{dr}{d\theta}$ set = 0 soi For correct value of $\sin \theta$ (OR $\cos \theta$ <i>OR</i> $\tan \theta$) or decimal equivalent; $\sin \theta = 0.546$ or $\cos \theta = 0.816$ or $\tan \theta = 0.707$ For correct r or anything that rounds to 0.77
2	(iii)	$x = r \cos \theta, y = r \sin \theta$ $\Rightarrow r = \frac{x}{r} \cdot 2 \frac{y}{r} \frac{x}{r}$ $\Rightarrow (x^2 + y^2)^2 = 2x^2y$	M1 M1 A1 [3]	For substituting $x = r \cos \theta$ OR $y = r \sin \theta$ For $r^2 = x^2 + y^2$ soi For a correct cartesian equation Any equivalent form without fractions

Question		Answer	Marks	Guidance	
3	(i)	$\tanh 2x \equiv \frac{\sinh 2x}{\cosh 2x} \equiv \frac{2 \sinh x \cosh x}{\cosh^2 x + \sinh^2 x}$ $\equiv \frac{2 \tanh x}{1 + \tanh^2 x}$	M1 A1 [2]	For $\frac{\sinh 2x}{\cosh 2x}$ and use double angle formulae For division by $\cosh^2 x$ seen	N.B. $\text{Tanh}(A + B)$ not in formula book
3	(ii)	$\frac{10t}{(t^2 + 1)} = (1 + 6t)$ $\Rightarrow 6t^3 + t^2 - 4t + 1 = 0$ $\Rightarrow (t+1)(3t-1)(2t-1) = 0$ $\Rightarrow t = (-1), \frac{1}{3}, \frac{1}{2}$ $x = \frac{1}{2} \ln \frac{1+t}{1-t} \Rightarrow x = \frac{1}{2} \ln 2, \frac{1}{2} \ln 3$	M1 A1 M1 A1 M1 A1 [6]	For using (i) to obtain equation in t . Correct cubic equation Attempt to solve cubic (calculator OK) Solution. Ignore any extra values at this stage For using ln form for \tanh^{-1} Correct 2 values (only) oe	
		Alternative: $e^{4x} - 5e^{2x} + 6 = 0$ $\Rightarrow (e^{2x} - 2)(e^{2x} - 3) = 0$ $\Rightarrow e^{2x} = 2, 3$ $\Rightarrow 2x = \ln 2, \ln 3$ $\Rightarrow x = \frac{1}{2} \ln 2, \frac{1}{2} \ln 3$	M1 A1 M1 A1 M1 A1	Use exponentials to obtain a quadratic in e^{2x} Correct Solve quadratic Soln Take logs	

Question	Answer	Marks	Guidance
4 (i)	 <p style="margin-left: 150px;"> $x_2 = 1.3869\dots$ $x_3 = 1.3938$ </p>	B1 B1 B1 [3]	For correct value (4 d.p. or better) For correct value. For sketch showing staircase towards α . (Vertical lines do not need to be labelled)
4 (ii)		B1 B1 [2]	For sketch like $y = \frac{1}{2}(x^4 - 1)$ and $y = x$ (curve or continuation of curve cuts - y axis.) For sketch showing staircase away from α . ("Away" means labelling or arrows required.) Labelling means x_1, x_2, \dots in right place or numeric values.
4 (iii)	$x_{n+1} = x_n - \frac{x_n^4 - 2x_n - 1}{4x_n^3 - 2}$ $1.35 \rightarrow 1.398268$ $\rightarrow 1.395348 \rightarrow 1.395337$ $\Rightarrow 1.3953$	M1 A1 A1 A1 [4]	For deriving the iterative formula For correct formula For 1st value For correct 4dp α with 2 iterates equal to 4 dp. (i.e. last two iterates agree to 4dp) www

Question	Answer	Marks	Guidance
5 (i)	$f'(x) = \frac{1}{\sqrt{1+x^2}} + \frac{1}{\sqrt{1+\frac{1}{x^2}}} \cdot \frac{-1}{x^2}$ $= \frac{1}{\sqrt{1+x^2}} \left(1 - \frac{1}{x}\right)$ $= 0 \Rightarrow x = 1$ $f(1) = 2 \sinh^{-1} 1 = 2 \ln(1 + \sqrt{2})$	M1 B1 M1 A1 A1 [5]	For attempt to differentiate using chain rule. First term correct For attempt to solve their $f'(x) = 0$ For correct value of x (ignore $x = -1$) www For correct value obtained www AG
5 (ii)	 $\{f(x) \geq 2 \ln(1 + \sqrt{2}), f(x) \leq -2 \ln(1 + \sqrt{2})\}$	B1 B1 B1 [3]	For correct shape in 3rd quadrant only (condone inclusion of the 1st quadrant part given) For one part of range For other part of range SC B1 Both ranges correct but $<$ and $>$ used

Question	Answer	Marks	Guidance
6 (i)	$I_n = \left[-x^n \cos x \right]_0^\pi + n \int_0^\pi x^{n-1} \cos x \, dx$ $= \pi^n + n \left\{ \left[x^{n-1} \sin x \right]_0^\pi - (n-1) \int_0^\pi x^{n-2} \sin x \, dx \right\}$ $\Rightarrow I_n = \pi^n - n(n-1)I_{n-2}$	M1 A1 M1 A1 A1 [5]	For attempt to integrate by parts For correct result before limits For attempt at second integration by parts For correct result before limits For correct result www AG
6 (ii)	$I_1 = \left[-x \cos x \right]_0^\pi + \int_0^\pi \cos x \, dx$ $\Rightarrow I_1 = \pi + \left[\sin x \right]_0^\pi = \pi$ $I_3 = \pi^3 - 6I_1, \quad I_5 = \pi^5 - 20I_3$ $\Rightarrow I_5 = \pi^5 - 20\pi^3 + 120\pi$	M1 A1 M1 A1 [4]	For integrating by parts for I_1 For correct I_1 SC B1 $I_1 = \pi$ with no working For substituting $n = 3$ or 5 in reduction formula For correct result

Question		Answer	Marks	Guidance
7	(i)	$a = 2, b = n$ $c = 1, d = n - 1$	B1 B1 B1 [3]	for any 2 correct for the third correct for all four correct. Allow values inserted in series. SC treat $a = \frac{1}{2}$ etc as MR -1 once
7	(ii)	$\int_1^n \frac{1}{x} dx = \ln n$ $1 + \frac{1}{2} + \dots + \frac{1}{n} < 1 + \ln n$ $\Rightarrow f(n) < 1 \text{ (upper bound)}$ $\Rightarrow f(n) > \frac{1}{n} \text{ (lower bound)}$	B1 M1 A1 A1 [4]	For integral evaluated soi (Definite integral between 1 and n) For adding 1 <i>OR</i> $\frac{1}{n}$ to series For correct upper bound For correct lower bound
7	(iii)	$f(n+1) - f(n) = \frac{1}{n+1} - \ln(n+1) + \ln n$ $= \frac{1}{n+1} - \ln\left(\frac{n+1}{n}\right) \approx \frac{1}{n+1} - \left(\frac{1}{n} - \frac{1}{2n^2}\right)$ $\approx \frac{1}{n+1} - \frac{2n-1}{2n^2}$ $\approx -\frac{n-1}{2n^2(n+1)}$	B1 M1 M1 A1 A1 [5]	For correct expression For combining ln terms For attempt to expand $\ln\left(1 + \frac{1}{n}\right)$ Correct expansion of $\ln\left(1 + \frac{1}{n}\right)$ For correct expression AG

Any expansion of $\ln(1+n)$ oe is 0

Alternative answer to 7(iii)

Question		Answer	Marks	Guidance	
7	(iii)	$f(n+1) - f(n) = \frac{1}{n+1} - \ln(n+1) + \ln n$ $= \frac{1}{n+1} - \ln\left(\frac{n+1}{n}\right)$ $= \frac{1}{n+1} + \ln\left(\frac{n}{n+1}\right)$ $= \frac{1}{n+1} + \ln\left(1 - \frac{1}{n+1}\right)$ $= \frac{1}{n+1} + \left(-\frac{1}{n+1} - \frac{1}{2(n+1)^2}\right)$ $= -\frac{1}{2(n+1)^2}$	<p>B1</p> <p>M1</p> <p>M1</p> <p>A1</p>	<p>For correct expression</p> <p>For combining ln terms and attempt to expand</p> <p>For attempt to expand $\ln\left(1 - \frac{1}{n+1}\right)$</p> <p>Correct expansion of $\ln\left(1 - \frac{1}{n+1}\right)$</p> <p>Max 4</p>	

Question	Answer	Marks	Guidance
8 (i)	$q(x) = x + 2$ $y = \frac{A}{x+2} + \frac{1}{2}x + 1$ $\left(-1, \frac{17}{2}\right) \Rightarrow A = 8$ $y = \frac{\frac{1}{2}x^2 + 2x + 10}{x+2} \Rightarrow p(x) = \frac{1}{2}x^2 + 2x + 10$	B1 M1 A1 A1 [4]	For correct $q(x)$ soi oe For expressing y in this form. Allow $cx+d$ for A For correct A For correct $p(x)$ Allow equal multiples of $p(x)$ and $q(x)$
	Alternative: $q(x) = x + 2$ B1 $y = \frac{ax^2 + bx + c}{q(x)} = ax + (b - 2a) + \frac{c - 2b + 4a}{x + 2}$ M1 $y = \frac{1}{2}x + 1 \Rightarrow a = \frac{1}{2}, b = 2$ A1 $\left(-1, \frac{17}{2}\right) \Rightarrow c - 2b + 4a = 8 \Rightarrow c = 10$ A1	B1 M1 A1 A1 [4]	For correct $q(x)$ soi oe For division by <i>their</i> $q(x)$ For correct a and b oe For correct c oe 1 st line of division and 1 st term in quotient should be seen for correct method
8 (ii)	$\frac{1}{2}x^2 + (2 - y)x + 10 - 2y = 0$ $b^2 - 4ac \geq 0 \Rightarrow (2 - y)^2 \geq 2(10 - 2y)$ $\Rightarrow y^2 \geq 16 \Rightarrow \{y \leq -4, y \geq 4\}$ <p><i>(pto for alternative)</i></p>	M1 M1 A1 A1 [4]	For attempt to rearrange as quadratic in x For use of $b^2 - 4ac$ (\leq or \geq or $=$ or $<$ or $>$) For critical values ± 4 For correct range. (Must be \leq and \geq) www
8 (iii)	$\left(\frac{1}{2}x + 1\right)^2 = \frac{\frac{1}{2}x^2 + 2x + 10}{x + 2}$ OR $y^2 = \frac{4}{y} + y$ $\Rightarrow x^3 + 4x^2 + 4x - 32 = 0$ OR $y^3 - y^2 - 4 = 0$ $\Rightarrow (2, 2)$	B1ft M1 A1 A1 [4]	For a correct equation derived from intersection of C_2 with $y = \frac{1}{2}x + 1$ FT from (i) For obtaining a cubic Correct cubic Coordinates correct www

Alternative to 8(ii)

Question	Answer	Marks	Guidance
8 (ii)	$y = \frac{\frac{1}{2}x^2 + 2x + 10}{x + 2}$ $\Rightarrow \frac{dy}{dx} = \frac{(x+2)(x+2) - \left(\frac{1}{2}x^2 + 2x + 10\right)}{(x+2)^2}$ $= 0 \text{ when } (x+2)(x+2) = \left(\frac{1}{2}x^2 + 2x + 10\right)$ $\Rightarrow \frac{1}{2}x^2 + 2x - 6 = 0 \Rightarrow x^2 + 4x - 12 = 0$ $\Rightarrow (x+6)(x-2) = 0$ $\Rightarrow x = 2, y = 4 \qquad x = -6, y = -4$ $\{y \leq -4, y \geq 4\}$	M1 M1 A1 A1	Diffn using quotient rule Attempt to find soln using $\frac{dy}{dx} = 0$ For correct range. (Must be \leq and \geq) www
	<p>Alternatively:</p> $y = \frac{1}{2}x + 1 + \frac{8}{x+2}$ $\Rightarrow \frac{dy}{dx} = \frac{1}{2} - \frac{8}{(x+2)^2}$ $= 0 \text{ when } \frac{1}{2} - \frac{8}{(x+2)^2} \Rightarrow (x+2)^2 = 16$ $\Rightarrow x+2 = \pm 4 \Rightarrow x = 2 \text{ or } -6$ $\Rightarrow y = 4 \text{ or } -4$ $\{y \leq -4, y \geq 4\}$	M1 M1 A1 A1	Diffn using chain rule Attempt to find soln using $\frac{dy}{dx} = 0$ For correct range. (Must be \leq and \geq) www

Question	Answer	Marks	Guidance
1	$\frac{A}{x-1} + \frac{Bx+C}{x^2+4}$ $\Rightarrow 5x \equiv A(x^2+4) + (Bx+C)(x-1) \quad [+D(x-1)(x^2+4)]$ <p>Equate coefficients or substitute values for x</p> $\Rightarrow A = 1$ $B = -1$ $C = 4$ $\Rightarrow \frac{5x}{(x-1)(x^2+4)} = \frac{1}{x-1} + \frac{4-x}{x^2+4}$	<p>B1</p> <p>M1</p> <p>A1</p> <p>A1</p> <p>A1</p> <p>[5]</p>	<p>Sight of expression</p> <p>For Equating 3 coeffs or sub 3 times</p> <p>For one value (not D)</p> <p>For 2nd and 3rd values (not D)</p> <p>For final answer expressed properly</p> <p>Allow addition of constant</p>


Question		Answer	Marks	Guidance
2	(i)	$x = 1$ $y = \frac{x^2 - 3}{x - 1} = \frac{(x-1)(x+1) - 2}{x-1} = x + 1 \left[-\frac{2}{x-1} \right]$ $\Rightarrow y = x + 1$	B1 M1 A1 [3]	Or long division with quotient $x + \dots$ Must be stated
2	(ii)	$(0, 3)$ $(\sqrt{3}, 0)$ and $(-\sqrt{3}, 0)$	B1 [1]	All three Allow when $x = 0, y = 3$, etc but do NOT allow $y = 3$, etc
2	(iii)	$\frac{dy}{dx} = \frac{2x(x-1) - (x^2 - 3)}{(x-1)^2} = \frac{x^2 - 2x + 3}{(x-1)^2}$ $= \frac{(x-1)^2 + 2}{(x-1)^2} > 0$ for all x . So no turning points.	M1 A1 A1 [3]	Alternative method: Diffn final expression from (i) $\frac{dy}{dx} = 1 + \frac{2}{(x-1)^2}$ > 1 so no turning points. Or " $b^2 - 4ac$ " = $-8 < 0$ so no roots.
2	(iv)		B1 B1 B1 [3]	Correct shape going through axes at correct points which must be stated. Correct asymptotes included Approaches correct asymptotes correctly Allow omission of $(0, 3)$ if not in (ii). Oblique asymptote can be $y = x + c$ with $c \neq 1$

Question	Answer	Marks	Guidance
3	$3\frac{e^x + e^{-x}}{2} - 4\frac{e^x - e^{-x}}{2} = 7$ $\Rightarrow 3(e^x + e^{-x}) - 4(e^x - e^{-x}) = 14$ $\Rightarrow -e^x + 7e^{-x} = 14$ $\Rightarrow e^{2x} + 14e^x - 7 = 0$ $\Rightarrow e^x = \frac{-14 \pm \sqrt{196 + 28}}{2}$ $[e^x > 0] \text{ so } e^x = \frac{-14 + \sqrt{196 + 28}}{2}$ $= -7 + \sqrt{56}$ $\Rightarrow x = \ln(2\sqrt{14} - 7)$	M1 A1 A1 M1 A1 A1 [6]	Use of formulae Correct equation Correct quadratic equation in e^x Solve quadratic Correct value for e^x (ignore -ve value) One value only with statement of rejection of invalid value for e^x
	Alternative Make sinh or cosh the subject, square, use $c^2 - s^2 = 1$ Gives $7s^2 + 56s + 40 = 0$ Or $7c^2 + 42c - 65 = 0$	M1 A1 A1	

Question	Answer	Marks	Guidance
4 (i)	$I_n = \int_0^1 x^n \cdot e^{2x} dx.$ <p>Set $u = x^n \quad du = nx^{n-1} dx$</p> $dv = e^{2x} dx \quad v = \frac{1}{2}e^{2x}$ $\Rightarrow I_n = \int_0^1 x^n e^{2x} dx = \left[\frac{1}{2} x^n e^{2x} \right]_0^1 - \frac{1}{2} n \int_0^1 x^{n-1} e^{2x} dx$ $I_n = \frac{1}{2} e^2 - \frac{1}{2} n I_{n-1}$	<p>M1</p> <p>A1</p> <p>A1</p> <p>A1</p> <p>[4]</p>	<p>Integration by parts</p> <p>Correct way round and correct diffn</p> <p>Indefinite form acceptable</p> <p>Using limits</p>
4 (ii)	$I_0 = \int_0^1 e^{2x} dx = \frac{1}{2} [e^{2x}]_0^1 = \frac{1}{2}(e^2 - 1)$ $I_1 = \frac{1}{2} e^2 - \frac{1}{2} I_0 = \frac{1}{2} e^2 - \frac{1}{2} \left(\frac{1}{2} (e^2 - 1) \right) = \frac{1}{4} e^2 + \frac{1}{4}$ $I_2 = \frac{1}{2} e^2 - I_1 = \frac{1}{2} e^2 - \left(\frac{1}{4} e^2 + \frac{1}{4} \right) = \frac{1}{4} e^2 - \frac{1}{4}$ $I_3 = \frac{1}{2} e^2 - \frac{3}{2} I_2 = \frac{1}{2} e^2 - \frac{3}{2} \left(\frac{1}{4} e^2 - \frac{1}{4} \right) = \frac{1}{8} e^2 + \frac{3}{8}$	<p>M1</p> <p>A1</p> <p>M1</p> <p>A1</p> <p>[4]</p>	<p>Attempt to find I_0 or I_1.</p> <p>Using this to progress, dep</p>

Question		Answer	Marks	Guidance
5	(i)	$f'(x) = -\sin x.e^{-x} + \cos x.e^{-x}$ $\Rightarrow f'(0) = 1$ $f(0) = 0$	M1 A1 A1 [3]	Diffn using product correctly. For both values www
5	(ii)	$f'(x) = \cos x.e^{-x} - \sin x.e^{-x} = \cos x.e^{-x} - f(x)$ $f''(x) = -f'(x) - \cos x.e^{-x} - f(x)$ $= -f'(x) - f'(x) - f(x) - f(x)$ $f''(x) = -2f'(x) - 2f(x)$ OR $-2\cos x.e^{-x}$ Showing the two equal $f''(0) = -2$	M1 A1 A1 A1 [4]	Diffn
5	(iii)	$f''(x) = -2f'(x) - 2f(x)$ $\Rightarrow f'''(x) = -2f''(x) - 2f'(x)$ oe $\Rightarrow f'''(0) = 4 - 2 = 2$	B1 B1 [2]	Not involving trig or exp fns $= -f'' + 2f$ Or $2f'' + 4f$
5	(iv)	$f(x) = x - x^2 + \frac{x^3}{3}$	M1 A1 [2]	
		Alternative: Write down correct series expansion for e^{-x} and $\sin x$ and multiply	M1 A1	

Question	Answer	Marks	Guidance
6	$x^2 + 4x + 8 = (x + 2)^2 + 4$ $\int_0^1 \frac{1}{\sqrt{x^2 + 4x + 8}} dx = \int_0^1 \frac{1}{\sqrt{(x+2)^2 + 4}} dx$ $= \left[\sinh^{-1} \frac{x+2}{2} \right]_0^1 = \sinh^{-1} \left(\frac{3}{2} \right) - \sinh^{-1} 1$ $= \ln \left(\frac{3}{2} + \sqrt{1 + \frac{9}{4}} \right) - \ln(1 + \sqrt{2}) = \ln \left(\frac{3}{2} + \sqrt{\frac{13}{4}} \right) - \ln(1 + \sqrt{2})$ $= \ln \left(\frac{3 + \sqrt{13}}{2 + 2\sqrt{2}} \right)$	M1 A1 M1 A1 M1 A1 [6]	Complete the square in order to use standard form Use correct standard form in integration Answer in \sinh^{-1} form Attempt to turn into log form www isw
	Alternative for last 4 marks $\int_0^1 \frac{1}{\sqrt{(x+2)^2 + 4}} dx = \left[\ln \left((x+2) + \sqrt{(x+2)^2 + 4} \right) \right]_0^1$ $= \ln(3 + \sqrt{13}) - \ln(2 + \sqrt{8}) = \ln \left(\frac{3 + \sqrt{13}}{2 + 2\sqrt{2}} \right)$	M1 A1 M1 A1	Attempt to use Standard form Limits www isw
	Alternative for last 4 marks $x + 2 = 2 \tan \theta \Rightarrow I = \left[\ln(\sec \theta + \tan \theta) \right]_{\pi/4}^{\tan^{-1} 3/2}$ $= \ln \left(\frac{3}{2} + \frac{\sqrt{13}}{2} \right) - \ln(1 + \sqrt{2}) = \ln \left(\frac{3 + \sqrt{13}}{2 + 2\sqrt{2}} \right)$	M1 A1 M1 A1	Substitution Indefinite integral Deal with limits www isw

Question		Answer	Marks	Guidance
7	(i)	 <p>P is at $r = 5, \theta = \frac{\pi}{4}$</p>	B1 B1 B1 B1 [4]	Enclosed loop with axes tangential $\theta = \frac{\pi}{4}$ is a line of symmetry drawn and named For both
7	(ii)	$\text{Area} = \frac{1}{2} \int_0^{\pi/2} r^2 d\theta = \frac{1}{2} \int_0^{\pi/2} 25\sin^2 2\theta d\theta$ $= \frac{25}{4} \int_0^{\pi/2} (1 - \cos 4\theta) d\theta = \frac{25}{4} \left[\theta - \frac{1}{4} \sin 4\theta \right]_0^{\pi/2}$ $= \frac{25}{4} \left(\left(\frac{\pi}{2} - 0 \right) - (0) \right) = \frac{25\pi}{8}$	M1 M1 A1 [3]	Correct formula with r substituted. Correct method of integration including limits www
7	(iii)	Equation is of the form $x + y = c$ P is $\left(\frac{5}{\sqrt{2}}, \frac{5}{\sqrt{2}} \right)$ oe $\Rightarrow x + y = 5\sqrt{2}$	B1 B1 B1 [3]	Ft. $x + y = c$ where c comes from their P.
7	(iv)	$r = 5\sin 2\theta = 10\sin \theta \cos \theta$ $\Rightarrow r^2 = 100\sin^2 \theta \cos^2 \theta = 100 \left(\frac{y}{r} \right)^2 \left(\frac{x}{r} \right)^2$ $\Rightarrow (x^2 + y^2)^3 = 100x^2y^2$	M1 M1 A1 [3]	Square and convert r^2 Substitute for r and θ NB Answer given

Question			Answer	Marks	Guidance
8	(i)	(a)	$x_1 = 4.15, \quad x_2 = 4.1474\dots$ $x_3 = 4.1465\dots, \quad x_4 = 4.1463\dots$ $\beta = 4.146$	M1 A1 [2]	Using iterative formula at least once using at least 4dp www All iterates must be seen
8	(i)	(b)	Staircase diagram will always move to upper root	B1 B1 B1 [3]	Sketch showing an example $x_1 > \alpha$ Example with $x_1 < \alpha$ Statement Dep on 1st two B Ignore any statement when $x_1 > \beta$
8	(ii)	(a)	$\ln(x-1) = x-3 \Rightarrow \ln(x-1) - (x-3) = 0$ $\Rightarrow f(x) = \ln(x-1) - (x-3)$ $\Rightarrow f'(x) = \frac{1}{x-1} - 1$ $\Rightarrow x_{n+1} = x_n - \frac{\ln(x_n-1) - (x_n-3)}{\frac{1}{x_n-1} - 1}$ $= x_n - \frac{(x_n-1)(\ln(x_n-1) - (x_n-3))}{1 - (x_n-1)}$ $= \frac{x_n(2-x_n) + (x_n-1)(x_n-3) - (x_n-1)\ln(x_n-1)}{2-x_n}$ $= \frac{2x_n - x_n^2 + x_n^2 - 4x_n + 3 - (x_n-1)\ln(x_n-1)}{2-x_n}$ $\Rightarrow x_{n+1} = \frac{3 - 2x_n - (x_n-1)\ln(x_n-1)}{2-x_n}$	M1 M1 M1 A1 A1 [5]	Get equation in correct form Differentiate Use correct formula Mult by $(x-1)$ soi

Question			Answer	Marks	Guidance		
8	(ii)	(b)	1.2	1.152(359)	B1	For x_2	Allow 3 dp x_2 must be right for last B1. Any error is likely to be self-correcting
			1.152359	1.158448	B1	For enough iterates to determine 3dp	
			1.158448	1.158594	B1	www	
			1.158594	1.158594			
			Root = 1.159	[3]			

Annotations

Annotation in scoris	Meaning
✓ and ✕	
BOD	Benefit of doubt
FT	Follow through
ISW	Ignore subsequent working
M0, M1	Method mark awarded 0, 1
A0, A1	Accuracy mark awarded 0, 1
B0, B1	Independent mark awarded 0, 1
SC	Special case
^	Omission sign
MR	Misread
Highlighting	
Other abbreviations in mark scheme	Meaning
E1	Mark for explaining
U1	Mark for correct units
G1	Mark for a correct feature on a graph
M1 dep*	Method mark dependent on a previous mark, indicated by *
cao	Correct answer only
oe	Or equivalent
rot	Rounded or truncated
soi	Seen or implied
www	Without wrong working

Subject-specific Marking Instructions for GCE Mathematics Pure strand

- a. Annotations should be used whenever appropriate during your marking.

The A, M and B annotations must be used on your standardisation scripts for responses that are not awarded either 0 or full marks. It is vital that you annotate standardisation scripts fully to show how the marks have been awarded.

For subsequent marking you must make it clear how you have arrived at the mark you have awarded

- b. An element of professional judgement is required in the marking of any written paper. Remember that the mark scheme is designed to assist in marking incorrect solutions. Correct *solutions* leading to correct answers are awarded full marks but work must not be judged on the answer alone, and answers that are given in the question, especially, must be validly obtained; key steps in the working must always be looked at and anything unfamiliar must be investigated thoroughly.

Correct but unfamiliar or unexpected methods are often signalled by a correct result following an *apparently* incorrect method. Such work must be carefully assessed. When a candidate adopts a method which does not correspond to the mark scheme, award marks according to the spirit of the basic scheme; if you are in any doubt whatsoever (especially if several marks or candidates are involved) you should contact your Team Leader.

- c. The following types of marks are available.

M

A suitable method has been selected and *applied* in a manner which shows that the method is essentially understood. Method marks are not usually lost for numerical errors, algebraic slips or errors in units. However, it is not usually sufficient for a candidate just to indicate an intention of using some method or just to quote a formula; the formula or idea must be applied to the specific problem in hand, eg by substituting the relevant quantities into the formula. In some cases the nature of the errors allowed for the award of an M mark may be specified.

A

Accuracy mark, awarded for a correct answer or intermediate step correctly obtained. Accuracy marks cannot be given unless the associated Method mark is earned (or implied). Therefore M0 A1 cannot ever be awarded.

B

Mark for a correct result or statement independent of Method marks.

E

A given result is to be established or a result has to be explained. This usually requires more working or explanation than the establishment of an unknown result.

Unless otherwise indicated, marks once gained cannot subsequently be lost, eg wrong working following a correct form of answer is ignored. Sometimes this is reinforced in the mark scheme by the abbreviation isw. However, this would not apply to a case where a candidate passes through the correct answer as part of a wrong argument.

- d. When a part of a question has two or more ‘method’ steps, the M marks are in principle independent unless the scheme specifically says otherwise; and similarly where there are several B marks allocated. (The notation ‘dep *’ is used to indicate that a particular mark is dependent on an earlier, asterisked, mark in the scheme.) Of course, in practice it may happen that when a candidate has once gone wrong in a part of a question, the work from there on is worthless so that no more marks can sensibly be given. On the other hand, when two or more steps are successfully run together by the candidate, the earlier marks are implied and full credit must be given.
- e. The abbreviation ft implies that the A or B mark indicated is allowed for work correctly following on from previously incorrect results. Otherwise, A and B marks are given for correct work only — differences in notation are of course permitted. A (accuracy) marks are not given for answers obtained from incorrect working. When A or B marks are awarded for work at an intermediate stage of a solution, there may be various alternatives that are equally acceptable. In such cases, exactly what is acceptable will be detailed in the mark scheme rationale. If this is not the case please consult your Team Leader.

Sometimes the answer to one part of a question is used in a later part of the same question. In this case, A marks will often be ‘follow through’. In such cases you must ensure that you refer back to the answer of the previous part question even if this is not shown within the image zone. You may find it easier to mark follow through questions candidate-by-candidate rather than question-by-question.

- f. Wrong or missing units in an answer should not lead to the loss of a mark unless the scheme specifically indicates otherwise. Candidates are expected to give numerical answers to an appropriate degree of accuracy, with 3 significant figures often being the norm. Small variations in the degree of accuracy to which an answer is given (e.g. 2 or 4 significant figures where 3 is expected) should not normally be penalised, while answers which are grossly over- or under-specified should normally result in the loss of a mark. The situation regarding any particular cases where the accuracy of the answer may be a marking issue should be detailed in the mark scheme rationale. If in doubt, contact your Team Leader.

g. Rules for replaced work

If a candidate attempts a question more than once, and indicates which attempt he/she wishes to be marked, then examiners should do as the candidate requests.

If there are two or more attempts at a question which have not been crossed out, examiners should mark what appears to be the last (complete) attempt and ignore the others.

NB Follow these maths-specific instructions rather than those in the assessor handbook.

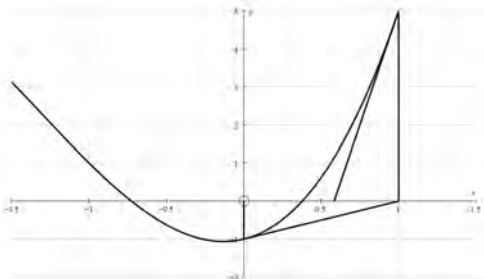
h. For a *genuine* misreading (of numbers or symbols) which is such that the object and the difficulty of the question remain unaltered, mark according to the scheme but following through from the candidate's data. A penalty is then applied; 1 mark is generally appropriate, though this may differ for some units. This is achieved by withholding one A mark in the question.

Note that a miscopy of the candidate's own working is not a misread but an accuracy error.

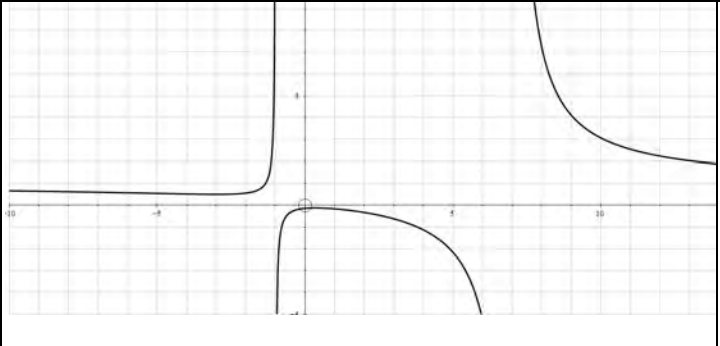
Question	Answer	Marks	Guidance
1	$\cos \theta = \frac{1-t^2}{1+t^2}$ $\frac{dt}{d\theta} = \frac{1}{2} \sec^2 \frac{1}{2} \theta = \frac{1}{2} \left(1 + \tan^2 \frac{1}{2} \theta \right)$ $\Rightarrow dt = \frac{1+t^2}{2} \cdot d\theta \Rightarrow d\theta = \frac{2dt}{1+t^2}$ $\Rightarrow I = \int_0^1 \frac{1}{1 + \frac{1-t^2}{1+t^2}} \frac{2dt}{1+t^2} = \int_0^1 \frac{1+t^2}{1+t^2+1-t^2} \frac{2dt}{1+t^2}$ $\int_0^1 \frac{2dt}{2} = [t]_0^1 = 1$	<p>M1</p> <p>A1</p> <p>M1</p> <p>A1</p> <p>A1</p> <p>[5]</p>	<p>Using t substitution for both $\cos \theta$ and $d\theta$</p> <p>Subs correct</p> <p>Dealing with limits and attempting integration.</p> <p>Correct integral</p> <p>Answer</p>
	<p>Alternative</p> $1 + \cos \theta = 2 \cos^2 \frac{1}{2} \theta$ $\Rightarrow \int_0^{\frac{\pi}{2}} \frac{1}{1 + \cos \theta} d\theta = \frac{1}{2} \int_0^{\frac{\pi}{2}} \frac{1}{\cos^2 \frac{1}{2} \theta} d\theta = \frac{1}{2} \int_0^{\frac{\pi}{2}} \sec^2 \frac{1}{2} \theta d\theta$ $= \frac{1}{2} \left[2 \tan \frac{1}{2} \theta \right]_0^{\frac{\pi}{2}} = \tan \frac{\pi}{2} - \tan 0 = 1$	SC3	
2 (i)	$\cosh x = \frac{e^x + e^{-x}}{2}, \quad \sinh x = \frac{e^x - e^{-x}}{2}$ $\Rightarrow \cosh^2 x - \sinh^2 x = \left(\frac{e^x + e^{-x}}{2} \right)^2 - \left(\frac{e^x - e^{-x}}{2} \right)^2$ $= \frac{1}{4} (e^{2x} + 2 + e^{-2x} - e^{2x} + 2 - e^{-2x}) = \frac{1}{4} \cdot 4 = 1$	<p>B1</p> <p>M1</p> <p>A1</p> <p>[3]</p>	<p>Correct formulae</p> <p>Dealing with squaring correctly</p> <p>www All steps seen</p> <p>Difference of squares can be used</p>

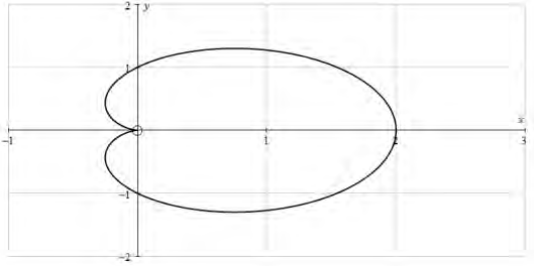
Question	Answer	Marks	Guidance
2 (ii)	$\Rightarrow \cosh^2 x - 1 = 5 \cosh x - 7$ $\Rightarrow \cosh^2 x - 5 \cosh x + 6 = 0$ $\Rightarrow (\cosh x - 2)(\cosh x - 3) = 0$ $\Rightarrow \cosh x = 2, 3$ $\Rightarrow x = \cosh^{-1} 2 = \pm \ln(2 \pm \sqrt{3})$ <p style="text-align: center;">and $x = \cosh^{-1} 3 = \pm \ln(3 \pm \sqrt{8})$</p>	M1 M1 A1 A1 A1 [5]	Use (i) Attempt to solve quadratic Use correct ln formula Use correct ln formula E.g. correct formula or expansion of their brackets gives 2 out of 3 terms correct Condone lack of \pm Condone lack of \pm
3 (i)	$\frac{dy}{dx} = \frac{1}{1 - \left(\frac{1-x}{3+x}\right)^2} \times \frac{-(3+x) - (1-x)}{(3+x)^2}$ $\Rightarrow \frac{dy}{dx} = \left(\frac{-4}{(3+x)^2 - (1-x)^2} \right) = \frac{k}{1+x}$ $\Rightarrow \frac{dy}{dx} = \frac{-1}{2(1+x)}$ $\Rightarrow \frac{d^2y}{dx^2} = \frac{1}{2(1+x)^2}$	B1 M1 A1 A1 A1 A1 [6]	Sight of standard diffn for $\tanh^{-1}x$ Fn of fn and diffn of quotient Soi correct quotient (i.e. correct expression for 2nd part) Correct for y' 2 nd diffn (NB AG)

Question	Answer	Marks	Guidance
3 (ii)	When $x = 0, y = \tanh^{-1} \frac{1}{3}$ or $\frac{1}{2} \ln 2$ or $\ln \sqrt{2}$ $\frac{dy}{dx} = -\frac{1}{2}$ $\frac{d^2y}{dx^2} = \frac{1}{2}$ $\Rightarrow y = \tanh^{-1} \frac{1}{3} + \left(-\frac{1}{2}\right)x + \left(\frac{1}{2}\right)\frac{x^2}{2}$ $= \tanh^{-1} \frac{1}{3} - \frac{1}{2}x + \frac{x^2}{4}$	B1 B1 M1 A1 [4]	For 1 st value (needs to be exact) For both Use of correct Maclaurin's series Accept 0.347
4 (i)	$u = \cos^{n-1} x, dv = \cos x dx$ $du = -(n-1)\cos^{n-2} x \sin x, v = \sin x$ $\Rightarrow I_n = \left[\cos^{n-1} x \sin x\right]_0^{\frac{\pi}{2}} + (n-1) \int_0^{\frac{\pi}{2}} \cos^{n-2} x \sin^2 x dx$ $= 0 + (n-1)(I_{n-2} - I_n)$ $\Rightarrow nI_n = (n-1)I_{n-2} \Rightarrow I_n = \frac{n-1}{n} I_{n-2}$	M1* A1 A1 *M1 A1 [5]	By parts the right way round Integral so far Correct use of $\sin^2 x = 1 - \cos^2 x$ Dependent on 1st M www AG
4 (ii)	$I_1 = 1$ $I_{11} = \frac{10}{11} I_9 = \dots = \frac{10}{11} \cdot \frac{8}{9} \cdot \frac{6}{7} \cdot \frac{4}{5} \cdot \frac{2}{3} I_1$ $\Rightarrow I_{11} = \frac{3840}{10395} = \frac{256}{693}$ oe	B1 M1 A1 [3]	For I_1 soi Use of (i) to give product of 5 fractions Correct fraction

Question	Answer	Marks	Guidance	
5 (i)	$f(x) = x^3 + 4x^2 + x - 1$ $f'(x) = 3x^2 + 8x + 1$ $\Rightarrow x_{n+1} = x_n - \frac{x_n^3 + 4x_n^2 + x_n - 1}{3x_n^2 + 8x_n + 1}$ $= \frac{x_n(3x_n^2 + 8x_n + 1) - (x_n^3 + 4x_n^2 + x_n - 1)}{3x_n^2 + 8x_n + 1}$ $= \frac{2x_n^3 + 4x_n^2 + 1}{3x_n^2 + 8x_n + 1}$	B1 M1 A1 [3]	Diffn Correct application of N-R formula And completed with suffices on last line NB AG	
5 (ii)	$x_2 = -0.72652,$ $x_3 = -0.72611$ $\Rightarrow \alpha = -0.72611$	B1 B1 B1 [3]		NB $x_4 = -0.726109$
5 (iii)	Sketch plus at least one tangent  Converges to another root.	B1 B1 [2]	At least the first tangent and vertical line to curve Or positive root or, for e.g. "x = 0 is the wrong side of a turning point" www	Use of formula to find this root numerically is not acceptable

Question		Answer	Marks	Guidance
6	(i)	Width of rectangles is $\frac{3}{n}$ \Rightarrow Sum of areas of rectangles $= \frac{3}{n} \times \left(\ln(\ln 3) + \ln \left(\ln \left(3 + \frac{3}{n} \right) \right) + \dots \right)$ $= \frac{3}{n} \times \sum_{r=0}^{n-1} \ln \left(\ln \left(3 + \frac{3r}{n} \right) \right)$	B1 M1 A1 [3]	Statement about width Height or area of at least one rectangle Correct conclusion www 1468 or
6	(ii)	$= \frac{3}{n} \times \sum_{r=1}^n \ln \left(\ln \left(3 + \frac{3r}{n} \right) \right)$	B1 [1]	
6	(iii)	$U - L = \frac{3}{n} \times \ln(\ln 6) - \frac{3}{n} \times \ln(\ln 3)$ $= \frac{3}{n} (\ln(\ln 6) - \ln(\ln 3)) = \frac{3}{n} \ln \left(\frac{\ln 6}{\ln 3} \right)$ $\Rightarrow n > \frac{3}{0.001} \ln \left(\frac{\ln 6}{\ln 3} \right) \Rightarrow n > \frac{3}{0.001} \times \ln(1.6309)$ $\Rightarrow \text{least } n = 1468$	M1* A1 *M1 A1 [4]	Subtraction to obtain the difference of two terms Dealing with inequality to obtain n dep on first M Accept $n \geq 1468$ or $n > 1467$
7	(i)	$x = -1$ $x = 7$ $y = 1$	B1 B1 B1 [3]	B1 for each -1 for any extras

Question	Answer	Marks	Guidance
7 (ii)	$\frac{dy}{dx} = \frac{(x^2 - 6x - 7)2x - (x^2 + 1)(2x - 6)}{(x+1)^2(x-7)^2}$ $= 0 \text{ when } (x^2 - 6x - 7)2x - (x^2 + 1)(2x - 6) = 0$ $3x^2 + 8x - 3 = 0$ $\Rightarrow x = -3, \frac{1}{3}; \quad y = \frac{1}{2}, -\frac{1}{8}$ <p>i.e. $\left(-3, \frac{1}{2}\right), \left(\frac{1}{3}, -\frac{1}{8}\right)$</p>	M1 A1 A1 A1 A1 [5]	Diffn using quotient rule Quadratic Both x values Both y values Or: A1 one pair A1 other pair
7 (iii)	When $y = 1$, $x^2 - 6x - 7 = x^2 + 1$ $\Rightarrow 6x = -8 \Rightarrow x = -\frac{4}{3} \Rightarrow \left(-\frac{4}{3}, 1\right)$	M1 A1 A1 [3]	Coordinate pair needs to be seen.
7 (iv)		B1 B1 B1 [3]	Left section, cutting asymptote and approaching $y = 1$ from below Right hand section Middle section all below x -axis labelling intercept on graph or by a statement

Question	Answer	Marks	Guidance
8 (i)	Substitute $r^2 = x^2 + y^2$, $x = r \cos \theta$ $\Rightarrow r^2 - r \cos \theta = r \Rightarrow r = 1 + \cos \theta$	M1 A1 A1 [3]	cao
8 (ii)		B1 B1 [2]	Cardioid (General shape) Correct shape at pole, $r = 2$ and symmetric e.g. cusp clearly at pole, vertical tangent at $r = 2$
8 (iii)	Line cuts curve at $(0, 1)$ and $(2, 0)$ Total area $= 2 \times \frac{1}{2} \times \int_0^\pi (1 + \cos \theta)^2 d\theta$ $= \int_0^\pi (1 + 2\cos \theta + \cos^2 \theta) d\theta = \int_0^\pi \left(1 + 2\cos \theta + \frac{1 + \cos 2\theta}{2} \right) d\theta$ $= \left[\frac{3}{2}\theta + 2\sin \theta + \frac{1}{4}\sin 2\theta \right]_0^\pi = \frac{3}{2}\pi$ area in 1st quadrant $= \frac{1}{2} \times \int_0^{\frac{1}{2}\pi} (1 + \cos \theta)^2 d\theta$ $= \frac{1}{2} \left[\frac{3}{2}\theta + 2\sin \theta + \frac{1}{4}\sin 2\theta \right]_0^{\frac{1}{2}\pi} = \frac{3}{8}\pi + 1$ Area under line in 1st quadrant $= 1$ \Rightarrow Area enclosed by line and curve $= \frac{3}{8}\pi + 1 - 1 = \frac{3}{8}\pi$ \Rightarrow ratio $= \left(\frac{3}{2}\pi - \frac{3}{8}\pi \right) : \frac{3}{8}\pi = 3:1$	B1 M1 A1 A1 M1 A1 [6]	Formula for area used Sight of expansion and attempt to integrate Or ratio 1 : 3

Question		Answer	Marks	Guidance
1	(i)	$(20\sin\theta)^2 - 2g(2.44) = 0$ $\theta = 20.2$	M1 A1 [2]	Use $v^2 = u^2 + 2as$ vertically with $v = 0$ $\theta = 20.22908\dots$
	(ii)	$20 \sin cv(\theta)t - 1/2gt^2 = 0$ AND range = $20 \cos cv(\theta)t$ Range = 26.5 m	M1 A1 [2]	Use $s = ut + \frac{1}{2}at^2$ vertically with $s = 0$ OR use $v = u + at$ and doubles t AND horizontally with time found from vertical. ($t = 1.4113\dots$ s or $1.4093\dots$ s (from 20.2)) Range = 26.48541... m or 26.45387...m (from 20.2)
	OR	$\frac{20^2 \sin(2 \times cv(\theta))}{g}$ Range = 26.5 m	M1 A1 [2]	Use of range formula Range = 26.48541... m or 26.45387...m (from 20.2)
2	(i)	$r/6 = \tan 21$ $r = 2.3(0)$	M1 A1 A1 [3]	Attempt to use trigonometry to form equation for r $r = 2.30318\dots$
	(ii)	$\mu < cv(r)/6$ or $\mu mg \cos 21 < mg \sin 21$ $\mu < 0.384$ or $\tan 21$	M1 A1 [2]	Attempt comparison between weight comp and max friction. $\mu < 0.38386\dots$ or $0.38333\dots$ (from 2.3); allow \leq
3	(i)	CoM of triangle = $\frac{1}{3} \times cv(12)$ from BD $(80 + 60)x_G = 4(80) + 12(60)$ $x_G = 7.43$ cm	B1 M1 A1 A1 A1 [5]	OR $\frac{2}{3} \times cv(12)$ from C. CoM of triangle Table of values idea $7.42857\dots$ or $\frac{52}{7}$ cm
	(ii)	$\tan\theta = (8 - x_G)/5$ $\tan\theta = 0.5714\dots/5$ $\theta = 6.52^\circ$	M1 A1ft A1 [3]	Using \tan to find a relevant angle fit their x_G to target angle with the vertical $6.5198\dots$ Allow $6.5(0)$ from $x_G = 7.43$

Question		Answer	Marks	Guidance
4	(i)	$18(10) - T(20\sin\theta) + 3(6) = 0$ $T = 16.5 \text{ N}$	M1 A1 A1 [3]	Moments about P Need a value for $\sin\theta$ or θ Exact
	(ii)	$X = T\cos\theta$ $Y + T\sin\theta - 18 - 3 = 0$ $R = \sqrt{(13.2^2 + 11.1^2)} = 17.2 \text{ N}$	B1ft M1 A1ft A1 [4]	ft candidates value of T . Resolve horizontally ($X = 13.2 \text{ N}$) or moments; Need a value for $\cos\theta$ or θ Resolve vertically or moments ft candidates value of T . $Y = 11.1 \text{ N}$; Need a value for $\sin\theta$ or θ $R = 17.2467\dots$
	(iii)	$\mu = cv(Y)/cv(X) = 11.1/13.2$ $\mu = 0.841$	M1 A1 [2]	Use of $Fr = \mu R$ $\mu = 0.8409\dots$; allow $^{37}/_{44}$
5	(i)	Driving Force = $10000/20$ (= 500) $cv(10000/20) - 1300 + 800g\sin\alpha = 0$ $\sin\alpha = 5/49$	B1 M1 A1 A1 [4]	Attempt at N2L with 3 terms AG at least one more line of correct working (at least e.g. $-800+800g\sin\alpha=0$); allow verification (e.g. $500 - 1300 + 800 = 0$)
	(ii)	$800(22.1)g\sin\alpha$ $800(22.1)g\sin\alpha + 1300(22.1) + \frac{1}{2}(800)(8^2)$ $t = 3.6(0) \text{ s}$	B1 M1 A1 M1 A1 [5]	Work done against weight; Need a value for $\sin\alpha$ or α Total work done, 3 terms needed Need a value for $\sin\alpha$ or α ; (72010 J) Time = work done(from at least one correct energy term)/power 'Exact' is 3.6005
6	(i)	$(2m)(4) - (3m)(2) = 2mv_A + 3mv_B$ $(v_B - v_A)/(4 - -2) = 0.4$ Speed $A = 1.04 \text{ m s}^{-1}$, Speed $B = 1.36 \text{ m s}^{-1}$	*M1 A1 *M1 A1 Dep**M1 A1 [6]	Attempt at use of conservation of momentum Attempt at use of coefficient of restitution Solving for v_A and v_B Final answers must be positive

Question		Answer	Marks	Guidance
	(ii)	Energy before = $\frac{1}{2}(2m)(4^2) + \frac{1}{2}(3m)(2^2)$ Energy after = $\frac{1}{2}(2m)(1.04^2) + \frac{1}{2}(3m)(1.36^2)$ $22m - 3.856m$ $18.1m$	B1ft B1ft M1 A1 [4]	Energy before or Loss in A's KE Energy after or Loss in B's KE Difference of total OR sum of differences (total kinetic energy must decrease) $18.144m$ (Exact)
	OR	$\frac{1}{2} \frac{m_1 m_2}{m_1 + m_2} (1 - e^2) A^2$ $\frac{1}{2} \frac{(2m)(3m)}{2m + 3m} (1 - 0.4^2)(4 + 2)^2$ $18.1m$	*B1 Dep*M1 A1 A1 [4]	Loss of kinetic energy formula, where A = approach speed Substitution of values into quoted formula $18.144m$ (Exact)
	(iii)	$2m(4) - 2m(-1.04) = 2.52$ $m = 0.25$	M1 A1ft A1 [3]	Attempt at change in momentum and equate to impulse. Must use 2m or 3m Or $3m(2) - 3m(-1.36) = 2.52$ Exact
7	(i)	$T\cos 30 + T\cos 45 = 0.4g$ $T = 2.49 \text{ N}$	M1 A1 A1 [3]	Resolve vertically (3 terms); may be different T's at this stage $T = 2.4918\dots$
	(ii)	$cv(T)\sin 30 + cv(T)\sin 45 = 0.4v^2/0.5$ $v = 1.94 \text{ m s}^{-1}$	M1 A1 A1 [3]	Resolve horizontally (3 terms); may be different T's at this stage Or use acceleration = $0.5\omega^2$ $v = 1.93904\dots$
	(iii)	$(2AP =) \frac{0.5}{\sin 45} + \frac{0.5}{\sin 30}$ $AP = 0.854 \text{ m}$	M1 A1 [2]	Reasonable attempt to use trigonometry to find total length of string AG ($AP = 0.85355\dots\text{m}$)

Question		Answer	Marks	Guidance
	(iv)	$2T\sin\theta = 0.4(0.854\sin\theta)(3.46^2)$ $T = 2.04 \text{ N}$ $2T\cos\theta = 0.4g$ $\theta = 16.5^\circ \text{ or } 16.6^\circ$	M1 A1 M1 A1 [4]	θ angle with vertical. Resolve horizontally. Allow with T only. $r =$ component of 0.854 $T = 2.04474\dots \text{ N}$ using $AP = 0.854 \text{ m}$, $T = 2.04367\dots \text{ N}$ using exact AP θ angle with vertical. Resolve vertically. Allow with T only $\theta = 16.55377\dots^\circ$ using $AP = 0.854 \text{ m}$, $\theta = 16.4526\dots^\circ$ using exact AP SC M1A0M1A1 for use of T instead of 2T throughout
8	(i)	$v_x = 12\cos 20$ $8 = 12t \cos 20$ $v_y = 12\sin 20 - gcv(t)$ $\tan\theta = v_y / v_x$ 14.2° below horizontal	*B1 B1 *M1 A1 Dep**M1 A1 [6]	$11.27631\dots$ Using suvat to find expression in t only. ($t = 0.70945\dots$) Attempt at use of $v = u + at$ $-2.84838\dots$ Use trig to find a relevant angle $14.1763\dots$ (75.8° downward vertical)
	(ii)	$8 = Vt\cos 20$ $1.5 = Vt\sin 20 - gt^2/2$ Eliminate t Attempt to solve a quadratic for V $V = 15.9$	B1 *M1 A1 dep*M1 dep*M1 A1 [6]	Attempt at use of $s = ut + \frac{1}{2}at^2$ OR Eliminate V and solve for t AND Sub value for t and solve for V $V = 15.8606\dots$
	OR	$y = x\tan\theta - gx^2 \sec^2 \theta / 2u^2$ Substitute values for y, x, θ $1.5 = 8\tan 20 - g8^2 \sec^2 20 / 2V^2$ Attempt to solve a quadratic for V $V = 15.9$	*B1 dep*M1 A1 dep*M2 A1 [6]	Use equation of trajectory SC M1 for solving for V^2 $V = 15.8606\dots$