

Write your name here

|         |             |
|---------|-------------|
| Surname | Other names |
|---------|-------------|

**Pearson Edexcel**  
**International**  
**Advanced Level**

Centre Number

|  |  |  |  |  |
|--|--|--|--|--|
|  |  |  |  |  |
|--|--|--|--|--|

Candidate Number

|  |  |  |  |
|--|--|--|--|
|  |  |  |  |
|--|--|--|--|

# Decision Mathematics D1

## Advanced/Advanced Subsidiary

Tuesday 9 June 2015 – Morning  
**Time: 1 hour 30 minutes**

Paper Reference  
**WDM01/01**

**Answer Book**

Do not return the question paper with the answer book.

Total Marks

|  |
|--|
|  |
|--|

Turn over ►

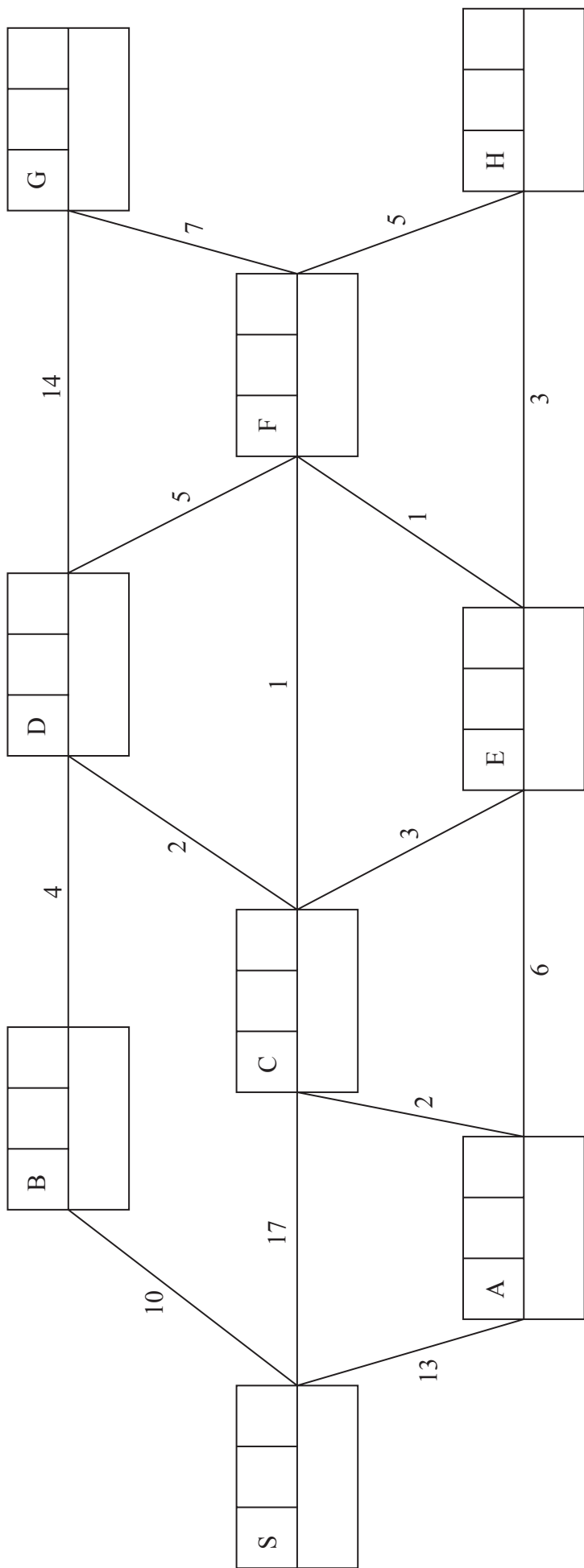
P44852A

©2015 Pearson Education Ltd.

5/1/1/1/



1.



**Key:**

| Vertex         | Order of labelling | Final value |
|----------------|--------------------|-------------|
| Working values |                    |             |



**Question 1 continued**

(a) Shortest distance from S to G: \_\_\_\_\_

Shortest route from S to G: \_\_\_\_\_

(b) Shortest distance from S to H: \_\_\_\_\_

Shortest route from S to H: \_\_\_\_\_

**(Total 8 marks)**

**Q1**



















6. (a)

| Activity | Immediately preceding activities | Activity | Immediately preceding activities | Activity | Immediately preceding activities |
|----------|----------------------------------|----------|----------------------------------|----------|----------------------------------|
| A        | -                                | G        | C                                | M        | I                                |
| B        | -                                | H        | C                                | N        |                                  |
| C        | -                                | I        |                                  | P        |                                  |
| D        | A                                | J        | G                                | Q        |                                  |
| E        |                                  | K        | G                                | R        |                                  |
| F        |                                  | L        |                                  |          |                                  |

(b)

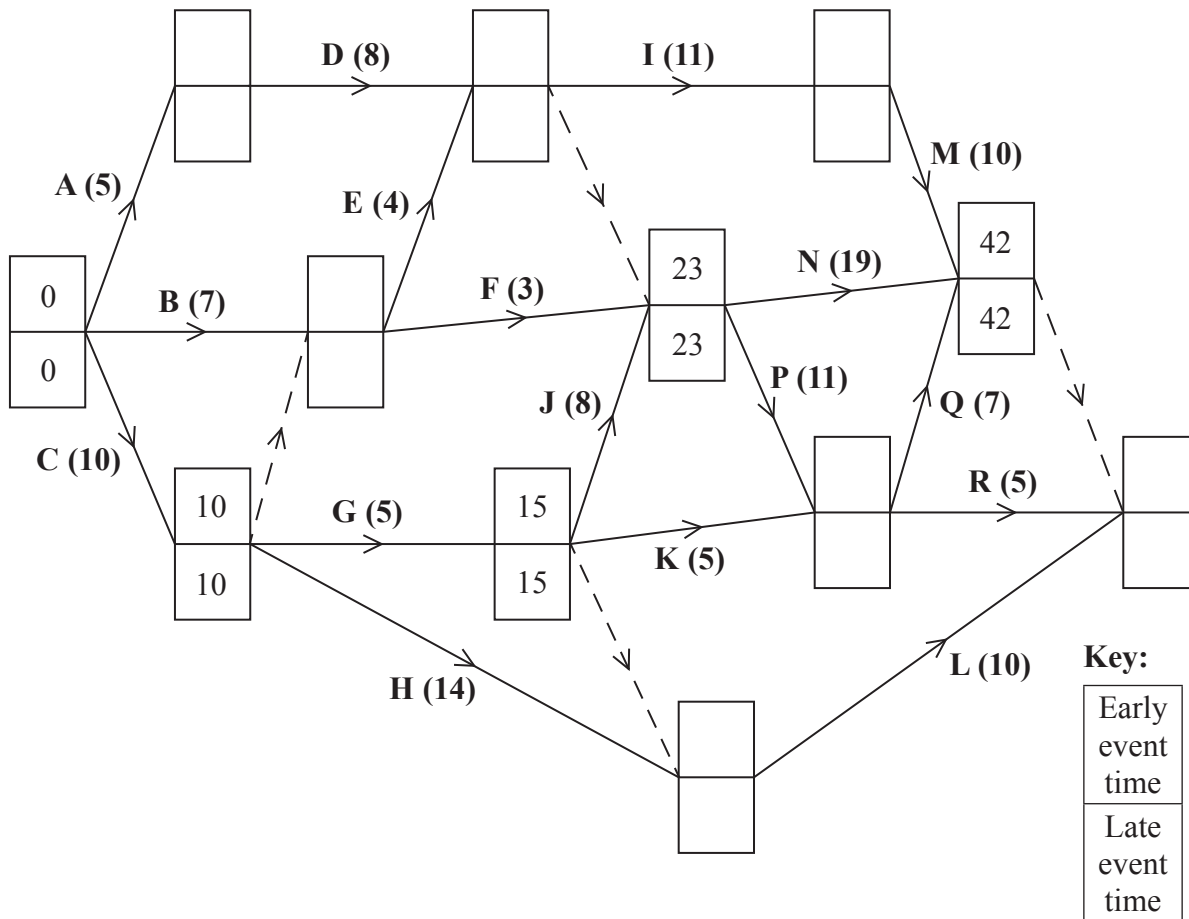


Diagram 1



Question 6 continued

---

---

---

---

---

---

---

---

(e)

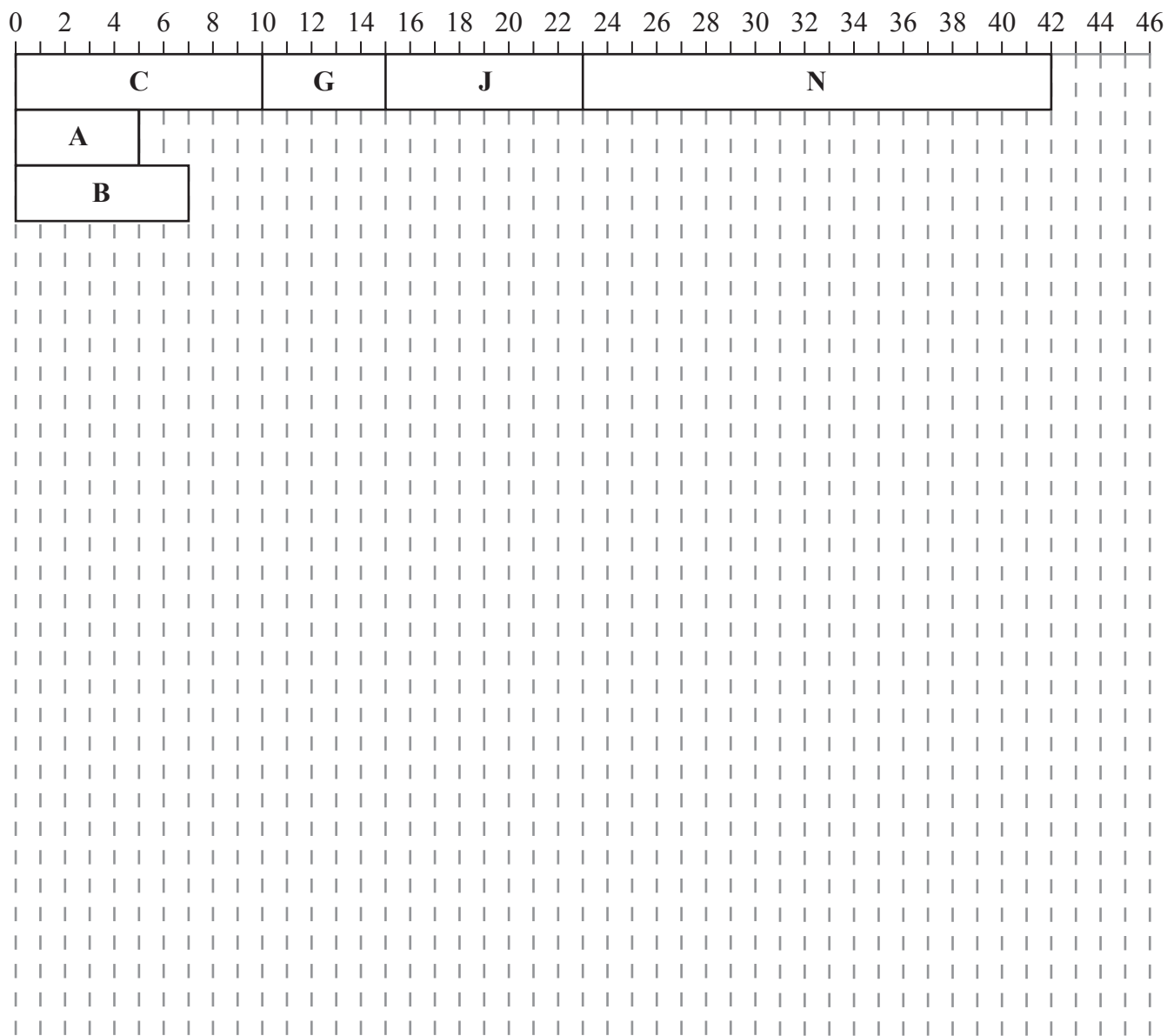


Diagram 2

(Total 12 marks)

|    |  |
|----|--|
| Q6 |  |
|----|--|





