

Write your name here

Surname

Other names

**Pearson Edexcel**  
**International**  
**Advanced Level**

Centre Number

--	--	--	--	--	--

Candidate Number

--	--	--	--	--

# Decision Mathematics D1

## Advanced/Advanced Subsidiary

Thursday 12 June 2014 – Afternoon  
**Time: 1 hour 30 minutes**

Paper Reference

**WDM01/01****Answer Book**

Do not return the question paper with the answer book.

Total Marks

--

Turn over ►

P44516A

©2014 Pearson Education Ltd.

5/5/1/1


**PEARSON**





2. (a)

---

---

---

---

---

---

---

---

---

---

(b) & (c)

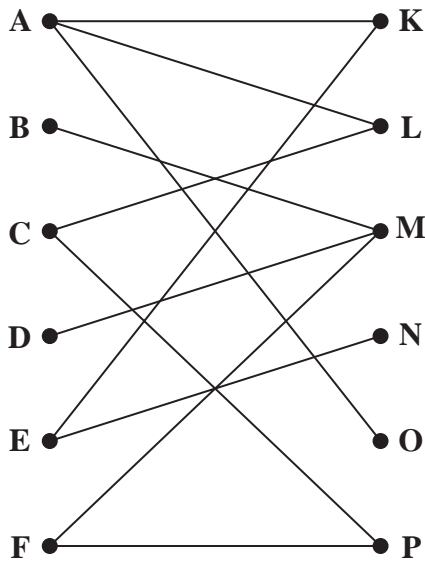


Figure 1

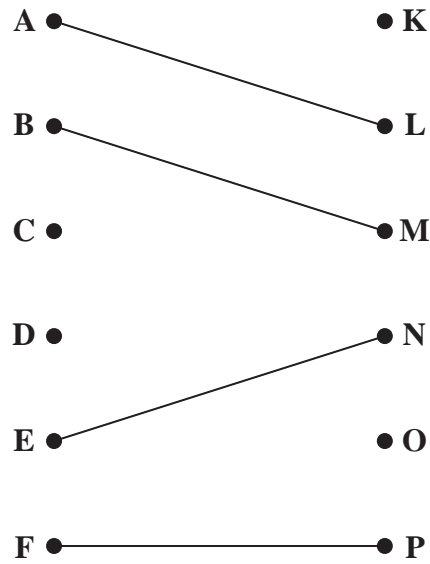


Figure 2

---

---

---

---

---

---

---

---

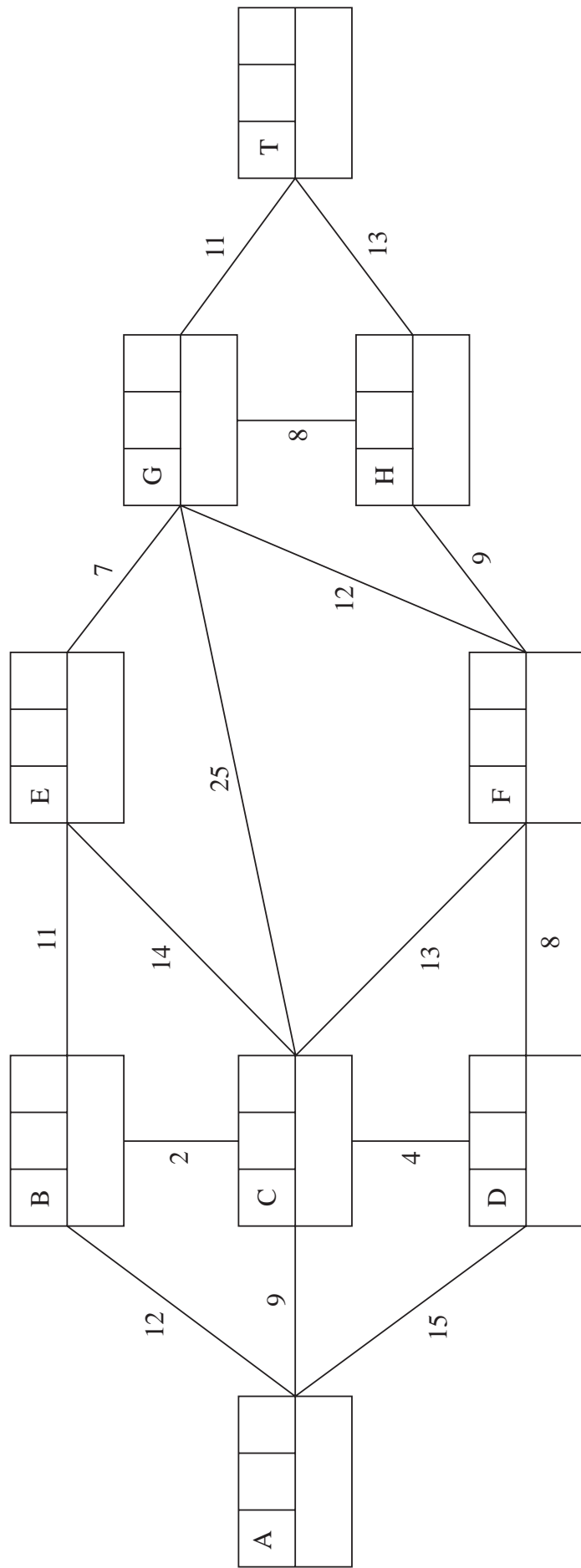
---

---





3. (a)



**Key:**

Vertex	Order of labelling	Final value
Working values		

Quickest route: \_\_\_\_\_

Time taken: \_\_\_\_\_



**Question 3 continued**

(b)

Route: \_\_\_\_\_

Time: \_\_\_\_\_

(c)

Leave  
blank

**Q3**

**(Total 10 marks)**









5. (a)

---

---

(b)

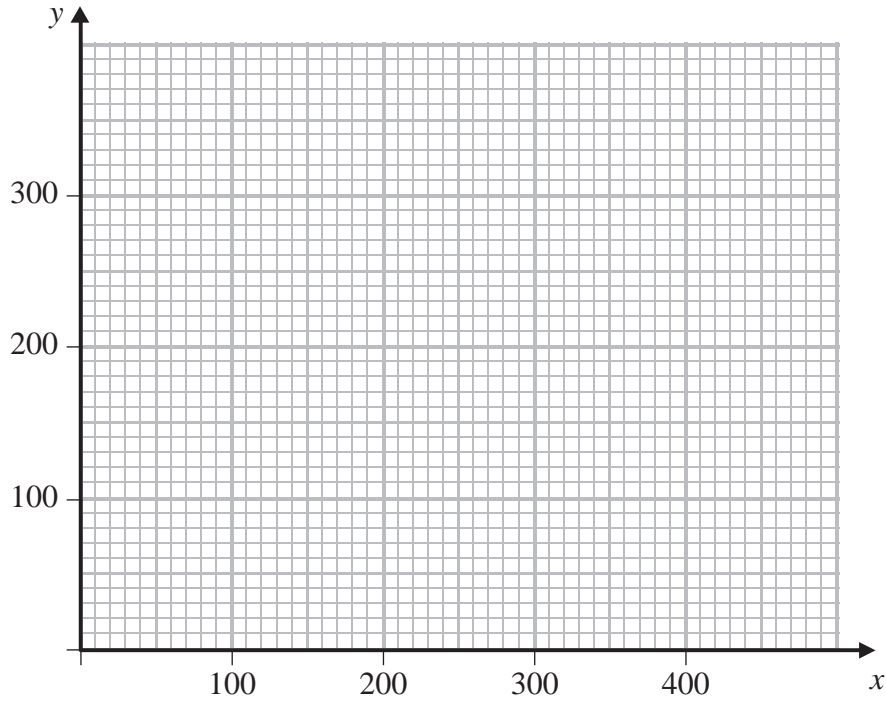


Diagram 1

---

---

---

---

---

---

---

---

---

---

---

---

---

---

---

---

---

---

---

---

---

---

---

---

---

---







Leave  
blank

6.

---

---

---

---

---

---

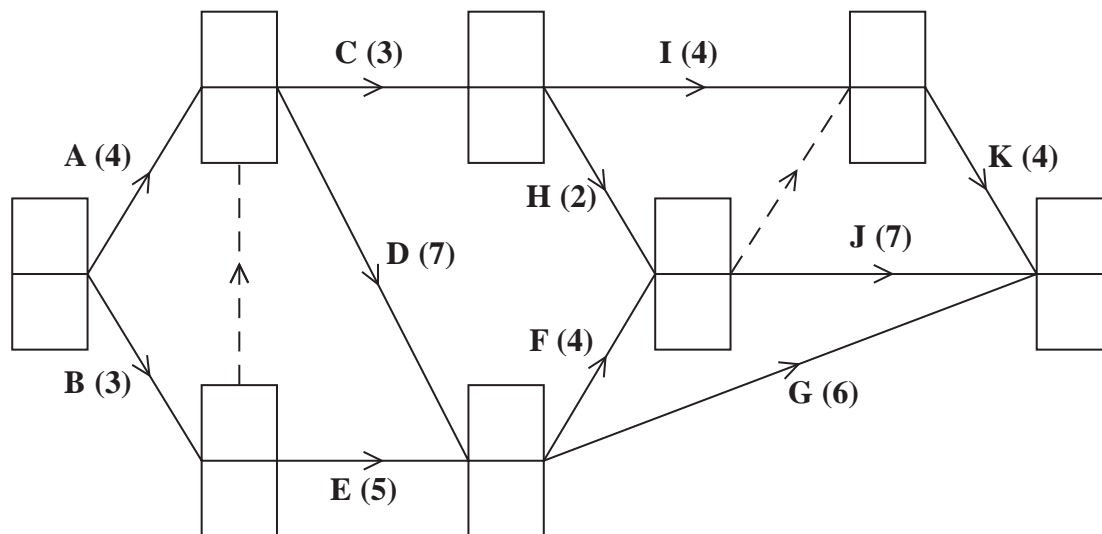
---

(Total 7 marks)

Q6



7. (a)



**Diagram 1**

(b) Critical Path \_\_\_\_\_

Length \_\_\_\_\_

(c) ANSWER THIS ON DIAGRAM 2 (LARGE GRID) ON OPPOSITE PAGE.

(d) Time 7.5 \_\_\_\_\_

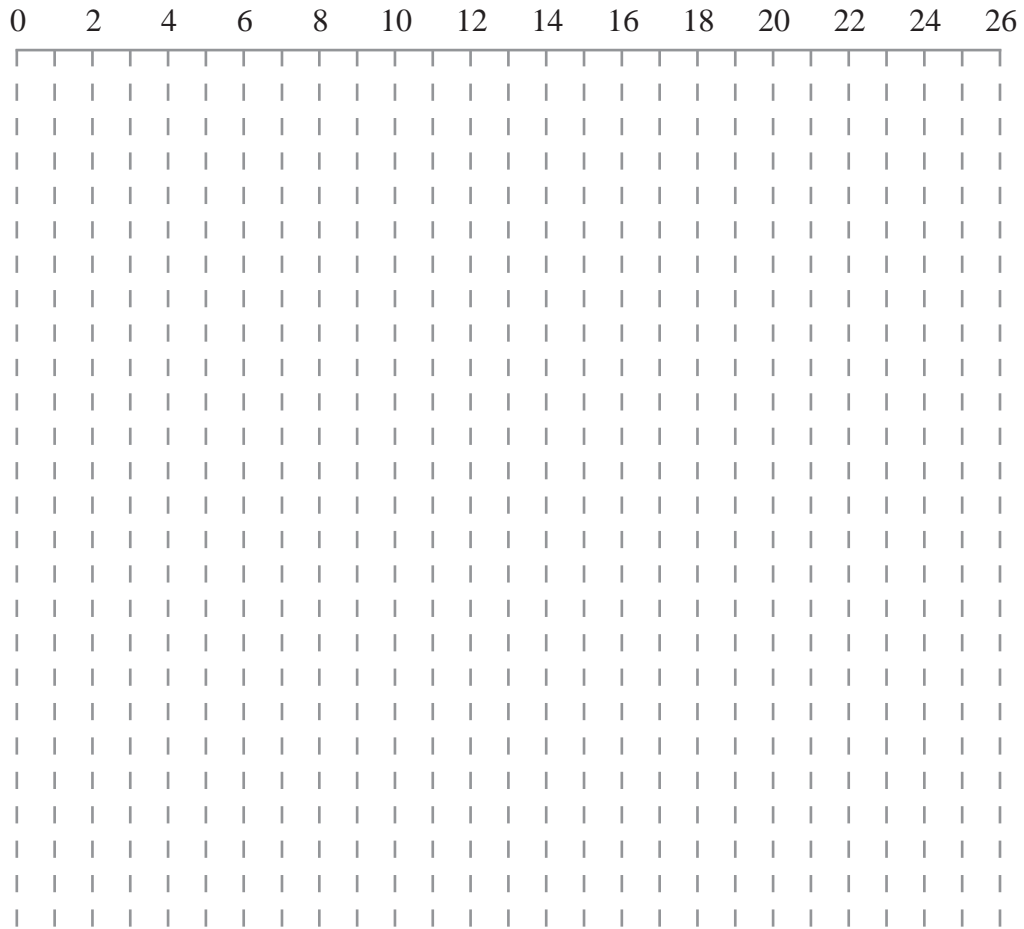
Time 16.5 \_\_\_\_\_

(e) ANSWER THIS ON DIAGRAM 3 (SMALL GRID) ON OPPOSITE PAGE.




**Question 7 continued**

(c)



**Diagram 2**

(e)



**Diagram 3**

**(Total 14 marks)**

**Q7**

**TOTAL FOR PAPER: 75 MARKS**

**END**

