

OCR

Oxford Cambridge and RSA

Tuesday 21 June 2016 – Morning**A2 GCE MATHEMATICS (MEI)****4753/01** Methods for Advanced Mathematics (C3)**QUESTION PAPER**

Candidates answer on the Printed Answer Book.

OCR supplied materials:

- Printed Answer Book 4753/01
- MEI Examination Formulae and Tables (MF2)

Other materials required:

- Scientific or graphical calculator

Duration: 1 hour 30 minutes**INSTRUCTIONS TO CANDIDATES**

These instructions are the same on the Printed Answer Book and the Question Paper.

- The Question Paper will be found inside the Printed Answer Book.
- Write your name, centre number and candidate number in the spaces provided on the Printed Answer Book. Please write clearly and in capital letters.
- **Write your answer to each question in the space provided in the Printed Answer Book.** If additional space is required, you should use the lined page(s) at the end of the Printed Answer Book. The question number(s) must be clearly shown.
- Use black ink. HB pencil may be used for graphs and diagrams only.
- Read each question carefully. Make sure you know what you have to do before starting your answer.
- Answer **all** the questions.
- Do **not** write in the bar codes.
- You are permitted to use a scientific or graphical calculator in this paper.
- Final answers should be given to a degree of accuracy appropriate to the context.

INFORMATION FOR CANDIDATES

This information is the same on the Printed Answer Book and the Question Paper.

- The number of marks is given in brackets [] at the end of each question or part question on the Question Paper.
- You are advised that an answer may receive **no marks** unless you show sufficient detail of the working to indicate that a correct method is being used.
- The total number of marks for this paper is **72**.
- The Printed Answer Book consists of **16** pages. The Question Paper consists of **4** pages. Any blank pages are indicated.

INSTRUCTION TO EXAMS OFFICER/INVIGILATOR

- Do not send this Question Paper for marking; it should be retained in the centre or recycled. Please contact OCR Copyright should you wish to re-use this document.

Section A (36 marks)

1 Find the exact value of $\int_0^{\frac{1}{2}\pi} (1 + \cos \frac{1}{2}x) dx$. [3]

2 The functions $f(x)$ and $g(x)$ are defined by $f(x) = \ln x$ and $g(x) = 2 + e^x$, for $x > 0$.
Find the exact value of x , given that $fg(x) = 2x$. [5]

3 Find $\int_1^4 x^{-\frac{1}{2}} \ln x dx$, giving your answer in an exact form. [5]

4 By sketching the graphs of $y = |2x + 1|$ and $y = -x$ on the same axes, show that the equation $|2x + 1| = -x$ has two roots. Find these roots. [4]

5 The volume $V \text{ m}^3$ of a pile of grain of height h metres is modelled by the equation

$$V = 4\sqrt{h^3 + 1} - 4.$$

(i) Find $\frac{dV}{dh}$ when $h = 2$. [4]

At a certain time, the height of the pile is 2 metres, and grain is being added so that the volume is increasing at a rate of 0.4 m^3 per minute.

(ii) Find the rate at which the height is increasing at this time. [3]

6 Fig. 6 shows part of the curve $\sin 2y = x - 1$. P is the point with coordinates $(1.5, \frac{1}{12}\pi)$ on the curve.

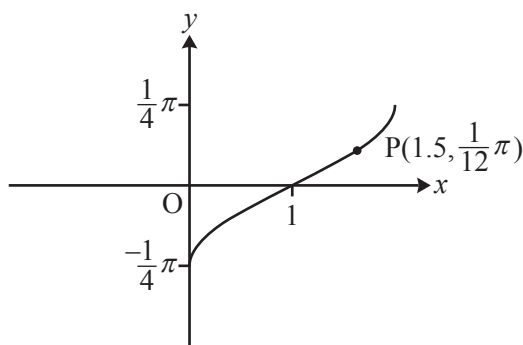


Fig. 6

(i) Find $\frac{dy}{dx}$ in terms of y .

Hence find the exact gradient of the curve $\sin 2y = x - 1$ at the point P. [4]

The part of the curve shown is the image of the curve $y = \arcsin x$ under a sequence of two geometrical transformations.

(ii) Find y in terms of x for the curve $\sin 2y = x - 1$.

Hence describe fully the sequence of transformations. [4]

7 You are given that n is a positive integer.

By expressing $x^{2n} - 1$ as a product of two factors, prove that $2^{2n} - 1$ is divisible by 3. [4]

Section B (36 marks)

8 Fig. 8 shows the curve $y = \frac{x}{\sqrt{x+4}}$ and the line $x = 5$. The curve has an asymptote l .

The tangent to the curve at the origin O crosses the line l at P and the line $x = 5$ at Q .

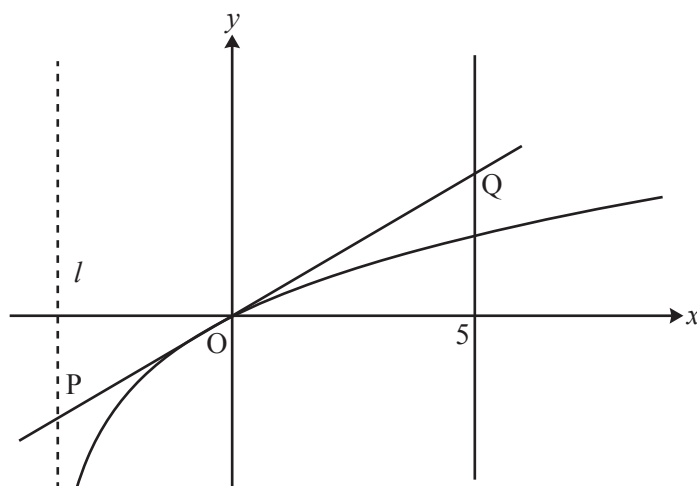


Fig. 8

(i) Show that for this curve $\frac{dy}{dx} = \frac{x+8}{2(x+4)^{\frac{3}{2}}}$. [5]

(ii) Find the coordinates of the point P. [4]

(iii) Using integration by substitution, find the exact area of the region enclosed by the curve, the tangent OQ and the line $x = 5$. [9]

- 9 Fig. 9 shows the curve $y = f(x)$, where $f(x) = e^{2x} + k e^{-2x}$ and k is a constant greater than 1.

The curve crosses the y -axis at P and has a turning point Q.

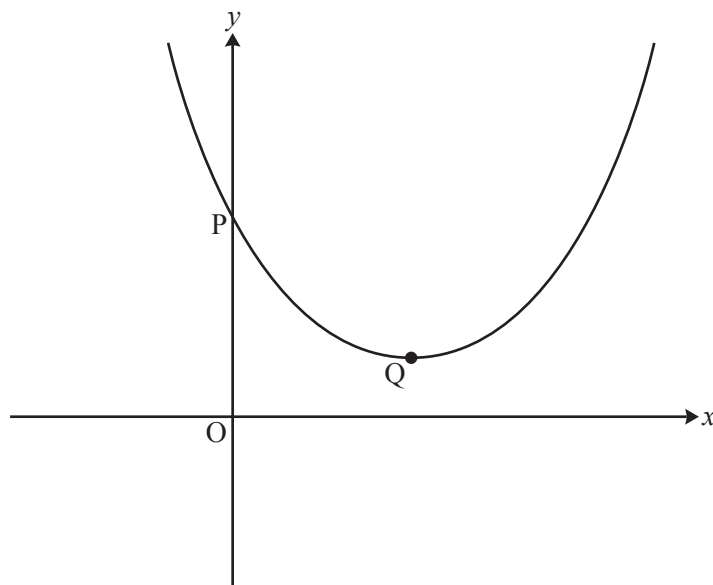


Fig. 9

- (i) Find the y -coordinate of P in terms of k . [1]
- (ii) Show that the x -coordinate of Q is $\frac{1}{4} \ln k$, and find the y -coordinate in its simplest form. [5]
- (iii) Find, in terms of k , the area of the region enclosed by the curve, the x -axis, the y -axis and the line $x = \frac{1}{2} \ln k$. Give your answer in the form $ak + b$. [4]

The function $g(x)$ is defined by $g(x) = f(x + \frac{1}{4} \ln k)$.

- (iv) (A) Show that $g(x) = \sqrt{k} (e^{2x} + e^{-2x})$. [3]
- (B) Hence show that $g(x)$ is an even function. [2]
- (C) Deduce, with reasons, a geometrical property of the curve $y = f(x)$. [3]

END OF QUESTION PAPER

OCR
Oxford Cambridge and RSA

Copyright Information

OCR is committed to seeking permission to reproduce all third-party content that it uses in its assessment materials. OCR has attempted to identify and contact all copyright holders whose work is used in this paper. To avoid the issue of disclosure of answer-related information to candidates, all copyright acknowledgements are reproduced in the OCR Copyright Acknowledgements Booklet. This is produced for each series of examinations and is freely available to download from our public website (www.ocr.org.uk) after the live examination series. If OCR has unwittingly failed to correctly acknowledge or clear any third-party content in this assessment material, OCR will be happy to correct its mistake at the earliest possible opportunity.

For queries or further information please contact the Copyright Team, First Floor, 9 Hills Road, Cambridge CB2 1GE.

OCR is part of the Cambridge Assessment Group; Cambridge Assessment is the brand name of University of Cambridge Local Examinations Syndicate (UCLES), which is itself a department of the University of Cambridge.