

1. Differentiate with respect to x , giving your answer in its simplest form,

(a) $x^2 \ln(3x)$ (4)

(b) $\frac{\sin 4x}{x^3}$ (5)

$$a) \quad y = uv \quad \frac{dy}{dx} = vu' + uv' \quad \begin{array}{l} u = x^2 \quad v = \ln(3x) \\ u' = 2x \quad v' = \frac{3}{3x} = \frac{1}{x} \end{array}$$

$$\therefore \frac{dy}{dx} = 2x \ln(3x) + x$$

$$b) \quad y = \frac{u}{v} \quad \frac{dy}{dx} = \frac{vu' - uv'}{v^2} \quad \begin{array}{l} u = \sin 4x \quad v = x^3 \\ u' = 4 \cos 4x \quad v' = 3x^2 \end{array}$$

$$\therefore \frac{dy}{dx} = \frac{4x^3 \cos 4x - 3x^2 \sin 4x}{x^6} = \frac{4x \cos 4x - 3 \sin 4x}{x^4}$$

2.

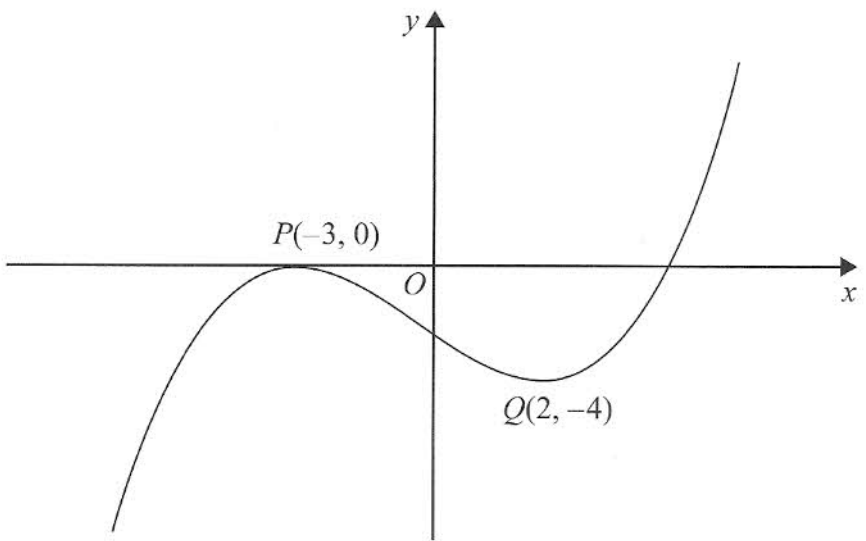


Figure 1

Figure 1 shows the graph of equation $y = f(x)$.

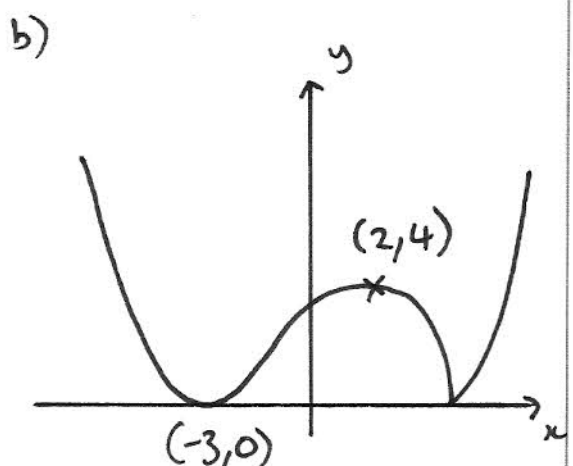
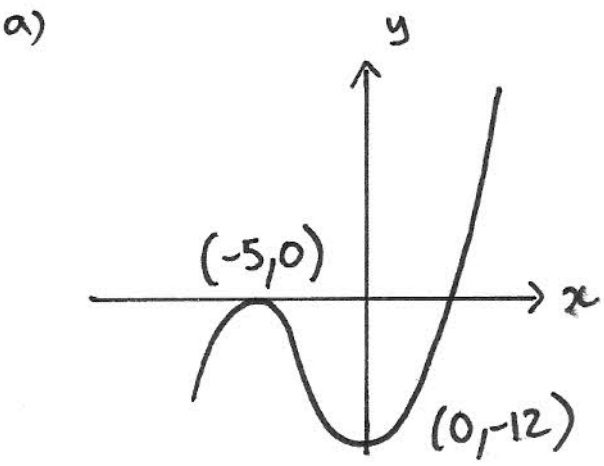
The points $P(-3, 0)$ and $Q(2, -4)$ are stationary points on the graph.

Sketch, on separate diagrams, the graphs of

(a) $y = 3f(x+2)$ $\begin{matrix} \updownarrow y \times 3 \\ \leftarrow x - 2 \end{matrix}$ (3)

(b) $y = |f(x)|$ $\begin{matrix} \curvearrowright \text{bounce} \\ \rightarrow x \end{matrix}$ (3)

On each diagram, show the coordinates of any stationary points.



3. The area, $A \text{ mm}^2$, of a bacterial culture growing in milk, t hours after midday, is given by BMT

$$A = 20e^{1.5t}, \quad t \geq 0$$

(a) Write down the area of the culture at midday.

$$t = 0 \Rightarrow \underline{A = 20} \quad (1)$$

(b) Find the time at which the area of the culture is twice its area at midday. Give your answer to the nearest minute. (5)

$$\begin{aligned} \text{b) } 2 \times 20 &= 20e^{1.5t} \Rightarrow \ln 2 = 1.5t \Rightarrow t = 0.462\dots \\ &\therefore \underline{12:28} \end{aligned}$$

4. The point P is the point on the curve $x = 2 \tan\left(y + \frac{\pi}{12}\right)$ with y -coordinate $\frac{\pi}{4}$.

Find an equation of the normal to the curve at P .

(7)

$$x_1 = 2 \tan\left(\frac{\pi}{4} + \frac{\pi}{12}\right) = 2 \tan\left(\frac{\pi}{3}\right) = 2\sqrt{3}$$

$$\frac{dx}{dy} = 2 \sec^2\left(y + \frac{\pi}{12}\right) \Rightarrow \frac{dy}{dx} = \frac{1}{2} \cos^2\left(y + \frac{\pi}{12}\right)$$

$$\begin{aligned} \text{at } P \quad M_t &= \frac{1}{2} \cos^2\left(\frac{\pi}{4} + \frac{\pi}{12}\right) = \frac{1}{2} \left[\cos\left(\frac{\pi}{3}\right)\right]^2 = \frac{1}{2} \times \left(\frac{1}{2}\right)^2 \\ &= \frac{1}{8} \end{aligned}$$

$$\therefore M_n = -8$$

$$\therefore y - y_1 = m(x - x_1) \Rightarrow y - \frac{\pi}{4} = -8(x - 2\sqrt{3})$$

5. Solve, for $0 \leq \theta \leq 180^\circ$,

$$2\cot^2 3\theta = 7\operatorname{cosec} 3\theta - 5$$

Give your answers in degrees to 1 decimal place.

(10)

$$\frac{\sin^2}{\sin^2} + \frac{\cos^2}{\sin^2} = \frac{1}{\sin^2} \Rightarrow 1 + \cot^2 = \operatorname{cosec}^2$$

$$\Rightarrow \cot^2 = \operatorname{cosec}^2 - 1$$

$$\Rightarrow 2\operatorname{cosec}^2 3\theta - 2 = 7\operatorname{cosec} 3\theta - 5$$

$$\Rightarrow 2\operatorname{cosec}^2 3\theta - 7\operatorname{cosec} 3\theta + 3 = 0$$

$$\Rightarrow (2\operatorname{cosec} 3\theta - 1)(\operatorname{cosec} 3\theta - 3) = 0$$

$$\operatorname{cosec} 3\theta = \frac{1}{2}$$

$$\operatorname{cosec} 3\theta = 3$$

$$\sin 3\theta = 2$$

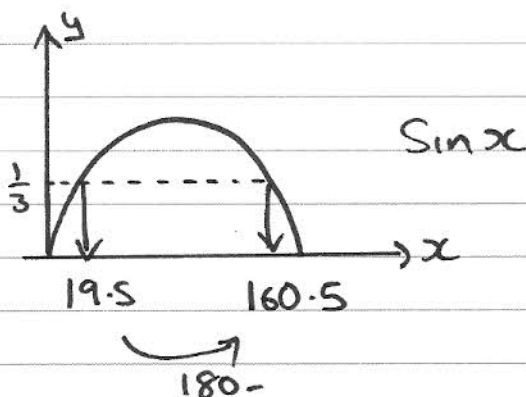
$$\sin 3\theta = \frac{1}{3}$$

no solutions!

$$\Rightarrow 3\theta = \sin^{-1}\left(\frac{1}{3}\right)$$

$$\Rightarrow 3\theta = 19.47\dots, 160.53\dots, 379.47\dots, 520.53\dots$$

$$\therefore \theta = 6.5^\circ, 53.5^\circ, 126.5^\circ, 173.5^\circ$$



6.

$$f(x) = x^2 - 3x + 2 \cos\left(\frac{1}{2}x\right), \quad 0 \leq x \leq \pi$$

(a) Show that the equation $f(x) = 0$ has a solution in the interval $0.8 < x < 0.9$

(2)

The curve with equation $y = f(x)$ has a minimum point P .

(b) Show that the x -coordinate of P is the solution of the equation

$$x = \frac{3 + \sin\left(\frac{1}{2}x\right)}{2}$$

(4)

(c) Using the iteration formula

$$x_{n+1} = \frac{3 + \sin\left(\frac{1}{2}x_n\right)}{2}, \quad x_0 = 2$$

find the values of x_1 , x_2 and x_3 , giving your answers to 3 decimal places.

(3)

(d) By choosing a suitable interval, show that the x -coordinate of P is 1.9078 correct to 4 decimal places.

(3)

$$\begin{array}{l} \text{a) } f(0.8) = 0.082 \\ f(0.9) = -0.089 \end{array} \left. \vphantom{\begin{array}{l} f(0.8) = 0.082 \\ f(0.9) = -0.089 \end{array}} \right\} \begin{array}{l} \text{change of sign} \Rightarrow \text{root lies} \\ \text{between } 0.8 \text{ and } 0.9 \end{array}$$

$$\begin{array}{l} \text{b) min point} \Rightarrow f'(x) = 0 \quad \therefore 2x - 3 - \sin\left(\frac{1}{2}x\right) = 0 \\ \Rightarrow 2x = 3 + \sin\left(\frac{1}{2}x\right) \quad \Rightarrow x = \frac{3 + \sin\left(\frac{1}{2}x\right)}{2} \end{array}$$

$$\text{c) } x_0 = 2; \quad x_1 = 1.921; \quad x_2 = 1.910; \quad x_3 = 1.908$$

$$\begin{array}{l} \text{d) } f'(1.90775) = -0.00016 \\ f'(1.90785) = 0.0000077 \end{array}$$

change of sign $\Rightarrow f'(x) = 0$ when x is between 1.90775 and 1.90785

$$\therefore x = 1.9078 \text{ (4dp)}$$

7. The function f is defined by

$$f: x \mapsto \frac{3(x+1)}{2x^2+7x-4} - \frac{1}{x+4}$$

$$x \in \mathbb{R}, x > \frac{1}{2}$$

(a) Show that $f(x) = \frac{1}{2x-1}$ (4)

(b) Find $f^{-1}(x)$ (3)

(c) Find the domain of f^{-1} (1)

$$g(x) = \ln(x+1)$$

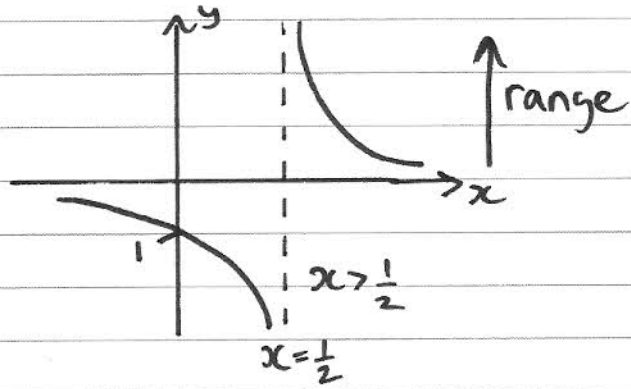
(d) Find the solution of $fg(x) = \frac{1}{7}$, giving your answer in terms of e. (4)

$$\begin{aligned}
 \text{a) } \frac{3(x+1)}{(2x-1)(x+4)} - \frac{1}{(x+4)(2x-1)} &= \frac{3x+3-2x+1}{(2x-1)(x+4)} \\
 &= \frac{x+4}{(2x-1)(x+4)} = \frac{1}{2x-1} \quad \#
 \end{aligned}$$

$$\begin{aligned}
 \text{b) } x = \frac{1}{2y-1} &\Rightarrow 2y-1 = \frac{1}{x} \Rightarrow 2y = \frac{1}{x} + 1 \Rightarrow y = \frac{1}{2x} + \frac{1}{2}
 \end{aligned}$$

$f^{-1}(x) =$

c) domain of $f^{-1}(x) =$ range of $f(x)$



$$\begin{aligned}
 y &= \frac{1}{2x-1} \quad x \neq \frac{1}{2} \quad \text{asymptote} \\
 x=0 &\Rightarrow y=-1 \quad (0, -1)
 \end{aligned}$$

\therefore range of $f(x) \quad y > 0$
 \therefore domain of $f^{-1}(x) \quad x > 0$

$$d) fg(x) = f[\ln(x+1)] = \frac{1}{2\ln(x+1)-1} = \frac{1}{7}$$

$$\therefore 2\ln(x+1)-1=7 \Rightarrow 2\ln(x+1)=8 \Rightarrow \ln(x+1)=4$$

$$\Rightarrow x+1 = e^4 \Rightarrow x = \underline{-1+e^4}$$

8. (a) Starting from the formulae for $\sin(A+B)$ and $\cos(A+B)$, prove that

$$\tan(A+B) = \frac{\tan A + \tan B}{1 - \tan A \tan B} \quad (4)$$

- (b) Deduce that

$$\tan\left(\theta + \frac{\pi}{6}\right) = \frac{1 + \sqrt{3} \tan \theta}{\sqrt{3} - \tan \theta} \quad (3)$$

- (c) Hence, or otherwise, solve, for $0 \leq \theta \leq \pi$,

$$1 + \sqrt{3} \tan \theta = (\sqrt{3} - \tan \theta) \tan(\pi - \theta)$$

Give your answers as multiples of π .

(6)

$$a) \tan(A+B) = \frac{\sin(A+B)}{\cos(A+B)} = \frac{\sin A \cos B + \cos A \sin B}{\cos A \cos B - \sin A \sin B}$$

$$= \frac{\cancel{\sin A} \cancel{\cos B}}{\cancel{\cos A} \cancel{\cos B}} + \frac{\cancel{\cos A} \cancel{\sin B}}{\cancel{\cos A} \cancel{\cos B}} \Rightarrow \frac{\tan A + \tan B}{\frac{\cancel{\cos A} \cancel{\cos B}}{\cancel{\cos A} \cancel{\cos B}} - \frac{\cancel{\sin A} \cancel{\sin B}}{\cancel{\cos A} \cancel{\cos B}}} = \frac{\tan A + \tan B}{1 - \tan A \tan B} \quad \#$$

$$b) \tan\left(\theta + \frac{\pi}{6}\right) = \frac{\tan \theta + \tan\left(\frac{\pi}{6}\right)}{1 - \tan \theta \tan\left(\frac{\pi}{6}\right)} = \frac{\tan \theta + \frac{1}{\sqrt{3}} \quad (\times \sqrt{3})}{1 - \frac{1}{\sqrt{3}} \tan \theta \quad (\times \sqrt{3})}$$

$$= \frac{\sqrt{3} \tan \theta + 1}{\sqrt{3} - \tan \theta} \quad \#$$

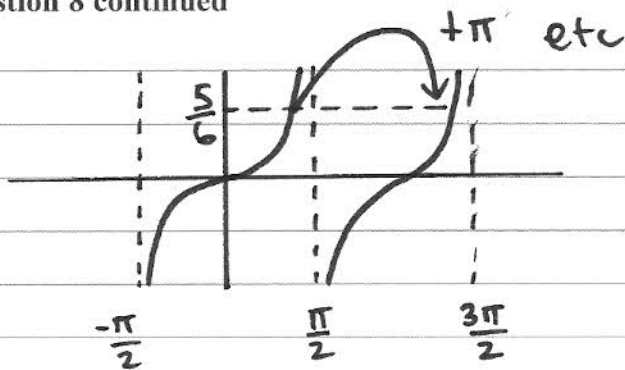
$$c) 1 + \sqrt{3} \tan \theta = (\sqrt{3} - \tan \theta) \tan(\pi - \theta)$$

$$\Rightarrow \tan\left(\theta + \frac{\pi}{6}\right) = \frac{(\sqrt{3} - \cancel{\tan \theta}) \tan(\pi - \theta)}{\sqrt{3} - \cancel{\tan \theta}}$$

$$\therefore \tan\left(\theta + \frac{\pi}{6}\right) = \tan(\pi - \theta) \Rightarrow \theta + \frac{\pi}{6} = \pi - \theta$$

$$\Rightarrow 2\theta = \frac{5}{6}\pi$$

Question 8 continued



$$2\theta = \frac{5\pi}{6}, \frac{11\pi}{6}, \frac{17\pi}{6}, \dots$$

$$\theta = \frac{5\pi}{12}, \frac{11\pi}{12}$$

alt

$$\tan \pi = 0$$

$$\tan(\pi - \theta) = \frac{\tan \pi - \tan \theta}{1 + \tan(\pi) \tan \theta} = \frac{-\tan \theta}{1} = -\tan \theta$$

$$\Rightarrow 1 + \sqrt{3} \tan \theta = (\sqrt{3} - \tan \theta) \times -\tan \theta$$

$$\Rightarrow 1 + \sqrt{3} \tan \theta = -\sqrt{3} \tan \theta + \tan^2 \theta$$

$$\Rightarrow \tan^2 \theta - 2\sqrt{3} \tan \theta - 1 = 0$$

$$\Rightarrow \tan \theta = \frac{2\sqrt{3} \pm \sqrt{(2\sqrt{3})^2 - 4(-1)}}{2} = \frac{2\sqrt{3} \pm 4}{2} = \sqrt{3} \pm 2$$

$$\theta = \tan^{-1}(\sqrt{3} + 2) \Rightarrow \theta = \frac{5\pi}{12}$$

$$\theta = \tan^{-1}(\sqrt{3} - 2) \Rightarrow \theta = -\frac{1}{12}\pi \xrightarrow{+\pi} \frac{11}{12}\pi$$

$$\therefore \theta = \frac{5\pi}{12}, \frac{11\pi}{12}$$