

C3 June 13 (replaced paper) uu

1. Given that

$$\frac{3x^4 - 2x^3 - 5x^2 - 4}{x^2 - 4} \equiv ax^2 + bx + c + \frac{dx + e}{x^2 - 4}, \quad x \neq \pm 2$$

find the values of the constants  $a$ ,  $b$ ,  $c$ ,  $d$  and  $e$ .

(4)

$x$	$3x^2$	$-2x$	$+7$	Rem
$x^2$	$3x^4$	$-2x^3$	$+7x^2$	$-8x$
$-4$	$-12x^2$	$+8x$	$-28$	$+24$

$$3x^2 - 2x + 7 - \frac{8x + 24}{x^2 - 4}$$

2. Given that

$$f(x) = \ln x, \quad x > 0$$

sketch on separate axes the graphs of

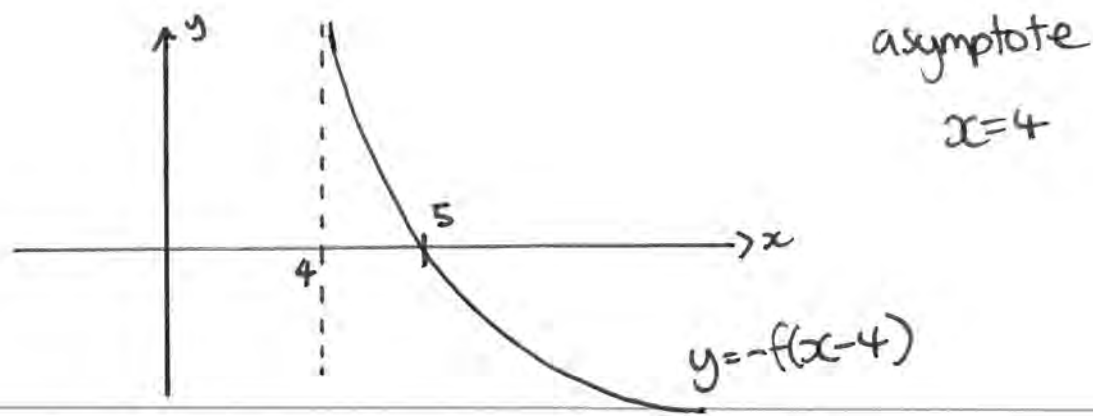
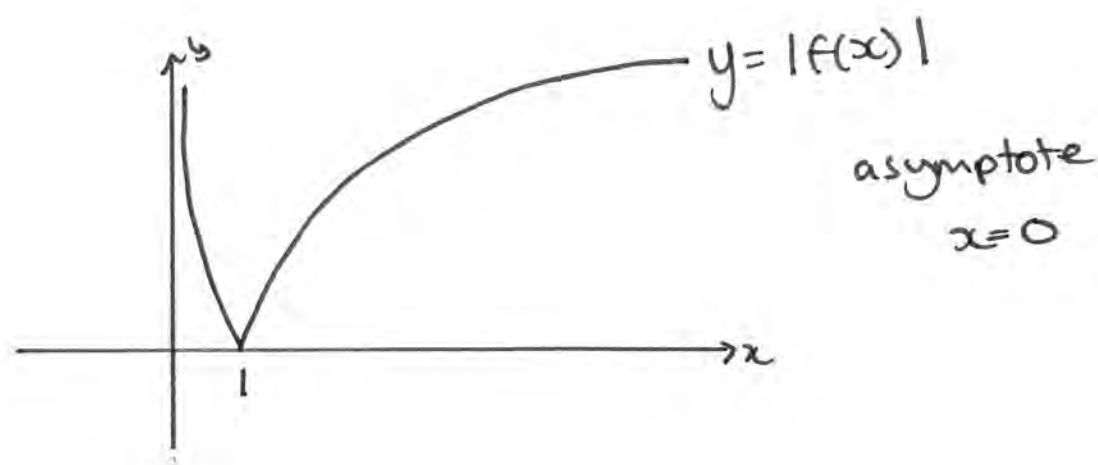
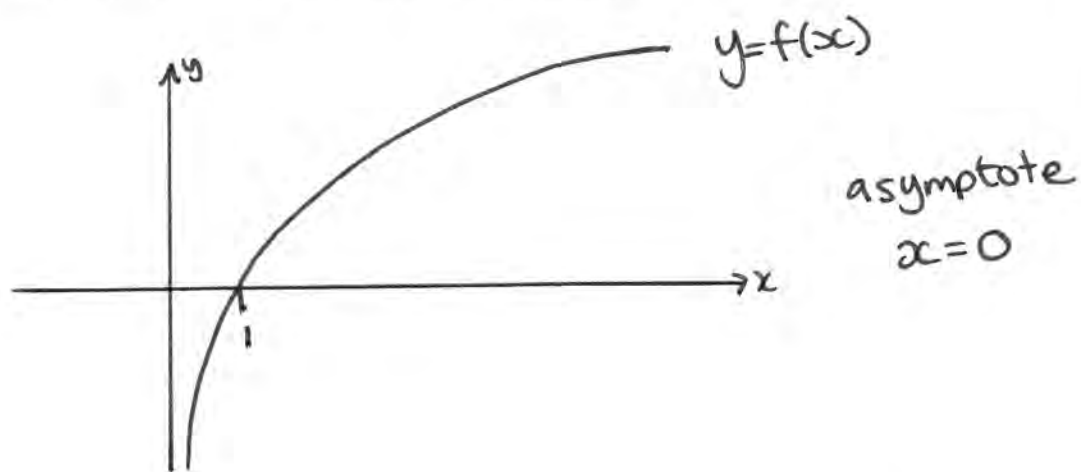
(i)  $y = f(x)$ ,

(ii)  $y = |f(x)|$ ,

(iii)  $y = -f(x - 4)$ .

Show, on each diagram, the point where the graph meets or crosses the  $x$ -axis. In each case, state the equation of the asymptote.

(7)



3. Given that

$$2 \cos(x + 50)^\circ = \sin(x + 40)^\circ$$

(a) Show, without using a calculator, that

$$\tan x^\circ = \frac{1}{3} \tan 40^\circ \quad (4)$$

(b) Hence solve, for  $0 \leq \theta < 360$ ,

$$2 \cos(2\theta + 50)^\circ = \sin(2\theta + 40)^\circ$$

giving your answers to 1 decimal place.

(4)

$$2 \cos x \cos 50 - 2 \sin x \sin 50 = \sin x \cos 40 + \cos x \sin 40$$

$$(\div \cos x) \quad 2 \cos 50 - 2 \tan x \sin 50 = \tan x \cos 40 + \sin 40$$

$$(\cos 50 = \sin 40) \quad (\sin 50 = \cos 40)$$

$$\Rightarrow 2 \sin 40 - 2 \tan x \cos 40 = \tan x \cos 40 + \sin 40$$

$$(\div \cos 40)$$

$$\Rightarrow 2 \tan 40 - 2 \tan x = \tan x + \tan 40$$

$$\Rightarrow \tan 40 = 3 \tan x \quad \therefore \tan x = \frac{1}{3} \tan 40$$

#

$$b) \tan x \Rightarrow \tan 2\theta = 0.2796 \dots$$

$$2\theta = 15.63, 195.63, 375.63, 555.63$$

$$\div 2 \Rightarrow \theta = \underline{7.8}, \underline{97.8}, \underline{187.8}, \underline{277.8}$$

4.

$$f(x) = 25x^2e^{2x} - 16, \quad x \in \mathbb{R}$$

(a) Using calculus, find the exact coordinates of the turning points on the curve with equation  $y = f(x)$ .

(5)

(b) Show that the equation  $f(x) = 0$  can be written as  $x = \pm \frac{4}{5} e^{-x}$

(1)

The equation  $f(x) = 0$  has a root  $\alpha$ , where  $\alpha = 0.5$  to 1 decimal place.

(c) Starting with  $x_0 = 0.5$ , use the iteration formula

$$x_{n+1} = \frac{4}{5} e^{-x_n}$$

to calculate the values of  $x_1$ ,  $x_2$  and  $x_3$ , giving your answers to 3 decimal places.

(3)

(d) Give an accurate estimate for  $\alpha$  to 2 decimal places, and justify your answer.

(2)

$$\begin{aligned} a) \quad u &= 25x^2 & v &= e^{2x} & \Rightarrow f'(x) &= 50xe^{2x} + 50x^2e^{2x} \\ u' &= 50x & v' &= 2e^{2x} \end{aligned}$$

$$\begin{aligned} \text{at TP } f'(x) &= 0 \Rightarrow 50e^{2x}(x+x^2) = 0 \\ &\Rightarrow 50xe^{2x}(1+x) = 0 \end{aligned}$$

$$\begin{aligned} 50xe^{2x} &= 0 \quad \text{if } x=0 \Rightarrow y = -16 \\ (1+x) &= 0 \quad \text{if } x=-1 \Rightarrow y = 25e^{-2} - 16 \end{aligned}$$

$$(0, -16); (-1, 25e^{-2} - 16)$$

$$b) 25x^2 e^{2x} - 16 = 0 \Rightarrow 25x^2 e^{2x} = 16$$

$$\Rightarrow 25x^2 = \frac{16}{(e^x)^2} \quad (\sqrt{\quad}) \Rightarrow 5x = \pm \frac{4}{e^x}$$

$$\Rightarrow 5x = \pm 4e^{-x} \Rightarrow x = \pm \frac{4}{5} e^{-x} \quad \#$$

$$c) x_0 = 0.5$$

$$x_1 = 0.485$$

$$x_2 = 0.492$$

$$x_3 = 0.489$$

$$\rightarrow x_n = 0.49 \dots$$

$$d) f(0.485) = -0.49 < 0$$

$$f(0.495) = +0.49 > 0$$

$\therefore$  by sign change rule

$$x = 0.49 \text{ (2dp).}$$

5. Given that

$$x = \sec^2 3y, \quad 0 < y < \frac{\pi}{6}$$

(a) find  $\frac{dx}{dy}$  in terms of  $y$ .

(2)

(b) Hence show that

$$\frac{dy}{dx} = \frac{1}{6x(x-1)^{\frac{1}{2}}}$$

(4)

(c) Find an expression for  $\frac{d^2y}{dx^2}$  in terms of  $x$ . Give your answer in its simplest form.

(4)

$$a) x = (\sec 3y)^2$$

$$\Rightarrow \frac{dx}{dy} = 2(\sec 3y)' \times 3 \sec 3y \tan 3y$$

$$\Rightarrow \frac{dx}{dy} = 6 \sec^2 3y \tan 3y$$

$$b) \frac{dy}{dx} = \frac{1}{6 \sec^2 3y \tan 3y}$$

$$x = \sec^2 3y$$

$$x = \tan^2 3y + 1$$

$$x - 1 = \tan^2 3y$$

$$\sqrt{x-1} = \tan 3y$$

$$\therefore \frac{dy}{dx} = \frac{1}{6x\sqrt{x-1}} \quad \#$$

$$\frac{dy}{dx} = \frac{x^{-1}}{6(x-1)^{\frac{1}{2}}} \quad u = x^{-1} \quad v = (x-1)^{\frac{1}{2}} \times 6$$

$$u' = -1x^{-2} \quad v' = 3(x-1)^{-\frac{1}{2}}$$

$$\therefore \frac{d^2y}{dx^2} = \frac{-6(x-1)^{\frac{1}{2}} - \frac{3}{x(x-1)^{\frac{1}{2}}}}{36(x-1)}$$

$$\Rightarrow \frac{\frac{-6(x-1)^{\frac{1}{2}}(x-1)^{\frac{1}{2}} - 3x}{x^2(x-1)^{\frac{1}{2}}}}{36(x-1)}$$

$$\Rightarrow \frac{-6(x-1) - 3x}{36x^2(x-1)^{\frac{3}{2}}} = \frac{6 - 9x}{36x^2(x-1)^{\frac{3}{2}}}$$

$$\Rightarrow \frac{2 - 3x}{12x^2(x-1)^{\frac{3}{2}}} \quad \#$$



6. Find algebraically the exact solutions to the equations

$$(a) \ln(4 - 2x) + \ln(9 - 3x) = 2\ln(x + 1), \quad -1 < x < 2 \quad (5)$$

$$(b) 2^x e^{3x+1} = 10$$

Give your answer to (b) in the form  $\frac{a + \ln b}{c + \ln d}$  where  $a, b, c$  and  $d$  are integers. (5)

$$a) \ln[(4-2x)(9-3x)] = \ln[(x+1)^2]$$

$$\Rightarrow 6x^2 - 30x + 36 = x^2 + 2x + 1$$

$$\Rightarrow 5x^2 - 32x + 35 = 0 \Rightarrow (5x-7)(x-5) = 0$$

$$\therefore x = \frac{7}{5} \quad x = 5$$

$$b) \ln(2^x e^{3x+1}) = \ln 10$$

$$\Rightarrow \ln 2^x + \ln e^{3x+1} = \ln 10$$

$$\Rightarrow x \ln 2 + 3x + 1 = \ln 10$$

$$\Rightarrow x(3 + \ln 2) = -1 + \ln 10$$

$$\therefore x = \frac{-1 + \ln 10}{3 + \ln 2}$$

7. The function  $f$  has domain  $-2 \leq x \leq 6$  and is linear from  $(-2, 10)$  to  $(2, 0)$  and from  $(2, 0)$  to  $(6, 4)$ . A sketch of the graph of  $y = f(x)$  is shown in Figure 1.

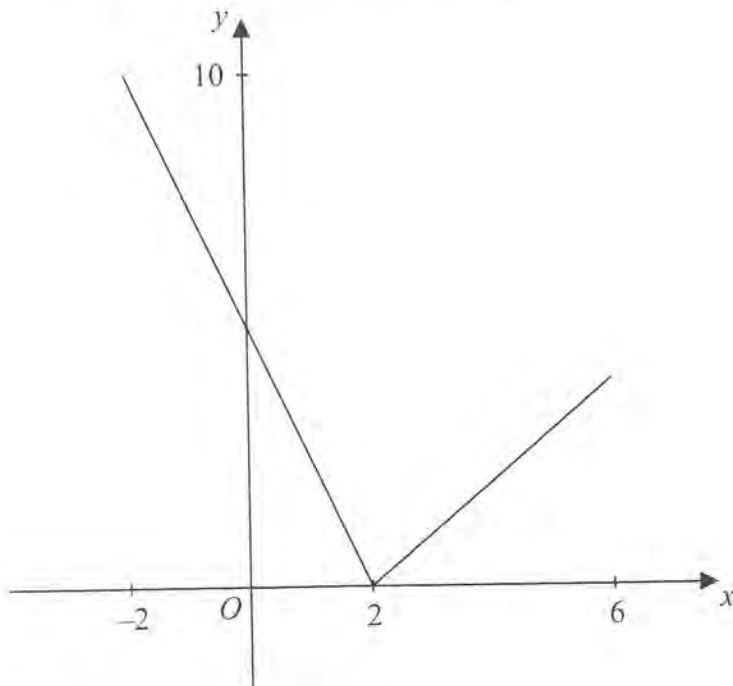


Figure 1

(a) Write down the range of  $f$ . (1)

(b) Find  $ff(0)$ . (2)

The function  $g$  is defined by

$$g : x \rightarrow \frac{4 + 3x}{5 - x}, \quad x \in \mathbb{R}, \quad x \neq 5$$

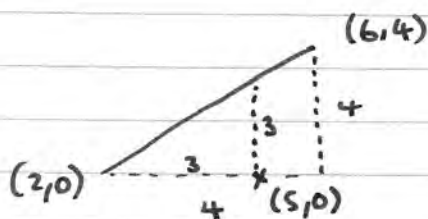
(c) Find  $g^{-1}(x)$  (3)

(d) Solve the equation  $gf(x) = 16$  (5)

a)  $0 \leq y \leq 10$

b)  $f(0) = 5$

$f(f(0)) = f(5) = 3$



c)  $x = \frac{4+3y}{5-y} \Rightarrow 5x - xy = 4 + 3y$

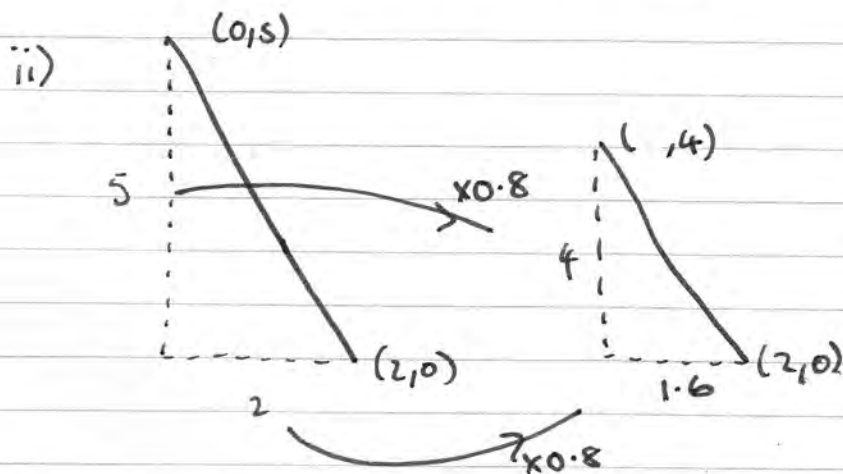
$\Rightarrow 3y + xy = 5x - 4 \Rightarrow y(3+x) = 5x - 4$

$\therefore y = g^{-1}(x) = \frac{5x-4}{3+x}$

d)  $g(f(x)) = 16 \Rightarrow \frac{4+3f(x)}{5-f(x)} = 16$

$\Rightarrow 4 + 3f(x) = 80 - 16f(x)$

$\Rightarrow 19f(x) = 76 \Rightarrow f(x) = 4 \Rightarrow \underline{x=6}$



$\therefore \underline{x=0.4}$

8.

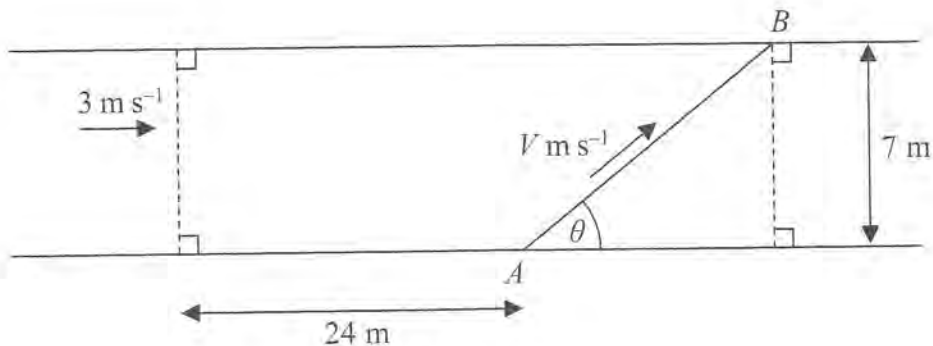


Figure 2

Kate crosses a road, of constant width 7 m, in order to take a photograph of a marathon runner, John, approaching at  $3 \text{ m s}^{-1}$ .

Kate is 24 m ahead of John when she starts to cross the road from the fixed point A.

John passes her as she reaches the other side of the road at a variable point B, as shown in Figure 2.

Kate's speed is  $V \text{ m s}^{-1}$  and she moves in a straight line, which makes an angle  $\theta$ ,  $0 < \theta < 150^\circ$ , with the edge of the road, as shown in Figure 2.

You may assume that  $V$  is given by the formula

$$V = \frac{21}{24 \sin \theta + 7 \cos \theta}, \quad 0 < \theta < 150^\circ$$

- (a) Express  $24 \sin \theta + 7 \cos \theta$  in the form  $R \cos(\theta - \alpha)$ , where  $R$  and  $\alpha$  are constants and where  $R > 0$  and  $0 < \alpha < 90^\circ$ , giving the value of  $\alpha$  to 2 decimal places.

(3)

Given that  $\theta$  varies,

- (b) find the minimum value of  $V$ .

(2)

Given that Kate's speed has the value found in part (b),

- (c) find the distance  $AB$ .

(3)

Given instead that Kate's speed is  $1.68 \text{ m s}^{-1}$ ,

- (d) find the two possible values of the angle  $\theta$ , given that  $0 < \theta < 150^\circ$ .

(6)

$$a) R \cos(\theta - \alpha) = R \cos\theta \cos\alpha + R \sin\theta \sin\alpha$$

$$7 \cos\theta + 24 \sin\theta$$

$$\therefore \frac{R \sin\alpha = 24}{R \cos\alpha = 7} \Rightarrow \tan\alpha = \frac{24}{7} \Rightarrow \alpha = 73.74$$


$$R = 25$$

$$= 25 \cos(\theta - 73.74)$$

$$b) V_{\min} = \frac{21}{\max(25 \cos(\theta - 73.74))} = \frac{21}{25}$$

c)  $25 \cos(\theta - 73.74)$  is max when

$$\theta - 73.74 = 0 \Rightarrow \theta = 73.74$$



$$\sin 73.74 = \frac{7}{AB}$$

$$\therefore AB = \frac{7 \cdot 25}{24} = 7.29$$

$$d) \frac{21}{25 \cos(\theta - 73.74)} = 1.68$$

$$\Rightarrow \cos(\theta - 73.74) = \frac{21}{25 \times 1.68} = 0.5$$

$$\therefore \theta - 73.74 = 60, 300, -60, \dots$$

$$+ 73.74$$

$$\therefore \theta = \underline{13.74}, \underline{133.74}$$