

Chapter review 2

- 1 a QR is the diameter of the circle so the centre, C , is the midpoint of QR

$$\text{Midpoint} = \left(\frac{11 + (-5)}{2}, \frac{12 + 0}{2} \right) = (3, 6)$$

$$C(3, 6)$$

$$\begin{aligned} \text{b Radius} &= \frac{1}{2} \text{ of diameter} = \frac{1}{2} \text{ of } QR = \frac{1}{2} \text{ of } \sqrt{(x_2 - x_1)^2 + (y_2 - y_1)^2} \\ &= \frac{1}{2} \text{ of } \sqrt{(-5 - 11)^2 + (0 - 12)^2} \\ &= \frac{1}{2} \text{ of } \sqrt{400} \\ &= \frac{1}{2} \text{ of } 20 = 10 \text{ units} \end{aligned}$$

- c Circle with centre $(3, 6)$ and radius 10:

$$(x - 3)^2 + (y - 6)^2 = 100$$

- d $P(13, 6)$ lies on the circle if P satisfies the equation, so substitute $x = 13$ and $y = 6$ into the equation of the circle:

$$(13 - 3)^2 + (6 - 6)^2 = 100 + 0 = 100$$

Therefore, P lies on the circle.

- 2 The distance between $(0, 0)$ and $(5, -2)$ is

$$\sqrt{(x_2 - x_1)^2 + (y_2 - y_1)^2} = \sqrt{(5 - 0)^2 + (-2 - 0)^2} = \sqrt{5^2 + (-2)^2} = \sqrt{25 + 4} = \sqrt{29}$$

The radius of the circle is $\sqrt{30}$.

As $\sqrt{29} < \sqrt{30}$ $(0, 0)$ lies inside the circle.

- 3 a $x^2 + 3x + y^2 + 6y = 3x - 2y - 7$
 $x^2 + y^2 + 8y = -7$

Completing the square gives:

$$(x - 0)^2 + (y + 4)^2 - 16 = -7$$

$$(x - 0)^2 + (y + 4)^2 = 9$$

Centre of the circle is $(0, -4)$ and the radius is 3.

- b The circle intersects the y -axis at $x = 0$

$$(0 - 0)^2 + (y + 4)^2 = 9$$

$$y^2 + 8y + 16 = 9$$

$$y^2 + 8y + 7 = 0$$

$$(y + 1)(y + 7) = 0$$

$$y = -1 \text{ or } y = -7$$

$$(0, -1) \text{ and } (0, -7)$$

- c At the x -axis, $y = 0$

$$x^2 + 0^2 + 8(0) = -7$$

$$x^2 = -7$$

There are no real solutions, so the circle does not intersect the x -axis.

4 a The centre of $(x-8)^2 + (y-8)^2 = 117$ is $(8, 8)$.

Substitute $(8, 8)$ into $(x+1)^2 + (y-3)^2 = 106$

$$(8+1)^2 + (8-3)^2 = 9^2 + 5^2 = 81 + 25 = 106 \quad \checkmark$$

So $(8, 8)$ lies on the circle $(x+1)^2 + (y-3)^2 = 106$.

b As Q is the centre of the circle $(x+1)^2 + (y-3)^2 = 106$ and P lies on this circle, the length PQ must equal the radius.

$$\text{So } PQ = \sqrt{106}$$

Alternative method: Work out the distance between $P(8, 8)$ and $Q(-1, 3)$ using the distance formula.

5 a Substitute $(-1, 0)$ into $x^2 + y^2 = 1$

$$(-1)^2 + (0)^2 = 1 + 0 = 1 \quad \checkmark$$

So $(-1, 0)$ is on the circle.

Substitute $\left(\frac{1}{2}, \frac{\sqrt{3}}{2}\right)$ into $x^2 + y^2 = 1$

$$\left(\frac{1}{2}\right)^2 + \left(\frac{\sqrt{3}}{2}\right)^2 = \frac{1}{4} + \frac{3}{4} = 1 \quad \checkmark$$

So $\left(\frac{1}{2}, \frac{\sqrt{3}}{2}\right)$ is on the circle.

Substitute $\left(\frac{1}{2}, -\frac{\sqrt{3}}{2}\right)$ into $x^2 + y^2 = 1$

$$\left(\frac{1}{2}\right)^2 + \left(-\frac{\sqrt{3}}{2}\right)^2 = \frac{1}{4} + \frac{3}{4} = 1 \quad \checkmark$$

So $\left(\frac{1}{2}, -\frac{\sqrt{3}}{2}\right)$ is on the circle.

5 b The distance between $(-1, 0)$ and $\left(\frac{1}{2}, \frac{\sqrt{3}}{2}\right)$ is

$$\begin{aligned}\sqrt{(x_2 - x_1)^2 + (y_2 - y_1)^2} &= \sqrt{\left(\frac{1}{2} - (-1)\right)^2 + \left(\frac{\sqrt{3}}{2} - 0\right)^2} \\ &= \sqrt{\left(\frac{1}{2} + 1\right)^2 + \left(\frac{\sqrt{3}}{2}\right)^2} \\ &= \sqrt{\left(\frac{3}{2}\right)^2 + \left(\frac{\sqrt{3}}{2}\right)^2} \\ &= \sqrt{\frac{9}{4} + \frac{3}{4}} \\ &= \sqrt{\frac{12}{4}} \\ &= \sqrt{3}\end{aligned}$$

The distance between $(-1, 0)$ and $\left(\frac{1}{2}, -\frac{\sqrt{3}}{2}\right)$ is

$$\begin{aligned}\sqrt{(x_2 - x_1)^2 + (y_2 - y_1)^2} &= \sqrt{\left(\frac{1}{2} - (-1)\right)^2 + \left(-\frac{\sqrt{3}}{2} - 0\right)^2} \\ &= \sqrt{\left(\frac{1}{2} + 1\right)^2 + \left(-\frac{\sqrt{3}}{2}\right)^2} \\ &= \sqrt{\left(\frac{3}{2}\right)^2 + \left(-\frac{\sqrt{3}}{2}\right)^2} \\ &= \sqrt{\frac{9}{4} + \frac{3}{4}} \\ &= \sqrt{\frac{12}{4}} \\ &= \sqrt{3}\end{aligned}$$

The distance between $\left(\frac{1}{2}, \frac{\sqrt{3}}{2}\right)$ and $\left(\frac{1}{2}, -\frac{\sqrt{3}}{2}\right)$ is

$$\begin{aligned}\sqrt{(x_2 - x_1)^2 + (y_2 - y_1)^2} &= \sqrt{\left(\frac{1}{2} - \frac{1}{2}\right)^2 + \left(-\frac{\sqrt{3}}{2} - \frac{\sqrt{3}}{2}\right)^2} \\ &= \sqrt{0^2 + (-\sqrt{3})^2} \\ &= \sqrt{0 + 3} \\ &= \sqrt{3}\end{aligned}$$

So AB , BC and AC all equal $\sqrt{3}$. $\triangle ABC$ is equilateral.

6 a $(x - k)^2 + (y - 3k)^2 = 13, (3, 0)$

Substitute $x = 3$ and $y = 0$ into the equation of the circle.

$$(3 - k)^2 + (0 - 3k)^2 = 13$$

$$9 - 6k + k^2 + 9k^2 - 13 = 0$$

$$10k^2 - 6k - 4 = 0$$

$$5k^2 - 3k - 2 = 0$$

$$(5k + 2)(k - 1) = 0$$

$$k = -\frac{2}{5} \text{ or } k = 1$$

b As $k > 0, k = 1$

Equation of the circle is $(x - 1)^2 + (y - 3)^2 = 13$

7 $x^2 + px + y^2 + 4y = 20, y = 3x - 9$

Substitute $y = 3x - 9$ into the equation $x^2 + px + y^2 + 4y = 20$

$$x^2 + px + (3x - 9)^2 + 4(3x - 9) = 20$$

$$x^2 + px + 9x^2 - 54x + 81 + 12x - 36 - 20 = 0$$

$$10x^2 + (p - 42)x + 25 = 0$$

There are no solutions, so using the discriminant $b^2 - 4ac < 0$:

$$(p - 42)^2 - 4(10)(25) < 0$$

$$(p - 42)^2 < 1000$$

$$p - 42 < \pm\sqrt{1000}$$

$$p < 42 \pm \sqrt{1000}$$

$$p < 42 \pm 10\sqrt{10}$$

$$42 - 10\sqrt{10} < p < 42 + 10\sqrt{10}$$

8 Substitute $x = 0$ into $y = 2x - 8$
 $y = 2(0) - 8$
 $y = -8$

Substitute $y = 0$ into $y = 2x - 8$
 $0 = 2x - 8$
 $2x = 8$
 $x = 4$

The line meets the coordinate axes at $(0, -8)$ and $(4, 0)$.

The coordinates of the centre of the circle are at the midpoint:

$$\left(\frac{x_1 + x_2}{2}, \frac{y_1 + y_2}{2} \right) = \left(\frac{0 + 4}{2}, \frac{-8 + 0}{2} \right) = \left(\frac{4}{2}, \frac{-8}{2} \right) = (2, -4)$$

The length of the diameter is

$$\sqrt{(x_2 - x_1)^2 + (y_2 - y_1)^2} = \sqrt{(4 - 0)^2 + (0 - (-8))^2} = \sqrt{4^2 + 8^2} = \sqrt{80} = \sqrt{16 \times 5} = 4\sqrt{5}$$

So the length of the radius is $\frac{4\sqrt{5}}{2} = 2\sqrt{5}$.

The centre of the circle is $(2, -4)$ and the radius is $2\sqrt{5}$.

The equation of the circle is

$$(x - x_1)^2 + (y - y_1)^2 = r^2$$

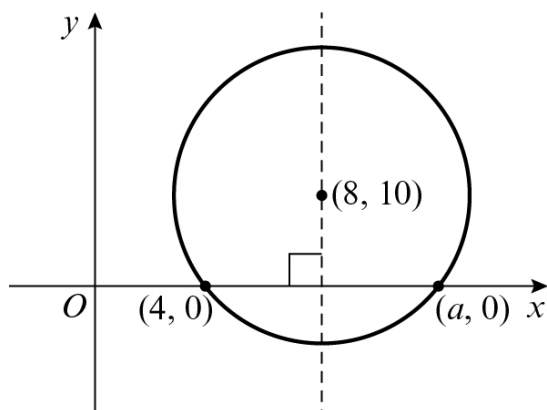
$$(x - 2)^2 + (y - (-4))^2 = (2\sqrt{5})^2$$

$$(x - 2)^2 + (y + 4)^2 = 20$$

9 a The radius is

$$\sqrt{(x_2 - x_1)^2 + (y_2 - y_1)^2} = \sqrt{(8 - 4)^2 + (10 - 0)^2} = \sqrt{4^2 + 10^2} = \sqrt{16 + 100} = \sqrt{116} = 2\sqrt{29}$$

b



The centre is on the perpendicular bisector of $(4, 0)$ and $(a, 0)$. So

$$\frac{4 + a}{2} = 8$$

$$4 + a = 16$$

$$a = 12$$

10 Substitute $y = 0$ into $(x-5)^2 + y^2 = 36$

$$(x-5)^2 = 36$$

$$x-5 = \sqrt{36}$$

$$x-5 = \pm 6$$

$$\text{So } x-5 = 6 \Rightarrow x = 11$$

$$\text{and } x-5 = -6 \Rightarrow x = -1$$

The coordinates of P and Q are $(-1, 0)$ and $(11, 0)$.

11 Substitute $x = 0$ into $(x+4)^2 + (y-7)^2 = 121$

$$4^2 + (y-7)^2 = 121$$

$$16 + (y-7)^2 = 121$$

$$(y-7)^2 = 105$$

$$y-7 = \pm\sqrt{105}$$

$$\text{So } y = 7 \pm \sqrt{105}$$

The values of m and n are $7 + \sqrt{105}$ and $7 - \sqrt{105}$.

12 a $(x+5)^2 + (y+2)^2 = 125$, $A(a, 0)$, $B(0, b)$

$$\text{At } A(a, 0): (a+5)^2 + (0+2)^2 = 125$$

$$a^2 + 10a + 25 + 4 - 125 = 0$$

$$a^2 + 10a - 96 = 0$$

$$(a+16)(a-6) = 0$$

$$\text{As } a > 0, a = 6$$

$$\text{At } B(0, b): (0+5)^2 + (b+2)^2 = 125$$

$$25 + b^2 + 4b + 4 - 125 = 0$$

$$b^2 + 4b - 96 = 0$$

$$(b+12)(b-8) = 0$$

$$\text{As } b > 0, b = 8$$

$$\text{So } a = 6, b = 8$$

12 b $A(6, 0), B(0, 8)$

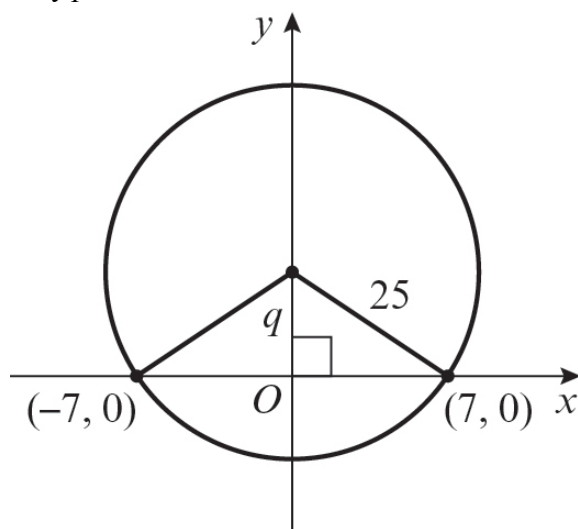
$$\text{gradient} = \frac{y_2 - y_1}{x_2 - x_1} = \frac{8 - 0}{0 - 6} = -\frac{4}{3}$$

y -intercept = 8

Equation of the line AB is $y = -\frac{4}{3}x + 8$

c Area of triangle $OAB = \frac{1}{2} \times 6 \times 8 = 24 \text{ units}^2$

13 a By symmetry $p = 0$.



Using Pythagoras' theorem

$$q^2 + 7^2 = 25^2$$

$$q^2 + 49 = 625$$

$$q^2 = 576$$

$$q = \pm\sqrt{576}$$

$$q = \pm 24$$

As $q > 0$, $q = 24$.

b The circle meets the y -axis at $q \pm r$; i.e.

$$\text{at } 24 + 25 = 49$$

$$\text{and } 24 - 25 = -1$$

So the coordinates are $(0, 49)$ and $(0, -1)$.

- 14 The gradient of the line joining $(-3, -7)$ and $(5, 1)$ is

$$\frac{y_2 - y_1}{x_2 - x_1} = \frac{1 - (-7)}{5 - (-3)} = \frac{1 + 7}{5 + 3} = \frac{8}{8} = 1$$

So the gradient of the tangent is $-\frac{1}{(1)} = -1$.

The equation of the tangent is

$$y - y_1 = m(x - x_1)$$

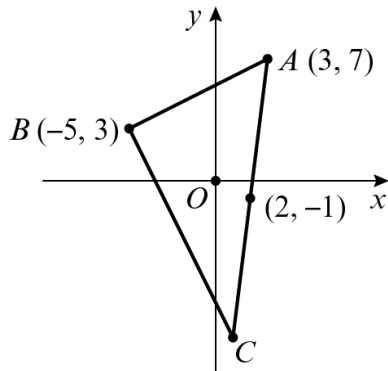
$$y - (-7) = -1(x - (-3))$$

$$y + 7 = -1(x + 3)$$

$$y + 7 = -x - 3$$

$$y = -x - 10 \text{ or } x + y + 10 = 0$$

15



Let the coordinates of C be (p, q) .
 $(2, -1)$ is the mid-point of $(3, 7)$ and (p, q)

$$\text{So } \frac{3+p}{2} = 2 \text{ and } \frac{7+q}{2} = -1$$

$$\frac{3+p}{2} = 2$$

$$3+p = 4$$

$$p = 1$$

$$\frac{7+q}{2} = -1$$

$$7+q = -2$$

$$q = -9$$

So the coordinates of C are $(1, -9)$.

The length of AB is

$$\sqrt{(x_2 - x_1)^2 + (y_2 - y_1)^2} = \sqrt{(-5 - 3)^2 + (3 - 7)^2} = \sqrt{(-8)^2 + (-4)^2} = \sqrt{64 + 16} = \sqrt{80}$$

The length of BC is

$$\sqrt{(x_2 - x_1)^2 + (y_2 - y_1)^2} = \sqrt{(-5 - 1)^2 + (3 - (-9))^2} = \sqrt{(-6)^2 + (12)^2} = \sqrt{36 + 144} = \sqrt{180}$$

The area of $\triangle ABC$ is

$$\frac{1}{2} \sqrt{180} \sqrt{80} = \frac{1}{2} \sqrt{14400} = \frac{1}{2} \sqrt{144 \times 100} = \frac{1}{2} \sqrt{144} \times \sqrt{100} = \frac{1}{2} \times 12 \times 10 = 60$$

- 16 $(x - 6)^2 + (y - 5)^2 = 17$
Centre of the circle is (6, 5).

Equation of the line touching the circle is $y = mx + 12$

Substitute the equation of the line into the equation of the circle:

$$\begin{aligned}(x - 6)^2 + (mx + 7)^2 &= 17 \\ x^2 - 12x + 36 + m^2x^2 + 14mx + 49 - 17 &= 0 \\ (1 + m^2)x^2 + (14m - 12)x + 68 &= 0\end{aligned}$$

There is one solution so using the discriminant $b^2 - 4ac = 0$:

$$\begin{aligned}(14m - 12)^2 - 4(1 + m^2)(68) &= 0 \\ 196m^2 - 336m + 144 - 272m^2 - 272 &= 0 \\ 76m^2 + 336m + 128 &= 0 \\ 19m^2 + 84m + 32 &= 0 \\ (19m + 8)(m + 4) &= 0\end{aligned}$$

$$m = -\frac{8}{19} \text{ or } m = -4$$

$$y = -\frac{8}{19}x + 12 \text{ and } y = -4x + 12$$

- 17 a Gradient of $AB = \frac{y_2 - y_1}{x_2 - x_1} = \frac{1 - 7}{5 - 3} = -3$

$$\text{Midpoint of } AB = \left(\frac{3+5}{2}, \frac{7+1}{2} \right) = (4, 4)$$

$M(4, 4)$

Line l is perpendicular to AB , so gradient of line $l = \frac{1}{3}$

$$y - y_1 = m(x - x_1)$$

$$y - 4 = \frac{1}{3}(x - 4)$$

$$y = \frac{1}{3}x + \frac{8}{3}$$

- b $C(-2, c)$

$$y = \frac{1}{3}(-2) + \frac{8}{3} = 2$$

$C(-2, 2)$

Radius of the circle = distance CA

$$= \sqrt{(x_2 - x_1)^2 + (y_2 - y_1)^2} = \sqrt{(-2 - 3)^2 + (2 - 7)^2} = \sqrt{50}$$

Equation of the circle is $(x + 2)^2 + (y - 2)^2 = 50$

- c Base of triangle = distance $AB = \sqrt{(5 - 3)^2 + (1 - 7)^2} = \sqrt{40}$

$$\text{Height of triangle} = \text{distance } CM = \sqrt{(4 + 2)^2 + (4 - 2)^2} = \sqrt{40}$$

$$\text{Area of triangle } ABC = \frac{1}{2} \times \sqrt{40} \times \sqrt{40} = 20 \text{ units}^2$$

18 a $(x - 3)^2 + (y + 3)^2 = 52$

The equations of the lines l_1 and l_2 are $y = \frac{3}{2}x + c$

Diameter of the circle that touches l_1 and l_2 has gradient $-\frac{2}{3}$ and passes through the centre of the circle $(3, -3)$

$$y = -\frac{2}{3}x + d$$

$$-3 = -\frac{2}{3}(3) + d$$

$$d = -1$$

$y = -\frac{2}{3}x - 1$ is the equation of the diameter that touches l_1 and l_2 .

Solve the equation of the diameter and circle simultaneously:

$$(x - 3)^2 + \left(-\frac{2}{3}x - 1\right)^2 = 52$$

$$x^2 - 6x + 9 + \frac{4}{9}x^2 - \frac{8}{3}x + 4 - 52 = 0$$

$$\frac{13}{9}x^2 - \frac{26}{3}x - 39 = 0$$

$$13x^2 - 78x - 351 = 0$$

$$x^2 - 6x - 27 = 0$$

$$(x - 9)(x + 3) = 0$$

$$x = 9 \text{ or } x = -3$$

When $x = 9$, $y = -\frac{2}{3}(9) - 1 = -7$

When $x = -3$, $y = -\frac{2}{3}(-3) - 1 = 1$

$(9, -7)$ and $(-3, 1)$ are the coordinates where the diameter touches lines l_1 and l_2 .
 $P(9, -7)$ and $Q(-3, 1)$

b The equations of the lines l_1 and l_2 are $y = \frac{3}{2}x + c$

l_1 touches the circle at $(-3, 1)$:

$$1 = \frac{3}{2}(-3) + c, c = \frac{11}{2}, \text{ so } y = \frac{3}{2}x + \frac{11}{2}$$

l_2 touches the circle at $(9, -7)$:

$$-7 = \frac{3}{2}(9) + c, c = -\frac{41}{2}, \text{ so } y = \frac{3}{2}x - \frac{41}{2}$$

19 a $x^2 + 6x + y^2 - 2y = 7$

Equation of the lines are $y = mx + 6$

Substitute $y = mx + 6$ into the equation of the circle:

$$\begin{aligned} x^2 + 6x + (mx + 6)^2 - 2(mx + 6) &= 7 \\ x^2 + 6x + m^2x^2 + 12mx + 36 - 2mx - 12 - 7 &= 0 \\ (1 + m^2)x^2 + (6 + 10m)x + 17 &= 0 \end{aligned}$$

There is one solution so using the discriminant $b^2 - 4ac = 0$:

$$\begin{aligned} (6 + 10m)^2 - 4(1 + m^2)(17) &= 0 \\ 100m^2 + 120m + 36 - 68m^2 - 68 &= 0 \\ 32m^2 + 120m - 32 &= 0 \\ 4m^2 + 15m - 4 &= 0 \\ (4m - 1)(m + 4) &= 0 \end{aligned}$$

$$m = \frac{1}{4} \text{ or } m = -4$$

$$y = \frac{1}{4}x + 6 \text{ and } y = -4x + 6$$

- b** The gradient of $l_1 = \frac{1}{4}$ and the gradient of $l_2 = -4$, so the two lines are perpendicular,

Therefore, $APRQ$ is a square.

$$x^2 + 6x + y^2 - 2y = 7$$

Completing the square:

$$\begin{aligned} (x + 3)^2 - 9 + (y - 1)^2 - 1 &= 7 \\ (x + 3)^2 + (y - 1)^2 &= 17 \end{aligned}$$

$$\text{Radius} = \sqrt{17}$$

Let point P have the coordinates (x, y)

Using Pythagoras' theorem:

$$l_2: (0 - x)^2 + (6 - y)^2 = 17$$

$$\text{Using the equation for } l_2, y = \frac{1}{4}x + 6, (0 - x)^2 + \left(6 - \left(\frac{1}{4}x + 6\right)\right)^2 = 17$$

$$x^2 + \frac{1}{16}x^2 = 17$$

$$\frac{17}{16}x^2 = 17$$

$$x^2 = 16$$

$$x = \pm 4$$

From the diagram we know that x is negative, so $x = -4, y = \frac{1}{4}(-4) + 6 = 5$

$$P(-4, 5)$$

Now let point Q have the coordinates (x, y) .

$$\text{Using the equation for } l_1, y = -4x + 6, (0 - x)^2 + (6 - (-4x + 6))^2 = 17$$

$$x^2 + 16x^2 = 17$$

$$17x^2 = 17$$

$$x^2 = 1$$

$$x = \pm 1$$

From the diagram x is positive, so $x = 1, y = -4(1) + 6 = 2$

$$Q(1, 2)$$

19 c Area of the square = radius² = 17 units²

20 a Equation of the circle: $(x - 6)^2 + (y - 9)^2 = 50$

Equation of l_1 : $y = -x + 21$

Substitute the equation of the line into the equation of the circle:

$$\begin{aligned}(x - 6)^2 + (-x + 12)^2 &= 50 \\ x^2 - 12x + 36 + x^2 - 24x + 144 - 50 &= 0 \\ 2x^2 - 36x + 130 &= 0 \\ x^2 - 18x + 65 &= 0 \\ (x - 13)(x - 5) &= 0\end{aligned}$$

$x = 13$ or $x = 5$

When $x = 13$, $y = -13 + 21 = 8$

When $x = 5$, $y = -5 + 21 = 16$

$P(5, 16)$ and $Q(13, 8)$

20 b The gradient of the line $AP = \frac{y_2 - y_1}{x_2 - x_1} = \frac{9 - 16}{6 - 5} = -7$

So the gradient of the line perpendicular to AP , l_2 , is $\frac{1}{7}$.

The equation of the perpendicular line is

$$y - y_1 = m(x - x_1)$$

$$m = \frac{1}{7} \text{ and } (x_1, y_1) = P(5, 16)$$

$$\text{So } y - 16 = \frac{1}{7}(x - 5)$$

$$y = \frac{1}{7}x + \frac{107}{7}$$

The gradient of the line $AQ = \frac{y_2 - y_1}{x_2 - x_1} = \frac{9 - 8}{6 - 13} = -\frac{1}{7}$

So the gradient of the line perpendicular to AQ , l_3 , is 7.

The equation of the perpendicular line is

$$y - y_1 = m(x - x_1)$$

$$m = 7 \text{ and } (x_1, y_1) = Q(13, 8)$$

$$\text{So } y - 8 = 7(x - 13)$$

$$y = 7x - 83$$

$$l_2: y = \frac{1}{7}x + \frac{107}{7} \text{ and } l_3: y = 7x - 83$$

c The gradient of the line $PQ = \frac{y_2 - y_1}{x_2 - x_1} = \frac{8 - 16}{13 - 5} = -1$

So the gradient of the line perpendicular to PQ , l_4 , is 1.

The equation of the perpendicular line is

$$y - y_1 = m(x - x_1)$$

$$m = 1 \text{ and } (x_1, y_1) = A(6, 9)$$

$$\text{So } y - 9 = 1(x - 6)$$

$$l_4: y = x + 3$$

20 d $l_2: y = \frac{1}{7}x + \frac{107}{7}$, $l_3: y = 7x - 83$ and $l_4: y = x + 3$

Solve these equations simultaneously one pair at a time:

$$l_2 \text{ and } l_3: \frac{1}{7}x + \frac{107}{7} = 7x - 83$$

$$x + 107 = 49x - 581$$

$$48x = 688$$

$$x = \frac{43}{3}, \text{ so } y = 7\left(\frac{43}{3}\right) - 83 = \frac{52}{3}$$

$$l_2 \text{ and } l_3 \text{ intersect at } \left(\frac{43}{3}, \frac{52}{3}\right).$$

$$l_3 \text{ and } l_4: 7x - 83 = x + 3$$

$$6x = 86$$

$$x = \frac{43}{3}, \text{ so } y = \frac{43}{3} + 3 = \frac{52}{3}$$

Therefore all three lines intersect at $R\left(\frac{43}{3}, \frac{52}{3}\right)$

e Area of kite $APRQ = \frac{1}{2} \times AR \times PQ$

$$PQ = \sqrt{(x_2 - x_1)^2 + (y_2 - y_1)^2} = \sqrt{(13 - 5)^2 + (8 - 16)^2} = \sqrt{128} = 8\sqrt{2}$$

$$AR = \sqrt{(x_2 - x_1)^2 + (y_2 - y_1)^2} = \sqrt{\left(\frac{43}{3} - 6\right)^2 + \left(\frac{52}{3} - 9\right)^2} = \sqrt{\left(\frac{25}{3}\right)^2 + \left(\frac{25}{3}\right)^2} = \sqrt{\frac{1250}{9}} = \frac{25\sqrt{2}}{3}$$

$$\text{Area} = \frac{1}{2} \times \frac{25\sqrt{2}}{3} \times 8\sqrt{2} = \frac{200}{3}$$

21 a $y = -3x + 12$

Substitute $x = 0$ into $y = -3x + 12$

$$y = -3(0) + 12 = 12$$

So A is $(0, 12)$

Substitute $y = 0$ into $y = -3x + 12$

$$0 = -3x + 12$$

$$3x = 12$$

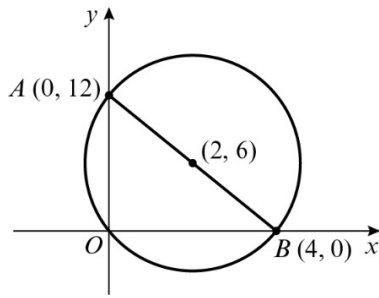
$$x = 4$$

So B is $(4, 0)$.

b The mid-point of AB is

$$\left(\frac{x_1 + x_2}{2}, \frac{y_1 + y_2}{2}\right) = \left(\frac{0 + 4}{2}, \frac{12 + 0}{2}\right) = (2, 6)$$

21 c



$\angle AOB = 90^\circ$, so AB is a diameter of the circle.

The centre of the circle is the mid-point of AB , i.e. $(2, 6)$.

The length of the diameter AB is

$$\sqrt{(x_2 - x_1)^2 + (y_2 - y_1)^2} = \sqrt{(4 - 0)^2 + (0 - 12)^2} = \sqrt{4^2 + (-12)^2} = \sqrt{16 + 144} = \sqrt{160}$$

So the radius of the circle is $\frac{\sqrt{160}}{2}$.

The equation of the circle is

$$(x - 2)^2 + (y - 6)^2 = \left(\frac{\sqrt{160}}{2}\right)^2$$

$$(x - 2)^2 + (y - 6)^2 = \frac{160}{4}$$

$$(x - 2)^2 + (y - 6)^2 = 40$$

22 a $A(-3, -2)$, $B(-6, 0)$ and $C(1, q)$

$$AB = \sqrt{(x_2 - x_1)^2 + (y_2 - y_1)^2} = \sqrt{(-6 + 3)^2 + (0 + 2)^2} = \sqrt{13}$$

$$\text{Diameter} = BC = \sqrt{(1 + 6)^2 + (q - 0)^2} = \sqrt{49 + q^2}$$

$$AC = \sqrt{(1 + 3)^2 + (q + 2)^2} = \sqrt{16 + q^2 + 4q + 4} = \sqrt{q^2 + 4q + 20}$$

Using Pythagoras' theorem $AC^2 + AB^2 = BC^2$:

$$(q^2 + 4q + 20) + 13 = 49 + q^2$$

$$4q - 16 = 0$$

$$q = 4$$

b The centre of the circle is the midpoint of $B(-6, 0)$ and $C(1, 4)$

$$\text{Midpoint } BC = \left(\frac{-6 + 1}{2}, \frac{0 + 4}{2}\right) = \left(-\frac{5}{2}, 2\right)$$

$$\text{The radius is half of } BC = \frac{1}{2} \text{ of } \sqrt{49 + q^2} = \frac{1}{2} \text{ of } \sqrt{49 + 4^2} = \frac{1}{2} \text{ of } \sqrt{65} = \frac{\sqrt{65}}{2}$$

$$\text{Equation of the circle is } \left(x + \frac{5}{2}\right)^2 + (y - 2)^2 = \left(\frac{\sqrt{65}}{2}\right)^2$$

$$\left(x + \frac{5}{2}\right)^2 + (y - 2)^2 = \frac{65}{4}$$

23 a $R(-4, 3)$, $S(7, 4)$ and $T(8, -7)$

$$RT = \sqrt{(8+4)^2 + (-7-3)^2} = \sqrt{244}$$

$$RS = \sqrt{(7+4)^2 + (4-3)^2} = \sqrt{122}$$

$$ST = \sqrt{(8-7)^2 + (-7-4)^2} = \sqrt{122}$$

Using Pythagoras' theorem, $ST^2 + RS^2 = 122 + 122 = 244 = RT^2$, therefore, RT is the diameter of the circle.

b The radius of the circle is

$$\frac{1}{2} \times \text{diameter} = \frac{1}{2} \sqrt{244} = \frac{1}{2} \sqrt{4 \times 61} = \frac{1}{2} \sqrt{4} \times \sqrt{61} = \frac{1}{2} \times 2\sqrt{61} = \sqrt{61}$$

The centre of the circle is the mid-point of RT :

$$\left(\frac{x_1 + x_2}{2}, \frac{y_1 + y_2}{2} \right) = \left(\frac{-4 + 8}{2}, \frac{3 + (-7)}{2} \right) = \left(\frac{4}{2}, \frac{-4}{2} \right) = (2, -2)$$

So the equation of the circle is

$$(x-2)^2 + (y+2)^2 = (\sqrt{61})^2 \text{ or } (x-2)^2 + (y+2)^2 = 61$$

24 $A(-4, 0)$, $B(4, 8)$ and $C(6, 0)$

$$\text{The gradient of the line } AB = \frac{y_2 - y_1}{x_2 - x_1} = \frac{8 - 0}{4 - (-4)} = 1$$

So the gradient of the line perpendicular to AB , is -1 .

$$\text{Midpoint of } AB = \left(\frac{-4 + 4}{2}, \frac{0 + 8}{2} \right) = (0, 4)$$

The equation of the perpendicular line through the midpoint of AB is

$$y - y_1 = m(x - x_1)$$

$$m = -1 \text{ and } (x_1, y_1) = (0, 4)$$

$$\text{So } y - 4 = -(x - 0)$$

$$y = -x + 4$$

$$\text{The gradient of the line } BC = \frac{y_2 - y_1}{x_2 - x_1} = \frac{0 - 8}{6 - 4} = -4$$

So the gradient of the line perpendicular to BC , is $\frac{1}{4}$.

$$\text{Midpoint of } BC = \left(\frac{4 + 6}{2}, \frac{8 + 0}{2} \right) = (5, 4)$$

The equation of the perpendicular line through the midpoint of BC is

$$y - y_1 = m(x - x_1)$$

$$m = \frac{1}{4} \text{ and } (x_1, y_1) = (5, 4)$$

$$\text{So } y - 4 = \frac{1}{4}(x - 5)$$

$$y = \frac{1}{4}x + \frac{11}{4}$$

Solving these two equations simultaneously will give the centre of the circle:

$$-x + 4 = \frac{1}{4}x + \frac{11}{4}$$

$$-4x + 16 = x + 11$$

$$5x = 5$$

$$x = 1, \text{ so } y = -1 + 4 = 3$$

The centre of the circle is $(1, 3)$.

The radius is the distance from the centre of the circle $(1, 3)$ to a point on the circumference $C(6, 0)$:

$$\text{Radius} = \sqrt{(6 - 1)^2 + (0 - 3)^2} = \sqrt{34}$$

$$\text{The equation of the circle is } (x - 1)^2 + (y - 3)^2 = 34$$

25 a i $A(-7, 7)$ and $B(1, 9)$

$$\text{The gradient of the line } AB = \frac{y_2 - y_1}{x_2 - x_1} = \frac{9 - 7}{1 - (-7)} = \frac{2}{8} = \frac{1}{4}$$

So the gradient of the line perpendicular to AB , is -4 .

$$\text{Midpoint of } AB = \left(\frac{-7 + 1}{2}, \frac{7 + 9}{2} \right) = (-3, 8)$$

The equation of the perpendicular line is

$$y - y_1 = m(x - x_1)$$

$$m = -4 \text{ and } (x_1, y_1) = (-3, 8)$$

$$\text{So } y - 8 = -4(x + 3)$$

$$y = -4x - 4$$

ii $C(3, 1)$ and $D(-7, 1)$

The line CD is $y = 1$

$$\text{Midpoint of } CD = \left(\frac{3 - 7}{2}, \frac{1 + 1}{2} \right) = (-2, 1)$$

The equation of the perpendicular line is $x = -2$

b The two perpendicular bisectors cross at the centre of the circle

Solve $y = -4x - 4$ and $x = -2$ simultaneously:

$$y = -4(-2) - 4 = 4$$

The centre of the circle = $(-2, 4)$

The radius is the distance from the centre of the circle $(-2, 4)$ to a point on the circumference $C(3, 1)$:

$$\text{Radius} = \sqrt{(3 + 2)^2 + (1 - 4)^2} = \sqrt{34}$$

The equation of the circle is $(x + 2)^2 + (y - 4)^2 = 34$

Challenge

- a Solve $(x - 5)^2 + (y - 3)^2 = 20$ and $(x - 10)^2 + (y - 8)^2 = 10$ simultaneously:

$$x^2 - 10x + 25 + y^2 - 6y + 9 = 20 \text{ and } x^2 - 20x + 100 + y^2 - 16y + 64 = 10$$

$$x^2 - 10x + y^2 - 6y + 14 = 0 \text{ and } x^2 - 20x + y^2 - 16y + 154 = 0$$

$$x^2 - 10x + y^2 - 6y + 14 = x^2 - 20x + y^2 - 16y + 154$$

$$-10x - 6y + 14 = -20x - 16y + 154$$

$$10x + 10y = 140$$

$$x + y = 14$$

$$x + y - 14 = 0$$

- b Solve $(x - 5)^2 + (y - 3)^2 = 20$ and $x + y = 14$ simultaneously:

$$(9 - y)^2 + (y - 3)^2 = 20$$

$$81 - 18y + y^2 + y^2 - 6y + 9 = 20$$

$$2y^2 - 24y + 70 = 0$$

$$y^2 - 12y + 35 = 0$$

$$(y - 5)(y - 7) = 0$$

$$y = 5 \text{ or } y = 7$$

When $y = 5$, $x = 14 - 5 = 9$

When $y = 7$, $x = 14 - 7 = 7$

$P(7, 7)$ and $Q(9, 5)$

- c Area of kite $APBQ = \frac{1}{2} \times PQ \times AB$

$$PQ = \sqrt{(9 - 7)^2 + (5 - 7)^2} = \sqrt{8}$$

$A(5, 3)$ and $B(10, 8)$

$$AB = \sqrt{(10 - 5)^2 + (8 - 3)^2} = \sqrt{50}$$

$$\text{Area} = \frac{1}{2} \times \sqrt{8} \times \sqrt{50} = \frac{1}{2} \times \sqrt{400} = 10 \text{ units}^2$$