

Exercise 2E

1 a $(x + 1)^2 + (y + 6)^2 = r^2$, (2, 3)

Substitute $x = 2$ and $y = 3$ into the equation $(x + 1)^2 + (y + 6)^2 = r^2$

$$(2 + 1)^2 + (3 + 6)^2 = r^2$$

$$9 + 81 = r^2$$

$$r = \sqrt{90}$$

$$= 3\sqrt{10}$$

b The line has equation $x + 3y - 11 = 0$

$$3y = -x + 11$$

$$y = -\frac{1}{3}x + \frac{11}{3}$$

The gradient of the line is $-\frac{1}{3}$

The gradient of the radius from the centre of the circle $(-1, -6)$ to $(2, 3)$ is:

$$\frac{y_2 - y_1}{x_2 - x_1} = \frac{3 - (-6)}{2 - (-1)} = \frac{9}{3} = 3$$

As $-\frac{1}{3} \times 3 = -1$, the line and the radius to the point $(2, 3)$ are perpendicular.

2 a The radius of the circle is

$$\sqrt{(x_2 - x_1)^2 + (y_2 - y_1)^2} = \sqrt{(4 - 1)^2 + (6 - (-2))^2} = \sqrt{3^2 + 8^2} = \sqrt{9 + 64} = \sqrt{73}$$

The equation of the circle is

$$(x - 4)^2 + (y - 6)^2 = (\sqrt{73})^2$$

$$\text{or } (x - 4)^2 + (y - 6)^2 = 73$$

b The gradient of the line joining $(1, -2)$ and $(4, 6)$ is

$$\frac{y_2 - y_1}{x_2 - x_1} = \frac{6 - (-2)}{4 - 1} = \frac{6 + 2}{3} = \frac{8}{3}$$

The gradient of the tangent is $\frac{-1}{\left(\frac{8}{3}\right)} = -\frac{3}{8}$

The equation of the tangent to the circle at $(1, -2)$ is

$$y - y_1 = m(x - x_1)$$

$$y - (-2) = -\frac{3}{8}(x - 1)$$

$$y + 2 = -\frac{3}{8}(x - 1)$$

$$8y + 16 = -3(x - 1)$$

$$8y + 16 = -3x + 3$$

$$3x + 8y + 16 = 3$$

$$3x + 8y + 13 = 0$$

3 a $A(-1, -9)$ and $B(7, -5)$

$$\text{Midpoint} = \left(\frac{-1+7}{2}, \frac{-9+(-5)}{2} \right) = (3, -7)$$

$$\text{The gradient of the line segment } AB = \frac{y_2 - y_1}{x_2 - x_1} = \frac{-5 - (-9)}{7 - (-1)} = \frac{1}{2}$$

So the gradient of a line perpendicular to AB is -2 .

The equation of the perpendicular line is

$$y - y_1 = m(x - x_1)$$

$$m = -2 \text{ and } (x_1, y_1) = (3, -7)$$

$$\text{So } y - (-7) = -2(x - 3)$$

$$y = -2x - 1$$

b Centre of the circle is $(1, -3)$

Substitute $x = 1$ into the equation $y = -2x - 1$

$$y = -2(1) - 1 = -3$$

Therefore, the perpendicular bisector of AB , $y = -2x - 1$, passes through the centre of the circle $(1, -3)$

4 a $P(3, 1)$ and $Q(5, -3)$

$$\text{Midpoint} = \left(\frac{3+5}{2}, \frac{1+(-3)}{2} \right) = (4, -1)$$

$$\text{The gradient of the line segment } PQ = \frac{y_2 - y_1}{x_2 - x_1} = \frac{-3 - 1}{5 - 3} = -2$$

So the gradient of the line perpendicular to PQ is $\frac{1}{2}$.

The equation of the perpendicular line is

$$y - y_1 = m(x - x_1)$$

$$m = \frac{1}{2} \text{ and } (x_1, y_1) = (4, -1)$$

$$\text{So } y - (-1) = \frac{1}{2}(x - 4)$$

$$y = \frac{1}{2}x - 3$$

4 b Complete the square for $x^2 - 4x + y^2 + 4y = 2$

$$(x - 2)^2 - 4 + (y + 2)^2 - 4 = 2$$

$$(x - 2)^2 + (y + 2)^2 = 10$$

Centre of the circle is $(2, -2)$

Substitute $x = 2$ into the equation $y = \frac{1}{2}x - 3$

$$y = \frac{1}{2}(2) - 3 = -2$$

Therefore, the perpendicular bisector of PQ , $y = \frac{1}{2}x - 3$, passes through the centre of the circle $(2, -2)$

5 a Substitute $x = -7$ and $y = -6$ into $x^2 + 18x + y^2 - 2y + 29$

$$\begin{aligned}x^2 + 18x + y^2 - 2y + 29 &= (-7)^2 + 18(-7) + (-6)^2 - 2(-6) + 29 \\ &= 49 - 126 + 36 + 12 + 29 \\ &= 0\end{aligned}$$

The point P satisfies the equation, so P lies on C .

b Completing the square gives

$$(x + 9)^2 + (y - 1)^2 = 53$$

The centre of the circle, A , is $(-9, 1)$.

The gradient of $CP = \frac{y_2 - y_1}{x_2 - x_1} = \frac{-6 - 1}{-7 - (-9)} = \frac{-7}{2}$

Gradient of the tangent is $\frac{2}{7}$

$$y - y_1 = m(x - x_1)$$

$$y - (-6) = \frac{2}{7}(x - (-7))$$

$$y = \frac{2}{7}x - 4$$

c The tangent intersects the y -axis at $x = 0$

$$y = \frac{2}{7}(0) - 4 = -4$$

$R(0, -4)$

d Height of triangle = radius of circle = $\sqrt{53}$

Base of triangle = distance PR

$$\sqrt{(x_2 - x_1)^2 + (y_2 - y_1)^2} = \sqrt{(-7 - 0)^2 + (-6 - (-4))^2} = \sqrt{53}$$

$$\text{Area } APR = \frac{1}{2} \times \sqrt{53} \times \sqrt{53} = 26.5 \text{ units}^2$$

- 6 a The centre of the circle $(x+4)^2 + (y-1)^2 = 242$ is $(-4, 1)$.

The gradient of the line joining $(-4, 1)$ and $(7, -10)$ is

$$\frac{y_2 - y_1}{x_2 - x_1} = \frac{-10 - 1}{7 - (-4)} = \frac{-11}{7 + 4} = -\frac{11}{11} = -1$$

The gradient of the tangent is $\frac{-1}{(-1)} = 1$.

The equation of the tangent is

$$y - y_1 = m(x - x_1)$$

$$y - (-10) = 1(x - 7)$$

$$y + 10 = x - 7$$

$$y = x - 17$$

Substitute $x = 0$ into $y = x - 17$

$$y = 0 - 17$$

$$y = -17$$

So the coordinates of S are $(0, -17)$

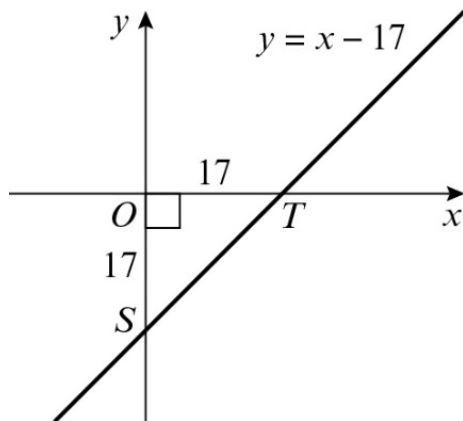
Substitute $y = 0$ into $y = x - 17$

$$0 = x - 17$$

$$x = 17$$

So the coordinates of T are $(17, 0)$.

b



The area of $\triangle OST$ is $\frac{1}{2} \times 17 \times 17 = 144.5$

7 $(x + 5)^2 + (y + 3)^2 = 80$
Gradient of tangent = 2, so $y = 2x + c$

Diameter of the circle that touches l_1 and l_2 has gradient $-\frac{1}{2}$ and passes through the centre of the circle $(-5, -3)$

$$y = -\frac{1}{2}x + d$$

$$-3 = -\frac{1}{2}(-5) + d$$

$$d = -\frac{11}{2}$$

$y = -\frac{1}{2}x - \frac{11}{2}$ is the equation of the diameter that touches l_1 and l_2 .

Solve the equation of the diameter and circle simultaneously:

$$(x + 5)^2 + \left(-\frac{1}{2}x - \frac{5}{2}\right)^2 = 80$$

$$x^2 + 10x + 25 + \frac{1}{4}x^2 + \frac{5}{2}x + \frac{25}{4} - 80 = 0$$

$$4x^2 + 40x + 100 + x^2 + 10x + 25 - 320 = 0$$

$$5x^2 + 50x - 195 = 0$$

$$x^2 + 10x - 39 = 0$$

$$(x + 13)(x - 3) = 0$$

$$x = -13 \text{ or } x = 3$$

$$\text{When } x = -13, y = -\frac{1}{2}(-13) - \frac{11}{2} = 1$$

$$\text{When } x = 3, y = -\frac{1}{2}(3) - \frac{11}{2} = -7$$

$(-13, 1)$ and $(3, -7)$ are the coordinates where the diameter touches lines l_1 and l_2 .

Substitute these coordinates into the equation $y = 2x + c$

$$\text{When } x = -13, y = 1, 1 = 2(-13) + c, c = 27, y = 2x + 27$$

$$\text{When } x = 3, y = -7, -7 = 2(3) + c, c = -13, y = 2x - 13$$

$$l_1: y = 2x + 27$$

$$l_2: y = 2x - 13$$

8 a $(x - 3)^3 + (y - p)^2 = 5$ and $2x + y - 5 = 0$
So $y = -2x + 5$

Solve the equations simultaneously:

$$(x - 3)^3 + (-2x + 5 - p)^2 = 5$$

$$x^3 - 6x^2 + 9 + 4x^2 - 20x + 4px + 25 - 10p + p^2 - 5 = 0$$

$$5x^2 - 26x + 4px + 29 - 10p + p^2 = 0$$

Using the discriminant for one solution:

$$b^2 - 4ac = 0$$

$$(-26 + 4p)^2 - 4(5)(29 - 10p + p^2) = 0$$

$$16p^2 - 208p + 676 - 20p^2 + 200p - 580 = 0$$

$$-4p^2 - 8p + 96 = 0$$

$$p^2 + 2p - 24 = 0$$

$$(p - 4)(p + 6) = 0$$

$$p = 4 \text{ or } p = -6$$

- 8 b** When $p = 4$, $(x - 3)^3 + (y - 4)^2 = 5$
 When $p = -6$, $(x - 3)^3 + (y + 6)^2 = 5$
 $(3, 4)$ and $(3, -6)$

- 9 a** The centre of the circle, Q , is $(11, -5)$
 To find the radius of the circle:

$$\begin{aligned}
 PQ &= \sqrt{(x_2 - x_1)^2 + (y_2 - y_1)^2} \\
 &= \sqrt{(5 - 11)^2 + (3 - (-5))^2} \\
 &= \sqrt{(-6)^2 + 8^2} \\
 &= 10 \\
 (x - 11)^2 + (y + 5)^2 &= 100
 \end{aligned}$$

- b** The gradient of $PQ = \frac{y_2 - y_1}{x_2 - x_1} = \frac{3 - (-5)}{5 - 11} = \frac{4}{-3}$

Gradient of the tangent is $\frac{3}{4}$

$$y - y_1 = m(x - x_1)$$

$$y - 3 = \frac{3}{4}(x - 5)$$

$$y = \frac{3}{4}x - \frac{3}{4}$$

$$9 \text{ c Midpoint of } PQ = \left(\frac{11+5}{2}, \frac{-5+3}{2} \right) = (8, -1)$$

Gradient of l_2 is $\frac{3}{4}$ as the line is parallel to l_1 .

$$y - y_1 = m(x - x_1)$$

$$y - (-1) = \frac{3}{4}(x - 8)$$

$$y = \frac{3}{4}x - 7$$

Solve $y = \frac{3}{4}x - 7$ and $(x - 11)^2 + (y + 5)^2 = 100$ simultaneously

$$(x - 11)^2 + \left(\frac{3}{4}x - 2 \right)^2 = 100$$

$$x^2 - 22x + 121 + \frac{9}{16}x^2 - 3x + 4 - 100 = 0$$

$$25x^2 - 400x + 400 = 0$$

$$x^2 - 16x + 16 = 0$$

$$\text{Using the formula, } x = \frac{16 \pm \sqrt{192}}{2} = 8 \pm 4\sqrt{3}$$

$$\text{When } x = 8 + 4\sqrt{3}, y = \frac{3}{4}(8 + 4\sqrt{3}) - 7 = -1 + 3\sqrt{3}$$

$$\text{When } x = 8 - 4\sqrt{3}, y = \frac{3}{4}(8 - 4\sqrt{3}) - 7 = -1 - 3\sqrt{3}$$

$$A(8 - 4\sqrt{3}, -1 - 3\sqrt{3}) \text{ and } B(8 + 4\sqrt{3}, -1 + 3\sqrt{3})$$

$$\begin{aligned} \text{d } AB &= \sqrt{(x_2 - x_1)^2 + (y_2 - y_1)^2} \\ &= \sqrt{(8 + 4\sqrt{3} - (8 - 4\sqrt{3}))^2 + (-1 + 3\sqrt{3} - (-1 - 3\sqrt{3}))^2} \\ &= \sqrt{(8\sqrt{3})^2 + (6\sqrt{3})^2} \\ &= \sqrt{192 + 108} \\ &= \sqrt{300} \\ &= 10\sqrt{3} \end{aligned}$$

$$10 \text{ a } M = \left(\frac{2+10}{2}, \frac{3+1}{2} \right) = (6, 2)$$

$$\text{Gradient } RS = \frac{y_2 - y_1}{x_2 - x_1} = \frac{1 - 3}{10 - 2} = -\frac{1}{4}$$

Gradient of l is 4

$$y - y_1 = m(x - x_1)$$

$$y - 2 = 4(x - 6)$$

$$y = 4x - 22 \text{ is the equation of } l$$

$$\text{b Using } y = 4x - 22 \text{ when } x = a, y = -2: \\ -2 = 4a - 22, a = 5$$

$$10 \text{ c radius} = \text{distance } CR = \sqrt{(x_2 - x_1)^2 + (y_2 - y_1)^2} = \sqrt{(2 - 5)^2 + (3 - (-2))^2} = \sqrt{34}$$

Centre of circle is $(5, -2)$

$$\text{Equation of circle is } (x - 5)^2 + (y + 2)^2 = 34$$

d Solve $y = 4x - 22$ and $(x - 5)^2 + (y + 2)^2 = 34$ simultaneously

$$(x - 5)^2 + (4x - 20)^2 = 34$$

$$x^2 - 10x + 25 + 16x^2 - 160x + 400 - 34 = 0$$

$$17x^2 - 170x + 391 = 0$$

$$x^2 - 10x + 23 = 0$$

$$\text{Using the formula, } x = \frac{10 \pm \sqrt{8}}{2} = 5 \pm \sqrt{2}$$

$$\text{When } x = 5 + \sqrt{2}, y = 4(5 + \sqrt{2}) - 22 = -2 + 4\sqrt{2}$$

$$\text{When } x = 5 - \sqrt{2}, y = 4(5 - \sqrt{2}) - 22 = -2 - 4\sqrt{2}$$

$$A(5 + \sqrt{2}, -2 + 4\sqrt{2}) \text{ and } B(5 - \sqrt{2}, -2 - 4\sqrt{2})$$

$$11 \text{ a } x^2 - 4x + y^2 - 6y = 7$$

$$(x - 2)^2 - 4 + (y - 3)^2 - 9 = 7$$

$$(x - 2)^2 + (y - 3)^2 = 20$$

Substitute $x = 3y - 17$ into $(x - 2)^2 + (y - 3)^2 = 20$

$$(3y - 19)^2 + (y - 3)^2 = 20$$

$$9y^2 - 114y + 361 + y^2 - 6y + 9 - 20 = 0$$

$$10y^2 - 120y + 350 = 0$$

$$y^2 - 12y + 35 = 0$$

$$(y - 7)(y - 5) = 0$$

$$y = 7 \text{ or } 5$$

$$\text{when } y = 7, x = 3(7) - 17 = 4$$

$$\text{when } y = 5, x = 3(5) - 17 = -2$$

$$P(-2, 5) \text{ and } Q(4, 7)$$

b Centre of circle $T = (2, 3)$ and $P(-2, 5)$

$$\text{Gradient of } PT = \frac{y_2 - y_1}{x_2 - x_1} = \frac{5 - 3}{-2 - 2} = -\frac{1}{2}$$

Gradient of the tangent is 2

$$y - y_1 = m(x - x_1)$$

$$y - 5 = 2(x + 2)$$

$$y = 2x + 9$$

$$\text{Gradient of } QT = \frac{y_2 - y_1}{x_2 - x_1} = \frac{7 - 3}{4 - 2} = 2$$

Gradient of the tangent is $-\frac{1}{2}$

$$y - y_1 = m(x - x_1)$$

$$y - 7 = -\frac{1}{2}(x - 4)$$

$$y = -\frac{1}{2}x + 9$$

$$11 \text{ c } \text{Gradient } PQ = \frac{7-5}{4-(-2)} = \frac{1}{3}$$

$$\text{Midpoint of } PQ = \left(\frac{-2+4}{2}, \frac{5+7}{2} \right) = (1, 6)$$

Gradient of the perpendicular bisector is -3

$$y - y_1 = m(x - x_1)$$

$$y - 6 = -3(x - 1)$$

$$y = -3x + 9$$

$$11 \text{ d } y = 2x + 9, y = -\frac{1}{2}x + 9 \text{ and } y = -3x + 9$$

Solve $y = 2x + 9$ and $y = -\frac{1}{2}x + 9$ simultaneously

$$2x + 9 = -\frac{1}{2}x + 9$$

$$4x + 18 = -x + 18$$

$$x = 0, y = 9$$

$(0, 9)$

Solve $y = 2x + 9$ and $y = -3x + 9$ simultaneously

$$2x + 9 = -3x + 9$$

$$x = 0, y = 9$$

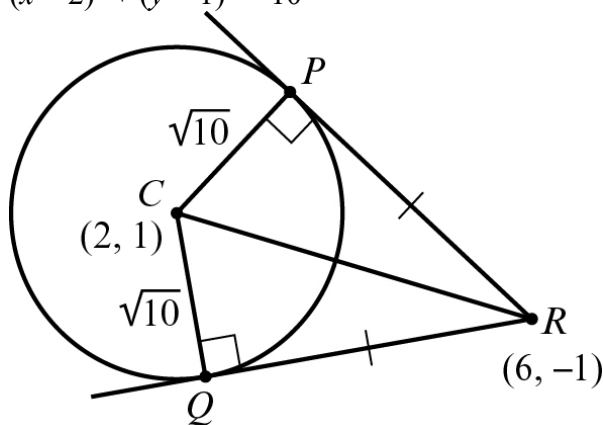
$(0, 9)$

Therefore all three lines intersect at $(0, 9)$

Challenge

- 1 y -intercept = -2 so $y = mx - 2$
 Substitute $y = mx - 2$ into $(x - 7)^2 + (y + 1)^2 = 5$
 $(x - 7)^2 + (mx - 1)^2 = 5$
 $x^2 - 14x + 49 + m^2x^2 - 2mx + 1 - 5 = 0$
 $(1 + m^2)x^2 - (14 + 2m)x + 45 = 0$
 Using the discriminant when there are only one root
 $b^2 - 4ac = 0$
 $(-(14 + 2m))^2 - 4(1 + m^2)(45) = 0$
 $4m^2 + 56m + 196 - 180 - 180m^2 = 0$
 $176m^2 - 56m - 16 = 0$
 $22m^2 - 7m - 2 = 0$
 $(11m + 2)(2m - 1) = 0$
 $m = -\frac{2}{11}$ or $m = \frac{1}{2}$
 As m is positive, $m = \frac{1}{2}$
 Therefore the equation of the line is $y = \frac{1}{2}x - 2$

- 2 a $(x - 2)^2 + (y - 1)^2 = 10$



$$\text{Radius} = \sqrt{10}$$

$$CR = \sqrt{(6-2)^2 + (-1-1)^2} = \sqrt{4^2 + (-2)^2} = \sqrt{20}$$

$$\text{Using Pythagoras' theorem, } PR = \sqrt{(\sqrt{20})^2 - (\sqrt{10})^2} = \sqrt{20-10} = \sqrt{10}$$

$$QR = \sqrt{(\sqrt{20})^2 - (\sqrt{10})^2} = \sqrt{20-10} = \sqrt{10}$$

$CP = PR = QR = CQ = \sqrt{10}$, so all four sides of the quadrilateral are the same length.

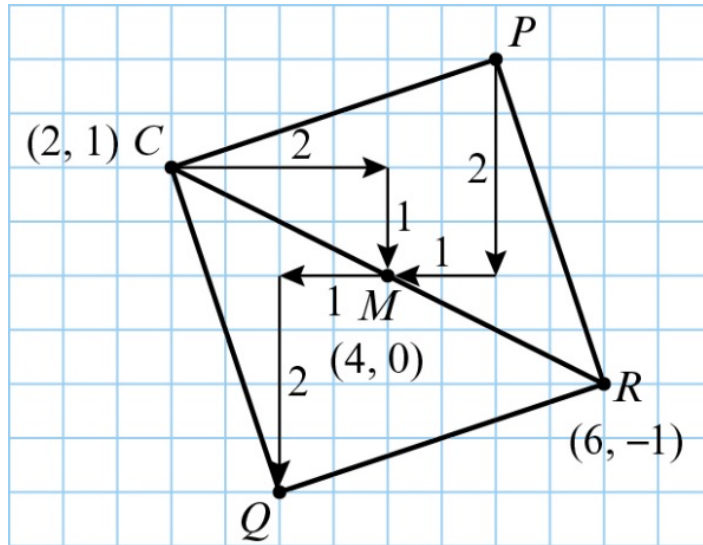
Using circle theorems, angle $CPR = \text{angle } CQR = 90^\circ$ (A radius meets a tangent at 90° .)

Challenge

- 2 b Since $QR = CQ$ the angles QCR and QRC are equal and are each 45 degrees. The same is true for angles CRP and RCP . Therefore all the angles at Q, P, C and R are 90° . Therefore, $CPQR$ is a square.

$CPQR$ is a square so its diagonals bisect at right angles and are equal.

$$\text{Midpoint of square} = \text{midpoint of } CR = \left(\frac{2+6}{2}, \frac{1-1}{2} \right) = (4, 0)$$



$$P(5, 2) \text{ and } Q(3, -2)$$

$$\text{Gradient of } PR = \frac{-1-2}{6-5} = -3$$

$$R(6, -1), m = -3$$

$$y - y_1 = m(x - x_1)$$

$$y + 1 = -3(x - 6)$$

$$y = -3x + 17$$

$$QR \text{ is perpendicular to } PR, \text{ so gradient of } QR = \frac{1}{3}$$

$$R(6, -1), m = \frac{1}{3}$$

$$y - y_1 = m(x - x_1)$$

$$y + 1 = \frac{1}{3}(x - 6)$$

$$y = \frac{1}{3}x - 3$$

$$\text{The equations are } y = -3x + 17 \text{ and } y = \frac{1}{3}x - 3$$