

Write your name here

Surname

Other names

**Pearson Edexcel**  
**International**  
**Advanced Level**

Centre Number

--	--	--	--	--	--

Candidate Number

--	--	--	--	--	--

# Core Mathematics C12

## Advanced Subsidiary

Tuesday 9 January 2018 – Morning

**Time: 2 hours 30 minutes**

Paper Reference

**WMA01/01****You must have:**

Mathematical Formulae and Statistical Tables (Blue)

Total Marks

--

**Candidates may use any calculator allowed by the regulations of the Joint Council for Qualifications. Calculators must not have the facility for symbolic algebra manipulation, differentiation and integration, or have retrievable mathematical formulae stored in them.**

### Instructions

- Use **black** ink or ball-point pen.
- If pencil is used for diagrams/sketches/graphs it must be dark (HB or B). Coloured pencils and highlighter pens must not be used.
- **Fill in the boxes** at the top of this page with your name, centre number and candidate number.
- Answer **all** questions and ensure that your answers to parts of questions are clearly labelled.
- Answer the questions in the spaces provided – *there may be more space than you need.*
- You should show sufficient working to make your methods clear. Answers without working may not gain full credit.
- When a calculator is used, the answer should be given to an appropriate degree of accuracy.

### Information

- The total mark for this paper is 125.
- The marks for **each** question are shown in brackets – *use this as a guide as to how much time to spend on each question.*

### Advice

- Read each question carefully before you start to answer it.
- Try to answer every question.
- Check your answers if you have time at the end.

Turn over ►

P50713A

©2018 Pearson Education Ltd.

1/1/1/1/1/



Pearson





Leave blank

2. A sequence is defined by

$$u_1 = 1$$
$$u_{n+1} = 2 - 3u_n \quad n \geq 1$$

(a) Find the value of  $u_2$  and the value of  $u_3$  (2)

(b) Calculate the value of  $\sum_{r=1}^4 (r - u_r)$  (3)

---

---

---

---

---

---

---

---

---

---

---

---

---

---

---

---

---

---

---

---

---

---

---

---

DO NOT WRITE IN THIS AREA

DO NOT WRITE IN THIS AREA

DO NOT WRITE IN THIS AREA



Leave blank

**Question 2 continued**

DO NOT WRITE IN THIS AREA

DO NOT WRITE IN THIS AREA

DO NOT WRITE IN THIS AREA

Lined area for writing the answer to Question 2. The area contains 30 horizontal lines.

(Total 5 marks)

Q2



P 5 0 7 1 3 A 0 5 5 2

Leave  
blank

3. Simplify fully

$$(a) \left(3x^{\frac{1}{2}}\right)^4 \quad (2)$$

$$(b) \frac{2y^7 \times (4y)^{-2}}{3y} \quad (2)$$

DO NOT WRITE IN THIS AREA

DO NOT WRITE IN THIS AREA

DO NOT WRITE IN THIS AREA

















Leave  
blank

**Question 5 continued**

DO NOT WRITE IN THIS AREA

DO NOT WRITE IN THIS AREA

DO NOT WRITE IN THIS AREA

Lined writing area for the answer.

**(Total 11 marks)**

**Q5**

--	--



P 5 0 7 1 3 A 0 1 3 5 2

Leave  
blank

6.

$$f(x) = ax^3 - 8x^2 + bx + 6$$

where  $a$  and  $b$  are constants.

When  $f(x)$  is divided by  $(x + 1)$  there is no remainder.

When  $f(x)$  is divided by  $(x - 2)$  the remainder is  $-12$

(a) Find the value of  $a$  and the value of  $b$ .

**(5)**

(b) Factorise  $f(x)$  completely.

**(4)**

---

---

---

---

---

---

---

---

---

---

---

---

---

---

---

---

---

---

---

---

---

---

---

---

---

DO NOT WRITE IN THIS AREA

DO NOT WRITE IN THIS AREA

DO NOT WRITE IN THIS AREA





Leave blank

Question 6 continued

Lined writing area for question 6 continued.

DO NOT WRITE IN THIS AREA

DO NOT WRITE IN THIS AREA

DO NOT WRITE IN THIS AREA





Leave  
blank

**Question 6 continued**

DO NOT WRITE IN THIS AREA

DO NOT WRITE IN THIS AREA

DO NOT WRITE IN THIS AREA

Q6

(Total 9 marks)



7.

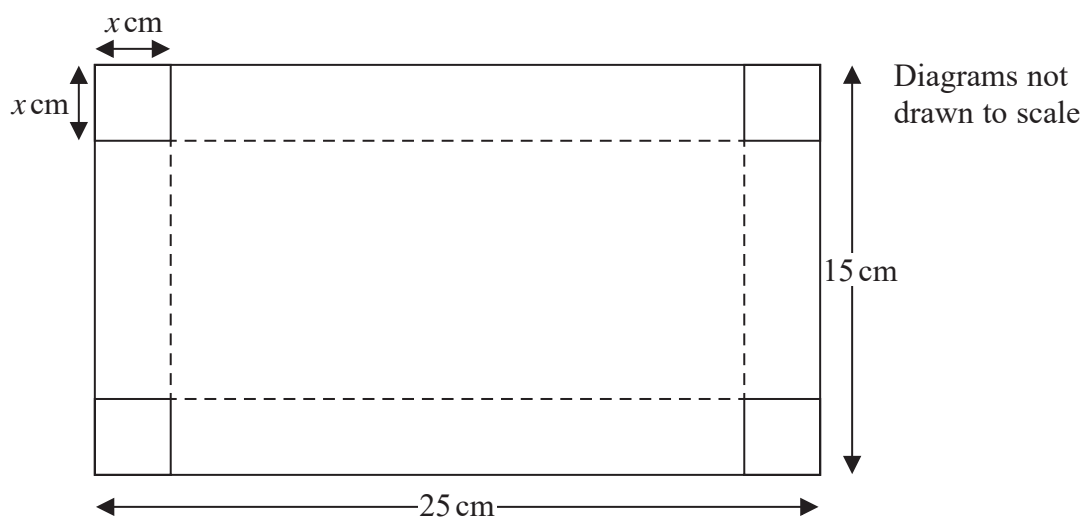


Figure 1




Figure 2

Figure 1 shows a rectangular sheet of metal of negligible thickness, which measures 25 cm by 15 cm. Squares of side  $x$  cm are cut from each corner of the sheet and the remainder is folded along the dotted lines to make an open cuboid box, as shown in Figure 2.

- (a) Show that the volume,  $V \text{ cm}^3$ , of the box is given by

$$V = 4x^3 - 80x^2 + 375x \quad (2)$$

- (b) Use calculus to find the value of  $x$ , to 3 significant figures, for which the volume of the box is a maximum.

(4)

- (c) Justify that this value of  $x$  gives a maximum value for  $V$ .

(2)

- (d) Find, to 3 significant figures, the maximum volume of the box.

(2)

DO NOT WRITE IN THIS AREA

DO NOT WRITE IN THIS AREA

DO NOT WRITE IN THIS AREA



Leave blank

Question 7 continued

A series of horizontal lines for writing.

DO NOT WRITE IN THIS AREA

DO NOT WRITE IN THIS AREA

DO NOT WRITE IN THIS AREA







8.

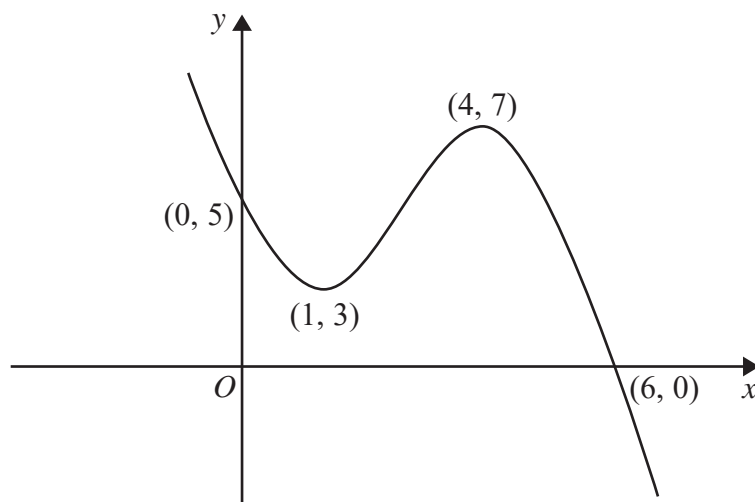
**Figure 3**

Figure 3 shows a sketch of the curve with equation  $y = f(x)$ ,  $x \in \mathbb{R}$ .

The curve crosses the  $y$ -axis at the point  $(0, 5)$  and crosses the  $x$ -axis at the point  $(6, 0)$ .

The curve has a minimum point at  $(1, 3)$  and a maximum point at  $(4, 7)$ .

On separate diagrams, sketch the curve with equation

(a)  $y = f(-x)$  **(3)**

(b)  $y = f(2x)$  **(3)**

On each diagram, show clearly the coordinates of any points of intersection of the curve with the two coordinate axes and the coordinates of the stationary points.

DO NOT WRITE IN THIS AREA

DO NOT WRITE IN THIS AREA

DO NOT WRITE IN THIS AREA



Leave  
blank

**Question 8 continued**

DO NOT WRITE IN THIS AREA

DO NOT WRITE IN THIS AREA

DO NOT WRITE IN THIS AREA



P 5 0 7 1 3 A 0 2 3 5 2

Leave  
blank

**Question 8 continued**

DO NOT WRITE IN THIS AREA

DO NOT WRITE IN THIS AREA

DO NOT WRITE IN THIS AREA





Leave  
blank

**Question 8 continued**

DO NOT WRITE IN THIS AREA

DO NOT WRITE IN THIS AREA

DO NOT WRITE IN THIS AREA

Q8

**(Total 6 marks)**



P 5 0 7 1 3 A 0 2 5 5 2

Leave  
blank

9. The first term of a geometric series is 20 and the common ratio is 0.9

(a) Find the value of the fifth term. (2)

(b) Find the sum of the first 8 terms, giving your answer to one decimal place. (2)

Given that  $S_{\infty} - S_N < 0.04$ , where  $S_N$  is the sum of the first  $N$  terms of this series,

(c) show that  $0.9^N < 0.0002$  (4)

(d) Hence find the smallest possible value of  $N$ . (2)

---

---

---

---

---

---

---

---

---

---

---

---

---

---

---

---

---

---

---

---

---

---

---

---

---

---

DO NOT WRITE IN THIS AREA

DO NOT WRITE IN THIS AREA

DO NOT WRITE IN THIS AREA



Leave  
blank

**Question 9 continued**

Lined writing area for the answer to Question 9.

DO NOT WRITE IN THIS AREA

DO NOT WRITE IN THIS AREA

DO NOT WRITE IN THIS AREA

















11. The circle  $C$  has equation

$$x^2 + y^2 - 8x - 10y + 16 = 0$$

The centre of  $C$  is at the point  $T$ .

(a) Find

- (i) the coordinates of the point  $T$ ,
- (ii) the radius of the circle  $C$ .

(4)

The point  $M$  has coordinates  $(20, 12)$ .

(b) Find the exact length of the line  $MT$ .

(2)

Point  $P$  lies on the circle  $C$  such that the tangent at  $P$  passes through the point  $M$ .

(c) Find the exact area of triangle  $MTP$ , giving your answer as a simplified surd.

(3)

---

---

---

---

---

---

---

---

---

---

---

---

---

---

---

---

---

---

---

---

---

---

---

---

DO NOT WRITE IN THIS AREA

DO NOT WRITE IN THIS AREA

DO NOT WRITE IN THIS AREA







Leave  
blank

**Question 11 continued**

Lined area for writing the answer to Question 11.

DO NOT WRITE IN THIS AREA

Q11

**(Total 9 marks)**



Leave  
blank

12. The line  $l_1$  has equation  $x + 3y - 11 = 0$

The point  $A$  and the point  $B$  lie on  $l_1$

Given that  $A$  has coordinates  $(-1, p)$  and  $B$  has coordinates  $(q, 2)$ , where  $p$  and  $q$  are integers,

(a) find the value of  $p$  and the value of  $q$ , (2)

(b) find the length of  $AB$ , giving your answer as a simplified surd. (2)

The line  $l_2$  is perpendicular to  $l_1$  and passes through the midpoint of  $AB$ .

(c) Find an equation for  $l_2$  giving your answer in the form  $y = mx + c$ ,  
where  $m$  and  $c$  are constants to be found. (5)

---

---

---

---

---

---

---

---

---

---

---

---

---

---

---

---

---

---

---

---

---

---

---

---

---

DO NOT WRITE IN THIS AREA

DO NOT WRITE IN THIS AREA

DO NOT WRITE IN THIS AREA











13.

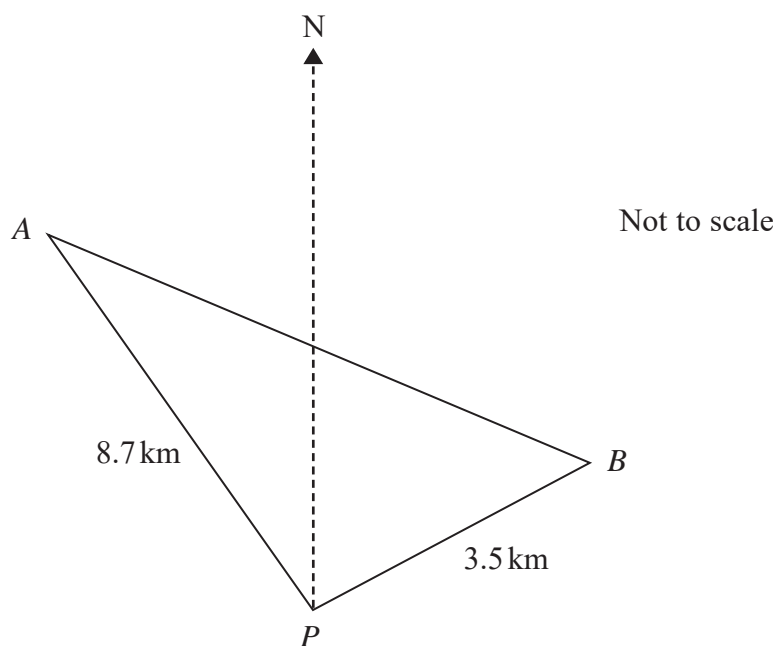


Figure 4

Figure 4 shows the position of two stationary boats,  $A$  and  $B$ , and a port  $P$  which are assumed to be in the same horizontal plane.

Boat  $A$  is 8.7 km on a bearing of  $314^\circ$  from port  $P$ .

Boat  $B$  is 3.5 km on a bearing of  $052^\circ$  from port  $P$ .

- (a) Show that angle  $APB$  is  $98^\circ$  (1)
- (b) Find the distance of boat  $B$  from boat  $A$ , giving your answer to one decimal place. (2)
- (c) Find the bearing of boat  $B$  from boat  $A$ , giving your answer to the nearest degree. (4)

---

---

---

---

---

---

---

---

---

---

DO NOT WRITE IN THIS AREA

DO NOT WRITE IN THIS AREA

DO NOT WRITE IN THIS AREA







DO NOT WRITE IN THIS AREA

Leave blank

Question 13 continued

Lined area for writing the answer to Question 13.

(Total 7 marks)

Q13

Mark box for Q13



14.

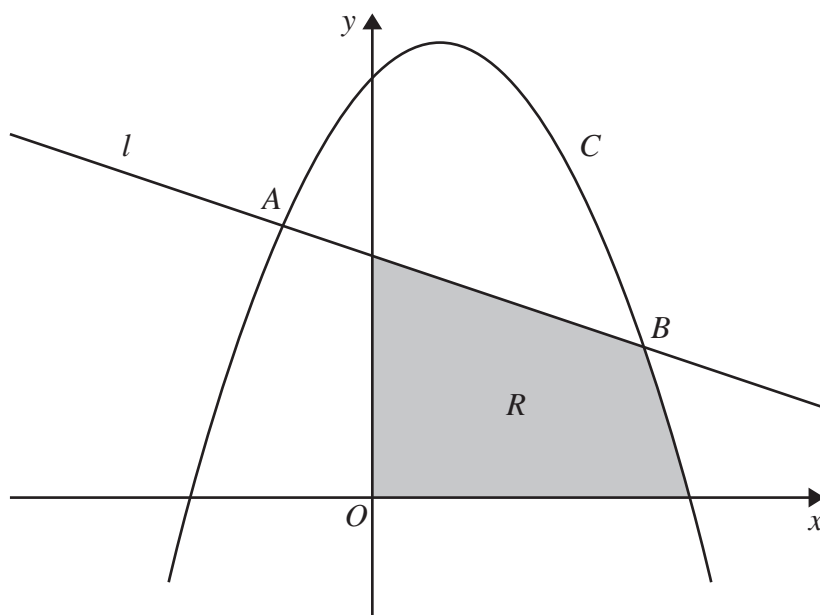


Figure 5

Figure 5 shows a sketch of part of the line  $l$  with equation  $y = 8 - x$  and part of the curve  $C$  with equation  $y = 14 + 3x - 2x^2$

The line  $l$  and the curve  $C$  intersect at the point  $A$  and the point  $B$  as shown.

(a) Use algebra to find the coordinates of  $A$  and the coordinates of  $B$ .

(5)

The region  $R$ , shown shaded in Figure 5, is bounded by the coordinate axes, the line  $l$ , and the curve  $C$ .

(b) Use algebraic integration to calculate the exact area of  $R$ .

(8)

---

---

---

---

---

---

---

---

---

---

---

---

---

---

---

---

---

---

---

---

---

---

---

---

---

---









Leave  
blank**Question 14 continued**

DO NOT WRITE IN THIS AREA

DO NOT WRITE IN THIS AREA

DO NOT WRITE IN THIS AREA

Q14

**(Total 13 marks)**

Leave  
blank

15. The binomial expansion, in ascending powers of  $x$ , of  $(1 + kx)^n$  is

$$1 + 36x + 126kx^2 + \dots$$

where  $k$  is a non-zero constant and  $n$  is a positive integer.

(a) Show that  $nk(n-1) = 252$  **(2)**

(b) Find the value of  $k$  and the value of  $n$ . **(5)**

(c) Using the values of  $k$  and  $n$ , find the coefficient of  $x^3$  in the binomial expansion of  $(1 + kx)^n$  **(3)**

---

---

---

---

---

---

---

---

---

---

---

---

---

---

---

---

---

---

---

---

---

---

---

---

---

---

---

---

DO NOT WRITE IN THIS AREA

DO NOT WRITE IN THIS AREA

DO NOT WRITE IN THIS AREA



Leave blank

**Question 15 continued**

Lined area for writing the answer to Question 15.

DO NOT WRITE IN THIS AREA

DO NOT WRITE IN THIS AREA

DO NOT WRITE IN THIS AREA



Leave blank

**Question 15 continued**

Area with horizontal lines for writing the answer to Question 15.

DO NOT WRITE IN THIS AREA

DO NOT WRITE IN THIS AREA

DO NOT WRITE IN THIS AREA

**Q15**

(Total 10 marks)

**TOTAL FOR PAPER: 125 MARKS**

**END**

