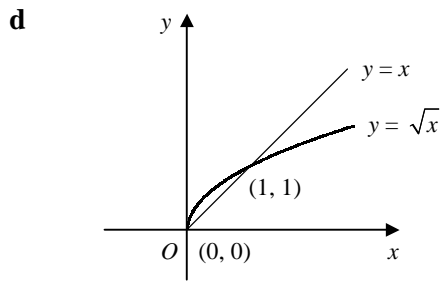
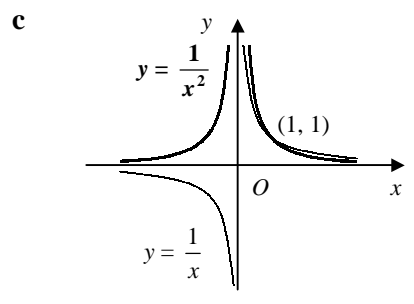
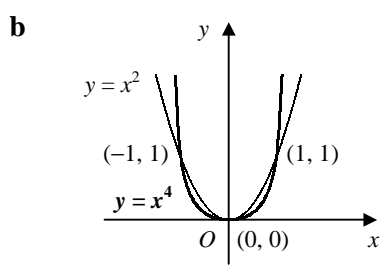
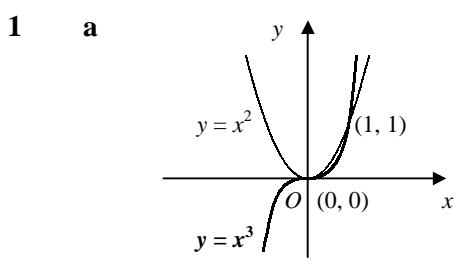
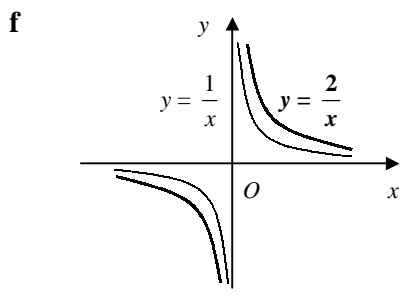
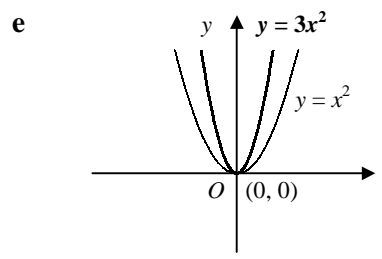


C1 **GRAPHS OF FUNCTIONS** *Answers - Worksheet A*



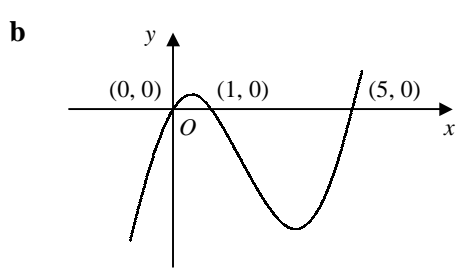
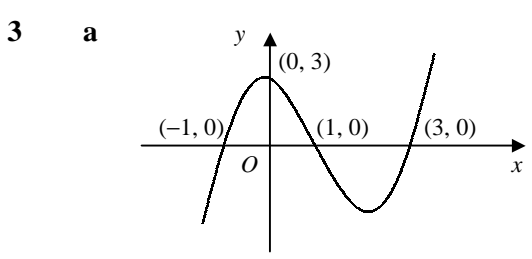
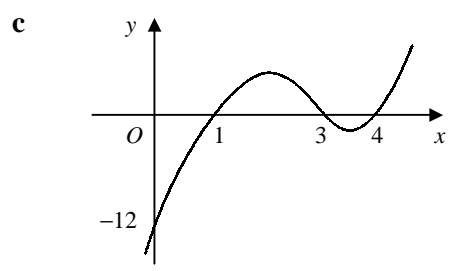
asymptotes: $y = 0$ and $x = 0$

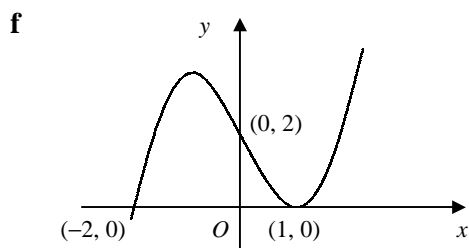
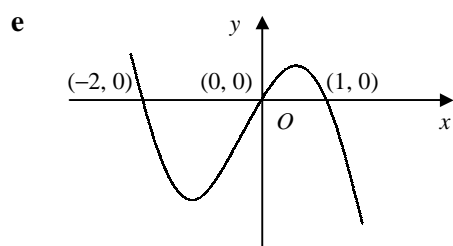
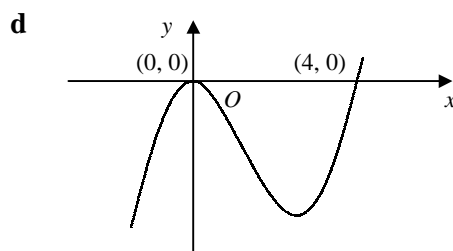
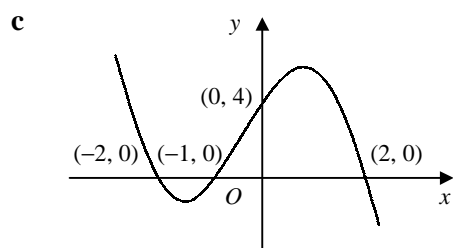


asymptotes: $y = 0$ and $x = 0$

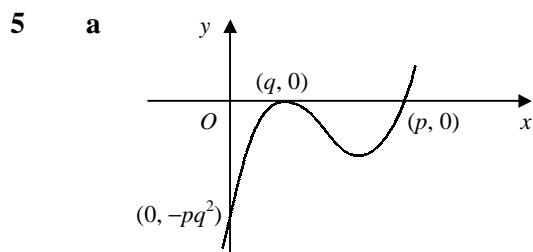
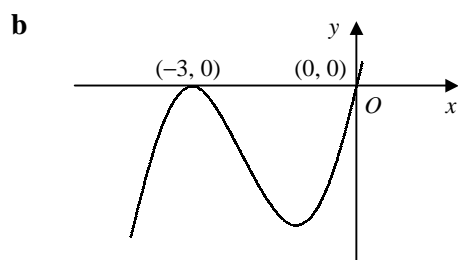
2 a $= (-1) \times (-3) \times (-4) = -12$

b $x = 1, 3, 4$

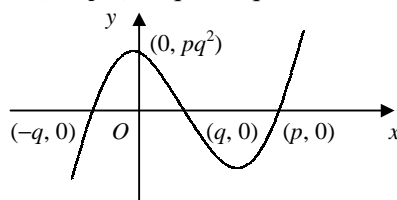




4 a $= x(x^2 + 6x + 9) = x(x + 3)^2$



b $y = (x - p)(x + q)(x - q)$



6 TP at $(1, -2)$
 $\therefore f(x) = k(x - 1)^2 - 2$
 crosses y-axis at $(0, -5)$
 $\therefore -5 = k - 2$
 $k = -3$
 $\therefore f(x) = -3(x - 1)^2 - 2$
 $[f(x) = -3x^2 + 6x - 5]$

7 crosses x-axis at $(-2, 0)$, $(1, 0)$ and $(2, 0)$
 $\therefore y = k(x + 2)(x - 1)(x - 2)$
 crosses y-axis at $(0, -8)$
 $\therefore -8 = 4k$
 $k = -2$
 $\therefore y = -2(x + 2)(x - 1)(x - 2)$
 $= -2(x + 2)(x^2 - 3x + 2)$
 $= -2(x^3 - 3x^2 + 2x + 2x^2 - 6x + 4)$
 $= -2x^3 + 2x^2 + 8x - 8$
 $\therefore a = -2, b = 2, c = 8, d = -8$

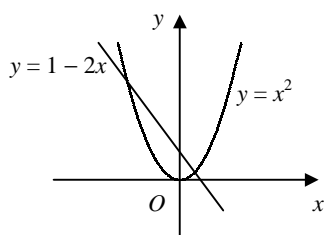
8 a 4

b 0

c 2

d 3

9 a



b 2 roots as $x^2 + 2x - 1 = 0 \Rightarrow x^2 = 1 - 2x$ and the graphs of $y = x^2$ and $y = 1 - 2x$ intersect at 2 points

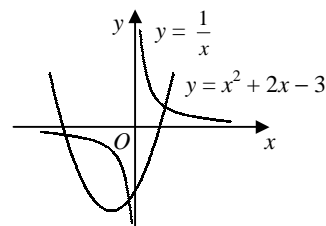
10 a $x^2 + 2x - 3 = (x + 1)^2 - 1 - 3 = (x + 1)^2 - 4 \therefore$ turning point is $(-1, -4)$

b $x^2 + 2x - 3 - \frac{1}{x} = 0 \Rightarrow x^2 + 2x - 3 = \frac{1}{x}$

\therefore roots where $y = x^2 + 2x - 3$ and $y = \frac{1}{x}$ intersect

graphs intersect at 1 point for $x > 0$ and 2 points for $x < 0$

\therefore one positive and two negative real roots



11 $x - 3 = x^2 - 5x + 6$

$$x^2 - 6x + 9 = 0$$

$$(x - 3)^2 = 0$$

repeated root

$\therefore y = x - 3$ is tangent to $y = x^2 - 5x + 6$

12 a $x^2 + 5x + 8 = 3x + 7$

$$x^2 + 2x + 1 = 0$$

$$(x + 1)^2 = 0$$

$$x = -1 \therefore x = -1, y = 4$$

b repeated root

$\therefore y = 3x + 7$ is tangent to $y = x^2 + 5x + 8$ at the point $(-1, 4)$

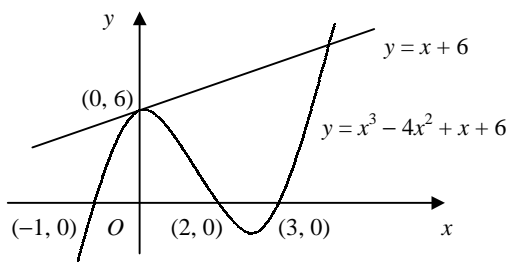
13 a $x^3 - 4x^2 + x + 6 = x + 6$

$$x^3 - 4x^2 = 0$$

$$x^2(x - 4) = 0$$

$$x = 0, 4 \therefore (0, 6) \text{ and } (4, 10)$$

b



14 $2x^2 - 5x + 1 = 3x + k$

$$2x^2 - 8x + 1 - k = 0$$

for tangent, repeated root $\therefore b^2 - 4ac = 0$

$$\therefore 64 - 8(1 - k) = 0$$

$$k = -7$$

15 $x^2 + ax + 18 = 2 - 5x$

$$x^2 + (a + 5)x + 16 = 0$$

intersect at 2 points $\therefore b^2 - 4ac > 0$

$$\therefore (a + 5)^2 - 64 > 0$$

$$a^2 + 10a - 39 > 0$$

$$(a + 13)(a - 3) > 0$$

$$a < -13 \text{ or } a > 3$$

16 a $x^2 - 2x + 6 = px + p$

$$x^2 - (p + 2)x + 6 - p = 0$$

for tangent, repeated root $\therefore b^2 - 4ac = 0$

$$\therefore (p + 2)^2 - 4(6 - p) = 0$$

$$p^2 + 8p - 20 = 0$$

$$(p + 10)(p - 2) = 0$$

$$p = -10, 2$$

b $x^2 - 2x + 6 = qx + 7$

$$x^2 - (q + 2)x - 1 = 0$$

for tangent, repeated root $\therefore b^2 - 4ac = 0$

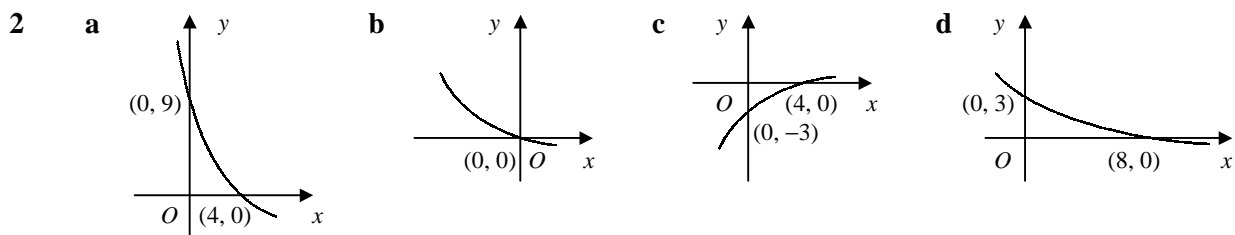
$$\Rightarrow (q + 2)^2 + 4 = 0$$

but for real q , $(q + 2)^2 \geq 0 \therefore$ no solutions

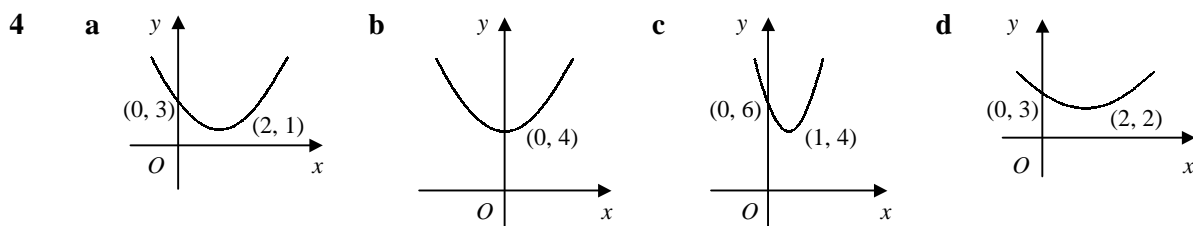
C1 GRAPHS OF FUNCTIONS

Answers - Worksheet B

- 1 a translated 1 unit in positive x -direction
 c stretched by a factor of 2 in y -direction
 e reflected in the x -axis
 g reflected in the y -axis
- b translated 3 units in negative y -direction
 d stretched by a factor of $\frac{1}{4}$ in x -direction
 f stretched by a factor of $\frac{1}{5}$ in y -direction
 h stretched by a factor of $\frac{3}{2}$ in x -direction



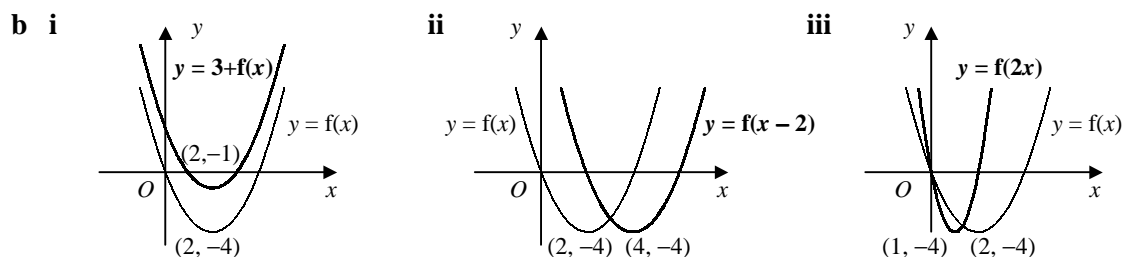
- 3 a $y = 2x + 5 + 1 \Rightarrow y = 2x + 6$
 c $y = 3(x + 4) + 1 \Rightarrow y = 3x + 13$
- b $y = 3(1 - 4x) \Rightarrow y = 3 - 12x$
 d $y = -(4x - 7) \Rightarrow y = 7 - 4x$



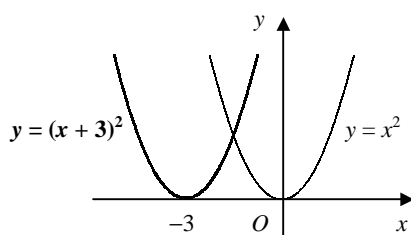
- 5 a stretch by a factor of 4 in y -direction
 c reflection in the x -axis
- b translation by 2 units in positive x -direction
 d translation by 5 units in positive y -direction
- 6 a $y = 2(x^2 + 2)$
 stretch by a factor of 2 in y -direction
- b $y = (x^2 + 2) - 7$
 translation by 7 units in negative y -direction
- c $y = (\frac{1}{3}x)^2 + 2$
 stretch by a factor of 3 in x -direction
- d $y = (x + 2)^2 + 2$
 translation by 2 units in negative x -direction

- 7 a $y = (x - 1)^2 + 2(x - 1) \Rightarrow y = x^2 - 1$
 b $y = (3x)^2 - 4(3x) + 5 \Rightarrow y = 9x^2 - 12x + 5$
 c $y = (-x)^2 + (-x) - 6 \Rightarrow y = x^2 - x - 6$
 d $y = 2(\frac{1}{2}x)^2 - 3(\frac{1}{2}x) \Rightarrow y = \frac{1}{2}x^2 - \frac{3}{2}x$

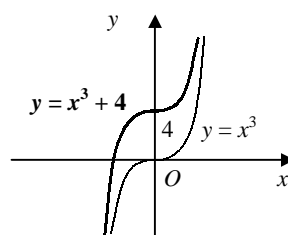
- 8 a $f(x) = (x - 2)^2 - 4 \therefore$ turning point $(2, -4)$



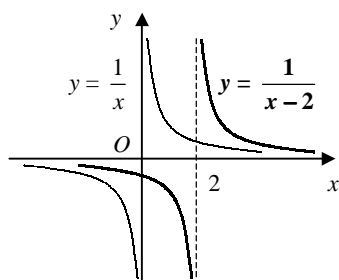
9 a



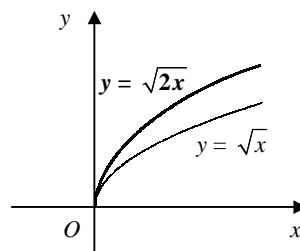
b



c



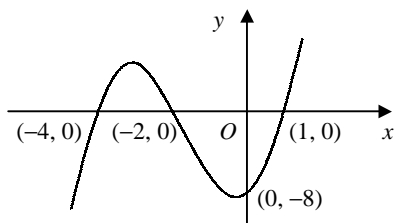
d



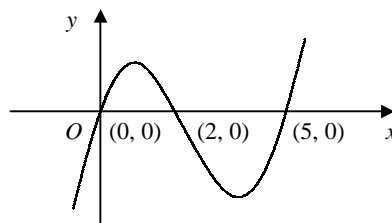
- 10 a let $f(x) = \frac{1}{x} \therefore \frac{1}{3x} = \frac{1}{3}f(x)$ or $f(3x)$
 \therefore stretch by a factor of $\frac{1}{3}$ in y -direction
 or stretch by a factor of $\frac{1}{3}$ in x -direction

- b let $g(x) = x^2 \therefore 4x^2 = 4g(x)$ or $g(2x)$
 \therefore stretch by a factor of 4 in y -direction
 or stretch by a factor of $\frac{1}{2}$ in x -direction

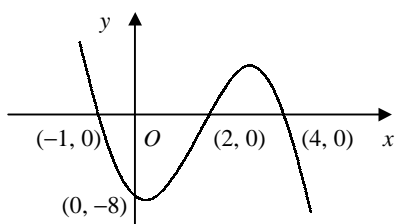
11 a



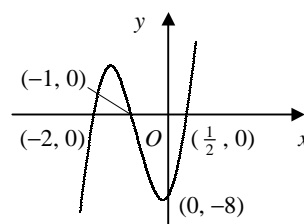
b



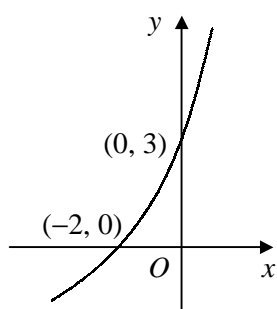
c



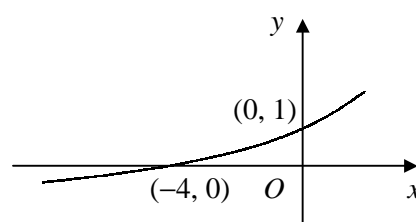
d

12 a $(a, 3b)$ b $(a, b + 4)$ c $(a - 1, b)$ d $(3a, b)$

13 a



b



C1 GRAPHS OF FUNCTIONS

Answers - Worksheet C

1 a $4x^2 - 9x + 5 = 3x - 4$

$$4x^2 - 12x + 9 = 0$$

$$(2x - 3)^2 = 0$$

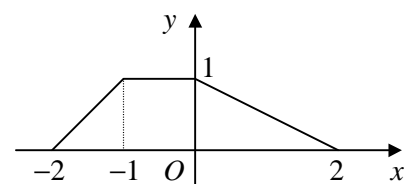
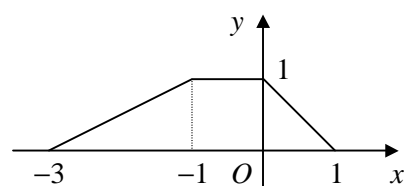
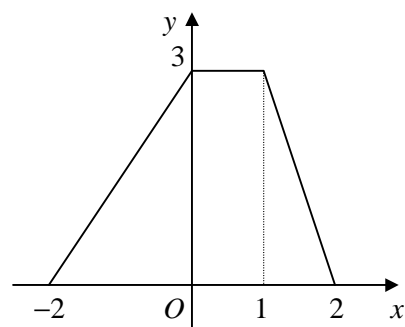
$$x = \frac{3}{2}$$

$$\therefore x = \frac{3}{2}, y = \frac{1}{2}$$

b $y = 3x - 4$ is a tangent to the curve

$$y = 4x^2 - 9x + 5 \text{ at the point } \left(\frac{3}{2}, \frac{1}{2}\right)$$

2 a



3 a $x^2 + 5x + 2 = 4x + 1$

$$x^2 + x + 1 = 0$$

$$b^2 - 4ac = 1 - 4 = -3$$

$$b^2 - 4ac < 0 \therefore \text{no real roots}$$

\therefore does not intersect

b $x^2 + 5x + 2 = mx + 1$

$$x^2 + (5 - m)x + 1 = 0$$

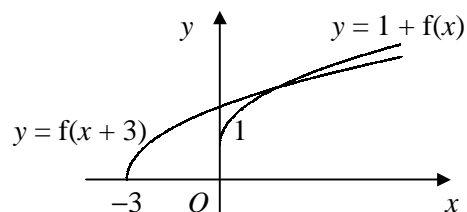
only one root $\therefore b^2 - 4ac = 0$

$$(5 - m)^2 - 4 = 0$$

$$5 - m = \pm 2$$

$$m = 3 \text{ or } 7$$

4 a



b $1 + \sqrt{x} = \sqrt{x+3}$

$$(1 + \sqrt{x})^2 = x + 3$$

$$1 + 2\sqrt{x} + x = x + 3$$

$$\sqrt{x} = 1$$

$$x = 1 \therefore (1, 2)$$

5 $x^2 + kx - 3 = k - x$

$$x^2 + (k+1)x - (k+3) = 0$$

$$b^2 - 4ac = (k+1)^2 + 4(k+3)$$

$$= k^2 + 6k + 13$$

$$= (k+3)^2 - 9 + 13$$

$$= (k+3)^2 + 4$$

real $k \Rightarrow (k+3)^2 \geq 0$

$$\Rightarrow (k+3)^2 + 4 \geq 4$$

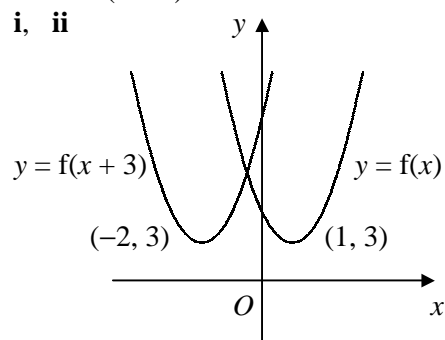
$$\therefore b^2 - 4ac > 0$$

\Rightarrow real and distinct roots

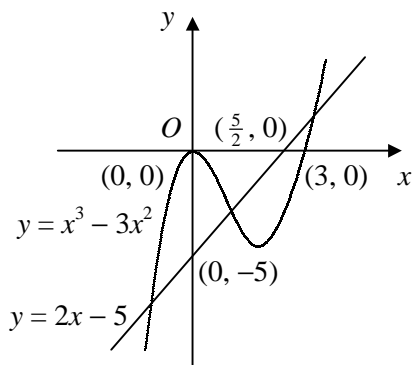
$\therefore l$ intersects C at exactly two points

6 a $f(x) = 2[x^2 - 2x] + 5$
 $= 2[(x-1)^2 - 1] + 5$
 $= 2(x-1)^2 + 3$

b i, ii



7 a $y = x^3 - 3x^2 = x^2(x - 3)$

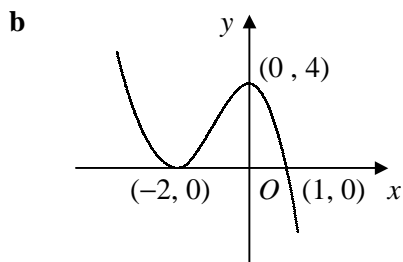


b 3 real roots

$$x^3 - 3x^2 - 2x + 5 = 0 \Rightarrow x^3 - 3x^2 = 2x - 5$$

the graphs of $y = x^3 - 3x^2$ and $y = 2x - 5$ intersect at three points

9 a LHS = $(1 - x)(2 + x)^2$
 $= (1 - x)(4 + 4x + x^2)$
 $= (4 + 4x + x^2) - x(4 + 4x + x^2)$
 $= 4 + 4x + x^2 - 4x - 4x^2 - x^3$
 $= 4 - 3x^2 - x^3$
 $= \text{RHS}$



8 touches x -axis at $(2, 0)$

$$\therefore y = k(x - 2)^2$$

crosses y -axis at $(0, -6)$

$$\therefore -6 = 4k$$

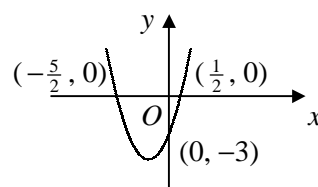
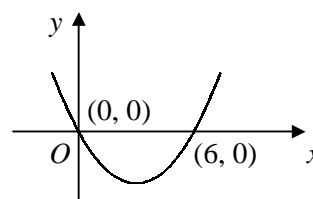
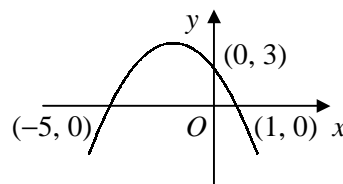
$$k = -\frac{3}{2}$$

$$\therefore y = -\frac{3}{2}(x - 2)^2$$

$$y = -\frac{3}{2}x^2 + 6x - 6$$

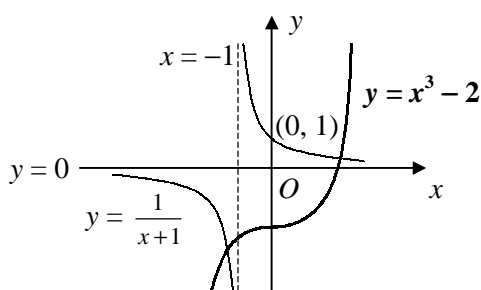
$$\therefore a = -\frac{3}{2}, b = 6 \text{ and } c = -6$$

10 a



11 a translation by 1 unit in the negative x -direction

b



c $x^3 - \frac{1}{x+1} = 2 \Rightarrow x^3 - 2 = \frac{1}{x+1}$

the graphs $y = x^3 - 2$ and $y = \frac{1}{x+1}$ intersect

at one point for $x > 0$ and at one point for $x < 0$

\therefore one positive and one negative real root