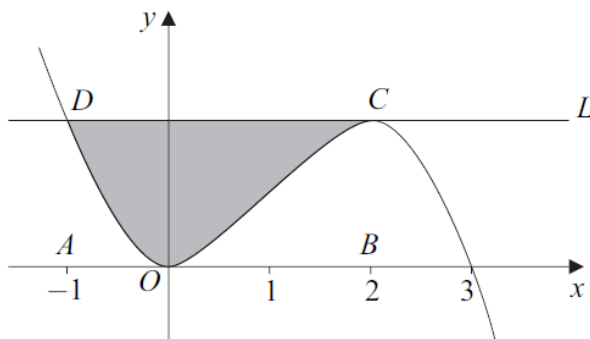


Core 1 Integration Questions

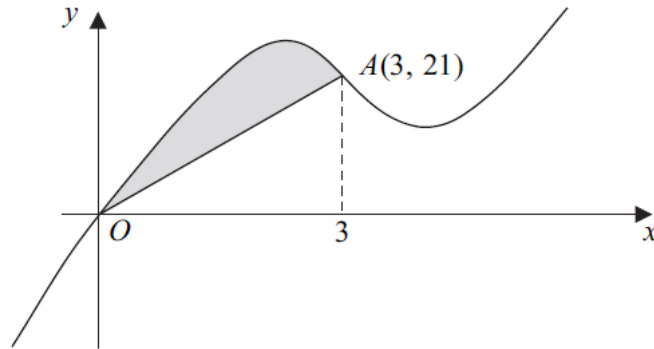
- 8 The diagram shows the curve with equation $y = 3x^2 - x^3$ and the line L .



The points A and B have coordinates $(-1, 0)$ and $(2, 0)$ respectively. The curve touches the x -axis at the origin O and crosses the x -axis at the point $(3, 0)$. The line L cuts the curve at the point D where $x = -1$ and touches the curve at C where $x = 2$.

- (a) Find the area of the rectangle $ABCD$. (2 marks)
- (b) (i) Find $\int (3x^2 - x^3) dx$. (3 marks)
- (ii) Hence find the area of the shaded region bounded by the curve and the line L . (4 marks)
- (c) For the curve above with equation $y = 3x^2 - x^3$:
- (i) find $\frac{dy}{dx}$; (2 marks)
- (ii) hence find an equation of the tangent at the point on the curve where $x = 1$; (3 marks)
- (iii) show that y is decreasing when $x^2 - 2x > 0$. (2 marks)
- (d) Solve the inequality $x^2 - 2x > 0$. (2 marks)
-

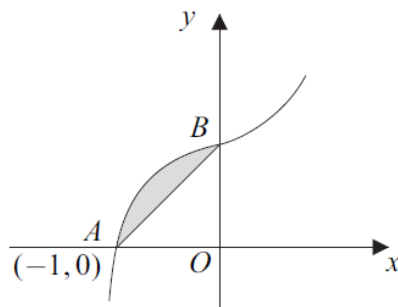
5 The curve with equation $y = x^3 - 10x^2 + 28x$ is sketched below.



The curve crosses the x -axis at the origin O and the point $A(3, 21)$ lies on the curve.

- (b) (i) Find $\int (x^3 - 10x^2 + 28x) dx$. (3 marks)
- (ii) Hence show that $\int_0^3 (x^3 - 10x^2 + 28x) dx = 56\frac{1}{4}$. (2 marks)
- (iii) Hence determine the area of the shaded region bounded by the curve and the line OA . (3 marks)
-

6 The curve with equation $y = 3x^5 + 2x + 5$ is sketched below.



The curve cuts the x -axis at the point $A(-1, 0)$ and cuts the y -axis at the point B .

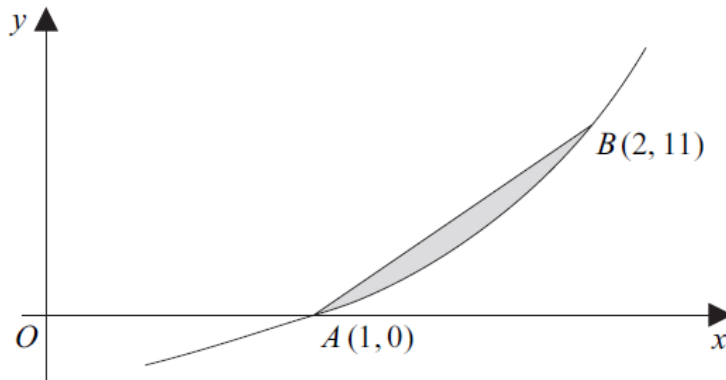
- (a) (i) State the coordinates of the point B and hence find the area of the triangle AOB , where O is the origin. (3 marks)
- (ii) Find $\int (3x^5 + 2x + 5) dx$. (3 marks)

(iii) Hence find the area of the shaded region bounded by the curve and the line AB .
(4 marks)

(b) (i) Find the gradient of the curve with equation $y = 3x^5 + 2x + 5$ at the point $A(-1, 0)$.
(3 marks)

(ii) Hence find an equation of the tangent to the curve at the point A .
(1 mark)

(b) The curve with equation $y = x^3 + 4x - 5$ is sketched below.



The curve cuts the x -axis at the point $A(1, 0)$ and the point $B(2, 11)$ lies on the curve.

(i) Find $\int (x^3 + 4x - 5) dx$.
(3 marks)

(ii) Hence find the area of the shaded region bounded by the curve and the line AB .
(4 marks)

Core 1 Integration Answers

8(a)	$y_D = 3 + 1 = 4$ or $y_C = 12 - 8 = 4$ Area $ABCD = 3 \times 4 = 12$	M1 A1	2	Attempt at either y coordinate
(b)(i)	$x^3 - \frac{x^4}{4} (+C)$	M1 A1 A1	3	Increase one power by 1 One term correct unsimplified All correct unsimplified (condone no $+C$)
(ii)	Sub limits -1 and 2 into their (b) (i) ans $[8 - 4] - \left[-1 - \frac{1}{4}\right] = 5\frac{1}{4}$ Shaded area = "their" (rectangle - integral) $= 12 - 5\frac{1}{4} = 6\frac{3}{4}$	M1 A1 M1 A1	4	May use both $-1, 0$ and $0, 2$ instead Alt method: difference of two integrals CSO . Attempted M2, A2
(c)(i)	$\frac{dy}{dx} = 6x - 3x^2$	M1 A1	2	One term correct All correct (no $+C$ etc)
(ii)	When $x = 1, y = 2$ when $x = 1,$ $\frac{dy}{dx} = 3$ as 'their' grad of tgt Tangent is $y - 2 = 3(x - 1)$	B1 M1✓ A1	3	May be implied by correct tgt equation Ft their derivative when $x = 1$ Any correct form $y = 3x - 1$ etc
(iii)	Decreasing when $\frac{dy}{dx} = 6x - 3x^2 < 0$ $3(2x - x^2) < 0 \Rightarrow x^2 - 2x > 0$	M1 A1	2	Watch no fudging here!! May work backwards in proof. AG (be convinced no step incorrect)
(d)	Two critical points 0 and 2 $x > 2, x < 0$ ONLY	M1 A1	2	Marked on diagram or in solution or M1 A0 for $0 < x < 2$ or $0 > x > 2$ SC B1 for $x > 2$ (or $x < 0$)
Total			18	

(b)(i)	$\frac{x^4}{4} - \frac{10x^3}{3} + 14x^2 (+c)$	M1 A1 A1	3	One term correct unsimplified Another term correct unsimplified All correct unsimplified (condone missing $+c$)
(ii)	$\left[\frac{81}{4} - 90 + 126\right] (-0)$ $= 56\frac{1}{4}$	M1 A1	2	Attempt to sub limit 3 into their (b)(i) AG Integration, limit sub'n all correct
(iii)	Area of triangle = $31\frac{1}{2}$ Shaded Area = $56\frac{1}{4} - \text{triangle area}$ $= 24\frac{3}{4}$	B1 M1 A1	3	Correct unsimplified $\frac{1}{2} \times 21 \times 3$ Or equivalent such as $\frac{99}{4}$

6(a)(i)	$B(0,5)$ $\text{Area } AOB = \frac{1}{2} \times 1 \times 5$ $= 2\frac{1}{2}$	B1 M1 A1	3	Condone slip in number or a minus sign
(ii)	$\frac{3x^6}{6} + \frac{2x^2}{2} + 5x \text{ or } \frac{x^6}{2} + x^2 + 5x$ (may have + c or not)	M1 A1 A1	3	Raise one power by 1 One term correct All correct unsimplified
(iii)	$\text{Area under curve} = \int_{-1}^0 f(x) dx$ $\left[0\right] - \left[\frac{1}{2} + 1 - 5\right]$ $\text{Area under curve} = 3\frac{1}{2}$ $\text{Area of shaded region} = 3\frac{1}{2} - 2\frac{1}{2} = 1$	B1 M1 A1 B1✓	4	Correctly written or $F(0) - F(-1)$ correct Attempt to sub limit(s) of -1 (and 0) Must have integrated CSO (no fudging) FT their integral and triangle (very generous)
(b)(i)	$\frac{dy}{dx} = 15x^4 + 2$ when $x = -1$, gradient = 17	M1 A1 A1	3	One term correct All correct (no +c etc) cso
(ii)	$y = \text{"their gradient"}(x+1)$	B1✓	1	Must be finding tangent – not normal any form e.g. $y = 17x + 17$
Total			14	

(b)(i)	$\int \dots dx = \frac{x^4}{4} + 2x^2 - 5x (+c)$	M1 A1 A1	3	one term correct unsimplified second term correct unsimplified all correct unsimplified
(ii)	$\left[4 + 8 - 10\right] - \left[\frac{1}{4} + 2 - 5\right]$ $= 4\frac{3}{4}$ $\text{Area of } \Delta = \frac{1}{2} \times 11 = 5\frac{1}{2}$ $\Rightarrow \text{shaded area} = 5\frac{1}{2} - 4\frac{3}{4}$ $= \frac{3}{4}$	M1 A1 B1 A1	4	correct use of limits 1 and 2; $F(2) - F(1)$ attempted correct unsimplified combined integral of $7x - 6 - x^3$ scores M1 for limits correctly used then A3 correct answer with all working correct