

Centre Number	Candidate Number	Name
---------------	------------------	------

UNIVERSITY OF CAMBRIDGE INTERNATIONAL EXAMINATIONS
International General Certificate of Secondary Education

GEOGRAPHY

0460/04

Paper 4 Alternative to Coursework

October/November 2005

INSERT

1 hour 45 minutes

READ THESE INSTRUCTIONS FIRST

This insert contains the Figures, Tables and Photograph referred to in the Questions.

Write your Centre number, candidate number and name in the spaces provided and attach it to your answer paper/answer booklet.

This document consists of **5** printed pages and **3** blank pages.



2

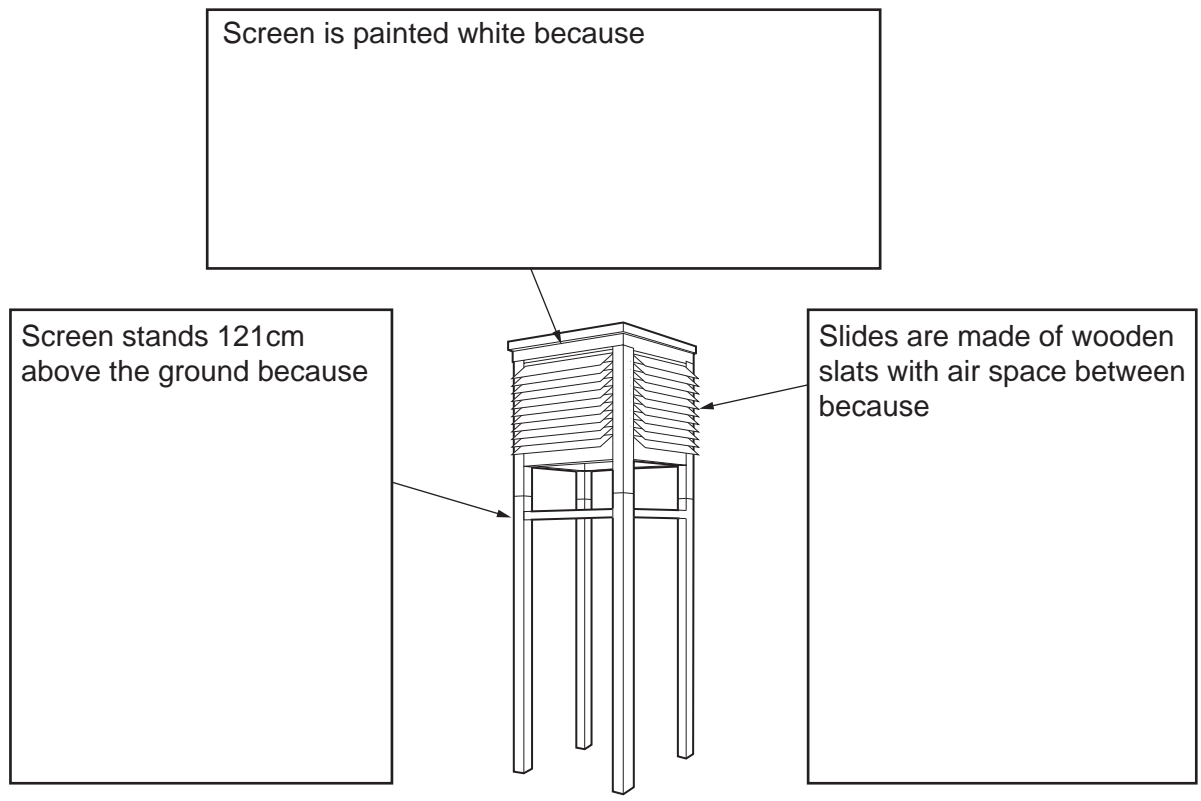


Fig. 1 for Question 1

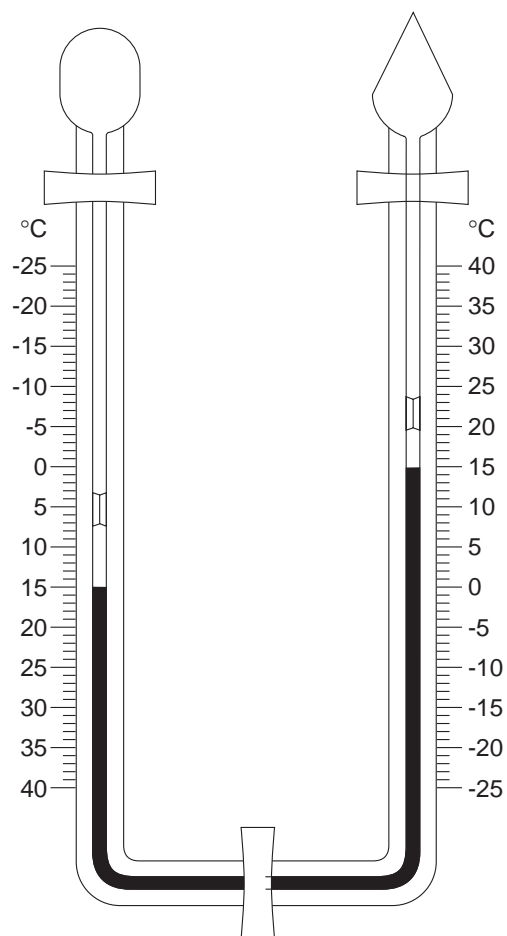


Fig. 2 for Question 1

Table 1

	Monday	Tuesday	Wednesday	Thursday	Friday	Saturday	Sunday
Max. temperature (°C)	24	26	31	34	25	26	24
Min. temperature (°C)	14	15	18	18	18	15	12
Average daily December temperature (°C)	19	20.5		26	21.5	20.5	18
Average daily July temperature (°C)	13	11	13	11	12.5	13	12.5

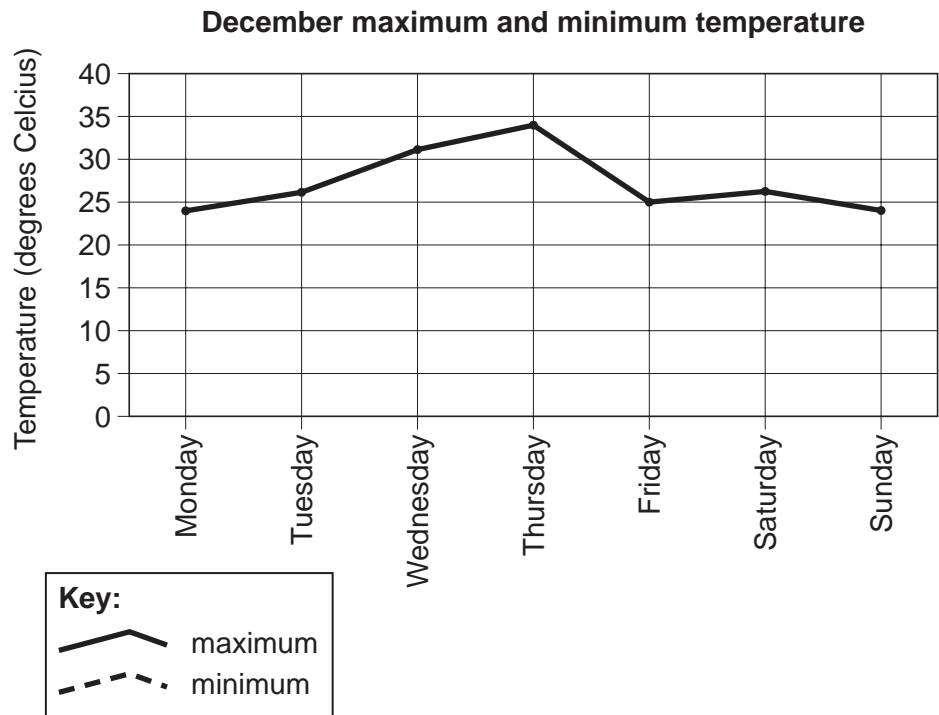


Fig. 3 for Question 1

Table 2

Bi-polar scoring system

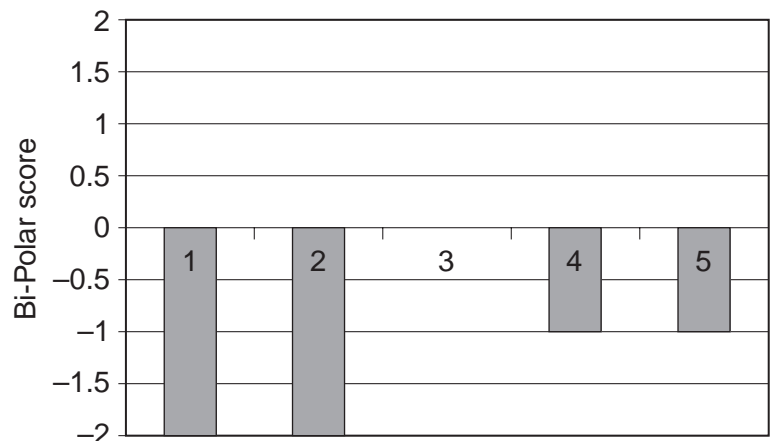
Negative variables	-2	-1	0	+1	+2	Negative variables
Dirty from litter						Clear from litter
Noisy						Quiet
Unmaintained roads and pavements						Well maintained roads and pavements
Crowded						Few people
Unattractive						Attractive



Fig. 4 for Question 2

			Area A	Area B
Variables of the survey	1	Litter	-2	+2
	2	Noise	-2	+1
	3	Maintenance	0	0
	4	People	-1	0
	5	Attraction	-1	+2
		Total	-6	+5

Table 3



Variables of the survey

Key: Area A Area B

Fig. 5 for Question 2

5

Table 4

Use of building	Hotels or Hostels	Selling food	Clothes shops	Craft or souvenir shops	Offices or Banks	Public Buildings	Other
Number of buildings	6	13	18	8	5	7	11

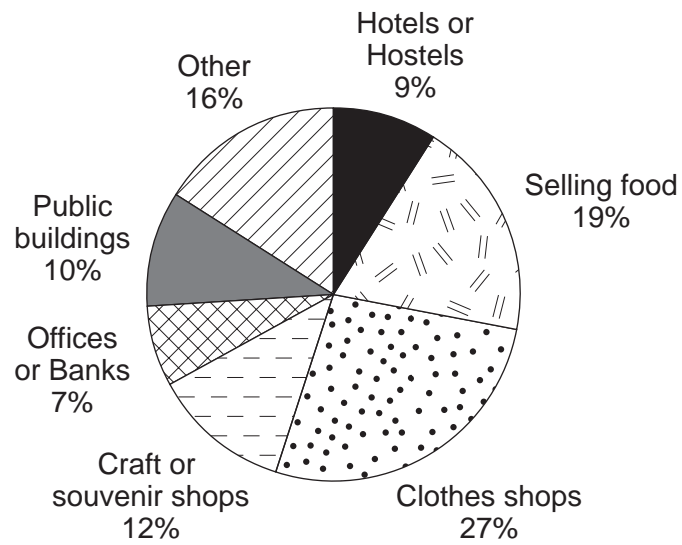


Fig. 6 for Question 2

BLANK PAGE

BLANK PAGE

BLANK PAGE