



# Cambridge IGCSE™


CANDIDATE  
NAME

CENTRE  
NUMBER

--	--	--	--	--

CANDIDATE  
NUMBER

--	--	--	--



## GEOGRAPHY

0460/21

Paper 2 Geographical Skills

May/June 2023

1 hour 30 minutes

You must answer on the question paper.

You will need: Inset (enclosed)

Plain paper

1:25 000 scale map (enclosed)

Protractor

Calculator

Ruler

### INSTRUCTIONS

- Answer **all** questions
- Use a black or dark blue pen. You may use an HB pencil for any diagrams or graphs
- Write your name, centre number and candidate number in the boxes at the top of the page.
- Write your answer to each question in the space provided.
- Do **not** use an erasable pen or correction fluid.
- Do **not** write on any bar codes
- If additional space is needed, you should use the lined pages at the end of this booklet; the question number or numbers must be clearly shown.

### INFORMATION

- The total mark for this paper is 60.
- The number of marks for each question or part question is shown in brackets [ ].
- The insert contains additional resources referred to in the questions

#### Definitions

MEDCs – More Economically Developed Countries

LEDCs – Less Economically Developed Countries

This document has **20** pages. Any blank pages are indicated.

1 Study the map extract for Kilmarnock Scotland. The scale is 1:25 000.

(a) Fig. 1.1 shows some of the features around Kilmarnock. Study Fig. 1.1 and the map extract and answer the questions below.

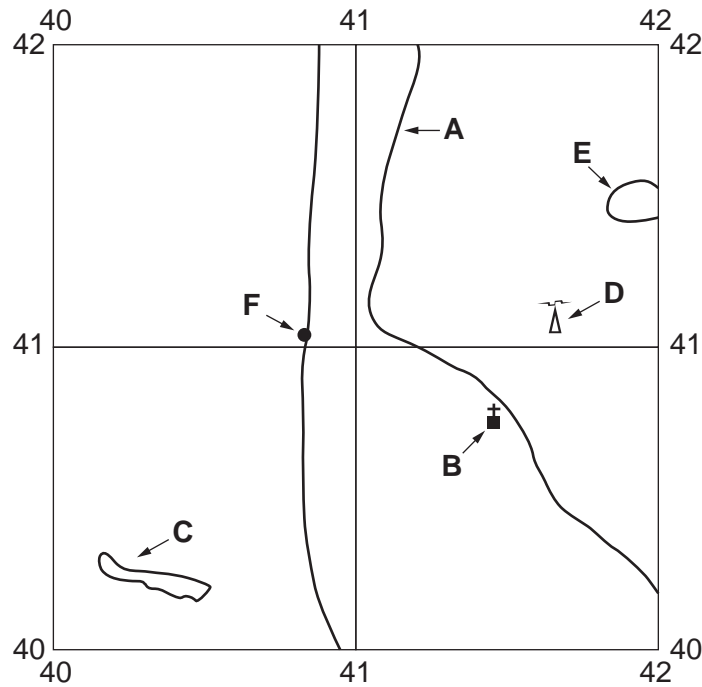


Fig. 1.1

Using the map extract, identify the following features shown in Fig. 1.1:

- (i) the type of road at A  
 ..... [1]
- (ii) feature B  
 ..... [1]
- (iii) the land use at C  
 ..... [1]
- (iv) feature D  
 ..... [1]
- (v) the height above sea level of the contour line at E.  
 ..... metres [1]

(b) Study Fig. 1.1 and the map extract .

(i) Using the map extract , measure the distance along the railway line from the railway station at Kilmaurs (F) to the railway station at Kilmarnock

..... km [1]

(ii) Measure the bearing from the railway station at Kilmaurs (F) to the railway station at Kilmarnock

..... degrees [1]

(iii) What is the six figure grid reference for the railway station at Kilmarnock

..... [1]

(c) Annanhill Golf Course (4137) is in the south-west of the map extract .

(i) Which two of the following statements are true about the location of Annanhill Golf Course ? Tick (✓) two boxes below.

	tick (✓)
it has a north-west-facing slope	
it has a south-east-facing slope	
it has a south-west-facing slope	
it is in the CBD	
it is in the rural-urban fringe	
it is in the countryside	

[2]

(ii) Using map evidence , suggest reasons for the location of the large leisure facility, Annanhill Golf Course .

.....  
.....  
.....  
.....  
.....  
..... [3]





2 Study Fig. 2.1, which shows the population structure of selected countries in 2019.

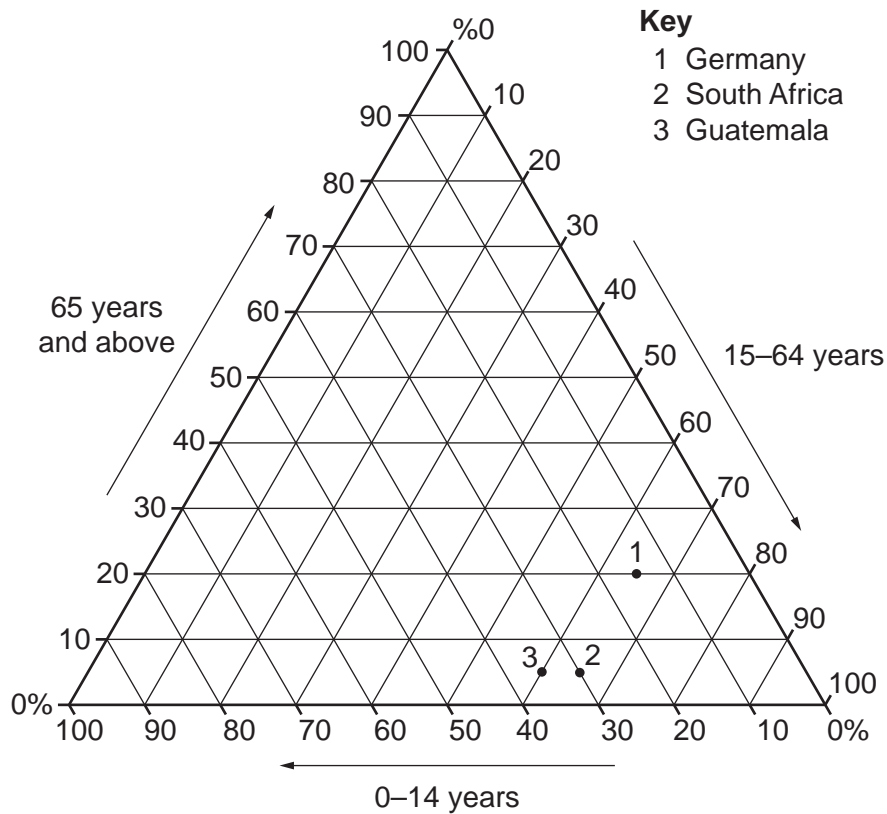


Fig. 2.1

(a) What percentage of Germany's population is aged 0–14 years?

..... % [1]

(b) (i) Using Table 2.1, **plot and label** the position of the world's population structure on Fig. 2.1 with a number 4.

Table 2.1

	0–14 years	15–64 years	65 years and above
world	25%	65%	10%

[1]

(ii) Suggest another type of graph which could be used to show the world's population structure.

..... [1]

(iii) How do the percentages of Germany's and the world's population aged 0–14 years differ? Do **not** use statistics in your answer.

..... [1]

(c) Suggest **four** problems caused by an ageing population.

- 1 .....
- .....
- 2 .....
- .....
- 3 .....
- .....
- 4 .....
- ..... [4]

[Total: 8]

3 Study Figs 3.1, 3.2 and 3.3 (Insert), which show different areas of the city of Kuala Lumpur, Malaysia, an LEDC.

(a) (i) Identify each land-use zone. Choose your answers from the following:

industrial      residential      CBD      rural-urban fringe      transportation

Fig. 3.1 .....

Fig. 3.2 .....

Fig. 3.3 .....

[3]

(ii) Suggest one reason why each area shown in Figs 3.1, 3.2 and 3.3 has high-rise buildings

.....

..... [1]

(b) Figs 3.4 and 3.5 (Insert) show models of urban land use in an MEDC and an LEDC.

Compare the urban land-use models shown in Figs 3.4 and 3.5.

.....

.....

.....

.....

.....

.....

.....

..... [4]

[Total: 8]



**BLANK PAGE**

4 Table 4.1 gives the definitions of some terms used in the study of rivers and drainage basins

**Table 4.1**

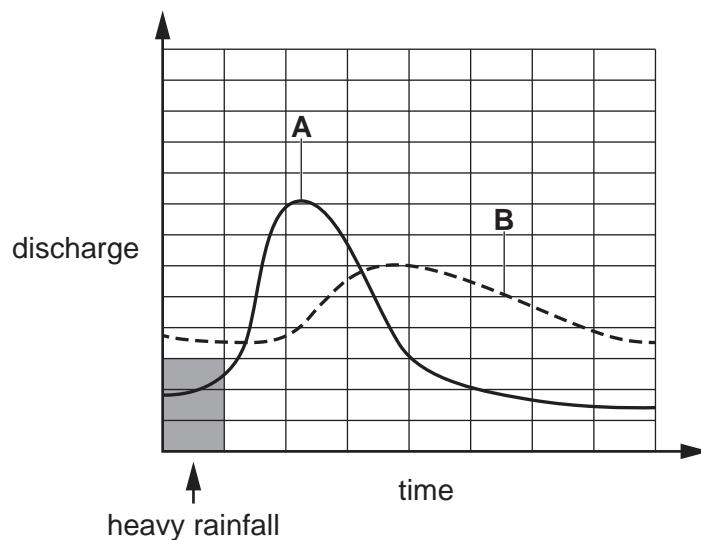
letter	definition
A	when a gas (water vapour) turns to liquid
B	where two rivers meet
C	a stream which feeds into a larger stream or river
D	the highest point of land which divides drainage basins
E	when liquid turns into gas (water vapour)

(a) For each of the following terms give the letter for the correct definition from Table 4.1:

	letter
waterlogged	
tributary	
evaporation	

[3]

(b) Fig. 4.1 shows the discharge for two rivers. Both rivers receive the same amount of rainfall at the same time.



**Fig. 4.1**

(i) Compare the discharge of river A with river B in Fig. 4.1.

.....

.....

.....

.....

[2]

(ii) Using Fig. 4.1, suggest **three** ways in which the drainage basins of river A and river B differ.

1 .....

.....

2 .....

.....

3 .....

..... [3]

[Total: 8]

5 Fig. 5.1 shows the global distribution of tropical rainforests

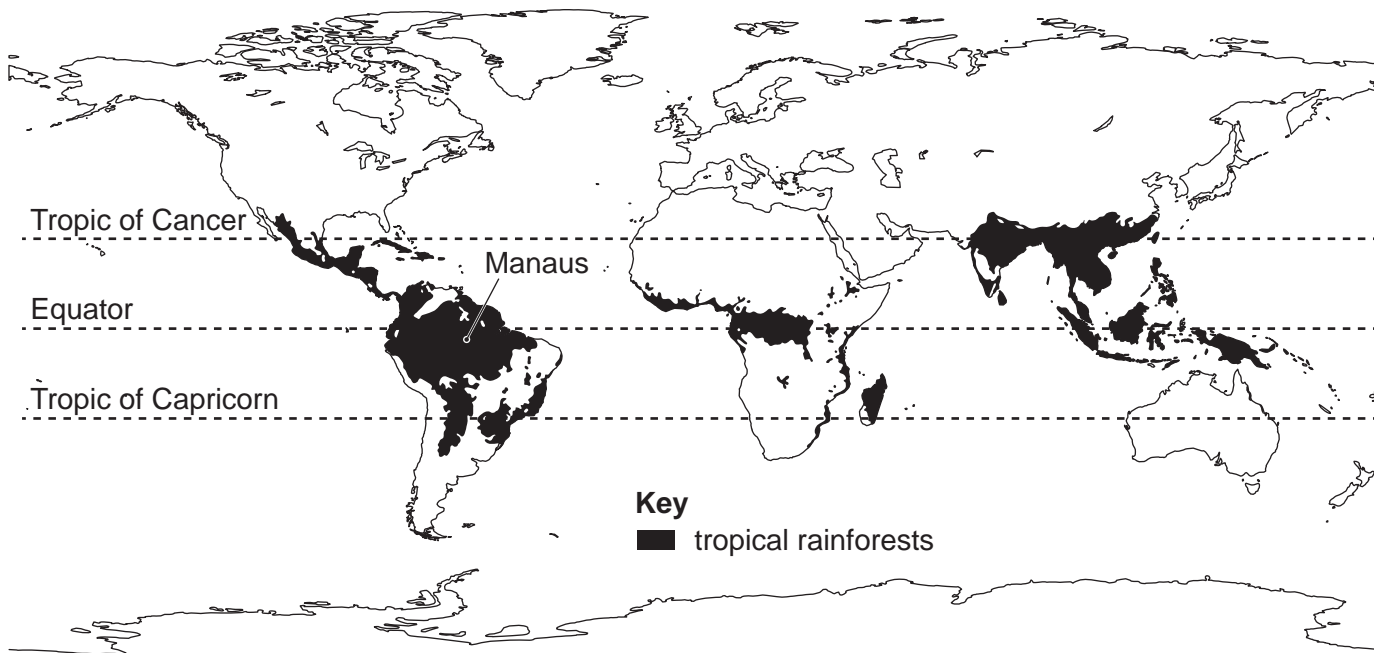


Fig. 5.1

(a) Using Fig. 5.1, describe the global distribution of tropical rainforests

.....

.....

.....

.....

.....

.....

..... [3]

(b) Fig. 5.2 shows the climate of Manaus, Brazil.

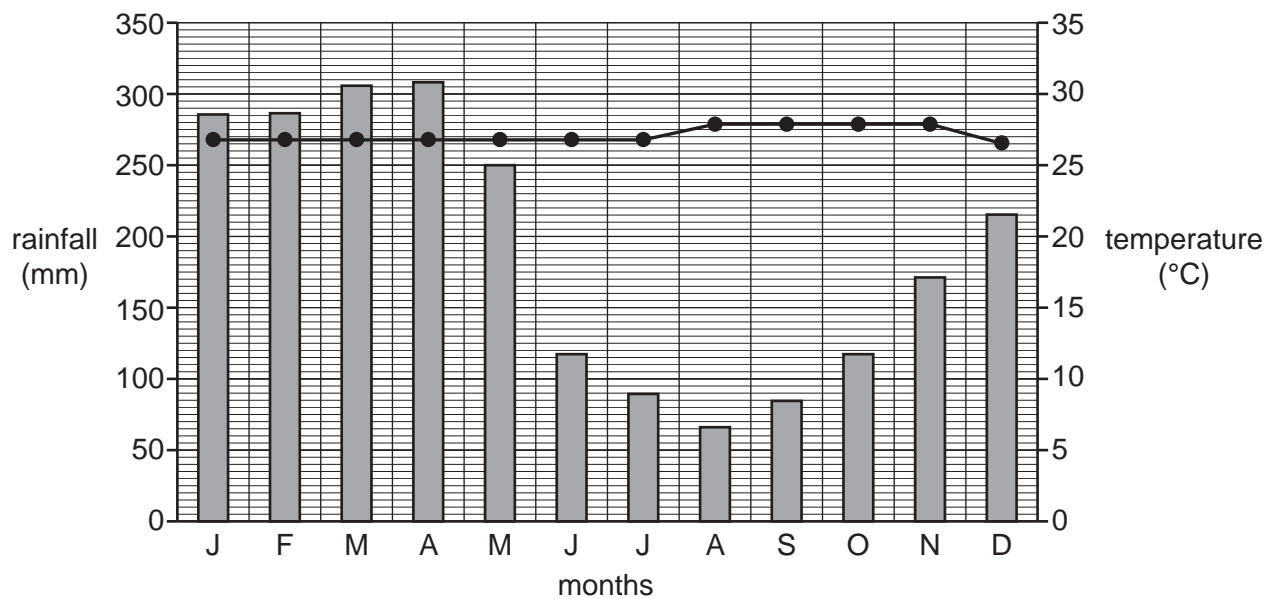


Fig. 5.2

For the climate shown in Fig. 5.2 state the:

(i) rainfall in May

..... mm [1]

(ii) temperature in March

..... °C [1]

(c) Using Fig. 5.2 **only**, describe the main features of an equatorial climate.

.....

.....

.....

.....

.....

.....

..... [3]

[Total: 8]

- 6 Study Fig. 6.1, which shows a map of tourist attractions on the island of Jamaica.

Content removed due to copyright restrictions.

Fig. 6.1

- (a) (i) Which part of Jamaica has the most tourist attractions? Circle your answer.

north      north-west      south      south-west      [1]

- (ii) Identify **two** physical (natural) attractions shown in Fig. 6.1.

1 .....

2 ..... [2]

- (b) Suggest **two** benefits of tourism for local residents.

1 .....

2 ..... [2]

(c) Suggest ways in which the Jamaican government can encourage sustainable development of tourism on the island.

.....

.....

.....

.....

.....

.....

..... [3]

[Total: 8]

**Additional pages**

If you use the following pages to complete the answer to any question, the question number must be clearly shown.

A series of horizontal dotted lines for writing answers.









## BLANK PAGE

---

The boundaries and names shown, the designations used and the presentation of material on any maps contained in this question paper/insert do not imply official endorsement or acceptance by Cambridge Assessment International Education concerning the legal status of any country, territory, or area or any of its authorities, or of the delimitation of its frontiers or boundaries.

Permission to reproduce items where third-party owned material protected by copyright is included has been sought and bearing where possible. Every reasonable effort has been made by the publisher (UCLES) to trace copyright holders, but if any items requiring clearance have unwittingly been included, the publisher will be pleased to make amends at the earliest possible opportunity.

To avoid the issue of disclosure of answer-related information to candidates, all copyright acknowledgements are reproduced online in the Cambridge Assessment International Education Copyright Acknowledgements Booklet. This is produced for each series of examinations and is freely available to download at [www.cambridgeinternational.org](http://www.cambridgeinternational.org) after the live examination series.

Cambridge Assessment International Education is part of Cambridge Assessment. Cambridge Assessment is the brand name of the University of Cambridge Local Examinations Syndicate (UCLES), which is a department of the University of Cambridge.