

Please write clearly in block capitals.

Centre number

--	--	--	--	--

Candidate number

--	--	--	--

Surname

Forename(s)

Candidate signature

GCSE GEOGRAPHY

Paper 3 Geographical Applications

Thursday 13 June 2019

Morning

Time allowed: 1 hour 15 minutes

Materials

For this paper you must have:

- the Pre-release resources booklet (enclosed)
- a pencil
- a rubber
- a ruler.

You may use a calculator.

Instructions

- Use black ink or black ball-point pen.
- Fill in the boxes at the top of this page.
- Answer **all** questions.
- You must answer the questions in the spaces provided. Do not write outside the box around each page or on blank pages.
- Do all rough work in this book. Cross through any work you do not want to be marked.

Information

- The marks for questions are shown in brackets.
- The total number of marks available for this paper is 76.
- Spelling, punctuation, grammar and specialist terminology will be assessed in Questions **03.2** and **05.4**.


For Examiner's Use	
Question	Mark
1	
2	
3	
4	
5	
TOTAL	




For the multiple-choice questions, shade the circle next to the correct answer.

CORRECT METHOD

WRONG METHODS

If you want to change your answer you must cross out your original answer as shown. 

If you wish to return to an answer previously crossed out, ring the answer you now wish to select as shown. 

Section A Issue evaluation

Answer **all** questions in this section.

Study **Figure 1** in the resources booklet, 'Tropical rainforests'.

0 1 . 1 Calculate the temperature range for Manaus.

[1 mark]

0 1 . 2 Explain why there are 'no real seasonal temperature differences' in areas of tropical rainforest.

[2 marks]

0 1 . 3 Suggest **one** reason why so many medicinal drugs are derived from tropical rainforests.

[1 mark]



Study **Figure 2** in the resources booklet, 'Deforestation of tropical rainforests'.

0 2 . 1 Compare the pattern of forest loss between the Brazilian Amazon and the non-Brazilian Amazon.

[3 marks]

0 2 . 2 Complete the following diagram to show how the removal of trees can affect the rainforest environment.

Write the correct statement in each box.

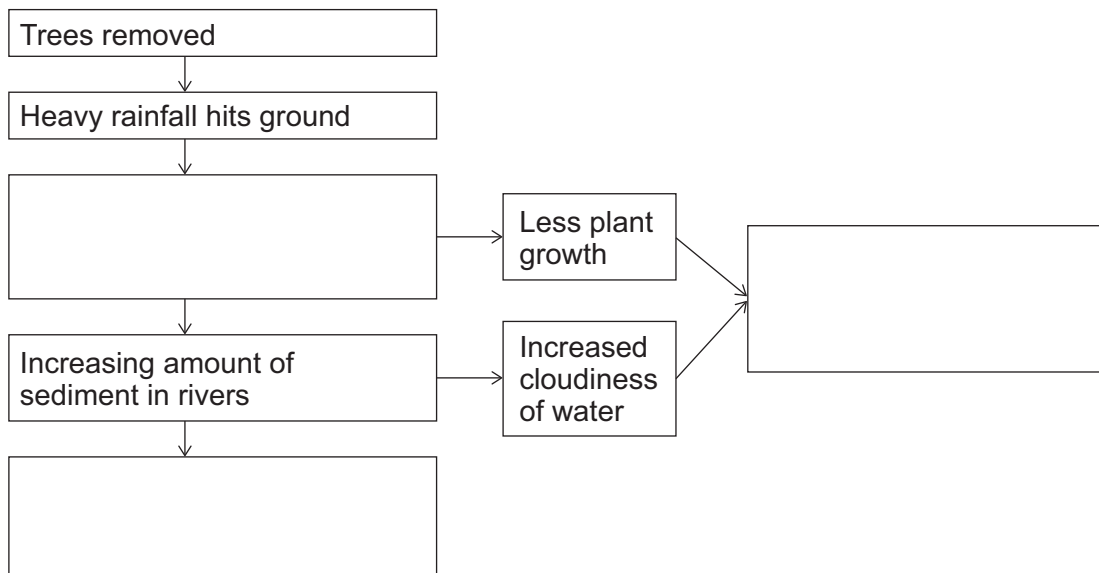
Choose from the statements below.

[2 marks]

Increasing flood risk

Less animal life

Soil is eroded



Study **Figure 3** in the resources booklet, 'Road development in the Peruvian Amazon'.

0 3 . 1

What does the information in the 'Peru: development fact file' suggest about levels of development in Peru?

[4 marks]

Extra space _____



Section B FieldworkAnswer **all** questions in this section.

Study **Figure 4**, a table showing information collected by students about housing development in four areas on the edge of a town.

Figure 4

Area	Original area of countryside (hectares)	Area lost to housing developments (hectares)	Remaining countryside (hectares)	% loss of countryside
A	240	24	216	10
B	320	160	160	
C	260	39	221	15
D	420	84		20

0 4 . 1 Complete the table (**Figure 4**) by filling in the data for Area **B** and Area **D**.

[2 marks]

Question 4 continues on the next page

Turn over ►



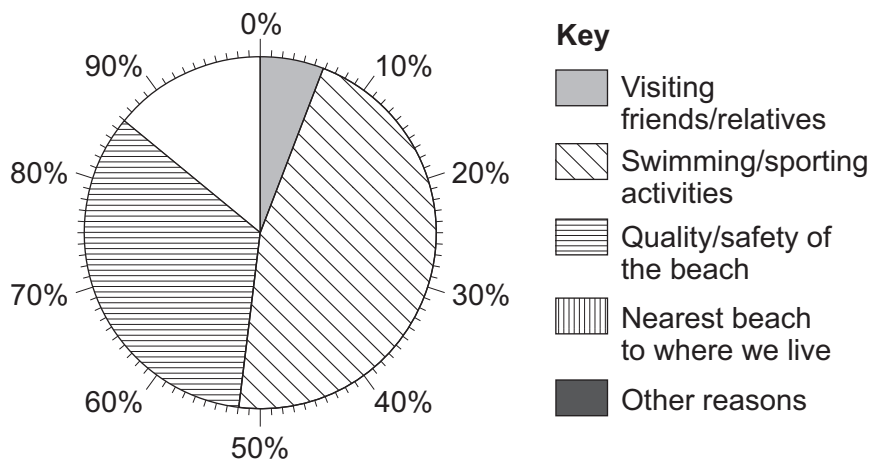
Study **Figure 5**, showing information from a survey of 100 people in a coastal area.

Figure 5

What is your main reason for visiting this coastal area?	Responses
Visiting friends/relatives	6
Swimming/sporting activities	46
Quality/safety of the beach	34
Nearest beach to where we live	8
Other reasons	6

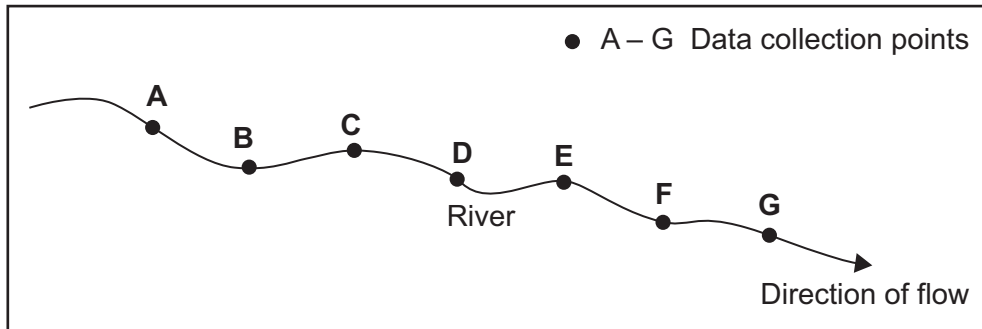
0 4 . 2 Complete the pie chart below to show the information for **Figure 5**.

[1 mark]



Study **Figure 6**, part of a student's planning sheet in a fieldwork enquiry.

Figure 6



0 4 . 3 Name the type of sampling method used in **Figure 6**.

Shade **one** circle only.

[1 mark]

A Opportunity sampling, selecting points which are easiest to access

B Random sampling, based on chance

C Stratified sampling, where more points are chosen from one area

D Systematic sampling where points are chosen at regular intervals

0 4 . 4 Suggest why the type of sampling shown in **Figure 6** is not always possible in a fieldwork enquiry.

[2 marks]

Question 4 continues on the next page

Turn over ►



Study **Figures 7a** and **7b**, part of a contour map and a cross section used in a river enquiry.

Figure 7a

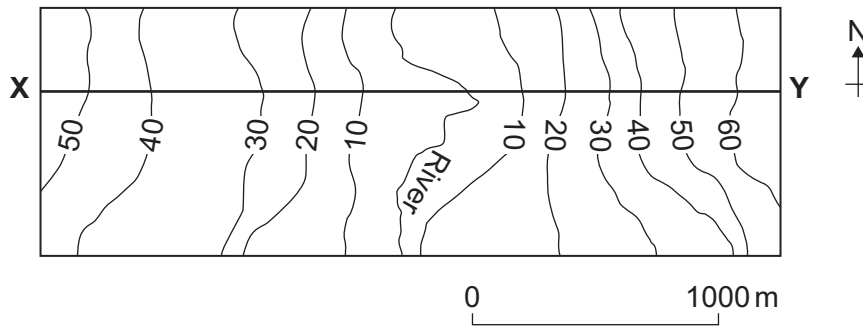
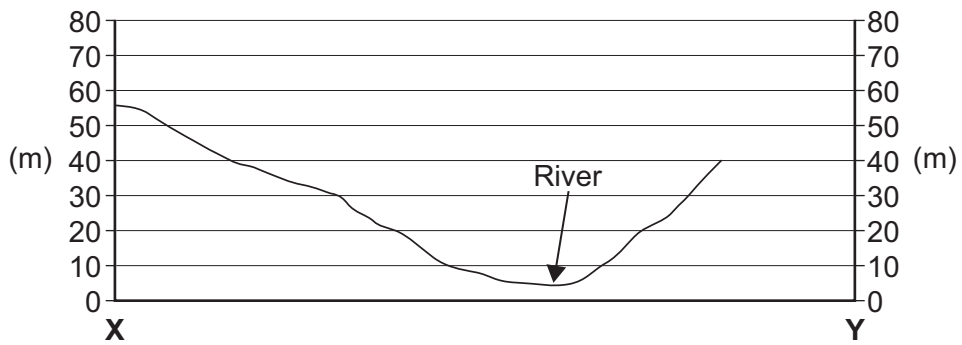


Figure 7b



0 4 . 5

Complete the cross-section from **X–Y** on **Figure 7b**.

[1 mark]

0 4 . 6

Describe the slope of the land from point **X** to the river.

[1 mark]



Study **Figure 8**, information about a questionnaire survey.

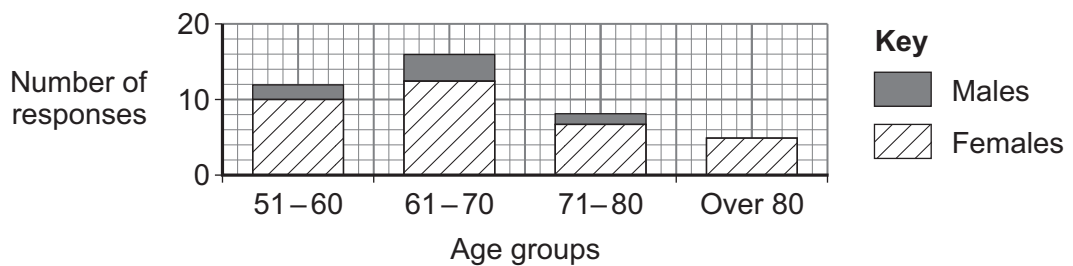
Figure 8

A group of students used a questionnaire to assess whether local facilities for the older population were good enough.

In this area 48% of the population are over 50 years old. Females account for 56% of this age group.

The students completed the questionnaire in the town centre on a Saturday morning.

The following diagram shows the age groups of people who were asked to complete the questionnaire.



0 4 . 7

Suggest **two** ways that students might adapt their method in order to obtain more appropriate data.

[2 marks]

1 _____

 2 _____

0 4 . 8

Suggest **two** additional data collection techniques that the students could use to find out if local facilities are good enough for the older population.

[2 marks]

1 _____

 2 _____

Question 4 continues on the next page

Turn over ►



Study **Figure 9**, a housing quality survey from twelve different areas of a town.

Figure 9

Area	Housing quality
1	4
2	6
3	6
4	2
5	9
6	3
7	10
8	1
9	5
10	8
11	10
12	1

Scale

1 —————> 10

Very poor Very good

0 4 . 9

Assess the usefulness of measures of central tendency, such as median, mean and mode, in analysing the housing quality data collected by the students.

[4 marks]

Extra space _____



Write the title of your **physical** geography fieldwork enquiry.

Title of physical fieldwork enquiry _____

0 5 . 1

Suggest why **one** set of data you collected in your physical fieldwork enquiry may not have been accurate.

[2 marks]

0 5 . 2

Identify **one** potential risk in your physical geography fieldwork and explain how the risk was reduced.

[3 marks]

Risk _____

How the risk was reduced _____

Question 5 continues on the next page

Turn over ►



Write the title of your **human** geography fieldwork enquiry.

Title of human fieldwork enquiry _____

0 5 . 3

Assess the suitability of the location chosen for your human geography enquiry.

[6 marks]

Extra space _____



There are no questions printed on this page

*Do not write
outside the
box*

**DO NOT WRITE ON THIS PAGE
ANSWER IN THE SPACES PROVIDED**



There are no questions printed on this page

*Do not write
outside the
box*

**DO NOT WRITE ON THIS PAGE
ANSWER IN THE SPACES PROVIDED**

Copyright information

For confidentiality purposes, from the November 2015 examination series, acknowledgements of third-party copyright material are published in a separate booklet rather than including them on the examination paper or support materials. This booklet is published after each examination series and is available for free download from www.aqa.org.uk after the live examination series.

Permission to reproduce all copyright material has been applied for. In some cases, efforts to contact copyright-holders may have been unsuccessful and AQA will be happy to rectify any omissions of acknowledgements. If you have any queries please contact the Copyright Team, AQA, Stag Hill House, Guildford, GU2 7XJ.

Copyright © 2019 AQA and its licensors. All rights reserved.



20



196G8035/3

G/Jun19/8035/3