



Oxford Cambridge and RSA

# A Level Geography

**H481/02** Human interactions

Resource Booklet

**Friday 8 June 2018 – Afternoon**

**Time allowed: 1 hour 30 minutes**



## INFORMATION FOR CANDIDATES

- The questions tell you which resources you need to use.
- This document consists of **8** pages.

## CONTENTS OF RESOURCE BOOKLET

- Fig. 1 – Computer-generated design for an urban development.
- Fig. 2 – OS 1:25 000 map extracts of an area in the rural-urban fringe of Ipswich for 1955 and 2015.
- Fig. 3 – Share of intra-regional imports of merchandise within the EU for selected EU countries, 2014.
- Fig. 4 – Number of intra-regional immigrants within the EU for selected EU countries, 2014.

## INSTRUCTIONS TO EXAMS OFFICER/INVIGILATOR

- Do not send this Resource Booklet for marking, it should be retained in the centre or recycled. Please contact OCR Copyright should you wish to re-use this document.

Fig. 1 – Computer-generated design for an urban development

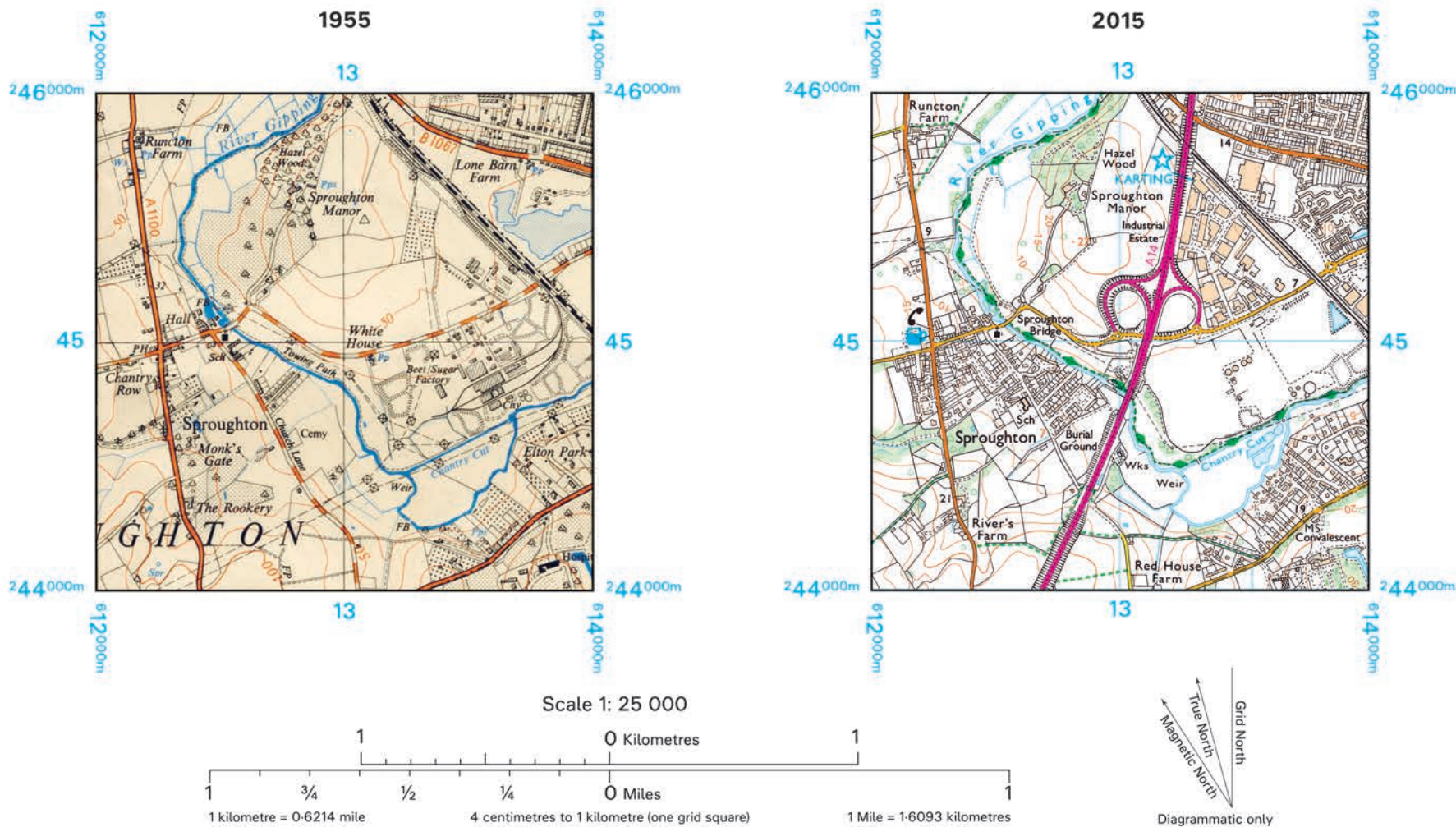


Fig. 2 – OS 1:25 000 map extracts of an area in the rural-urban fringe of Ipswich for 1955 and 2015



Four colours should appear above; if not then please return to the invigilator.  
Four colours should appear above; if not then please return to the invigilator.

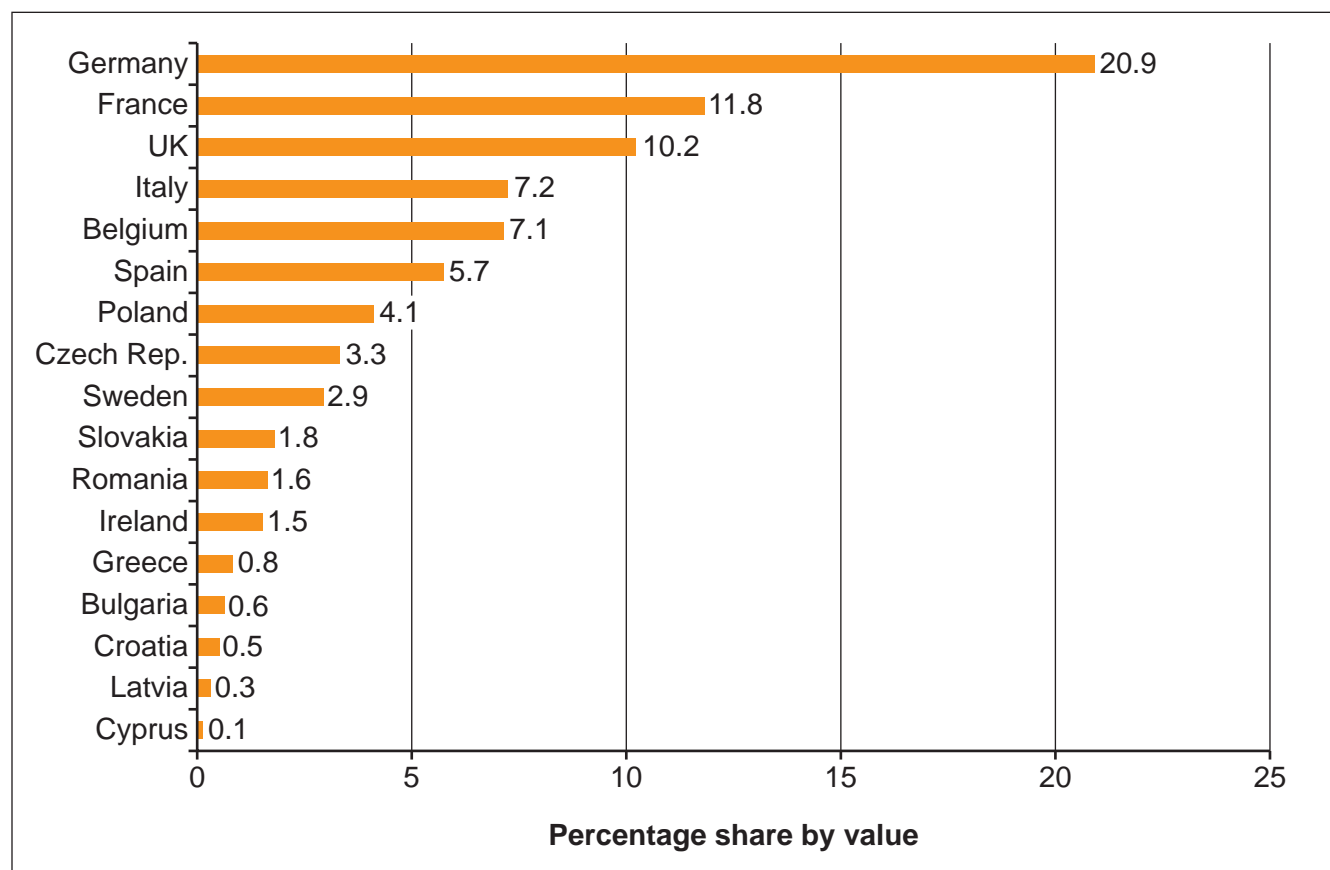
Extract No 2269/EXP197  
1:25 000 Scale



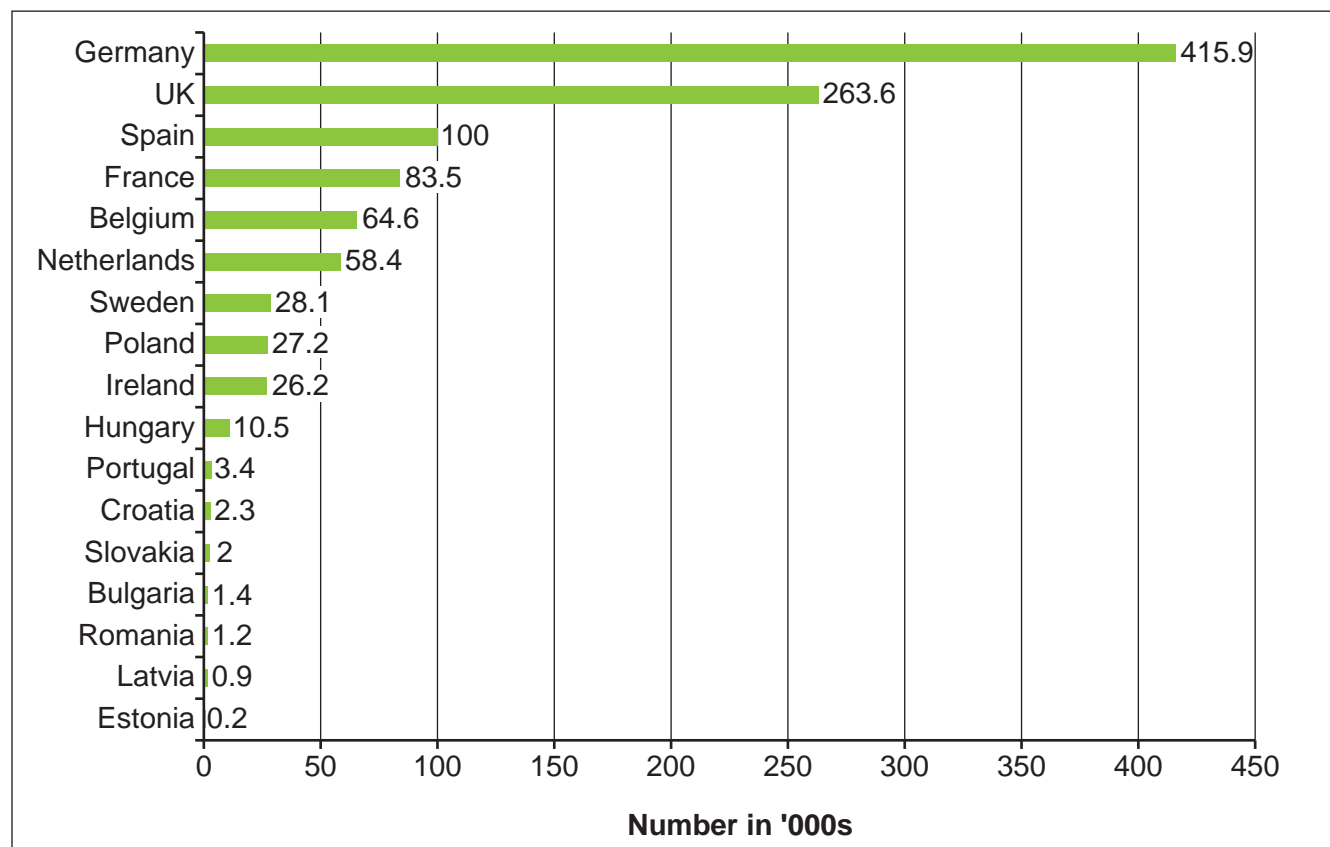
Extract produced by Ordnance Survey 2017.  
© Explorer Extract Crown copyright 2015. All rights reserved.

Ordnance Survey, OS, Explorer and OS logos are registered trademarks of OS, Britain's mapping agency.  
Reproduction in whole or in part by any means is prohibited without the prior written permission of Ordnance Survey. **For educational use only.**

**Fig. 3 – Share of intra-regional imports of merchandise within the EU, for selected EU countries, 2014**



**Fig. 4 – Number of intra-regional immigrants within the EU, for selected EU countries, 2014**



**BLANK PAGE**

**BLANK PAGE**

**BLANK PAGE**

**Copyright Information**

OCR is committed to seeking permission to reproduce all third-party content that it uses in its assessment materials. OCR has attempted to identify and contact all copyright holders whose work is used in this paper. To avoid the issue of disclosure of answer-related information to candidates, all copyright acknowledgements are reproduced in the OCR Copyright Acknowledgements Booklet. This is produced for each series of examinations and is freely available to download from our public website ([www.ocr.org.uk](http://www.ocr.org.uk)) after the live examination series.

If OCR has unwittingly failed to correctly acknowledge or clear any third-party content in this assessment material, OCR will be happy to correct its mistake at the earliest possible opportunity.

For queries or further information please contact the Copyright Team, First Floor, 9 Hills Road, Cambridge CB2 1GE.

OCR is part of the Cambridge Assessment Group; Cambridge Assessment is the brand name of University of Cambridge Local Examinations Syndicate (UCLES), which is itself a department of the University of Cambridge.